

**O'ZBEKISTON RESPUBLIKASI**  
**OLIV VA O'RTA MAXSUS TA'LIM VAZIRLIGI**

**D.YUNUSOVA, A.YUNUSOV**

**ALGEBRA VA SONLAR NAZARIYASI**

**MODUL TEXNOLOGIYASI ASOSIDA TAYYORLANGAN**  
**MISOL VA MASHQLAR TO'PLAMI**

**5140100**-matematika va informatika

**5140100**-matematika

**5142100**-informatika

**TOSHKENT – 2007**

## O'QUV ADABIYOTLARI GRIFI

### GUVOHNOMASI № 1014

O'zbekiston Respublikasi Oliy va o'rta maxsus ta'lim vazirligining 2007 yil "1" iyun dagi 125 -buyrug'iga asosan

D. Yunusova,

(muallifning familiyasi ismi-sharifi)

A. Yunusov

ning

5140100 - Matematika va informatika

bakalavriat to'lim yonalishi

(ta'lim yo'nalishi, mutaxassiligi, ixtisosligi)

talabalari (o'quvchilari) uchun tavsiya etilgan

"Algebra va sonlar nazariyasi"

(o'quv adabiyotining nomi va turi; darslik, o'quv qo'llanmasi)

misol va mashqlar to'plami

ga

O'zbekiston Respublikasi Vazirlar Mahkamasi tomonidan litsenziya berilgan nashriyotlarda nashr qilish uchun ruxsat berildi.

Vazir



R. Gosimov

#### ANNOTASIYA

O'quv qo'llanma «Algebra va sonlar nazariyasi» fani davlat ta'lim standarti hamda dasturiga to'la mos keladi. Tavsiya etilayotgan nazariy savollar va amaliy topshiriqlar modullarda jamlangan bo'lib, ularda keltirilgan metodik tavsiyalar ushbu o'quv qo'llanmadan foydalanuvchilarga keng imkoniyatlar yaratadi.

Keltirilgan misol va mashqlar nazariy bilimlarni chuqurlashtirish, tadbiqini kengaytirishga qaratilgan bo'lib, talabalarni mustaqil, ijodiy izlanishga yo'naltiradi.

Umumiy o'rta, o'rta maxsus matematika t'limiga ushbu fanning keng tatbiqlarini e'tiborga olsak, o'quv qo'llanmadan akademik litsey, kasb-hunar kollejlari o'qituvchilari, o'quvchilari; o'qituvchilar malakasini oshirish va qayta tayyorlash kurslari tinglovchilari foydalanishlari mumkin.

#### АННОТАЦИЯ

Данное учебное пособие соответствует учебной программе дисциплины «Алгебра и теория чисел» педагогических высших учебных заведений.

Примеры и задачи собраны в модулях, что создает некоторые удобства пользователям. Собранные в учебнике задачи углубляют и расширяют теоретические знания студентов.

Учитывая широкое применение курса «Алгебра и теория чисел» в математике школ и лицеев, данное учебное пособие рекомендуем преподавателям школ, лицеев, слушателям курсов повышения квалификации и переподготовки педагогических кадров.

#### THE SUMMARY

The given manual meets to the curriculum of discipline « Algebra and the theory of numbers » pedagogical higher educational institutions. Examples and tasks are collected in modules that creates some convenience to users. The problems{tasks} collected in the textbook deepen and expand knowledge of students.

Taking into account wide application of a rate « Algebra and the theory of numbers » in mathematics of schools and the licea, the given manual we recommend teachers of schools, licea, students of courses of improvement of qualification and retrainings of the pedagogical staff.

**Taqrizchilar** : t.f.d., professor N.Sherboyev

f.-m.f.n., dotsent A.Dusumbetov

## I MODUL. MATEMATIK MANTIQ ELEMENTLARI

### 1-§. Mulohaza. Mulohazalar ustida mantiq amallari

**Asosiy tushunchalar:** mulohaza, rost mulohaza, yolg'on mulohaza, kon'yunksiya, diz'yunksiya, implikasiya, ekvivalensiya, inkor, rostlik jadvali.

Mulohaza matematik mantiqning asosiy tushunchalaridan bo'lib, u rost yoki yolg'onligi bir qiymatli aniqlanadigan darak gapdir. Masalan, «Kvadrat to'g'ri to'rtburchakdir», « $2 > 5$ » kabi tasdiqlar mulohazalar bo'lib, birinchi mulohaza rost, ikkinchi mulohaza esa yolg'on mulohazadir.

Berilgan A mulohaza rost bo'lganda yolg'on, A mulohaza yolg'on bo'lganda rost bo'ladigan mulohaza A mulohazaning inkori deyiladi va  $\neg A$  yoki  $\bar{A}$  orqali belgilanadi.

A va B mulohazalar rost bo'lgandagina rost bo'lib, qolgan hollarda yolg'on bo'ladigan mulohaza A va B mulohazalarning kon'yunksiyasi deyiladi va  $A \wedge B$  yoki A & B ko'rinishda belgilanadi

A va B mulohazalar diz'yunksiyasi deb, A va B mulohazalarning ikkalasi ham yolg'on bo'lgandagina yolg'on, qolgan hollarda rost bo'ladigan  $A \vee B$  mulohazaga aytiladi.

A va B mulohazalar implikasiyasi deb, A mulohaza rost va B mulohaza yolg'on bo'lgandagina yolg'on, qolgan hollarda rost bo'ladigan  $A \Rightarrow B$  mulohazaga aytiladi.

A va B mulohazalar ekvivalensiyasi deb, A va B mulohazalarning ikkalasi ham yolg'on yoki rost bo'lganda rost, qolgan hollarda yolg'on bo'ladigan  $A \Leftrightarrow B$  mulohazaga aytiladi

Yuqorida ta'riflangan amallar rostlik jadvali quyidagi ko'rinishda bo'ladi:



A	B	$\neg A$	$A \wedge B$	$A \vee B$	$A \Rightarrow B$	$A \Leftrightarrow B$
1	1	0	1	1	1	1
1	0	0	0	1	0	0
0	1	1	0	1	1	0
0	0	1	0	0	1	1

**Misol.**  $\forall x, y, z \in Z \ (x \wedge y) \Rightarrow x \wedge z$  mulohazaning rost yoki yolg'onligini aniqlang.

**Yechish.** Berilgan mulohaza kon'yunksiya hamda implikasiya amallari yordamida hosil qilingan. Bu mantiq amallarining ta'riflariga ko'ra qaralayotgan  $x \wedge y \Rightarrow x \wedge z$  mulohaza  $x \wedge y \Rightarrow z$  rost va  $x \wedge z$  yolg'on bo'lganda yolg'on, boshqa hollarda rost. Har bir mulohazaning rostlik qiymatini aniqlaymiz.

$x \wedge y$  predikat butun sonlar to'plamida olingan har qanday  $(x, y)$  juftlikda rost mulohaza bo'lmaydi. Masalan,  $x = 1, y = 2$ .

$y \wedge z$  predikat butun sonlar to'plamida olingan har qanday  $(y, z)$  juftlikda rost mulohaza bo'lmaydi. Masalan,  $y = 2, z = 3$ .

$x \wedge z$  predikat butun sonlar to'plamida olingan har qanday  $(x, z)$  juftlikda rost mulohaza bo'lmaydi. Masalan,  $x = 1, z = 3$ .

Quyidagi holatlarni qarab chiqamiz:

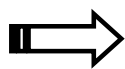
1)  $\forall x, y, z \in N \ (x \wedge y) \Rightarrow x \wedge z$  mulohazadagi  $\forall x, y, z \in N \ (x \wedge y) \Rightarrow z$  mulohaza yolg'on. U holda kon'yunksiya va implikasiya amallari ta'rifiga ko'ra  $\forall x, y, z \in N \ (x \wedge y) \Rightarrow x \wedge z$  mulohaza rost.

2)  $\forall x, y, z \in N \ (x \wedge y) \Rightarrow x \wedge z$  mulohazadagi  $\forall x, y, z \in N \ (y \wedge z) \Rightarrow z$  mulohaza yolg'on. U holda kon'yunksiya va implikasiya amallari ta'rifiga ko'ra  $\forall x, y, z \in N \ (x \wedge y) \Rightarrow x \wedge z$  mulohaza rost.

3)  $\forall x, y, z \in N \ (x \wedge y) \Rightarrow x \wedge z$  mulohazadagi  $\forall x, y, z \in N \ (x \wedge z) \Rightarrow z$ ,  $\forall x, y, z \in N \ (y \wedge z) \Rightarrow z$  yolg'on. U holda kon'yunksiya va implikasiya amallari ta'rifiga ko'ra  $\forall x, y, z \in N \ (x \wedge y) \Rightarrow x \wedge z$  mulohaza rost.

4)  $\forall x, y, z \in N : (x \wedge y : z)$  rost bo'lsa  $\forall x, y, z \in N : (x : y)$  va  $\forall x, y, z \in N : (y : z)$  lar bir vaqtda rost.  $x : y$  va  $y : z$  bo'lsa, u holda shunday  $k, 1 \in N$  sonlar topiladiki,  $x = y \cdot k$  va  $y = z \cdot 1$ . Bunday  $x = y \cdot k = (z \cdot 1) \cdot k = z \cdot (k \cdot 1)$ . Demak  $x : z$  implikasiya ta'rifiga ko'ra, bu holda ham berilgan  $\forall x, y, z \in N : (x \wedge y : z \Rightarrow x : z)$  mulohaza rost.

Demak, berilgan mulohaza rost mulohaza.



## Misol va mashqlar

1. Quyidagi gaplarning qaysilari mulohaza bo'ladi?
  - 1.1. ABCD to'rtburchakning yuzi A'B'C'D' to'rtburchak yuziga teng.
  - 1.2. Tomonlari teng parallelogramm rombdir.
  - 1.3. Berilgan uchburchaklar o'xshash.
  - 1.4. Har qanday tub son toq.
  - 1.5.  $\sqrt{3}$  - irrasional son.
  - 1.6. Yashasin O'zbekiston yoshlari!
  - 1.7. 2 ga qarama-qarshi son mavjud emas.
  - 1.8. 5ning butun bo'luvchilari 4 ta.
  - 1.9. -1 kompleks son.
  - 1.10. 6 3ga karrali son.
  - 1.11. Oyda hayot mavjud.
  - 1.12. Ertaga qor yog'adi.
  - 1.13. Guruhdagi talabalar soni 20 nafar.
  - 1.14. Sirdaryo Orol dengiziga quyiladi.
  - 1.15. Siz qaysi oliygohda o'qiyasiz?
  - 1.16. O'zbekiston Mustaqilligining 15 yilligi muborak bo'lsin!
  - 1.17. Har qanday son musbat.
  - 1.18. 0 har qanday haqiqiy songa bo'linadi.
  - 1.19. 2, 3, 5 sonlari tub sonlar.
  - 1.20. Barcha insonlar yoshi 20 da.

- 1.21. Galaktikamizda shunday sayyora bor-ki, unda hayot mavjud.
- 1.22. 5 soni 25 va 70 sonlarining eng katta umumiy bo'luvchisi.
- 1.23.  $3x^3 - 5y + 9$ .
2. Mulhazaning rost yoki yolg'onligini aniqlang:
- 2.1.  $2 \in \{ x \mid 2x^3 - 3x^2 + 1 = 0, x \in \mathbb{R} \}$ .
- 2.2. 1966 yil Toshkentda er qimirlagan.
- 2.3. 8-mart dam olish kuni.
- 2.4.  $3 \in \{ n \mid \frac{2n+1}{3n-2}, n \in \mathbb{N} \}$ .
- 2.5.  $\{1; 1,2\} \subset \{ x \mid x^3 + x^2 - x - 1 = 0, x \in \mathbb{Z} \}$ .
- 2.6.  $2 \leq 3$ .
- 2.7. 10 ning natural bo'luvchilari 2 ta.
- 2.8.  $2 \cdot 2 \leq 4$ .
- 2.9.  $[4,12,24]=24$ .
- 2.10. Gipotenuza to'g'ri burchakli uchburchakning eng uzun tomoni.
3. Quyidagi mulohazalarning inkorini ifodalang:
- 3.1. 15 soni 5songa bo'linadi.
- 3.2. Oy Erning yo'ldoshi.
- 3.3.  $2 > 3$ .
- 3.4.  $5 + 3 < 10$ .
- 3.5.  $i$ -mavhum son.
- 3.6. ABCD to'rtburchak – romb.
- 3.7.  $n$  – juft natural son.
- 3.8. Shunday haqiqiy son mavjudki, u juft son.
- 3.9. Barcha natural sonlar musbat.
- 3.10. Barcha natural sonlar birdan katta.
4. Biri ikkinchisining inkori bo'lgan mulohazalar juftligini aniqlang:
- 4.1.  $2 < 3$ ;  $3 < 2$ .
- 4.2.  $5 \leq 4$ ;  $5 > 4$ .
- 4.3. «4-murakkab son», «4-tub son».

4.4. «Shunday natural son mavjudki, u tub son», «Barcha natural sonlar murakkab».

4.5. «6 ning barcha natural bo'luvchilari tub sonlar», «6ning kamida bitta natural bo'luvchisi murakkab son».

4.6. «ABC to'g'ri burchakli uchburchak», «ABC o'tmas burchakli uchburchak».

4.7. «f- funksiya – toq», «f – funksiya – juft».

4.8. «Barcha tub sonlar toq», «Shunday tub son mavjud-ki, u juft».

4.9. «Irratsional sonlar mavjud», «Barcha sonlar rasional».

5. Quyidagi mulohazalarning rostlik shartlarini mulohazalar diz'yunksiyasi yoki kon'yunksiyasi orqali ifodalang:

5.1.  $x \cdot y \neq 0$ .

5.2.  $x \cdot y = 0$ .

5.3.  $x^2 + y^2 = 0$ .

5.4.  $\frac{x}{y} = 0$ .

5.5.  $|x| < 6$ .

5.6.  $|x| = 4$ .

6. Quyidagi mulohazalarning rostlik qiymatlarini aniqlang:

6.1. Har qanday natural son yo tub, yo murakkab.

6.2. Shunday natural son mavjudki u ham tub, ham juft son.

6.3. 2 ga teng bo'lmagan son yoki 2dan katta yoki 2dan kichik bo'ladi.

6.4. Agar uchburchak teng tomonli bo'lsa, u teng yonli bo'ladi.

6.5. Agar to'rtburchak romb bo'lsa, u kvadrat bo'ladi.

6.6. Agar  $15:5$ , u holda  $15:4$ .

6.7. Agar  $x^2 = 4$  bo'lsa, u holda  $x = 2$  va  $x = -2$ .

6.8. Natural son 6 ga bo'linadi faqat va faqat shu holdaki, agar u 2 ga va 3ga bo'linsa.

6.9. Ikkita uchburchak teng bo'ladi faqat va faqat shu holdaki, agar ularning

mos tomonlari teng bo'lsa yoki ularning mos burchaklari teng bo'lsa.

6.10. Berilgan butun sonning butun bo'luvchilari kamida to'rtta bo'lsa, u murakkab son bo'ladi.

7. A orqali «10 soni 5 soniga bo'linadi», B orqali «10 soni 3 soniga bo'linadi» mulohazalar belgilangan bo'lsa, u holda quyidagi mulohazalarni o'qing va ularning rostlik qiymatlarini aniqlang:

7.1.  $A \wedge B$ .

7.2.  $A \vee B$ .

7.3.  $\neg A \wedge B$ .

7.4.  $A \wedge \neg B$ .

7.5.  $\neg A \wedge \neg B$ .

7.6.  $A \Rightarrow B$ .

7.7.  $B \Rightarrow A$ .

7.8.  $\neg A \Rightarrow B$ .

7.9.  $\neg B \Rightarrow A$ .

7.10.  $A \Leftrightarrow B$ .

7.11.  $\neg A \Leftrightarrow \neg B$ .

7.12.  $\neg B \Leftrightarrow \neg A$ .

8. Quyidagi mulohazalarni sodda mulohazalarga ajrating. Sodda mulohazalarni harflar yordamida belgilab, berilgan mulohazalarni ular yordamida ifodalang:

8.1. Agar berilgan funksiya juft ham toq ham emas bo'lsa, u holda u yoki juft funksiya yoki toq funksiya bo'ladi.

8.2. Agar berilgan son 3 ga bo'linsa va 5 ga bo'linmasa, u holda bu son 15 ga bo'linmaydi.

8.3. Ketma-ket kelgan uchta natural sonlarning kamida bittasi toq son bo'ladi.

8.4. Har qanday natural sonni 3 ga bo'lganda yoki 0 yoki 1 yoki 2 qoldiq qoladi.

9. Bir vaqtda  $A \wedge B$ -rost,  $A \wedge C$ -yolg'on,  $(A \wedge B) \wedge \neg C$  – yolg'on bo'luvchi  $A, B, C$  mulohazalar mavjudmi?

10. Berilgan shartlar asosida quyidagi mulohazalarning rostlik qiymatini aniqlash mumkin-mi? Agar mumkin bo'lsa, mulohazaning rostlik qiymatini aniqlang.

10.1.  $(A \Rightarrow B) \Rightarrow C$ , C-rost mulohaza.

10.2.  $A \wedge (B \Rightarrow C)$ ,  $B \Rightarrow C$  - yolg'on mulohaza.

10.3.  $A \vee (B \Rightarrow C)$ , B-yolg'on mulohaza.

10.4.  $\neg(A \vee B) \Leftrightarrow (\neg A \wedge \neg B)$ , A-rost mulohaza.

10.5.  $(A \Rightarrow B) \Rightarrow (\neg B \Rightarrow \neg A)$ , B-rost mulohaza.

10.6.  $(A \wedge B) \Rightarrow (A \vee C)$ , A-yolg'on mulohaza.



### Takrorlash uchun savollar

1. Mulohaza deb qanday gapga aytiladi? Har qanday o'tgan zamon darak gapi mulohaza bo'la oladimi? Kelasi zamon darak gaplari-chi?

2. Mulohazalar kon'yunksiyasi nima? Qanday o'qiladi? Rost kon'yunksiyaga, yolg'on kon'yunksiyaga misollar keltiring.

3. Mulohazalar diz'yunksiyasi nima? Qanday o'qiladi? Rost diz'yunksiyaga, yolg'on diz'yunksiyaga misollar keltiring.

4. Mulohazalar implikasiyasi nima? Qanday o'qiladi? Rost implikasiya, yolg'on implikasiyaga misollar keltiring.

5. Mulohazalar ekvivalensiyasi nima? Qanday o'qiladi? Rost ekvivalensiyaga, yolg'on ekvivalensiyaga misollar keltiring.

6. Mulohaza inkori nima? Qanday o'qiladi? Rost inkorga, yolg'on inkorgaga misollar keltiring.

7. Mantiqiy amallarning bajarilish tartibini ayting.

8. Rostlik jadvali nima?



## 2-§. Formula. Teng kuchli formulalar. Mantiq qonunlari

**Asosiy tushunchalar:** mulohazaviy formula, rostlik qiymatlar tizimi, formulaning rostlik jadvali, teng kuchli formulalar, aynan rost formula, tautologiya, mantiq qonuni, aynan yolg'on formula, ziddiyat, bajariluvchi formula.

1) Har qanday mulohaza formuladir.

2) Agar A, B lar formula bo'lsa, u holda

$(\neg A)$ ,  $(A \wedge B)$ ,  $(A \vee B)$ ,  $(A \Rightarrow B)$ ,  $(A \Leftrightarrow B)$  lar ham formuladir.

A formula faqat  $A_1, \dots, A_n$  mulohazalardan hosil qilingan bo'lsin, u holda A formulani  $A(A_1, \dots, A_n)$  ko'rinishida yozib olamiz va  $A_1 \dots A_n$  – mulohazalarni elementar mulohazalar deymiz. Har bir  $A_k$  ( $k = \overline{1, n}$ ) mulohaza 0 yoki 1 qiymatlarni qabul qilishi mumkin.  $A_k$  mulohazaning qabul qiladigan qiymati  $i_k$  bo'lsin, u holda  $(i_1, \dots, i_n)$  - n lik  $A_1, \dots, A_n$  – mulohazalarning qabul qiladigan qiymatlari tizimi deyiladi.

A va B formulalar tarkibiga kirgan barcha mulohazalar  $A_1, \dots, A_n$  lardan iborat bo'lsin. Agar  $A_1, \dots, A_n$  mulohazalarning barcha  $(i_1, \dots, i_n)$  qiymatlari tizimida A va B formulalar bir xil qiymatlar qabul qilsalar, u holda bu formulalar teng kuchli formulalar deyiladi va  $A \equiv B$  ko'rinishida belgilanadi.

Formulada qatnashgan mantiq amallari soni formulaning rangi deyiladi.

1. A formula - A mulohazadan iborat bo'lsa, uning formulaosti faqat uning o'zidan iborat.

2. Agar formulaning ko'rinishi  $A * B$  dan iborat bo'lsa, u holda uning formulaostilari A, B,  $A * B$  lar hamda A va B larning barcha formulaostilaridan iborat bo'ladi. Bu erda  $*$  -  $\wedge, \vee, \Rightarrow, \Leftrightarrow$  amallaridan biri.

Agar formulaning ko'rinishi  $\neg A$  bo'lsa, uning formulaostilari A formula, A formulaning barcha formulaostilari va  $\neg A$  ning o'zidan iborat.

A formula, shu formula tarkibiga kirgan barcha mulohazalarning qabul qilishi mumkin bo'lgan barcha qiymatlari tizimida rost bo'lsa, bu formula aynan rost formula yoki mantiq qonun yoki tovtologiya; mulohazalarning kamida bitta

qiymatlari tizimida rost qiymat qabul qilsa, bajariluvchi formula; barcha qiymatlari tizimida yolg'on qiymat qabul qilsa, aynan yolg'on formula yoki ziddiyat deyiladi.

**Misol.**  $(A \wedge B \Rightarrow A \wedge C)$  formulaning turini aniqlang.

**Yechish.** Berilgan formulada uchta  $A$ ,  $B$ ,  $C$  mulohazalar qatnashganligi sababli, ularning qiymatlar tizimlari  $2^3 = 8$  ta bo'ladi. Formulaning rostlik jadvaliga 8 ta tizimni tartib bilan joylashtiramiz. Mantiq amallarining bajarilish tartibiga ko'ra avval  $A \wedge B$  kon'yunksiyani, keyin  $A \vee C$  diz'yunksiyani va nihoyat hosil qilingan formulalarning implikasiyasini bajaramiz. Ya'ni amallarning ta'riflariga ko'ra mos ustunlarni to'ldiramiz. Natijada quyidagi rostlik jadvali xosil bo'ladi:

A	B	C	$A \wedge B$	$A \vee C$	$A \wedge B \rightarrow A \vee C$
1	1	1	1	1	1
1	1	0	1	1	1
1	0	1	0	1	1
1	0	0	0	1	1
0	1	1	0	1	1
0	1	0	0	0	1
0	0	1	0	1	1
0	0	0	0	0	1

Formulaning rostlik jadvalidagi oxirgi ustun - formulaning rostlik qiymatlar ustuni faqat rost qiymatlardan iborat bo'lganligi uchun berilgan formula aynan rost (tavtologiya, mantiq qonuni) degan xulosaga kelamiz.

**Misol.** Berilgan  $\neg(A \wedge B)$ ,  $\neg A \vee \neg B$  formulalar tengkuchli ekanligini isbotlang.

**Yechish.** Berilgan formulalar teng kuchli ekanligini isbotlash uchun rostlik jadvallari tuzamiz:



A	B	$A \wedge B$	$\neg(A \wedge B)$
1	1	1	0
1	0	0	1
0	1	0	1
0	0	0	1

A	B	$\neg A$	$\neg B$	$\neg A \vee \neg B$
1	1	0	0	0
1	0	0	1	1
0	1	1	0	1
0	0	1	1	1

Formulalarning rostlik jadvalidagi formulalar rostlik qiymatlari ustunlari mos tizimlarda bir hil ekanligidan berilgan formulalarning teng kuchli ekanligi kelib chiqadi.

Formulalarning teng kuchli ekanligini isbotlash uchun bitta rostlik jadvalini tuzish ham mumkin:

A	B	$A \wedge B$	$\neg(A \wedge B)$	$\neg A$	$\neg B$	$\neg A \vee \neg B$
1	1	1	0	0	0	0
1	0	0	1	0	1	1
0	1	0	1	1	0	1
0	0	0	1	1	1	1

hosil bo'lgan 4- va 7- ustunlardagi rostlik qiymatlarini solishtirib, berilgan formulalarning teng kuchli ekanligiga ishonch hosil qilamiz.

**Misol.**  $A \Leftrightarrow B \equiv A \wedge B \vee A \wedge B$  tengkuchlilikni asosiy teng kuchliliklar yordamida isbotlang.

**Yechish.** Asosiy teng kuchliliklardan foydalanib quyidagi teng kuchli formulalar ketma – ketligini hosil qilamiz:

$$\begin{aligned} A \Leftrightarrow B &\equiv (A \Rightarrow B) \wedge (B \Rightarrow A) \equiv (\neg A \vee B) \wedge (\neg B \vee A) \equiv \\ &\equiv ((\neg A \vee B) \wedge \neg B) \vee ((\neg A \vee B) \wedge A) \equiv (\neg A \wedge \neg B) \vee \\ &\vee (B \wedge \neg B) \vee (\neg A \wedge A) \vee (B \wedge A) \equiv (\neg A \wedge \neg B) \vee 0 \vee \\ &\vee 0 \vee (B \wedge A) \equiv (\neg A \wedge \neg B) \vee (B \wedge A). \end{aligned}$$



## Misol va mashqlar

1. Quyidagi ifodalarning qaysilari mulohazaviy formula bo'ladi?

1.1.  $A(B \Rightarrow C)$ .

1.2.  $\neg(A \vee (B \wedge C)) \Leftrightarrow \neg D$

1.3.  $A \Rightarrow (B \wedge D \Rightarrow C)$ .

1.4.  $\neg(A \vee (B \wedge C)) \Rightarrow D$ .

1.5.  $\neg A \Leftrightarrow D \vee (B \wedge C) \Rightarrow D \wedge A$ .

1.6.  $\neg A \Leftrightarrow (\neg D \vee (B \wedge C)) \Rightarrow \neg A \wedge \neg A$

2. Quyidagi ifodalarga qavslarni turli hil joylashtirish yordamida mulohazaviy formulalar hosil qiling:

2.1.  $A \wedge B \Rightarrow C$ .

2.2.  $A \Rightarrow B \wedge C \Rightarrow \neg C$ .

2.3.  $\neg A \Leftrightarrow \neg B \vee C \wedge B$ .

2.4.  $\neg A \wedge B \Rightarrow C$ .

Berilgan formulalarning barcha qism formulalarini aniqlang:

3.1.  $\neg A \Leftrightarrow B \wedge \neg C \Rightarrow \neg(A \vee B) \Rightarrow A \Rightarrow \neg C$

3.2.  $\neg(A \vee B) \vee \neg C \wedge \neg(A \vee B) \vee C$

3.3.  $\neg A \Rightarrow \neg B \vee C \wedge B$

3.4.  $\neg A \Leftrightarrow \neg(B \vee C) \wedge B$

3.5.  $((A \Rightarrow B) \wedge (C \Rightarrow A)) \vee (B \wedge (\neg C))$ .

$$3.6. ((\neg(\neg A \leftrightarrow C) \wedge B) \vee ((A \vee C) \leftrightarrow C)).$$

$$3.7. (((A \leftrightarrow C) \Rightarrow B) \vee (\neg A) \wedge (\neg C)).$$

$$3.8. (((B \Rightarrow ((\neg B) \vee A) \wedge C) \leftrightarrow (\neg A)).$$

4. Quyidagi formulalarning turini aniqlang (formulalarning tashqi qavslari tushirib qoldirilgan):

$$4.1. (\neg(X \vee Y) \Rightarrow \neg(X \wedge Y)).$$

$$4.2. (X \Rightarrow Y) \Rightarrow (\neg Y \Rightarrow \neg X).$$

$$4.3. \neg(X \Rightarrow (Y \Rightarrow X) \wedge Z).$$

$$4.4. \neg X \Rightarrow (X \Rightarrow Y) \vee Z.$$

$$4.5. \neg(X \Rightarrow Y) \Rightarrow ((X \wedge Z) \Rightarrow (Y \wedge Z)).$$

$$4.6. (X \wedge Y) \Rightarrow Z \Leftrightarrow X \Rightarrow (Y \Rightarrow Z).$$

$$4.7. (X \wedge Y) \Rightarrow Z \Leftrightarrow (X \wedge \neg Z) \Rightarrow \neg Y.$$

$$4.8. \neg(X \Rightarrow Y) \Leftrightarrow X \wedge \neg Y.$$

$$4.9. (X \Rightarrow Y) \wedge \neg Y \Rightarrow \neg X.$$

$$4.10. (X \Rightarrow Y) \Rightarrow (X \wedge Z \Rightarrow Y \wedge Z).$$

$$4.11. (X \Rightarrow Y) \wedge (Z \Rightarrow T) \Rightarrow (X \wedge Z \Rightarrow Y \wedge T).$$

$$4.12. \neg(X \Leftrightarrow Y) \Leftrightarrow (\neg(X \Rightarrow Y) \vee \neg(Y \Rightarrow X)).$$

$$4.13. (X \wedge Y) \Rightarrow (Z \wedge \neg Z \Rightarrow X \vee Z).$$

$$4.14. (X \Leftrightarrow Y) \Leftrightarrow (X \Rightarrow Y) \wedge (Y \Rightarrow X).$$

5. 4-misolda keltirilgan formulalar ranglarini aniqlang.

6. Quyidagi formulalarning aynan rost ekanligini isbotlang:

$$6.1. (A \Leftrightarrow B) \Leftrightarrow (\neg A \Leftrightarrow \neg B);$$

$$6.2. (A \Rightarrow B) \Rightarrow ((A \Rightarrow (B \Rightarrow C)) \Rightarrow (A \Rightarrow C));$$

$$6.3. (A \Rightarrow B) \Rightarrow ((B \Rightarrow A) \Rightarrow (A \Leftrightarrow B));$$

$$6.4. (A \Rightarrow C) \Rightarrow ((A \vee B) \Rightarrow (C \vee B)).$$

7. Quyidagi formulalarning aynan yolg'on ekanligini isbotlang:

$$7.1. A \wedge (B \wedge (\neg A \vee \neg B));$$

$$7.2. \neg(\neg(A \vee B) \Rightarrow \neg(A \wedge B));$$

$$7.3. \neg(A \Rightarrow (B \Rightarrow A));$$

$$7.4. \neg(A \Rightarrow C) \Rightarrow ((B \Rightarrow C) \Rightarrow (A \vee B \Rightarrow C));$$

$$7.5. \neg(A \Rightarrow B) \Rightarrow ((A \wedge C) \Rightarrow (B \wedge A)).$$

8. Quyidagi formulalarning qaysilari bajariluvchi ekanligini aniqlang:

$$8.1. \neg(A \Rightarrow \neg A);$$

$$8.2. (A \Rightarrow B) \Rightarrow (B \Rightarrow A);$$

$$8.3. (B \Rightarrow (A \wedge C)) \wedge \neg((A \vee C) \Rightarrow B);$$

$$8.4. \neg((A \Leftrightarrow \neg B) \vee C) \wedge B;$$

$$8.5. (A \wedge B) \Rightarrow ((C \vee B) \Rightarrow (B \wedge \neg B)).$$

9. Rostlik jadvali yordamida quyidagi formulalar tautologiya ekanligini

isbotlang:

$$9.1. \neg(A \vee \neg A) \text{ (uchinchisini inkor qilish qonuni).}$$

$$9.2. \neg(A \wedge \neg A) \text{ (ziddiyatni inkor qilish qonuni).}$$

$$9.3. \neg(\neg A) \Leftrightarrow A \text{ (qo'sh inkor qonuni).}$$

$$9.4. A \Rightarrow A \text{ (ayniyat qonuni).}$$

$$9.5. A \wedge A \Leftrightarrow A \text{ (kon'yunksiyaning idempotentlik qonuni).}$$

$$9.6. A \vee A \Leftrightarrow A \text{ (dis'yunksiyaning idempotentlik qonuni).}$$

$$9.7. A \Rightarrow B \Leftrightarrow \neg B \Rightarrow \neg A \text{ (kontrapozisiya qonuni).}$$

$$9.8. A \Rightarrow B \Leftrightarrow \neg A \vee B;$$

$$9.9. A \Leftrightarrow B \Leftrightarrow (A \Rightarrow B) \wedge (B \Rightarrow A);$$

$$9.10. A \wedge (B \vee A) \Leftrightarrow A \text{ (yutilish qonuni).}$$

$$9.11. A \vee (B \wedge A) \Leftrightarrow A \text{ (yutilish qonuni).}$$

$$9.12. \neg(A \wedge B) \Leftrightarrow \neg A \vee \neg B \text{ (de Morgan qonuni).}$$

$$9.13. \neg(A \vee B) \Leftrightarrow \neg A \wedge \neg B \text{ (de Morgan qonuni).}$$

$$9.14. A \vee B \Leftrightarrow \neg A \Rightarrow B;$$

$$9.15. A \Rightarrow B \wedge B \Rightarrow C \Leftrightarrow A \Rightarrow C \text{ (tranzitiv hulosa qoidasi).}$$

$$9.16. A \Leftrightarrow B \Leftrightarrow \neg A \Leftrightarrow \neg B \text{ (qarama-qarshilik qonuni).}$$

9.17.  $(A \wedge B) \Leftrightarrow B \wedge A$  (kon'yunksiyaning kommutativlik qonuni).

9.18.  $(A \vee B) \Leftrightarrow B \vee A$  (diz'yunksiyaning kommutativlik qonuni).

9.19.  $(A \wedge B) \wedge C \Leftrightarrow A \wedge (B \wedge C)$  (kon'yunksiyaning assosiativlik qonuni).

9.20.  $(A \vee B) \vee C \Leftrightarrow A \vee (B \vee C)$  (diz'yunksiyaning assosiativlik qonuni).

9.21.  $(A \wedge (B \vee C)) \Leftrightarrow (A \wedge B) \vee (A \wedge C)$  (kon'yunksiyaning diz'yunksiyaga nisbatan distributivlik qonuni).

9.22.  $(A \vee (B \wedge C)) \Leftrightarrow (A \vee B) \wedge (A \vee C)$  (diz'yunksiyaning kon'yunksiyaga nisbatan distributivlik qonuni).

10. Quyidagi tengkuchliliklarni isbotlang (mulohazaviy formulalarning tashqi qavslari tashlab yuborilgan):

10.1.  $A \wedge A \equiv A$ .

10.2.  $A \vee A \equiv A$ .

10.3.  $A \vee \bar{A} \equiv 1$ .

10.4.  $A \wedge \bar{A} \equiv 0$ .

10.5.  $A \vee 0 \equiv A$ .

10.6.  $A \vee 1 \equiv 1$ .

10.7.  $A \wedge 0 \equiv 0$ .

10.8.  $A \wedge 1 \equiv A$ .

10.9.  $\bar{\bar{A}} \equiv A$ .

10.10.  $A \wedge B \equiv B \wedge A$ .

10.11.  $A \vee B \equiv B \vee A$ .

10.12.  $A \wedge (B \vee A) \equiv A$ .

10.13.  $A \vee (B \wedge A) \equiv A$ .

10.14.  $A \Rightarrow B \equiv \bar{A} \vee B$ .

10.15.  $A \Leftrightarrow B \equiv (A \Rightarrow B) \wedge (B \Rightarrow A)$ .

10.16.  $\bar{(A \vee B)} \equiv \bar{A} \wedge \bar{B}$ .

$$10.17. \neg(A \wedge B) \equiv \neg A \vee \neg B.$$

$$10.18. (A \wedge B) \wedge C \equiv A \wedge (B \wedge C).$$

$$10.19. (A \vee B) \vee C \equiv A \vee (B \vee C).$$

$$10.20. A \wedge (B \vee C) \equiv (A \wedge B) \vee (A \wedge C).$$

$$10.21. A \vee (B \wedge C) \equiv (A \vee B) \wedge (A \vee C).$$

11. 10-misoldagi tengkuchliliklar yordamida quyidagi formulalarni soddalashtiring (mulohazaviy formulalarning tashqi qavslari tashlab yuborilgan):

$$11.1. \neg(A \vee B) \Rightarrow \neg(A \vee B) \Rightarrow A.$$

$$11.2. \neg(A \wedge B) \vee (A \Rightarrow B) \wedge A.$$

$$11.3. (A \Rightarrow B) \wedge (B \Rightarrow A) \wedge (A \vee B).$$

$$11.4. (A \Rightarrow B) \wedge (B \Rightarrow \neg A) \wedge (C \Rightarrow A).$$

$$11.5. (A \wedge C) \vee (A \wedge \neg C) \vee (B \wedge C) \vee (A \wedge B \wedge C).$$

$$11.6. \neg(A \Rightarrow B) \wedge (B \Rightarrow \neg A).$$

12. Teng kuchli almashtirishlar yordamida quyidagi formulalarni shunday almashtiring-ki, natijada hosil bo'lgan formulalarda faqat  $\neg$  va  $\wedge$  amallari qatnashsin:

$$12.1. (A \vee B) \Rightarrow (\neg A \Rightarrow C);$$

$$12.2. (\neg A \Rightarrow B) \vee \neg(A \Rightarrow B);$$

$$12.3. ((A \vee B \vee C) \Rightarrow A) \vee C;$$

$$12.4. ((A \Rightarrow B) \Rightarrow C) \Rightarrow \neg A;$$

$$12.5. (A \vee (B \Rightarrow C)) \Rightarrow A.$$

13. Teng kuchli almashtirishlar yordamida quyidagi formulalarni shunday almashtiring-ki, natijada hosil bo'lgan formulalarda faqat  $\neg$  va  $\vee$  amallari qatnashsin:

$$13.1. (A \Rightarrow B) \Rightarrow (B \wedge C);$$

$$13.2. (\neg A \wedge \neg B) \Rightarrow (A \wedge B);$$

$$13.3. ((\neg A \wedge \neg B) \vee C) \Rightarrow (C \wedge \neg B);$$

$$13.4. ((A \Rightarrow (B \wedge C)) \Rightarrow (\neg B \Rightarrow \neg A)) \Rightarrow \neg B;$$

13.5.  $((A \Rightarrow B) \wedge (B \Rightarrow C)) \Rightarrow (A \Rightarrow C)$ .

14. Quyidagi formulalarning inkorini toping:

14.1.  $(A \wedge (B \vee \neg C)) \vee (\neg A \wedge B)$ ;

14.2.  $((\neg A \wedge \neg B \wedge \neg C) \vee D) \wedge \neg Q \wedge \neg R \wedge \neg P$ ;

14.3.  $((\neg A \wedge (\neg B \vee C)) \vee D) \wedge \neg Q) \vee (\neg R \wedge (P \vee \neg F))$ ;

14.4.  $((A \wedge (\neg B \vee (\neg C \wedge D))) \vee \neg Q) \wedge R$ .

15. Teng kuchli almashtirishlar yordamida quyidagi formulalarning ziddiyat ekanligini isbotlang:

15.1.  $(A \Rightarrow B) \wedge (B \Rightarrow A) \wedge ((A \wedge \neg B) \vee (\neg A \wedge B))$ ;

15.2.  $((A \wedge \neg B) \Rightarrow (\neg A \vee (A \wedge B))) \wedge ((\neg B \vee (A \wedge B)) \Rightarrow (A \wedge \neg B))$ ;

15.3.  $((A \Rightarrow B) \wedge (B \Rightarrow C)) \Rightarrow \neg(A \Rightarrow C)$ ;

15.4.  $(A \Rightarrow B) \wedge (A \Rightarrow \neg B) \wedge A$ ;

15.5.  $(A \wedge \neg B) \vee (A \wedge \neg C) \Leftrightarrow ((A \Rightarrow B) \wedge (A \Rightarrow C))$ .



### Takrorlash uchun savollar

1. Mulohazaviy formula ta'rifini ayting va misol keltiring.
2. Mantiqiy amallarni bajarilish tartibi qanday?
3. Mulohazalarning qabul qiladigan qiymatlar tizimi nima? Ularning soni nimaga bog'liq?
4. Formulaning rostlik jadvali qanday tuziladi?
5. Teng kuchli formulalarga ta'rif bering.
6. Formulalarning teng kuchli ekanligi qanday isbotlanadi?
7. Aynan rost, aynan yolg'on, bajariluvchi formulalar ta'riflarini ayting.
8. Tautologiya, ziddiyat, mantiq qonuni ta'rifini ayting.
9. Asosiy tengkuchliliklardan qaysilarini eslab qoldingiz?
10. Teng kuchli formula bilan mantiq qonuni orasida qanday bog'lanish bor?



### 3-§. Predikatlar. Kvantorlar

**Asosiy tushunchalar:** Predikat, bir o'zgaruvchili predikatning qiymatlar sohasi, predikatning rostlik sohasi, predikatlar kon'yunksiyasi, diz'yunksiyasi, implikasiyasi, ekvivalensiyasi, predikat inkori, umumiylik kvantori, mavjudlik kvantori, predikatli formula.

$M$  to'plamning  $a$  elementi haqida aytilgan tasdiqqa  $a$  ning o'rniga  $M$  ning aniq bitta elementini qo'ysak mulohaza hosil bo'lsa, bunday tasdiqlarni bir o'zgaruvchili mulohazaviy formula yoki bir o'zgaruvchili predikat deb ataymiz.  $n$  ta  $x_1, \dots, x_n$  o'zgaruvchilarga bog'liq  $R(x_1, \dots, x_n)$ -tasdiq berilgan bo'lsin. U holda  $x_1, \dots, x_n$  o'zgaruvchilarning mazmunga ega bo'ladigan qiymatlar to'plami, shu o'zgaruvchilarning yo'l qo'yiladigan qiymatlari sohasi deyiladi. Agar  $R(x_1, \dots, x_n)$  tasdiq  $x_1, \dots, x_n$  o'zgaruvchilarning yo'l qo'yilishi mumkin bo'lgan har qanday qiymatlarida mulohazaga aylansa,  $n$ - o'zgaruvchili predikat yoki  $n$  o'zgaruvchili mulohazaviy formula deyiladi. Bu erda  $n = 0, 1, 2$  va hokazo manfiy bo'lmagan butun qiymatlar qabul qiladi.  $0$ - o'rinli predikat sifatida mulohaza tushuniladi.

$M \neq \emptyset$  to'plamda aniqlangan bir o'rinli  $R(x)$  - predikat berilgan bo'lsin, u holda  $R(x)$  - predikatning inkori deb har qanday  $x \in M$  element uchun  $R(x)$ -predikat rost bo'lganda yolg'on bo'ladigan;  $R(x)$  yolg'on bo'lganda rost bo'ladigan  $\neg R(x)$  predikatga aytiladi. Ya'ni,  $M$  ning ixtiyoriy elementi uchun  $(\neg R)(x) = \neg(R(x))$  tenglik o'rinli bo'ladi.

Xuddi shunday  $M \neq \emptyset$  to'plamda aniqlangan  $P(x)$  va  $Q(x)$  bir o'rinli predikatlar uchun  $\wedge, \vee, \Rightarrow, \Leftrightarrow$  amallari quyidagi tengliklar yordamida aniqlanadi:

$$(R \wedge Q)(x) = R(x) \wedge Q(x);$$

$$(R \vee Q)(x) = R(x) \vee Q(x);$$

$$(R \Rightarrow Q)(x) = R(x) \Rightarrow Q(x);$$

$$(R \Leftrightarrow Q)(x) = R(x) \Leftrightarrow Q(x).$$



$M \neq \emptyset$  to'plamda aniqlangan  $R(x)$  predikat berilgan bo'lsin, u holda  $R(x)$  predikatni rost mulohazaga aylantiradigan  $x$  ning  $M$  to'plamga tegishli barcha elementlarini  $E_r$  orqali belgilaymiz.  $E_r-R(x)$  predikatning rostlik sohasi deyiladi.

$\forall x R(x)$  ifoda,  $M$  to'plamning barcha elementlari uchun  $R(x)$  rost bo'lganda rost,  $M$  to'plamning kamida bitta  $x_0$  elementi uchun  $R(x_0)$  yolg'on bo'lganda yolg'on bo'ladigan mulohazadir. Bu erdagi  $\forall$  belgi umumiylik kvantorini bildiradi.

$\exists x R(x)$  mulohaza bo'lib,  $M$  to'plamning kamida bitta  $x_0$  elementi uchun  $R(x_0)$  rost bo'lganda rost qolgan hollarda, ya'ni  $M$  to'plamning barcha elementlari uchun  $R(x)$ - yolg'on bo'lganda yolg'on bo'ladigan mulohazadir.

$R(x,y)$ - butun sonlar to'plami  $Z$  da aniqlangan « $x+y>0$ » mazmunidagi predikat bo'lsin, u holda

$\forall x \forall y R(x,y)$ - «ixtiyoriy ikkita butun son yig'inidisi musbat bo'ladi» - yolg'on mulohaza;

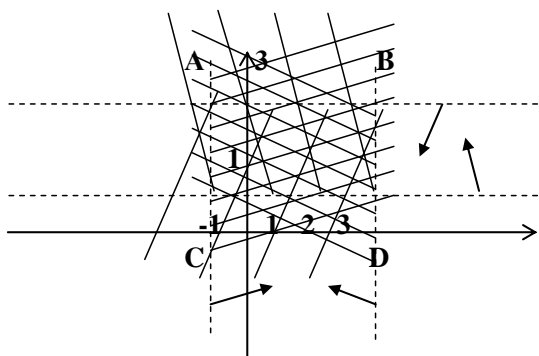
$\forall x \exists y R(x,y)$ -«har qanday butun son  $x$  uchun shunday  $y$  butun son mavjud bo'lib ularning yig'inidisi musbat» - rost mulohaza;

$\exists x \forall y R(x,y)$ -«shunday  $x$  butun son mavjud bo'lib, uning ixtiyoriy  $y$  butun son bilan yig'idisi musbat» - yolg'on mulohaza;

$\exists x \exists y R(x,y)$ -«shunday  $x$  va  $y$  butun sonlar mavjud-ki, ularning yig'inidisi musbat» - rost mulohaza bo'ladi.

**Misol.** Dekart koordinatalar tekisligida  $x < 3 \wedge x > -1 \wedge y < 3 \wedge y > 1$  predikatning rostlik sohasini tasvirlang.

**Yechish.** Berilgan ikki o'rinli predikat to'rtta bir o'rinli predikatlarning kon'yunksiyasidan tashkil topgan. Kon'yunksiya amalining ta'rifidan, predikatlardagi ikkala o'zgaruvchi o'rniga qiymatlar berganimizda, ularning barchasini rost mulohazaga aylantiruvchi  $x$  va  $y$  larning qiymatlari berilgan predikatning rostlik sohasi bo'ladi. Buning uchun har bir predikatning rostlik sohasini aniqlab, ularning kesishmasini topamiz:



hosil bo'lgan chizmadagi ABCD to'rtburchakning ichki nuqtalari berilgan predikatning rostlik sohasi bo'ladi.

**Misol.**  $M = \{1, 2, \dots, 20\}$  to'plamda quyidagi predikatlar berilgan:

$A(x)$ : « $x : 5$ »;  $B(x)$ : « $x$  – juft son»;  $C(x)$ : « $x$  – tub son»;  $D(x)$ : « $x$  3 ga karrali».

$A(x) \wedge B(x) \Rightarrow C(x) \vee D(x)$  predikatning rostlik sohasini toping.

**Yechish.** K orqali M to'plamning  $A(x) \wedge B(x)$  predikatni rost,

$C(x) \vee D(x)$  predikatni yolg'on mulohazaga aylantiradigan elementlarini belgilab olamiz. Mantiq amallarining ta'rifiga ko'ra berilgan predikatning rostlik sohasi M to'plamdan K to'plamni ayirishdan hosil bo'lgan to'plamdan iborat. K to'plamni aniqlaymiz:

1)  $A(x) \wedge B(x)$  predikat rost mulohazaga aylanadigan qiymatlar to'plami  $A(x)$  va  $B(x)$  predikatlarini bir vaqtda rost mulohazaga aylantiradigan M to'plamning elementlari, ya'ni  $A_1 = \{5, 10, 15, 20\}$  va  $B_1 = \{2, 4, 6, 8, 10, 12, 14, 16, 18, 20\}$  to'plamlarning kesishmasidan iborat. Bu to'plamni  $M_1$  orqali belgilaymiz:

$$M_1 = A_1 \cap B_1 = \{10, 20\}.$$

2)  $C(x) \vee D(x)$  predikat  $C(x)$  va  $D(x)$  predikatlar bir vaqtda yolg'on mulohazaga aylanadigan M to'plamning qiymatlarida yolg'on mulohaza bo'ladi. U  $C_1 = \{1, 4, 6, 8, 9, 10, 12, 14, 15, 16, 18, 20\}$  va

$D_1 = \{1, 2, 4, 5, 7, 8, 10, 11, 13, 14, 16, 17, 19, 20\}$  to'plamlarning kesishmasidan iborat  $M_2 = \{1, 4, 8, 10, 14, 16, 20\}$  to'plamdan iborat.

Demak,  $K = M_1 \cap M_2 = \{10, 20\}$  to'plamdan iborat. U holda  $M \setminus K$  berilgan  $A(x) \wedge B(x) \Rightarrow C(x) \vee D(x)$  predikatning rostlik sohasi.



## Misol va mashqlar

1. Quyidagi gaplardan qaysilari predikat ekanligini aniqlang:

1.1. Natural sonning natural bo'luvchilari faqat ikkita bo'lsa, u tub son bo'ladi.

1.2. «x-mevali daraxt», (x daraxtlar to'plamining elementi).

1.3. «Nargizaning yoshi 18da».

1.4. « $x+y=5$ », ( $x,y \in \mathbb{N}$ ).

1.5. « $x+yi$  –mavhum son», ( $x,y \in \mathbb{R}$ ).

1.6. « $x^3+3x-4$ », ( $x \in \mathbb{Z}$ )

1.7. «x va y bir sinfda o'qiydi», (x,y o'quvchilar to'plamining elementlari).

1.8. «x va y o'xshash», (x,y geometrik figuralar to'plamining elementlari).

1.9. « $5=2+4$ ».

1.10. «Nodir x ning akasi», (x insonlar to'plamining elementi).

1.11. «x 5 ga bo'linadi», ( $x \in \mathbb{N}$ ).

1.12. « $x^2 + 2x + 4$ », ( $x \in \mathbb{R}$ ).

1.13. «ctg  $45^0 = 1$ ».

1.14. « x va y lar z ning turli tomonlarida yotadi» (x va y lar tekislikdagi nuqtalar to'plamiga, z esa tekislikdagi to'g'ri chiziqlar to'plamiga tegishli) .

2. Quyidagi mulohazalar uchun shunday predikatlar tuzingki, ulardagi o'zgaruvchilar o'rniga qiymat berganda berilgan mulohaza hosil bo'lsin:

2.1.  $2+3>7$ .

2.2. Feruzaning farzandlari 3 nafar.

2.3. A.Navoiy ko'chasi Toshkent shahridagi markaziy ko'chalardan biri.

2.4.  $\log_2 2 = 1$ .

2.5. Nargiza Namangan viloyatida tug'ilgan.

2.6.  $(5^2-1)=(5-1)(5+1)$ .

2.7. 16 - murakkab son.

2.8.  $(4,12,20)=4$ .

2.9. Palov-o'zbek milliy taomlaridan.

2.10. Berilgan ABC uchburchak A'B'C' uchburchakka teng.

3. Sonlar o'qida quyidagi bir o'rinli predikatlarining rostlik sohasini tasvirlang:

3.1.  $\frac{x^2 + 3x + 2}{x^2 + 4x + 3} < 0.$

3.2.  $\sqrt{x^2 - 1} = -3.$

3.3.  $2x^2 + x - 30 > 0.$

3.4.  $(\sin x \geq 0).$

3.5.  $(|x + 2| < 0).$

3.6.  $\frac{x}{x-1} < 0.$

3.7.  $3x^2 - 2x + 4 > 0.$

3.8.  $|x-1| < |x+3|.$

3.9.  $|x+5| \leq 3.$

3.10.  $|x| \leq 1.$

4. Dekart koordinatalar tekisligida quyidagi ikki o'rinli predikatlarining rostlik sohasini tasvirlang:

4.1.  $((x > 2) \wedge (y \geq 1)) \wedge ((x < -1) \wedge (y < -2)).$

4.2.  $x + 3y = 3.$

4.3.  $x - y \geq 0.$

4.4.  $(x - 2)^2 + (y + 3)^2 = 4.$

4.5.  $\lg x = \lg y.$

4.6.  $\neg(x > 2) \wedge (y < 2).$

4.7.  $(x = y) \vee (|x| \leq 1).$

4.8.  $(x \geq 3) \Rightarrow (y < 5).$

4.9.  $(x - 1)^2 + y^2 = 4) \wedge (y = x).$

4.10.  $(x^2 + 2x + 1 = 0) \wedge (y = 2x + 3).$

5.  $M = \{1, 2, \dots, 20\}$  to'plamda quyidagi predikatlar berilgan:

$A(x)$ : « $\neg(x \dot{=} 5)$ »;  $B(x)$ : « $x$  – juft son»;  $C(x)$ : « $x$  – tub son»;  $D(x)$ : « $x$  3 ga

karrali». Quyidagi predikatlarning rostlik sohasini toping:

5.1.  $A(x) \wedge D(x) \Rightarrow \neg C(x)$ .

5.2.  $A(x) \wedge C(x) \Rightarrow \neg D(x)$ .

5.3.  $A(x) \Rightarrow B(x)$ .

5.4.  $D(x) \Rightarrow \neg C(x)$ .

5.5.  $C(x) \Rightarrow A(x)$ .

5.6.  $A(x) \vee B(x) \vee D(x)$ .

5.7.  $\neg B(x) \vee \neg D(x)$ .

5.8.  $\neg C(x) \vee D(x) \wedge B(x)$ .

5.9.  $\neg B(x) \vee C(x) \Rightarrow D(x)$ .

5.10.  $A(x) \wedge B(x) \wedge D(x)$ .

5.11.  $\neg A(x) \wedge \neg C(x) \vee B(x)$ .

5.12.  $\neg B(x) \wedge \neg C(x) \wedge D(x)$ .

5.13.  $A(x) \vee \neg B(x) \wedge D(x)$ .

5.14.  $A(x) \wedge C(x) \vee \neg D(x)$ .

5.15.  $B(x) \vee C(x) \wedge A(x)$ .

5.16.  $A(x) \Leftrightarrow \neg B(x) \wedge D(x)$ .

6. Quyidagi mulohazalarni o'qing va ularning rostlik qiymatini aniqlang:

6.1.  $\forall x A(x)$ ,  $A(x)$ : « $x$ -natural son»,  $x \in \mathbf{R}$ .

6.2.  $\exists x A(x)$ ,  $A(x)$ : « $x$ -butun son»,  $x \in \mathbf{R}$ .

6.3.  $\forall x(x+3=5)$ ,  $x \in \mathbf{R}$ .

6.4.  $\exists x(4+x=10)$ ,  $x \in \mathbf{R}$ .

6.5.  $\forall x \forall y(x+y < 4)$ ,  $x, y \in \mathbf{R}$ .

6.6.  $\forall x \exists y(x+y > 4)$ ,  $x, y \in \mathbf{R}$ .

6.7.  $\exists x \forall y(x+y=14)$ ,  $x, y \in \mathbf{R}$ .

6.8.  $\exists x \exists y (x \leq y), x, y \in \mathbf{R}$ .

6.9.  $\forall x \exists y \exists z ([x, y] = z), x, y \in \mathbf{R}$ .

6.10.  $\forall x \forall y \exists z ([x, y] = z), x, y, z \in \mathbf{R}$ .

6.11.  $\forall x (x < 0 \Rightarrow x > 0), x \in \{0, 1, 2\}$ .

6.12.  $(x \in T) (a^2 + b^2 = c^2)$ , T – uchburchaklar to'plami va a, b, c - uchburchak tomonlari.

6.13.  $\forall x \forall y (\frac{x}{y} \Rightarrow \frac{y}{x}), x, y \in \mathbf{N}$ .

6.14.  $\forall x (f(x) > 0), f(x) = x^2 - 4x + 3, x \in \mathbf{R}$ .

6.15.  $\forall x (\frac{2x-5}{x} \in \mathbf{R}), x \in \mathbf{R}$ .

6.16.  $\forall x (x < 10), x \in \{1, \dots, 10\}$ .

6.17.  $\forall x (x + 5 \leq 15), x \in \{1, \dots, 10\}$ .

6.18.  $\forall x \forall y (x - y < 10), x, y \in \{1, \dots, 10\}$ .

6.19.  $\forall x \exists y (\frac{x}{y} \in A), x, y \in \{1, \dots, 10\}$ .

6.20.  $\forall x \forall y (x < y), x \in \{1, \dots, 5\}, y \in \{5, \dots, 10\}$ .

6.21.  $\forall x \forall y (x \dot{:} y), x \in \{4k \mid k \in \mathbf{Z}\}, y \in \{1, 2, 4\}$ .

7. Quyidagi predikatlardan kvantorlar yordamida mulohazalar hosil qiling va ularning qiymatlar, rostlik sohalari toping:

7.1. A(x): «x-talaba».

7.2. A(x): «x-butun son».

7.3. A(x): «x-to'g'ri chiziq».

7.4. A(x): «x:5».

7.5. A(x,y): «x+y=4».

7.6. A(x,y): «x<y».

7.7. A(x,y): «x: y».

7.8. A(x,y): «x/y».

7.9.  $A(x,y,z): \langle \frac{x}{y} = z \rangle$ .

7.10.  $A(x,y,z): \langle [x,y]=z \rangle$ .

8. Quyidagi formulalardagi erkli va bog'liq o'zgaruvchilarni aniqlang:

8.1.  $\forall x A(x)$ .

8.2.  $A(y) \Rightarrow \exists x B(x)$ .

8.3.  $\exists x \forall y (A(x) \wedge B(y)) \Rightarrow \forall y C(t,y)$ .

8.4.  $\forall x (\exists y (A(x,y))) \Rightarrow B(t,z)$ .



### Takrorlash uchun savollar

1. Predikatga ta'rif bering.
2. Predikatning qiymatlar sohasi, rostlik sohasi nima? Misollar yordamida tushuntiring
3. Predikatlar diz'yunksiyasi, kon'yunksiyasi, implikasiyasi, ekvivalensiyasiga misollar keltiring.
4. Mantiq amallarini qo'llash natijasida hosil bo'ladigan predikat o'zgaruvchilarining soni haqida nima deyish mumkin?
5. Umumiylik va mavjudlik kvantorlarini qo'llashga misollar keltiring.
6. Predikatli formula qanday hosil qilinadi?
7. Predikatli formulaning qanday turlarini bilasiz?



### 4-§. Matematik mantiqning tadbiqlari

**Asosiy tushunchalar:** teorema, to'g'ri teorema, to'g'riga teskari teorema, to'g'riga qarama-qarshi teorema, teskariga qarama-qarshi teorema, teorema isboti.  
Rele kontakt sxemasi

Matematik mantiq elementlari mavzuning o'qitilishidan qo'yilgan asosiy maqsad–matematik mantiq fanining algebra, geometriya, matematik tahlil kabi bir

qancha matematik fanlarga tadbqiqining eng sodda ko'rinishlaridan biri-matematik jumlar (aksioma, teorema, ta'rif,...)larni mulohazalar va predikatlar algebralari tili orqali ifodalashga o'quvchilarni o'rgatishdir.

Natural sonlar to'plamida qaralgan tub son tushunchasi uchun quyidagi formulani keltirish mumkin :

$$(\forall n \in \mathbb{N})((n - \text{tub son}) \Leftrightarrow (n \neq 1 \wedge n: p \Rightarrow p=1 \vee p=n)).$$

Yoki quyidagi belgilashlarni kiritsak:

$A(x)$ —« $x$ -tub son»,  $B(x)$ —« $x \neq 1$ »,  $C(x)$ —« $x: p$ »,  $D(x)$ —« $x=1$ »,  $P(x)$ —« $x=p$ » , u holda yuqoridagi formulani quyidagicha ifodalash mumkin :

$$(\forall x \in \mathbb{N}) ( A(x) \Leftrightarrow B(x) \wedge C(x) \Rightarrow D(x) \vee P(x)).$$

Teorema va uning turlari. Har qanday teorema shart va natijadan iborat. Agar A teoremaning sharti B esa uning hullosasi bo'lsa, u holda teoremani

$A \Rightarrow B$  (1) ko'rinishda yozishimiz mumkin.

$B \Rightarrow A$  (2) teoreмага (1) teoreмага teskari teorema deyiladi.

$\neg A \Rightarrow \neg B$  (3) teoreмага (1) teoreмага qarama-qarshi teorema deyiladi.

$\neg B \Rightarrow \neg A$  (4) teoreмага berilgan (1) teoremaning teskarisiga qarama-qarshi (yoki berilgan (1) teoremaning qarama-qarshisiga teskari) teorema deyiladi.

Rostlik jadvallari orqali  $A \Rightarrow B \equiv \neg B \Rightarrow \neg A$  va  $B \Rightarrow A \equiv \neg A \Rightarrow \neg B$  tengkuchliliklarni isbot qilib, quyidagi xulosani chiqaramiz:

$A \Rightarrow B$  teorema o'rniga  $\neg B \Rightarrow \neg A$  teoremani isbot qilib,  $A \Rightarrow B$  rost, ya'ni to'g'ri deb aytishimiz mumkin.

Isbot tushunchasi.  $A_1, A_2, \dots, A_n$  (1) mulohazalar berilgan bo'lib, quyidagi shartlar bajarilsa:

$A_1$  - aksioma yoki avval isbot qilingan mulohaza bo'lsin;

har bir  $A_i$ ,  $i \geq 2$  yoki o'zidan oldingi mulohazadan keltirib chiqarilsin, yoki avval isbot qilingan mulohaza bo'lsin.

U holda (1) ketma-ketlikni biz  $A_n$  mulohazaning isboti deymiz.

Isbot qilish usullari. Teorema shartining rostligidan, xulosaning rostligini to'g'ridan-to'g'ri keltirib chiqarishni bevosita isbot qilish deb tushunamiz. Mantiq



qonunlari orqali isbot qilishga, teskarisidan isbot qilish, uchinchisini inkor qilish qonuni orqali isbot qilish, induksiya yordamida isbot qilish va h.k.lar kiradi.

Avtomatik boshqarish qurilmalari va elektron hisoblash mashinalarida ko'plab rele-kontakt sxemalar uchraydi. Har qanday sxemaga mulohazalar algebrasining biror bir formulasini mos qo'yish mumkin va aksincha. RKS bilan mulohazalar algebrasining formulalari orasidagi bunday munosabat murakkab RKS larni mulohazalar algebrasining formulalari yordamida soddalashtirish imkoniyatini beradi. Kontaktning shartli ravishda

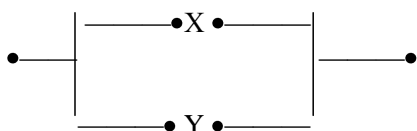
yoki  $\text{---}\bullet\text{---}$ , yoki  $\text{---}\text{---}$ , yoki  $\text{---}\bullet\bullet\text{---}$

ko'rinishda belgilaymiz. Kontakt yopiq (tok o'tkazadigan) yoki ochiq (tok o'tkazmaydigan) holatda bo'lishi mumkin. Kontaktning yopiq holatiga 1 ni, ochiq holatiga 0 ni mos qo'yamiz.

Barcha kontaktlar orasida doimo tok o'tkazadigan (doimo yopiq) hamda butunlay tok o'tkazmaydigan (doimo ochiq) kontaktlar mavjuddir. Ularni ham mos ravishda 1 va 0 bilan belgilaymiz va hamda  $\text{---}\bullet\text{---}$ ,  $\text{---}\text{---}$  ko'rinishda ifodalaymiz.

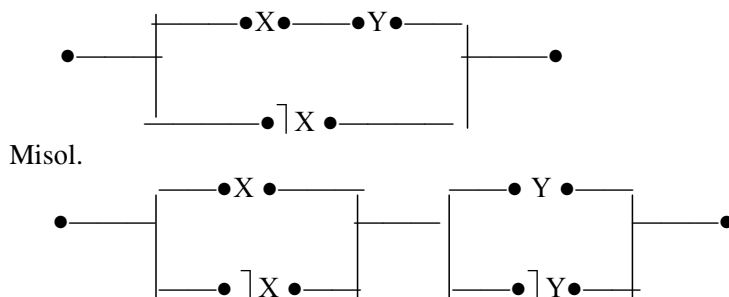
Biz o'zgaruvchi kontaktlar bilan ish ko'rganimiz uchun ularni X, Y, Z, ... harflar bilan belgilaymiz. U holda ikkita X va Y mulohazalarning kon'yunksiyasiga kontaktlarni ketma-ket ulash natijasida hosil bo'ladigan

$\text{---}\bullet\text{X}\bullet\text{---}\bullet\text{Y}\bullet\text{---}$  sxemani, X va Y mulohazalarning diz'yunksiyasiga kontaktlarni parallel ulash natijasida hosil bo'ladigan quyidagi



sxemani mos qo'yamiz. Har qanday mulohazaviy formulani faqat  $\neg$ ,  $\wedge$ ,  $\vee$  amallar qatnashgan formulaga keltirish mumkin bo'lganligidan har bir formulani RKS orqali ifoda qilish va aksincha, har qanday RKS ni mulohazaviy formula orqali ifodalash mumkin.

**Misol.**  $(X \wedge Y) \vee \neg X$  - formulaga quyidagi rele-kontakt sxemasi mos keladi:



sxemaga  $(X \vee \neg X) \wedge (Y \vee \neg Y)$  formula mos keladi.

## ⇒ Misol va mashqlar

1. Quyidagi teoremlarga teskari, to'g'riga qarama-qarshi, teskariga qarama-qarshi teoremlarni ifodalang:

1.1. Agar berilgan to'rtburchak kvadrat bo'lsa, u romb bo'ladi.

1.2. Agar berilgan ikki to'g'ri chiziqning har biri uchinchi to'g'ri chiziqqa parallel bo'lsa, u holda berilgan to'g'ri chiziqlar parallel bo'ladi.

1.3. Agar parallelogramm romb bo'lsa, uning diagonallari perpendikulyar bo'ladi.

1.4. Agar ketma-ketlik monoton va chegaralangan bo'lsa, u holda u limitga ega bo'ladi.

1.5. Agar berilgan natural sonning raqamlar yig'indisi 3ga bo'linsa, berilgan son 3ga bo'linadi.

1.6. Agar rasional sonlar ketma-ketligi yaqinlashuvchi bo'lsa, u holda u fundamental ketma-ketlik bo'ladi.

1.7. Agar 3 ta sonning ko'paytmasi nolga teng bo'lsa, u holda ko'paytuvchilarning kamida bittasi nolga teng bo'ladi.

1.8. Uchburchakning ichki burchaklari yig'indisi  $180^0$  ga teng.

2. Quyidagi mulohazalarni predikatlar algebrasi tilida ifodalang:

2.1. «Barcha rasional sonlar haqiqiy».

2.2. «Ayrim rasional sonlar haqiqiy emas».

2.3. «12 ga bo'linuvchi har qanday natural son 2, 4 va 6 ga bo'linadi».

2.4. «Ayrim ilonlar zaharli».

2.5. «Bir to'g'ri chiziqda yotmagan 3 ta nuqta orqali yagona tekislik o'tkazish mumkin».

2.6. «Yagona  $x$  mavjudki,  $R(x)$ ».

3.  $A(x)$ : « $x$  – tub son »,  $B(x)$ : « $x$  – juft son»,  $C(x)$ : « $x$  – toq son»,  $D(x)$ : « $x$   $y$  ni bo'ladi» kabi xossalarni bildirsa quyidagilarni o'qing:

3.1.  $A(7)$ .

3.2.  $B(2) \wedge A(2)$ .

3.3.  $\forall x(B(x) \Rightarrow \forall y(D(x, y) \Rightarrow B(y)))$ .

3.4.  $\forall x(C(x) \Rightarrow \forall y(A(y) \Rightarrow \neg D(x, y)))$ .

4. Quyidagi tasdiqlar va ularning inkorlarini predikatlar tilida ifodalang:

4.1. Tartiblangan to'plam chiziqli tartiblangan deyiladi, agar to'plamning ixtiyoriy  $x, y$  elementlari uchun yoki  $x = y$  yoki  $x < y$  yoki  $x > y$  bo'lsa.

4.2.  $f(x)$  funksiya  $M$  to'plamda chegaralangan deyiladi, agar shunday manfiymas  $L$  soni mavjud bo'lib, har qanday  $x \in M$  uchun  $|f(x)| \leq L$  bo'lsa.

4.3.  $f(x)$  funksiya  $M$  to'plamda o'suvchi deyiladi, agar to'plamning ixtiyoriy  $x_1, x_2$  elementlari uchun,  $x_1 < x_2$  ekanligidan  $f(x_1) < f(x_2)$  kelib chiqsa.

4.4.  $f(x)$  funksiya davriy deyiladi, agar shunday  $T \neq 0$  soni mavjud bo'lib, funksiyaning aniqlanish sohasidan olingan har qanday  $x$  uchun  $x - T$  va  $x + T$  lar ham shu sohaga tegishli bo'lib,  $f(x \pm T) = f(x)$  shart bajarilsa.

5. Quyidagi formulalar uchun rele-kontakt sxemalarini tuzing:

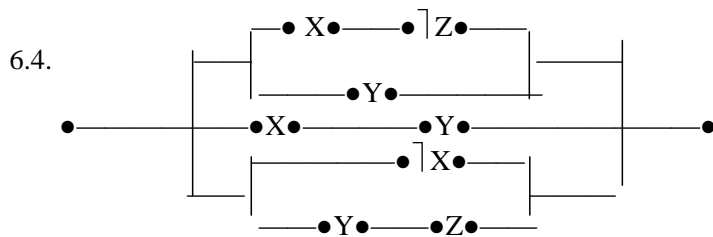
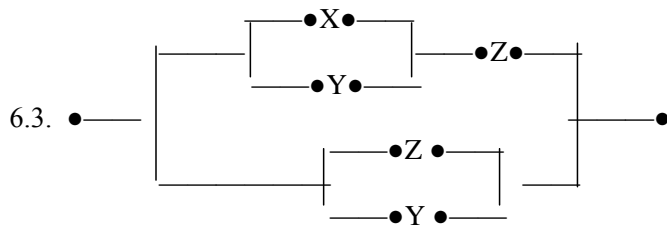
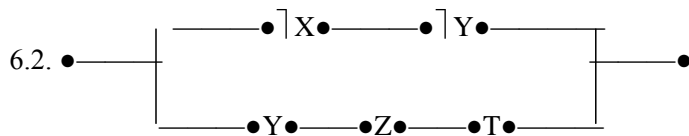
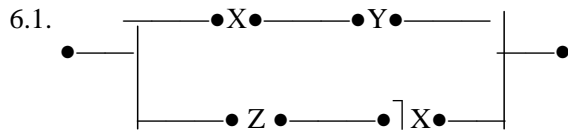
5.1.  $\overline{X} \wedge Y \wedge Z \vee \overline{X} \wedge Y \wedge \overline{Z} \vee \overline{X} \wedge \overline{Y} \wedge Z$ .

5.2.  $(X \Rightarrow Y) \wedge (Y \Rightarrow Z)$ .

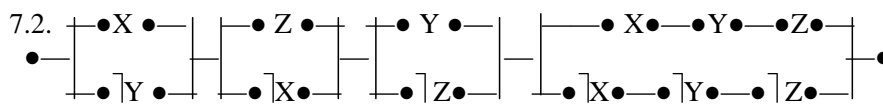
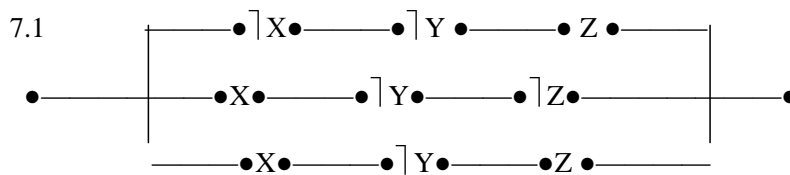
5.3.  $((X \Rightarrow Y) \wedge (Y \Rightarrow Z)) \Rightarrow (X \Rightarrow Z)$ .

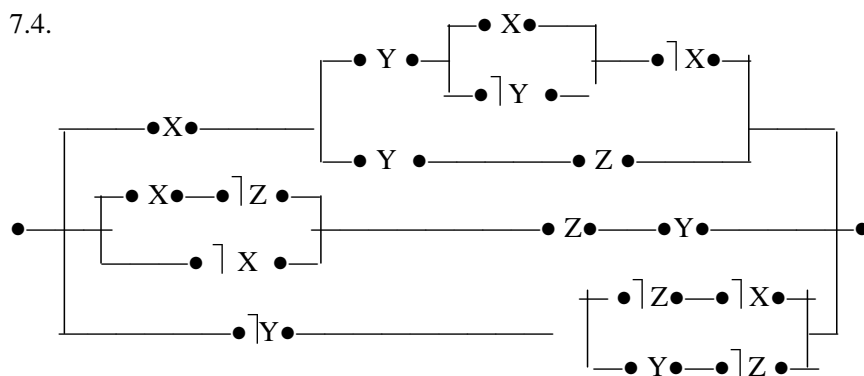
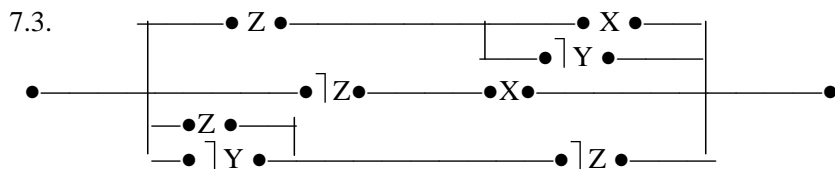
5.4.  $(X \Rightarrow (Y \Rightarrow Z)) \Rightarrow (Y \Rightarrow X)$ .

Quyidagi rele-kontakt sxemalariga mos keluvchi mulohazalar algebrasining formulasini aniqlang:



7. Quyidagi rele-kontakt sxemalarini soddalashtiring:





### Takrorlash uchun savollar

1. Teoremaning qanday turlarini bilasiz?
2. Teoremlarni isbotlash usullari qanday?
3. Matematik tasdiqlarni predikatlar tilida ifodalashga misol keltiring.
4. Rele-kontakt sxemalarini soddalashtirishda muloxazaviy formulalarning ahamiyati nimada?

## II MODUL. TO'PLAMLAR VA MUNOSABATLAR



### 5-§. To'plam. To'plamlar ustida amallar. Eyler-Venn diagrammalari

**Asosiy tushunchalar:** To'plam, to'plam elementi, to'plamlarning tengligi, qismto'plam, bo'sh to'plam, universal to'plam, to'plamlar birlashmasi, to'plamlar kesishmasi, to'plamlar ayirmasi, to'plamlar simmetrik ayirmasi, idempotentlik xossasi, kommutativ amal, assosiativ amal, distributivlik xossasi, to'plam to'ldiruvchisi, Eyler-Venn diagrammalari.

To'plam tushunchasi matematikaning asosiy tushunchalaridan biri bo'lib, misollar yordamida tushuntiriladi. To'plamni tashkil qiluvchi ob'ektlar to'plamining elementlari deyiladi.

Agar  $A$  to'plamning xar bir elementi  $B$  to'plamning ham elementi bo'lsa,  $A \subset B$  orqali belgilanadi va  $A$  to'plam  $B$  to'plamning to'plamostisi deyiladi.

Bir xil elementlardan tashkil topgan to'plamlar teng deyiladi.  $A$  va  $B$  to'plamlarning teng bo'lishi uchun  $A \subset B$  va  $B \subset A$  bo'lishi zarur va etarli ekanligini ko'rish qiyin emas. Bitta ham elementi yo'q to'plamni bo'sh to'plam deb ataymiz, ya'ni  $\emptyset$  orqali belgilaymiz.

$A$  va  $B$  to'plamlarning kamida biriga tegishli bo'lgan barcha elementlardan tashkil topgan  $A \cup B$  to'plam  $A$  va  $B$  to'plamlarning birlashmasi yoki yig'indisi deyiladi.

$A$  va  $B$  to'plamlarning kesishmasi yoki ko'paytmasi deb,  $A$  va  $B$  to'plamlarning barcha umumiy, ya'ni  $A$  ga ham,  $B$  ga ham tegishli elementlardan tashkil topgan  $A \cap B$  to'plamga aytiladi.

A va B to'plamlarning ayirmasi deb, A to'plamning B to'plamga kirmagan barcha elementlardan tashkil topgan to'plamga aytiladi. A va B to'plamlarning ayirmasi  $A \setminus B$  ko'rinishida belgilanadi.

$(A \setminus B) \cup (B \setminus A)$  to'plam A va B to'plamlarning simmetrik ayirmasi deyiladi va  $A \Delta B$  orqali belgilanadi.

Agar  $A \subset B$  bo'lsa,  $B \setminus A$  to'plam A to'plamning B to'plamgacha to'ldiruvchi to'plam deyiladi va  $\subset A$  yoki  $A'$  orqali belgilanadi.

**Misol.**  $A, B \subset M = \{1, \dots, 20\}$  to'plamlar uchun quyidagilarni aniqlang:

$A \setminus B, B \setminus A, A \cup B, A \cap B, A', B'$ .  $A = \{1, 3, 5, 7, 9\}, B = \{2, 4, 7, 8\}$ .

**Yechish:** Berilgan to'plamlar uchun to'plamlar ustida bajariladigan amallarning ta'riflarini qo'llab quyidagi to'plamlarni hosil qilamiz:

$A \setminus B = \{1, 3, 5, 9\}; B \setminus A = \{2, 4, 8\}; A \cup B = \{1, 2, 3, 4, 5, 7, 8, 9\};$

$A \cap B = \{7\}; A' = \{2, 4, 6, 8, 10, 11, 12, 13, 14, 15, 16, 17, 18, 19, 20\};$

$B' = \{1, 3, 5, 6, 9, 10, 11, 12, 13, 14, 15, 16, 17, 18, 19, 20\}$ .

**Misol.**  $(A \cup B) \setminus C = (A \setminus B) \cup (B \setminus C)$  tenglikni isbotlang.

**Yechish.** To'plamlarning tengligini isbotlash uchun  $M = N \Leftrightarrow M \subset N \wedge N \subset M$  tasdiqdan foydalanamiz.

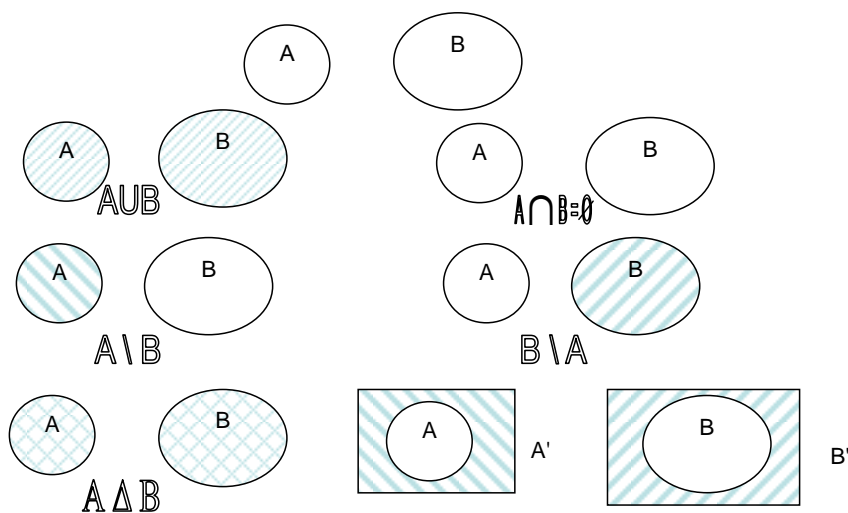
1)  $\forall x \in ((A \cup B) \setminus C) \Rightarrow x \in (A \cup B) \wedge x \notin C \Rightarrow x \in A \vee x \in B \wedge x \notin C \Rightarrow$   
 $\Rightarrow (x \in A \wedge x \notin C) \vee (x \in B \wedge x \notin C) \Rightarrow x \in (A \setminus C) \vee x \in (B \setminus C) \Rightarrow$   
 $\Rightarrow [x \in ((A \setminus C) \cup (B \setminus C))].$  Bundan  $(A \cup B) \setminus C \subset (A \setminus C) \cup (B \setminus C)$  ekanligi kelib chiqadi.

2)  $\forall x \in ((A \setminus C) \cup (B \setminus C)) \Rightarrow x \in (A \setminus C) \vee x \in (B \setminus C) \Rightarrow (x \in A \wedge x \notin C) \vee$   
 $\vee (x \in B \wedge x \notin C) \Rightarrow x \in A \vee x \in B \wedge x \notin C \Rightarrow x \in (A \cup B) \wedge x \notin C \Rightarrow$   
 $\Rightarrow x \in ((A \cup B) \setminus C).$  Dundan  $(A \setminus C) \cup (B \setminus C) \subset (A \cup B) \setminus C$  ekanligi kelib chiqadi.

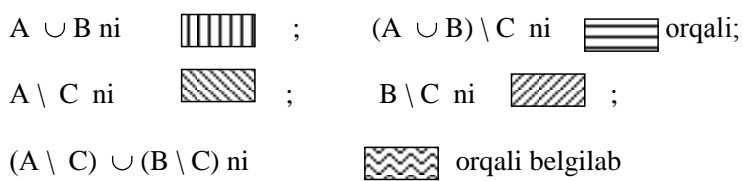
Demak  $(A \cup B) \setminus C = (A \setminus C) \cup (B \setminus C)$ .

To'plamlar ustida amallarni Eyer-Venn diagrammalari deb ataladigan quyidagi shakllar yordamida ifoda qilish, amallarning xossalarini isbot qilishni ancha engillashtiradi.

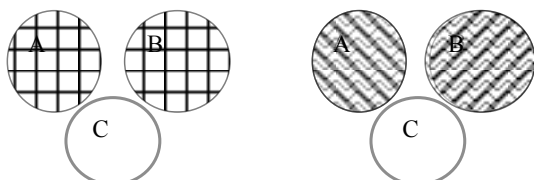
Universal to'plam to'g'ri to'rt burchak shaklida, uning to'plamostilarini to'g'ri to'rtburchak ichidagi doiralar orqali ifoda qilinadi. U xolda, ikki to'plam birlashmasi, kesishmasi, ayirmasi, to'lduruvchi to'plamlar, ikki to'plamning simmetrik ayirmasi mos ravishda quyidagicha ifodalanadi:



$(A \cup B) \setminus C = (A \setminus C) \cup (B \setminus C)$  tenglikni Eyler – Venn diagrammalarida tasvirlaymiz. Buning uchun tenglikda qatnashgan uchta to'plam uchun biror bir vaziyatni aniqlab, tenglikning ikkala tomonini ikkita diagrammada tasvirlaymiz:



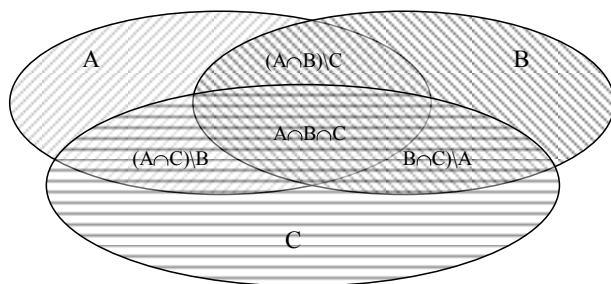
quyidagilarni hosil qilamiz:





**Masala.** 58 nafar mexanizatorlar haydovchi, traktorchi, kombaynchi mutaxassisligiga ega. Ulardan 11 nafari ham haydovchi ham traktorchi; 6 nafari ham traktorchi ham kombaynchi; 5 nafari–haydovchi va kombaynchi; 3 nafari-uchchala mutaxassislikka ega. Agar kombaynchi, haydovchi va traktorchilar soni ayirmasi 7 ga teng arifmetik progressiyani tashkil etsa, u holda mexanizatorlardan necha nafari faqat bitta mutaxassislikka ega?

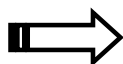
**Yechish.** A, B, C to'plamlar- haydovchi, traktorchi va kombaynchilar to'plamlari bo'lsin. Masala shartidan kelib chiqqan holda quyidagi Eyler-Venn diagrammasini tuzamiz



Masala shartiga ko'ra  $A \cap B \cap C = 3, A \cap B = 11, A \cap C = 5, B \cap C = 6$ . U holda  $(A \cap B) \setminus C = 8, (A \cap C) \setminus B = 2, (B \cap C) \setminus A = 3$  bo'ladi. Faqat haydovchilar to'plami  $(A \setminus B) \setminus C$  ni  $x$ , faqat traktorchilar to'plami  $(B \setminus A) \setminus C$  ni  $y$ , faqat kombaynchilar to'plami  $(C \setminus A) \setminus B$  ni  $z$  orqali belgilasak, u holda

$x + y + z + 3 + 8 + 2 + 3 = 58$  bo'lib, bundan  $x + y + z = 42$  kelib chiqadi.  $z, x, y$  lar ayirmasi 7 ga teng arifmetik progressiyani tashkil etganligi uchun  $x = 14, y = 7, z = 21$ .

Javob. Faqat haydovchilar-14, faqat kombaynchilar-7, faqat traktorchilar-21 nafar.



### Misol va mashqlar

1.  $A, B \subset M = \{1, \dots, 20\}$  to'plamlar uchun quyidagilarni aniqlang:  
 $A \setminus B, B \setminus A, A \cup B, A \cap B, A', B', A \Delta B$ :

1.1.  $A = \{1, 3, 5\}$ ,  $B = \{11, 13, 15\}$ .

1.2.  $A = \{3, 5, 7\}$ ,  $B = \{8, \dots, 15\}$ .

1.3.  $A = \{1, \dots, 5\}$ ,  $B = \{1, \dots, 13\}$ .

1.4.  $A = \{5, \dots, 12\}$ ,  $B = \{12, \dots, 15\}$ .

2. Shunday  $A, B, C$  to'plamlarni toping-ki, ular uchun quyidagi shartlar

bajarilsin:  $A \subset B, A \not\subset C, A \subset B \subset C, A \subset B \wedge A \subset C \wedge B \not\subset C$ .

3.  $M = \{\{\emptyset\}, \{1\}, \{1, 2\}\}$  to'plamning barcha to'plamostilarini toping.

4. Agar  $n \in \mathbb{N}$  uchun  $M_n = \{1, 2, \dots, n\}$  bo'lsa,  $M_1, M_2, M_3, M_4, \dots, M_n$  larning barcha to'plamostilari sonini aniqlang.

5. Quyidagilarni isbotlang va Eyler – Venn diagrammalarini tuzing:

5.1.  $(A \setminus B) \setminus C = (A \setminus C) \setminus (B \setminus C)$ .

5.2.  $A \setminus (B \setminus C) \subset A \cup C$ .

5.3.  $(A \setminus C) \setminus (B \setminus A) \subset A \setminus C$ .

5.4.  $A \setminus C \subset (A \setminus B) \cup (B \setminus C)$ .

5.5.  $((A \cup B)' \cap (A' \cup B'))' = A \cup B$ .

5.6.  $A \subset B \subset C \equiv A \cup B = B \cap C$ .

5.7.  $A \subset B \Rightarrow A \setminus C \subset B \setminus C$ .

5.8.  $A \subset B \Rightarrow A \cap C \subset B \cap C$ .

5.9.  $A \subset B \Rightarrow A \cup C \subset B \cup C$ .

5.10.  $B \subset A \wedge C = A \setminus B \Rightarrow A = B \cup C$ .

5.11.  $A \not\subset B \wedge B \cap C = \emptyset \Rightarrow A \cup C \not\subset B \cup C$ .

5.12.  $C = A \setminus B \Rightarrow B \cap C = \emptyset$ .

5.13.  $B \cap C = \emptyset \wedge A \cap C \neq \emptyset \Rightarrow A \setminus B \neq \emptyset$ .

5.14.  $A \subset C \Rightarrow A \cup (B \cap C) = (A \cup B) \cap C$ .

5.15.  $A \setminus (B \cap C) = (A \setminus B) \cup (A \setminus C)$ .

6. L'yuis Kerrol masalasi. Shiddatli jangda 100 nafar qaroqchidan 70 nafari bitta ko'zidan, 75 nafari bitta qulog'idan, 80 nafari bitta qo'lidan va 85 nafari bitta

oyog'idan ayrildi. Bir vaqtning o'zida ham ko'zi, ham qulog'i, ham qo'li va oyog'idan ayrilgan qaroqchilarning eng kam sonini aniqlang.

7. To'plamlar ustida bajariladigan algebraik amallarning quyidagi xossalarini isbotlang:

7.1.  $A \cap A = A$  kesishmaning idempotentligi;

7.2.  $A \cup A = A$  birlashmaning idempotentligi;

7.3.  $A \cap B = B \cap A$  kesishmaning kommutativligi;

7.4.  $A \cup B = B \cup A$  birlashmaning kommutativligi;

7.5.  $(A \cap B) \cap C = A \cap (B \cap C)$  kesishmaning assosiativligi;

7.6.  $(A \cup B) \cup C = A \cup (B \cup C)$  birlashmaning assosiativligi;

7.7.  $A \cap (B \cup C) = (A \cap B) \cup (A \cap C)$  kesishmaning birlashmaga nisbatan distributivligi;

7.8.  $A \cup (B \cap C) = (A \cup B) \cap (A \cup C)$  birlashmaning kesishmaga nisbatan distributivligi;

$$7.9. (A \setminus B) \cap C = (A \cap C) \setminus B = (A \cap C) \cap (B \cap C)^c;$$

$$7.10. X \setminus \bigcup_{i=1}^{\infty} A_i = \bigcap_{i=1}^{\infty} (X \setminus A_i);$$

$$7.11. X \setminus \bigcap_{i=1}^{\infty} A_i = \bigcup_{i=1}^{\infty} (X \setminus A_i).$$



### Такрорлаш учун саволлар

1. To'plam tushunchasiga misollar keltiring.
2. To'plam elementi deb nimaga aytiladi?
3. Qism to'plam ta'rifini ayting.
4. Teng to'plamlar tushunchasiga ta'rif bering.
5. Bo'sh to'plam, universal to'plamlar ta'rifini ayting. Misollar keltiring.
6. To'plamlar birlashmasi, kesishmasiga ta'rif bering.
7. To'plamlar ayirmasi, simmetrik ayirmasiga ta'rif bering.
8. To'plamlar birlashmasining qanday xossalarini bilasiz?

9. To'plamlar kesishmasining qanday xossalarini bilasiz?

10. To'plamlar ustida bajariladigan amallarning xossalari qanday tushunchalar yordamida isbotlanadi?

11. Eyley-Venn diagrammalarini tushuntiring.

12. Eyley-Venn diagrammalari yordamida to'plamlarning tengligini isbotlash mumkinmi?



## 6-§. Dekart ko'paytma. Binar munosabatlar. Ekvivalentlik munosabati

**Asosiy tushunchalar:** tartiblangan juftlik, kortej, to'plamlarning to'g'ri (Dekart) ko'paytmasi, binar, n-ar munosabatlar, binar munosabatning aniqlanish va qiymatlar sohasi, binar munosabat inversiyasi, binar munosabatlar kompozitsiyasi, refleksiv, antirefleksiv, simmetrik, antirefleksiv, tranzitiv binar munosabatlar, ekvivalentlik munosabati, faktor-to'plam.

$A_1, \dots, A_n$  - bo'sh bo'lmagan to'plamlar  $\forall a_1 \in A_1, \dots, \forall a_n \in A_n$  -elementlardan tuzilgan barcha  $(a_1, \dots, a_n)$  - n-liklar to'plami  $A_1, \dots, A_n$  to'plamlarning dekart ko'paytmasi deyiladi.  $A_1, \dots, A_n$  to'plamlarning dekart ko'paytmasi  $A_1 \times \dots \times A_n$  ko'rinishida belgilanadi.

$A \neq \emptyset$  to'plam berilgan bo'lsin.  $A^n$  ning ixtiyoriy  $\rho$  to'plamostini  $A$  to'plamda aniqlangan n-ar munosabat deyiladi.  $A^2$  ning ixtiyoriy to'plamostisi  $A$  to'plamida berilgan binar munosabat deyiladi.

Agar  $R$  - binar munosabata tegishli barcha juftliklarning, barcha birinchi koordinatalaridan tuzilgan to'plam  $Dom R$  aniqlanish, barcha ikkinchi koordinatalaridan tuzilgan to'plam esa  $Im R$  o'zgarish sohalari deyiladi.

$R^\vee = \{(b, a) \mid (a, b) \in R\}$  munosabat  $R$  munosabatning inversiyasi deyiladi.

$P$  va  $Q$  binar munosabatlar bo'sh bo'lmagan  $A$  to'plamda berilgan bo'lsin.  $U$  holda  $P \circ Q = \{(a, c) \mid \exists b \in A, (a, b) \in Q \wedge (b, c) \in P\}$  to'plam  $P$  va  $Q$  binar

munosabatlarning kompozitsiyasi deyiladi.

$A$  to'plamida  $R$  –binar munosabat berilgan bo'lsin.

a) Agar  $\forall a \in A$  uchun  $(a, a) \in R$  bo'lsa,  $R$  –binar munosabat refleksiv munosabat deyiladi;

b) Agar  $(a, b) \in R$  bo'lishidan  $(b, a) \in R$  bo'lishi kelib chiqsa, ya'ni  $R^{-1} = R$  shart bajarilsa,  $R$ -simmetrik munosabat deyiladi;

c) Agar  $\forall (a, b) \in R$  va  $(b, a) \in R$  bo'lishidan  $(a, c) \in R$  bo'lishi kelib chiqsa, ya'ni  $R \circ R \subset R$  shart bajarilsa,  $R$ -tranzitiv munosabat deyiladi;

d) refleksiv, simmetrik va tranzitiv bo'lgan binar munosabat ekvivalentlik munosabati deyiladi.

$\forall a \in A$  uchun  $\bar{a}$  orqali  $A$  to'plamning  $a$  ga ekvivalent bo'lgan barcha elementlarini belgilaymiz va bu to'plamni  $a$  element yaratgan ekvivalentlik sinfi deb ataymiz.  $R$  ekvivalentlik munosabati bo'yicha aniqlangan barcha ekvivalentlik sinflari to'plamiga  $A$  to'plamning  $R$  ekvivalentlik munosabati bo'yicha faktor-to'plami deyiladi.

**Misol.**  $R, S, T \subset A \times A$  – binar munosabatlar uchun

$R \circ (S \setminus T) = (R \circ S) \setminus (R \circ T)$  tenglikni isbotlang.

**Yechish.** Binar munosabatlar tartiblangan juftliklardan iborat to'plamlar ekanligini bilgan holda to'plamlar ayirmasi, to'plamlar tengligi hamda binar munosabatlar kompozitsiyasining ta'riflaridan foydalanib berilgan tenglikni isbotlaymiz:

$$\begin{aligned}
 1) \quad & \forall (x, y) \in (R \circ (S \setminus T)) \Rightarrow \exists z \in A, (x, z) \in (S \setminus T) \wedge (z, y) \in R \Rightarrow \\
 & \Rightarrow (x, z) \in S \wedge (x, z) \notin T \wedge (z, y) \in R \Rightarrow (x, z) \in S \wedge (z, y) \in R \wedge \\
 & \wedge (x, z) \notin T \wedge (z, y) \in R \Rightarrow (x, y) \in (R \circ S) \wedge (x, y) \notin (R \circ T) \Rightarrow \\
 & \Rightarrow (x, y) \in ((R \circ S) \setminus (R \circ T)). \text{ Demak, } R \circ (S \setminus T) \subset ((R \circ S) \setminus (R \circ T)); \\
 2) \quad & \forall (x, y) \in ((R \circ S) \setminus (R \circ T)) \Rightarrow (x, y) \in (R \circ S) \wedge (x, y) \notin (R \circ T) \Rightarrow \\
 & \Rightarrow \exists z \in A, ((x, z) \in S \wedge (z, y) \in R) \wedge ((x, z) \notin T \wedge (z, y) \in R) \Rightarrow \\
 & \Rightarrow (x, z) \in S \wedge (x, z) \notin T \wedge (z, y) \in R \Rightarrow (x, z) \in (S \setminus T) \wedge (z, y) \in R \Rightarrow
 \end{aligned}$$

$\Rightarrow (x,y) \in (R \circ (S \setminus T))$ . Demak,  $(R \circ S) \setminus (R \circ T) \subset R \circ (S \setminus T)$ .

Natijada  $R \circ (S \setminus T) = (R \circ S) \setminus (R \circ T)$  tenglik isbotlandi.

**Misol.**  $M = \{1, 2, \dots, 10\}$  to'plamda berilgan

$R = \{ \langle x, y \rangle \mid x, y \in M \wedge x = y - 1 \}$  binar munosabatning xossalarini tekshiring va grafini chizing.

**Yechish.** Berilgan binar munosabatni qanday xossalarga bo'ysunishini tekshiramiz:

1) Refleksivlik xossasi.  $\forall (x \in M) (x = x - 1)$  yolg'on, chunki, masalan  $M$  to'plamning 2 elementi uchun  $2 \neq 2 - 1$ . Demak,  $R$ -refleksiv emas.

2) Antirefleksivlik xossasi.  $\forall (x \in M) \neg (x = x - 1)$  rost. Demak,  $R$ -antirefleksiv.

3) Simmetriklik xossasi.  $\forall (x, y \in M) (x = y - 1 \Rightarrow y = x - 1)$  yolg'on. Chunki, masalan  $3, 4 \in M$  uchun  $3 = 4 - 1 \Rightarrow 4 = 3 - 1$  da birinchi mulohaza rost va ikkinchi mulohaza yolg'on bo'lganligi uchun implikasiya yolg'on. Demak,  $R$ -simmetrik emas.

4) Antisimmetriklik xossasi.  $\forall (x, y \in M) (x = y - 1 \wedge y = x - 1 \Rightarrow x = y)$  rost. Chunki,  $M$  to'plamning har qanday  $x, y$  elementlari uchun  $x = y - 1$  va  $y = x - 1$  mulohazalar bir vaqtda rost bo'la olmaydi. Bundan ularning kon'yunksiyasi berilgan to'plam elementlari uchun yolg'on. Birinchi mulohaza yolg'on bo'lgan implikasiya rost ekanligini e'tiborga olsak,  $R$ -antisimmetrik binar munosabat ekanligi kelib chiqadi.

5) Tranzitivlik xossasi.

$\forall (x, y, z \in M) (x = y - 1 \wedge y = z - 1 \Rightarrow x = z - 1)$  yolg'on mulohaza. Chunki, masalan  $M$  to'plamning 3, 4, 5 elementlari uchun

$(3 = 4 - 1) \wedge (4 = 5 - 1) \Rightarrow (3 = 5 - 1)$  implikasiyada kon'yunksiya rost, lekin implikasiya natijasi yolg'on mulohaza. Implikasiya ta'rifiga ko'ra,  $(3 = 4 - 1) \wedge (4 = 5 - 1) \Rightarrow (3 = 5 - 1)$  mulohaza yolg'on. Demak,  $R$ -tranzitiv emas.

6)  $R$ -ekvivalentlik munosabati bo'la olmaydi, chunki refleksivlik, simmetriklik, tranzitivlik xossalariga ega emas.

7)R-tartib munosabati bo'la olmaydi, chunki R antisimmetrik bo'lgani bilan tranzitiv emas.

**Misol.**  $A = \{1,2\}$ ,  $B = \{2,5\}$  to'plamlar uchun  $R = A \times B$ ,  $S = B \times A$  binar munosabatlarni topib,  $R \circ S$ ,  $S \circ R$ ,  $R^2$ ,  $S^2$  larni aniqlang.

**Yechish.** To'plamlarning to'g'ri ko'paytmasi, binar munosabatlar kompozitsiyasi ta'riflaridan foydalanib quyidagi to'plamlarni hosil qilamiz:

$$R = A \times B = \{(1,2), (1,5), (2,2), (2,5)\};$$

$$S = B \times A = \{(2,1), (2,2), (5,1), (5,2)\}$$

$$R \circ S = \{(2,2), (2,5), (5,2), (5,5)\}$$

$$S \circ R = \{(1,1), (1,2), (2,1), (2,2)\}$$

$$R^2 = R \circ R = \{(1,2), (1,5), (2,2), (2,5)\};$$

$$S^2 = S \circ S = \{(2,1), (2,2), (5,1), (5,2)\}.$$

**Misol.** Berilgan  $A = \{\text{lola, shoda, olomon, osmon, olma, boshq}\}$  so'zlaridan iborat to'plam va undagi  $S$  binar munosabat :

« $x S y$ »  $\Leftrightarrow$  « $x$  va  $y$  so'zlarda o harfi bir hil sonada qatnashgan» berilgan.  $\frac{A}{S}$

faktor-to'plamni aniqlang.

**Yechish.** Faktor to'plam - bo'sh bo'lmagan to'plamda aniqlangan ekvivalentlik munosabati yordamida hosil qilingan ekvivalentlik sinflaridan tuzilgan to'plam. Berilgan to'plam 6 ta so'zdan iborat to'plam va undagi har qanday ikkita  $x, y$  so'zlar berilgan binar munosabatda bo'ladi, agar bu so'zlar tarkibida o harfi bir xil sonada qatnashgan bo'lsa.

To'plamda berilgan  $S$  binar munosabat ekvivalentlik munosabati ekanligini isbotlaymiz:

1.  $S$  – refleksivlik munosabati, chunki  $A$  to'plamning har bir so'zini o'zi bilan solishtirsak, ularda o harfi bir hil sonada qatnashgan.

2.  $S$  – simmetriklik munosabati, chunki  $A$  to'plamning har qanday  $x, y$  so'zlari uchun agar  $x$  so'z bilan  $y$  so'zda o harfi bir hil sonada qatnashgan bo'lsa, u holda  $y$  so'z bilan  $x$  so'zlarda ham o harfi bir hil sonada qatnashadi.

3.  $S$  – tranzitivlik munosabati, chunki  $A$  to'plamning har qanday  $x, y, z$  so'zlari uchun agar  $x$  so'z bilan  $y$  so'zda va  $y$  so'z bilan  $z$  so'zda o harfi bir hil

sonda qatnashgan bo'lsa, u holda x so'z bilan z so'zlarda ham o harfi bir hil sonda qatnashadi.

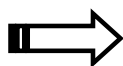
Endi S ekvivalentlik munosabati yordamida ekvivalentlik sinflarini tuzamiz. Buning uchun «lola» so'zi bilan ekvivalentlik munosabatida bo'lgan so'zlarni bir to'plamga yig'amiz:

$$S/lola = \{lola, shoda, olma\}. \text{ Xuddi shunday yo'l bilan qolgan ekvivalentlik}$$

sinflarini tuzamiz:

$$S/osmon = \{osmon, boshq\}, \quad S/olomon = \{olomon\}.$$

$$\text{U holda } A/S = \{S/lola, S/osmon, S/olomon\}.$$



### Misol va mashqlar

1. Quyidagi tengliklarni isbotlang

1.1.  $(A \setminus B) \times C = (A \times C) \setminus (B \times C).$

1.2.  $A \times (B \setminus C) = (A \times B) \setminus (A \times C).$

1.3.  $(A \cup B) \times C = (A \times C) \cup (B \times C).$

1.4.  $A \times (B \cap C) = (A \times B) \cap (A \times C).$

1.5.  $(A \cap B) \times (C \cap D) = (A \times C) \cap (B \times D).$

1.6.  $A \subset B \Rightarrow A \times C \subset B \times C.$

1.7.  $A \cup B \subset C \Rightarrow A \times B = (A \times B) \cap (C \times B).$

1.5.  $(A \times B) \cup (B \times A) = C \times C \Rightarrow A = B = C.$

2. R, S, T – binar munosabatlar uchun quyidagilarni isbotlang:

2.1.  $(R \cap S)^\cup = R^\cup \cap S^\cup.$

2.2.  $(R \cup S)^\cup = R^\cup \cup S^\cup.$

2.3.  $R \circ (S \circ T) = (R \circ S) \circ T.$

2.4.  $(R \circ S)^\cup = S^\cup \circ R^\cup.$



- 2.5.  $(R \cup S) \circ T = R \circ T \cup S \circ T$ .
- 2.6.  $R \circ (S \cup T) = (R \circ S) \cup (R \circ T)$ .
- 2.7.  $(R \cap S) \circ T \subset R \circ T \cap S \circ T$ .
- 2.8.  $R \circ (S \cap T) \subset R \circ S \cap R \circ T$ .
- 2.9.  $\text{Dom}(R^\cup) = \text{Im } R$ .
- 2.10.  $\text{Im}(R^\cup) = \text{Dom } R$ .
- 2.11.  $\text{Dom}(R \circ S) \subset \text{Dom } S$ .
- 2.12.  $\text{Im}(R \circ S) \subset \text{Im } R$ .
- 2.13.  $(R \setminus S)^\cup = R^\cup \setminus S^\cup$ .
- 2.14.  $R, S$  - tranzitiv  $\Rightarrow R \cup S$  - tranzitiv.
- 2.15.  $R, S$  - reflektiv  $\Rightarrow R \cup S, R^\cup, S^\cup$  - reflektiv.
- 2.16.  $R, S$  - simmetrik  $\Rightarrow R \cup S, R^\cup, S^\cup$  - simmetrik.
- 2.17.  $R, S$  - ekvivalent  $\Rightarrow R \cup S, R^\cup, S^\cup$  - ekvivalent.
- 2.18.  $R, S$  - antirefleksiv  $\Rightarrow R \cup S, R^\cup, S^\cup$  - antirefleksiv.
- 2.19.  $R, S$  - antisimmetrik  $\Rightarrow R \cup S, R^\cup, S^\cup$  - antisimmetrik.

3.  $M_3 = \{1, 2, 3\}$  to'plamda nechta turli ekvivalentlik munosabatlari mavjud?

$M_4$  da-chi?

4.  $M = \{1, 2, \dots, 20\}$  to'plamda berilgan quyidagi binar munosabatlarning xossalari tekshiring:

- 4.1.  $R = \{ \langle x, y \rangle \mid x, y \in M \wedge x \leq y + 1 \}$ .
- 4.2.  $R = \{ \langle x, y \rangle \mid x, y \in M \wedge |x| = |y| \}$ .
- 4.3.  $R = \{ \langle x, y \rangle \mid x, y \in M \wedge x \dot{\vdash} y \}$ .
- 4.4.  $R = \{ \langle x, y \rangle \mid x, y \in M \wedge x < y \}$ .
- 4.5.  $R = \{ \langle x, y \rangle \mid x, y \in M \wedge x \leq y \}$ .
- 4.6.  $R = \{ \langle x, y \rangle \mid x, y \in M \wedge x \neq y \}$ .
- 4.7.  $R = \{ \langle x, y \rangle \mid x, y \in M \wedge x^2 + x = y^2 + y \}$ .

4.8.  $R = \{ \langle x, y \rangle \mid x, y \in M \wedge x \dot{\vdash} y \vee x < y \}$ .

4.9.  $R = \{ \langle x, y \rangle \mid x, y \in M \wedge (x - y) \dot{\vdash} 2 \}$ .

4.10.  $R = \{ \langle x, y \rangle \mid x, y \in M \wedge x + y = 12 \}$ .

4.11.  $R = \{ \langle x, y \rangle \mid x, y \in M \wedge x + y \leq 7 \}$ .

4.12.  $R = \{ \langle x, y \rangle \mid x, y \in M \wedge (x > y \wedge x \dot{\vdash} 3) \}$ .

4.13.  $R = \{ \langle x, y \rangle \mid x, y \in M \wedge x + y \geq 10 \}$ .

4.14.  $R = \{ \langle x, y \rangle \mid x, y \in M \wedge x - y = -2 \}$ .

5.  $R = A \times B$ ,  $S = B \times A$  binar munosabatlar uchun  $R \circ S$ ,  $S \circ R$ ,  $R^2$ ,  $S^2$  larni aniqlang:

5.1.  $A = \{1, 3, 5\}$ ,  $B = \{1, 3, 15\}$ ;

5.2.  $A = \{3, 6, 9\}$ ,  $B = \{4, 8, 16\}$ ;

5.3.  $A = B = \{1, 2, 3, 4\}$ ;

5.4.  $A = \{0, 2, 4\}$ ,  $B = \{\alpha, \beta, \gamma\}$ ;

5.5.  $A = \{\square, \diamond\}$ ,  $B = \{\clubsuit, \spadesuit, \heartsuit, \blackspadesuit\}$ ;

5.6.  $A = \{\wedge, \vee, \Rightarrow, \Leftrightarrow\}$ ,  $B = \{\cap, \cup, \in, \subset\}$ .

6. Berilgan  $A$  to'plam va undagi  $S$  binar munosabat yordamida  $A / S$  faktor-to'plamni aniqlang:

6.1.  $A$  - tekislikdagi to'g'ri chiziqlar to'plami,  $S$  - parallellik munosabati.

6.2.  $A$  - tekislikdagi romblar to'plami,  $S$  - o'xshashlik munosabati.

6.3.  $A$  - tekislikdagi to'rtburchaklar to'plami,  $S$  - o'xshashlik munosabati.

6.4.  $A = \{ ax + by + c = 0 \mid a, b, c \in \mathbb{R} \}$ ,  $S$  - parallellik munosabati.

6.5.  $A$  - tekislikdagi muntazam ko'pburchaklar to'plami,  $S$  - o'xshashlik munosabati.

6.6.  $A$  - bir ko'chada joylashgan binolar to'plami,  $S$  - «qavatlar soni teng» munosabati.

6.7.  $A$  - tekislikdagi aylanalar to'plami,  $S$  - «radiuslari teng» munosabati.

- 6.8. A - maktabdagi sinflar to'plami, S - «o'quvchilar soni teng» munosabati.
- 6.9. A - maktabdagi sinflar to'plami, S - «qizlar soni teng» munosabati.
- 6.10. A - sinfdagi o'quvchilar to'plami, S - «ismlari bir hil harfdan boshlanadi» munosabati.
- 6.11. A - sinfdagi o'quvchilar to'plami, S - «ismlarda *a* harfi bir hil marta qatnashgan» munosabati.
- 6.12. A - tekislikdagi kesmalar to'plami, S - parallelizm munosabati.
- 6.13. A - tekislikdagi vektorlar to'plami, S - tenglik munosabati.
- 6.14.  $A = Z$ , S - «p tub songa bo'lgandagi qoldiqlari teng» munosabati

## Takrorlash uchun savollar

1. Tartiblangan juftlik nima?
2. Tartiblangan juftliklar qachon teng bo'ladi?
3. To'plamlarning to'g'ri (Dekart) ko'paytmasi nima?
4. Tartiblangan n lik qanday hosil qilinadi?
5. Binar munosabatga ta'rif bering. Misollar keltiring.
6. Binar munosabatning aniqlanish sohasiga misol keltiring.
7. Binar munosabatning o'zgarish sohasiga ta'rif bering.
8. Binar munosabat inversiyai qanday xosil qilinadi?
9. Binar munosabatlar kompozitsiyasini misol yordamida tushuntiring.
10. Refleksiv binar munosabatni ta'riflang va misol keltiring.
11. Simmetrik binar munosabatni ta'riflang va misol keltiring.
12. Transitiv binar munosabatni ta'riflang va misol keltiring.
13. Ekvivalentlik binar munosabatini ta'riflang va misol keltiring.
14. To'plamni bo'laklash deganda nimani tushunasiz?
15. Faktor-to'plamni tushuntiring.

## 7-§. Akslantirish (funksiya). Tartib munosabati. Graflar

**Asosiy tushunchalar:** Akslantirish (funksiya), akslantirishning aniqlanish sohasi, akslantirish qiymatlar to'plami, akslantirishlar kompozitsiyasi, in'ektiv syur'ektiv, biektiv, teskarilanuvchi akslantirish, tartib munosabati, qisman tartib, qat'iy tartib, chiziqli tartib, tartiblangan to'plam, to'la tartiblangan to'plam, binar munosabat grafi.

$f - A$  to'plamda berilgan binar munosabat bo'lsin. Agar  $\forall x, y, z \in A$  lar uchun  $(x, y) \in f$  va  $(y, z) \in f$  bo'lishidan  $(x, z) \in f$  kelib chiqsa, u holda  $f$  binar munosabat akslantirish (funksiya) deyiladi.

$Dom f = \{x \mid \exists y (x, y) \in f\}$  to'plam funksiyaning aniqlanish sohasi,  $Im f = \{y \mid \exists x (x, y) \in f\}$  to'plam funksiyaning o'zgarish sohasi deyiladi.

$f$  va  $g$  funksiyalar berilgan bo'lsin, u holda  $f \circ g = \{(x, z) \mid \exists t (x, t) \in g \wedge (t, z) \in f\}$  to'plam  $f$  va  $g$  funksiyalarning kompozitsiyasi deyiladi.

Agar  $\forall x_1, x_2 \in A$  va  $x_1 \neq x_2$  elementlar uchun  $f(x_1) \neq f(x_2)$  bo'lsa,  $f: A \rightarrow B$  -in'ektiv,  $Im f = B$  bo'lsa, syur'ektiv akslantirish deyiladi. Agar  $f$  ham syur'ektiv, ham in'ektiv akslantirish bo'lsa, u holda biektiv akslantirish deyiladi.

$f: A \rightarrow B$ ,  $g: B \rightarrow A$  akslantirishlar berilgan bo'lsin, agar  $f \circ g = E_B$  bo'lsa  $f$  akslantirish  $g$  akslantirishga chapdan teskari deyiladi.

$A$  to'plamda berilgan  $R \subset A \times A$  antisimmetrik va tranzitiv munosabat  $A$  to'plamdagi tartib munosabati deyiladi. Tartib munosabati refleksiv munosabat bo'lsa, noqat'iy; antirefleksiv munosabat bo'lsa, qat'iy tartib munosabat deyiladi.

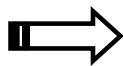
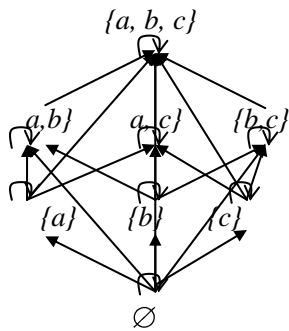
$A$  to'plamda  $R$  - tartib munosabat berilgan bo'lsin. U holda, agar  $\forall a, b \in A$  elementlar uchun  $xRy$  yoki  $x=y$  yoki  $yRx$  munosabatlardan kamida bittasi

albatta bajarilsa, bunday munosabat  $A$  to'plamdagi chiziqli tartib munosabat deyiladi.

Chiziqli bo'lmagan tartib munosabat, qisman tartib munosabat deyiladi.

Tekislikda chekli sondagi nuqtalardan va shu nuqtalarning ba'zilarini tutashtiruvchi chiziqlardan iborat geometrik figura graf deyiladi. Nuqtalar grafning uchlari, chiziqlar esa grafning qirralari deyiladi.

**Misol.**  $A = \{a, b, c\}$  to'plam va  $\mathcal{B}(A)$  -uning barcha to'plamostilari bo'lsin. U holda to'plamosti bo'lish munosabatini quyidagi graf yordamida ifoda qilish mumkin:



### Misol va mashqlar

1. Quyidagi munosabatlardan qaysilari akslantirish bo'ladi?

Akslantirishlarning aniqlanish va qiymatlar sohalarini aniqlang:

1.1.  $R = \{(1,1), (2,1), (3,1)\}$ .

1.2.  $R = \{(1,1), (1,4), (3,2), (4,4)\}$ .

1.3.  $R = \{(n, n+1) | n \in \mathbb{N}\}$ .

1.4.  $R = \{(1, z) | z \in \mathbb{Z}\}$ .

2. Maktab matematikasidan in'ektiv, sur'ektiv, biekktiv, teskari funksiyalarga misollar keltiring.

3.  $R = \{(1,1), (2,1), (3,2), (1,5), (4,4)\}$  binar munosabatni  $M_5$  dagi qisman tartib munosabatgacha to'ldiring.

4.  $M_4$  dagi barcha qisman tartib munosabatlarni graflar yordamida keltiring.

5.  $R, S$ , – binar munosabatlar uchun quyidagilarni isbotlang:

5.1.  $R, S$  - qat'iy tartib  $\Rightarrow R \cup S, S^{\cup}$  – qat'iy tartib.

5.2.  $R, S$  - qisman tartib  $\Rightarrow R \cup S, R^{\cup}$  – qisman tartib.

5.3.  $R, S$  - chiziqli tartib  $\Rightarrow R \cup S$ , – chiziqli tartib.

6.  $M = \{1, 2, \dots, 20\}$  to'plamda berilgan quyidagi binar munosabatlarning xossalarini tekshiring va grafini chizing:

6.1.  $R = \{ \langle x, y \rangle \mid x, y \in M \wedge x^2 = y^2 \}$ .

6.2.  $R = \{ \langle x, y \rangle \mid x, y \in M \wedge x < y \}$ .

6.3.  $R = \{ \langle x, y \rangle \mid x, y \in M \wedge x + y \geq 20 \}$ .

6.4.  $R = \{ \langle x, y \rangle \mid x, y \in M \wedge (x + y) \vdots 5 \}$ .

6.5.  $R = \{ \langle x, y \rangle \mid x, y \in M \wedge (x > y \wedge x \vdots 3) \}$ .

6.6.  $R = \{ \langle x, y \rangle \mid x, y \in M \wedge x - y = 2 \}$ .

6.7.  $R = \{ \langle x, y \rangle \mid x, y \in M \wedge (x - y) \vdots 4 \}$ .

6.8.  $R = \{ \langle x, y \rangle \mid x, y \in M \wedge x - y = 6 \}$ .

## Takrorlash uchun savollar

1. Akslantirishning aniqlanish, qiymatlar sohasiga misol keltiring.
2. Akslantirishlar kompozitsiyasini tushuntiring.
3. Akslantirishlar kompozitsiyasi xossalarini ayting.
4. In'ektiv akslantirishga maktab matematikasidan misol keltiring.
5. Syur'ektiv akslantirishga maktab matematikasidan misol keltiring.
6. Biektiv akslantirish maktabda qanday nomlangan? Misol keltiring.
7. Tartib munosabatga misollar keltiring.
8. Tartib munosabat turlarini maktab matematikasidan olingan misollar yordamida tushuntiring.
9. Tartiblangan to'plamlarga misollar keltiring.
10. Butun sonlar to'plami to'la tartiblangan to'plam bo'ladi-mi?
11. Qanday binar munosabatni graf yordamida ifodalash mumkin?

## III MODUL. ALGEBRA VA ALGEBRAIK SISTEMALAR



### 8-§. Algebra. Faktor-algebra

**Asosiy tushunchalar:** Binar algebraik amal, n-ar algebraik amal, kommutativ binar amal, assosiativ binar amal, neytral element, regulyar element, simmetrik element, kongruensiya, algebra, algebra turi, gomomorfizm, izomorfizm, faktor-algebra, algebraik sistema.

$A^n$  to'plamni  $A$  ga akslantiradigan har qanday akslantirish  $A$  to'plamda berilgan  $n$ -ar yoki  $n$ -o'rinli algebraik amal deyiladi. Bu erda  $n$ -manfiy bo'lmagan butun son bo'lib, algebraik amalning rangi deyiladi.  $A \neq \emptyset$  to'plam va  $A$  da bajariladigan algebraik amallar to'plami  $\Omega$  berilgan bo'lsin  $(A, \Omega)$  - juftlik algebra deyiladi.

a) Agar  $\forall a, b \in A$  uchun  $a * b = b * a$  bo'lsa, u holda  $*$ -amali algebraik amal  $A$  to'plamida kommutativ deyiladi;

b) Agar  $\forall a, b, c \in A$  uchun  $a * (b * c) = (c * b) * c$  shart bajarilsa,  $*$ - $A$  to'plamida assosiativ algebraik amal deyiladi;

c) Agar  $\forall a \in A$  uchun shunday  $e \in A$  topilib,  $e * a = a$  shart bajarilsa,  $e$  element  $*$  amalga nisbatan chap neytral element, agar  $a * e = a$  shart bajarilsa, o'ng neytral element, agar ikkala shart ham bajarilsa neytral element deyiladi.

$a \in A$  element va  $\forall b, c \in A$  elementlar uchun  $a * b = a * c$  tenglikdan  $b = c$  kelib chiqsa, u holda  $a$  element chap regulyar element deyiladi.

$a \in A$  element uchun shunday  $a' \in A$  element topilib,  $a' * a = e$  bo'lsa,  $a'$  element  $a$  elementga chap simmetrik element deyiladi.

$R$   $A$  to'plamdagi ekvivalentlik munosabati bo'lsin. Agar  $a_1, a_2, b_1, b_2 \in A$

$R$  elementlar uchun  $a_1 R b_1$  va  $a_2 R b_2$  shartlardan  $(a_1 * a_2) R (b_1 * b_2)$  kelib chiqsa, u holda  $R$ -ekvivalentlik munosabati kongruensiya deyiladi.

Agar  $(A, \Omega)$  algebra berilgan bo'lsa,  $\Omega$ -to'plamdagi amallarning ranglaridan iborat to'plam algebraning turi deyiladi.

$A \neq \emptyset$  to'plam uchun  $\Omega$ - $A$  dan aniqlangan amallar to'plami  $\Omega$ - $A$  da aniqlangan munosabatlar to'plami bo'lsin. U holda  $(A, \Omega, \Omega')$ - tartiblangan uchlik-algebraik sistema deyiladi.

$(A, \Omega)$ ,  $(B, \Omega')$  algebra berilgan bo'lsin.  $\Omega$  dagi barcha amallarni saqlaydigan  $\varphi: A \rightarrow B$  akslantirish  $(A, \Omega)$  algebraning  $(B, \Omega')$  algebra ga gomomorfizmi deyiladi.

$\varphi: A \rightarrow B$  akslantirish  $(A, \Omega)$  algebraning  $(B, \Omega')$  algebra ga gomomorfizmi bo'lsin. U holda agar  $\varphi$ -in'ektiv akslantirish bo'lsa, monomorfizm,  $\varphi$ -sur'ektiv akslantirish bo'lsa, epimorfizm,  $\varphi$ -bi'ektiv akslantirish bo'lsa izomorfizm deyiladi.

Algebrani o'zini o'ziga gomomorf akslantirish endomorfizm, algebrani o'zini o'ziga izomorf akslantirish esa avtomorfizm deyiladi.

$(A, \Omega_1)$  va  $(A, \Omega_2)$  bir hil tipli algebra berilgan bo'lib,  $B \subset A$  bo'lsin. Agar  $\forall \omega_1 \in \Omega$   $n$ -ar algebraik amalga  $\Omega_2$  dan mos keladigan  $n$ -ar algebraik amalni  $\omega_2$  orqali belgilaymiz. Agar  $\forall b_1, \dots, b_n \in B$  uchun  $\omega_2(b_1, \dots, b_n) = \omega_1(b_1, \dots, b_n)$  tenglik bajarilsa, u holda  $\omega_2$   $n$ -ar algebraik amal  $\omega_1$   $n$ -ar algebraik amalning  $B$  to'plami bo'yicha cheklangani  $(B, \Omega_1)$  algebra esa  $(A, \Omega_2)$  algebraning qism algebra si yoki algebraosti deyiladi.

$(A, \Omega)$  algebra va  $\sim$   $\Omega$  dagi har bir amalga nisbatan kongruensiya bo'lsin.  $\Omega^*$  to'plam esa  $A/\sim$  faktor-to'plamda aniqlangan va  $\Omega$  dagi amallar bilan assosirlangan barcha amallar to'plami bo'lsin. U holda  $(A/\sim, \Omega^*)$ - algebra  $(A, \Omega)$  algebraning  $\sim$ -kongruensiya bo'yicha faktor-algebra si deyiladi.

**Misol.**  $Z$ -butun sonlar to'plami bo'lsin.  $Z$  da  $a \sim b$  deymiz va  $a$  ga  $a-b$  juft son bo'lsa,  $\sim$ -munosabat kongruensiya bo'lishi ravshan. Bu munosabat bo'yicha ekvivalentlik sinflari faqat ikkita bo'lib, ular  $\mathbb{Z}_2$  sinflardan iborat. Bu sinflar



to'plamini  $Z/\sim$  orqali belgilaylik,  $\forall [a],[b] \in Z/\sim$  uchun  $\oplus, \odot$  amallarini  $[a] \oplus [b] = [a+b]$ ,  $[a] \odot [b] = [a \bullet b]$  tengliklar orqali aniqlasak,  $(\{0\}, [1], \oplus, \odot, [0], [1])$  algebra  $(Z+, \bullet, 0, 1)$  algebraning faktor algebra bo'ladi.



## Misol va mashqlar

1. Berilgan munosabatlarning qaysilari  $A$  to'plamda aniqlangan amal bo'lishini tekshiring va uning rangini aniqlang:

- 1.1.  $\circ = \{(a, b, c) \mid a, b, c \in R \wedge a = bc\}, A = R$ .
- 1.2.  $\circ = \{(a, b) \mid a, b \in R_+ \wedge b^3 = a\}, A = R_+$ .
- 1.3.  $\circ = \{(a, b, c) \mid a, b, c \in R \wedge c = a^b\}, A = R$ .
- 1.4.  $\circ = \{(a, b) \mid a, b \in Z \wedge ab = 1\}, A = Z$ .
- 1.5.  $\circ = \{(a, b, c, d) \mid a, b, c, d \in Z \wedge d = [a, b, c]\}, A = Z$ .

2.  $A$  to'plamda  $\circ$  amal quyidagi Keli jadvali yordamida berilgan:

$\circ$	$a$	$b$	$c$	$d$
$a$	$a$	$a$	$a$	$a$
$b$	$b$	$b$	$b$	$b$
$c$	$c$	$c$	$c$	$c$
$d$	$d$	$d$	$d$	$d$

Uning assosiativligini, kommutativ emasligini isbotlang. Neytral element mavjud-mi?

3. Natural sonlar to'plamida har qanday  $n, m$  natural sonlar uchun quyidagi amallar kommutativ, assosiativ ekanligini isbotlang. Bu amallarga nisbatan neytral element mavjud-mi?

- 3.1.  $n * m = l, l = (n, m)$ .
- 3.2.  $n * m = l, l = [n, m]$ .

4. Quyidagi shartlar asosida algebra misol keltiring:

- 4.1. Ikkita binar amal va bitta unar amal aniqlangan.
- 4.2. Ikkita binar amal va ikkita unar amal aniqlangan.

4.3. Uchta binar amal va bitta binar amal aniqlangan.

5.  $R^2$  to'plamda quyidagi amallarning kommutativ, assosiativ, distributiv ekanligini tekshiring:

5.1.  $(a, b) + (c, d) = (a + c, b + d), (a, b) \cdot (c, d) = (ac, ad + bc)$ .

5.2.  $(a, b) + (c, d) = (a + c, b + d), (a, b) \cdot (c, d) = (ac + bd, ad + bc)$ .

6. Quyidagi algebra orasida gomomorfizm o'rnatish va uning turini aniqlang:

6.1.  $\langle \{3^z \mid z \in \mathbb{Z}\}; \cdot, ^{-1}, 1 \rangle \wedge \langle \mathbb{Z}; +, -, 0 \rangle$ .

6.2.  $\langle \mathbb{Z}; +, -, 0 \rangle \wedge \langle 2\mathbb{Z}; +, -, 0 \rangle$ .

6.3.  $\langle \{a + bi \mid a, b \in \mathbb{R} \wedge i^2 = -1\}; +, -, 0 \rangle \wedge \langle \mathbb{R}^2; +, -, 0 \rangle$ .

6.4.  $\langle \mathbb{Z}; +, -, 0 \rangle \wedge \langle \mathbb{Z}_2; +, -, 0 \rangle$ .

6.5.  $\langle \mathbb{Z}; +, > \rangle \wedge \langle \mathbb{Z}^+; + > \rangle$ .

6.6.  $\langle \{2^z \mid z \in \mathbb{Z}\}; \cdot, ^{-1}, 1 \rangle \wedge \langle \{3^z \mid z \in \mathbb{Z}\}; \cdot, ^{-1}, 1 \rangle$ .

6.7.  $\langle 2\mathbb{Z}; +, -, 0 \rangle \wedge \langle 5\mathbb{Z}; +, -, 0 \rangle$ .

6.8.  $\langle \{a + b\sqrt{p} \mid a, b \in \mathbb{Q}\}; +, \cdot \rangle \wedge \langle \{a - b\sqrt{p} \mid a, b \in \mathbb{Q}\}; +, \cdot \rangle$ .

7. Quyidagi berilgan  $A$  to'plam, undagi  $S$  binar munosabat tashkil qilgan  $A/S$  faktor-to'plamni faktor-algebraga to'ldirish mumkin-mi:

7.1.  $A = \{ax + by + c = 0 \mid a, b, c \in \mathbb{R}\}$ ,  $S$  - parallelizm munosabati.

7.2.  $A = \{ax + by = 0 \mid a, b \in \mathbb{R}\}$ ,  $S$  - tenglik munosabati.

7.3.  $A$  - tekislikdagi kesmalar to'plami,  $S$  - parallelizm munosabati.

7.4.  $A$  - tekislikdagi kesmalar to'plami,  $S$  - tenglik munosabati.

7.5.  $A$  - tekislikdagi vektorlar to'plami,  $S$  - parallelizm munosabati.

7.6.  $A$  - tekislikdagi vektorlar to'plami,  $S$  - tenglik munosabati.

7.7.  $A = \mathbb{Z}$ ,  $S$  - « $p$  tub songa bo'lgandagi qoldiqlari teng» munosabati.

8. Algebraosti bo'lish munosabati noqat'iy tartib munosabat bo'lishini isbotlang.

9. Agar  $\varphi: (A, \Omega_1) \rightarrow (B, \Omega_2)$  algebraning  $(B, \Omega_2)$  algebraga izomorfizmi bo'lsa, u holda  $\varphi$  ga teskari bo'lgan  $\varphi^{-1}$  akslantirish  $(B, \Omega_2)$  algebraning  $(A, \Omega_1)$  algebraga izomorfizmi ekanligini isbotlang.

10.  $(G_1, \Omega_1), (G_2, \Omega_2), (G, \Omega)$  bir hil turli algebralar berilgan bo'lib,  $G_1 \cong G_2$ ,  $(G_2, \Omega_2)$  algebra  $(G, \Omega)$  algebraning algebraostisi bo'lsin. U holda  $(G_1, \Omega_1)$  qism algebradan iborat qism algebraga ega bo'lgan  $(G, \Omega)$  algebraga izomorf  $(G_3, \Omega_3)$  algebra mavjudligini isbotlang.

11.  $\varphi: A \rightarrow B$  akslantirish  $(A, \Omega_1)$  algebraning  $(B, \Omega_2)$  algebraga epimorfizmi,  $R = \{(x'x'') \mid \forall x', x'' \in A, \varphi(x') = \varphi(x'')\}$  - esa  $A$  da aniqlangan ekvivalentlik munosabati bo'lsin. U holda  $(A/R, \Omega^*)$  faktor algebra  $(B, \Omega_2)$  algebraga izomorfligini isbotlang.



### Takrorlash uchun savollar

1. Algebra tushunchasiga maktab matematikasidan misollar keltiring.
2. Algebraning turi qanday aniqlanadi?
3. Algebralar gomomorfizmini tushuntiring.
4. Monomorfizm, epimorfizmga misollar keltiring.
5. Izomorfizm, avtomorfizm ta'rifidagi umumiy, farqli shartlarni aniqlang.
6. Gomomorfizmlar kompozitsiyasi yana gomomorfizm ekanligini isbotlang.
7. Biektiv akslantirishlar izomorfizm bo'la oladimi?
8. Algebralar izomorfizmi ekvivalentlik munosabati ekanligini asoslang.
9. Algebraostilar kesishmasi yana algebra bo'lishini isbotlang.
10. Faktor-algebra tushunchasini misol yordamida tushuntiring.
11. Akademik litsey, maktab matematikasidan algebraik sistemaga doir misollar keltiring.



## 9-§. Gruppya. Halqa. Maydon

**Asosiy tushunchalar:** gruppoid, yarimgruppya, monoid, gruppya, gruppalar gomomorfizmi, gruppyaosti, halqa, kommutativ halqa, butunlik sohasi, halqalar gomomorfizmi, qismhalqa.

$A \neq 0$  to'plam va unda aniqlangan  $*$  binar algebraik amal berilgan bo'lsin. U holda  $(A, *)$  juftlik gruppoid deb ataladi.

$(A, *)$ -gruppoidda  $*$ -assosiativ amal bo'lsa, bunday gruppoid yarimgruppya deyiladi.

Neytral elementga ega bo'lgan yarimgruppya monoid deyiladi.

Bizga  $(G, *, 1)$  turli  $(G, *, 1)$  algebra berigan bo'lib quyidagi shartlar bajarilsin.

1.  $*$ -binar algebraik amal assosiativ, ya'ni  $\forall a, b, c \in G$  uchun

$$(a * b) * c = a * (b * c) \text{ bo'lsin.}$$

2.  $G$  da neytral element mavjud, ya'ni  $\forall a \in G$  uchun shunday  $e \in G$  topilib,  $e * a = a$  shart bajarilsin.

3. Har qanday  $a \in G$  uchun  $a * a = e$  bo'lsin.

U holda  $(G, *, 1)$  algebra gruppya deyiladi.

Gruppadagi amal kommutativ, ya'ni  $\forall a, b \in G$  uchun  $a * b = b * a$  shart bajarilsa, bunday gruppya abel' gruppasi deyiladi.

Gurppadagi elementlar soni uning tartibi deyiladi. Agar gruppya tartibi natural sondan iborat bo'lsa, bunday gruppya chekli tartibli gruppya, aks holda cheksiz tartibli gruppya deyiladi.

Gruppadagi binar algebraik amal " $\bullet$ " bo'lsa, bunday gruppami mul'tiplikativ gruppya, "+" bo'lsa additiv gruppya deymiz.

Gruppalar nazariyasida gomomorfizm, izomorfizim, gruppyaosti tushunchalari algebradagi mos tushunchalarning xususiy xollaridir.

Agar  $(K, +, -, \bullet)$   $(2,1,2)$  turli algebra uchun quyidagi shartlar bajarilsa

(1)  $(K, +, -)$  abel' gruppasi;

(2)  $(K, \bullet)$ -yarim gruppasi;

(3)  $\forall a, b, c \in K$  uchun  $a \bullet (b + c) = a \bullet b + a \bullet c$  va  $(b + c) \bullet a = b \bullet a + c \bullet a$  u

holda  $(K, +, -, \bullet)$ - algebra halqa deyiladi.

$(K, +, -)$  additiv gruppasi ning neytral elementi halqaning noli deyiladi va 0 orqali belgilanadi.

Agar ko'paytirish amali assosiativ bo'lsa, halqa assosiativ halqa, ko'paytirish amaliga nisbatan birlik element mavjud bo'lsa, halqa birlik elementli halqa deyiladi.

Nolning bo'luvchilariga ega bo'lmagan assosiativ, kommutativ halqada  $1 \neq 0$  shart bajarilsa, bunday halqa butunlik sohasi deyiladi.

$(K, +, -, \bullet)$  halqa berilgan bo'lsin.  $L$  esa  $K$  ning bo'sh bo'lmagan to'plamostisi bo'lsin. Agar  $L$  to'plam  $K$  dagi  $+, -, \bullet$  amallariga nisbatan algebraik yopiq bo'lsa, ya'ni  $\forall a, b \in L$  uchun  $a + b \in L$ ,  $a \bullet b \in L$ ,  $-a \in L$  shartlar bajarilsa  $(L, +, -, \bullet)$  algebra  $(K, +, -, \bullet)$  halqaning halqaostisi deyiladi.

**Misol.**  $K = \{a + b\sqrt{p} \mid a, b \in R\}$  to'plam maydon tashkil etishini isbotlang.

**Yechish.** Maydon ta'rifiga ko'ra berilgan to'plamda quyidagi shartlar bajarilishini tekshiramiz:

- 1)  $\forall (z_1, z_2 \in K), \exists! (z \in K) (z_1 + z_2 = z)$ ;
- 2)  $\forall (z_1, z_2 \in K) (z_1 + z_2 = z_2 + z_1)$ ;
- 3)  $\forall (z, z_1, z_2 \in K), ((z + z_1) + z_2) = z + (z_1 + z_2)$ ;
- 4)  $\forall (z \in K), \exists! (e \in K) (z + e = z)$ ;
- 5)  $\forall (z \in K), \exists (z' \in K) (z + z' = e)$ ;
- 6)  $\forall (z_1, z_2 \in K), \exists! (z \in K) (z_1 \cdot z_2 = z)$ ;
- 7)  $\forall (z_1, z_2 \in K) (z_1 \cdot z_2 = z_2 \cdot z_1)$ ;
- 8)  $\forall (z, z_1, z_2 \in K), ((z \cdot z_1) \cdot z_2) = z \cdot (z_1 \cdot z_2)$ ;
- 9)  $\forall (z \in K), \exists! (e \in K) (z \cdot e = z)$ ;
- 10)  $\forall (z \in K), \exists (z' \in K) (z \cdot z' = e)$ ;

1. To'plamning ixtiyoriy  $z_1 = a_1 + b_1\sqrt{p}$ ;  $z_2 = a_2 + b_2\sqrt{p}$  elementlari uchun  $z_1 + z_2 = (a_1 + b_1\sqrt{p}) + (a_2 + b_2\sqrt{p}) = (a_1 + a_2) + (b_1 + b_2)\sqrt{p}$  tenglik bilan aniqlanuvchi shu to'plamning  $a + b\sqrt{p} = z$  elementi mavjud. Demak,  $K$  to'plamda qo'shish amali aniqlangan.  $\langle K; + \rangle$  - additiv gruppoid.

2. To'plamning ixtiyoriy  $z_1 = a_1 + b_1\sqrt{p}$ ,  $z_2 = a_2 + b_2\sqrt{p}$  elementlari uchun  $z_1 + z_2 = (a_1 + a_2) + (b_1 + b_2)\sqrt{p} = (a_2 + a_1) + (b_2 + b_1)\sqrt{p} = z_2 + z_1$ . Demak, qo'shish amali kommutativ va  $\langle K; + \rangle$  - additiv abel gruppoid.

3. To'plamning ixtiyoriy  $z = a + b\sqrt{p}$ ,  $z_1 = a_1 + b_1\sqrt{p}$ ,  $z_2 = a_2 + b_2\sqrt{p}$  elementlari uchun  $(z + z_1) + z_2 = ((a + a_1) + (b + b_1)\sqrt{p}) + (a_2 + b_2\sqrt{p}) = ((a + a_1) + a_2) + ((b + b_1) + b_2)\sqrt{p} = a + (a_1 + a_2) + (b + (b_1 + b_2))\sqrt{p} = z + (z_1 + z_2)$ . Demak, qo'shish amali assosiativ va  $\langle K; + \rangle$  - additiv abel yarimgruppa.

4. To'plamning ixtiyoriy  $z = a + b\sqrt{p}$  elementi uchun  $z + e = z$  tenglikni qanoatlantiruvchi elementni aniqlaymiz:  $(a + b\sqrt{p}) + (x + y\sqrt{p}) = a + b\sqrt{p}$  tenglikdan  $(a + x) + (b + y)\sqrt{p} = a + b\sqrt{p}$  tenglikni va undan  $\begin{cases} a + x = a \\ b + y = b \end{cases}$  tenglamalar sistemasini hosil qilamiz. Uning yechimi  $\begin{cases} x = 0 \\ y = 0 \end{cases}$  bo'lib, bundan  $e = 0 + 0\sqrt{p} = 0$  hosil bo'ladi. Demak,  $K$  to'plamda qo'shish amaliga nisbatan neytral element mavjud ekan.  $\langle K; + \rangle$  - additiv abel monoidni tashkil etdi..

5. To'plamning ixtiyoriy  $z = a + b\sqrt{p}$  elementi uchun  $z + z' = e$  tenglikni qanoatlantiruvchi elementni aniqlaymiz:  $(a + b\sqrt{p}) + (x + y\sqrt{p}) = 0 + 0\sqrt{p}$  tenglikdan  $(a + x) + (b + y)\sqrt{p} = 0 + 0\sqrt{p}$  tenglikni va undan  $\begin{cases} a + x = 0 \\ b + y = 0 \end{cases}$  tenglamalar sistemasini hosil qilamiz. Uning yechimi  $\begin{cases} x = -a \\ y = -b \end{cases}$  bo'lib, bundan

$z' = -a + (-b)\sqrt{p} = -(a + b\sqrt{p})$  hosil bo'ladi. Demak,  $K$  to'plamda qo'shish amaliga nisbatan simmetrik element mavjud ekan.  $\langle K; + \rangle$  - additiv abel gruppani tashkil etdi.

6. To'plamning ixtiyoriy  $z_1 = a_1 + b_1\sqrt{p}$ ;  $z_2 = a_2 + b_2\sqrt{p}$  elementlari uchun  $z_1 \cdot z_2 = (a_1 + b_1\sqrt{p}) \cdot (a_2 + b_2\sqrt{p}) = (a_1 \cdot a_2 + pb_1b_2) + (a_1b_2 + b_1a_2)\sqrt{p}$  tenglik bilan aniqlanuvchi shu to'plamning  $a + b\sqrt{p} = z$  elementi mavjud. Demak,  $K$  to'plamda ko'paytirish amali aniqlangan.  $\langle K; \cdot \rangle$  - multiplikativ grupoid.

7. To'plamning ixtiyoriy  $z_1 = a_1 + b_1\sqrt{p}$ ,  $z_2 = a_2 + b_2\sqrt{p}$  elementlari uchun  $z_1 \cdot z_2 = (a_1a_2 + pb_1b_2) + (a_1b_2 + b_1a_2)\sqrt{p} = (a_2a_1 + pb_2b_1) + (a_2b_1 + b_2a_1)\sqrt{p} = z_2 \cdot z_1$ . Demak, ko'paytirish amali kommutativ va  $\langle K; \cdot \rangle$  - multiplikativ abel grupoid.

8. To'plamning ixtiyoriy  $z = a + b\sqrt{p}$ ,  $z_1 = a_1 + b_1\sqrt{p}$ ,  $z_2 = a_2 + b_2\sqrt{p}$  elementlari uchun  $(z \cdot z_1) \cdot z_2 = ((aa_1 + pb_1b_2) + (ab_1 + ba_1)\sqrt{p}) \cdot (a_2 + b_2\sqrt{p}) = ((aa_1)a_2 + p(bb_1)a_2 + p(ab_1)b_2 + p(ba_1)b_2) + ((aa_1)b_2 + p(bb_1)b_2 + (ab_1)a_2 + (ba_1)a_2)\sqrt{p} = (a(a_1a_2) + pb(b_1a_2) + pa(b_1b_2) + pb(a_1b_2)) + (a(a_1b_2) + pb(b_1b_2) + a(b_1a_2) + b(a_1a_2))\sqrt{p} = (a + b\sqrt{p}) \times ((a_1a_2 + pb_1b_2) + (a_1b_2 + b_1a_2)\sqrt{p}) = (a + b\sqrt{p})(a_1 + b_1\sqrt{p}) \cdot (a_2 + b_2\sqrt{p}) = z \cdot (z_1 \cdot z_2)$ . Demak, ko'paytirish amali assosiativ va  $\langle K; \cdot \rangle$  - multiplikativ abel yarimgruppa.

9. To'plamning ixtiyoriy  $z = a + b\sqrt{p}$  elementi uchun  $z \cdot e = z$  tenglikni qanoatlantiruvchi elementni aniqlaymiz:  $(a + b\sqrt{p})(x + y\sqrt{p}) = a + b\sqrt{p}$  tenglikdan  $(ax + pby) + (ay + bx)\sqrt{p} = a + b\sqrt{p}$  tenglikni va undan 
$$\begin{cases} ax + pby = a \\ ay + bx = b \end{cases}$$
 tenglamalar sistemasini hosil qilamiz. Uning yechimi 
$$\begin{cases} x = 1 \\ y = 0 \end{cases}$$
 bo'lib, bundan  $e = 1 + 0\sqrt{p} = 1$  hosil bo'ladi. Demak,  $K$  to'plamda ko'paytirish

amaliga nisbatan neytral element mavjud ekan.  $\langle K; \cdot \rangle$  - multiplikativ abel monoidni tashkil etdi.

10. To'plamning ixtiyoriy noldan farqli  $z = a + b\sqrt{p}$  elementi uchun  $z \cdot z' = e$  tenglikni qanoatlantiruvchi elementni aniqlaymiz:  $(a + b\sqrt{p})(x + y\sqrt{p}) = 1 + 0\sqrt{p}$

tenglikdan  $(ax + pby) + (ay + bx)\sqrt{p} = 1 + 0\sqrt{p}$  tenglikni va undan  $\begin{cases} ax + pby = 1 \\ ay + bx = 0 \end{cases}$

tenglamalar sistemasini hosil qilamiz. Uning yechimi  $\begin{cases} x = \frac{a}{a^2 - pb^2} \\ y = \frac{-b}{a^2 - pb^2} \end{cases}$  bo'lib,

bundan  $z' = \frac{a}{a^2 - pb^2} + \frac{-b}{a^2 - pb^2}\sqrt{p}$  hosil bo'ladi. Demak,  $K$  to'plamda

ko'paytirish amaliga nisbatan simmetrik element mavjud ekan.

$\langle K; \cdot, ^{-1}, 1 \rangle$  - multiplikativ abel gruppani tashkil etdi.

$K$  to'plam qo'shish va ko'paytirish amallariga nisbatan abel grupp shartlariga bo'ysunganligi uchun  $\langle K; +, \cdot, ^{-1}, 0, 1 \rangle$  - maydon bo'ladi.

**Misol.**  $K = \{a + b\sqrt{p} \mid a, b \in R\}$  va  $P = \{a + b\sqrt{q} \mid a, b \in R\}$  to'plamlar tashkil etgan maydonlar orasida izomorfizm o'rnatilgan.

**Yechish.** Algebralar izomorfizmi ta'rifiga ko'ra berilgan  $\langle K; +, \cdot, ^{-1}, 0, 1 \rangle$  maydon elementlarini  $\langle R; +, \cdot, ^{-1}, 0, 1 \rangle$  maydon elementlariga akslantiradigan akslantirish asosiy amallarni saqlashi, in'ektiv va sur'ektiv bo'lishi kerak.

$f: K \rightarrow P$  akslantirishni  $f(a + b\sqrt{p}) = a + b\sqrt{q}$  ko'rinishda olamiz.

$K$  to'plamning ixtiyoriy  $z_1 = a_1 + b_1\sqrt{p}, z_2 = a_2 + b_2\sqrt{p}$  elementlariga  $R$  to'plamning  $t_1 = a_1 + b_1\sqrt{q}, t_2 = a_2 + b_2\sqrt{q}$  elementlari mos keladi. Tanlab olingan akslantirish izomorfizm ekanligini isbotlaymiz:

$$\begin{aligned} 1) \forall z_1, z_2 \in K \text{ uchun } f(z_1 + z_2) &= f((a_1 + b_1\sqrt{p}) + (a_2 + b_2\sqrt{p})) = \\ &= f((a_1 + a_2) + (b_1 + b_2)\sqrt{p}) = (a_1 + a_2) + (b_1 + b_2)\sqrt{q} = (a_1 + b_1\sqrt{q}) + \end{aligned}$$



$+(a_2 + b_2\sqrt{q}) = f(a_1 + b_1\sqrt{p}) + f(a_2 + b_2\sqrt{p})$ . Demak, qo'shish amali akslantirish natijasida saqlanadi.

$$\begin{aligned} 2) \forall z_1, z_2 \in K \text{ uchun } f(z_1 \cdot z_2) &= f((a_1 + b_1\sqrt{p}) \cdot (a_2 + b_2\sqrt{p})) = \\ &= f((a_1a_2 + pb_1b_2) + (a_1b_2 + b_1a_2)\sqrt{p}) = (a_1a_2 + qb_1b_2) + (a_1b_2 + b_1a_2)\sqrt{q} = \\ &= (a_1 + b_1\sqrt{q}) + (a_2 + b_2\sqrt{q}) = f(a_1 + b_1\sqrt{p}) \cdot f(a_2 + b_2\sqrt{p}). \end{aligned}$$

Demak, ko'paytirish amali akslantirish natijasida saqlanadi.

$$\begin{aligned} 3) f(0) = f(z + (-z)) &= f((a + b\sqrt{p}) + (-a - b\sqrt{p})) = \\ f((a - a) + (b - b)\sqrt{p}) &= (a - a) + (b - b)\sqrt{q} = (a + b\sqrt{q}) + \\ &+ (-a - b\sqrt{q}) = f(a + b\sqrt{p}) + (-f(a + b\sqrt{p})) = 0. \end{aligned}$$

Demak, qo'shish amaliga nisbatan neytral element neytral elementga, simmetrik element simmetrik elementga o'tdi.

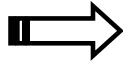
$$\begin{aligned} 4) f(1) = f(z \cdot z^{-1}) &= f((a + b\sqrt{p}) \cdot (\frac{a}{a^2 - pb^2} + \frac{-b}{a^2 - pb^2} \sqrt{p})) = \\ = 1 &= (a + b\sqrt{q}) \cdot (\frac{a}{a^2 - qb^2} + \frac{-b}{a^2 - qb^2} \sqrt{q}) = (a + b\sqrt{q}) \cdot (a + b\sqrt{q})^{-1} = + \end{aligned}$$

$f(z) \cdot f^{-1}(z) = 1$ . Demak, ko'paytirish amaliga nisbatan neytral element neytral elementga, simmetrik element simmetrik elementga o'tdi. Aniqlangan akslantirishning gomomorfizm ekanligini isbotladik.

5)  $\forall z_1, z_2 \in K$  lar uchun  $f(z_1) = f(z_2)$  ekanligidan  $a_1 + b_1\sqrt{q} = a_2 + b_2\sqrt{q}$  kelib chiqadi. Bu shart  $a_1 = a_2, b_1 = b_2$  shartlar bajarilganda to'g'ri. Bundan esa,  $a_1 + b_1\sqrt{p} = a_2 + b_2\sqrt{p}$  ni hosil qilamiz. Demak, bir-biriga teng tasvirlarga bir-biriga teng asllar mos keldi. Tekshirilayotgan akslantirish in'ektiv akslantirish ekan.

6)  $R$  To'plamdan olingan har qanday  $f(z) = a + b\sqrt{q}$  elementga  $a + b\sqrt{p} \in K$  element mos keladi. Demak, akslantirish sur'ektiv ekan.

Tekshirilgan xossalarga ko'ra,  $f : \langle K, +, -, ^{-1}, 0, 1 \rangle \rightarrow \langle P, +, -, ^{-1}, 0, 1 \rangle$  akslantirish izomorfizm.



## Misol va mashqlar

1. Gruppada ixtiyoriy elementga chap teskari element, shu elementga o'ngdan ham teskari bo'lishini isbotlang.

2. Gruppada o'ng birlik element, chap birlik element bo'lishini isbotlang.

3. Gruppaning ixtiyoriy  $a$  va  $b$  elementlari uchun  $ax=b$  va  $ya=b$  tenglamalarning har biri yagona yechimga ega bo'lishini isbotlang.

4. Quyidagi to'plamlarni mul'tiplikativ gruppaga tashkil etishini isbotlang:

4.1.  $G = \{a + b\sqrt{2} \mid a, b \in \mathbb{Q}, a^2 + b^2 > 0\}$ .

4.2.  $G = \{p^z \mid p - \text{ tub son, } z \in \mathbb{Z}\}$ .

5. Quyidagi to'plamlarni additiv gruppaga tashkil etishini isbotlang:

5.1.  $G = \{a + b\sqrt{3} \mid a, b \in \mathbb{Z}\}$

5.2.  $G = \left\{ \frac{a}{7^k} \mid a \in \mathbb{Z}, k \in \mathbb{N} \right\}$

5.3.  $G = \{a - b\sqrt{p} \mid a, b \in \mathbb{Z}; p - \text{ tub son}\}$

6.  $(G, \bullet, ^{-1}), (H, \bullet, ^{-1})$  gruppalar berilgan bo'lsin.  $\varphi: G \rightarrow H$  -akslantirish gomomorf akslantirish bo'lishi uchun  $\forall a, b \in G, \varphi(a \bullet b) = \varphi(a) \bullet \varphi(b)$  bo'lishi etarililigini isbotlang.

7.  $(G, \bullet, ^{-1})$  gruppaga berilgan bo'lsin  $H \neq \emptyset, H \subset G$  to'plamosti gruppaoosti bo'lishi uchun  $\forall a, b \in H$  elementlari uchun  $a \bullet b^{-1} \in H$  bo'lishi zarur va etarli. Isbotlang.

8.  $(K, +, -, \bullet)$  halqaning  $a, b, c$  lar ixtiyoriy elementlari bo'lsin, quyidagi xossalarni isbotlang:

1) agar  $a + b = a$  bo'lsa,  $b = 0$ .

2) agar  $a + b = 0$  bo'lsa,  $a = -b$ .

3)  $-(-a) = a$ .

4)  $0 \bullet a = a \bullet 0 = 0$ .

$$5) (-a)(-b) = a \bullet b.$$

$$6) (a-b) \bullet c = ca - bc.$$

$$7) c(a-b) = ca - cb.$$

9. Quyidagi to'plamlarni halqa tashkil etishini isbotlang:

$$9.1. G = \{a + b\sqrt{2} \mid a, b \in \mathbb{Q}\}.$$

$$9.2. G = \{a - b\sqrt{p} \mid a, b \in \mathbb{Z}; p - \text{ tub son}\}.$$

$$9.3. \langle \mathbb{Z}_{11}; +, \cdot \rangle.$$

10.  $\langle \mathbb{Z}; +, -, \cdot \rangle$  butun sonlar halqasi,  $(K, \oplus, \ominus, \odot)$  -  $K = \{0, e, a, b\}$  to'plamida amallari quyidagi jadvallar orqali berilgan halqa bo'lsin:

$\odot$	0	e	a	b
0	0	0	0	0
e	0	e	a	b
a	0	a	0	a
b	0	b	a	e

$\oplus$	0	e	a	b
0	0	e	0	b
e	e	a	a	a
a	a	b	0	e
b	b	a	a	a

Bu halqalar orasida gomomorfizm o'rnatish.

11. Butunlik sohasi bo'lmagan kommutativ halqaga misol keltiring.

12. Halqaning barcha qismhalqalari kesishmasi yana shu halqaga qismhalqa bo'lishini isbotlang.

13. Jismga tashkil etadigan algebraga misol tuzing.

14. Quyidagi algebra larni maydon tashkil etishini isbotlang:

$$14.1. \langle \{a - b\sqrt{3} \mid a, b \in \mathbb{Q}\}; +, \cdot \rangle.$$

$$14.2. \langle \mathbb{Z}_7; +, \cdot \rangle.$$

15.  $\langle \{a + b\sqrt{p} \mid a, b \in \mathbb{Q}\}; +, \cdot \rangle$  va  $\langle \{a - b\sqrt{p} \mid a, b \in \mathbb{Q}\}; +, \cdot \rangle$  maydonlar orasida izomorfizm o'rnatish.

## Takrorlash uchun savollar

1. Yarimgruppa deb nimaga aytiladi?
2. Monoidga ta'rif bering va misol keltiring.
3. Gruppa ta'rifini keltiring. Uning asosiy xossalari ayting.
4. Additiv, mul'tiplikativ gruppalar algebra, geometriya kursidan misollar keltiring.
5. Gruppalar gomomorfizmining qanday turlarini bilasiz?
6. Har qanday gomomorfizm izomorfizm bo'la oladimi, yoki aksincha?
7. Gruppalar avtomorfizmi nima?
8. Grappaosti tushunchasiga misollar keltiring.
9. Halqaning qanday turlarini bilasiz?
10. Halqalar gomomorfizmi, izomorfizmiga misollar keltiring.
11. Halqalar avtomorfizmi ta'rifini bayon qiling.
12. Halqaostilar kesishmasi yana halqaosti bo'lishini isbotlang.

## IV MODUL. ASOSIY SONLI SISTEMALAR



### 10-§. Natural sonlar sistemasi. Matematik induksiya prinsipi

**Asosiy tushunchalar:** natural sonlar sistemasi aksiomalari, matematik induksiya prinsipi, induksiya qadami, natural sonlar yarimhalqasi, tartib munosabati.

$N$  to'plami unda bajariladigan  $+, \bullet$  binar algebraik amallar,  $N$  to'plamining ajratilgan elementlari 0 va 1 lardan iborat  $(N, \bullet, +, 0, 1)$  algebra uchun quyidagi aksiomalar (shartlar) bajarilsin:

I.  $\forall a, b \in N$  uchun  $a + b \neq 1$ .

II.  $\forall a \in N$  uchun yagona shunday  $a'$  element mavjud bo'lib,  $a + 1 = a'$ .

III.  $\forall a, b \in N$  uchun  $a + 1 = b + 1$  bo'lsa,  $a = b$ .

IV.  $\forall a, b \in N$  uchun  $a + (b + 1) = (a + b) + 1$ .

V.  $\forall a \in N$  uchun  $a \bullet 1 = a$ .

VI.  $\forall a, b \in N$  uchun  $a(b + 1) = ab + a$ .

VII. Induksiya aksiomasi.  $N$  to'plamning ixtiyoriy  $M$  to'plamostisi uchun  $1 \in M$ ;

2)  $\forall a \in M$  uchun  $a + 1 \in M$  bo'lsa,  $M = N$  bo'ladi.

Agar  $(N, \bullet, +, 0, 1)$  algebra uchun yuqorida sanab chiqilgan I-VII shartlar bajarilsa, u holda bu algebra natural sonlar sistemasi deyiladi.

$A(n)$  natural sonlar to'plamida aniqlangan bir o'rinli predikat bo'lib, quyidagi shartlar bajarilsin:

1.  $A(1)$  -rost mulohaza.

2.  $\forall k \in N$  uchun  $A(k)$  rost mulohaza bo'lishidan  $A(k + 1)$  -mulohazaning

rost mulohaza bo'lishi kelib chiqsin. U holda  $\forall n \in N$  uchun  $A(n)$  mulohaza rost mulohaza bo'ladi.

$A(1)$  ni induksiya bazisi,  $A(k)$  ni induksiya farazi deb ataymiz.

$A(k) = 1$  dan  $A(k+1) = 1$  kelib chiqishi induksiya qadami deyiladi.

$\forall a, b \in N$  natural sonlar uchun shunday  $n \in N$  topilib,  $a = b + n$  bo'lsa,  $a$

natural son  $b$  natural sondan katta deymiz va  $a > b$  deb belgilaymiz.

$(A, +, \cdot)$ -algebra uchun quyidagi shartlar bajarilsin:

- 1)  $\forall a, b, c$  uchun  $(a + b) + c = a + (b + c)$
- 2)  $\forall a, b \in A$  uchun  $a + b = b + a$
- 3)  $\forall a, b, x \in A$   $((a + x = b + x) \Rightarrow (a = b)) \wedge ((x + a = x + b) \Rightarrow (a = b))$
- 4)  $\forall a, b, c \in A$   $(a \cdot b) \cdot c = a \cdot (b \cdot c)$
- 5)  $\forall a, b, c \in A \Rightarrow ((a + b) \cdot c = ac + bc) \wedge (c(a + b) = ca + cb)$

U holda  $(A, +, \cdot)$ -algebra yarim halqa deyiladi.

**Misol.**  $\frac{4^n}{n+1} < \frac{(2n)!}{(n!)^2}$ ,  $(n > 1)$  ekanligini isbotlang.

**Isbot.** 1.  $n = 2$  da  $\frac{4^2}{2+1} < \frac{(2 \cdot 2)!}{(2!)^2} \Rightarrow \frac{16}{3} < 6$  kelib chiqadi, ya'ni tengsizlik

o'rinli.

2. Har qanday  $k > 0$  uchun  $\frac{4(k+1)}{k+2} < \frac{(2k+1)(2k+2)}{(k+1)^2}$  ekanligidan

$\frac{4^k}{k+1} \cdot \frac{4(k+1)}{k+2} < \frac{(2k)!}{(k!)^2} \cdot \frac{(2k+1)(2k+2)}{(k+1)^2}$ . Bundan  $\frac{4^{k+1}}{k+2} < \frac{(2k+2)!}{((k+1)!)^2}$  kelib

chiqadi.

Demak, har qanday  $n > 1$  natural son uchun  $\frac{4^n}{n+1} < \frac{(2n)!}{(n!)^2}$ .



## Misol va mashqlar

1. Quyidagi teoremlarni isbotlang:

- 1.1.  $(\forall a, b \in N) \Rightarrow (\exists !c \in N) \wedge (a + b = c)$ .
- 1.2.  $\forall a, b, c \in N \Rightarrow (a + b) + c = a + (b + c)$ .
- 1.3.  $(\forall a \in N) \Rightarrow (a + 1 = 1 + a)$
- 1.4.  $\forall a, b \in N \Rightarrow a + b = b + a$
- 1.5.  $\forall (a, b, c \in N) \wedge (a + c = b + c) \Rightarrow (a = b)$
- 1.6.  $(\forall a, b \in N) \Rightarrow \exists !p(a = b = p)$
- 1.7.  $(\forall a, b, c \in N) \Rightarrow ((a + b) \bullet c = a \bullet c + b \bullet c)$
- 1.8.  $(\forall a \in N) \Rightarrow (a \bullet 1 = 1 \bullet a)$
- 1.9.  $(\forall a, b \in N) \Rightarrow (a \bullet b = b \bullet a)$
- 1.10.  $(\forall a, b, c \in N) \Rightarrow c(a + b) = ca + cb$
- 1.11.  $(\forall a, b, c \in N) \Rightarrow (a \bullet b)c = a(b \bullet c)$
- 1.12.  $(\forall a \in N) \wedge (a \neq 1) \Rightarrow (\exists n \in N) \wedge (a = 1 + n)$
- 1.13.  $(\forall a, b \in N) \Rightarrow a \neq a + b$ .

2.  $\forall a, b \in N$  uchun quyidagi tengsizliklardan faqat biri o'rinli ekanligini

isbotlang:

1)  $a = b$  2)  $\exists n \in N \quad b = a + n$  3)  $\exists l \in N \quad a = b + l$ .

3. Natural sonlar to'plamidagi tengsizlik munosabatining quyidagi

xossalari isbotlang:

- 1°.  $(\forall a, b \in N) \wedge (a \neq b) \Rightarrow (a > b) \vee (b > a)$ .
- 2°.  $(\forall a \in N) \text{ uchun } (\overline{a > a})$ .
- 3°.  $\forall a, b \in N \quad a > b \Rightarrow (\overline{b > a})$ .
- 4°.  $\forall a, b, c \in N \text{ uchun } (a > b) \wedge (b > c) \Rightarrow (a > c)$ .
- 5°.  $\forall a, b, c \in N \text{ uchun } ((a > b) \Rightarrow (a + c) > (b + c))$ .
- 6°.  $\forall a, b \in N \text{ uchun } a + b > a$ .
- 7°.  $\forall a, b, c \in N \text{ uchun } (a > b) \Rightarrow ac > bc$ .

4. Tekislikda berilgan bir nuqtadan o'tuvchi  $n$  ta turli to'g'ri chiziqlar tekislikni  $2n$  bo'lakka bo'lishini isbotlang.

5.  $\{x_n\}$  ketma-ketlik uchun  $x_1 = 1, x_{n+1} = x_n - \frac{1}{n(n+1)}$  berilgan bo'lsa,  $x_n$  ni ifodalang.

6. Quyidagi tasdiqlarni isbotlang:

6.1.  $(4^n + 15n - 1) \div 9$ .

6.2.  $(10^n + 18n - 1) \div 27$

6.3.  $(3^{2n+3} + 40n - 27) \div 64$ .

6.4.  $(6^{2n} + 3^{n+2} + 3^n) \div 11$ .

6.5.  $(5^n + 2 \cdot 3^{n-1} + 1) \div 8$

6.6.  $(11^{n+2} + 12^{2n+1}) \div 133$ .

6.7.  $(9^{n+1} - 8n - 9) \div 16$ .

6.8.  $(3^{6n} - 2^{6n}) \div 35$ .

7. Quyidagi tengliklarni isbotlang:

7.1.  $1^3 + 2^3 + \dots + n^3 = \frac{n^2(n+1)^2}{4}$ .

7.2.  $1 \cdot 1! + 2 \cdot 2! + \dots + n \cdot n! = (n+1)! - 1$ .

7.3.  $(1 - \frac{4}{1})(1 - \frac{4}{9})(1 - \frac{4}{25}) \dots (1 - \frac{4}{(2n-1)^2}) = -\frac{2n+1}{2n-2}$ .

7.4.  $\frac{1}{1 \cdot 4} + \frac{1}{4 \cdot 7} + \dots + \frac{1}{(3n-2)(3n+1)} = \frac{n}{3n+1}$ .

7.5.  $1 - 2^2 + 3^2 - 4^2 + \dots + (-1)^{n-1} n^2 = (-1)^{n-1} \frac{n(n+1)}{2}$ .

7.6.  $\frac{1^2}{1 \cdot 3} + \frac{2^2}{3 \cdot 5} + \dots + \frac{n^2}{(2n-1)(2n+1)} = \frac{n(n+1)}{2(2n+1)}$ .

7.7.  $(x_1 + \dots + x_n)^2 = x_1^2 + \dots + x_n^2 + 2(x_1 x_2 + \dots + x_{n-1} x_n)$ .

7.8.  $1 + x + x^2 + \dots + x^n = \frac{x^{n+1} - 1}{x - 1} \quad (x \neq 1)$ .



$$7.9. \frac{1}{2!} + \frac{2}{3!} + \dots + \frac{n}{(n+1)!} = 1 - \frac{1}{(n+1)!}.$$

$$7.10. \frac{1}{a \cdot (a+1)} + \frac{1}{(a+1)(a+2)} + \dots + \frac{1}{(a+n-1)(a+n)} = \frac{n}{a(a+n)}.$$

8. Quyidagi tengsizliklarni isbotlang:

$$8.1. \frac{1}{n+2} + \frac{1}{n+3} + \dots + \frac{1}{2n+2} > \frac{13}{24}.$$

$$8.2. \frac{1}{n+1} + \frac{1}{n+2} + \dots + \frac{1}{3n+1} > 1.$$

$$8.3. \frac{1}{2} \cdot \frac{3}{4} \cdot \frac{5}{6} \cdot \dots \cdot \frac{2n-1}{2n} \leq \frac{1}{\sqrt{3n+1}}.$$

$$8.4. |x_1 + x_2 + \dots + x_n| \leq |x_1| + |x_2| + \dots + |x_n|.$$

$$8.5. \frac{1}{1!} + \frac{1}{2!} + \frac{1}{3!} + \dots + \frac{1}{n!} < 2.$$

9. Agar  $n \geq 2, a > -1$  bo'lsa,  $n$  natural son uchun  $(1+a)^n \geq 1+na$  o'rinli ekanligini isbotlang.

10. Har qanday  $n$  natural son uchun  $\frac{n^3}{6} + \frac{n^2}{2} + \frac{n}{3}$  natural son bo'lishini isbotlang.



### Takrorlash uchun savollar

1. Natural sonlar sistemasi deb nimaga aytiladi?
2. Matematik induksiya metodini ifodalovchi teoremani ayting.
3. Induksiya bazisi, induksiya farazi, induksiya qadami nima?
4. Natural sonlarni qo'shishning qanday xossalarini bilasiz?
5. Natural sonlarni ko'paytirishning xossalarini ayting.
6. Natural sonlar to'plamida tartib munosabatini aniqlang.
7. Natural sonlar to'plamidagi tengsizlik munosabatining xossalarini bayon qiling.
8. Natural sonlar to'plami kommutativ yarimhalqa bo'lishini isbotlang.



## 11-§. Butun sonlar halqasi. Ratsional sonlar maydoni. Haqiqiy sonlar sistemasi

**Asosiy tushunchalar:** butun sonlar halqasi, bo'linish munosabati, maydon, rasional sonlar maydoni, haqiqiy sonlar sistemasi.

$\forall z \in \mathbb{Z}$  element ikkita natural son ayirmasi ko'rnishida ifoda qilinadi.  $(\mathbb{Z}, +, \bullet)$  halqani, butun sonlar halqasi deb ataymiz.

Agar  $a, b, b \neq 0$  butun sonlar uchun shunday  $q$  butun son topilib  $a = bq$  tenglik o'rinli bo'lsa,  $a$  butun son  $b$  butun songa bo'linadi yoki  $b$  butun son  $a$  butun sonni bo'ladi deyiladi va mos ravishda  $a:b$  yoki  $b \setminus a$  ko'rinishda belgilanadi.

$\forall a, b \in \mathbb{Z}$  sonlar uchun  $a:b$  va  $b:a$  shartlar bajarilsa  $a$  va  $b$  sonlar assosiirlangan deyiladi.

Assosiativ, kommutativ, birlik elementga ega, noldan farqli har bir element teskarilantuvchi bo'lgan va  $1 \neq 0$  shart bajariladigan halqa maydon deyiladi.

Maydonning noldan farqli har qanday elementi teskarilantuvchi bo'lgan halqaosti maydonosti deyiladi.

$K$ -butunlik sohasi  $P$ -maydonning halqaostisi bo'lsin.  $P$ -maydonning ixtiyoriy  $p$  elementi uchun  $R$ -butunlik sohasining  $m, n$  elementlari topilib,  $P = mn^{-1}$  tenglik o'rinli bo'lsa,  $P$ -maydon  $K$ -butunlik sohasining nisbatlar maydoni deyiladi. Butun sonlar xalqasining nisbatlar maydoni rasional sonlar maydoni deyiladi.

Tartiblangan maydonning ixtiyoriy musbat  $a, b$  elementlari uchun shunday  $n$ - natural son mavjud bo'lib  $n \cdot a > b$  shart bajarilsa, bu maydon Arximedcha tartiblangan maydon deyiladi.

$F$  tartiblangan maydondagi har qanday fundamental ketma-ketlik shu maydonda yaqinlashuvchi bo'lsa, bunday maydon to'liq deyiladi.

Arximedcha tartiblangan rasional sonlar sistemasini o'z ichiga olgan eng kichik to'liq maydon haqiqiy sonlar sistemasi deyiladi.



## Misol va mashqlar

1. 5 ga bo'linuvchi butun sonlar to'plami halqa tashkil etishini isbotlang.

2.  $Z_6$  to'plam halqa tashkil etishini isbotlang.

3.  $Q^2$  to'plam  $(a, b) + (c, d) = (a + c, b + d)$ ,

4.  $(a, b) \cdot (c, d) = (ac + 2bd, ad + bc)$  amallarga nisbatan maydon tashkil etishini isbotlang.

5. Butun sonlar halqasidagi bo'linish munosabatining quyidagi xossalarini isbotlang:

1°.  $\forall a \in Z, a \neq 0$  uchun  $a : a$

2°.  $\forall a \in Z, a \neq 0$  uchun  $0 : a$

3°.  $\forall a \in Z, a : 0$  va  $a : (-1)$

4°.  $:$  munosabati tranzitiv munosabatdir, ya'ni  $\forall a, b, c \in Z$ , uchun  $a : b$  va  $b : c$  bo'lsa  $a : c$

5°.  $\forall a, b, c \in Z$  uchun  $a : c$  bo'lsa  $a \cdot b : c$

6°.  $\forall a, b, c \in Z$  uchun  $a : c$  va  $b : c$  bo'lsa  $(a + b) : c$

7°.  $\forall a, b, c \in Z$  va  $c \neq 0$  uchun  $bc : ac$  bo'lsa,  $b : a$

8°.  $\forall a, b, c \in Z$  uchun  $a : c$  va  $b : d$  bo'lsa  $(a \cdot b) : (c \cdot d)$

9°.  $\forall a, b, c \in Z$  va  $a : b$  bo'lsa  $a \cdot c : b \cdot c$

10°.  $\forall a, b, c, m, n \in Z$  uchun  $a : c$  va  $b : c$  bo'lsa  $(ma + nb) : c$

6.  $(P, +, -, \cdot, 1)$  maydonning ixtiyoriy  $a, b, c$  elementlari uchun quyidagi munosabatlar o'rinli ekanligini isbotlang:

1°.  $0 \cdot a = a \cdot 0 = 0$

2°. Agar  $ab = 1$  bo'lsa, u holda  $b = a^{-1}$

3°.  $c \neq 0$  bo'lib,  $ac = bc$  bo'lsa,  $a = b$

4°.  $ab = 0$  bo'lsa,  $a = 0$  yoki  $b = 0$

5°.  $a \neq 0$  va  $b \neq 0$  bo'lsa,  $ab \neq a$

6°.  $\frac{a}{b} = \frac{c}{d}$  bo'lsa,  $ad = bc$

7°.  $\frac{a}{b} + \frac{c}{b} = \frac{ad + bc}{bd}$

8°.  $\frac{a}{b} \cdot \frac{c}{d} = \frac{ac}{bd}$

9°.  $\frac{-a}{b} = \frac{a}{-b} = -\frac{a}{b}$

10°. Noldan farqli  $a, b$  elementlar uchun  $\left(\frac{a}{b}\right)^{-1} = \frac{b}{a}$

11°.  $c \neq 0$  element uchun  $\frac{a}{b} = \frac{ac}{bc} = \frac{ac^{-1}}{bc^{-1}}$

7.  $(F, +, -, \cdot, 1, <)$  tartiblangan maydon uchun quyidagi hossalarni isbotlang:

1°.  $\forall a, b \in F$  uchun  $a < b$  bo'lishi uchun  $b - a > 0$  bo'lishi zarur va etarli;

2°.  $\forall a \in F$  uchun  $a < 0, 0 < a \cdot 0 = a$  shartlardan bir vaqtda faqat biri o'rinli;

3°. agar  $a \geq 0$  va  $b \geq 0$  bo'lsa, u holda  $ab \geq 0$  va  $a + b \geq 0$  bo'ladi;

4°.  $a \leq b$  va  $c \leq d$  bo'lsa,  $a + c \leq b + d$ ;

5°. Agar  $a < b$  va  $c < 0$  bo'lsa  $ac > bc$ .

6°.  $\forall a \in F$  element uchun  $a^2 \geq 0$ . Xususan  $a \neq 0$  bo'lsa,  $a^2 > 0$ ;

7°.  $\forall n \in N$  uchun  $n \cdot 1 > 0$  xususan  $1 > 0$ ;

8°. Tartiblangan maydon butunlik sohasidir.

8.  $(F, +, -, \cdot, 1, <)$  tartiblangan maydonning  $\forall a, b$  elementlari uchun quyidagi

munosabatlarni isbotlang:

1°.  $|a| = |-a|$ .

2°.  $|a| \geq a$  va  $|a| \geq -a$ ;

3°.  $|a + b| \leq |a| + |b|$ .

4°.  $|a \cdot b| = |a| \cdot |b|$

5°.  $|b| > 0$

6°.  $\forall a \in F, a^2 \geq 0$  element uchun  $|b| < a$  bo'lishi uchun  $-a < b < a$  bo'lishi zarur va etarli.

7°.  $\forall a, b, c, F, a > 0$  elementlar uchun  $|b| > a$  bo'lishi uchun  $b > a$  yoki  $b < -a$  bo'lishi zarur va etarli.

9. Har qanday  $a + b\sqrt{7} (a, b \in \mathbb{Q})$  ko'rinishdagi haqiqiy son uchun aniqlangan  $f(a + b\sqrt{7}) = a - b\sqrt{7}$  akslantirish haqiqiy sonlar maydonining avtomorfizmi bo'lishini isbotlang.



### Takrorlash uchun savollar

1. Natural sonlar yarimhalqasini qamrab olgan eng kichik kommutativ halqani quring.
2. Butun sonlar to'plami halqa tashkil etishini isbotlang.
3. Butun sonlar halqasida tartib munosabatini aniqlang.
4. Butun sonlar halqasida bo'linish munosabatining xossalarini ayting.
5. Maydon tushunchasiga ta'rif bering.
6. Maydonning sodda xossalarini ayting.
7. Maydonlar izomorfizmiga misol keltiring.
8. Rasional sonlar maydonida tartib munosabatini aniqlang.



## 12-§. Kompleks sonlar maydoni

**Asosiy tushunchalar:** kompleks son, kompleks sonlar maydoni, sonli maydon, o'zaro qo'shma kompleks sonlar, kompleks son moduli, kompleks tekislik, mavhum o'q, kompleks son argumenti, kompleks sonning trigonometrik shakli, Muavr formulalari, n- darajali ildizlar.

$C = \{a+bi/a, b \in \mathbb{R}\}$  - to'plamni qaraylik.  $C$ -da  
 $(a+bi) + (c+di) = (a+c) + (b+d)i$ ;  $(a+bi) \cdot (c+di) = (ac-bd) + (ad+bc)i$ ;  
 $-(a+bi) = (-a) + (-b)i$  tengliklar orqali qo'shish, ko'paytirish, qarama-qarshisini olish amallarini aniqlaymiz. Ixtiyoriy  $a+bi \neq 0$  element uchun teskari element  $(a+bi)^{-1} = \frac{a}{a^2+b^2} - \frac{b}{a^2+b^2}i$  formula bilan aniqlanadi.

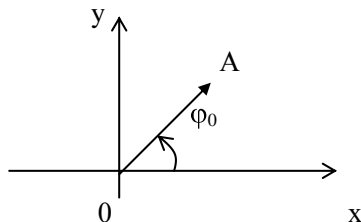
Kompleks sonlar maydonining har qanday maydonostisi sonli maydon deyiladi.

$Z = a+bi$  kompleks son uchun  $Z = a-bi$  - qo'shma kompleks son deyiladi.

$|Z| = \sqrt{a^2+b^2}$  son  $a+bi (a, b \in \mathbb{R})$  kompleks sonining moduli deyiladi.

Har bir  $a+bi$  kompleks songa tekislikda  $(a, b)$  nuqtani mos qo'ysak, bu nuqta kompleks sonning geometrik tasviri deyiladi. Bu nuqtani koordinatalar boshi bilan tutashtirsak, boshi koordinatalar boshida, uchi esa  $(a, b)$  koordinatali nuqtada bo'lgan  $\overline{OA}$  vektor hosil bo'ladi. Bu vektorning uzunligi esa  $a+bi$  kompleks sonning moduliga tengligi ayon.

Har bir  $bi$  kompleks songa  $Oy$  o'qida  $(0, b)$  nuqta mos keladi. Bu o'qni mavxum o'q deb ataymiz.  $Ox$  o'qni xaqiqiy o'q deymiz.



OA vektorning  $Ox$  o'qini musbat yo'nalishi soat strelkasi qarama-qarshi yo'nalishida hosil qilgan  $\varphi_0$  burchagi  $a+bi$  kompleks sonning boshlang'ich argumenti deyiladi.

$a+bi$  kompleks son berilgan bo'lib,  $r$  uning moduli  $\varphi$  esa argumenti bo'lsin, u holda  $b = r \sin \varphi$ ,  $a = r \cos \varphi$  tengliklarni ko'rsatish qiyin emas. Demak,  $a+bi = r(\cos \varphi + i \sin \varphi)$  tenglik o'rni. Bu esa kompleks sonning trigonometrik ko'rinishi deyiladi.

$Z_1 = r_1(\cos \varphi_1 + i \sin \varphi_1)$ ,  $z_2 = r_2(\cos \varphi_2 + i \sin \varphi_2)$  kompleks sonlar berilgan bo'lsin. U holda quyidagilar o'rinni:

$$1^\circ z_1 \cdot z_2 = r_1 \cdot r_2 (\cos(\varphi_1 + \varphi_2) + i \sin(\varphi_1 + \varphi_2))$$

$$2^\circ \frac{z_1}{z_2} = \frac{r_1}{r_2} (\cos(\varphi_1 - \varphi_2) + i \sin(\varphi_1 - \varphi_2))$$

$z^n = (r(\cos \varphi + i \sin \varphi))^n = r^n (\cos n\varphi + i \sin n\varphi)$  bu formula Muavr formulasi deyiladi.

$z = r(\cos \varphi + i \sin \varphi)$  kompleks son berilgan bo'lsin. Bundan  $r$  - kompleks sonning moduli  $\varphi = \varphi_0 + 2k\pi$  kompleks sonning argumenti,  $\varphi_0$  - boshlang'ich argumenti bo'lsin. U holda  $z$  - kompleks son  $n$  ta xar hil  $n$ - darajali kompleks ildizlarga ega bo'ladi va bu ildizlar quyidagi formula yordamida topiladi:

$$U_k = \sqrt[n]{r} \left( \cos \frac{\varphi_0 + 2k\pi}{n} + i \sin \frac{\varphi_0 + 2k\pi}{n} \right), \quad k = 1, \dots, n-1$$

**Misol.**  $|z + 2| = 3$  tenglamani eching.

**Yechish.** Kompleks sonning moduli, kompleks sonlarning tengligi ta'riflaridan quyidagi ifodani hosil qilamiz:

$$|z + 2| = |x + yi + 2| = |(x + 2) + yi| = \sqrt{(x + 2)^2 + y^2} \text{ va}$$

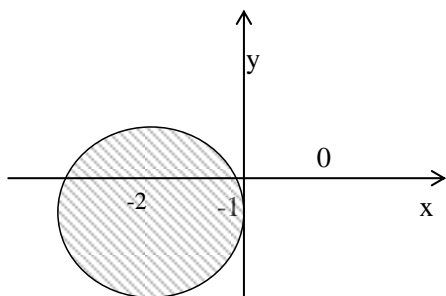
$$\sqrt{(x + 2)^2 + y^2} = 3. \text{ Bundan } (x + 2)^2 + y^2 = 9 \text{ tenglamani hosil qilamiz.}$$

Xosil bo'lgan tenglamaning yechimlari tekislikdagi markazi  $(-2; 0)$  nuqtada radiusi 3 ga teng aylananing nuqtalaridan iborat.

**Misol.**  $|z + 2 + i| \leq 3$  tengsizliklarni eching va yechimlar to'plamini Dekart koordinatalar tekisligida ifodalang.

**Yechish.**  $|z + 2 + i| \leq 2$  tengsizlikka kompleks sonning moduli ta'rifini qo'llasak,  $|z + 2 + i| = |x + yi + 2 + i| = |(x + 2) + (y + 1)i| = \sqrt{(x + 2)^2 + (y + 1)^2}$  ni hosil qilamiz. Bundan  $(x + 2)^2 + (y + 1)^2 \leq 4$  tengsizlikni hosil qilamiz. Bu

tengsizlikning yechimlari markazi  $(-2; -1)$  nuqtada, radiusi 2 ga teng doiradan iborat. Doirani Dekart koordinatalar tekisligida chizamiz:



**Misol.**  $\sqrt{3 + 4i}$  ni hisoblang.

**Yechish.** Kompleks sondan kvadrat ildiz chiqarish formulalari

$$1) \sqrt{a+bi} = \pm \left( \sqrt{\frac{a + \sqrt{a^2 + b^2}}{2}} + i \sqrt{\frac{-a + \sqrt{a^2 + b^2}}{2}} \right) \text{ va}$$

$$2) \sqrt{a+bi} = \pm \left( \sqrt{\frac{a + \sqrt{a^2 + b^2}}{2}} - i \sqrt{\frac{-a + \sqrt{a^2 + b^2}}{2}} \right) \text{ lardan foydalanamiz. Berilgan}$$

misolda  $b > 0$  bo'lganligi uchun birinchi formulani qo'llaymiz:

$$\sqrt{3+4i} = \pm \left( \sqrt{\frac{3 + \sqrt{3^2 + 4^2}}{2}} + i \sqrt{\frac{-3 + \sqrt{3^2 + 4^2}}{2}} \right) = \pm \left( \sqrt{\frac{3+5}{2}} + i \sqrt{\frac{-3+5}{2}} \right) = \pm (2 + 2i) = \pm 2(1 + i).$$

**Misol.**  $\sqrt[3]{2 + 3i}$  ildizlarni hisoblang.

**Yechish.** Ixtiyoriy kompleks sondan  $n$  - darajali ildizlarni topish formulasi

$$u_k = |c|^{\frac{1}{n}} \left( \cos \frac{\varphi + 2\pi k}{n} + i \sin \frac{\varphi + 2\pi k}{n} \right), k = 0, \dots, n-1 \quad (1) \text{ dan foydalanamiz. Buning}$$

uchun avval berilgan  $z = 2 + 3i$  kompleks sonni trigonometrik ko'rinishga



keltiramiz: kompleks sonning moduli -  $|z| = \sqrt{a^2 + b^2} = \sqrt{2^2 + 3^2} = \sqrt{13}$ ; argumenti

$\varphi = \operatorname{arctg} \frac{b}{a} = \operatorname{arctg} \frac{3}{2}$  dan iborat. U holda

$z = 2 + 3i = \sqrt{13}(\cos(\operatorname{arctg} \frac{3}{2}) + i \sin(\operatorname{arctg} \frac{3}{2}))$ . Topilgan modul va argumentni (1)

formulaga qo'yamiz:  $u_k = \sqrt[6]{13}^{\frac{1}{3}} (\cos \frac{\operatorname{arctg} \frac{3}{2} + 2\pi k}{3} + i \sin \frac{\operatorname{arctg} \frac{3}{2} + 2\pi k}{3})$ ,  $k = 0, 1, 2$ .

$$\text{Bundan } u_0 = \sqrt[6]{13} (\cos \frac{\operatorname{arctg} \frac{3}{2}}{3} + i \sin \frac{\operatorname{arctg} \frac{3}{2}}{3}),$$

$$u_1 = \sqrt[6]{13} (\cos \frac{\operatorname{arctg} \frac{3}{2} + 2\pi}{3} + i \sin \frac{\operatorname{arctg} \frac{3}{2} + 2\pi}{3}),$$

$$u_2 = \sqrt[6]{13} (\cos \frac{\operatorname{arctg} \frac{3}{2} + 4\pi}{3} + i \sin \frac{\operatorname{arctg} \frac{3}{2} + 4\pi}{3}) \text{ ildizlarni hosil qilamiz.}$$

**Misol.**  $\sin x + \sin 2x + \dots + \sin nx = \frac{\sin \frac{n+1}{2}}{\sin \frac{x}{2}} \sin \frac{nx}{2}$  tenglikni isbotlang.

**Isbot.** 1.  $n = 1$  bo'lsin. U holda  $\sin x = \frac{\sin \frac{1+1}{2}}{\sin \frac{x}{2}} \sin \frac{x}{2} \Rightarrow \sin x = \sin x$ . Tenglik

o'rinli.

2.  $n = k$  uchun  $\sin x + \sin 2x + \dots + \sin kx = \frac{\sin \frac{k+1}{2}}{\sin \frac{x}{2}} \sin \frac{kx}{2}$  bo'lsin.

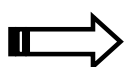
U holda  $n = k + 1$  da  $\sin x + \sin 2x + \dots + \sin kx + \sin(k+1)x =$

$$= \frac{\sin \frac{k+1}{2}}{\sin \frac{x}{2}} \sin \frac{kx}{2} + \sin(k+1)x = \frac{\sin \frac{k+1}{2}}{\sin \frac{x}{2}} \sin \frac{kx}{2} + 2 \sin \frac{k+1}{2} x \cos \frac{k+1}{2} x =$$

$$= (2 \cos \frac{k+1}{2} x \sin \frac{x}{2} = \sin \frac{k+2}{2} x - \sin \frac{kx}{2}) = \frac{\sin \frac{k+2}{2} x}{\sin \frac{x}{2}} \sin \frac{k+1}{2} x.$$

Demak, har qanday  $n \in N$  uchun  $\sin x + \sin 2x + \dots + \sin nx = \frac{\sin \frac{n+1}{2} x}{\sin \frac{x}{2}} \sin \frac{nx}{2}$

tenglik o'rinli.



### Misol va mashqlar

1. Berilgan kompleks sonlarning haqiqiy va mavhum qismlarini toping:

1.1.  $\frac{(1+i)(2+i)}{2-i} - \frac{(1-i)(2-i)}{2+i}$ .

1.2.  $\left( \frac{i^7 + 2}{1 + i^{11}} \right)^2$ .

1.3.  $\left( \frac{1-i}{1+i} \right)^{2007}$ .

1.4.  $\frac{(1+2i)^3 - (1+3i)^2}{(3-i)^3 + (1+5i)^2}$ .

2. Ixtiyoriy  $z_1, z_2$  - kompleks sonlar uchun quyidagi hossalari o'rinli ekanligini isbotlang:

1<sup>o</sup>.  $\overline{z_1 + z_2} = \overline{z_1} + \overline{z_2}$ .

2<sup>o</sup>.  $\overline{(-z_1)} = -\overline{z_1}$ .

3<sup>o</sup>.  $\overline{z_1 \cdot z_2} = \overline{z_1} \cdot \overline{z_2}$ .

4<sup>o</sup>.  $\overline{(\overline{z})} = z$ .

5<sup>o</sup>.  $z_2 \neq 0, \overline{\left( \frac{z_1}{z_2} \right)} = \frac{\overline{z_1}}{\overline{z_2}}$ .

6<sup>o</sup>.  $z = \bar{z}$  bo'lishi uchun  $z \in \mathbf{R}$  bo'lishi zarur va etarli.

7<sup>o</sup>. Agar  $z = a + bi$  bo'lsa, u xolda  $z \cdot \bar{z} = a^2 + b^2$

3. Ixtiyoriy  $z_1, z_2$  - kompleks sonlar uchun quyidagi hossalarni o'rinli ekanligini isbotlang:

1<sup>o</sup>.  $|z|^2 = z \cdot \bar{z}$ .

2<sup>o</sup>.  $|z| = 0$  faqat va faqat shu xoldaki, agar  $z = 0$  bo'lsa.

3<sup>o</sup>.  $|z_1 \cdot z_2| = |z_1| \cdot |z_2|$ .

4<sup>o</sup>.  $|z^{-1}| = |z|^{-1}$  ( $z \neq 0$ ).

5<sup>o</sup>.  $|z_1 + z_2| \leq |z_1| + |z_2|$ .

6<sup>o</sup>.  $||z_1| - |z_2|| \leq |z_1 + z_2|$ .

7<sup>o</sup>.  $||z_1| - |z_2|| \leq |z_1 - z_2|$ .

4. Tenglamani eching:

4.1.  $\bar{z} = 5 - z$ .

4.2.  $\bar{z} = -3z - 1 + 2i$

4.3.  $z^2 + \bar{z} = 1$

4.4.  $z^2 - 2z\bar{z} - 3 = 3i$ .

4.5.  $z^2 + 5z + 5 - 3i = 0$ .

4.6.  $z^2(1+i) - z + 1 + 2i = 0$ .

4.7.  $z^2 + (2+i)z - 1 + 7i = 0$ .

4.8.  $(1+i)z^2 + iz + 2 + 4i = 0$ .

5. Quyidagi tenglamalarni eching:

5.1.  $z + |z+1| + i = 0$ .

5.2.  $z|z| - 2z + i = 0$ .

5.3.  $z|z| - 2iz^2 + 2i = 0$ .

6. Quyidagi tenglamalar sistemasini eching:

$$6.1. \begin{cases} |z - 2i| = |z|, \\ |z - i| = |z - 1| \end{cases}$$

$$6.2. \begin{cases} \left| \frac{z - 12}{z - 8i} \right| = \frac{5}{3}, \\ \left| \frac{z - 4}{z - 8} \right| = 1 \end{cases}.$$

$$6.3. \begin{cases} z_1 + 2z_2 = 1 + i, \\ 3z_1 + iz_2 = 2 - 3i \end{cases}.$$

$$6.4. \begin{cases} 4iz_1 - 5z_2 = -4 + 14i, \\ 3z_1 + 2iz_2 = 7 + 3i \end{cases}.$$

$$6.5. \begin{cases} |z + 1 - i| = |z + i|, \\ |3 + 2i - z| = |z + 1| \end{cases}.$$

$$6.6. \begin{cases} |z + 1| = |z + 2|, \\ |3z + 9| = |5z + 10i| \end{cases}.$$

7. Quyidagi tengsizliklarning yechimlar to'plamini koordinatalar tekisligida ifodalang:

$$7.1. |z + 2| \geq |z|.$$

$$7.2. |z - 5 + i| < 4.$$

$$7.3. |z + 6i| > |z - 3|.$$

$$7.4. |z + 2 + 2i| \leq \sqrt{2}.$$

$$7.5. |z - 1 - 3i| \leq |z - 1|.$$

$$7.6. |z + 5 + 6i| > 0.$$

$$7.7. |z + i| \geq |z - 2|.$$

$$7.8. |z - 3 - i| < |z + 2i|.$$

8. N'yuton binomi va Muavr formulalari yordamida quyidagilarni hisoblang:

$$8.1. 1 - 3C_n^2 + 9C_n^4 - 27C_n^6 + \dots$$

$$8.2. C_n^1 - 3C_n^3 + 9C_n^5 - 27C_n^7 + \dots$$

$$8.3. \sqrt{3^n} - \sqrt{3^{n-2}} C_n^2 + \sqrt{3^{n-4}} C_n^4 - \sqrt{3^{n-6}} C_n^6 + \dots$$

$$8.4. \quad C_n^1 - \frac{1}{3}C_n^3 + \frac{1}{9}C_n^5 - \frac{1}{27}C_n^7 + \dots$$

9. Har qanday  $k$  butun sonlar uchun quyidagilarni isbotlang:

$$9.1. \quad \left( \frac{1+i\sqrt{3}}{1-i\sqrt{3}} \right)^{3k} = 1.$$

$$9.2. \quad \left( \frac{\sqrt{3}+i}{\sqrt{3}-i} \right)^{6k} = 1.$$

10. Quyidagi kompleks sonlarni trigonometrik shaklga keltiring:

$$10.1. \quad 5.$$

$$10.2. \quad -2i.$$

$$10.3. \quad -\frac{1}{2} - \frac{1}{2}i.$$

$$10.4. \quad (\sqrt{12} - 2i)4i^{13}.$$

$$10.5. \quad \sin \alpha + i \cos \alpha.$$

11. Quyidagilarni hisoblang:

$$11.1. \quad \frac{(\cos \theta - i \sin \theta)(\operatorname{ctg} \beta + i)(-\cos \alpha + i \sin \alpha)}{1 - i \operatorname{tg}(\alpha + \beta)}.$$

$$11.2. \quad \left( 2 + i\sqrt{12} \right)^{2008}.$$

$$11.3. \quad (1 - \cos \alpha + i \sin \alpha)^n, n \in \mathbb{Z}.$$

$$11.4. \quad \frac{(\operatorname{tg} 30^\circ - i)^{15}}{(-1 + i)^{2000}} (-\sin 30^\circ + i \cos 30^\circ).$$

12. Ildizlarni toping:

$$12.1. \quad \sqrt[3]{2-i}.$$

$$12.2. \quad \sqrt[6]{64}.$$

$$12.3. \quad \sqrt[4]{2+3i}.$$

$$12.4. \quad \sqrt[4]{\frac{1}{8} + \frac{i \sin 60^\circ}{4}}.$$

$$12.5. \sqrt[5]{\frac{-2i}{1-\sqrt{3}i}}.$$

$$12.6. \sqrt[4]{\frac{1}{2}((\sqrt{3}+1)+(\sqrt{3}-1)i)}.$$

$$12.7. \sqrt[6]{\frac{1-i}{-\sqrt{3}+i}}.$$

$$12.8. \sqrt[8]{\left(\frac{-5+7i}{i}\right)^3}.$$

13. Birning 6-darajali ildizlari to'plami mul'tiplikativ gruppaga tashkil etishini isbotlang.

14. Agar  $n$  va  $m$  o'zaro tub bo'lsa, u holda birning  $nm$  – darajali ildizlarini birning  $n$ - va  $m$ - darajali ildizlari yordamida ifodalash mumkinligini isbotlang.



### Takrorlash uchun savollar

1. Haqiqiy sonlar maydonining kompleks kengaytmasini quring.
2. Kompleks sonlar ustida arifmetik amallarni aniqlang.
3. Kompleks sonning geometrik tasviri nimadan iborat?
4. Geometrik ko'rinishdagi kompleks sonlarni qo'shish qanday bajariladi?
5. Kompleks sonning argumenti qanday aniqlanadi?
6. Trigonometrik ko'rinishda berilgan kompleks sonlarni ko'paytirish, bo'lish amallari qanday bajariladi?
7. Kompleks sonning trigonometrik shaklga keltirish qanday amalga oshiriladi?
8. Birning  $n$ -darajali ildiziga ta'rif bering.
9. Birning  $n$ -darajali ildizlari soni nechta? Javobingizni asoslang.
10. Ixtiyoriy kompleks sondan  $n$ -darajali ildiz topish formulasini ifodalang.

## V MODUL . ARIFMETIK VEKTOR FAZO. CHIZIQLI TENGLAMALAR SISTEMASI



### 13-§. Arifmetik vektor fazo

**Asosiy tushunchalar:** n-o'lchovli arifmetik vektor, vektorlar yig'indisi, skalyarni vektorga ko'paytirish, n-o'lchovli arifmetik vektor fazo, chiziqli vektor fazo, fazoosti, vektorlar sistemasi, chiziqli kombinasiya, chiziqli bog'liq sistema, chiziqli bog'lanmagan sistema, vektorlarning ekvivalent sistemalari, vektorlar sistemasini elementar almashtirishlar, vektorlar sistemasining bazisi, vektorlar sistemasining rangi, vektorlar sistemasining chiziqli qobig'i, chiziqli ko'phillik.

$F = \langle F; +, \cdot, -, {}^{-1}, 0, 1 \rangle$  ixtiyoriy maydon bo'lib,  $F$  uning asosiy to'plami bo'lsin.  $F^n$  to'g'ri ko'paytmaning ixtiyoriy  $\vec{a} = \langle a_1, a_2, \dots, a_n \rangle$  elementi n-o'lchovli arifmetik vektor deyiladi.

$F^n$  ning ixtiyoriy ikkita  $\vec{a} = \langle a_1, a_2, \dots, a_n \rangle$  va  $\vec{b} = \langle b_1, b_2, \dots, b_n \rangle$  vektorlari uchun  $a_1 = b_1, a_2 = b_2, \dots, a_n = b_n$  bo'lsa, berilgan vektorlar teng deyiladi.

$F^n$  ning ixtiyoriy ikkita  $\vec{a} = \langle a_1, a_2, \dots, a_n \rangle$  va  $\vec{b} = \langle b_1, b_2, \dots, b_n \rangle$  vektorlarining yig'indisi deb  $\vec{a} + \vec{b} = \langle a_1 + b_1, a_2 + b_2, \dots, a_n + b_n \rangle$  vektorga aytiladi.

$\forall \lambda \in F$  skalyarni  $\forall \vec{a} \in F^n$  vektorga ko'paytirish deb  $\lambda \vec{a} = \langle \lambda a_1, \lambda a_2, \dots, \lambda a_n \rangle$  vektorga aytiladi.

$F^n$  to'plam, unda aniqlangan qo'shish binar amali va skalyarni vektorga ko'paytirish unar amallari yordamida hosil qilingan  $F^n = \langle F^n; +, \{\omega_\lambda \mid \lambda \in F\} \rangle$  algebra  $F$  maydon ustida qurilgan n-o'lchovli arifmetik vektor fazo deyiladi.

$F^n = \langle F^n; +, \{\omega_\lambda \mid \lambda \in F\} \rangle$  n-o'lchovli arifmetik vektor fazo berilgan bo'lsin.

$F^n$  ning ixtiyoriy bo'sh bo'lmagan qism to'plami  $F^k (k \leq n)$  arifmetik vektor fazo

tashkil qilsa,  $F^k$  arifmetik vektor fazoga  $F^n$  arifmetik vektor fazoning fazoostisi (qismfazosi) deyiladi.

$F^n$  vektor fazoning vektorlaridan iborat  $\vec{a}_1, \vec{a}_2, \dots, \vec{a}_n, \dots$  sistemaga vektorlarning cheksiz sistemasi;  $\vec{a}_1, \vec{a}_2, \dots, \vec{a}_n$  sistemaga vektorlarning chekli sistemasi deyiladi.

$F^n$  vektor fazoning  $\vec{a}_1, \vec{a}_2, \dots, \vec{a}_n, \dots$  sistemasi va  $F$  maydonning  $\lambda_1, \lambda_2, \dots, \lambda_n, \dots$  skalyarlari berilgan bo'lsin.  $\lambda_1 \vec{a}_1 + \lambda_2 \vec{a}_2 + \dots + \lambda_n \vec{a}_n + \dots$  ifodaga  $\vec{a}_1, \vec{a}_2, \dots, \vec{a}_n, \dots$  vektorlar sistemasining chiziqli kombinasiyasi deyiladi. Agar kamida bittasi noldan farqli shunday  $\lambda_1, \lambda_2, \dots, \lambda_n$  skalyarlar topilib,  $\lambda_1 \vec{a}_1 + \lambda_2 \vec{a}_2 + \dots + \lambda_n \vec{a}_n = \vec{0}$  tenglik bajarilsa, u xolda  $\vec{a}_1, \vec{a}_2, \dots, \vec{a}_n$  sistema vektorlarning chiziqli bog'langan sistemasi deyiladi; tenglik  $\lambda_1 = 0, \lambda_2 = 0, \dots, \lambda_n = 0$  bo'lganda bajarilsa, u xolda  $\vec{a}_1, \vec{a}_2, \dots, \vec{a}_n$  vektorlarning chiziqli bog'lanmagan (chizikli erkli) sistemasi deyiladi.

Agar  $S$  va  $T$  sistemalarning ixtiyoriy biridan olingan har qanday noldan farqli vektorni ikkinchi sistema vektorlarining chiziqli kombinasiyasi sifatida ifodalash mumkin bo'lsa, bunday sistemalar ekvivalent sistemalar deyiladi va  $R \sim T$  ko'rinishda belgilanadi.

Vektorlar chekli sistemasini elementar almashtirishlar deb quyidagi almashtirishlarga aytiladi:

- 1) sistemaning qandaydir bir vektorini noldan farqli skalyarga ko'paytirish;
- 2) sistemaning skalyarga ko'paytirilgan bir vektorini ikkinchi vektoriga qo'shish yoki ayirish;
- 3) nol vektorni sistemadan chiqarish yoki sistemaga kiritish.

Vektorlar chekli sistemasining chiziqli erkli, bo'sh bo'lmagan qism sistemasi yordamida sistemaning har qanday vektorini chiziqli ifodalash mumkin bo'lsa, bunday qism sistemaga berilgan sistemaning bazisi deyiladi.

Vektorlar chekli sistemasining ixtiyoriy bazisidagi vektorlar soniga uning rangi deyiladi.

$\alpha_1 \vec{a}_1 + \alpha_2 \vec{a}_2 + \dots + \alpha_n \vec{a}_n (\alpha_i \in \mathbb{O})$  ko'rinishdagi barcha chiziqli kombinasiyalar



to'plamiga  $\vec{a}_1, \vec{a}_2, \dots, \vec{a}_n$  vektorlarning chiziqli qobig'i deyiladi va u  $L(\vec{a}_1, \vec{a}_2, \dots, \vec{a}_n)$  ko'rinishda belgilanadi.

$\vec{x}_0 + W = \{ \vec{x}_0 + \vec{y} \mid \vec{x}_0 \in F^n \}$  to'plamga  $W$  qism fazoning  $\vec{x}_0$  vektorga siljitishdan hosil bo'lgan chiziqli ko'philik deyiladi va u  $N = \vec{x}_0 + W$  orqali belgilanadi.

**Misol.**  $V = \{ ax^2 + by + c \mid a, b, c, x, y \in R \}$  to'plam  $R$  maydon ustida chiziqli fazo tashkil etishini isbotlang.

**Yechish:** Chiziqli fazo ta'rifiga ko'ra berilgan  $V$  to'plamda qo'shish binar amalini, skalyarni vektorga ko'paytirish unar amallarini aniqlab, ular uchun quyidagi xossalar tekshiriladi:

$$1^0. \forall (\vec{a}, \vec{b} \in V) (\vec{a} + \vec{b} = \vec{b} + \vec{a}).$$

$$2^0. \forall (\vec{a}, \vec{b}, \vec{c} \in V) (\vec{a} + (\vec{b} + \vec{c}) = (\vec{a} + \vec{b}) + \vec{c}).$$

$$3^0. \forall (\vec{a} \in V) \wedge \exists (\vec{e} \in V) (\vec{a} + \vec{e} = \vec{a}).$$

$$4^0. \forall (\vec{a} \in V) \wedge \exists (\vec{a}' \in V) (\vec{a} + \vec{a}' = \vec{0}).$$

$$5^0. \forall (\alpha \in R) \wedge \forall (\vec{a}, \vec{b} \in V) (\alpha(\vec{a} + \vec{b}) = \alpha\vec{a} + \alpha\vec{b}).$$

$$6^0. \forall (\alpha, \beta \in R) \wedge \forall (\vec{a} \in V) ((\alpha\beta)\vec{a} = \alpha(\beta\vec{a})).$$

$$7^0. \forall (\alpha, \beta \in R) \wedge \forall (\vec{a} \in V) ((\alpha + \beta)\vec{a} = \alpha\vec{a} + \beta\vec{a}).$$

$$8^0. \forall (\vec{a} \in V) (1 \cdot \vec{a} = \vec{a}).$$

$V$  to'plamning ixtiyoriy  $\vec{z}_1 = a_1x^2 + b_1y + c_1$  va  $\vec{z}_2 = a_2x^2 + b_2y + c_2$  elementlari berilgan bo'lsin.

$$\vec{z}_1 + \vec{z}_2 = a_1x^2 + b_1y + c_1 + a_2x^2 + b_2y + c_2 = (a_1 + a_2)x^2 + (b_1 + b_2)y + (c_1 + c_2) \in V$$

Demak, qo'shish binar amali  $V$  to'plamda aniqlangan va  $\langle V; + \rangle$  additiv gruppoid bo'ladi.

$1^0$  - isboti:  $V$  to'plamning ixtiyoriy  $\vec{z}_1, \vec{z}_2$  elementlari berilgan bo'lsin

$$\vec{z}_1 + \vec{z}_2 = a_1x^2 + b_1y + c_1 + a_2x^2 + b_2y + c_2 = (a_1 + a_2)x^2 + (b_1 + b_2)y + (c_1 + c_2) =$$

$|R$  da qo'shish amali kommutativ bo'lganligi uchun  $| =$

$$=(a_2 + a_1)x^2 + (b_2 + b_1)y + (c_2 + c_1) = a_2x^2 + b_2y + c_2 + a_1x^2 + b_1y + c_1 = \vec{z}_2 + \vec{z}_1.$$

Demak,  $V$  da qo'shish amali kommutativ va  $\langle V; + \rangle$  additiv abel gruppoid.

2<sup>0</sup> – isboti:  $V$  to'plamning ixtiyoriy  $\vec{z}_1 = a_1x^2 + b_1y + c_1$ ,  
 $\vec{z}_2 = a_2x^2 + b_2y + c_2$ ,  $\vec{z}_3 = a_3x^2 + b_3y + c_3$  elementlari berilgan bo'lsin.

$(\vec{z}_1 + \vec{z}_2) + \vec{z}_3 =$  | 1<sup>0</sup> – ko'ra |  $= (a_1 + a_2)x^2 + (b_1 + b_2)y + (c_1 + c_2) + a_3x^2 + b_3y + c_3$   
 $=$  | haqiqiy sonlar to'plamida qo'shish amali kommutativ, ko'paytirish qo'shishga nisbatan distributivligidan |  $=$

$((a_1 + a_2) + a_3)x^2 + ((b_1 + b_2) + b_3)y + (c_1 + c_2) + c_3 =$  haqiqiy sonlar maydonida qo'shish amali assosiativ bo'lganligi uchun |  $=$

$$= (a_1 + (a_2 + a_3))x^2 + (b_1 + (b_2 + b_3))y + c_1 + (c_2 + c_3) =$$

$$= a_1x^2 + b_1y + c_1 + (a_2 + a_3)x^2 + (b_2 + b_3)y + (c_2 + c_3) =$$

$$= a_1x^2 + b_1y + c_1 + (a_2x^2 + b_2y + c_2 + a_3x^2 + b_3y + c_3) = \vec{z}_1 + (\vec{z}_2 + \vec{z}_3)$$

Demak,  $V$  to'plamda qo'shish amali assosiativ va  $\langle V; + \rangle$  additiv abel gruppoid.

3<sup>0</sup> – isboti:  $V$  to'plamning ixtiyoriy  $\vec{z} = ax^2 + by + c$  va shunday  $\vec{e} = e_1x^2 + e_2y + e_3$  elementlari uchun  $\vec{z} + \vec{e} = \vec{z}$  ekanligini aniqlaymiz:  $\vec{z} + \vec{e} = \vec{z}$

dan  $ax^2 + by + c + e_1x^2 + e_2y + e_3 = ax^2 + by + c$  tenglamani, bundan 
$$\begin{cases} a + e_1 = a \\ b + e_2 = b \\ c + e_3 = c \end{cases}$$

tenglamalar sistemasini hosil qilamiz.  $R$  da tenglamalar sistemasini yagona  $e_1 = 0$ ,  $e_2 = 0$ ,  $e_3 = 0$  yechimga ega.

Demak,  $\vec{e} = 0 \cdot x^2 + 0 \cdot y + 0 = \vec{0} \in V$  va  $\langle V; +, 0 \rangle$  - additiv abel monoid.

4<sup>0</sup> – isboti:  $V$  to'plamning ixtiyoriy  $\vec{z} = ax^2 + by + c$  va shunday  $\vec{z}' = a'x^2 + b'y + c'$  elementlari uchun  $\vec{z} + \vec{z}' = \vec{0}$  ekanligini keltirib chiqaramiz:

$$\vec{z} + \vec{z}' = \vec{0} \text{ dan } ax^2 + by + c + a'x^2 + b'y + c' = 0 \cdot x^2 + 0 \cdot y + 0 \text{ tenglamani}$$

bundan 
$$\begin{cases} a + a' = 0 \\ b + b' = 0 \\ c + c' = 0 \end{cases}$$
 tenglamalar sistemasini hosil qilamiz.

Tenglamalar sistemasini  $R$  maydonda yagona  $a' = -a$ ,  $b' = -b$ ,  $c' = -c$  yechimga ega. Demak,  $\vec{z}' = -ax^2 - by - c = -(ax^2 + by + c) \in V$  va  $\langle V; +, -, \vec{0} \rangle$  - additiv abel gruppasi.

$V$  to'plamda skalyarni ko'paytirish unar amalini aniqlaymiz:

ixtiyoriy  $\alpha \in R$  skalyar va ixtiyoriy  $\vec{z} = ax^2 + by + c \in V$  berilgan bo'lsin.  $\omega_\alpha(\vec{z}) = \alpha \cdot z = \alpha \cdot (ax^2 + by + c) = \alpha \cdot (ax^2) + \alpha \cdot (by) + \alpha \cdot c = |R$  da ko'paytirish assosiativligi uchun  $| = (\alpha \cdot a)x^2 + (\alpha \cdot b)y + \alpha \cdot c \in V$  ni hosil qilamiz. Demak,  $V$  da skalyarni  $V$  ning elementiga ko'paytirish unar amallari aniqlangan.

5<sup>o</sup> - isboti. Ixtiyoriy  $\alpha \in R$  skalyar va  $V$  ning  $\vec{z}_1, \vec{z}_2$  elementlari berilgan bo'lsin.

$$\begin{aligned} \alpha(\vec{z}_1 + \vec{z}_2) &= \alpha((a_1 + a_2)x^2 + (b_1 + b_2)y + (c_1 + c_2)) = \\ &= \alpha(a_1 + a_2)x^2 + \alpha(b_1 + b_2)y + \alpha(c_1 + c_2) = \end{aligned}$$

$$|R \text{ da ko'paytirishning qo'shishga nisbatan distributivligidan}| = \alpha \cdot a_1 x^2 + \alpha \cdot a_2 x^2 + \alpha \cdot b_1 y + \alpha \cdot b_2 y + \alpha \cdot c_1 + \alpha \cdot c_2 =$$

$$|R \text{ da qo'shish amalining kommutativligidan}| =$$

$$\begin{aligned} &= \alpha \cdot a_1 x^2 + \alpha \cdot b_1 y + \alpha \cdot c_1 + \alpha \cdot a_2 x^2 + \alpha \cdot b_2 y + \alpha \cdot c_2 = |R \text{ da ko'paytirishning} \\ &\text{qo'shishga nisbatan distributivligidan}| = \\ &= \alpha(a_1 x^2 + b_1 y + c_1) + \alpha(a_2 x^2 + b_2 y + c_2) = \alpha \cdot \vec{z}_1 + \alpha \cdot \vec{z}_2. \end{aligned}$$

Demak, skalyarni vektorlar yig'indisiga ko'paytirish distributiv.

6<sup>o</sup> - isboti. Ixtiyoriy  $\alpha, \beta \in R$  skalyarlar va ixtiyoriy  $\vec{z} \in V$  element berilgan bo'lsin.

$$\begin{aligned} (\alpha \cdot \beta)\vec{z} &= (\alpha \cdot \beta)(ax^2 + by + c) = |R \text{ da ko'paytirishning qo'shishga nisbatan} \\ &\text{distributivligidan}| = (\alpha \cdot \beta)ax^2 + (\alpha \cdot \beta)by + (\alpha \cdot \beta)c = |ko'paytirish R \text{ da} \\ &\text{assosiativligi va ko'paytirishni qo'shishga nisbatan distributivligidan}| = \\ &= \alpha(\beta \cdot ax^2) + \alpha(\beta \cdot by) + \alpha(\beta \cdot c) = \alpha(\beta(ax^2) + (\beta(by) + (\beta c))) = \end{aligned}$$

$$= \alpha(\beta(ax^2 + by + c)) = \alpha(\beta \cdot \bar{z}).$$

Demak, skalyarlar ko'paytmasini  $V$  elementiga ko'paytirish assosiativ.

$7^0$  –isboti. Ixtiyoriy  $\alpha, \beta \in R$  skalyarlar va ixtiyoriy  $\bar{z} \in V$  element berilgan bo'lsin.

$$\begin{aligned} (\alpha + \beta)\bar{z} &= (\alpha + \beta)(ax^2 + by + c) = \text{Rda ko'paytirishning qo'shishga} \\ \text{nisbatan distributivligidan} &= (\alpha + \beta)ax^2 + (\alpha + \beta)by + (\alpha + \beta)c = \\ &= \text{Rda yig'indini o'ngdan ko'paytirish distributivligidan} = \\ &= \alpha \cdot ax^2 + \beta \cdot ax^2 + \alpha \cdot by + \beta \cdot by + \alpha \cdot c + \beta \cdot c = \\ &= \text{Rda qo'shish komutativligidan} = \\ &= \alpha \cdot ax^2 + \alpha \cdot by + \alpha \cdot c + \beta \cdot ax^2 + \beta \cdot by + \beta \cdot c = \text{Rda ko'paytirishning} \\ \text{qo'shishga} & \qquad \qquad \qquad \text{nisbatan} & \qquad \qquad \qquad \text{distributivligidan} = \\ &= \alpha(ax^2 + by + c) + \beta(ax^2 + by + c) = \alpha \cdot \bar{z} + \beta \cdot \bar{z}. \end{aligned}$$

Demak, skalyarlar yig'indisini  $V$  elementiga ko'paytirish distributiv.

$8^0$  –isboti.  $V$  to'plamning ixtiyoriy  $\bar{z}$  elementi berilgan bo'lsin. Skalyarlar to'plami maydon tashkil etishi va har qanday maydonda 1 mavjud ekanligidan  $1 \cdot \bar{z} = 1 \cdot (ax^2 + by + c) = ax^2 + by + c = \bar{z}$ .

Demak,  $\langle V; +, \cdot, \alpha \in R \rangle$  algebra chiziqli fazo bo'ladi.

**Misol.**  $\vec{a}_1 = (1, 2, 3, 4)$ ,  $\vec{a}_2 = (0, 1, 2, 1)$ ,  $\vec{a}_3 = (1, -1, 2, 1)$  vektorlar sistemasini chiziqli bog'liq yoki chiziqli bog'liqmasligini aniqlang. Uning bazisi va rangini toping.

**Yechish:** 1-usul. Chiziqli tenglamalar sistemasini yordamida. Ixtiyoriy  $\alpha, \beta, \gamma$  skalyarlar berilgan bo'lsin. Berilgan vektorlar sistemasining chiziqli kombinasiyasini tuzamiz:  $\alpha \vec{a}_1 + \beta \vec{a}_2 + \gamma \vec{a}_3 = \vec{0}$ , ya'ni  $\alpha \langle 1, 2, 3, 4 \rangle + \beta \langle 0, 1, 2, 1 \rangle + \gamma \langle 1, -1, 2, 1 \rangle = \vec{0}$ . Hosil bo'lgan tenglikdan skalyarlar qiymatini topamiz. Buning uchun chiziqli tenglamalar sistemasini tuzamiz:

$$\begin{cases} \alpha + \gamma = 0 \\ 2\alpha + \beta - \gamma = 0 \\ 3\alpha + 2\beta + 2\gamma = 0 \\ 4\alpha + \beta + \gamma = 0 \end{cases}$$

Hosil bo'lgan chiziqli tenglamalar sistemasini Gauss usulida echamiz:

$$\begin{cases} \alpha + \gamma = 0 \\ \beta - 3\gamma = 0 \\ 2\beta - \gamma = 0 \\ \beta - 3\lambda = 0 \end{cases} \Rightarrow \begin{cases} \alpha + \gamma = 0 \\ \beta - 3\gamma = 0 \\ 2\beta - \gamma = 0 \end{cases} \Rightarrow \begin{cases} \alpha + \gamma = 0 \\ \beta - 3\gamma = 0 \\ 5\lambda = 0 \end{cases} \Rightarrow \begin{cases} \alpha = 0 \\ \beta = 0 \\ \gamma = 0 \end{cases}$$

$\alpha \vec{a}_1 + \beta \vec{a}_2 + \gamma \vec{a}_3 = \vec{0}$  tenglikdan skalyarlarning barchasi nolga tengligi kelib chiqdi. Demak,  $\vec{a}_1, \vec{a}_2, \vec{a}_3$  vektorlar sistemasini chiziqli bog'liq emas. Shuning uchun sistema o'ziga bazis, rangi 3 ga teng.

**Misol.**  $\vec{a}_1 = \begin{pmatrix} -1 \\ 3 \end{pmatrix}; \vec{a}_2 = \begin{pmatrix} 1 \\ 1 \\ 1 \end{pmatrix}$  va  $\vec{b}_1 = \begin{pmatrix} 2 \\ 2 \\ -6 \end{pmatrix}; \vec{b}_2 = \begin{pmatrix} 1 \\ 0 \\ 1 \end{pmatrix}$  sistemalar ekvivalentligini tekshiring.

**Yechish:** Vektorlarning chekli sistemalari ekvivalentligining ta'rifi ko'ra  $\vec{a}_1$  sistemaning har bir vektori  $\vec{b}_1$  sistema orqali va  $\vec{b}_2$  sistemaning har bir vektori  $\vec{a}_1$  sistema orqali chiziqli ifodalanishini tekshiramiz. Buning uchun

$$\vec{a}_1 = \beta_{11} \vec{b}_1 + \beta_{12} \vec{b}_2$$

$$\vec{a}_2 = \beta_{21} \vec{b}_1 + \beta_{22} \vec{b}_2$$

$$\vec{b}_1 = \alpha_{11} \vec{a}_1 + \alpha_{12} \vec{a}_2$$

$$\vec{b}_2 = \alpha_{21} \vec{a}_1 + \alpha_{22} \vec{a}_2 \quad \text{tenglamalardagi skalyarlarning qiymatlarini topamiz.}$$

$$\text{Ya'ni } \begin{pmatrix} -1 \\ 3 \end{pmatrix} = \beta_{11} \begin{pmatrix} 2 \\ 2 \\ -6 \end{pmatrix} + \beta_{12} \begin{pmatrix} 1 \\ 0 \\ 1 \end{pmatrix}.$$

$$\begin{pmatrix} 1 \\ 1 \\ 1 \end{pmatrix} = \beta_{21} \begin{pmatrix} 2 \\ 2 \\ -6 \end{pmatrix} + \beta_{22} \begin{pmatrix} 1 \\ 0 \\ 1 \end{pmatrix}.$$

$$3) \begin{pmatrix} 2 \\ 2 \\ -6 \end{pmatrix} = \alpha_{11} \begin{pmatrix} -1 \\ 3 \end{pmatrix} + \alpha_{12} \begin{pmatrix} 1 \\ 1 \\ 1 \end{pmatrix}.$$

$$4) \begin{pmatrix} 1 \\ 0 \\ 1 \end{pmatrix} = \alpha_{21} \begin{pmatrix} -1 \\ 3 \end{pmatrix} + \alpha_{22} \begin{pmatrix} 1 \\ 1 \\ 1 \end{pmatrix}.$$

Tenglamalarning har biridan quyidagi tenglamalar sistemalarini hosil qilamiz:

$$1) \begin{cases} 1 = -2\beta_{11} - \beta_{12} \\ -1 = 2\beta_{11} \\ 3 = -6\beta_{11} + \beta_{12} \end{cases} \quad 2) \begin{cases} -1 = -2\beta_{21} - \beta_{22} \\ 1 = 2\beta_{21} \\ 1 = -6\beta_{21} + \beta_{22} \end{cases}$$

$$3) \begin{cases} -2 = \alpha_{11} - \alpha_{12} \\ 2 = -\alpha_{11} + \alpha_{12} \\ -6 = 3\alpha_{11} + \alpha_{12} \end{cases} \quad 4) \begin{cases} -1 = \alpha_{21} - \alpha_{22} \\ 0 = -\alpha_{21} + \alpha_{22} \\ 1 = 3\alpha_{21} + \alpha_{22} \end{cases}$$

Tenglamalar sistemalarini echamiz :

$$1) \begin{cases} 1 = -2\beta_{11} - \beta_{12} \\ -1 = 2\beta_{11} \\ 3 = -6\beta_{11} + \beta_{12} \end{cases} \Rightarrow \begin{cases} \beta_{11} = -\frac{1}{2} \\ \beta_{12} = 0 \end{cases}$$

$$2) \begin{cases} -1 = -2\beta_{21} - \beta_{22} \\ 1 = 2\beta_{21} \\ 1 = -6\beta_{21} + \beta_{22} \end{cases} \Rightarrow \begin{cases} \beta_{21} = \frac{1}{2} \\ \beta_{22} = 0 \end{cases}$$

$$3) \begin{cases} -2 = \alpha_{11} - \alpha_{12} \\ 2 = -\alpha_{11} + \alpha_{12} \\ -6 = 3\alpha_{11} + \alpha_{12} \end{cases} \Rightarrow \begin{cases} -2 = \alpha_{11} - \alpha_{12} \\ -6 = 3\alpha_{11} + \alpha_{12} \end{cases} \Rightarrow \begin{cases} -2 = \alpha_{11} - \alpha_{12} \\ 0 = 4\alpha_{12} \end{cases} \Rightarrow \begin{cases} \alpha_{12} = 0 \\ \beta\alpha_{11} = -2 \end{cases}$$

$$4) \begin{cases} -1 = \alpha_{21} - \alpha_{22} \\ 0 = -\alpha_{21} + \alpha_{22} \\ 1 = 3\alpha_{21} + \alpha_{22} \end{cases} \Rightarrow \begin{cases} -1 = \alpha_{21} - \alpha_{22} \\ 0 = -\alpha_{21} + \alpha_{22} \\ 0 = 4\alpha_{21} \end{cases} \Rightarrow \begin{cases} \alpha_{21} = 0 \\ \alpha_{22} = 0 \\ -1 \neq 0 - 0 \end{cases} \Rightarrow \text{yechim mavjud}$$

emas.

$$\text{Demak, } \vec{a}_1 = -\frac{1}{2}\vec{b}_1, \vec{a}_2 = \frac{1}{2}\vec{b}_1, \vec{b}_1 = -2\vec{a}_1.$$

Ya'ni  $\vec{b}_2$  vektor ( $a$ ) sistema yordamida chiziqli ifodalanmaydi. Shu sababli ( $a$ ), ( $b$ ) sistemalar ekvivalent emas.

**Misol.**  $\vec{x} = \begin{pmatrix} 2 \\ 1 \\ 1 \end{pmatrix}$  vektorni  $\vec{a}_1 = \begin{pmatrix} 1 \\ 1 \\ 0 \end{pmatrix}$ ,  $\vec{a}_2 = \begin{pmatrix} 1 \\ 0 \\ 0 \end{pmatrix}$ ,  $\vec{a}_3 = \begin{pmatrix} 1 \\ 1 \\ 4 \end{pmatrix}$  vektorlar orqali chiziqli ifodalang.

**Yechish:** Xaqiqiy sonlar maydonidan shunday  $\alpha, \beta, \gamma$  skalyarlarni aniqlashimiz kerak-ki, ular  $\vec{x} = \alpha\vec{a}_1 + \beta\vec{a}_2 + \gamma\vec{a}_3$  tenglikni qanoatlantirsin.

Buning uchun tenglamalar sistemasini tuzamiz:

$$\begin{pmatrix} 2 \\ 1 \\ 1 \end{pmatrix} = \alpha \begin{pmatrix} 1 \\ 1 \\ 0 \end{pmatrix} + \beta \begin{pmatrix} 1 \\ 0 \\ 0 \end{pmatrix} + \gamma \begin{pmatrix} 1 \\ 1 \\ 4 \end{pmatrix}$$

tenglikdan quyidagi sistema kelib chiqadi:

$$\begin{cases} 1 = -\beta + 2\alpha \\ 2 = \alpha + \gamma \\ 1 = \alpha + \gamma \\ 1 = \beta + 4\gamma \end{cases}$$

Hosil bo'lgan sistema hamjoyli bo'lsa,  $\vec{x}$  vektor  $\vec{a}_1, \vec{a}_2, \vec{a}_3$  vektorlar orqali chiziqli ifodalanadi. Lekin sistemaning 2- va 3- tenglamalari birgalikda yechimga ega emas.

Demak,  $\vec{x}$  vektor  $\vec{a}_1, \vec{a}_2, \vec{a}_3$  sistema orqali chiziqli ifodalanmaydi.

**Misol.**  $\vec{x} = \begin{pmatrix} 3 \\ 0 \end{pmatrix}$  vektorni  $\vec{a}_1 = \begin{pmatrix} 0 \\ 2 \end{pmatrix}$ ,  $\vec{a}_2 = \begin{pmatrix} 3 \\ 2 \end{pmatrix}$  vektorlar orqali chiziqli ifodalang.

**Yechish:**  $\vec{x} = \alpha \vec{a}_1 + \beta \vec{a}_2$  tenglikni qanoatlantiruvchi  $\alpha, \beta$  haqiqiy sonlarni aniqlaymiz:

$$\begin{pmatrix} 3 \\ 0 \end{pmatrix} = \alpha \begin{pmatrix} 0 \\ 2 \end{pmatrix} + \beta \begin{pmatrix} 3 \\ 2 \end{pmatrix} \text{ tenglamadan}$$

$$\begin{cases} 1 = \alpha + 2\beta \\ 3 = 3\beta \\ 0 = 2\alpha + 2\beta \end{cases} \text{ tenglamalar sistemasini hosil qilamiz.}$$

Chiziqli tenglamalar sistemasining  $\begin{cases} \beta = 1 \\ \alpha = -1 \end{cases}$  yechimi yordamida

$\vec{x} = \begin{pmatrix} 1 \\ 3 \end{pmatrix} = 1 \cdot \vec{a}_1 + 1 \cdot \vec{a}_2$  ya'ni  $\vec{x} = -\vec{a}_1 + \vec{a}_2$  ifodani  $\pm$ zish mumkin. Demak,  $\vec{x}$  vektorni  $\vec{a}_1, \vec{a}_2$  vektorlar orqali chiziqli ifodasi mavjud.

**Misol.**  $\vec{a}_1 = \begin{pmatrix} 1 \\ 1 \\ 0 \end{pmatrix}$ ,  $\vec{a}_2 = \begin{pmatrix} 1 \\ 0 \\ 0 \end{pmatrix}$ ,  $\vec{a}_3 = \begin{pmatrix} 1 \\ 1 \\ 4 \end{pmatrix}$  vektorlar sistemasining chiziqli qobig'i chiziqli fazo tashkil etishini isbotlang.

**Yechish:** Ta'rifga ko'ra  $\vec{a}_1 = \begin{pmatrix} 1 \\ 1 \\ 0 \end{pmatrix}$ ,  $\vec{a}_2 = \begin{pmatrix} 1 \\ 0 \\ 0 \end{pmatrix}$ ,  $\vec{a}_3 = \begin{pmatrix} 1 \\ 1 \\ 4 \end{pmatrix}$  sistemaning chiziqli qobig'i

$L(\vec{a}_1, \vec{a}_2, \vec{a}_3) = \{ \alpha_1 \vec{a}_1 + \alpha_2 \vec{a}_2 + \alpha_3 \vec{a}_3 \mid \alpha_1, \alpha_2, \alpha_3 \in R \}$  to'plamdan iborat. Uning chiziqli fazo tashkil etishini tekshiramiz:

1.  $L(\vec{a}_1, \vec{a}_2, \vec{a}_3)$  to'plamning ixtiyoriy  $\vec{z}_1 = \alpha_1 \vec{a}_1 + \alpha_2 \vec{a}_2 + \alpha_3 \vec{a}_3$  va  $\vec{z}_2 = \beta_1 \vec{a}_1 + \beta_2 \vec{a}_2 + \beta_3 \vec{a}_3$  elementlari berilgan bo'lsin.

$$\vec{z}_1 + \vec{z}_2 = \alpha_1 \vec{a}_1 + \alpha_2 \vec{a}_2 + \alpha_3 \vec{a}_3 + \beta_1 \vec{a}_1 + \beta_2 \vec{a}_2 + \beta_3 \vec{a}_3 = (\alpha_1 + \beta_1) \vec{a}_1 + (\alpha_2 + \beta_2) \vec{a}_2 + (\alpha_3 + \beta_3) \vec{a}_3 \in L(\vec{a}_1, \vec{a}_2, \vec{a}_3)$$

Demak, qo'shish binar amali  $L(\vec{a}_1, \vec{a}_2, \vec{a}_3)$  to'plamda aniqlangan.

2.  $L(\vec{a}_1, \vec{a}_2, \vec{a}_3)$  to'plamning ixtiyoriy  $\vec{z}_1, \vec{z}_2$  elementlari berilgan bo'lsin

$$\begin{aligned} \vec{z}_1 + \vec{z}_2 &= \alpha_1 \vec{a}_1 + \alpha_2 \vec{a}_2 + \alpha_3 \vec{a}_3 + \beta_1 \vec{a}_1 + \beta_2 \vec{a}_2 + \beta_3 \vec{a}_3 = (\alpha_1 + \beta_1) \vec{a}_1 + (\alpha_2 + \beta_2) \vec{a}_2 + \\ &+ (\alpha_3 + \beta_3) \vec{a}_3 = (\beta_1 + \alpha_1) \vec{a}_1 + (\beta_2 + \alpha_2) \vec{a}_2 + (\beta_3 + \alpha_3) \vec{a}_3 = \beta_1 \vec{a}_1 + \beta_2 \vec{a}_2 + \beta_3 \vec{a}_3 + \\ &+ \alpha_1 \vec{a}_1 + \alpha_2 \vec{a}_2 + \alpha_3 \vec{a}_3 = \vec{z}_2 + \vec{z}_1 \end{aligned}$$

Demak,  $L(\vec{a}_1, \vec{a}_2, \vec{a}_3)$  da qo'shish amali kommutativ.

3.  $L(\vec{a}_1, \vec{a}_2, \vec{a}_3)$  to'plamning ixtiyoriy  $\vec{z}_1 = \alpha_1 \vec{a}_1 + \alpha_2 \vec{a}_2 + \alpha_3 \vec{a}_3$

$\vec{z}_2 = \beta_1 \vec{a}_1 + \beta_2 \vec{a}_2 + \beta_3 \vec{a}_3$   $\vec{z}_3 = \gamma_1 \vec{a}_1 + \gamma_2 \vec{a}_2 + \gamma_3 \vec{a}_3$  elementlari berilgan bo'lsin.

$$(\vec{z}_1 + \vec{z}_2) + \vec{z}_3 = (\alpha_1 + \beta_1) \vec{a}_1 + (\alpha_2 + \beta_2) \vec{a}_2 + (\alpha_3 + \beta_3) \vec{a}_3 + \gamma_1 \vec{a}_1 + \gamma_2 \vec{a}_2 + \gamma_3 \vec{a}_3 =$$

=|haqiqiy sonlar to'plamida qo'shish amali kommutativ, ko'paytirish qo'shishga nisbatan distributivligidan|=

= $((\alpha_1 + \beta_1) + \gamma_1) \vec{a}_1 + ((\alpha_2 + \beta_2) + \gamma_2) \vec{a}_2 + ((\alpha_3 + \beta_3) + \gamma_3) \vec{a}_3$  =|haqiqiy sonlar maydonida qo'shish amali assosiativ bo'lganligi uchun|

$$\begin{aligned} &(\alpha_1 + (\beta_1 + \gamma_1)) \vec{a}_1 + (\alpha_2 + (\beta_2 + \gamma_2)) \vec{a}_2 + (\alpha_3 + (\beta_3 + \gamma_3)) \vec{a}_3 = \\ &= (\alpha_1 \vec{a}_1 + \alpha_2 \vec{a}_2 + \alpha_3 \vec{a}_3) + ((\beta_1 + \gamma_1) \vec{a}_1 + (\beta_2 + \gamma_2) \vec{a}_2 + (\beta_3 + \gamma_3) \vec{a}_3) = \\ &= (\alpha_1 \vec{a}_1 + \alpha_2 \vec{a}_2 + \alpha_3 \vec{a}_3) + ((\beta_1 \vec{a}_1 + \beta_2 \vec{a}_2 + \beta_3 \vec{a}_3) + (\gamma_1 \vec{a}_1 + \gamma_2 \vec{a}_2 + \gamma_3 \vec{a}_3)) = \\ &\vec{z}_1 + (\vec{z}_2 + \vec{z}_3). \end{aligned}$$

Demak,  $L(\vec{a}_1, \vec{a}_2, \vec{a}_3)$  to'plamda qo'shish amali assosiativ

4.  $L(\vec{a}_1, \vec{a}_2, \vec{a}_3)$  to'plamning ixtiyoriy  $\vec{z} = \alpha_1 \vec{a}_1 + \alpha_2 \vec{a}_2 + \alpha_3 \vec{a}_3$  elementi

uchun  $\vec{z} + \vec{e} = \vec{z}$  tenglikni qanoatlantiruvchi shunday  $\vec{e} = e_1 \vec{a}_1 + e_2 \vec{a}_2 + e_3 \vec{a}_3$

mavjudligini aniqlaymiz.

$$\vec{z} + \vec{e} = \vec{z} \quad \text{tenglikdan} \quad (\alpha_1 + e_1) \vec{a}_1 + (\alpha_2 + e_2) \vec{a}_2 + (\alpha_3 + e_3) \vec{a}_3 = \alpha_1 \vec{a}_1 + \alpha_2 \vec{a}_2 + \alpha_3 \vec{a}_3$$

tenglamani, bundan  $\begin{cases} \alpha_1 + e_1 = \alpha_1 \\ \alpha_2 + e_2 = \alpha_2 \\ \alpha_3 + e_3 = \alpha_3 \end{cases}$  tenglamalar sistemasini hosil qilamiz.  $R$  da

tenglamalar sistemasi yagona  $e_1 = 0, e_2 = 0, e_3 = 0$  yechimga ega.

Demak,  $\vec{e} = 0 \cdot \vec{a}_1 + 0 \cdot \vec{a}_2 + 0 \cdot \vec{a}_3 = \vec{0} \in L(\vec{a}_1, \vec{a}_2, \vec{a}_3)$



5.  $L(\vec{a}_1, \vec{a}_2, \vec{a}_3)$  to'plamning ixtiyoriy  $\vec{z} = \alpha_1 \vec{a}_1 + \alpha_2 \vec{a}_2 + \alpha_3 \vec{a}_3$  va shunday  $\vec{z}' = \alpha'_1 \vec{a}_1 + \alpha'_2 \vec{a}_2 + \alpha'_3 \vec{a}_3$  elementlari uchun  $\vec{z} + \vec{z}' = \vec{0}$  ekanligini keltirib chiqaramiz:

$$\vec{z} + \vec{z}' = \vec{0} \quad \text{dan}$$

$$(\alpha_1 + \alpha'_1) \vec{a}_1 + (\alpha_2 + \alpha'_2) \vec{a}_2 + (\alpha_3 + \alpha'_3) \vec{a}_3 = 0 \cdot \vec{a}_1 + 0 \cdot \vec{a}_2 + 0 \cdot \vec{a}_3$$

tenglamani, bundan 
$$\begin{cases} \alpha_1 + \alpha'_1 = 0 \\ \alpha_2 + \alpha'_2 = 0 \\ \alpha_3 + \alpha'_3 = 0 \end{cases}$$
 tenglamalar sistemasini hosil qilamiz.

Tenglamalar sistemasini  $R$  maydonda yagona  $\alpha_1 = -\alpha_1, \alpha_2 = -\alpha_2, \alpha_3 = -\alpha_3$  yechimga ega. Demak,

$$\vec{z}' = -\alpha_1 \vec{a}_1 - \alpha_2 \vec{a}_2 - \alpha_3 \vec{a}_3 = -(\alpha_1 \vec{a}_1 + \alpha_2 \vec{a}_2 + \alpha_3 \vec{a}_3) \in L(\vec{a}_1, \vec{a}_2, \vec{a}_3) \text{ va}$$

$\langle L(\vec{a}_1, \vec{a}_2, \vec{a}_3); +, -, \vec{0} \rangle$  - additiv abel gruppasi.

6.  $L(\vec{a}_1, \vec{a}_2, \vec{a}_3)$  to'plamda  $\lambda$  skalyarni  $\vec{z} = \alpha_1 \vec{a}_1 + \alpha_2 \vec{a}_2 + \alpha_3 \vec{a}_3$  vektorga ko'paytirish unar amalini aniqlaymiz.

Ixtiyoriy  $\lambda \in R$  skalyar va ixtiyoriy  $\vec{z} = \alpha_1 \vec{a}_1 + \alpha_2 \vec{a}_2 + \alpha_3 \vec{a}_3$  berilgan bo'lsin.

$$\begin{aligned} \omega_\alpha(\vec{z}) &= \lambda \cdot \vec{z} = \lambda \cdot (\alpha_1 \vec{a}_1 + \alpha_2 \vec{a}_2 + \alpha_3 \vec{a}_3) = \lambda \cdot (\alpha_1 \vec{a}_1) + \lambda \cdot (\alpha_2 \vec{a}_2) + \lambda \cdot (\alpha_3 \vec{a}_3) = \\ &= (\lambda \cdot \alpha_1) \vec{a}_1 + (\lambda \cdot \alpha_2) \vec{a}_2 + (\lambda \cdot \alpha_3) \vec{a}_3 \in L(\vec{a}_1, \vec{a}_2, \vec{a}_3). \end{aligned}$$

Demak,  $L(\vec{a}_1, \vec{a}_2, \vec{a}_3)$  da skalyarni  $L(\vec{a}_1, \vec{a}_2, \vec{a}_3)$  ning elementiga ko'paytirish unar amallari aniqlangan.

7. Ixtiyoriy  $\lambda \in R$  skalyar va  $L(\vec{a}_1, \vec{a}_2, \vec{a}_3)$  ning  $\vec{z}_1, \vec{z}_2$  elementlari berilgan bo'lsin.

$$\begin{aligned} \lambda(\vec{z}_1 + \vec{z}_2) &= \lambda((\alpha_1 + \beta_1) \vec{a}_1 + (\alpha_2 + \beta_2) \vec{a}_2 + (\alpha_3 + \beta_3) \vec{a}_3) = \lambda(\alpha_1 + \beta_1) \vec{a}_1 + \\ &+ \lambda(\alpha_2 + \beta_2) \vec{a}_2 + \lambda(\alpha_3 + \beta_3) \vec{a}_3 = \lambda(\alpha_1 \vec{a}_1) + \lambda(\alpha_2 \vec{a}_2) + \lambda(\alpha_3 \vec{a}_3) + \lambda(\beta_1 \vec{a}_1) + \\ &+ \lambda(\beta_2 \vec{a}_2) + \lambda(\beta_3 \vec{a}_3) = \lambda(\alpha_1 \vec{a}_1 + \alpha_2 \vec{a}_2 + \alpha_3 \vec{a}_3) + \lambda(\beta_1 \vec{a}_1 + \beta_2 \vec{a}_2 + \beta_3 \vec{a}_3) = \lambda \cdot \vec{z}_1 + \lambda \cdot \vec{z}_2. \end{aligned}$$

Demak, skalyarni vektorlar yig'indisiga ko'paytirish distributiv.

8. Ixtiyoriy  $\lambda, \delta \in R$  skalyarlar va ixtiyoriy  $\vec{z} = \alpha_1 \vec{a}_1 + \alpha_2 \vec{a}_2 + \alpha_3 \vec{a}_3$  element berilgan bo'lsin.

$$\begin{aligned}
(\lambda \cdot \delta) \cdot \vec{z} &= (\lambda \cdot \delta)(\alpha_1 \vec{a}_1 + \alpha_2 \vec{a}_2 + \alpha_3 \vec{a}_3) = (\lambda \cdot \delta)(\alpha_1 \vec{a}_1) + (\lambda \cdot \delta)(\alpha_2 \vec{a}_2) + \\
&+ (\lambda \cdot \delta)(\alpha_3 \vec{a}_3) = ((\lambda \cdot \delta)\alpha_1)\vec{a}_1 + ((\lambda \cdot \delta)\alpha_2)\vec{a}_2 + ((\lambda \cdot \delta)\alpha_3)\vec{a}_3 = \\
&= (\lambda(\delta \cdot \alpha_1)\vec{a}_1 + (\lambda(\delta \cdot \alpha_2)\vec{a}_2 + (\lambda(\delta \cdot \alpha_3)\vec{a}_3) = \lambda((\delta \cdot \alpha_1)\vec{a}_1 + (\delta \cdot \alpha_2)\vec{a}_2 + \\
&+ (\delta \cdot \alpha_3)\vec{a}_3) = \lambda(\delta(\alpha_1 \vec{a}_1 + \alpha_2 \vec{a}_2 + \alpha_3 \vec{a}_3)) = \lambda(\delta \cdot \vec{z}).
\end{aligned}$$

Demak, skalyarlar ko'paytmasini  $L(\vec{a}_1, \vec{a}_2, \vec{a}_3)$  elementiga ko'paytirish assosiativ.

9. Ixtiyoriy  $\lambda, \delta \in R$  skalyarlar va ixtiyoriy  $\vec{z} = \alpha_1 \vec{a}_1 + \alpha_2 \vec{a}_2 + \alpha_3 \vec{a}_3$  element berilgan bo'lsin.

$$\begin{aligned}
(\lambda + \delta) \cdot \vec{z} &= (\lambda + \delta)(\alpha_1 \vec{a}_1 + \alpha_2 \vec{a}_2 + \alpha_3 \vec{a}_3) = (\lambda + \delta)\alpha_1 \vec{a}_1 + (\lambda + \delta)\alpha_2 \vec{a}_2 + \\
&+ (\lambda + \delta)\alpha_3 \vec{a}_3 = \lambda(\alpha_1 \vec{a}_1) + \delta(\alpha_1 \vec{a}_1) + \lambda(\alpha_2 \vec{a}_2) + \delta(\alpha_2 \vec{a}_2) + \lambda(\alpha_3 \vec{a}_3) + \\
&+ \delta(\alpha_3 \vec{a}_3) = \lambda(\alpha_1 \vec{a}_1 + \alpha_2 \vec{a}_2 + \alpha_3 \vec{a}_3) + \delta(\alpha_1 \vec{a}_1 + \alpha_2 \vec{a}_2 + \alpha_3 \vec{a}_3) = \\
&\lambda \cdot \vec{z} + \delta \cdot \vec{z}.
\end{aligned}$$

Demak, skalyarlar yig'indisini  $L(\vec{a}_1, \vec{a}_2, \vec{a}_3)$  elementiga ko'paytirish distributiv.

10.  $L(\vec{a}_1, \vec{a}_2, \vec{a}_3)$  to'plamning ixtiyoriy  $\vec{z} = \alpha_1 \vec{a}_1 + \alpha_2 \vec{a}_2 + \alpha_3 \vec{a}_3$  elementi berilgan bo'lsin. Skalyarlar to'plami maydon tashkil etishi va har qanday maydonda 1 mavjud ekanligidan

$$\begin{aligned}
1 \cdot \vec{z} &= 1 \cdot (\alpha_1 \vec{a}_1 + \alpha_2 \vec{a}_2 + \alpha_3 \vec{a}_3) = 1 \cdot (\alpha_1 \vec{a}_1) + 1 \cdot (\alpha_2 \vec{a}_2) + 1 \cdot (\alpha_3 \vec{a}_3) = \\
&= \alpha_1 \vec{a}_1 + \alpha_2 \vec{a}_2 + \alpha_3 \vec{a}_3 = \vec{z}.
\end{aligned}$$

Demak,  $\langle L(\vec{a}_1, \vec{a}_2, \vec{a}_3); +, \omega_\lambda \mid \lambda \in R \rangle$  algebra chiziqli fazo bo'ladi.

$\vec{a}_1, \vec{a}_2, \vec{a}_3$  vektorlar sistemasi chiziqli qobig'i tashkil etgan chiziqli fazo bazisini topish uchun  $\vec{a}_1, \vec{a}_2, \vec{a}_3$  vektorlar sistemasining bazisini topamiz.

$\vec{a}_1 = \begin{pmatrix} 0 \\ 1 \\ 1 \\ 0 \end{pmatrix}, \vec{a}_2 = \begin{pmatrix} 1 \\ 0 \\ 0 \\ 1 \end{pmatrix}, \vec{a}_3 = \begin{pmatrix} 1 \\ 1 \\ 1 \\ 4 \end{pmatrix}$  sistema vektorlarini matrisaning satrlari sifatida olamiz va matrisaning bazisini topimiz:

$$\begin{aligned}
\vec{a}_1 \begin{pmatrix} 0 & 1 & 1 & 0 \end{pmatrix} \quad \vec{a}_2 \begin{pmatrix} -1 & 0 & 0 & 1 \end{pmatrix} \quad \vec{a}_3 \begin{pmatrix} -1 & 0 & 0 & 1 \end{pmatrix} \\
\vec{a}_2 \begin{pmatrix} -1 & 0 & 0 & 1 \end{pmatrix} \sim \vec{a}_1 \begin{pmatrix} 0 & 1 & 1 & 0 \end{pmatrix} \sim \vec{a}_1 \begin{pmatrix} 0 & 1 & 1 & 0 \end{pmatrix} \\
\vec{a}_3 \begin{pmatrix} 2 & 1 & 1 & 4 \end{pmatrix} \sim \vec{a}_3 + \vec{a}_2 \begin{pmatrix} 0 & 1 & 1 & 6 \end{pmatrix} \sim (\vec{a}_3 + \vec{a}_2) - \vec{a}_1 \begin{pmatrix} 0 & 0 & 0 & 6 \end{pmatrix}
\end{aligned}$$

Matrisaning satr vektorlari chiziqli erkli bo'lganligi uchun,  $\vec{a}_1 = \begin{pmatrix} 0 \\ 1 \\ 1 \\ 0 \end{pmatrix}, \vec{a}_2 = \begin{pmatrix} 1 \\ 0 \\ 0 \\ 1 \end{pmatrix}, \vec{a}_3 = \begin{pmatrix} 1 \\ 1 \\ 1 \\ 4 \end{pmatrix}$  vektorlar

sistemasining bazisi sistemaning o'zidan iborat. Demak,  $L = \langle L(\vec{a}_1, \vec{a}_2, \vec{a}_3); +, \omega_\lambda \mid \lambda \in R \rangle$  chiziqli fazoning bazisi berilgan vektorlar sistemasidan iborat.



## Misol va mashqlar

1.  $\vec{x} = \vec{a} + \vec{b} - \vec{c}$  vektorni toping:

1.1.  $\vec{a} = (4, 2, 3), \vec{b} = (2, 3, 7), \vec{c} = (1, 7, 11)$ .

1.2.  $\vec{a} = (2, 4, -2, 0), \vec{b} = (-1, 3, 17, 3), \vec{c} = (0, -7, 1, 4)$ .

1.3.  $\vec{a} = (4, 2, 3) + (1, 1, 1), \vec{b} = (2, 3, 7), \vec{c} = 2(1, 7, 11)$ .

1.4.  $\vec{a} = (-1)(4, 2, 3), \vec{b} = \vec{c}, \vec{c} = (1, 7, 11)$ .

2.  $\vec{x}$  vektorni toping:

2.1.  $\vec{x} = 2\vec{a} - 3\vec{b} + \vec{c}, \vec{a} = (1, 2, 3, 0), \vec{b} = (-2, 1, 5, -1), \vec{c} = (\sqrt{2}, -1, 0, 1)$ .

2.2.  $-3\vec{a} - \vec{x} = 2\vec{b}, \vec{a} = (0, -2, 1), \vec{b} = (1, -3, 7)$ .

2.3.  $2\vec{x} + 3\vec{a} - 4\vec{b} = \vec{0}, \vec{a} = (\sin \alpha, 0, -\cos \alpha), \vec{b} = (\sin^3 \alpha, \frac{1}{4}, -\cos^3 \alpha)$ .

2.4.  $\frac{1}{2}\vec{a} + 3\vec{b} - \vec{x} = 6\vec{c}, \vec{a} = (1, -3, 2), \vec{b} = (\frac{1}{9}, \frac{11}{3}, -2), \vec{c} = (1, \frac{2}{3}, -2)$ .

3. Vektorlarning quyidagi sistemalari chiziqli bog'liq yoki erkliligini aniqlang hamda uning bazisi va rangini toping:

3.1.  $\vec{a}_1 = (-1, 2, -3, 4); \vec{a}_2 = (-1, 1, -1, 1)$ .

3.2.  $\vec{a}_1 = (0, 2, 0, 4); \vec{a}_2 = (0, -2, -3, 0); \vec{a}_3 = (-1, 1, -1, 1)$ .

3.3.  $\vec{a}_1 = (1, 2, 3); \vec{a}_2 = (2, -3, 4); \vec{a}_3 = (-1, -1, 1); \vec{a}_4 = (3, 4, 2)$ .

3.4.  $\vec{a}_1 = (1, 2, 3, 4, -3); \vec{a}_2 = (-1, -2, 3, 4, 1); \vec{a}_3 = (-5, 1, -7, 1, 2); \vec{a}_4 = (0, 4, 1, 2, 0)$ .

3.5.  $\vec{a}_1 = (2, 3); \vec{a}_2 = (-1, -3); \vec{a}_3 = (1, -1); \vec{a}_4 = (3, 1)$ .

3.6.  $\vec{a}_1 = (1, 1, -1); \vec{a}_2 = (4, 1, 2); \vec{a}_3 = (-2, 4, 7)$ .

3.7.  $\vec{a}_1 = (0, 2, 3, 4); \vec{a}_2 = (5, -2, -3, -4); \vec{a}_3 = (3, 1, 2, -3)$ .

3.8.  $\vec{a}_1 = (0, 2, 0); \vec{a}_2 = (0, -2, -3); \vec{a}_3 = (-1, 1, -1)$ .

- 3.9.  $\vec{a}_1=(-4,2,3)$ ;  $\vec{a}_2=(2,0,4)$ ;  $\vec{a}_3=(-1,-1,-1)$ .
- 3.10.  $\vec{a}_1=(-4,2,3,0)$ ;  $\vec{a}_2=(2,0,0,4)$ ;  $\vec{a}_3=(-1,-1,0,-1)$ .
4. Vektorlarning ( $a$ ) va ( $b$ ) sistemalari ekvivalent ekanligini tekshiring:
- 4.1.  $\vec{a}_1=(2,3)$ ;  $\vec{a}_2=(-1,-3)$ ;  $\vec{a}_3=(1,-1)$ ;  $\vec{a}_4=(3,1)$ ;  
 $\vec{b}_1=(-2,-6)$ ;  $\vec{b}_2=(1,-1)$ ;  $\vec{b}_3=(4,0)$ .
- 4.2.  $\vec{a}_1=(1,-3,4)$ ;  $\vec{a}_2=(-1,-2,-3)$ ;  $\vec{a}_3=(8,1,-1)$ ;  $\vec{a}_4=(-3,-4,-1)$ ;  
 $\vec{b}_1=(-1, 3, -4)$ ;  $\vec{b}_2=(0, -5, 1)$ ;  $\vec{b}_3=(5, -3, -2)$ .
- 4.3.  $\vec{a}_1=(0,1,2,3,4)$ ;  $\vec{a}_2=(-2,-1,2,-3,4)$ ;  $\vec{a}_3=(3,-1,1,-1,1)$ ;  $\vec{a}_4=(9,3,4,1,2)$ ;  
 $\vec{b}_1=(0, -1, -2, -3, -4)$ ;  $\vec{b}_2=(-2, 0, 4, 0, 8)$ .
- 4.4.  $\vec{a}_1=(1,2,3,4)$ ;  $\vec{a}_2=(-1,2,-3,4)$ ;  $\vec{a}_3=(-1,1,-1,1)$ ;  $\vec{a}_4=(3,4,1,2)$ ;  
 $\vec{b}_1=(5, 6, 7, 8)$ ;  $\vec{b}_2=(0, 4, 0, 8)$ ;  $\vec{b}_3=(2, 3, 2, 1)$ .
- 4.5.  $\vec{a}_1=(0,2,0,4)$ ;  $\vec{a}_2=(0,-2,-3,0)$ ;  $\vec{a}_3=(-1,1,-1,1)$ ;  
 $\vec{b}_1=(0, 0, -3, 4)$ ;  $\vec{b}_2=(6, -8, 3, -6)$ ;  $\vec{b}_3=(-1, 3, -1, 5)$ .
- 4.6.  $\vec{a}_1=(0,1,4)$ ;  $\vec{a}_2=(2,-3,4)$ ;  $\vec{a}_3=(-1,1,-1)$ ;  
 $\vec{b}_1=(6, -3, 8)$ ;  $\vec{b}_2=(3, -4, 5)$ ;  $\vec{b}_3=(-2, 2, -2)$ .
- 4.7.  $\vec{a}_1=(-1,2,-3,4)$ ;  $\vec{a}_2=(1,2,3,-4)$ ;  $\vec{a}_3=(1,1,-1,1)$ ;  
 $\vec{b}_1=(-1, 6, -3, 4)$ ;  $\vec{b}_2=(0, 4, 0, 0)$ ;  $\vec{b}_3=(2, 3, 2, -3)$ .
- 4.8.  $\vec{a}_1=(1,-2,3,-4)$ ;  $\vec{a}_3=(-1,-1,-1,-1)$ ;  $\vec{a}_3=(-3,4,1,2)$ ;  
 $\vec{b}_1=(0, -3, 2, -5)$ ;  $\vec{b}_2=(-4, 3, 0, 1)$ .
- 4.9.  $\vec{a}_1=(0,2,3,4)$ ;  $\vec{a}_2=(-1,0,-1,1)$ ;  $\vec{a}_3=(3,4,1,0)$ ;  
 $\vec{b}_1=(-1, 2, 2, 5)$ ;  $\vec{b}_2=(2, 4, 0, -1)$ ;  $\vec{b}_3=(-6, -8, -2, 0)$ .
- 4.10.  $\vec{a}_1=(-1,1,-3,3)$ ;  $\vec{a}_2=(-4,1,-3,0)$ ;  
 $\vec{b}_1=(-3, 0, 0, -3)$ ;  $\vec{b}_2=(4, 3, 2, 2)$ .
5.  $\vec{x}$  vektorning ( $a$ ) sistemadagi chiziqli ifodasini toping :
- 5.1.  $\vec{x}=(1,1,1)$ ;  $\vec{a}_1=(1,2,3)$ ;  $\vec{a}_2=(2,-3,4)$ ;  $\vec{a}_3=(-1,-1,1)$ ;  $\vec{a}_4=(3,4,2)$ .
- 5.2.  $\vec{x}=(4,7,1,-1)$ ;  $\vec{a}_1=(-1,7,-3,9)$ ;  $\vec{a}_2=(-1,6,-1,1)$ ;  $\vec{a}_3=(3,-4,-1,2)$ .

$$5.3. \vec{x} = (-4, 9); \vec{a}_1 = (3, 4); \vec{a}_2 = (-2, -3); \vec{a}_3 = (-1, 6).$$

$$5.4. \vec{x} = (1, 1, 1, 1, 1); \vec{a}_1 = (0, 1, 2, 3, 4); \vec{a}_2 = (-2, -1, 2, -3, 4); \vec{a}_3 = (3, -1, 1, -1, 1).$$

$$5.5. \vec{x} = (1, -3, 0); \vec{a}_1 = (0, 1, 4); \vec{a}_2 = (2, -3, 4); \vec{a}_3 = (-1, 1, -1).$$

$$5.6. \vec{x} = (-6, -1, 0, 0, 1); \vec{a}_1 = (1, 2, 3, 4, -3); \vec{a}_2 = (-1, -2, 3, 4, 1); \vec{a}_3 = (-5, 1, -7, 1, 2).$$

$$5.7. \vec{x} = (-9, 1); \vec{a}_1 = (2, 3); \vec{a}_2 = (-1, -3); \vec{a}_3 = (1, -1); \vec{a}_4 = (3, 1).$$

$$5.8. \vec{x} = (-2, -1, 0); \vec{a}_1 = (1, -3, 4); \vec{a}_2 = (-1, -2, -3); \vec{a}_3 = (8, 1, -1); \vec{a}_4 = (-3, -4, -1).$$

$$5.9. \vec{x} = (4, -1, 1); \vec{a}_1 = (5, 3, -4); \vec{a}_2 = (0, 2, 4); \vec{a}_3 = (1, 5, 2).$$

6. 5-misoldagi (a) sistema chiziqli qobig'ining chiziqli fazo tashkil etishini tekshiring.

7.  $F^n$  da aniqlangan qo'shish va skalyarni vektorga ko'paytirish amallarining quyidagi xossalari isbotlang:

$$1^\circ. \forall (\vec{a}, \vec{b} \in F^n) (\vec{a} + \vec{b} = \vec{b} + \vec{a}) \text{ -qo'shishning kommutativlik xossasi};$$

$$2^\circ. \forall (\vec{a}, \vec{b}, \vec{c} \in F^n) ((\vec{a} + \vec{b}) + \vec{c} = \vec{a} + (\vec{b} + \vec{c})) \text{ -qo'shishning assosiativlik xossasi};$$

$$3^\circ. \forall (\vec{a} \in F^n) (\vec{a} + \vec{0} = \vec{a}) \text{ (qo'shishga nisbatan neytral element mavjud);}$$

$$4^\circ. \forall (\vec{a} \in F^n) (\vec{a} + (-\vec{a}) = \vec{0}) \text{ (qo'shish amaliga nisbatan simmetrik element mavjud);}$$

$$5^\circ. \forall (\lambda \in F) \wedge \forall (\vec{a} \in F^n) (\lambda(\vec{a} + \vec{b}) = \lambda\vec{a} + \lambda\vec{b}) \text{ (skalyarni vektorlar yig'indisiga ko'paytirish distributiv);}$$

$$6^\circ. \forall (\lambda, \mu \in F) \wedge \forall (\vec{a} \in F^n) ((\lambda \cdot \mu)\vec{a} = \lambda(\mu\vec{a})) \text{ (skalyarlar ko'paytmasini vektorga ko'paytirish assosiativ);}$$

$$7^\circ. \forall (\lambda, \mu \in F) \wedge \forall (\vec{a} \in F^n) ((\lambda + \mu)\vec{a} = (\lambda\vec{a} + \mu\vec{a})) \text{ (skalyarlar yig'indisini vektorga ko'paytirish distributiv);}$$

$$8^\circ. \forall (\vec{a} \in F^n) (1 \cdot \vec{a} = \vec{a}).$$

8. Quyidagi to'plamlar  $R$  maydon ustida chiziqli fazo tashkil etishini isbotlang:

- 8.1.  $V = \left\{ \frac{a}{b} \mid a, b \in \mathbb{Z} \wedge b \neq 0 \right\}$ .
- 8.2.  $V = \{ (a, 0) \mid a \in \mathbb{R} \}$ .
- 8.3.  $V = \{ (a, 0, 0) \mid a \in \mathbb{R} \}$ .
- 8.4.  $V = \{ (a, 0, c) \mid a, c \in \mathbb{R} \}$ .
- 8.5.  $V = \{ (a, 0, b, 0) \mid a, b \in \mathbb{R} \}$ .
- 8.6.  $V = \{ (0, a, b, 0) \mid a, b \in \mathbb{R} \}$ .
- 8.7.  $V = \{ ax + by \mid a, b \in \mathbb{R} \}$ .
- 8.8.  $V = \{ y = ax + b \mid a, b \in \mathbb{R} \}$ .
- 8.9.  $V = \{ ax + b\sqrt{2} \mid a, b \in \mathbb{Q} \}$ .
- 8.10.  $V = \{ ax - by + cz \mid a, b, c \in \mathbb{R} \}$ .

9. Har qanday  $\alpha_{ij}$  sonlar uchun quyidagi vektorlar sistemasi chiziqli erkli

bo'lishini isbotlang:

$$\begin{aligned} \vec{a}_1 &= (1, 0, 0, \dots, 0, 0, \alpha_{11}, \alpha_{12}, \dots, \alpha_{1k}), \\ \vec{a}_2 &= (0, 2, 0, \dots, 0, 0, \alpha_{21}, \alpha_{22}, \dots, \alpha_{2k}), \\ &\dots\dots\dots \\ \vec{a}_m &= (0, 0, 0, \dots, 0, 1, \alpha_{m1}, \alpha_{m2}, \dots, \alpha_{mk}) \end{aligned}$$

10. Har qanday  $\alpha_i (i = 1, 2, \dots, n)$  sonlar uchun quyidagi n-o'lchovli vektorlar sistemasi chiziqli bog'liq bo'lishini isbotlang:

$$\begin{aligned} \vec{e}_1 &= (1, 0, 0, \dots, 0, 0), \\ \vec{e}_2 &= (0, 1, 0, \dots, 0, 0), \\ &\dots\dots\dots \\ \vec{e}_n &= (0, 0, 0, \dots, 0, 1), \\ \vec{a} &= (\alpha_1, \alpha_2, \dots, \alpha_n) \end{aligned}$$

11. Kamida bitta nol vektorga ega vektorlarning  $\vec{a}_1, \vec{a}_2, \dots, \vec{a}_n$  chekli sistemasi chiziqli bog'langan sistema bo'lishini isbotlang.

12. Chekli vektorlar sistemasining biror-bir qismi chiziqli bog'langan bo'lsa, sistemaning o'zi ham chiziqli bog'langan bo'lishini isbotlang.

13. Vektorlarning chiziqli bog'lanmagan sistemasining har qanday qism sistemasi chiziqli bog'lanmagan sistema bo'lishini isbotlang.

14. Agar  $\vec{a}_2, \dots, \vec{a}_n$  vektorlardan kamida bittasi o'zidan oldingi vektorlarning chiziqli kombinasiyasidan iborat bo'lsa, u holda  $\vec{a}_1 \neq \vec{0}$  bo'lgan  $\vec{a}_1, \vec{a}_2, \dots, \vec{a}_n$  vektorlardan iborat sistema chiziqli bog'langan bo'lishini isbotlang.

15. Agar  $\vec{a}_1, \vec{a}_2, \dots, \vec{a}_n$  vektorlarning sistemasi chiziqli bog'lanmagan bo'lib,  $\vec{a}_1, \vec{a}_2, \dots, \vec{a}_n, \vec{b}$  sistema chiziqli bog'langan bo'lsa, u holda  $\vec{b}$  vektor  $\vec{a}_1, \vec{a}_2, \dots, \vec{a}_n$  vektorlar sistemasi orqali yagona usulda chiziqli ifodalanishini isbotlang.

16. Agar  $\vec{a}$  vektor  $\vec{b}_1, \vec{b}_2, \dots, \vec{b}_n$  orqali va  $\vec{b}_i (i = \overline{1, n})$  vektorlar  $\vec{c}_1, \vec{c}_2, \dots, \vec{c}_m$  vektorlar orqali chiziqli ifodalansa, u holda  $\vec{a}$  vektor  $\vec{c}_1, \vec{c}_2, \dots, \vec{c}_m$  vektorlar orqali chiziqli ifodalanishini isbotlang.

17. Agar  $\vec{a}_1, \dots, \vec{a}_{n+1}$  vektorlar  $\vec{b}_1, \vec{b}_2, \dots, \vec{b}_n$  vektorlar orqali chiziqli ifodalansa, u holda  $\vec{a}_1, \dots, \vec{a}_{n+1}$  sistema chiziqli bog'langan bo'lishini isbotlang.

18. Agar  $\vec{a}_1, \vec{a}_2, \dots, \vec{a}_n$  vektorlar  $\vec{b}_1, \vec{b}_2, \dots, \vec{b}_m$  sistema orqali chiziqli ifodalansa va  $n > m$  bo'lsa, u holda  $\vec{a}_1, \vec{a}_2, \dots, \vec{a}_n$  sistema chiziqli bog'langan bo'lishini isbotlang.

19. Agar  $\vec{a}_1, \vec{a}_2, \dots, \vec{a}_n$  vektorlar  $\vec{b}_1, \vec{b}_2, \dots, \vec{b}_m$  sistema orqali chiziqli ifodalansa va  $\vec{a}_1, \vec{a}_2, \dots, \vec{a}_n$  sistema chiziqli bog'lanmagan bo'lsa, u holda  $n \leq m$  bo'lishini isbotlang.

20. Agar vektorlarning har qanday chiziqli erkli ikkita chekli sistemalari ekvivalent bo'lsa, ulardagi vektorlar soni teng bo'lishini isbotlang.

21. Agar vektorlarning har qanday chiziqli erkli ikkita chekli sistemalari ekvivalent bo'lsa, ulardagi vektorlar soni teng bo'lishini isbotlang.

22. Agar vektorlarning bir chekli sistemasi ikkinchi sistemani elementar almashtirishlar natijasida hosil qilingan bo'lsa, bunday sistemalar ekvivalent bo'lishini isbotlang.

23. Kamida bitta noldan farqli vektorga ega bo'lgan har qanday chekli sistema bazisga ega. Vektorlar chekli sistemasining har qanday ikkita bazisi bir hil sondagi vektorlardan iborat bo'lishini isbotlang.

24.  $\vec{a}_2, \dots, \vec{a}_n$  vektorlar sistemasi  $\vec{b}_1, \vec{b}_2, \dots, \vec{b}_m$  vektorlar sistemasi orqali chiziqli

ifodalansa, u holda  $\vec{a}_2, \dots, \vec{a}_n$  sistemaning rangi  $\vec{b}_1, \vec{b}_2, \dots, \vec{b}_m$  sistemaning rangidan katta emasligini ko'rsating.

25. Vektorlar chekli sistemasining har qanday qism sistemasining rangi sistema rangidan katta emasligini isbotlang.

26. Vektorlar ekvivalent chekli sistemalarining ranglari teng bo'lishini isbotlang.

27.  $n$ -o'lchovli arifmetik vektor fazoni har qanday chekli sistemasining rangi  $n$  dan katta emasligini ko'rsating.

28. Agar vektorlar chekli sistemasining rangi  $n$  ga teng bo'lsa, u holda uning  $k$  ta vektordan iborat har qanday qism sistemasi  $k > n$  bo'lganda chiziqli bog'langan bo'lishini isbotlang.

29. Agar  $\vec{a}_2, \dots, \vec{a}_n$  vektorlarning sistemasining rangi  $\vec{a}_2, \dots, \vec{a}_n, \vec{b}$  vektorlar sistemasining rangiga teng bo'lsa, u holda  $\vec{b}$  vektorni  $\vec{a}_2, \dots, \vec{a}_n$  vektorlar sistemasining chiziqli kombinatsiyasi ko'rinishida ifodalash mumkinligini ko'rsating.

30.  $L(\vec{a}_1, \vec{a}_2, \dots, \vec{a}_n)$  chiziqli qobiq vektor fazo tashkil etishini isbotlang.

31. Agar  $\vec{b}_1, \vec{b}_2, \dots, \vec{b}_m$  sistemaning xar bir vektori  $\vec{a}_1, \vec{a}_2, \dots, \vec{a}_n$  sistema orqali

32. chiziqli ifodalansa, u holda  $L(\vec{b}_1, \vec{b}_2, \dots, \vec{b}_m) \subset L(\vec{a}_1, \vec{a}_2, \dots, \vec{a}_n)$  bo'lishini isbotlang.

33. . Agar  $\vec{a}_1, \vec{a}_2, \dots, \vec{a}_n$  sistemaning rangi  $k$  bo'lsa, u holda  $L(\vec{a}_1, \vec{a}_2, \dots, \vec{a}_n)$  chiziqli qobiq  $k$  o'lchovli bo'lishini ko'rsating.

34.  $N$  chiziqli ko'phillik  $F^n$  fazoning qismfazosini ifodalashi uchun  $\vec{x}_0 \in W$ , ya'ni  $N=W$  munosabat bajarilishi zarur va etarli ekanligini isbotlang.

35. Ixtiyoriy ikkita  $\vec{x}_0+W$  va  $\vec{y}_0+W$  chiziqli ko'philliklar umumiy elementga ega bo'lmaydi yoki ular ustma-ust tushadi. Isbotlang.

36.  $F^n$  vektor fazoning qismfazolari  $W$  va  $W'$  berilgan bo'lsin. U holda  $N_1=\vec{x}_1+W$ ,  $N_2=\vec{x}_2+W'$  ko'philliklarning ustma-ust tushishi va  $\vec{x}_1-\vec{x}_2 \in W$  bo'lishi zarur va etarli. Isbotlang.





## Takrorlash uchun savollar

1. n-o'lvohli vektor deb nimaga aytiladi?
2. n-o'lvohli vektorlarning yig'indisi va skalyarni vektorga ko'paytmasi deb nimaga aytiladi?
3. n-o'lvohli arifmetik vektor fazo deb nimaga aytiladi?
4. Vektorlarning chiziqli bog'liq sistemasi deb nimaga aytiladi?
5. Vektorlarning chiziqli bog'liq bo'lmagan sistemasi ta'rifini ayting.
6. Vektorlarning ekvivalent sistemalari deb nimaga aytiladi?
7. Vektorlarning sistemasida qanday elementar almashtirishlar bajariladi?
8. Elementar almashtirishlar natijasida qanday sistema hosil bo'ladi?
9. Vektorlar chekli sistemasining bazisi va rangiga ta'rif bering.
10. Vektorlar sistemacining chiziqli qobig'i deb nimaga aytiladi?
11. Chiziqli qobiqning asosiy xossalarini bayon eting.
12. Chiziqli ko'phillikka ta'rif bering.
13. Chiziqli ko'phillikning asosiy xossalarini ayting.
14. Chiziqli ko'phillikka maktab matematikasidan misol keltiring.



## 14-§. Matrisa va uning rangi

**Asosiy tushunchalar:** matrisa, nomdosh matrisa, teng matrisalar, matrisaning satr rangi, matrisaning ustun rangi, transponirlangan matrisa, matrisani elementar almashtirishlar, pog'onasimon matrisa.

$F = \langle F; +, -, \cdot, ^{-1}, 0, 1 \rangle$  maydon berilgan bo'lsin.

F maydonning  $m \times n$  ta  $a_{ij}$  ( $i = \overline{1, m}, j = \overline{1, n}$ ) elementlaridan tuzilgan ushbu

$$A = \begin{pmatrix} a_{11} & a_{12} & \dots & a_{1n} \\ a_{21} & a_{22} & \dots & a_{2n} \\ \dots & \dots & \dots & \dots \\ a_{m1} & a_{m3} & \dots & a_{mn} \end{pmatrix}$$

ko'rinishdagi jadval F maydon ustidagi  $m \times n$  tartibli matrisa deyiladi.

A va B matrisalar berilgan bo'lib, ularning mos ravishda satrlari va ustunlari soni teng bo'lsa, u xolda A va B matrisalarni nomdosh matrisalar deb yuritiladi.

A matrisaning xar bir  $a_{ij}$  elementi V matrisaning unga mos  $b_{ij}$  elementiga teng bulsa, u xolda A va B nomdosh matrisalar teng (aks xolda teng emas) matrisalar deyiladi.

Bitta satrli matrisalarni satr vektorlar, bitta ustunli matrisalarni ustun vektorlar deb qarash mumkin.

$$A = \begin{pmatrix} a_{11} & a_{12} & \dots & a_{1n} \\ a_{21} & a_{22} & \dots & a_{2n} \\ \dots & \dots & \dots & \dots \\ a_{m1} & a_{m2} & \dots & a_{mn} \end{pmatrix} \text{ matrisada } \bar{A}_1, \dots, \bar{A}_m \text{ satr vektorlar va } \bar{A}^1, \dots, \bar{A}^n$$

ustun vektorlar mavjud.

Matrisadagi satr vektorlar sistemasining rangiga matrisaning satr rangi, ustun vektorlar sistemasining rangiga uning ustun rangi deyiladi. A matrisaning satr rangini  $r(A)$ , ustun rangini  $\rho(A)$  ko'rinishda belgilaymiz.

Matrisa rangini aniqlash uchun matrisa ustida elementar almashtirishlar bajariladi. Ular quyidagilar:

1. Matrisadagi ixtiyoriy ikkita satr yoki ustun o'rinlarini almashtirish.
2. Matrisadagi ixtiyoriy satr yoki ustun elementlarini noldan farqli songa kupaytirish.
3. Matrisaning satr yoki ustun elementlarini noldan farqli songa ko'paytirib, boshqa satr yoki ustunning mos elementlariga qo'shish.
4. Barcha elementlari nollardan iborat bulgan satr yoki ustunni matrisadan chiqarish.

Matrisa satrining boshlovchi elementi deb uning birinchi (chapdan o'ngga qaraganda) noldan farqli elementiga aytiladi.

Matrisa pog'onasimon deyiladi, agar uning nol qatorlari barcha nolmas qatorlardan keyin joylashgan va  $\alpha_{1k_1}, \alpha_{2k_2}, \dots, \alpha_{rk_r}$  boshlovchi elementlari uchun  $k_1 < k_2 < \dots < k_r$  bo'lsa.

$A^t$  matrisa  $A$  matrisaning transponirlangani deyiladi, agar  $A^t$  matrisa  $A$  matrisa satrlarini ustunlar orqali yozishdan hosil bo'lgan bo'lsa, ya'ni

$$A = \begin{pmatrix} a_{11} & a_{12} & \dots & a_{1n} \\ a_{21} & a_{22} & \dots & a_{2n} \\ \dots & \dots & \dots & \dots \\ a_{m1} & a_{m2} & \dots & a_{mn} \end{pmatrix}; \quad A^t = \begin{pmatrix} a_{11} & a_{21} & \dots & a_{m1} \\ a_{12} & a_{22} & \dots & a_{m2} \\ \dots & \dots & \dots & \dots \\ a_{1n} & a_{2n} & \dots & a_{mn} \end{pmatrix};$$

**Misol.**  $A = \begin{pmatrix} 2 & 1 & 3 & 1 \\ -1 & 0 & 2 & 2 \\ 5 & 4 & 3 & 4 \end{pmatrix}$  matrisaning ustun va satr ranglarini toping.

**Yechish:** Matrisaning satr rangini topish uchun satr elementar almashtirishlar bajarilib, matrisaning satr vektorlari sistemasi rangi aniqlanadi:

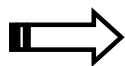
$$A = \begin{pmatrix} 2 & 1 & 3 & 1 \\ -1 & 0 & 2 & 2 \\ 5 & 4 & 3 & 4 \end{pmatrix} \sim \begin{pmatrix} -1 & 0 & 2 & 2 \\ 0 & 1 & 7 & 5 \\ 0 & 4 & 13 & 14 \end{pmatrix} \sim \begin{pmatrix} -1 & 0 & 2 & 2 \\ 0 & 1 & 7 & 5 \\ 0 & 0 & -15 & -6 \end{pmatrix}$$

Hosil bo'lgan pog'onasimon matrisada noldan farqli satrlar 3 ta, demak  $r(A) = 3$ .

Endi matrisaning ustun rangini aniqlash uchun unda ustun elementar almashtirishlar bajaramiz:

$$A = \begin{pmatrix} 2 & 1 & 3 & 1 \\ -1 & 0 & 2 & 2 \\ 5 & 4 & 3 & 4 \end{pmatrix} \sim \begin{pmatrix} 0 & 0 & 0 & 1 \\ -5 & -2 & -4 & 2 \\ -3 & 0 & -9 & 4 \end{pmatrix} \sim \begin{pmatrix} 0 & 0 & 0 & 1 \\ 0 & 0 & 1 & 2 \\ -3 & -9 & 0 & 4 \end{pmatrix} \sim \begin{pmatrix} 1 & 0 & 0 & 0 \\ 2 & 1 & 0 & 0 \\ 4 & 0 & -3 & 0 \end{pmatrix}.$$

Hosil bo'lgan ustunli pog'onasimon matrisada 3 ta nolmas ustun mavjud, ya'ni  $\rho(A) = 3$ .



## Misol va mashqlar

1. Matrisa rangini aniqlang:

1.1.  $\begin{pmatrix} 1 & 2 \\ 1 & 2 \\ 0 & 1 \end{pmatrix}$ .

1.2.  $\begin{pmatrix} 3 & 0 & 2 \\ 6 & 0 & 4 \\ 9 & 0 & 6 \end{pmatrix}$ .

$$1.3. \begin{pmatrix} 3 & 0 & 2 \\ 1 & -1 & 3 \\ 4 & -1 & 6 \end{pmatrix}.$$

$$1.4. \begin{pmatrix} 0 & 2 \end{pmatrix}$$

2. Matrisaning ustun va satr ranglarining tengligini tekshiring:

$$2.1. \begin{pmatrix} 6 & 0 & 9 \\ -4 & 5 & 3 \\ 7 & 1 & 2 \end{pmatrix}.$$

$$2.2. \begin{pmatrix} -1 & 2 & 3 \\ -6 & 5 & 3 \\ 7 & -1 & 4 \end{pmatrix}.$$

$$2.3. \begin{pmatrix} 4 & 0 & 7 \\ -8 & 5 & 3 \\ 4 & 11 & 4 \end{pmatrix}.$$

$$2.4. \begin{pmatrix} 13 & 10 & 3 \\ -6 & 15 & 3 \\ 27 & 1 & 14 \end{pmatrix}.$$

$$2.5. \begin{pmatrix} 2 & 4 & -7 & 0 \\ -2 & 3 & 5 & -1 \\ 0 & 6 & 7 & 9 \\ 11 & 2 & 5 & 7 \end{pmatrix}.$$

$$2.6. \begin{pmatrix} 3 & 11 & -7 & 4 \\ -1 & 13 & -5 & 8 \\ 10 & 9 & 11 & 2 \\ 7 & 4 & 0 & 11 \end{pmatrix}.$$

$$2.7. \begin{pmatrix} -3 & 1 & 7 & 4 \\ -1 & 3 & 5 & 8 \\ 0 & 9 & 11 & 2 \\ 7 & -4 & 0 & 1 \end{pmatrix}.$$

$$2.8. \begin{pmatrix} 1 & 1 & 1 \\ \sin \alpha & \cos \alpha & \operatorname{tg} \alpha \\ \sin^2 \alpha & \cos^2 \alpha & \operatorname{tg}^2 \alpha \end{pmatrix}.$$

3.  $\lambda$  ning turli qiymatlarida  $\begin{pmatrix} \lambda & 1 & 3 & 4 & 1 \\ 1 & \lambda & -1 & 1 & 5 \\ \lambda & \lambda & 4 & 3 & -4 \\ 1 & 1 & 7 & 7 & -3 \end{pmatrix}$  matrisa rangini toping.

4.  $\lambda$  ning qanday qiymatida  $\begin{pmatrix} 3 & 1 & 1 & 4 \\ \lambda & 4 & 10 & 1 \\ 1 & 7 & 17 & 3 \\ 2 & 2 & 4 & 3 \end{pmatrix}$  matrisa rangi eng kichik

bo'ladi?



$\vec{\xi} = (\xi_1, \dots, \xi_n), \xi_i \in F, i = \overline{1, n}$  vektorga aytiladiki, u sistemaning barcha tenglamalarini to'g'ri tenglikka aylantiradi.

ChTS kamida bitta yechimga ega bo'lsa, u hamjoyli, yechimga ega bo'lmasa, hamjoyli bo'lmagan ChTS deyiladi.

Yagona yechimga ega bo'lgan sistema aniq sistema, cheksiz ko'p yechimga ega bo'lgan sistema aniqmas sistema deyiladi.

Berilgan ikkita ChTS uchun birinchisining har bir yechimi ikkinchisi uchun ham yechim bo'lsa, ikkinchi ChTS birinchi ChTSning natijasi deyiladi.

Ikkita ChTS teng kuchli deyiladi, agar birinchisining har bir yechimi ikkinchisiga yechim bo'lsa va aksincha.

ChTSning noma'lumlari oldidagi koeffisientlardan tuzilgan  $A =$

$$\begin{pmatrix} a_{11} & a_{12} & \dots & a_{1n} \\ a_{21} & a_{22} & \dots & a_{2n} \\ \dots & \dots & \dots & \dots \\ a_{m1} & a_{m2} & \dots & a_{mn} \end{pmatrix} \text{ matrisa (1)ning asosiy matrisasi, noma'lumlar oldidagi}$$

koeffisientlar va ozod hadlardan iborat  $B = \begin{pmatrix} a_{11} & a_{12} & \dots & a_{1n} & b_1 \\ a_{21} & a_{22} & \dots & a_{2n} & b_2 \\ \dots & \dots & \dots & \dots & \dots \\ a_{m1} & a_{m2} & \dots & a_{mn} & b_m \end{pmatrix}$  matrisa

(1)ning kengaytirilgan matrisasi deyiladi.

Kroneker-Kapelli teoremasi. chiziqli tenglamalar sistemasi hamjoyli bo'lishi uchun uning asosiy va kengaytirilgan matrisalari ranglarining teng bo'lishi zarur va etarli.

$$\begin{cases} a_{11}x_1 + a_{12}x_2 + \dots + a_{1n}x_n = 0 \\ a_{21}x_1 + a_{22}x_2 + \dots + a_{2n}x_n = 0 \\ \dots \\ a_{m1}x_1 + a_{m2}x_2 + \dots + a_{mn}x_n = 0 \end{cases} \text{ (1*) chiziqli tenglamalar sistemasiga bir}$$

jinsli chiziqli tenglamalar sistemasi (BChTS) deyiladi.

$F^n$  arifmetik vektor fazoning  $W$  qism fazosining bazisini tashkil etuvchi istalgan vektorlar sistemasi (1\*) sistemaning fundamental (asosiy) yechimlari

sistemi deyiladi.

**Misol.** Tenglamalar sistemasini Kroneker-Kapelli teoremasi asosida tekshiring va yechimlarini toping:

$$\begin{cases} 2x_1 + 3x_2 - x_3 + x_4 = 1 \\ -x_1 - x_2 + 3x_3 + 2x_4 = 3 \\ 3x_1 + 4x_3 - 4x_4 = 5 \\ 5x_1 + x_2 + 2x_3 = 6 \end{cases}$$

**Yechish:** Kroneker-Kapelli teoremasiga ko'ra bir jinsli bo'lmagan chiziqli tenglamalar sistemi xamjoyli bo'lishi uchun uning asosiy  $A$  va kengaytirilgan  $B$  matrisalarning satr ranglari teng bo'lishi kerak.

Berilgan chiziqli tenglamalar sistemasining asosiy va kengaytirilgan matrisalari ranglarini topamiz. Buning uchun chiziqli tenglamalar sistemasining no'malumlaridagi koeffitsientlardan  $A$  matrisani, unga ozod hadlar ustunini qo'shib  $B$  matrisani hosil qilamiz:

$$A = \begin{pmatrix} 2 & 3 & -1 & 1 \\ -1 & -1 & 3 & 2 \\ 3 & 0 & 4 & -4 \\ 5 & 1 & 2 & 0 \end{pmatrix} \quad B = \left( \begin{array}{cccc|c} 2 & 3 & -1 & 1 & 1 \\ -1 & -1 & 3 & 2 & 3 \\ 3 & 0 & 4 & -4 & 5 \\ 5 & 1 & 2 & 0 & 6 \end{array} \right)$$

Matrisaning satr rangini topish uchun satr elementar almashtirishlar bajarib, uni pog'onasimon matrisa ko'rinishiga keltiramiz. Elementar almashtirishlar natijasida berilgan matrisaga ekvivalent matrisa hosil bo'ladi:

$$\left( \begin{array}{cccc|c} 2 & 3 & -1 & 1 & 1 \\ -1 & -1 & 3 & 2 & 3 \\ 3 & 0 & 4 & -4 & 5 \\ 5 & 1 & 2 & 0 & 6 \end{array} \right) \sim$$

birinchi va ikkinchi satrlar o'rnini almashtiramiz:

$$\sim \left( \begin{array}{cccc|c} -1 & -1 & 3 & 2 & 3 \\ 2 & 3 & -1 & 1 & 1 \\ 3 & 0 & 4 & -4 & 5 \\ 5 & 1 & 2 & 0 & 6 \end{array} \right) \sim$$

birinchi ustun birinchi qator elementi -1 ni qoldirib birinchi ustun boshqa elementlarini 0 ga aylantiramiz:

$$\sim \left( \begin{array}{cccc|c} -1 & -1 & 3 & 2 & 3 \\ 0 & 1 & 5 & 5 & 7 \\ 0 & -3 & 13 & 2 & 14 \\ 0 & -4 & 17 & 10 & 21 \end{array} \right) \sim$$

birinchi va ikkinchi satrlarni o'zgartirmaymiz, ikkinchi satr yordamida uchinchi, to'rtinchi satrlarning ikkinchi ustunidagi elementlarni nolga aylantiramiz:

$$\sim \left( \begin{array}{cccc|c} -1 & -1 & 3 & 2 & 3 \\ 0 & 1 & 5 & 5 & 7 \\ 0 & 0 & 28 & 17 & 35 \\ 0 & 0 & 37 & 30 & 49 \end{array} \right) \sim$$

1-, 2-, 3- satrlarni qoldirib, 4-satrning 3-ustundagi elementini nolga aylantiramiz:

$$\sim \left( \begin{array}{cccc|c} -1 & -1 & 3 & 2 & 3 \\ 0 & 1 & 5 & 5 & 7 \\ 0 & 0 & 28 & 17 & 35 \\ 0 & 0 & 0 & -211 & -77 \end{array} \right)$$

Hosil bo'lgan pog'onasimon matrisadan asosiy matrisaning rangi  $r(A)=4$  va kengaytirilgan matrisaning rangi  $r(B)=4$  ekanligini aniqlaymiz (noldan farqli satrlar soni).

Demak, chiziqli tenglamalar sistemasining asosiy va kengaytirilgan matrisalarining ranglari teng, ya'ni teorema asosan berilgan chiziqli tenglamalar sistemasi hamjoyli. Endi chiziqli tenglamalar sistemasini yechimlarini topamiz. Buning uchun to'g'ridan-to'g'ri pog'onasimon matrisa yordamida berilgan chiziqli tenglamalar sistemasiga teng kuchli chiziqli tenglamalar sistemasini tuzamiz:

$$\begin{cases} -x_1 - x_2 + 3x_3 + 2x_4 = 3 \\ x_2 + 5x_3 + 5x_4 = 7 \\ 28x_3 + 17x_4 = 35 \\ -211x_4 = -77 \end{cases}$$



Bundan  $x_1 = \frac{165}{211}$ ;  $x_2 = \frac{7}{211}$ ;  $x_3 = \frac{217}{211}$ ;  $x_4 = \frac{77}{211}$  yechimni topamiz.

**Misol.** Berilgan tenglamalar sistemasini Gauss usulida eching:

$$\begin{cases} 3x_1 + x_2 - 2x_3 + x_4 = 2 \\ 2x_1 + x_3 - 2x_4 = 3 \\ 4x_1 + 8x_2 - 12x_3 = 4 \end{cases}$$

**Yechish:** Chiziqli tenglamalar sistemasini Gauss usuli bilan Yechish deganda sistemadagi noma'lumlarni ketma-ket yo'qotish tushuniladi. Ya'ni, tenglamalar sistemasida elementar almashtirishlar bajarib, tanlab olingan tenglama yordamida qolganlaridagi noma'lumlardan biri oldidagi koeffisientini nolga aylantiramiz. Bu jarayonni davom ettirib, berilgan chiziqli tenglamalar sistemasiga teng kuchli chiziqli tenglamalar sistemasini hosil qilamiz. Noma'lumlar soni eng kam bo'lgan tenglamadan boshlab, noma'lumlar topiladi.

Berilgan chiziqli tenglamalar sistemasidagi 3-tenglamani 4 ga bo'lib, birinchi o'ringa joylashtiramiz va uning yordamida qolgan tenglamalardan  $x_1$  noma'lumni yo'qotamiz:

$$\begin{cases} 3x_1 + x_2 - 2x_3 + x_4 = 2 \\ 2x_1 + x_3 - 2x_4 = 3 \\ 4x_1 + 8x_2 - 12x_3 = 4 \end{cases} \Leftrightarrow \begin{cases} x_1 + 2x_2 - 3x_3 = 1 \\ -5x_2 + 7x_3 + x_4 = -1 \\ -4x_2 + 7x_3 - 2x_4 = 1 \end{cases} \Leftrightarrow$$

Hosil bo'lgan chiziqli tenglamalar sistemasidagi 1-, 2- tenglamalarni o'z o'rnida o'zgarishsiz qoldirib, 3-tenglamaning  $x_2$  noma'lumini 2-tenglama yordamida yo'qotamiz:

$$\Leftrightarrow \begin{cases} x_1 + 2x_2 - 3x_3 = 1 \\ -5x_2 + 7x_3 + x_4 = -1 \\ 7x_3 - 12x_4 = 9 \end{cases}$$

Chiziqli tenglamalar sistemasidagi uchinchi tenglama ikki noma'lumli bitta tenglama bo'lib, uning cheksiz ko'p yechimlari mavjud, ya'ni  $x_3$  yoki  $x_4$  noma'lumni ixtiyoriy haqiqiy son qabul qiladi deb olib, ikkinchisini u orqali chiziqli ifodalaymiz.

Tenglamalar sistemasining yechimlari  $x_4$  noma'lum orqali ifodalanuvchi to'rt o'lchovli arifmetik vektorlardan iborat bo'lgan, cheksiz ko'p elementga ega bo'lgan to'plam bo'ladi. Uni topamiz. Buning uchun  $x_4 \in R$  deb olib,  $x_3$  noma'lumni  $x_4$  yordamida ifodalaymiz:

$$7x_3 - 12x_4 = 9 \Leftrightarrow 7x_3 = 12x_4 + 9 \Leftrightarrow x_3 = \frac{12}{7}x_4 + \frac{9}{7}.$$

Oxirgi chiziqli tenglamalar sistemasining ikkinchi tenglamasidagi  $x_3$  noma'lum o'rniga uning topilgan ifodasini qo'yamiz:

$$-5x_2 + 7\left(\frac{12}{7}x_4 + \frac{9}{7}\right) + x_4 = -1 \Leftrightarrow -5x_2 + 84x_4 + 63 + x_4 = -1 \Leftrightarrow -5x_2 + 85x_4 + 63 = -1.$$

Hosil bo'lgan tenglamadagi  $x_2$  noma'lumni  $x_4$  orqali ifodasini topib, birinchi tenglamaga qo'yamiz:

$$-5x_2 = -85x_4 - 64 \Leftrightarrow x_2 = 17x_4 - \frac{64}{5}.$$

Birinchi tenglamadagi  $x_1$  ni topamiz:

$$x_1 - 2x_2 - 3x_3 = 1 \Leftrightarrow x_1 = 2x_2 + 3x_3 + 1 = 34x_4 - \frac{128}{5} + \frac{36}{7}x_4 + \frac{27}{7} = \frac{274}{7}x_4 - \frac{761}{35};$$

Demak, berilgan chiziqli tenglamalar sistemasining yechimlar to'plami

$$\left\{ \left( \frac{274}{7}x_4 - \frac{761}{35}; 17x_4 - \frac{64}{5}; \frac{12}{7}x_4 + \frac{9}{7}; x_4 \right) \mid x_4 \in R \right\}$$
 to'plamdan iborat.

**Misol.** Berilgan

$$\begin{cases} 2x_1 + 3x_2 - x_3 + x_4 = 1 \\ -x_1 - x_2 + 3x_3 + 2x_4 = 3 \\ 3x_1 + 4x_3 - 4x_4 = 5 \\ 5x_1 + x_2 + 2x_3 = 6 \end{cases}$$

chiziqli tenglamalar sistemasi yordamida ko'phillik tuzing.

**Yechish:** 1) Berilgan bir jinsli bo'lmagan chiziqli tenglamalar sistemasi hamjoyli bo'lsa, bitta  $a_0$  yechimini topamiz;

2) Chiziqli tenglamalar sistemasiga assosirlangan bir jinsli chiziqli tenglamalar sistemasining yechimlar fazosi  $W$  aniqlanadi.

3) Chiziqli ko'hillik ta'rifiga ko'ra  $\overrightarrow{a_0} + W$  bir jinsli bo'lmagan hamjoyli

chiziqli tenglamalar sistemasi va unga assosirlangan bir jinsli chiziqli tenglamalar sistemalari yordamida hosil qilingan chiziqli ko'phillik bo'ladi.

$$1) \begin{cases} 2x_1 + 3x_2 - x_3 + x_4 = 1 \\ -x_1 - x_2 + 3x_3 + 2x_4 = 3 \\ 3x_1 + 4x_3 - 4x_4 = 5 \end{cases} \Leftrightarrow \begin{cases} x_1 + x_2 - 3x_3 - 2x_4 = -3 \\ x_2 + 5x_3 + 5x_4 = 7 \\ -3x_2 + 13x_3 + 2x_4 = 14 \end{cases} \Leftrightarrow$$

$$\Leftrightarrow \begin{cases} x_1 + x_2 - 3x_3 - 2x_4 = -3 \\ x_2 + 5x_3 + 5x_4 = 7 \\ 28x_3 + 17x_4 = 35 \end{cases}$$

Noma'lumlarni ketma-ket yo'qotish natijasida 4 ta noma'lumli 3 ta tenglamadan iborat sistema hosil bo'ldi.

Demak, chiziqli tenglamalar sistemasi cheksiz ko'p yechimga ega. Umumiy

$$\text{yechim } \left( \frac{115}{14}x_4 - \frac{25}{4}; -\frac{225}{28}x_4 + 7; -\frac{17}{28}x_4 + \frac{5}{4}; x_4 \right), x_4 \in R \quad \text{ko'rinishda bo'lib,}$$

uning bitta  $\vec{a}_0$  yechimini  $x_4 = 0$  qiymatni qo'yib topamiz;

$$\vec{a}_0 = \left( -\frac{25}{4}; 7; \frac{5}{4}; 0 \right).$$

2) Berilgan chiziqli tenglamalar sistemasiga assosirlangan berilgan chiziqli tenglamalar sistemasi

$$\begin{cases} 2x_1 + 3x_2 - x_3 + x_4 = 0 \\ -x_1 - x_2 + 3x_3 + 2x_4 = 0 \\ 3x_1 + 4x_3 - 4x_4 = 0 \end{cases}$$

ko'rinishda bo'lib, uning yechimlari cheksiz ko'p. Chunki,

$$\begin{cases} 2x_1 + 3x_2 - x_3 + x_4 = 0 \\ -x_1 - x_2 + 3x_3 + 2x_4 = 0 \\ 3x_1 + 4x_3 - 4x_4 = 0 \end{cases} \Leftrightarrow \begin{cases} x_1 + x_2 - 3x_3 - 2x_4 = 0 \\ x_2 + 5x_3 + 5x_4 = 0 \\ 28x_3 + 17x_4 = 0 \end{cases}$$

Bundan,  $x_4 \in R$  desak, yechimlar to'plami

$$W = \left\{ \left( \frac{115}{14}x_4; -\frac{225}{28}x_4; -\frac{17}{28}x_4; x_4 \right) \mid x_4 \in R \right\} \text{ ko'rinishda bo'ladi. Bir jinsli chiziqli}$$

tenglamalar sistemasining yechimlar to'plami chiziqli fazo tashkil etadi ( $W = \langle W; +, \alpha \mid \lambda \in R \rangle$ ).

3) Hosil bo'lgan  $\vec{a}_0$  vektor va  $W$  to'plam yordamida  $H = \vec{a}_0 + W$  chiziqli ko'phillikni hosil qilamiz. Chiziqli ko'phillik  $H$  ning elementlari berilgan bir jinsli bo'lmagan chiziqli tenglamalar sistemasining yechimlar to'plamini tashkil etadi.

**Misol.** Berilgan 1)  $\begin{cases} x_1 + 3x_2 - 5x_3 + x_4 = 1 \\ x_1 - 2x_2 + 3x_3 - 2x_4 = 3 \end{cases}$  va 2)  $\begin{cases} 2x_1 + x_2 - 2x_3 - x_4 = 4 \\ 3x_1 - x_2 + x_3 - 3x_4 = 7 \end{cases}$

chiziqli tenglamalar sistemalari uchun 2-sistema 1-sistemaning natijasi ekanligini tekshiring.

**Yechish.** 2-chiziqli tenglamalar sistemasi 1-chiziqli tenglamalar sistemasining natijasi bo'lishi uchun ta'rifga ko'ra 1-chiziqli tenglamalar sistemasining Har bir yechimi 2-chiziqli tenglamalar sistemasining Ham yechimi bo'lishi kerak.

1-chiziqli tenglamalar sistemasining yechimlarini Gauss usulidan foydalanib topamiz:

$$\begin{cases} x_1 + 3x_2 - 5x_3 + x_4 = 1 \\ x_1 - 2x_2 + 3x_3 - 2x_4 = 3 \end{cases} \Leftrightarrow \begin{cases} x_1 + 3x_2 - 5x_3 + x_4 = 1 \\ -5x_2 + 8x_3 - 3x_4 = 2 \end{cases}$$

Hosil bo'lgan teng kuchli chiziqli tenglamalar sistemasidagi 2-tenglamada  $x_3, x_4 \in R$  deb olib, qolgan noma'lumlarni aniqlaymiz:

$$\begin{cases} x_1 = \frac{1}{5}x_3 + \frac{4}{5}x_4 + \frac{11}{5}; \\ x_2 = \frac{8}{5}x_3 - \frac{3}{5}x_4 - \frac{2}{5}; \\ x_3, x_4 \in R. \end{cases}$$

Demak, berilgan 1-chiziqli tenglamalar sistemasining cheksiz

ko'p yechimlari mavjud bo'lib, umumiy yechim quyidagi ko'rinishda

bo'ladi:  $(\frac{1}{5}x_3 + \frac{4}{5}x_4 + \frac{11}{5}; \frac{8}{5}x_3 - \frac{3}{5}x_4 - \frac{2}{5}; x_3; x_4), x_3, x_4 \in R$ .

Topilgan umumiy yechimni 2-chiziqli tenglamalar sistemasiga qo'yamiz:

$$\begin{cases} 2(\frac{1}{5}x_3 + \frac{4}{5}x_4 + \frac{11}{5}) + \frac{8}{5}x_3 - \frac{3}{5}x_4 - \frac{2}{5} - 2x_3 - x_4 = 4 \\ 3(\frac{1}{5}x_3 + \frac{4}{5}x_4 + \frac{11}{5}) - (\frac{8}{5}x_3 - \frac{3}{5}x_4 - \frac{2}{5}) + x_3 - 3x_4 = 7 \end{cases} \Leftrightarrow \begin{cases} 4 = 4 \\ 7 = 7 \end{cases}$$

Demak, 1-chiziqli tenglamalar sistemasining Har bir yechimi 2-chiziqli

tenglamalar sistemasining Ham yechimi bo'ladi. Ta'rifga ko'ra 2-sistema 1-sistemaga natija ekan.

**Misol.** Berilgan bir jinsli chiziqli tenglamalar sistemasi

$$\begin{cases} x_1 + 3x_2 - 5x_3 + x_4 = 0 \\ x_1 - 2x_2 + 3x_3 - 2x_4 = 0 \end{cases}$$

ning yechimlar to'plami fundamental sistemasini toping.

**Yechish.** Har qanday bir jinsli chiziqli tenglamalar sistemasi hamjoyli hamda yechimlar to'plami chiziqli vektor fazo tashkil etadi.

Agar bir jinsli chiziqli tenglamalar sistemasi yagona nol yechimga ega bo'lsa, u holda yechimlar fazosi nol o'lchovli chiziqli vektor fazo bo'lib, uning fundamental sistemasi mavjud emas.

Agar bir jinsli chiziqli tenglamalar sistemasi cheksiz ko'p yechimlarga ega bo'lsa, u holda yechimlar to'plami tashkil etgan chiziqli vektor fazoning bazisi fundamental sistema bo'ladi.

$$\begin{cases} x_1 + 3x_2 - 5x_3 + x_4 = 0 \\ x_1 - 2x_2 + 3x_3 - 2x_4 = 0 \end{cases} \Leftrightarrow \begin{cases} x_1 + 3x_2 - 5x_3 + x_4 = 0 \\ -5x_2 + 8x_3 - 3x_4 = 0 \end{cases}$$

Hosil bo'lgan teng kuchli bir jinsli chiziqli tenglamalar sistemasidagi 2-tenglamada  $x_3, x_4 \in R$  deb olib, qolgan noma'lumlarni aniqlaymiz:

$$\begin{cases} x_1 = \frac{1}{5}x_3 + \frac{4}{5}x_4; \\ x_2 = \frac{8}{5}x_3 - \frac{3}{5}x_4; \\ x_3, x_4 \in R. \end{cases}$$

Demak, berilgan bir jinsli chiziqli tenglamalar sistemasining cheksiz ko'p yechimlari mavjud bo'lib, umumiy yechim quyidagi ko'rinishda bo'ladi:

$$\left(\frac{1}{5}x_3 + \frac{4}{5}x_4; \frac{8}{5}x_3 - \frac{3}{5}x_4; x_3; x_4\right), x_3, x_4 \in R.$$

Umumiy yechimdagi  $x_3, x_4 \in R$  erkli o'zgaruvchilarga kamida bittasi noldan farqli qiymatlar beramiz. Masalan,  $x_3 = 1, x_4 = 0; x_3 = 0, x_4 = 1$ .

Hosil bo'lgan  $\vec{a}_1 = \left(\frac{1}{5}; \frac{8}{5}; 1; 0\right), \vec{a}_2 = \left(\frac{4}{5}; -\frac{3}{5}; 0; 1\right)$  yechimlar yechimlar to'plamining ixtiyoriy yechimini chiziqli ifodalaydi. Demak, berilgan bir jinsli

chiziqli tenglamalar sistemasi yechimlar to'plamining fundamental sistemasi

$\vec{a}_1 = (\frac{1}{5}; \frac{8}{5}; 1; 0)$ ,  $\vec{a}_2 = (\frac{4}{5}; -\frac{3}{5}; 0; 1)$  vektorlardan iborat.

## ⇒ Misol va mashqlar

1. 2-sistema 1-sistema uchun natija bo'lishini tekshiring:

$$1.1. \quad 1) \begin{cases} x_1 - 3x_2 + 4x_3 + 2x_4 = 1 \\ 2x_1 + 4x_2 - 3x_3 + 3x_4 = -1 \end{cases}; \quad 2) \quad 3x_1 + x_2 + x_3 + 5x_4 = 0.$$

$$1.2. \quad 1) \begin{cases} 2x_1 + 4x_2 - 3x_3 + 3x_4 = -1 \\ 3x_1 + x_2 + 2x_3 - x_4 = 0 \end{cases}; \quad 2) \quad -x_1 + 3x_2 - 5x_3 + 4x_4 = -1.$$

$$1.3. \quad 1) \begin{cases} 3x_1 + x_2 + 2x_3 - x_4 = 0 \\ 12x_1 + 4x_2 + 7x_3 + 2x_4 = 2 \end{cases}; \quad 2) \quad -8x_1 - 3x_2 - 5x_3 - 3x_4 = -2.$$

$$1.4. \quad 1) \begin{cases} 3x_1 - 3x_2 - 6x_3 - x_4 = 1 \\ x_1 - 6x_2 + 5x_3 - 12x_4 = 2 \\ x_1 - 7x_2 + x_3 + 4x_4 = 23 \\ x_2 + 23x_4 = 23 \\ -2x_1 - 7x_2 - 2x_3 + 2x_4 = 14 \end{cases}; \quad 2) \quad \begin{cases} 4x_1 - 9x_2 - x_3 - 13x_4 = 3 \\ -x_1 - 14x_2 - x_3 + 6x_4 = 37 \end{cases}$$

$$1.5. \quad 1) \begin{cases} 6x_1 - 5x_3 + 2x_4 = 41 \\ 3x_1 + 5x_2 - x_3 - 3x_4 = 11 \\ x_1 + 2x_2 + 2x_3 + 13x_4 = 10 \\ 2x_1 + 4x_2 + x_3 - x_4 = 3 \end{cases}; \quad 2) \quad \begin{cases} 3x_1 - 5x_2 - 4x_3 + 5x_4 = 30 \\ -x_1 - 2x_2 + x_3 + 14x_4 = 7 \end{cases}$$

2. Quyidagi elementar almashtirishlar yordamida berilgan ChTSGa teng kuchli ChTS hosil bo'lishini isbotlang:

1) sistemadagi tenglamalar o'rnini almashtirish;

2) sistemani qandaydir tenglamasining ikkala qismini noldan farqli skalyarga ko'paytirish;

3) bir tenglamaning ikkala qismiga skalyarga ko'paytirilgan boshqa tenglamaning mos qismlarini qo'shish yoki ayirish.

3. Kroneker-Kapelli teoremasi yordamida quyidagi ChTSlarini tekshiring va yechimlar to'plamini aniqlang:

$$3.1. \begin{cases} 5x_1 + 4x_2 + 3x_3 = 1, \\ 2x_1 + x_2 + 4x_3 = 1, \\ -3x_1 - 2x_2 - x_3 = -1, \\ x_1 + 3x_2 + 2x_3 = -2. \end{cases}$$

$$3.2. \begin{cases} x_1 + 2x_2 + 3x_3 - 2x_4 = 6, \\ 2x_1 - x_2 - 2x_3 - 3x_4 = 8, \\ 3x_1 + 2x_2 - x_3 + 2x_4 = 4, \\ 2x_1 - 3x_2 + 2x_3 + x_4 = -8. \end{cases}$$

$$3.3. \begin{cases} 6x_1 + 5x_2 + 2x_3 + 4x_4 = -4, \\ 9x_1 + x_2 + 4x_3 - x_4 = -1, \\ 3x_1 + 4x_2 + 2x_3 - 2x_4 = -5, \\ 3x_1 - 9x_2 + 2x_4 = 11. \end{cases}$$

$$3.4. \begin{cases} x_1 + x_2 + 3x_3 - 2x_4 + 3x_5 = 1, \\ 2x_1 + 2x_2 + 4x_3 - x_4 + 3x_5 = 2, \\ 3x_1 + 3x_2 + 5x_3 - 2x_4 + 3x_5 = 1, \\ 2x_1 + 2x_2 + 8x_3 - 3x_4 + 9x_5 = 2. \end{cases}$$

4.  $\lambda$  ning qanday qiymatlarida ChTS hamjoiyl bo'lishini aniqlang:

$$4.1. \begin{cases} 2x_1 - x_2 + 3x_3 + 4x_4 = 5, \\ 4x_1 - 2x_2 + 5x_3 + 6x_4 = 7, \\ 6x_1 - 3x_2 + 7x_3 + 8x_4 = 9, \\ \lambda x_1 - 4x_2 + 9x_3 + 10x_4 = 11. \end{cases}$$

$$4.2. \begin{cases} \lambda x_1 + 3x_2 + 2x_3 - x_4 = \lambda, \\ \lambda x_1 + (\lambda - 1)x_2 + 2x_3 - x_4 = 2, \\ x_1 + 3x_2 - x_3 + 11x_4 = -10, \\ x_1 + 4x_2 - x_3 + 18x_4 = -18. \end{cases}$$

$$4.3. \begin{cases} \lambda x_1 + x_2 + x_3 + x_4 = 1, \\ x_1 + \lambda x_2 + x_3 + x_4 = 1, \\ x_1 + x_2 + \lambda x_3 + x_4 = 1, \\ x_1 + x_2 + x_3 + \lambda x_4 = 1. \end{cases}$$





$$6.3. \begin{cases} 2x_1 + 5x_2 - 8x_3 = 8, \\ 4x_1 + 3x_2 - 9x_3 = 9, \\ 2x_1 + 3x_2 - 5x_3 = 7, \\ x_1 + 8x_2 - 7x_3 = 12. \end{cases}$$

$$6.4. \begin{cases} 3x_1 + 2x_2 + 2x_3 + 2x_4 = 2, \\ 2x_1 + 3x_2 + 2x_3 + 5x_4 = 3, \\ 9x_1 + x_2 + 4x_3 - 5x_4 = 1, \\ 2x_1 + 2x_2 + 3x_3 + 4x_4 = 5, \\ 7x_1 + x_2 + 6x_3 - x_4 = 7. \end{cases}$$

$$6.5. \begin{cases} 6x_1 + 4x_2 + 5x_3 + 2x_4 + 3x_5 = 1, \\ 3x_1 + 2x_2 + 4x_3 + x_4 + 2x_5 = 3, \\ 3x_1 + 2x_2 - 2x_3 + x_4 = 1, \\ 9x_1 + 6x_2 + x_3 + 3x_4 + 2x_5 = 2. \end{cases}$$

$$6.6. \begin{cases} 6x_1 + 3x_2 + 2x_3 + 3x_4 + 4x_5 = 5, \\ 4x_1 + 2x_2 + x_3 + 2x_4 + 3x_5 = 4, \\ 4x_1 + 2x_2 + 3x_3 + 2x_4 + x_5 = 0, \\ 2x_1 + x_2 + 7x_3 + 3x_4 + 2x_5 = 1. \end{cases}$$

7. Gauss usulida tenglamalar sistemasining yechimlarini toping:

$$7.1. \begin{cases} 7x_1 - 3x_2 - 2x_4 = -1, \\ -x_1 + 3x_2 - 2x_3 + x_4 = -6, \\ 2x_2 + 2x_3 + 13x_4 = 14, \\ 2x_1 - 4x_2 - 3x_3 + 2x_4 = -3. \end{cases}$$

$$7.2. \begin{cases} 3x_1 + 4x_2 + 2x_3 - x_4 = -1, \\ -x_1 + 4x_2 - x_3 + 3x_4 = -13, \\ -3x_1 + 2x_2 + 3x_3 + x_4 = 10, \\ 22x_1 - 5x_2 + 7x_3 - 2x_4 = 20. \end{cases}$$

$$7.3. \begin{cases} 3x_1 - 8x_2 + x_3 + 4x_4 = -5, \\ x_1 - 7x_2 + 2x_3 + 14x_4 = 3, \\ -x_1 - x_2 - 4x_3 + 5x_4 = -13. \end{cases}$$

$$7.4. \begin{cases} -4x_1 + 3x_2 + x_3 - 2x_4 = 0, \\ 2x_1 + x_2 - 3x_3 + 3x_4 = 6, \\ x_1 - 3x_2 + 2x_3 + 5x_4 = 10, \\ x_1 - x_2 - 6x_3 + 2x_4 = 1. \end{cases}$$

$$7.5. \begin{cases} x_1 - 13x_2 + x_3 - 3x_4 = 0, \\ x_1 - x_2 - 5x_3 + 3x_4 = 1, \\ 3x_1 + x_2 + 2x_3 - 11x_4 = 10, \\ x_1 - 4x_2 - 3x_3 + 2x_4 = 0. \end{cases}$$

$$7.6. \begin{cases} 3x_1 + 3x_2 - 6x_3 - 2x_4 = -1, \\ 6x_1 + x_2 - 2x_4 = -2, \\ 6x_1 - 7x_2 + 21x_3 + 4x_4 = 3, \\ 9x_1 + 4x_2 - x_3 + 4x_4 = 3. \end{cases}$$

$$7.7. \begin{cases} 11x_1 - 5x_3 + 2x_4 = 5, \\ 3x_1 - 4x_2 - x_3 = -1, \\ x_1 + 2x_2 - 12x_3 + 13x_4 = 7, \\ 5x_1 - 4x_2 + 3x_3 - 2x_4 = 20. \end{cases}$$

$$7.8. \begin{cases} 5x_1 - 13x_2 + x_3 + 23x_4 = 11, \\ x_1 + 3x_2 - 5x_3 + 3x_4 = 1, \\ 13x_1 + x_2 + 2x_3 - 11x_4 = 0, \\ 12x_1 + 4x_2 - 17x_3 + 2x_4 = 20. \end{cases}$$

8. Quyidagi ChTSning umumiy yechimini va yechimlar fundamental sistemasini toping:

$$8.1. \begin{cases} 3x_1 - 3x_2 + 17x_3 - 25x_4 + 7x_5 = 0, \\ x_1 + 2x_2 - 7x_3 + x_4 - 11x_5 = 0. \end{cases}$$

$$8.2. \begin{cases} x_1 + 4x_2 + 2x_3 - 3x_5 = 0, \\ 2x_1 + 9x_2 + 5x_3 + 2x_4 + x_5 = 0, \\ x_1 + 3x_2 + x_3 - 2x_4 - 9x_5 = 0. \end{cases}$$

$$8.3. \begin{cases} x_1 - 3x_2 + 2x_3 + x_4 = 0, \\ -x_1 - x_2 + 2x_3 + 4x_4 = 0, \\ 4x_1 + 3x_2 - 4x_3 + x_4 = 0. \end{cases}$$

$$8.4. \begin{cases} 2x_1 - 5x_2 + 4x_3 + 3x_4 = 0, \\ 3x_1 - 4x_2 + 7x_3 + 5x_4 = 0, \\ 4x_1 - 9x_2 + 8x_3 + 5x_4 = 0, \\ -3x_1 + 2x_2 - 5x_3 + 3x_4 = 0. \end{cases}$$

$$8.5. \begin{cases} -5x_1 + 13x_2 - 3x_3 - 25x_4 + 6x_5 = 0, \\ 2x_1 - 7x_2 + x_3 - 11x_5 = 0. \end{cases}$$

$$8.6. \begin{cases} x_1 + x_2 + x_3 + x_4 + x_5 = 0, \\ 3x_1 + 2x_2 + x_3 + x_4 - 3x_5 = 0, \\ x_2 + 2x_3 + 2x_4 + 6x_5 = 0, \\ 5x_1 + 4x_2 + 3x_3 + 3x_4 - x_5 = 0. \end{cases}$$

$$8.7. \begin{cases} -9x_1 + 3x_2 - x_3 + 4x_4 = 0, \\ 4x_1 - x_2 + 2x_3 - 5x_4 = 0, \\ -8x_1 + 2x_2 - 3x_3 + 15x_4 = 0. \end{cases}$$

$$8.8. \begin{cases} \lambda x_1 + \lambda x_2 + \lambda x_3 + \lambda x_4 = 0, \\ 2\lambda x_1 + 3\lambda x_2 + 4\lambda x_3 + 5\lambda x_4 = 0. \end{cases}$$

$$8.9. \begin{cases} 25x_1 + 13x_2 - x_3 + 3x_4 = 0, \\ -13x_1 - 4x_2 + x_3 - 5x_4 = 0, \\ 2x_1 + 32x_2 - 3x_3 - 15x_4 = 0. \end{cases}$$

$$8.10. \begin{cases} -4x_1 + (2 + 2\lambda)x_2 + 2\lambda x_3 + 2\lambda x_4 = 0, \\ \lambda x_1 + (1 + \lambda)x_2 + \lambda x_3 + \lambda x_4 = 0, \\ \lambda x_1 + (1 + \lambda)x_2 - 2x_3 + \lambda x_4 = 0, \\ -\lambda x_1 - (1 + \lambda)x_2 - \lambda x_3 - (2 - 2\lambda)x_4 = 0. \end{cases}$$



### Takrorlash uchun savollar

1. n ta noma'lumli m ta chiziqli tenglamalar sistemasi deb nimaga aytiladi?
2. ChTSning yechimi deb nimaga aytiladi?
3. Hamjoyli, hamjoyli bo'lmagan ChTSGa ta'rif bering.
4. ChTSning natijasiga ta'rif bering.

5. ChTSning chiziqli kombinatsiyasi nima?
6. Teng kuchli ChTSlariga ta'rif bering.
7. ChTSni elementar almashtirishlar deganda qanday almashtirishlar tushuniladi?
8. Kroneker-Kapelli teoremasini bayon eting.
9. Bir jinsli ChTS deb qanday sistemaga aytiladi?
10. ChTS va unga assosirlangan BChTS yechimlar yig'indisi, ayirmasi qanday sistemaga yechim bo'ladi?
11. BChTS yechimlar to'plami vektor fazo tashkil etishini tushuntiring.
12. BChTSning fundamental yechimlari sistemasiga ta'rif bering.
13. ChTSni yechishning Gauss usulini tushuntiring.

## VI MODUL. MATRISALAR



### 16-§. Matrisalar va ular ustida amallar

**Asosiy tushunchalar:** kvadrat matrisa, matrisalarni qo'shish, skalyarni matrisaga ko'paytirish, matrisalar ko'paytmasi, teskarilanuvchi matrisa, elementar matrisa, matrisali tenglama.

$F = \langle F; +, \cdot, -, ^{-1}, 0, 1 \rangle$  maydon va maydon ustida matrisalar to'plami berilgan bo'lsin. Quyidagi munosabatlarni aniqlaymiz:

$$\forall A, B \in F^{m \times n} \Rightarrow A = B \Leftrightarrow a_{ij} = b_{ij} \quad i=1, \dots, m; j=1, \dots, n.$$

$$\forall A, B \in F^{m \times n}, A + B = C, C \in F^{m \times n}$$

$$\forall A \in F^{m \times n} \wedge \forall \alpha \in F \Rightarrow \omega_\alpha(A) = \alpha A = B \in F^{m \times n}.$$

$$\forall A \in F^{m \times n}, \forall B \in F^{n \times k} \Rightarrow A \cdot B = C, C \in F^{m \times k}.$$

$$A_i \text{ TM } B^j = a_{i1} b_{1j} + a_{i2} b_{2j} + \dots + a_{in} b_{nj} = c_{ij}, \quad i=1, \dots, m; j=1, \dots, k.$$

Shunday  $X$  va  $A$   $n$ -tartibli kvadrat matrisalar berilgan bo'lib, ular uchun  $XA = AX = E$  ( $E$  –  $n$ -tartibli birlik matrisa) shart bajarilsa, u holda  $X$  matrisaga  $A$  matrisaga teskari matrisa deyiladi va  $A^{-1}$  ko'rinishda belgilanadi.

Teskari matrisaga ega matrisa teskarilanuvchi matrisa deyiladi.

Birlik matrisadan quyidagi elementar almashtirishlarning biri yordamida hosil qilingan matrisaga elementar matrisa deyiladi:

- 1) birlik matrisa satri (ustuni)ni noldan farqli skalarga ko'paytirish.
- 2) birlik matrisa biror bir satri (ustuni) ga noldan farqli skalyarga ko'paytirilgan satr (ustun)ni qo'shish yoki ayirish.

$E$  birlik matrisada bajarilgan  $\varphi$  satr elementar almashtirish 1) yoki 2) ko'rinishdagi elementar almashtirish bo'lsa, u holda hosil bo'lgan elementar matrisani  $E_\varphi$  ko'rinishda belgilaymiz.

Agar  $A$  kvadrat matrisani elementar almashtirishlar zanjiri (ketma-ket bajarilgan elementar almashtirishlar) birlik matrisaga o'tkazsa, u holda  $A$  matrisa



matrisali tenglamalarni tuzish mumkin bo'lsa, ularni Yechish uchun o'zgaruvchining chap yoki o'ng tomonidagi A matrisa teskarilanuvchi bo'lsa, uning yechimi  $A^{-1} \cdot B$  yoki  $B \cdot A^{-1}$  ko'rinishda; o'zgaruvchining o'ng va chap tomonidagi A va B lar teskarilanuvchi bo'lsa,  $X = A^{-1} \cdot C \cdot B^{-1}$  ko'rinishda bo'ladi.

**Misol.**  $A = \begin{pmatrix} 1 & 2 & 3 \\ 4 & 1 & -1 \\ -2 & 1 & 0 \end{pmatrix}$  va  $f(x) = 3x - x^2 + 4$  berilgan bo'lsa,

$f(A)$  ni hisoblang.

**Yechish:**  $f(A) = 3 \cdot A - A^2 + 4$  ni hisoblash uchun  $3 \cdot A$ ,  $A^2$  va  $4 \cdot E$  matrisalarni aniqlaymiz:

$$1) 3 \cdot A = 3 \cdot \begin{pmatrix} 1 & 2 & 3 \\ 4 & 1 & -1 \\ -2 & 1 & 0 \end{pmatrix} = \begin{pmatrix} 3 & 6 & 9 \\ 12 & 3 & -3 \\ -6 & 3 & 0 \end{pmatrix};$$

2)

$$A^2 = \begin{pmatrix} 1 & 2 & 3 \\ 4 & 1 & -1 \\ -2 & 1 & 0 \end{pmatrix}^2 = \begin{pmatrix} 1 & 2 & 3 \\ 4 & 1 & -1 \\ -2 & 1 & 0 \end{pmatrix} \cdot \begin{pmatrix} 1 & 2 & 3 \\ 4 & 1 & -1 \\ -2 & 1 & 0 \end{pmatrix} = \begin{pmatrix} 1+8-6 & 2+2+3 & 3-2 \\ 4+4+2 & 4+1-1 & 12-1 \\ -2+4 & -4+1 & -6-1 \end{pmatrix} =$$

$$\begin{pmatrix} 3 & 7 & 1 \\ 10 & 4 & 11 \\ 2 & -3 & -7 \end{pmatrix};$$

$$3) 4 \cdot E = 4 \cdot \begin{pmatrix} 1 & 0 & 0 \\ 0 & 1 & 0 \\ 0 & 0 & 1 \end{pmatrix} = \begin{pmatrix} 4 & 0 & 0 \\ 0 & 4 & 0 \\ 0 & 0 & 4 \end{pmatrix};$$

$$4) f(A) = 3 \cdot A - A^2 + 4 = \begin{pmatrix} 3 & 6 & 9 \\ 12 & 3 & -3 \\ -6 & 3 & 0 \end{pmatrix} - \begin{pmatrix} 3 & 7 & 1 \\ 10 & 4 & 11 \\ 2 & -3 & -7 \end{pmatrix} + \begin{pmatrix} 4 & -1 & 8 \\ 2 & 3 & -14 \\ -8 & 6 & 11 \end{pmatrix} =$$

$$= \begin{pmatrix} 4 & -1 & 8 \\ 2 & 3 & -14 \\ -8 & 6 & 11 \end{pmatrix}.$$

**Misol.**  $A = \begin{pmatrix} 1 & 1 & 0 \\ 2 & -1 & 1 \\ 4 & 3 & 2 \end{pmatrix}$  matrisaga teskari  $A^{-1}$  matrisani toping.

**Yechish:** 1) Berilgan matrisani teskarilanuvchi ekanligini tekshirib olamiz, ya'ni  $r(A) = 3$  ekanligini:

$$\begin{pmatrix} 1 & 1 & 0 \\ 2 & -1 & 1 \\ 4 & 3 & 2 \end{pmatrix} \sim \begin{pmatrix} 1 & 1 & 0 \\ 0 & -3 & 1 \\ 0 & -1 & 2 \end{pmatrix} \sim \begin{pmatrix} 1 & 1 & 0 \\ 0 & -1 & 2 \\ 0 & 0 & -5 \end{pmatrix}$$

Demak,  $r(A) = 3$  ekan, ya'ni matrisa chiziqli erkli va shu sababli teskarilanuvchi.

2) Teskari matrisani elementar matrisalar yordamida topamiz:

$$\left( \begin{array}{ccc|ccc} 1 & 1 & 0 & 1 & 0 & 0 \\ 2 & -1 & 1 & 0 & 1 & 0 \\ 4 & 3 & 2 & 0 & 0 & 1 \end{array} \right) \sim \left( \begin{array}{ccc|ccc} 1 & 1 & 0 & 1 & 0 & 0 \\ 0 & -3 & 1 & -2 & 1 & 0 \\ 0 & -1 & 2 & -4 & 0 & 1 \end{array} \right) \sim \left( \begin{array}{ccc|ccc} 1 & 1 & 0 & 1 & 0 & 0 \\ 0 & -1 & 2 & -4 & 0 & 1 \\ 0 & 0 & -5 & 10 & 1 & -3 \end{array} \right) \sim$$

$$\sim \left( \begin{array}{ccc|ccc} 1 & 1 & 0 & 1 & 0 & 0 \\ 0 & 1 & -2 & 4 & 0 & -1 \\ 0 & 0 & 1 & -2 & -\frac{1}{5} & \frac{3}{5} \end{array} \right) \sim \left( \begin{array}{ccc|ccc} 1 & 1 & 0 & 1 & 0 & 0 \\ 0 & 1 & 0 & 0 & -\frac{2}{5} & \frac{1}{5} \\ 0 & 0 & 1 & -2 & -\frac{1}{5} & \frac{3}{5} \end{array} \right) \sim$$

$$\left( \begin{array}{ccc|ccc} 1 & 0 & 0 & 1 & \frac{2}{5} & -\frac{1}{5} \\ 0 & 1 & 0 & 0 & -\frac{2}{5} & \frac{1}{5} \\ 0 & 0 & 1 & -2 & -\frac{1}{5} & \frac{3}{5} \end{array} \right)$$

Teskari matrisa to'g'ri topilganligiga tekshirish natijasida ishonch hosil qilamiz.

Tekshirish:  $\begin{pmatrix} 1 & 1 & 0 \\ 2 & -1 & 1 \\ 4 & 3 & 2 \end{pmatrix} \cdot \begin{pmatrix} 1 & \frac{2}{5} & -\frac{1}{5} \\ 0 & -\frac{2}{5} & \frac{1}{5} \\ -2 & -\frac{1}{5} & \frac{3}{5} \end{pmatrix} = \begin{pmatrix} 1 & 0 & 0 \\ 0 & 1 & 0 \\ 0 & 0 & 1 \end{pmatrix}.$



$$\text{Demak, } A^{-1} = \begin{pmatrix} 1 & \frac{2}{5} & -\frac{1}{5} \\ 0 & -\frac{2}{5} & \frac{1}{5} \\ -2 & -\frac{1}{5} & \frac{3}{5} \end{pmatrix}.$$

## Misol va mashqlar

1. Matrisalarni qo'shish amalining quyidagi xossalarini isbotlang:

- 1.1.  $\forall A, B \in F^{m \times n} \Rightarrow A + B = B + A$  (kommutativlik).
- 1.2.  $\forall A, B, C \in F^{m \times n} \Rightarrow (A+B)+C = A + (B+C)$  (assosiativlik).
- 1.3.  $\forall A \in F^{m \times n}, \exists X \in F^{m \times n} \Rightarrow A + X = A$  ( $X=O$ -neytral).
- 1.4.  $\forall A \in F^{m \times n}, \exists A' \in F^{m \times n} \Rightarrow A + A' = O$  ( $A' = -A$  - simmetrik).

2. Skalyarni matrisaga ko'paytirishning quyidagi xossalarini isbotlang:

- 2.1.  $\forall A \in F^{m \times n} \wedge \forall \alpha, \beta \in F \Rightarrow (\alpha + \beta)A = \alpha A + \beta A$ .
- 2.2.  $\forall A \in F^{m \times n} \wedge \forall \alpha, \beta \in F \Rightarrow (\alpha \text{TM} \beta)A = \alpha(\beta A)$ .
- 2.3.  $\forall A, B \in F^{m \times n} \wedge \forall \alpha \in F \Rightarrow \alpha(A+B) = \alpha \text{TM} A + \alpha \text{TM} B$ .
- 2.4.  $\forall A \in F^{m \times n} \wedge \forall \alpha \in F \Rightarrow \alpha \text{TM} A = A \text{TM} \alpha$ .

3.  $f(A)$  ni hisoblang:

$$3.1. f(x) = x^3 + 4x; \quad A = \begin{pmatrix} -1 & 9 \\ 5 & 2 \end{pmatrix}.$$

$$3.2. f(x) = x^2 + 24x + 7; \quad A = \begin{pmatrix} -2 & 20 & 1 \\ 6 & -4 & 3 \\ 7 & 5 & 0 \end{pmatrix}.$$

$$3.3. f(x) = -3x^3 + 15x^2 - 2x + 1; \quad A = \begin{pmatrix} -2 & 3 \\ -1 & 0 \end{pmatrix}.$$

$$3.4. f(x) = -4x^3 + 25x + 9; \quad A = \begin{pmatrix} 7 & -1 & 1 \\ 2 & 6 & 3 \\ -1 & 2 & 5 \end{pmatrix}.$$

4. Matrisalarni ko'paytirish amalining quyidagi xossalarini isbotlang:

$$1. \exists A \cdot B \in F^{m \times k} \wedge \exists B \cdot C \in F^{k \times s} \Rightarrow (A \cdot B) \cdot C = A \cdot (B \cdot C) \text{ (assosiativlik).}$$

$$2. A \in F^{m \times n} \wedge \forall B, C \in F^{n \times k} \Rightarrow A \cdot (B + C) = A \cdot B + A \cdot C \text{ (yig'indini chapdan}$$

ko'paytirish);

$$3. \forall A, B \in F^{m \times n} \wedge \forall C \in F^{n \times k} \Rightarrow (A + B) \cdot C = A \cdot C + B \cdot C \text{ (yig'indini o'ngdan}$$

ko'paytirish);

$$4. \forall \alpha \in F, \forall A \in F^{m \times n}, \forall B \in F^{n \times k} \Rightarrow \alpha^{TM}(A^{TM} B) = (\alpha^{TM} A)^{TM} B.$$

5. Quyidagi matrisalar ko'paytmasini toping:

$$5.1. A = (0, 1, 0, 0), B = \begin{pmatrix} 5 & 2 & -7 & 3 \\ 0 & 1 & 2 & -1 \\ 9 & -3 & 1 & 5 \\ 2 & -1 & 3 & 4 \end{pmatrix}, AB = ?$$

$$5.2. A = \begin{pmatrix} 21 & 22 & 23 & 24 \\ 25 & 26 & 27 & 28 \\ 29 & 30 & 31 & 32 \\ 33 & 34 & 35 & 37 \end{pmatrix}, B = \begin{pmatrix} 1 \\ -1 \\ -1 \\ 1 \end{pmatrix}, AB = ?$$

$$5.3. A = \begin{pmatrix} \cos \alpha & -\sin \alpha \\ \sin \alpha & \cos \alpha \end{pmatrix}, B = \begin{pmatrix} \cos \beta & -\cos \beta \\ \sin \beta & \cos \beta \end{pmatrix}, AB = ?, BA = ?$$

$$5.4. A = \begin{pmatrix} -2 & 3 & 0 & 1 \\ 1 & 1 & 2 & -1 \end{pmatrix}, B = \begin{pmatrix} 2 & 0 \\ 1 & -1 \\ -1 & 2 \\ 1 & 3 \end{pmatrix}, AB = ?, BA = ?$$

$$5.5. A = \begin{pmatrix} 2 & 3 & 0 & -1 \\ 0 & 1 & -1 & 3 \\ 9 & -11 & -3 & 0 \end{pmatrix}, B = \begin{pmatrix} 12 & -6 & 2 \\ 18 & -9 & 3 \\ 24 & -12 & 4 \end{pmatrix}, C = \begin{pmatrix} 11 \\ 12 \\ -30 \end{pmatrix}, \overrightarrow{AB} \overleftarrow{C} = ?$$

$$5.6. A = \begin{pmatrix} 1 \\ 6 \\ -2 \end{pmatrix}, B = \overleftarrow{3 \ 22 \ -35}, C = \begin{pmatrix} 3 \\ -4 \\ 2 \end{pmatrix}, D = \overleftarrow{-3 \ -1}, \overrightarrow{ABCD} = ?$$

6. Hisoblang:

$$1. \begin{pmatrix} 2 & -1 \\ 3 & -2 \end{pmatrix}^n.$$

$$6.2. \begin{pmatrix} 2 & 1 \\ 0 & 2 \end{pmatrix}^n.$$

$$6.3. \begin{pmatrix} \cos \alpha & -\sin \alpha \\ \sin \alpha & \cos \alpha \end{pmatrix}^n. \quad 6.4. \begin{pmatrix} a & 1 \\ 0 & a \end{pmatrix}^n.$$

$$6.5. \begin{pmatrix} 1 & 0 & 0 & 0 \\ 0 & 2 & 0 & 0 \\ 0 & 0 & 3 & 0 \\ 0 & 0 & 0 & 4 \end{pmatrix}^n. \quad 6.6. \begin{pmatrix} 0 & 0 & 0 & \sin \alpha \\ 0 & 0 & \sin \alpha & 0 \\ 0 & \cos \alpha & 0 & 0 \\ \cos \alpha & 0 & 0 & 0 \end{pmatrix}^{2n}.$$

7. Berilgan matrisa bilan kommutativ bo'lgan matrisalarni aniqlang:

$$7.1. \begin{pmatrix} 1 & 0 \\ 1 & 1 \end{pmatrix}. \quad 7.2. \begin{pmatrix} 1 & 2 \\ 3 & 4 \end{pmatrix}.$$

$$7.3. \begin{pmatrix} 7 & -3 \\ 5 & -2 \end{pmatrix}. \quad 7.4. \begin{pmatrix} 3 & 1 & 0 \\ 0 & 3 & 1 \\ 0 & 0 & 3 \end{pmatrix}.$$

$$7.5. \begin{pmatrix} 0 & 1 & 0 \\ 0 & 0 & 1 \\ 0 & 0 & 0 \end{pmatrix}. \quad 7.6. \begin{pmatrix} 1 & 0 & 0 \\ 0 & 2 & 0 \\ 0 & 0 & 3 \end{pmatrix}.$$

$$7.7. \begin{pmatrix} 1 & 0 & 1 \\ 0 & 1 & 0 \\ 1 & 0 & 1 \end{pmatrix}. \quad 7.8. \begin{pmatrix} 0 & 1 & 0 & 0 \\ 0 & 0 & 1 & 0 \\ 0 & 0 & 0 & 1 \\ 0 & 0 & 0 & 0 \end{pmatrix}.$$

8.  $\mathbb{R}$  maydonda  $\begin{pmatrix} 1 & a \\ 0 & 1 \end{pmatrix}$  ko'rinishdagi matrisalar to'plami mul'tiplikativ

9. grupp tashkil etishini va uning haqiqiy sonlar additiv gruppasiga izomorfligini isbotlang.

10.  $\mathbb{R}$  maydonda  $\begin{pmatrix} a+bi & c+di \\ c-di & a-bi \end{pmatrix}$  ko'rinishdagi matrisalar to'plami nolning

bo'luvchilariga ega bo'lmagan halqa tashkil etishini isbotlang.

11.  $\mathbb{Q}$  maydonda  $\begin{pmatrix} a & b \\ -b & a-b \end{pmatrix}$  ko'rinishdagi matrisalar to'plami kommutativ

halqa tashkil etishini isbotlang.

12. Teskari matrisalarning quyidagi xossalarini isbotlang:

$$1) (A^{-1})^{-1} = A;$$

$$2) (AB)^{-1} = B^{-1}A^{-1};$$

$$3) (A^T)^{-1} = (A^{-1})^T.$$

12. Quyidagi matrisalarning teskarisini toping:

$$12.1. \begin{pmatrix} 4 & 3 \\ 3 & 2 \end{pmatrix}.$$

$$12.2. \begin{pmatrix} a & b \\ c & d \end{pmatrix}.$$

$$12.3. \begin{pmatrix} -1 & -1 & 1 \\ 2 & 0 & -3 \\ 1 & 1 & 0 \end{pmatrix}.$$

$$12.4. \begin{pmatrix} 3 & -4 & 5 \\ 2 & -3 & 1 \\ 3 & -5 & -1 \end{pmatrix}.$$

$$12.5. \begin{pmatrix} 2 & 0 & 0 & 0 \\ 3 & 2 & 0 & 0 \\ 1 & 1 & 3 & 4 \\ 2 & -1 & 2 & 3 \end{pmatrix}.$$

$$12.6. \begin{pmatrix} 1 & 1 & 1 & 1 \\ 1 & 1 & -1 & -1 \\ 1 & -1 & 1 & -1 \\ 1 & -1 & -1 & 1 \end{pmatrix}.$$

$$12.7. \begin{pmatrix} 1 & 1 & 1 & \dots & 1 \\ 0 & 1 & 1 & \dots & 1 \\ 0 & 0 & 1 & \dots & 1 \\ \cdot & \cdot & \cdot & \cdot & \cdot \\ 0 & 0 & 0 & \dots & 1 \end{pmatrix}.$$

$$12.8. \begin{pmatrix} 1 & a & a^2 & a^3 & \dots & a^n \\ 0 & 1 & a & a^2 & \dots & a^{n-1} \\ 0 & 0 & 1 & a & \dots & a^{n-2} \\ \cdot & \cdot & \cdot & \cdot & \cdot & \cdot \\ 0 & 0 & 0 & 0 & \dots & 1 \end{pmatrix}.$$

$$12.9. \begin{pmatrix} 2 & -1 & 0 & 0 & \dots & 0 \\ -1 & 2 & -1 & 0 & \dots & 0 \\ 0 & -1 & 2 & -1 & \dots & 0 \\ \cdot & \cdot & \cdot & \cdot & \cdot & \cdot \\ 0 & 0 & 0 & 0 & \dots & 2 \end{pmatrix}.$$

$$12.10. \begin{pmatrix} 1+a_1 & 1 & 1 & \dots & 1 \\ 0 & 1+a_2 & 1 & \dots & 1 \\ 0 & 0 & 1+a_3 & \dots & 1 \\ \cdot & \cdot & \cdot & \cdot & \cdot \\ 0 & 0 & 0 & \dots & 1+a_n \end{pmatrix}.$$

13. Ixtiyoriy A kvadrat matrisa uchun quyidagi shartlar teng kuchli ekanligini isbotlang:

1) A matrisa teskarilantuvchi.

2) A matrisaning satrlari (ustunlari) chiziqli erkli.

14. Quyidagi matrisali tenglamalarni yeching:

$$14.1. \begin{pmatrix} 3 & 5 \\ 2 & 4 \end{pmatrix} X = \begin{pmatrix} 1 & 2 \\ 2 & 4 \end{pmatrix}.$$

$$14.2. \begin{pmatrix} 1 & 2 \\ 3 & 4 \end{pmatrix} X = \begin{pmatrix} 3 & 5 \\ 3 & 9 \end{pmatrix}.$$

$$14.3. X \begin{pmatrix} 1 & -3 \\ 2 & -6 \end{pmatrix} = \begin{pmatrix} 3 & 2 \\ 1 & 4 \end{pmatrix}.$$

$$14.4. X \begin{pmatrix} 3 & 2 \\ 6 & 4 \end{pmatrix} = \begin{pmatrix} -3 & -2 \\ -9 & -6 \end{pmatrix}.$$

$$14.5. \begin{pmatrix} 2 & -1 \\ 3 & -2 \end{pmatrix} X \begin{pmatrix} -5 & 1 \\ 2 & 3 \end{pmatrix} = \begin{pmatrix} 1 & -1 \\ 2 & -3 \end{pmatrix}.$$

$$14.6. \begin{pmatrix} 3 & -1 \\ 5 & -2 \end{pmatrix} X \begin{pmatrix} 5 & 6 \\ 7 & 8 \end{pmatrix} = \begin{pmatrix} 14 & 16 \\ 9 & 10 \end{pmatrix}.$$

$$14.7. \begin{pmatrix} 1 & 2 & -3 \\ 3 & 2 & -4 \\ 2 & -1 & 0 \end{pmatrix} X = \begin{pmatrix} 1 & -3 & 0 \\ 10 & 2 & 7 \\ 10 & 7 & 8 \end{pmatrix}$$

$$14.8. \begin{pmatrix} 0 & 2 & 1 \\ 1 & 3 & 0 \\ -3 & 0 & 4 \end{pmatrix} X = \begin{pmatrix} 2 & 0 & 1 \\ -3 & 0 & 4 \\ 1 & 1 & 2 \end{pmatrix}^2.$$

$$14.9. X \begin{pmatrix} 5 & 3 & 1 \\ 1 & -3 & -2 \\ -5 & 2 & 1 \end{pmatrix} = \begin{pmatrix} -8 & 3 & 0 \\ -5 & 9 & 0 \\ -2 & 15 & 0 \end{pmatrix}.$$

$$14.10. X \begin{pmatrix} 4 & 0 & 1 \\ 0 & 0 & 1 \\ 1 & 1 & 1 \end{pmatrix} = \begin{pmatrix} 1 & 1 & 1 \\ 1 & 1 & 1 \\ 2 & 2 & 2 \end{pmatrix}.$$

$$14.11. \begin{pmatrix} 2 & -3 & 1 \\ 4 & -5 & 2 \\ 5 & -7 & 3 \end{pmatrix} X \begin{pmatrix} 9 & 7 & 6 \\ 1 & 1 & 2 \\ 1 & 1 & 1 \end{pmatrix} = \begin{pmatrix} 2 & 0 & -2 \\ 18 & 12 & 9 \\ 23 & 15 & 11 \end{pmatrix}.$$

$$14.12. \begin{pmatrix} 1 & 3 & 2 & -5 \\ 0 & 1 & -2 & 1 \\ 0 & 0 & 1 & 3 \\ 0 & 0 & 0 & 1 \end{pmatrix} X \begin{pmatrix} 0 & 1 & 1 & 1 \\ 1 & 0 & 1 & 1 \\ 1 & 1 & 0 & 1 \\ 1 & 1 & 1 & 0 \end{pmatrix} = \begin{pmatrix} 3 & 2 & 1 & -1 \\ 1 & 2 & 0 & 3 \\ 0 & -2 & 1 & 0 \\ 1 & -1 & 2 & -2 \end{pmatrix}.$$

15. Quyidagi tenglamalar sistemasini matrisali tenglamaga keltirib yeching:

$$15.1. \begin{cases} x_1 - x_2 + x_3 = 6, \\ 2x_1 + x_2 + x_3 = 3, \\ x_1 + x_2 + 2x_3 = 5. \end{cases} \quad 15.2. \begin{cases} 5x_1 - 4x_2 + 2x_3 = -9, \\ 3x_1 - 2x_2 + x_3 = 3, \\ 10x_1 - 9x_2 + 2x_3 = 7. \end{cases}$$

$$15.3. \begin{cases} 2x_1 + 5x_2 + 4x_3 + x_4 = 20, \\ x_1 + 3x_2 + 2x_3 + x_4 = 11, \\ 2x_1 + 10x_2 + 9x_3 + 7x_4 = 40, \\ 3x_1 + 8x_2 + 9x_3 + 2x_4 = 37. \end{cases}$$

$$15.4. \begin{cases} 3x_1 + 5x_2 - 3x_3 + 2x_4 = 12, \\ 4x_1 - 2x_2 + 5x_3 + 3x_4 = 27, \\ 7x_1 + 8x_2 - x_3 + 5x_4 = 40, \\ 6x_1 + 4x_2 + 5x_3 + 3x_4 = 41. \end{cases}$$

$$15.5. \begin{cases} 2x_1 + 2x_2 - x_3 + x_4 = 4, \\ 3x_1 + 4x_2 - x_3 + 2x_4 = 6, \\ 5x_1 + 8x_2 - 3x_3 + 4x_4 = 12, \\ 3x_1 + 3x_2 - 2x_3 + 2x_4 = 6. \end{cases}$$

$$15.6. \begin{cases} 6x_1 + x_2 + 4x_3 - x_4 = 6, \\ 7x_1 + x_2 + 3x_3 + x_4 = -3, \\ 5x_1 + x_2 + 2x_3 - x_4 = 0, \\ 9x_1 + 2x_2 + 5x_3 - 2x_4 = 0. \end{cases}$$

$$15.7. \begin{cases} 3x_1 - x_2 + x_3 - 4x_4 = 3, \\ 3x_1 - x_2 + 2x_3 - 2x_4 = 3, \\ 5x_1 - x_2 + x_3 - 4x_4 = -1, \\ 11x_1 - 3x_2 + 2x_3 - 5x_4 = -2. \end{cases}$$

$$15.8. \quad \begin{cases} 5x_1 + 2x_2 - x_3 + 3x_4 + 2x_5 = 0, \\ 4x_1 - 7x_3 = 0, \\ 2x_1 + 3x_2 - 7x_3 + 5x_4 + 3x_5 = 2, \\ 2x_1 + 3x_2 - 6x_3 + 4x_4 + 5x_5 = 0, \\ 3x_1 - 4x_3 = 0. \end{cases}$$

16. Quyidagi matrisali tenglamalar sistemasini yeching:

$$16.1. \quad X + Y = \begin{pmatrix} 1 & 1 \\ 0 & 1 \end{pmatrix}, \quad 2X + 3Y = \begin{pmatrix} 1 & 0 \\ 0 & 1 \end{pmatrix}.$$

$$16.2. \quad 2X - Y = \begin{pmatrix} 0 & 1 \\ -1 & 0 \end{pmatrix}, \quad -4X + 2Y = \begin{pmatrix} 0 & -2 \\ 2 & 0 \end{pmatrix}.$$



### Takrorlash uchun savollar

1. Kvadrat matrisa va uning turlari.
2. Matrisalarni qo'shish va uning xossalari.
3. Skalyarni matrisaga ko'paytirish va uning xossalari.
4. Matrisalarni ko'paytirish va uning xossalari.
5. Teskarilanuvchi matrisa deb qanday matrisaga aytiladi?
6. Elementar matrisalar xossalarini ayting.
7. Teskari matrisani ta'rif asosida topish jarayonini bayon qiling.
8. Matrisaning teskarilanish shartlarini ayting.
9. Teskari matrisani elementar matrisalardan foydalanib topish jarayonini tushuntiring.
10. ChTSning matrisali ifodasi qanday hosil qilinadi?
11. Matrisali tenglamalarning qanday ko'rinishlarini bilasiz?
12. Matrisali tenglamani yechish jarayonini bayon qiling.

## VII MODUL. DETERMINANTLAR

### 17-§. O'rniga qo'yushlar

**Asosiy tushunchalar:** n-darajali o'rniga qo'yish, n-darajali simmetrik grupp, inversiya, juft o'rniga qo'yish, toq o'rniga qo'yish, transpozisiya, o'rniga qo'yishning ishorasi.

$A = \{1, 2, 3, \dots, n\}$  to'plamni o'ziga biektiv akslantirishga n-darajali o'rniga qo'yish deyiladi.

A to'plamda aniqlangan  $\varphi$  o'rniga qo'yishni

$$\varphi = \begin{pmatrix} 1 & 2 & \dots & n \\ \varphi(1) & \varphi(2) & \dots & \varphi(n) \end{pmatrix}$$

ko'rinishda belgilanadi. Agar  $\varphi$  va  $\psi$  o'rniga qo'yishlarda  $i_k = j_k (k = \overline{1, n})$  bo'lsa, u holda  $\varphi$  va  $\psi$  o'rniga qo'yishlar o'zaro teng deyiladi.

$\varphi$  va  $\psi$  o'rniga qo'yishlar ko'paytmasi deb  $\varphi$  va  $\psi$  akslantirishlar kompozitsiyasi  $\varphi\psi(i) = \varphi(\psi(i)), i = 1, \dots, n$  ga aytiladi, ya'ni

$$\varphi \cdot \psi = \varphi \cdot \begin{pmatrix} 1 & 2 & \dots & n \\ \psi(1) & \psi(2) & \dots & \psi(n) \end{pmatrix} = \begin{pmatrix} \psi(1) & \psi(2) & \dots & \psi(n) \\ \varphi(\psi(1)) & \varphi(\psi(2)) & \dots & \varphi(\psi(n)) \end{pmatrix}.$$

A to'plamdan olingan  $\varphi$  o'rniga qo'yishga teskari o'rniga qo'yish deb

$$\varphi^{-1} = \begin{pmatrix} \varphi(1) & \varphi(2) & \dots & \varphi(n) \\ 1 & 2 & \dots & n \end{pmatrix} = \begin{pmatrix} 1 & 2 & \dots & n \\ \varphi^{-1}(1) & \varphi^{-1}(2) & \dots & \varphi^{-1}(n) \end{pmatrix} \quad \text{o'rniga}$$

qo'yishga aytiladi.

A to'plamning xar bir elementini shu elementning o'ziga o'tkazuvchi  $\varepsilon$

akslantirishga ayniy o'rniga qo'yish deyiladi va u  $\varepsilon = \begin{pmatrix} 1 & 2 & \dots & i & \dots & n \\ 1 & 2 & \dots & i & \dots & n \end{pmatrix}$

ko'rinishda belgilanadi.



$\langle S_n; \cdot, ^{-1} \rangle$  gruppaga  $n$ -darajali simmetrik gruppaga deyiladi va u  $S_n$  orqali belgilanadi.

$$\varphi = \begin{pmatrix} 1 & 2 & \dots & n \\ \varphi(1) & \varphi(2) & \dots & \varphi(n) \end{pmatrix} \text{ o'rniga qo'yishda } A = \{1, 2, 3, \dots, n\} \text{ to'plamning}$$

ixtiyoriy  $i, j$  elementlaridan tuzilgan juftlik uchun  $i - j$  va  $\varphi(i) - \varphi(j)$  ayirmalar bir hil ishoraga ega bo'lsa, bu juftlik to'g'ri, bir hil ishoraga ega bo'lmasa to'g'ri emas yoki inversiya tashkil etadi deyiladi. o'rniga qo'yishda inversiyalar soni juft (toq) bo'lsa, o'rniga qo'yish juft (toq) o'rniga qo'yish deyiladi.

O'rniga qo'yishda shunday  $i, j$  elementlar mavjud bo'lib, ular uchun  $\varphi(i) = j, \varphi(j) = i, \varphi(s) = s, s \in A \setminus \{i, j\}$  shartlar bajarilsa, bunday o'rniga qo'yish transpozitsiya deyiladi.

$$\varphi = \begin{pmatrix} 1 & 2 & \dots & n \\ \varphi(1) & \varphi(2) & \dots & \varphi(n) \end{pmatrix} \text{ o'rniga qo'yishning ishorasi deb}$$

$$\text{sgn } \varphi = \begin{cases} 1, \text{ agar } \varphi - \text{juft,} \\ -1, \text{ agar } \varphi - \text{toq.} \end{cases} \text{ qiymatga aytiladi.}$$

**Misol.** Berilgan o'rniga qo'yishlar va ular kompozitsiyasining juft-toqligi, ishorasi, inversiyalar sonini aniqlang:

$$\varphi_1 = \begin{pmatrix} 1 & 2 & 3 & 4 & 5 & 6 \\ 2 & 1 & 6 & 5 & 4 & 3 \end{pmatrix}; \quad \varphi_2 = \begin{pmatrix} 1 & 2 & 3 & 4 & 5 & 6 \\ 1 & 2 & 5 & 6 & 4 & 3 \end{pmatrix}$$

**Yechish:**

$$\varphi_1 \circ \varphi_2 = \begin{pmatrix} 1 & 2 & 3 & 4 & 5 & 6 \\ 2 & 1 & 4 & 3 & 5 & 6 \end{pmatrix};$$

$$\varphi_2 \circ \varphi_1 = \begin{pmatrix} 1 & 2 & 3 & 4 & 5 & 6 \\ 2 & 1 & 3 & 4 & 6 & 5 \end{pmatrix};$$

$\varphi_1$  dagi inversiyalar sonini aniqlaymiz:

$$\varphi_1 = \begin{pmatrix} 1 & 2 & 3 & 4 & 5 & 6 \\ 2 & 1 & 6 & 5 & 4 & 3 \end{pmatrix} \text{ o'rniga qo'yishda birinchi qatordagi } i - j$$

ayirmalar manfiy. 2-qatordagi ularga mos ayirmalardan  $\varphi_1(1) - \varphi_1(2) = 2 - 1 = 1$

musbat, qolganlari manfiy, demak  $\varphi_1$  dagi inversiyalar soni 1 ta. Shuning uchun ishorasi  $sqn \varphi_1 = -1$ ;  $\varphi_1$  – toq oʻrniga qoʻyish;

$$\varphi_2 = \begin{pmatrix} 1 & 2 & 3 & 4 & 5 & 6 \\ 1 & 2 & 5 & 6 & 4 & 3 \end{pmatrix} \text{dagi inversiyalar soni 3 ta; } \varphi_2 \text{ – toq oʻrniga qoʻyish}$$

va  $sqn \varphi_2 = -1$ ;

$$\varphi_1 \circ \varphi_2 = \begin{pmatrix} 1 & 2 & 3 & 4 & 5 & 6 \\ 2 & 1 & 4 & 3 & 5 & 6 \end{pmatrix} \text{dagi inversiyalar soni 2 ta, u juft oʻrniga}$$

qoʻyish va  $sqn \varphi_1 \circ \varphi_2 = 1$

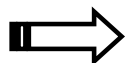
$$\varphi_2 \circ \varphi_1 = \begin{pmatrix} 1 & 2 & 3 & 4 & 5 & 6 \\ 2 & 1 & 3 & 4 & 6 & 5 \end{pmatrix} \text{oʻrniga quyishda inversiyalar soni 2 ta, } \varphi_2 \circ \varphi_1$$

juft oʻrniga qoʻyish va  $sqn \varphi_2 \circ \varphi_1 = 1$ .

**Misol.**  $\begin{pmatrix} 1 & 2 & 3 & 4 & 5 & 6 \\ 2 & 1 & 3 & 4 & 6 & 5 \end{pmatrix}$  oʻrniga qoʻyishni siklli oʻrniga qoʻyishlar

kompozitsiyasi koʻrinishida ifodalang.

**Yechish:**  $\begin{pmatrix} 1 & 2 & 3 & 4 & 5 & 6 \\ 2 & 1 & 3 & 4 & 6 & 5 \end{pmatrix} = (12) (3) (4) (56)$ .



## Misol va mashqlar

1. Oʻrniga qoʻyishlarni koʻpaytiring:

1.1.  $\begin{pmatrix} 1 & 2 & 3 & 4 & 5 \\ 3 & 4 & 1 & 5 & 2 \end{pmatrix} \begin{pmatrix} 1 & 2 & 3 & 4 & 5 \\ 5 & 3 & 1 & 2 & 4 \end{pmatrix}$ .

1.2.  $\begin{pmatrix} 1 & 2 & 3 & 4 & 5 & 6 \\ 3 & 6 & 4 & 5 & 2 & 1 \end{pmatrix} \begin{pmatrix} 1 & 2 & 3 & 4 & 5 & 6 \\ 2 & 4 & 1 & 5 & 6 & 3 \end{pmatrix}$ .

1.3.  $\begin{pmatrix} 1 & 2 & 3 & 4 & 5 & 6 & 7 \\ 4 & 3 & 1 & 2 & 7 & 5 & 6 \end{pmatrix} \begin{pmatrix} 1 & 2 & 3 & 4 & 5 & 6 & 7 \\ 5 & 3 & 1 & 4 & 2 & 7 & 6 \end{pmatrix}$ .

1.4.  $\begin{pmatrix} 1 & 2 & 3 & 4 & 5 & 6 & 7 & 8 & 9 \\ 7 & 5 & 3 & 9 & 1 & 2 & 4 & 6 & 8 \end{pmatrix} \begin{pmatrix} 1 & 2 & 3 & 4 & 5 & 6 & 7 & 8 & 9 \\ 9 & 5 & 7 & 2 & 1 & 3 & 4 & 6 & 8 \end{pmatrix}$ .

2. Oʻrniga qoʻyishni sikllarga yoying:

2.1.  $\begin{pmatrix} 1 & 2 & 3 & 4 & 5 & 6 & 7 \\ 5 & 4 & 1 & 7 & 3 & 6 & 2 \end{pmatrix}$ .

2.2.  $\begin{pmatrix} 1 & 2 & 3 & 4 & 5 & 6 & 7 & 8 \\ 6 & 3 & 2 & 7 & 4 & 5 & 8 & 1 \end{pmatrix}$ .

2.3.  $\begin{pmatrix} 1 & 2 & 3 & 4 & 5 & 6 & 7 & 8 & 9 \\ 2 & 4 & 6 & 8 & 1 & 3 & 5 & 7 & 9 \end{pmatrix}$ .

2.4.  $\begin{pmatrix} 1 & 2 & 3 & 4 & 5 & 6 & 7 & 8 & 9 & 10 \\ 10 & 5 & 4 & 7 & 6 & 9 & 8 & 3 & 2 & 1 \end{pmatrix}$ .

2.5.  $\begin{pmatrix} 1 & 2 & 3 & 4 & \dots & 2n-1 & 2n \\ 2 & 1 & 4 & 3 & \dots & 2n & 2n-1 \end{pmatrix}$ .

2.6.  $\begin{pmatrix} 1 & 2 & \dots & n & n+1 & n+2 & \dots & 2n \\ n+1 & n+2 & \dots & 2n & 1 & 2 & \dots & n \end{pmatrix}$ .

3.  $S_4$  dagi barcha toq o'rniga qo'yishlarni aniqlang.

4. Quyidagi shartlar asosida  $\alpha, \beta$  larni toping:

4.1.  $\alpha \begin{pmatrix} 6 & 7 & 1 & \beta & 5 & 3 \end{pmatrix}$ -toq.

4.2.  $\beta \begin{pmatrix} 1 & 5 & 7 & \alpha & 1 & 2 & 9 & 8 & 4 & 3 \end{pmatrix}$ -juft.

5. Qaysi 10 ta sondan iborat o'rniga qo'yish eng ko'p inversiyaga ega?

Inversiyalar sonini aniqlang.

6.  $S_5$  dan quyidagi shartlar bo'yicha o'rniga qo'yishlarni aniqlang:

6.1. 4 ta inversiyaga ega.

6.2. 7 ta inversiyaga ega.

6.3. 9 ta inversiyaga ega.

6.4. 11 ta inversiyaga ega.

7. O'rniga qo'yishlar ishorasining quyidagi xossalari isbotlang:

1)  $\text{sgn}$  funksiya mul'tiplikativ, ya'ni har qanday  $\varphi, \psi \in S_n$  lar uchun

$\text{sgn}(\varphi\psi) = \text{sgn} \varphi \cdot \text{sgn} \psi$  o'rinli;

2) transpozisiya ishorasi (-1) ga teng;

3) o'zaro teskari o'rniga qo'yishlar ishorasi bir hil;

4) agar  $\tau$ -transpozisiya va  $\varphi$  ixtiyoriy o'rniga qo'yish bo'lsa, u holda  $\text{sgn}(\tau\varphi) = \text{sgn}(\varphi\tau) = -\text{sgn} \varphi$  bo'ladi.

8. O'rniga o'yishlardagi inversiyalar sonini aniqlang:

8.1.  $\langle 4 \ 7 \ \dots \ 3n-2 \ 2 \ 5 \ 8 \ \dots \ 3n-1 \ 3 \ 6 \ 9 \ \dots \ 3n \rangle$ .

8.2.  $\langle 6 \ 9 \ \dots \ 3n \ 2 \ 5 \ 8 \ \dots \ 3n-1 \ 1 \ 4 \ 7 \ \dots \ 3n-2 \rangle$ .

8.3.  $\langle 5 \ 8 \ \dots \ 3n-1 \ 3 \ 6 \ 9 \ \dots \ 3n \ 1 \ 4 \ 7 \ \dots \ 3n-2 \rangle$ .

8.4.  $\langle 5 \ 8 \ \dots \ 3n-1 \ 1 \ 4 \ 7 \ \dots \ 3n-2 \ 3 \ 6 \ 9 \ \dots \ 3n \rangle$ .



### Takrorlash uchun savollar

1. n-darajali o'rniga qo'yishga ta'rif bering.
2. O'rniga qo'yishlar gruppasi tashkil etishini tekshiring.
3. n-darajali simmetrik gruppaga misol keltiring.
4. Inversiyaga ta'rif bering.
5. Juft, toq o'rniga qo'yishlarni ta'riflang.
6. Transpozisiya nima?
7. O'rniga qo'yishning ishorasi qanday aniqlanadi?



### 18-§. Determinantlar

**Asosiy tushunchalar:** determinant, matrisaosti (qismmatrisa), n-tartibli minor, algebraik to'ldiruvchi, Laplas teoremasi, algebraik to'ldiruvchi, Kramer formulalari.

Kvadrat matrisaning har bir satr va har bir ustunidan bittadan elementlar olib tuzilgan ko'paytmalarning algebraik yig'indisiga berilgan kvadrat matrisaning determinanti deyiladi.

$n$ -tartibli kvadrat matrisa  $A = \begin{pmatrix} a_{11} & a_{12} & \dots & a_{1n} \\ a_{21} & a_{22} & \dots & a_{2n} \\ \dots & \dots & \dots & \dots \\ a_{n1} & a_{n2} & \dots & a_{nn} \end{pmatrix}$  ning determinanti deb

$|A| = \sum_{\tau \in S_n} \text{sgn}(\tau) a_{1\tau(1)} \cdot \dots \cdot a_{n\tau(n)}$  ( $n!$  qo'shiluvchilardan iborat) yig'indiga aytiladi.

$F = \langle F; +, -, \cdot, \cdot^{-1}, 0, 1 \rangle$  maydon va maydon ustida  $F^{m \times n}$  matrisalar to'plami berilgan bo'lsin.

$A$  matrisaning matrissaosti deb, uning qandaydir satr va ustunlarini o'chirishdan hosil bo'lgan matrissaga aytiladi.

$k$ -tartibli matrissaosti determinanti  $A$  matrisaning  $k$ -tartibli minori deyiladi.

Kvadrat matrisaning  $i$ - qatori  $j$ -ustunini o'chirishdan hosil bo'lgan matrissaosti determinanti  $a_{ij}$  elementning minori deyiladi va  $M_{ij}$  ko'rinishda belgilanadi.

$A_{ij} = (-1)^{i+j} \cdot M_{ij}$  ko'paytmaga  $a_{ij}$  elementning algebraik to'ldiruvchisi deyiladi.

Laplas teoremasi.  $A = \begin{pmatrix} a_{11} & a_{12} & \dots & a_{1n} \\ a_{21} & a_{22} & \dots & a_{2n} \\ \dots & \dots & \dots & \dots \\ a_{n1} & a_{n2} & \dots & a_{nn} \end{pmatrix}$  kvadrat matrisaning determinanti

biror-bir satr (ustun) elementlari bilan ularning algebraik to'ldiruvchilari ko'paytmalarining yig'indisiga, ya'ni

$|A| = a_{1j}A_{1j} + \dots + a_{nj}A_{nj}$  ( $|A| = a_{i1}A_{i1} + \dots + a_{in}A_{in}$ ),  $i, j \in \{1, \dots, n\}$  ga teng.

$A$  matrisaning  $a_{ij}$  elementining  $A_{ij}$  ( $i, j \in \{1, \dots, n\}$ ) algebraik

to'ldiruvchilaridan iborat  $A^* = \begin{pmatrix} A_{11} & A_{21} & \dots & A_{n1} \\ A_{12} & A_{22} & \dots & A_{n2} \\ \cdot & \cdot & \dots & \cdot \\ A_{1n} & A_{2n} & \dots & A_{nn} \end{pmatrix}$  matrisaga  $A$  matrisaga

biriktirilgan matrisa deyiladi.



$$\begin{vmatrix} 1 & -1 & 0 & 1 \\ 2 & 1 & 3 & 1 \\ -1 & 4 & 1 & 2 \\ 3 & 1 & 0 & 1 \end{vmatrix} = (-1) \cdot (-1)^{1+2} \begin{vmatrix} 2 & 3 & 1 \\ -1 & 1 & 2 \\ 3 & 0 & 1 \end{vmatrix} + 1 \cdot (-1)^{2+2} \begin{vmatrix} 1 & 0 & 1 \\ -1 & 1 & 2 \\ 3 & 0 & 1 \end{vmatrix} +$$

$$+ 4 \cdot (-1)^{3+2} \begin{vmatrix} 1 & 0 & 1 \\ 2 & 3 & 1 \\ 3 & 0 & 1 \end{vmatrix} + 1 \cdot (-1)^{4+2} \begin{vmatrix} 1 & 0 & 1 \\ 2 & 3 & 1 \\ -1 & 1 & 2 \end{vmatrix} = (2+18-3+3)+4(3-9)+$$

$$+(6+2+3-1)=20-2-4(-6)+10=18+24+10=52$$

**Misol.** 
$$\begin{cases} x_1 - 2x_2 + 3x_3 = 1 \\ -x_1 + x_2 - x_3 = 2 \\ 2x_1 + 4x_2 + x_3 = 3 \end{cases}$$
 tenglamalar sistemasini Kramer formulari

yordamida yeching.

**Yechish:** Kramer formulari:

$$x_1 = \frac{\Delta(1)}{\Delta}; \quad x_2 = \frac{\Delta(2)}{\Delta}; \quad x_3 = \frac{\Delta(3)}{\Delta};$$

Demak,  $\Delta, \Delta(1), \Delta(2), \Delta(3)$  larni hisoblaymiz:

$$\Delta = \begin{vmatrix} 1 & -2 & 3 \\ -1 & 1 & -1 \\ 2 & 4 & 1 \end{vmatrix} = 1 \cdot 12 + 4 \cdot 6 + 4 \cdot 2 = 9 \cdot 20 = -11$$

$$\Delta(1) = \begin{vmatrix} 1 & -2 & 3 \\ 2 & 1 & -1 \\ 3 & 4 & 1 \end{vmatrix} = 1 \cdot 24 + 6 \cdot 9 + 4 \cdot 4 = 30$$

$$\Delta(2) = \begin{vmatrix} 1 & 1 & 3 \\ -1 & 2 & -1 \\ 2 & 3 & 1 \end{vmatrix} = 2 \cdot 9 - 2 \cdot 12 + 3 \cdot 1 = 6 - 23 = -17$$

$$\Delta(3) = \begin{vmatrix} 1 & -2 & 1 \\ -1 & 1 & 2 \\ 2 & 4 & 3 \end{vmatrix} = 3 \cdot 4 - 8 \cdot 2 - 8 \cdot 6 = -25$$

Bundan, 
$$x_1 = -\frac{30}{11}; \quad x_2 = \frac{17}{11}; \quad x_3 = \frac{25}{11};$$

## ➡ Misol va mashqlar

1. Determinantni hisoblang:

$$1.1. \begin{vmatrix} -2 & 5 \\ -4 & 7 \end{vmatrix}.$$

$$1.2. \begin{vmatrix} n+1 & n \\ n & n-1 \end{vmatrix}.$$

$$1.3. \begin{vmatrix} 1-3i & 2i \\ 4i^3 & 1+3i \end{vmatrix}.$$

$$1.4. \begin{vmatrix} \log_b a & 1 \\ 1 & \log_a b \end{vmatrix}.$$

$$1.5. \begin{vmatrix} \operatorname{tg} \alpha & \sin \alpha \\ 2 & \cos \alpha \end{vmatrix}.$$

$$1.6. \begin{vmatrix} \frac{1-a^2}{1+a^2} & \frac{2a}{1+a^2} \\ \frac{-2a}{1+a^2} & \frac{1+a^2}{1+a^2} \end{vmatrix}.$$

$$1.7. \begin{vmatrix} 1 & 1 & 1 \\ 1 & 2 & 3 \\ 1 & 3 & 6 \end{vmatrix}.$$

$$1.8. \begin{vmatrix} 2 & -2 & 4 \\ -3 & 3 & -6 \\ 5 & 1 & 0 \end{vmatrix}.$$

$$1.9. \begin{vmatrix} a & b & c \\ b & c & a \\ c & a & b \end{vmatrix}.$$

$$1.10. \begin{vmatrix} a+x & x & x \\ x & b+x & x \\ x & x & c+x \end{vmatrix}.$$

$$1.10. \begin{vmatrix} \sin \alpha & \sin 2\alpha & 1 \\ \cos \alpha & 1 + \cos \alpha & 1 \\ \operatorname{tg} \alpha & 2 \sin \alpha & 1 \end{vmatrix}.$$

$$1.11. \begin{vmatrix} 1 & -1 & \varepsilon \\ \varepsilon & \varepsilon^2 & 1 \\ -1 & \varepsilon & -1 \end{vmatrix}, \varepsilon = \cos \frac{\pi}{3} + i \sin \frac{\pi}{3}.$$

$$1.12. \begin{vmatrix} \alpha^2 + 1 & \alpha\beta & \alpha\gamma \\ \alpha\beta & \beta^2 + 1 & \beta\gamma \\ \alpha\gamma & \beta\gamma & \gamma^2 + 1 \end{vmatrix}.$$

$$1.13. \begin{vmatrix} \alpha & \beta & \gamma \\ \beta & \gamma & \alpha \\ \gamma & \alpha & \beta \end{vmatrix}, \alpha, \beta, \gamma \in \{x \mid x^3 + px + q = 0\}.$$

2. Determinantning quyidagi xossalarini isbotlang:

2.1. Nol satr yoki ustunga ega kvadrat matrisaning determinanti nolga teng.



2.2. Diagonal matrisaning determinanti asosiy diagonal elementlari ko'paytmasiga teng.

2.3. Uchburchak matrisaning determinanti asosiy diagonal elementlari ko'paytmasiga teng.

2.4. Kvadrat matrisa va unga transponirlangan matrisalar determinantlari teng.

2.5. Kvadrat matrisaning ikkita satr (ustun)lari o'rnini almashtirish natijasida determinant ishorasi o'zgaradi.

2.6. Ikkita bir hil satr (ustun)ga ega kvadrat matrisa determinanti nolga teng.

2.7. A kvadrat matrisaning biror bir satr (ustun) elementlarini noldan farqli  $\lambda$  skalyarga ko'paytirilsa, u holda A matrisaning determinanti  $\lambda$  skalyarga ko'paytiriladi.

2.8. Qandaydir ikkita satr (ustun)lari proporsional bo'lgan kvadrat matrisaning determinanti nolga teng.

2.9. Kvadrat matrisa  $i$ - qatori (ustuni)ning har bir elementi  $m$  ta qo'shiluvchilardan iborat bo'lsa, bunday kvadrat matrisaning determinanti  $m$  ta determinantlar yig'indisidan iborat bo'lib, birinchi determinant  $i$ - qatori (ustuni)da birinchi, ikkinchi determinantda ikkinchi qo'shiluvchilar va h.z. boshqa qatorlar A matrisanikidek bo'ladi.

2.10. Kvadrat matrisaning biror-bir satr (ustun)iga noldan farqli skalyarga ko'paytirilgan boshqa satr (ustun)ni qo'shish natijasida determinant o'zgarmaydi.

2.11. Kvadrat matrisaning biror-bir satr (ustun)iga qolgan satr (ustun)lar chiziqli kombinasiyasini qo'shish natijasida determinant o'zgarmaydi.

2.12. Kvadrat matrisaning oxirgisidan boshqa barcha qatorlariga undan keyingi qator qo'shilsa, uning determinanti o'zgarmaydi.

2.13. Kvadrat matrisaning ikkinchi ustunidan boshlab har bir ustuniga undan oldingi ustun qo'shilsa, uning determinanti o'zgarmaydi.

2.14. Kvadrat matrisaning biror-bir satri (ustuni) qolganlarining chiziqli kombinasiyasidan iborat bo'lsa, uning determinanti nolga teng.

2.15. Har qanday elementar matrisaning determinanti noldan farqli.

2.16. Kvadrat matrisalar ko'paytmasining determinanti berilgan matrisalar determinantlari ko'paytmasiga teng.

2.17. Kvadrat matrisaning determinanti nolga teng bo'lishi uchun uning satr (ustun)lari chiziqli bog'langan bo'lishi zarur va etarli.

3. Determinant xossalaridan foydalanib quyidagilarni isbotlang:

$$3.1. \begin{vmatrix} (a+b)^2 & c^2 & c^2 \\ a^2 & (b+c)^2 & a^2 \\ b^2 & b^2 & (c+a)^2 \end{vmatrix} = 2abc(a+b+c)^3.$$

$$3.2. \begin{vmatrix} \frac{1}{a+x} & \frac{1}{a+y} & 1 \\ \frac{1}{b+x} & \frac{1}{b+y} & 1 \\ \frac{1}{c+x} & \frac{1}{c+y} & 1 \end{vmatrix} = \frac{(a-b)(a-c)(b-c)(x-y)}{(a+x)(b+x)(c+x)(a+y)(b+y)(c+y)}.$$

$$3.3. \begin{vmatrix} a & b & c & d \\ -b & a & d & -c \\ -c & -d & a & b \\ -d & c & -b & a \end{vmatrix} = (a^2 + b^2 + c^2 + d^2)^2.$$

$$3.4. \begin{vmatrix} -1 & 1 & 1 & 1 & x \\ 1 & -1 & 1 & 1 & y \\ 1 & 1 & -1 & 1 & z \\ 1 & 1 & 1 & -1 & t \\ x & y & z & t & 0 \end{vmatrix} = -4(x^2 + y^2 + z^2 + t^2 - 2(xy + xz + xt + yz + yt + zt)).$$

4. Quyidagi determinantlarni hisoblang:

$$4.1. \begin{vmatrix} 1 & 2 & 3 & \dots & n \\ -1 & 0 & 3 & \dots & n \\ -1 & -2 & 0 & \dots & n \\ \cdot & \cdot & \cdot & \cdot & \cdot \\ -1 & -2 & -3 & \dots & 0 \end{vmatrix}.$$

$$4.2. \begin{vmatrix} 1 & n & n & \dots & n \\ n & 2 & n & \dots & n \\ n & n & 3 & \dots & n \\ \cdot & \cdot & \cdot & \cdot & \cdot \\ n & n & n & \dots & n \end{vmatrix}.$$

$$4.3. \begin{vmatrix} 1+x_1 & 1 & 1 & \dots & 1 \\ 1 & 1+x_2 & 1 & \dots & 1 \\ 1 & 1 & 1+x_3 & \dots & 1 \\ \cdot & \cdot & \cdot & \cdot & \cdot \\ 1 & 1 & 1 & \dots & 1+x_n \end{vmatrix}.$$

$$4.4. \begin{vmatrix} x_1 & a_{12} & a_{13} & \dots & a_{1n} \\ x_1 & x_2 & a_{23} & \dots & a_{2n} \\ x_1 & x_2 & x_3 & \dots & a_{3n} \\ \cdot & \cdot & \cdot & \cdot & \cdot \\ x_1 & x_2 & x_3 & \dots & x_n \end{vmatrix}.$$

$$4.5. \begin{vmatrix} 1 & 2 & 3 & \dots & n \\ 1 & x+1 & 3 & \dots & n \\ 1 & 2 & x+1 & \dots & n \\ \cdot & \cdot & \cdot & \cdot & \cdot \\ 1 & 2 & 3 & \dots & x+1 \end{vmatrix}.$$

$$4.6. \begin{vmatrix} 1 & 1 & 1 & \dots & 1 \\ 1 & 2-a & 1 & \dots & 1 \\ 1 & 1 & 3-a & \dots & 1 \\ \cdot & \cdot & \cdot & \cdot & \cdot \\ 1 & 1 & 1 & \dots & n+1-a \end{vmatrix}.$$

$$4.7. \begin{vmatrix} 2 & 1 & 0 & \dots & 0 \\ 1 & 2 & 1 & \dots & 0 \\ 0 & 1 & 2 & \dots & 0 \\ \cdot & \cdot & \cdot & \cdot & \cdot \\ 0 & 0 & 0 & \dots & 2 \end{vmatrix}.$$

$$4.8. \begin{vmatrix} 3 & 2 & 0 & \dots & 0 \\ 1 & 3 & 2 & \dots & 0 \\ 0 & 1 & 3 & \dots & 0 \\ \cdot & \cdot & \cdot & \cdot & \cdot \\ 0 & 0 & 0 & \dots & 3 \end{vmatrix}.$$

$$4.9. \begin{vmatrix} x+a_1 & a_2 & a_3 & \dots & a_n \\ a_1 & x+a_2 & a_3 & \dots & a_n \\ a_1 & a_2 & x+a_3 & \dots & a_n \\ \cdot & \cdot & \cdot & \cdot & \cdot \\ a_1 & a_2 & a_3 & \dots & x+a_n \end{vmatrix}.$$

$$4.10. \begin{vmatrix} 1 & x & x^2 & \dots & x^n \\ a_{11} & 1 & x & \dots & x^{n-1} \\ a_{21} & a_{22} & 1 & \dots & x^{n-2} \\ \cdot & \cdot & \cdot & \cdot & \cdot \\ a_{n1} & a_{n2} & a_{n3} & \dots & 1 \end{vmatrix}.$$

5. ChTSni Kramer formulalari yordamida yeching:

$$5.1. \begin{cases} x_1 + x_2 - x_3 = 2, \\ -2x_1 + x_2 + x_3 = 3, \\ x_1 + x_2 + x_3 = 6. \end{cases}$$

$$5.2. \begin{cases} 3x_1 - x_2 = 5, \\ -2x_1 + x_2 + x_3 = 0, \\ 2x_1 - x_2 + 4x_3 = 15. \end{cases}$$

$$5.3. \begin{cases} 2x_1 + 2x_2 - x_3 = 4, \\ 3x_1 + x_2 - x_3 = 7, \\ x_1 + x_2 - 2x_3 = 3. \end{cases}$$

$$5.4. \begin{cases} 5x_1 + 4x_3 = 1, \\ x_1 - x_2 + 2x_3 = 0, \\ 4x_1 + x_2 + 2x_3 = 1. \end{cases}$$

$$5.5. \begin{cases} x_1 + x_2 + 2x_3 + 3x_4 = 1, \\ 3x_1 - x_2 - x_3 - 2x_4 = -4, \\ 2x_1 + 3x_2 - x_3 - x_4 = -6, \\ x_1 + 2x_2 + 3x_3 - x_4 = -4. \end{cases}$$

$$5.6. \begin{cases} 2x_1 + x_2 + x_3 - x_4 = 1, \\ 3x_1 - x_2 + x_3 + x_4 = 2, \\ 4x_1 + 2x_2 + x_3 - x_4 = 1, \\ x_4 = 2. \end{cases}$$

$$5.7. \begin{cases} 2x_1 - x_2 - 6x_3 + 3x_4 = -1, \\ 7x_1 - 4x_2 + 2x_3 - 15x_4 = -32, \\ x_1 - 2x_2 - 4x_3 + 9x_4 = 5, \\ x_1 - x_2 + 2x_3 - 6x_4 = -8. \end{cases}$$

$$5.8. \begin{cases} 2x_1 - 3x_2 + 5x_3 + x_4 = -7, \\ -x_1 + x_2 + 4x_3 - 2x_4 = 1, \\ 5x_1 + 2x_2 - 3x_3 + 6x_4 = 5, \\ -2x_1 + 5x_2 + x_3 - 7x_4 = 5. \end{cases}$$

$$5.9. \begin{cases} x_1 + 2x_2 - 3x_3 - x_4 = -8, \\ 2x_1 - x_2 + 2x_3 - x_4 = 2, \\ 4x_1 + 3x_2 - x_3 - x_4 = 3, \\ x_1 + 2x_2 + x_3 + x_4 = 12. \end{cases}$$

$$5.10. \begin{cases} 5x_1 + 2x_2 + x_3 + 4x_4 = 4, \\ 4x_1 + 6x_2 + 3x_3 + 7x_4 = 1, \\ 3x_1 + x_2 + 2x_3 + 4x_4 = 1, \\ 2x_1 + 3x_2 + 4x_3 + 5x_4 = -2. \end{cases}$$

6. Bir jinsli  $n$  noma'lumli  $n$  ta chiziqli tenglamalar sistemasining nolmas yechimga ega bo'lishi uchun, uning determinanti nolga teng bo'lishi zarur va etarli ekanligini isbotlang.

7. Har qanday kvadrat matrisa uchun quyidagi shartlar teng kuchli ekanligini isbotlang:

7.1.  $|A| \neq 0$ .

7.2. Matrisaning satr (ustun)lari chiziqli erkli.

7.3. A matrisa teskarilanuvchi.

7.4. A matrisa elementar matrisalar yordamida ifodalanadi.

8. Matrisa rangini minorlar yordamida toping:

$$8.1. \begin{pmatrix} 2 & -1 & 3 & -2 & 4 \\ 4 & -2 & 5 & 1 & 7 \\ 2 & -1 & 1 & 8 & 2 \end{pmatrix}. \quad 8.2. \begin{pmatrix} 8 & 2 & 2 & -1 & 1 \\ 1 & 7 & 4 & -2 & 5 \\ -2 & 4 & 2 & -1 & 3 \end{pmatrix}.$$

$$8.3. \begin{pmatrix} 1 & 7 & 7 & 9 \\ 7 & 5 & 1 & -1 \\ 4 & 2 & -1 & -3 \\ -1 & 1 & 3 & 5 \end{pmatrix}. \quad 8.4. \begin{pmatrix} 1 & 3 & 5 & -1 \\ 2 & -1 & -3 & 4 \\ 5 & 1 & -1 & 7 \\ 7 & 7 & 9 & 1 \end{pmatrix}.$$

$$8.5. \begin{pmatrix} 4 & 1 & 7 & -5 & 1 \\ 0 & -7 & 1 & -3 & -5 \\ 3 & 4 & 5 & -3 & 2 \\ 2 & 5 & 3 & -1 & 3 \end{pmatrix}. \quad 8.6. \begin{pmatrix} -6 & 4 & 8 & -1 & 6 \\ -5 & 2 & 4 & 1 & 3 \\ 7 & 2 & 4 & 1 & 3 \\ 2 & 4 & 8 & -7 & 6 \\ 3 & 2 & 4 & -5 & 3 \end{pmatrix}.$$

$$8.7. \begin{pmatrix} 1 & 1 & 0 & 0 & 0 \\ 0 & 1 & 1 & 0 & 0 \\ 0 & 0 & 1 & 1 & 0 \\ 0 & 0 & 0 & 1 & 1 \\ 0 & 0 & 0 & 0 & 1 \end{pmatrix}. \quad 8.8. \begin{pmatrix} 1 & 1 & 0 & 0 & \dots & 0 & 0 \\ 0 & 1 & 1 & 0 & \dots & 0 & 0 \\ \cdot & \cdot & \cdot & \cdot & \cdot & \cdot & \cdot \\ 0 & 0 & 0 & 0 & \dots & 1 & 1 \\ 1 & 0 & 0 & 0 & \dots & 0 & 1 \end{pmatrix}.$$

9. Matrisaga teskari matrisani birlashtirilgan matrisa yordamida toping:

$$9.1. \begin{pmatrix} 1 & 2 \\ 3 & 4 \end{pmatrix}. \quad 9.2. \begin{pmatrix} 3 & 4 \\ 5 & 7 \end{pmatrix}.$$

$$9.3. \begin{pmatrix} \cos \alpha & -\sin \alpha \\ \sin \alpha & \cos \alpha \end{pmatrix}. \quad 9.4. \begin{pmatrix} 2-3i & 1-i \\ 3+i & 5+4i \end{pmatrix}.$$

$$9.5. \begin{pmatrix} 2 & 5 & 7 \\ 6 & 3 & 4 \\ 5 & -2 & -3 \end{pmatrix}. \quad 9.6. \begin{pmatrix} 7 & 9 & 2 \\ 2 & -2 & 6 \\ 5 & 6 & 3 \end{pmatrix}.$$

$$9.7. \begin{pmatrix} 1 & 1 & 1 & 1 \\ 1 & 1 & -1 & -1 \\ 1 & -1 & 1 & -1 \\ 1 & -1 & -1 & 1 \end{pmatrix}. \quad 9.8. \begin{pmatrix} 1 & 1 & 1 & 1 \\ 1 & i & -1 & -i \\ 1 & -1 & 1 & -1 \\ 1 & -i & -1 & i \end{pmatrix}.$$

10. Berilgan matrisalarni elementar matrisalar ko'paytmasi ko'rinishida ifodalang:

$$10.1. \begin{pmatrix} 1 & 2 \\ 3 & 4 \end{pmatrix}. \quad 10.2. \begin{pmatrix} 3 & 4 \\ 5 & 7 \end{pmatrix}.$$

$$10.3. \begin{pmatrix} 7 & -4 \\ -5 & 3 \end{pmatrix}. \quad 10.4. \begin{pmatrix} -1 & -1 \\ 2 & 3 \end{pmatrix}.$$

$$10.5. \begin{pmatrix} -3 & -5 \\ 2 & 4 \end{pmatrix}. \quad 10.6. \begin{pmatrix} 3 & -2 \\ 5 & -4 \end{pmatrix}.$$



## Takrorlash uchun savollar

1. Determinantning asosiy xossalarini ayting.
2. n-tartibli minor deb nimaga aytiladi?
3. Determinantni algebraik to'ldiruvchi yordamida aniqlash jarayonini tushuntiring.
4. Determinant nolga teng bo'lishining zarur va etarli shartini ayting.
5. Algebraik to'ldiruvchilar yordamida teskari matrisani topish jarayonini tushuntiring.
6. ChTSni Kramer qoidasi bilan yechish usulini tushuntiring.
7. n noma'lumli n ta tenglamadan iborat bir jinsli chiziqli tenglamalar sistemasi qachon yagona yechimga ega?

## VIII MODUL. VEKTOR FAZOLAR

### 19-§. Vektor fazo. Fazoostilar kesishmasi, yig'indisi.

**Asosiy tushunchalar:** vektor fazo, fazoosti, fazoostilar kesishmasi, fazoostilar yig'indisi, fazoostilar to'g'ri yig'indisi, vektor fazo bazisi, vektor fazo o'lchovi.

Bo'sh bo'lmagan  $V = \{\bar{x}, \bar{y}, \bar{z}, \dots\}$  to'plam va  $\mathcal{F} = \{\alpha, \beta, \gamma, \dots\}$  maydon berilgan bo'lib, quyidagi aksiomalar bajarilsa, u holda  $V$  to'plam  $\mathcal{F}$  sonlar maydoni ustiga qurilgan vektor fazo deyiladi:

$V$  – additiv abel gruppasi;

$$(\alpha \cdot \beta)\bar{x} = \alpha(\beta\bar{x}) \quad (\forall \bar{x} \in V, \forall \alpha, \beta \in \mathcal{F});$$

$$\alpha(\bar{x} + \bar{y}) = \alpha\bar{x} + \alpha\bar{y} \quad (\forall \bar{x}, \bar{y} \in V, \forall \alpha \in \mathcal{F});$$

$$(\alpha + \beta)\bar{x} = \alpha\bar{x} + \beta\bar{x} \quad (\forall \bar{x} \in V, \forall \alpha, \beta \in \mathcal{F});$$

$$1 \cdot \bar{x} = \bar{x} \quad (\forall \bar{x} \in V, 1 \in \mathcal{F}).$$

$\mathcal{F}$  maydon ustida aniqlangan  $V$  vektor fazoning biror  $L$  to'plamostisi  $V$  da aniqlangan algebraik amallarga nisbatan vektor fazosini tashkil etsa, u holda  $L$  ga  $V$  fazoning fazoosti deyiladi.

$V$  vektor fazoning biror  $L$  to'plamostisi shu vektor fazoning fazoostisi bo'lishi uchun quyidagi ikkita shartning bajarilishi zarur va etarli:

$$a) (\forall \bar{x}, \bar{y} \in L) \quad (\bar{x} - \bar{y}) \in L;$$

$$b) (\forall \bar{x} \in L, \forall \alpha \in \mathcal{F}) \quad \alpha\bar{x} \in L.$$

Agar  $U_1, \dots, U_n$  lar  $V$  vektor fazoning fazoostilari bo'lsa, u holda  $U = U_1 \cap U_2 \cap \dots \cap U_n$  ga  $U_1, \dots, U_n$  fazoostilarning kesishmasi deyiladi.



$\bar{x}_1 \in U_1, \bar{x}_2 \in U_2, \dots, \bar{x}_n \in U_n$  bo'lganda  $\bar{x}_1 + \bar{x}_2 + \dots + \bar{x}_n$  ko'rinishdagi barcha yig'indilar to'plamiga  $U_1, \dots, U_n$  fazoostilar yig'indisi deyiladi va u  $U_1 + U_2 + \dots + U_n$  ko'rinishda belgilanadi.

Agar  $V$  vektor fazoning chiziqli bog'lanmagan  $\bar{x}_1, \bar{x}_2, \dots, \bar{x}_n$  (1) vektorlar sistemasi mavjud bo'lsaki,  $V$  ning qolgan barcha vektorlari (1) sistema orqali chiziqli ifodalansa, u holda (1) vektorlar sistemasi  $V$  vektor fazoning bazisi deyiladi.

$V$  vektor fazoning bazislaridagi vektorlar soni  $V$  vektor fazoning o'lchovi deyiladi.

$V$  fazoning o'lchovi  $\dim V$  orqali belgilanadi.

**Misol.**  $V = \left\{ \begin{pmatrix} a & b \\ c & d \end{pmatrix} \mid a, b, c, d \in R \right\}$  to'plamni  $R$  maydon ustida chiziqli fazo

tashkil etishini va uni bazisi, o'lchovini aniqlang.

**Yechish.** Berilgan  $V \neq \emptyset$  to'plamda qo'shish va skalyarni to'plam elementiga ko'paytirish amallarini aniqlaymiz:

1).  $\forall A_1, A_2 \in V, A_1 = \begin{pmatrix} a_1 & b_1 \\ c_1 & d_1 \end{pmatrix}, A_2 = \begin{pmatrix} a_2 & b_2 \\ c_2 & d_2 \end{pmatrix}$  larga yagona

$A_1 + A_2 = \begin{pmatrix} a_1 + a_2 & b_1 + b_2 \\ c_1 + c_2 & d_1 + d_2 \end{pmatrix}$  ni mos qo'yamiz. Bu erda

$a_1, a_2, b_1, b_2, c_1, c_2, d_1, d_2 \in R$  va haqiqiy sonlar to'plamida qo'shish amali aniqlanganligi uchun  $a_1 + a_2, b_1 + b_2, c_1 + c_2, d_1 + d_2 \in R$ , ya'ni  $A_1 + A_2$  matrisa  $V$  ning elementi. Bundan tashqari ikkita berilgan haqiqiy sonlar yig'indisi yagona uchinchi haqiqiy son ekanligidan berilgan ikkita kvadrat matrisalar yig'indisi bo'lgan uchinchi kvadrat matrisaning yagonaligi kelib chiqadi.

2).  $V$  to'plamning ixtiyoriy  $A = \begin{pmatrix} a & b \\ c & d \end{pmatrix}$  elementi va ixtiyoriy  $\alpha \in R$  uchun

$\omega_\alpha(A) = \alpha A = \alpha \begin{pmatrix} a & b \\ c & d \end{pmatrix} = \begin{pmatrix} \alpha a & \alpha b \\ \alpha c & \alpha d \end{pmatrix}$  matrisani hosil qilamiz. Haqiqiy sonlar

to'plamida ko'paytirish amali aniqlanganligi uchun  $\alpha a, \alpha b, \alpha c, \alpha d \in R$ , ya'ni

$\alpha A \in V$ . Hosil qilingan  $V = \langle V; +, \cdot | \alpha \in R \rangle$  algebra chiziqli vektor fazo tashkil etishini isbotlaymiz. Buning uchun qo'shish, skalyarni matrisaga ko'paytirish amallarining quyidagi xossalari bajarilishini isbotlaymiz:

- 1)  $\forall A_1, A_2 \in V, \quad A_1 + A_2 = A_2 + A_1;$
- 2)  $\forall A_1, A_2, A_3 \in V, \quad A_1 + (A_2 + A_3) = (A_1 + A_2) + A_3;$
- 3)  $\forall A \in V \wedge \exists O \in V, \quad A + O = A;$
- 4)  $\forall A \in V \wedge \exists A' \in V, \quad A + A' = O;$
- 5)  $\forall \alpha, \beta \in R \wedge \forall A \in V, \quad (\alpha + \beta)A = \alpha A + \beta A;$
- 6)  $\forall \alpha, \beta \in R \wedge \forall A \in V, \quad \alpha(\beta A) = (\alpha\beta)A;$
- 7)  $\forall \alpha \in R \wedge \forall A_1, A_2 \in V, \quad \alpha(A_1 + A_2) = \alpha A_1 + \alpha A_2;$
- 8)  $\forall A \in V, \quad 1 \cdot A = A.$

**Isbot.** 1.  $V$  to'plamning ixtiyoriy  $A_1 = \begin{pmatrix} a_1 & b_1 \\ c_1 & d_1 \end{pmatrix}, A_2 = \begin{pmatrix} a_2 & b_2 \\ c_2 & d_2 \end{pmatrix}$

elementlari uchun  $A_1 + A_2 =$  |matrisalarni qo'shish amali ta'rifiga ko'ra|=

$$= \begin{pmatrix} a_1 + a_2 & b_1 + b_2 \\ c_1 + c_2 & d_1 + d_2 \end{pmatrix} = \left. \begin{array}{l} Rda \text{ qo'shish amali} \\ kommutativ ekanligidan \end{array} \right| = \begin{pmatrix} a_2 + a_1 & b_2 + b_1 \\ c_2 + c_1 & d_2 + d_1 \end{pmatrix} =$$

$$= \left. \begin{array}{l} Vda \text{ qo'shish amali} \\ ta'rifiga ko'ra \end{array} \right| = \begin{pmatrix} a_2 & b_2 \\ c_2 & d_2 \end{pmatrix} + \begin{pmatrix} a_1 & b_1 \\ c_1 & d_1 \end{pmatrix} = B + A.$$

Demak,  $V$  to'plamda aniqlangan qo'shish amali kommutativ va  $\langle V; + \rangle$  additiv abel gruppoid.

2.  $V$  to'plamning ixtiyoriy  $A_1 = \begin{pmatrix} a_1 & b_1 \\ c_1 & d_1 \end{pmatrix}, A_2 = \begin{pmatrix} a_2 & b_2 \\ c_2 & d_2 \end{pmatrix}, A_3 = \begin{pmatrix} a_3 & b_3 \\ c_3 & d_3 \end{pmatrix}$

elementlari uchun

$$\begin{aligned}
A_1 + (A_2 + A_3) &= \begin{pmatrix} a_1 & b_1 \\ c_1 & d_1 \end{pmatrix} + \left( \begin{pmatrix} a_2 & b_2 \\ c_2 & d_2 \end{pmatrix} + \begin{pmatrix} a_3 & b_3 \\ c_3 & d_3 \end{pmatrix} \right) = \left| \begin{array}{l} \text{V da qo'shish amali} \\ \text{ta'rifi ga ko'ra} \end{array} \right| = \\
&= \begin{pmatrix} a_1 & b_1 \\ c_1 & d_1 \end{pmatrix} + \begin{pmatrix} a_2 + a_3 & b_2 + b_3 \\ c_2 + c_3 & d_2 + d_3 \end{pmatrix} = \left| \begin{array}{l} \text{V da qo'shish amali} \\ \text{ta'rifi ga ko'ra} \end{array} \right| = \\
&= \begin{pmatrix} a_1 + (a_2 + a_3) & b_1 + (b_2 + b_3) \\ c_1 + (c_2 + c_3) & d_1 + (d_2 + d_3) \end{pmatrix} = \left| \begin{array}{l} \text{V da qo'shish amalining} \\ \text{assosiativligidan} \end{array} \right| = \\
&= \begin{pmatrix} (a_1 + a_2) + a_3 & (b_1 + b_2) + b_3 \\ (c_1 + c_2) + c_3 & (d_1 + d_2) + d_3 \end{pmatrix} = \left| \begin{array}{l} \text{V da qo'shish amali} \\ \text{ta'rifi ga ko'ra} \end{array} \right| = \\
&= \begin{pmatrix} a_1 + a_2 & b_1 + b_2 \\ c_1 + c_2 & d_1 + d_2 \end{pmatrix} + \begin{pmatrix} a_3 & b_3 \\ c_3 & d_3 \end{pmatrix} = \left| \begin{array}{l} \text{V da qo'shish amali} \\ \text{ta'rifi ga ko'ra} \end{array} \right| = (A + B) + C.
\end{aligned}$$

Demak,  $\langle V ; + \rangle$  additiv abel yarimgruppa.

3.  $V$  to'plamdan olingan ixtiyoriy  $A = \begin{pmatrix} a & b \\ c & d \end{pmatrix}$  element uchun shu to'plamda yagona  $O = \begin{pmatrix} 0 & 0 \\ 0 & 0 \end{pmatrix}$  element mavjudki,  $A + O = A + O = O$ .

Demak,  $\langle V ; +, 0 \rangle$  - additiv abel manoid .

4.  $V$  to'plamdan olingan har qanday  $A = \begin{pmatrix} a & b \\ c & d \end{pmatrix}$  element uchun shunday

$A' \in V$  element mavjudki,  $A + A' = 0$ . Bu erda  $A' = \begin{pmatrix} -a & -b \\ -c & -d \end{pmatrix}$  ekanligi har

qanday haqiqiy son uchun qarama-qarshisi mavjudligidan kelib chiqadi. Yoki bo'lmasa,  $(-1)A = -A$  ni  $A$  ga qarama-qarshi element sifatida hosil qilish mumkin.

Demak,  $\langle V ; +, -, 0 \rangle$  - additiv abel gruppa ekan.

5.  $\forall \alpha, \beta \in R$  va  $\forall A \in V$  uchun

$$(\alpha + \beta)A = \alpha + \beta \begin{pmatrix} a & b \\ c & d \end{pmatrix} = \left| \begin{array}{l} \text{Vda skalyarni matrisaga ko' paytirish} \\ \text{amali ta'rifi ga ko' ra} \end{array} \right| =$$

$$= \begin{pmatrix} (\alpha + \beta)a & (\alpha + \beta)b \\ (\alpha + \beta)c & (\alpha + \beta)d \end{pmatrix} = \left| \begin{array}{l} \text{Rda ko' paytirishning qo' shishga} \\ \text{nisbatan distributivligidan} \end{array} \right| =$$

$$= \begin{pmatrix} \alpha a + \beta a & \alpha b + \beta b \\ \alpha c + \beta c & \alpha d + \beta d \end{pmatrix} = \left| \begin{array}{l} \text{Vda qo' shish} \\ \text{amali ta'rifi ga ro' ra} \end{array} \right| =$$

$$= \begin{pmatrix} \alpha a & \alpha b \\ \alpha c & \alpha d \end{pmatrix} + \begin{pmatrix} \beta a & \beta b \\ \beta c & \beta d \end{pmatrix} = \left| \begin{array}{l} \text{Vda skalyarni matrisaga ko' paytirish} \\ \text{amali ta'rifi ga ko' ra} \end{array} \right| =$$

$$= \alpha \begin{pmatrix} a & b \\ c & d \end{pmatrix} + \beta \begin{pmatrix} a & b \\ c & d \end{pmatrix} = \alpha A + \beta A.$$

6.  $\forall \alpha, \beta \in R$  va  $\forall A \in V$  lar uchun

$$\alpha(\beta A) = (\alpha\beta) \begin{pmatrix} a & b \\ c & d \end{pmatrix} = \left| \begin{array}{l} \text{Vda skalyarni matrisaga ko' paytirish} \\ \text{amali ta'rifi ga ko' ra} \end{array} \right| =$$

$$= \begin{pmatrix} (\alpha\beta)a & (\alpha\beta)b \\ (\alpha\beta)c & (\alpha\beta)d \end{pmatrix} = \left| \begin{array}{l} \text{Rda ko' paytirish} \\ \text{amali assosiativligidan} \end{array} \right| = \begin{pmatrix} \alpha(\beta a) & \alpha(\beta b) \\ \alpha(\beta c) & \alpha(\beta d) \end{pmatrix} =$$

$$= \left| \begin{array}{l} \text{Vda skalyarni matrisaga ko' paytirish} \\ \text{amali ta'rifi ga ko' ra} \end{array} \right| = \alpha \begin{pmatrix} \beta a & \beta b \\ \beta c & \beta d \end{pmatrix} =$$

$$= \left| \begin{array}{l} \text{Vda skalyarni matrisaga ko' paytirish} \\ \text{amali ta'rifi ga ko' ra} \end{array} \right| = \alpha \left( \beta \begin{pmatrix} a & b \\ c & d \end{pmatrix} \right) = \alpha(\beta A)$$

7.  $\forall \alpha \in R \wedge \forall A_1, A_2 \in V$  lar uchun

$$\alpha(A_1 + A_2) =$$

$$\begin{aligned}
&= \alpha \left( \begin{pmatrix} a_1 & b_1 \\ c_1 & d_1 \end{pmatrix} + \begin{pmatrix} a_2 & b_2 \\ c_2 & d_2 \end{pmatrix} \right) = \left| \begin{array}{l} V \text{ da qo'shish va skalyarni} \\ \text{ko' paytirish amallarining} \\ \text{ta'rifiga ko'ra} \end{array} \right| = \\
&= \begin{pmatrix} \alpha(a_1 + a_2) & \alpha(b_1 + b_2) \\ \alpha(c_1 + c_2) & \alpha(d_1 + d_2) \end{pmatrix} = \left| \begin{array}{l} R \text{ da ko' paytirishning qo'shishga} \\ \text{nisbatan distributivligidan} \end{array} \right| = \\
&= \begin{pmatrix} \alpha a_1 + \alpha a_2 & \alpha b_1 + \alpha b_2 \\ \alpha c_1 + \alpha c_2 & \alpha d_1 + \alpha d_2 \end{pmatrix} = \left| \begin{array}{l} V \text{ da qo'shish amalining} \\ \text{ta'rifiga ko'ra} \end{array} \right| = \\
&= \begin{pmatrix} \alpha a_1 & \alpha b_1 \\ \alpha c_1 & \alpha d_1 \end{pmatrix} + \begin{pmatrix} \alpha a_2 & \alpha b_2 \\ \alpha c_2 & \alpha d_2 \end{pmatrix} = \left| \begin{array}{l} V \text{ da skalyarni matrisaga ko' paytirish} \\ \text{amali ta'rifiga ko'ra} \end{array} \right| = \\
&= \alpha A_1 + \alpha A_2.
\end{aligned}$$

8.V to'plamning har qanday  $A = \begin{pmatrix} a & b \\ c & d \end{pmatrix}$  elementi va  $1 \in R$  skalyarlar uchun

$1 \cdot A = A$  ekanligi V da skalyarni ko'paytirish amali ta'rifi va R to'plamda

$1 \cdot a = a$  ( $\forall a \in R$ ) ekanligidan kelib chiqadi.

Demak,  $V = \langle V; +, \left\{ \lambda \mid \lambda \in R \right\} \rangle$  -chiziqli vektor fazo ekan.

9. Bu fazoning bazisini aniqlaymiz. Chiziqli vektor fazo bazisi ta'rifiga ko'ra

V to'plamning ixtiyoriy  $A = \begin{pmatrix} a & b \\ c & d \end{pmatrix}$  elementini chiziqli ifodalovchi chiziqli erkli

sistemani topamiz. Bunday sistema sifatida

$A_a = \begin{pmatrix} a & 0 \\ 0 & 0 \end{pmatrix}$ ,  $A_b = \begin{pmatrix} 0 & b \\ 0 & 0 \end{pmatrix}$ ,  $A_c = \begin{pmatrix} 0 & 0 \\ c & 0 \end{pmatrix}$ ,  $A_d = \begin{pmatrix} 0 & 0 \\ 0 & d \end{pmatrix}$  sistemani olsak, u

holda  $\begin{pmatrix} a & b \\ c & d \end{pmatrix} = A_a + A_b + A_c + A_d$  ekanligi ravshan. Bazis vektor sifatida

$A_a, A_b, A_c, A_d$  bazisdagi  $a, b, c, d$  haqiqiy sonlar o'rniga 0 dan farqli ixtiyoriy haqiqiy sonni qo'yish natijasida V fazoning boshqa bazislarini hosil qilish mumkin.

Demak,  $V = \langle V; +, \left\{ \lambda \mid \lambda \in R \right\} \rangle$  - vektor fazoning bazisi cheksiz ko'p.

10. Chiziqli vektor fazoning o'lchovi ta'rifiga ko'ra

$V = \langle V; +, \cdot \mid \lambda \in R \rangle$  - fazoning ixtiyoriy bazisidagi vektorlar soni uning o'lchovidir, ya'ni  $\dim V = 4$  ga teng.

**Misol.**  $\vec{a}_1 = \langle 1, 2 \rangle$ ,  $\vec{a}_2 = \langle 1, 1 \rangle$ ;  $\vec{b}_1 = \langle 1, 3 \rangle$ ,

$\vec{b}_2 = \langle 1, 1, 3 \rangle$ ,  $\vec{b}_3 = \langle 0, 1, 1 \rangle$  vektorlar sistemalari tashkil etgan chiziqli fazolar, ularning yig'indisi, kesishmasining bazisi va o'lchovini aniqlang.

**Yechish.** 1)  $\vec{a}_1 = \langle 1, 2 \rangle$ ,  $\vec{a}_2 = \langle 1, 1 \rangle$  vektorlar sistemasi chiziqli erkli,  $\text{rang}(a)=2$ . Shuning uchun  $L((a))$  chiziqli fazoning o'lchovi  $\dim L((a))=2$ .

2)  $\vec{b}_1 = \langle 1, 3 \rangle$ ,  $\vec{b}_2 = \langle 1, 1, 3 \rangle$ ,  $\vec{b}_3 = \langle 0, 1, 1 \rangle$  sistemani tekshiramiz:

$$\begin{matrix} \vec{b}_1 \\ \vec{b}_2 \\ \vec{b}_3 \end{matrix} \begin{pmatrix} 2 & 1 & 3 \\ 1 & 1 & 3 \\ 0 & 1 & 1 \end{pmatrix} \sim \begin{matrix} \vec{b}_2 \\ \vec{b}_3 \\ \vec{b}_1 - 2\vec{b}_2 \end{matrix} \begin{pmatrix} 1 & 1 & 3 \\ 0 & 1 & 1 \\ 0 & -1 & -3 \end{pmatrix} \sim \begin{matrix} \vec{b}_2 \\ \vec{b}_3 \\ \vec{b}_3 + \vec{b}_1 - 2\vec{b}_2 \end{matrix} \begin{pmatrix} 1 & 1 & 3 \\ 0 & 1 & 1 \\ 0 & 0 & -2 \end{pmatrix}$$

Demak,  $(b)$  sistema chiziqli erkli. Bundan  $\dim L((b))=3$ .

3)  $L((a))$ ,  $L((b))$  qism fazolar yig'indisining bazisini topish uchun ularning bazis vektorlaridan

$\vec{a}_1 = \langle 1, 2 \rangle$ ,  $\vec{a}_2 = \langle 1, 1 \rangle$ ,  $\vec{b}_1 = \langle 1, 3 \rangle$ ,  $\vec{b}_2 = \langle 1, 1, 3 \rangle$ ,  $\vec{b}_3 = \langle 0, 1, 1 \rangle$  sistemani hosil qilamiz va bu sistemaning bazis vektorlarini topamiz. Qaralayotgan misolda  $L((b))=R^3$  bo'lganligi uchun  $L((a))$ ,  $L((b))$  qism fazolar yig'indisi ham  $R^3$  dan iborat bo'ladi. U holda  $\dim(L((a)) + L((b)))=3$ . Agar

$$\dim(L((a)) + L((b))) + \dim(L((a)) \cap L((b))) = \dim L((a)) + \dim L((b))$$

tenglikni e'tiborga olsak, u holda  $\dim L((a)) \cap \dim L((b)) = 2$  ekanligi kelib chiqadi.

$$\text{Demak, } \dim L((a))=2; \dim L((b))=3, \dim L((a)) + \dim L((b))=3,$$

$$\dim(L((a)) \cap L((b))) = 2.$$



## Misol va mashqlar

1. Berilgan to'plamlarni chiziqli fazo tashkil etishini isbotlang va uning bazisi, o'lchovini aniqlang:

$$1.1. V = \left\{ \begin{pmatrix} a & 0 \\ 0 & 0 \end{pmatrix} \mid a \in R \right\}.$$

$$1.2. V = \left\{ \begin{pmatrix} a & b \\ c & d \end{pmatrix} \mid a, b, c, d \in R \right\}.$$

$$1.3. V = \left\{ \begin{pmatrix} a_{11} & a_{12} & a_{13} \\ a_{21} & a_{22} & a_{23} \\ a_{31} & a_{32} & a_{33} \end{pmatrix} \mid a_{ij} \in R \wedge i = \overline{1,3} \wedge j = \overline{1,3} \right\}.$$

$$1.4. V = \left\{ \begin{pmatrix} a_{11} & 0 & 0 \\ a_{21} & a_{22} & 0 \\ a_{31} & a_{32} & a_{33} \end{pmatrix} \mid a_{ij} \in R \wedge i = \overline{1,3} \wedge j = \overline{1,3} \right\}.$$

$$1.5. V = \left\{ \begin{pmatrix} a_{11} & 0 & a_{13} \\ a_{21} & 0 & a_{23} \\ a_{31} & 0 & a_{33} \end{pmatrix} \mid a_{ij} \in R \wedge i = \overline{1,3} \wedge j = \overline{1,3} \right\}.$$

$$1.6. V = \left\{ \begin{pmatrix} a_{11} & a_{12} & a_{13} \\ 0 & 0 & 0 \\ a_{31} & a_{32} & a_{33} \end{pmatrix} \mid a_{ij} \in R \wedge i = \overline{1,3} \wedge j = \overline{1,3} \right\}.$$

$$1.7. V = \left\{ \begin{pmatrix} 0 & a_{12} & a_{13} \\ a_{21} & 0 & a_{23} \\ a_{31} & a_{32} & 0 \end{pmatrix} \mid a_{ij} \in R \wedge i = \overline{1,3} \wedge j = \overline{1,3} \right\}.$$

2. Kompleks sonlar maydoni tashkil etgan vektor fazoning bazisi va o'lchovini aniqlang.

3.  $V_n$  arifmetik vektor fazoning quyidagi vektorlar sistemasi tashkil etgan fazoostilari bazisi va o'lchovini aniqlang:

3.1. Birinchi va keyingi koordinatalari teng bo'lgan barcha vektorlar.

3.2. Koordinatalari yig'indisi nolga teng bo'lgan barcha vektorlar.

3.3. Juft o'rindagi koordinatalari nolga teng bo'lgan barcha vektorlar.

3.4. Juft o'rindagi koordinatalari teng bo'lgan barcha vektorlar.

3.5. Koordinatalari teng bo'lgan barcha vektorlar.

3.6. Har bir koordinatasi o'zidan oldingi koordinataning qarama-qarshisiga teng bo'lgan barcha vektorlar.

4. Quyidagi to'plamlarning qaysilari vektor fazo tashkil etadi:

4.1.  $R_n$  vektor fazoning butun koeffitsientli vektorlar to'plami.

4.2. Tekislikning koordinatalar o'qlaridan birida joylashgan barcha vektorlar to'plami.

4.3. Tekislikning boshi koordinatalar boshida oxiri berilgan to'g'ri chiziqda yotuvchi barcha vektorlari to'plami.

4.4. Tekislikning boshi va oxiri bir to'g'ri chiziqda yotuvchi vektorlari to'plami.

4.5.  $R_n$  vektor fazoning barcha koordinatalari yig'indisi 1 ga teng bo'lgan barcha vektorlar to'plami.

4.6.  $R_n$  vektor fazoning barcha koordinatalari yig'indisi 0 ga teng bo'lgan barcha vektorlar to'plami.

5. Fazoostining quyidagi xossalarini isbotlang:

5.1. Agar  $V$  fazo  $\mathcal{F}$  maydon ustida vektor fazo bo'lsa, u holda uning ixtiyoriy fazoostisi  $\mathcal{F}$  maydon ustidagi vektor fazo bo'ladi.

5.2. Agar  $U$  fazo  $V$  vektor fazoning fazoosti va  $V$  fazo  $W$  vektor fazoning fazoosti bo'lsa, u holda  $U$  fazo  $W$  vektor fazoning fazoosti bo'ladi.

5.3.  $V$  vektor fazoning ixtiyoriy fazoostilarining kesishmasi  $V$  vektor fazoning qism fazosi bo'ladi.

6. Quyidagi vektorlar sistemasi tashkil etgan fazoostilar bazisi va o'lchovini aniqlang:

6.1.  $\vec{a}_1(1,0,0,-1)$ ,  $\vec{a}_2(2,1,1,0)$ ,  $\vec{a}_3(1,1,1,1)$ ,  $\vec{a}_4(0,1,2,3)$ .

6.2.  $\vec{a}_1(0,-1,0,-1)$ ,  $\vec{a}_2(1,2,1,2)$ ,  $\vec{a}_3(1,1,1,1)$ ,  $\vec{a}_4(2,3,1,0)$ ,  $\vec{a}_5(4,5,3,2)$ .

6.3.  $\vec{a}_1(1,1,1,1,0)$ ,  $\vec{a}_2(1,1,-1,-1,-1)$ ,  $\vec{a}_3(2,2,0,0,-1)$ ,  $\vec{a}_4(1,1,5,5,2)$ ,

6.4.  $\vec{a}_5(1,-1,-1,0,0)$ .

6.5.  $\vec{a}_1(1,1,0,0)$ ,  $\vec{a}_2(0,1,1,0)$ ,  $\vec{a}_3(0,0,1,1)$ .

6.6.  $\vec{a}_1(1,-1,-1)$ ,  $\vec{a}_2(-2,2,2)$ ,  $\vec{a}_3(1,0,1)$ ,  $\vec{a}_4(2,3,1)$ ,  $\vec{a}_5(5,3,2)$ .

6.7.  $\vec{a}_1(-4,3,-2,1)$ ,  $\vec{a}_2(2,2,2,2)$ ,  $\vec{a}_3(=0,1,-1,1)$ ,  $\vec{a}_4(3,3,1,1)$ ,  $\vec{a}_5(0,1,2,3)$ .



7. Fazoostilar yig'indisi va to'g'ri yig'indisining quyidagi xossalarini isbotlang:

7.1. Agar  $L$  va  $U$  lar  $V$  vektor fazoning fazoostilari bo'lsa, u holda  $L+U = U+L$  bo'ladi.

7.2. Agar  $L, U, W$  lar  $V$  vektor fazoning fazoostilari bo'lsa, u holda  $L+(U+W) = (L+U)+W$  bo'ladi.

7.3. Agar  $L$  fazoosti  $V$  vektor fazoning fazoostisi bo'lsa, u holda  $L+V=V$  bo'ladi.

7.4.  $L$  va  $U$  lar  $V$  fazoning fazoostilari bo'lsa, u holda  $L+U$  yig'indi to'g'ri yig'indi bo'lishi uchun  $L \cap U = \{\vec{0}\}$  bo'lishi zarur va etarli.

8. Bektorlarning (a) va (b) sistemalari tashkil etgan chiziqli fazolar, ularning yig'indisi, kesishmasining bazisi va o'lchovini aniqlang:

8.1. (a):  $\vec{a}_1(1, 2, 3), \vec{a}_2(0, 1, 1)$ ;

(b):  $\vec{b}_1(1, 0, 1), \vec{b}_2(2, 1, 1)$ .

8.2. (a):  $\vec{a}_1(1, 2, 3, 3), \vec{a}_2(0, 1, 1, 5)$ ;

(b):  $\vec{b}_1(1, 0, 7, 1), \vec{b}_2(2, 0, 1, 1)$ .

8.3. (a):  $\vec{a}_1(1, 2, 3), \vec{a}_2(0, 1, 1), \vec{a}_3(-1, 4, 3)$ ;

(b):  $\vec{b}_1(1, 0, 1), \vec{b}_2(2, 1, 1), \vec{b}_3(-3, -2, -1)$ .

8.4. (a):  $\vec{a}_1(1, 2, 3, 6), \vec{a}_2(0, 1, 1, 7), \vec{a}_3(-1, 4, 3, 8)$ ;

(b):  $\vec{b}_1(1, 0, 1, -4), \vec{b}_2(2, 1, 1, -3), \vec{b}_3(-3, -2, -1, -2)$ .

8.5. (a):  $\vec{a}_1(1, -2, 3), \vec{a}_2(0, 1, -1), \vec{a}_3(-1, 4, 3), \vec{a}_4(-1, 0, -3)$ ;

(b):  $\vec{b}_1(9, 0, 1), \vec{b}_2(-5, 1, 1), \vec{b}_3(-3, 2, -1)$ .

8.6. (a):  $\vec{a}_1(0, 2, 3), \vec{a}_2(0, 1, 0), \vec{a}_3(-1, -4, 3)$ ;

(b):  $\vec{b}_1(1, 0, 1), \vec{b}_2(2, 1, 1), \vec{b}_3(-3, -2, -1), \vec{b}_4(-5, 4, -3)$ .

8.7. (a):  $\vec{a}_1(-5, 1, 2, 3), \vec{a}_2(-6, 0, 1, 1), \vec{a}_3(-1, -1, 4, 3)$ ;

(b):  $\vec{b}_1(-3, 1, 0, 1), \vec{b}_2(-4, 2, 1, 1), \vec{b}_3(-2, -3, -2, -1)$ .

8.8. (a):  $\vec{a}_1(-3, 1, 2, 3), \vec{a}_2(-4, 0, 1, 1), \vec{a}_3(-8, -1, 4, 3)$ ;

(b):  $\vec{b}_1(-5, 1, 0, 1), \vec{b}_2(-6, 2, 1, 1), \vec{b}_3(-2, -3, -2, -1)$ .



## Takrorlash uchun savollar

1. Maydon ustida vektor fazo deb nimaga aytiladi?
2. Vektor fazoning asosiy xossalari bayon eting.
3. Vektor fazoga misollar keltiring.
4. Vektor fazoning fazoostisi deb nimaga aytiladi?
5. Fazoostilar kesishmasi deb nimaga aytiladi?
6. Fazoostilar yig'indisi, to'g'ri yig'indisi ta'rifini ayting.
7. Fazoostilar yig'indisi va to'g'ri yig'indisining qanday xossalari bilasiz?
8. Vektor fazoning bazisi deb nimaga aytiladi?
9. Vektor fazoning o'lchovi deb nimaga aytiladi?



## 20-§. Skalyar ko'paytmali vektor fazolar. Evklid vektor fazolar. Vektor fazolar izomorfizmi.

**Asosiy tushunchalar:** skalyar ko'paytma, xosmas, nol skalyar ko'paytmalar, unitar vektor fazo, ortogonal vektorlar, ortogonal bazis, ortonormal bazis, Evklid vektor fazo.

Agar  $V$  fazoning xar bir juft  $\bar{x}$  va  $\bar{y}$  elementlariga ularning skalyar ko'paytmasi deb ataluvchi yagona  $(\bar{x}, \bar{y})$  haqiqiy son mos qo'yilib, bu moslik uchun

$$1) (\bar{x}, \bar{y}) = (\bar{y}, \bar{x});$$

$$2) (\bar{x} + \bar{y}, \bar{z}) = (\bar{x}, \bar{z}) + (\bar{y}, \bar{z});$$

$$3) (\lambda \bar{x}, \bar{y}) = \lambda (\bar{x}, \bar{y}), \quad \forall \lambda \in R;$$

$$4) (\bar{x}, \bar{x}) \geq 0$$

shartlar bajarilsa, u holda  $V$  vektorlar fazosiga skalyar ko'paytmali fazo deyiladi.

Agar V fazoning istalgan  $\bar{x} \neq \bar{0}$  vektori uchun  $(\bar{x}, \bar{x}) \neq 0$  bo'lsa, V fazoda aniqlangan skalyar ko'paytma xosmas skalyar ko'paytma deyiladi.

Agar V fazoning istalgan  $\bar{x}$  va  $\bar{y}$  vektorlari uchun  $(\bar{x}, \bar{y}) = 0$  bo'lsa, V fazoda aniqlangan skalyar ko'paytma nol skalyar ko'paytma deyiladi.

Agar V fazoning istalgan  $\bar{x} \neq \bar{0}$  vektori uchun  $(\bar{x}, \bar{x}) > 0$  bo'lsa, bunday fazoga unitar fazo deyiladi.

Agar unitar fazoning ikkita  $\bar{x}$  va  $\bar{y}$  vektorlari uchun  $(\bar{x}, \bar{y}) = 0$  bo'lsa, u holda  $\bar{x}$  va  $\bar{y}$  vektorlar ortogonal vektorlar deyiladi.

Agar V fazoning  $\bar{a}_1, \bar{a}_2, \dots, \bar{a}_n$  (1)

vektorlar sistemasining istalgan ikkita elementi o'zaro ortogonal bo'lsa, u xolda (1) sistema ortogonal vektorlar sistemasi deyiladi.

Agar ortogonal vektorlar sistemasi qaralayotgan fazoning bazisi bo'lsa, bunday sistema ortogonal bazis deyiladi.

R maydon ustida aniqlangan  $V_n$  fazoning ixtiyoriy  $\bar{a}_1, \bar{a}_2, \dots, \bar{a}_n$  (1)

bazisini  $\bar{e}_1, \bar{e}_2, \dots, \bar{e}_n$  (2)

ortogonal bazisga aylantirish jarayoni bilan tanishamiz. Bu erda (1) dan (2) ni hosil qilish ortogonallashtirish jarayoni deyilib, u quyidagicha amalga oshiriladi:  $\bar{e}_1 = \bar{a}_1$  deb olamiz,  $\bar{a}_1 \neq \bar{0}$  bo'lgani uchun  $\bar{e}_1 \neq \bar{0}$  bo'ladi. Endi  $\bar{e}_2$  ni  $\bar{e}_2 = \bar{a}_2 + \alpha \bar{a}_1 = \bar{a}_2 + \alpha \bar{e}_1$  shaklda olib,  $\alpha$  sonni shunday aniqlaymizki, natijada  $(\bar{e}_1, \bar{e}_2) = 0$ , ya'ni  $(\bar{e}_1, \bar{e}_2) = (\bar{e}_1, \bar{a}_2 + \alpha \bar{e}_1) = (\bar{e}_1, \bar{a}_2) + \alpha (\bar{e}_1, \bar{e}_1) = 0$  (3)

bo'lsin.  $\bar{a}_1 = \bar{e}_1 \neq \bar{0}$  va  $\bar{a}_2 \neq \bar{0}$  bo'lgani uchun  $\bar{e}_2 \neq \bar{0}$  bo'ladi. (3) tenglikdan

$$\alpha = -\frac{(\bar{e}_1, \bar{a}_2)}{(\bar{e}_1, \bar{e}_1)}$$
 topiladi.

Endi  $\bar{e}_3$  ni  $\bar{e}_3 = \bar{a}_3 + \gamma \bar{e}_2 + \beta \bar{e}_1$  shaklda yozib olib,  $\beta$  va  $\gamma$  larni shunday tanlaymizki, natijada  $(\bar{e}_1, \bar{e}_3) = 0$  va  $(\bar{e}_2, \bar{e}_3) = 0$  bo'lsin, ya'ni

$$(\bar{e}_1, \bar{a}_3 + \gamma \bar{e}_2 + \beta \bar{e}_1) = 0, \quad (4)$$

$$(\bar{e}_2, \bar{a}_3 + \gamma \bar{e}_2 + \beta \bar{e}_1) = 0, \quad (5)$$

tengliklar bajarilsin. (4) va (5) tengliklardan

$$(\bar{e}_1, \bar{a}_3) + \gamma(\bar{e}_1, \bar{e}_2) + \beta(\bar{e}_1, \bar{e}_1) = 0,$$

$$(\bar{e}_2, \bar{a}_3) + \gamma(\bar{e}_2, \bar{e}_2) + \beta(\bar{e}_2, \bar{e}_1) = 0$$

hosil bo'lib, bunda  $(\bar{e}_1, \bar{e}_2) = (\bar{e}_2, \bar{e}_1) = 0$  ekanligini e'tiborga olsak,

$$\beta = -\frac{(\bar{e}_1, \bar{a}_3)}{(\bar{e}_1, \bar{e}_1)} \text{ va } \gamma = -\frac{(\bar{e}_2, \bar{a}_3)}{(\bar{e}_2, \bar{e}_2)} \text{ lar kelib chikadi.}$$

Bu jarayonni oxirigacha davom ettirib, (2) ortogonal bazisni hosil qilamiz.

Hakikiy sonlar maydoni ustida aniqlangan  $V$  unitar fazoga Evklid fazosi deyiladi.

$+\sqrt{(\bar{a}, \bar{a})}$  miqdor  $\bar{a} \in V$  vektorning normasi (uzunligi) deyiladi va  $\|\bar{a}\|$  orqali belgilanadi. Agar  $\|\bar{a}\| = 1$  bo'lsa,  $\bar{a}$  normallangan vektor deyiladi.

Evklid fazosining xar biri normallangan  $\bar{b}_1, \bar{b}_2, \dots, \bar{b}_n$  (6)

ortogonal vektorlar sistemasiga ortonormallangan vektorlar sistemasi deyiladi.

Agar (6) sistema bazis tashkil etsa, unga Evklid fazoning ortonormallangan bazisi deyiladi.

$\mathcal{F}$  maydonda berilgan  $V_n$  va  $V'_n$  chiziqli fazolar orasida shunday  $\varphi$  akslantirish mavjud bo'lib, u  $V_n$  ning xar bir  $\bar{x}$  vektorini  $V'_n$  ning yagona bitta  $\bar{x}'$  vektoriga o'zaro bir qiymatli akslantirsa va quyidagi shartalar bajarilsa,  $V_n$  va  $V'_n$  fazolar o'zaro izomorf chiziqli fazolar deyiladi:

$$1) \forall \bar{x}, \bar{y} \in V_n (\varphi(\bar{x} + \bar{y}) = \varphi(\bar{x}) + \varphi(\bar{y}));$$

$$2) \forall \bar{x} \in V_n \wedge \forall \alpha \in F (\varphi(\alpha \bar{x}) = \alpha \varphi(\bar{x})).$$

**Misol.** Berilgan  $\langle \bar{a}_1 = \langle 2, 1 \rangle, \bar{a}_2 = \langle 1, 1 \rangle$  vektorlar sistemasini 3 usulda bazisgacha to'ldiring.

**Yechish. 1-usul.** Vektorlar sistemasini bazisgacha to'ldirishning birinchi usuli –sistemani fazoning maksimal sondagi chiziqli erkli sistemasiga aylantirish

uchun bitta- bitta vektorlarni sistemaga qo'shish va har gal sistemani chiziqli erkliligini tekshirishdan iborat.

Berilgan vektorlar sistemasini chiziqli bog'liq yoki chiziqli erkli ekanligini tekshirib olamiz :

$$\begin{pmatrix} \vec{a}_1 \\ \vec{a}_2 \end{pmatrix} \begin{pmatrix} 1 & 2 & 1 \\ 1 & 1 & 1 \end{pmatrix} \sim \vec{a}_1 \begin{pmatrix} 1 & 2 & 1 \\ 0 & -1 & 0 \end{pmatrix}$$

Demak,  $\vec{a}_1, \vec{a}_2$  vektorlar sistemasi chiziqli erkli.

$\vec{a}_1, \vec{a}_2$  vektorlar  $R^3$  fazo vektorlari bo'lganligi uchun  $\vec{a}_1, \vec{a}_2$  sistemani  $R^3$  ning bazisigacha to'ldiramiz, ya'ni shunday  $\vec{a}_3$  vektorni  $R^3$  dan topamizki,  $\vec{a}_1, \vec{a}_2$  vektorlar bilan  $\vec{a}_3$  chiziqli ifodalanmasin. Masalan,  $\vec{a}_3=(0,0,1)$  bo'lsa, u holda  $\vec{a}_1, \vec{a}_2, \vec{a}_3$  sistema chiziqli erkli sistema bo'lishini tekshiramiz :

$$\begin{pmatrix} \vec{a}_1 \\ \vec{a}_2 \\ \vec{a}_3 \end{pmatrix} \begin{pmatrix} 1 & 2 & 1 \\ 1 & 1 & 1 \\ 0 & 0 & 1 \end{pmatrix} \sim \vec{a}_1 \begin{pmatrix} 1 & 2 & 1 \\ 0 & -1 & 0 \\ 0 & 0 & 1 \end{pmatrix}$$

Demak,  $\vec{a}_1, \vec{a}_2, \vec{a}_3$  - sistema  $R^3$  uchun bazis .

**2-usul .** Berilgan vektorlar sistemasiga fazoning biror- bir bazisini qo'shish yordamida vektorlar sistemasini bazisigacha to'ldiramiz. Buning uchun  $R^3$  fazoning  $\vec{e}_1(1,0,0), \vec{e}_2(0,1,0), \vec{e}_3(0,0,1)$  bazisini olamiz. U holda hosil bo'lgan  $\vec{a}_1, \vec{a}_2, \vec{a}_3, \vec{e}_1, \vec{e}_2, \vec{e}_3$  vektorlar sistemansi bazis xossalariga ko'ra chiziqli bog'liq. Bu sistemadagi  $\vec{a}_1, \vec{a}_2$  vektorlarni saqlab qolgan holda uni chiziqli erkli vektorlar sistemasiga keltiramiz :

$$\begin{pmatrix} \vec{a}_1 \\ \vec{a}_2 \\ \vec{e}_1 \\ \vec{e}_2 \\ \vec{e}_3 \end{pmatrix} \begin{pmatrix} 1 & 2 & 1 \\ 1 & 1 & 1 \\ 1 & 0 & 0 \\ 0 & 1 & 0 \\ 0 & 0 & 1 \end{pmatrix} \sim \begin{pmatrix} 1 & 2 & 1 \\ 0 & -1 & 0 \\ 0 & -2 & -1 \\ 0 & 1 & 0 \\ 0 & 0 & 1 \end{pmatrix} \begin{pmatrix} \vec{a}_1 \\ \vec{a}_2 - \vec{a}_1 \\ \vec{e}_1 - \vec{a}_1 \\ \vec{e}_2 \\ \vec{e}_3 \end{pmatrix} \sim \begin{pmatrix} 1 & 2 & 1 \\ 0 & -1 & 0 \\ 0 & 0 & -1 \\ 0 & 0 & 0 \\ 0 & 0 & 1 \end{pmatrix} \begin{pmatrix} \vec{a}_1 \\ \vec{a}_2 - \vec{a}_1 \\ \vec{e}_1 - \vec{a}_1 - 2(\vec{e}_2 - \vec{a}_1) \\ \vec{e}_2 + \vec{a}_2 - \vec{a}_1 \\ \vec{e}_3 \end{pmatrix}$$

$$\sim \begin{pmatrix} 1 & 2 & 1 \\ 0 & -1 & 0 \\ 0 & 0 & 1 \\ 0 & 0 & -1 \\ 0 & 0 & 0 \end{pmatrix} \begin{matrix} \vec{a}_1 \\ \vec{a}_2 - \vec{a}_1 \\ \vec{e}_3 \\ \vec{e}_1 - 3\vec{a}_1 - 2\vec{a}_2 \\ \vec{e}_2 + \vec{a}_2 - \vec{a}_1 \end{matrix}$$

Demak,  $\vec{a}_1, \vec{a}_2, \vec{a}_3, \vec{e}_3$ -sistema bazis bo'ladi.

**3-usul.** Berilgan sistema asosida ortogonal bazis hosil qilish.

Buning uchun berilgan  $\vec{a}_1, \vec{a}_2$  sistemani ortogonallashtirish jarayoni asosida ortogonal sistemaga keltiramiz:

$\vec{b}_1 = \vec{a}_1$  va  $\vec{b}_2 = \vec{a}_2 - \alpha \vec{b}_1$  belgilashlar kiritsak, u holda  $\vec{b}_1, \vec{b}_2$  vektorlar

ortogonal bo'lishi uchun  $(\vec{b}_1, \vec{b}_2) = 0$  shartni qo'llaymiz, ya'ni

$$0 = (\vec{b}_1, \vec{b}_2) = (\vec{b}_1, \vec{a}_2) - \alpha (\vec{b}_1, \vec{b}_1). \quad \text{Bu tenglamadan}$$

$$\alpha = \frac{(\vec{b}_1, \vec{a}_2)}{(\vec{b}_1, \vec{b}_1)} = \frac{((1,2,1), (1,1,1))}{6} = \frac{4}{6} = \frac{2}{3} \text{ ni hosil qilamiz.}$$

U holda  $\vec{b}_2 = \vec{a}_2 - \alpha \vec{b}_1 = (1,1,1) - \frac{2}{3}(1,2,1) = \left(\frac{1}{3}, -\frac{1}{3}, \frac{1}{3}\right)$  hosil bo'lgan

$\vec{b}_2 = \left(\frac{1}{3}, -\frac{1}{3}, \frac{1}{3}\right)$  vektor  $\vec{b}_1$  vektorga ortogonal va  $\vec{b}_1, \vec{b}_2$ -ortogonal sistema

chiziqli erkli.

$\vec{b}_1, \vec{b}_2$ - sistemani ortogonal bazisgacha to'ldirish uchun shunday  $\vec{b}_3$  vektorni topamizki, u  $(\vec{b}_1, \vec{b}_3) = 0 \wedge (\vec{b}_2, \vec{b}_3) = 0$  shartlarni qanoatlantirsin.  $\vec{b}_3 = (x, y, z)$  deb

$$\text{olib, } (\vec{b}_1, \vec{b}_3) = 0 \wedge (\vec{b}_2, \vec{b}_3) = 0 \text{ shartlardan } \begin{cases} x + 2y + z = 0 \\ \frac{x}{3} - \frac{y}{3} + \frac{z}{3} = 0 \end{cases} \text{ tenglamalar}$$

sistemasini tuzamiz. Keltirib chiqarilgan chiziqli tenglamalar sistemasini Gauss usulida yechimlarini topamiz :

$$\begin{cases} x + 2y + z = 0 \\ \frac{x}{3} - \frac{y}{3} + \frac{z}{3} = 0 \end{cases} \xrightarrow{(-1) \cdot 3} \begin{cases} x + 2y + z = 0 \\ -4y = 0 \end{cases} \Leftrightarrow \begin{cases} x = -z \\ y = 0 \\ z \in R \end{cases}$$

Demak, chiziqli tenglamalar sistemasining cheksiz ko'p yechimlari mavjud. Uning noldan farqli biror-bir yechimini, masalan,  $(-1,0,1)$  ni  $\vec{b}_3$  vektor sifatida olish natijasida  $\vec{b}_1, \vec{b}_2, \vec{b}_3$ -ortogonal bazisni hosil qilamiz.

**Misol.**  $\vec{a}_1 = \langle 2, 3 \rangle$ ,  $\vec{a}_2 = \langle 1, 1 \rangle$  vektorlar berilgan bo'lsa  $L(\vec{a}_1, \vec{a}_2)$  qismfazoning ortogonal to'ldiruvchisini toping.

**Yechish.** Qismfazo ortogonal to'ldiruvchisi ta'rifiga ko'ra  $\vec{a}_1, \vec{a}_2$  vektorlarga ortogonal vektorlar tashkil etgan qismfazoni topamiz. Buning uchun  $(\vec{a}_1, \vec{x}) = 0 \wedge (\vec{a}_2, \vec{x}) = 0$  shartlarni qanoatlantiruvchi  $\vec{x}$  vektorlarni aniqlaymiz.

Berilgan  $\vec{a}_1, \vec{a}_2$  vektorlar yordamida va  $\vec{x} = (x, y, z)$  belgilashdan quyidagi chiziqli tenglamalar sistemasini tuzamiz. 
$$\begin{cases} x + 2y + 3z = 0 \\ x + y + z = 0 \end{cases}$$
 Tenglamalar sistemasi

cheksiz ko'p yechimga ega, chunki sistema 3 noma'lumli va 2 ta tenglamadan iborat. Tenglamalar sistemasining umumiy yechimini aniqlaymiz:

$$\begin{cases} x + y + z = 0 \\ x + 2y + 3z = 0 \end{cases} \Leftrightarrow \begin{cases} x + y + z = 0 \\ y + 2z = 0 \end{cases} \Leftrightarrow \begin{cases} x = y \\ y = -2z \\ z \in \mathbb{R} \end{cases}$$

Bundan  $\vec{a}_1, \vec{a}_2$  sistemaga ortogonal vektorlar  $A = \langle -2z; z \mid z \in \mathbb{R} \rangle$  to'plamdan iborat. Bu to'plam  $z$  ning qiymatiga bog'liq bo'lgan vektorlardan iborat. Shuning uchun  $A$  to'plam tashkil etgan  $A = \langle A; +, \alpha \mid \lambda \in \mathbb{R} \rangle$  chiziqli fazo o'lchovi  $\dim A = 1$  va  $A$  chiziqli fazo  $L(\vec{a}_1, \vec{a}_2)$  chiziqli fazoning ortogonal to'ldiruvchisi bo'ladi.

**Misol.** Berilgan to'plamlar tashkil etgan chiziqli fazolar orasida izomorfizm

$$\text{o'rnating } V = \left\{ \begin{pmatrix} a & b & c \\ 0 & 0 & 0 \\ 0 & 0 & 0 \end{pmatrix} \mid a, b, c \in \mathbb{R} \right\}, V' = \left\{ \begin{pmatrix} a & 0 & 0 \\ 0 & b & 0 \\ 0 & 0 & c \end{pmatrix} \mid a, b, c \in \mathbb{R} \right\}.$$

**Yechish.** Berilgan to'plamlar tashkil etgan chiziqli vektor fazolar 3 o'lchovli fazolar. Berilgan  $V$  ning bazislaridan biri

$$A = \begin{pmatrix} 1 & 0 & 0 \\ 0 & 0 & 0 \\ 0 & 0 & 0 \end{pmatrix}, B = \begin{pmatrix} 0 & 1 & 0 \\ 0 & 0 & 0 \\ 0 & 0 & 0 \end{pmatrix}, C = \begin{pmatrix} 0 & 0 & 1 \\ 0 & 0 & 0 \\ 0 & 0 & 0 \end{pmatrix} \text{ va } V' \text{ ning bazislaridan biri}$$

$$A' = \begin{pmatrix} 1 & 0 & 0 \\ 0 & 0 & 0 \\ 0 & 0 & 0 \end{pmatrix}, B' = \begin{pmatrix} 0 & 1 & 0 \\ 0 & 0 & 0 \\ 0 & 0 & 0 \end{pmatrix}, C' = \begin{pmatrix} 0 & 0 & 1 \\ 0 & 0 & 0 \\ 0 & 0 & 0 \end{pmatrix} \text{ bo'lishi ayon.}$$

Bu fazolar orasida  $f(V) = V'$  akslantirishni quyidagicha aniqlaymiz:

$$f \left( \begin{pmatrix} a & b & c \\ 0 & 0 & 0 \\ 0 & 0 & 0 \end{pmatrix} \right) = \begin{pmatrix} a & 0 & 0 \\ 0 & b & 0 \\ 0 & 0 & c \end{pmatrix}.$$

$f$  - akslantirish izomorfizm bo'lishini isbotlaymiz :

$$1) \forall A_1, A_2 \in V, A_1 = \begin{pmatrix} a_1 & b_1 & c_1 \\ 0 & 0 & 0 \\ 0 & 0 & 0 \end{pmatrix}, A_2 = \begin{pmatrix} a_2 & b_2 & c_2 \\ 0 & 0 & 0 \\ 0 & 0 & 0 \end{pmatrix} \text{ lar uchun}$$

$$\begin{aligned} f(A_1 + A_2) &\stackrel{\text{amali ta'rifidan}}{=} f \left( \begin{pmatrix} a_1 & b_1 & c_1 \\ 0 & 0 & 0 \\ 0 & 0 & 0 \end{pmatrix} + \begin{pmatrix} a_2 & b_2 & c_2 \\ 0 & 0 & 0 \\ 0 & 0 & 0 \end{pmatrix} \right) = \left| \begin{array}{l} \text{matrisalarni qo'shish} \\ \text{amali ta'rifidan} \end{array} \right| = \\ &= \left( \begin{pmatrix} a_1 + a_2 & b_1 + b_2 & c_1 + c_2 \\ 0 & 0 & 0 \\ 0 & 0 & 0 \end{pmatrix} \right) = \left| \begin{array}{l} \text{akslantirish} \\ \text{ta'rifidan} \end{array} \right| = \begin{pmatrix} a_1 + a_2 & 0 & 0 \\ 0 & b_1 + b_2 & 0 \\ 0 & 0 & c_1 + c_2 \end{pmatrix} = \end{aligned}$$

$$= \left| \begin{array}{l} \text{matrisalarni qo'shish} \\ \text{amali ta'rifidan} \end{array} \right| = \begin{pmatrix} a_1 & 0 & 0 \\ 0 & b_1 & 0 \\ 0 & 0 & c_1 \end{pmatrix} + \begin{pmatrix} a_2 & 0 & 0 \\ 0 & b_2 & 0 \\ 0 & 0 & c_2 \end{pmatrix} = f(A_1) + f(A_2)$$

Demak,  $f$  akslantirish qo'shish binar amalini saqlaydi.

$$2). \forall A \in V \wedge \forall \alpha \in R \text{ lar uchun}$$



$$\begin{aligned}
f(\alpha \cdot A) &\stackrel{\cong}{=} f\left(\alpha \begin{pmatrix} a & b & c \\ 0 & 0 & 0 \\ 0 & 0 & 0 \end{pmatrix}\right) = \left| \begin{array}{l} \text{skalyarni matrisaga ko'paytirish} \\ \text{amali ta'rifidan} \end{array} \right| = \\
&= f\left(\begin{pmatrix} \alpha a & \alpha b & \alpha c \\ 0 & 0 & 0 \\ 0 & 0 & 0 \end{pmatrix}\right) = \left| \begin{array}{l} \text{akslantirish} \\ \text{ta'rifidan} \end{array} \right| = \left(\begin{pmatrix} \alpha a & 0 & 0 \\ 0 & \alpha b & 0 \\ 0 & 0 & \alpha c \end{pmatrix}\right) = \\
&= \left| \begin{array}{l} \text{skalyarni matrisaga ko'paytirish} \\ \text{amali ta'rifidan} \end{array} \right| = \alpha \begin{pmatrix} a & 0 & 0 \\ 0 & b & 0 \\ 0 & 0 & c \end{pmatrix} = \alpha \cdot f(A)
\end{aligned}$$

Demak,  $f$  akslantirish skalyarni matrisaga ko'paytirish amalini saqlaydi.

$V, V'$  chiziqli fazolar orasida aniqlangan  $f$ -akslantirish gomomorfizm ekan.

3)  $V'$  dan olingan ixtiyoriy  $f(A_1), f(A_2)$  lar uchun  $f(A_1) \neq f(A_2)$  bo'lsin.

U holda  $f(A_1) \stackrel{\cong}{=} \begin{pmatrix} a_1 & 0 & 0 \\ 0 & b_1 & 0 \\ 0 & 0 & c_1 \end{pmatrix}$  ning asli  $A_1 = \begin{pmatrix} a_1 & b_1 & c_1 \\ 0 & 0 & 0 \\ 0 & 0 & 0 \end{pmatrix}$  va

$f(A_2) \stackrel{\cong}{=} \begin{pmatrix} a_2 & 0 & 0 \\ 0 & b_2 & 0 \\ 0 & 0 & c_2 \end{pmatrix}$  ning asli  $A_2 = \begin{pmatrix} a_2 & b_2 & c_2 \\ 0 & 0 & 0 \\ 0 & 0 & 0 \end{pmatrix}$ .

Agar  $\begin{pmatrix} a_1 & 0 & 0 \\ 0 & b_1 & 0 \\ 0 & 0 & c_1 \end{pmatrix} \neq \begin{pmatrix} a_2 & 0 & 0 \\ 0 & b_2 & 0 \\ 0 & 0 & c_2 \end{pmatrix}$  bo'lsa, u holda

$a_1 \neq a_2 \vee b_1 \neq b_2 \vee c_1 \neq c_2$  bo'ladi. Bundan  $\begin{pmatrix} a_1 & b_1 & c_1 \\ 0 & 0 & 0 \\ 0 & 0 & 0 \end{pmatrix} \neq \begin{pmatrix} a_2 & b_2 & c_2 \\ 0 & 0 & 0 \\ 0 & 0 & 0 \end{pmatrix}$

ekanligi kelib chiqadi.

Ya'ni  $f: V \rightarrow V'$  in'ektiv akslantirish.

4)  $V'$  to'plamning ixtiyoriy  $f \in \mathcal{A} \cong \begin{pmatrix} a & 0 & 0 \\ 0 & b & 0 \\ 0 & 0 & c \end{pmatrix}$  elementi uchun  $V$

to'plamda  $A = \begin{pmatrix} a & b & c \\ 0 & 0 & 0 \\ 0 & 0 & 0 \end{pmatrix}$  element mavjud. Ya'ni  $f$  - syur'ektiv akslantirish.

Demak,  $f \in \mathcal{A} \cong V'$  akslantirish izomorfizm ekan.



### Misol va mashqlar

1. Skalyar ko'paytmaning quyidagi xossalarini isbotlang:

1.1.  $(\bar{x}, \bar{y} + \bar{z}) = (\bar{y} + \bar{z}, \bar{x}) = (\bar{y}, \bar{x}) + (\bar{z}, \bar{x}) = (\bar{x}, \bar{y}) + (\bar{x}, \bar{z});$

1.2.  $(\bar{x}, \lambda \bar{y}) = (\lambda \bar{y}, \bar{x}) = \lambda (\bar{y}, \bar{x}) = \lambda (\bar{x}, \bar{y}).$

2. Agar  $V$  skalyar ko'paytmaga ega bo'lgan fazo bo'lsa, u holda  $\forall \bar{x} \in V$  uchun  $(\bar{x}, \bar{0}) = 0$  bo'lishini isbotlang.

3. Biror  $V$  fazo Evklid fazosi bo'lishi uchun uning elementlari ustida quyidagi shartlar bajarilishi lozimligini isbotlang:

3.1.  $(\bar{x}, \bar{y}) = (\bar{y}, \bar{x}) \quad (\forall \bar{x}, \bar{y} \in V);$

3.2.  $(\bar{x}, \bar{y} + \bar{z}) = (\bar{x}, \bar{y}) + (\bar{x}, \bar{z}) \quad (\forall \bar{x}, \bar{y}, \bar{z} \in V);$

3.3.  $(\lambda \bar{x}, \bar{y}) = \lambda (\bar{x}, \bar{y}) \quad (\forall \bar{x}, \bar{y} \in V, \forall \lambda \in R);$

3.4.  $(\bar{x}, \bar{x}) > 0 \quad (\forall \bar{x} \in V, \bar{x} \neq \bar{0}), \quad (\bar{x}, \bar{x}) = 0 \quad (\bar{x} \in V, \bar{x} = \bar{0}).$

4.  $\bar{a}, \bar{b}$  - Evklid fazosining ixtiyoriy vektorlari va  $\lambda \in R$  uchun quyidagi xossalar o'rinli ekanligini isbotlang:

4.1.  $\|\bar{a}\| \geq 0 \quad (\|\bar{a}\| = 0 \Leftrightarrow \bar{a} = \bar{0});$

4.2.  $\|\lambda \bar{a}\| = |\lambda| \|\bar{a}\|;$

4.3.  $|\langle \bar{a}, \bar{b} \rangle| \leq \|\bar{a}\| \cdot \|\bar{b}\|$  (Koshi – Bunyakovskiy tengsizligi);

4.4.  $\|\bar{a} + \bar{b}\| \leq \|\bar{a}\| + \|\bar{b}\|$  (uchburchak tengsizligi).

5. Quyidagi vektorlar sistemasini ortogonallang:

5.1.  $\bar{a}_1(-1,1,1)$ ,  $\bar{a}_2(0,1,2)$ ,  $\bar{a}_3(1,2,3)$ .

5.2.  $\bar{a}_1(1,2,1,0)$ ,  $\bar{a}_2(-1,1,2,0)$ ,  $\bar{a}_3(1,1,1,1)$ ,  $\bar{a}_4(1,4,4,1)$ .

5.3.  $\bar{a}_1(-1,3,2,1)$ ,  $\bar{a}_2(0,0,5,5)$ ,  $\bar{a}_3(2,1,-1,1)$ .

5.4.  $\bar{a}_1(1,0,1)$ ,  $\bar{a}_2(-1,1,3)$ ,  $\bar{a}_3(13,34,5)$ .

5.5.  $\bar{a}_1(1,0,1,1)$ ,  $\bar{a}_2(1,1,1,1)$ ,  $\bar{a}_3(0,0,1,2)$ ,  $\bar{a}_4(-1,0,3,1)$ .

5.6.  $\bar{a}_1(1,0,1,1)$ ,  $\bar{a}_2(3,1,-3,0)$ ,  $\bar{a}_3(5,7,1,1)$ .

6. Chekli o'lvohvli Evklid fazosining istalgan bazisini ortonormallash mumkinligini isbotlang.

7. Agar  $V$  xosmas skalyar ko'paytmali vektor fazo bo'lsa, u holda  $V$  fazoning nolmas vektorlaridan tuzilgan ortogonal vektorlar sistemasi chiziqli erkli bo'lishini isbotlang.

8. Berilgan vektorlar sistemasini 3 usulda bazisgacha to'ldiring:

8.1.  $\bar{a}_1(1,0,3)$ ,  $\bar{a}_2(0,-4,-1)$ .

8.2.  $\bar{a}_1(-1,1,0,3)$ ,  $\bar{a}_2(2,0,-4,-1)$ ,  $\bar{a}_3(3,-1,0,-3)$ .

8.3.  $\bar{a}_1(0,2,3)$ ,  $\bar{a}_2(3,1,2)$ ,  $\bar{a}_3(6,2,4)$ .

8.4.  $\bar{a}_1(1,-2,1,0,1)$ ,  $\bar{a}_2(2,0,-5,1,1)$ ,  $\bar{a}_3(3,2,-3,-2,-1)$ .

8.5.  $\bar{a}_1(-1,1,0,3)$ ,  $\bar{a}_2(2,0,-4,-1)$ ,  $\bar{a}_3(1,1,-4,2)$ .

8.6.  $\bar{a}_1(5,-1,-4,-4)$ ,  $\bar{a}_2(2,0,-4,-1)$ .

8.7.  $\bar{a}_1(1,2,1,2,3)$ ,  $\bar{a}_2(3,4,0,1,1)$ .

8.8.  $\bar{a}_1(7,0,5,1)$ ,  $\bar{a}_2(3,5,5,0)$ ,  $\bar{a}_3(-3,2,-7,4)$ .

9. Evklid fazo fazoostisi ortogonal to'ldiruvchisining quyidagi xossalarini isbotlang:

9.1.  $(U^\perp)^\perp = U$ .

9.2.  $(U \cap V)^\perp = U^\perp + V^\perp$ .

9.3.  $(E)^\perp = \{\vec{0}\}$ .

9.4.  $\{\vec{0}\}^\perp = E$ .

$$9.5. (U^\perp \cap V^\perp)^\perp = U + V.$$

$$9.6. (U^\perp + V^\perp)^\perp = U \cap V.$$

$$9.7. (U \cap V \cap T)^\perp = U^\perp + V^\perp + T^\perp.$$

$$9.8. (U + V + T)^\perp = U^\perp \cap V^\perp \cap T^\perp.$$

10. Berilgan  $L(\vec{a}_1, \dots, \vec{a}_n)$  fazoostining ortogonal to'ldiruvchisini toping:

$$10.1. \vec{a}_1(3, -2).$$

$$10.2. \vec{a}_1(1, -2, 0).$$

$$10.3. \vec{a}_1(1, -2, 0, 1).$$

$$10.4. \vec{a}_1(-1, 2, 3), \vec{a}_2(3, -4, 1).$$

$$10.5. \vec{a}_1(1, 1, 1, 0), \vec{a}_2(1, 2, -4, 0).$$

$$10.6. \vec{a}_1(1, -2, 0, 1), \vec{a}_2(2, -4, 0, 2), \vec{a}_3(1, 1, 1, 1).$$

$$10.7. \vec{a}_1(4, 1, 0, 1, 1), \vec{a}_2(3, 1, 0, 1, 0), \vec{a}_3(1, 0, 0, 0, 2).$$

$$10.8. \vec{a}_1(2, 1, 2, 1, 3), \vec{a}_2(1, 2, 1, 2, 1), \vec{a}_3(3, 3, 3, 3, 3), \vec{a}_4(-1, 1, -1, 1, 0).$$

11. Berilgan  $L(\vec{a}_1, \dots, \vec{a}_n)$  fazoostining ortogonal to'ldiruvchisi bazisini

toping:

$$11.1. \vec{a}_1(1, -2, 3).$$

$$11.2. \vec{a}_1(1, -1, 2), \vec{a}_2(1, 0, 1), \vec{a}_3(2, -1, 4).$$

$$11.3. \vec{a}_1(1, 1, 0, -2), \vec{a}_2(2, 1, -1, 1), \vec{a}_3(3, 2, -1, -1).$$

$$11.4. \vec{a}_1(1, -1, 2, 1), \vec{a}_2(1, 0, 1, -1), \vec{a}_3(2, -1, 3, 0).$$

$$11.5. \vec{a}_1(1, 1, -1, 2), \vec{a}_2(2, 0, 1, 3), \vec{a}_3(4, 2, -1, 7), \vec{a}_4(3, 1, 0, 5).$$

$$11.6. \vec{a}_1(2, -1, 1, -3, 1, 1), \vec{a}_2(1, -1, 1, -1, 1), \vec{a}_3(0, 2, 1, 2, 0), \vec{a}_4(-1, 1, -1, 1, -1).$$

12. Quyidagi tenglamalar sistemasi yechimlar to'plami tashkil etgan fazoostining ortogonal to'ldiruvchisini toping:

$$12.1. \begin{cases} x_1 + x_2 + x_3 + x_4 = 0, \\ -x_1 + x_2 - x_3 + x_4 = 0. \end{cases}$$

$$12.2. \begin{cases} x_1 - 2x_2 + x_3 = 0, \\ 2x_1 - x_2 - x_3 = 0, \\ x_1 + x_2 - 2x_3 = 0. \end{cases}$$

$$12.3. \begin{cases} 2x_1 + x_2 + 3x_3 - x_4 = 0, \\ 3x_1 + 2x_2 - 2x_4 = 0, \\ 3x_1 + x_2 + 9x_3 - x_4 = 0. \end{cases}$$

$$12.4. \begin{cases} x_1 + x_2 + x_3 + x_4 = 0, \\ x_1 - x_2 - x_3 - 3x_4 = 0, \\ 3x_1 + x_2 + x_3 - x_4 = 0. \end{cases}$$

13.  $\mathcal{F}$  maydon ustidagi  $n$  o'lchovli har qanday ikkita  $V_n$  va  $V'_n$  chiziqli fazolar izomorfligini isbotlang.

14. Berilgan to'plamlar tashkil etgan chiziqli fazolar orasida izomorfizm o'rnatilgan:

$$14.1. V = \left\{ \begin{pmatrix} a & 0 \\ 0 & 0 \end{pmatrix} \mid a \in R \right\} \quad \text{va} \quad V = \left\{ \begin{pmatrix} 0 & a \\ a & 0 \end{pmatrix} \mid a \in R \right\}.$$

$$14.2. V = \left\{ \begin{pmatrix} a & b \\ 0 & 0 \end{pmatrix} \mid a, b \in R \right\} \quad \text{va} \quad V = \left\{ \begin{pmatrix} a & 0 \\ 0 & b \end{pmatrix} \mid a, b \in R \right\}.$$

$$14.3. V = \left\{ \begin{pmatrix} a & b \\ c & 0 \end{pmatrix} \mid a, b, c \in R \right\} \quad \text{va} \quad V = \left\{ \begin{pmatrix} 0 & c \\ b & a \end{pmatrix} \mid a \in R \right\}.$$

$$14.4. V = \left\{ \begin{pmatrix} a & b \\ c & d \end{pmatrix} \mid a, b, c, d \in R \right\} \quad \text{va} \quad V = \left\{ \begin{pmatrix} a & 2b \\ 3c & 4d \end{pmatrix} \mid a, b, c, d \in R \right\}.$$

$$14.5. V = \left\{ \begin{pmatrix} 0 & a & b \\ -a & 0 & c \\ -b & -c & 0 \end{pmatrix} \mid a, b, c \in R \right\} \quad \text{va} \quad V = \left\{ \begin{pmatrix} 0 & -a & -b \\ a & 0 & -c \\ b & c & 0 \end{pmatrix} \mid a, b, c \in R \right\}.$$

$$14.6. V = \left\{ \begin{pmatrix} a & b & 0 \\ c & 1 & 0 \\ 0 & 0 & 0 \end{pmatrix} \mid a, b, c \in R \right\} \quad \text{va} \quad V = \left\{ \begin{pmatrix} 0 & 0 & 0 \\ 0 & 1 & c \\ 0 & b & a \end{pmatrix} \mid a, b, c \in R \right\}.$$

$$14.7. V = \left\{ \begin{pmatrix} a & 0 & 0 \\ 0 & b & 0 \\ 0 & 0 & c \end{pmatrix} \mid a, b, c \in R \right\} \quad \text{va} \quad V = \left\{ \begin{pmatrix} 0 & 0 & c \\ 0 & b & 0 \\ a & 0 & 0 \end{pmatrix} \mid a, b, c \in R \right\}.$$

$$14.8. \quad V = \left\{ \begin{pmatrix} a & 0 & 0 \\ 0 & b & 0 \\ c & 0 & 0 \end{pmatrix} \mid a, b, c \in \mathbb{R} \right\} \quad \text{va} \quad V = \left\{ \begin{pmatrix} 0 & 0 & a \\ 0 & b & 0 \\ 0 & 0 & c \end{pmatrix} \mid a, b, c \in \mathbb{R} \right\}.$$

$$14.9. \quad V = \left\{ \begin{pmatrix} a & 1 & 0 \\ b & 2 & 0 \\ c & 3 & 0 \end{pmatrix} \mid a, b, c \in \mathbb{R} \right\} \quad \text{va}$$

$$V = \left\{ \begin{pmatrix} a & b & c \\ \alpha & \beta & \gamma \\ 0 & 0 & 0 \end{pmatrix} \mid a, b, c, \alpha, \beta, \gamma \in \mathbb{R} \right\}.$$

$$14.10. \quad V = \{a + bi \mid a, b \in \mathbb{R}\} \quad \text{va} \quad V = \{a - bi \mid a, b \in \mathbb{R}\}.$$

$$14.11. \quad V = \{a + bi \mid a, b \in \mathbb{R}\} \quad \text{va} \quad V = \mathbb{R}^2.$$

$$14.12. \quad V = \{a + b\sqrt{q} \mid a, b \in \mathbb{Q} \wedge q\text{-tub son}\} \quad \text{va} \quad V = \{a + b\sqrt{p} \mid a, b \in \mathbb{Q} \wedge p\text{-tub son}\}.$$



### Takrorlash uchun savollar

1. Vektor fazolar izomorfizmini tushuntiring.
2. Skalyar ko'paytmaning xossalarini bayon eting.
3. Skalyar ko'paytmali vektor fazo deb nimaga aytiladi?
4. Xosmas skalyar ko'paytma ta'rifini ayting.
5. Unitar fazo deb nimaga aytiladi?
6. Ortogonal vektorlar deb nimaga aytiladi?
7. Ortogonal vektorlar sistemasi deb nimaga aytiladi?
8. Ortogonal bazis deb nimaga aytiladi?
9. Ortogonallashtirish jarayonini bayon qiling.
10. Evklid fazo deb nimaga aytiladi?
11. Vektorning normasi deb nimaga aytiladi?
12. Vektor normasining xossalarini bayon qiling.
13. Normallangan vektor deb nimaga aytiladi?
14. Ortonormallangan bazis deb nimaga aytiladi?

## IX MODUL. CHIZIQLI AKSLANTIRISHLAR



### 21-§. Chiziqli akslantirish. Chiziqli operator yadrosi va obrazi. Chizikli operator matrisasi.

**Asosiy tushunchalar:** chiziqli akslantirish, chiziqli operator, operator yadrosi, tasviri, defekti, rangi, matrisasi.

$\mathcal{F}$  sonlar maydoni ustida aniqlangan  $U$  vektor fazoning  $V$  vektor fazoga akslantiruvchi  $\varphi$  akslantirish uchun ushbu

$$1. \varphi(\bar{x}_1 + \bar{x}_2) = \varphi(\bar{x}_1) + \varphi(\bar{x}_2),$$

2.  $\varphi(\lambda\bar{x}) = \lambda\varphi(\bar{x})$  ( $\lambda \in F$ ) shartlar bajarilsa, u holda  $U$  vektor fazo  $V$  vektor fazoga chiziqli akslanadi deyiladi.

$U$  fazoni  $V$  fazoga chiziqli akslantirishlar to'plamini  $Hom(U, V)$  orqali belgilanadi.

$U$  vektor fazoni o'zini o'ziga chiziqli akslantirish  $U$  fazoda aniqlangan chiziqli operator deyiladi.

$U$  vektor fazoning ixtiyoriy  $\bar{x}_1$  va  $\bar{x}_2$  elementlari va  $U$  da aniqlangan  $\varphi$  operator uchun  $\varphi(\bar{x}_1 + \bar{x}_2) = \varphi(\bar{x}_1) + \varphi(\bar{x}_2)$  tenglik bajarilsa, u holda  $\varphi$  ga  $U$  da aniqlangan additiv operator deyiladi.

Agar  $\lambda$  ixtiyoriy son bo'lganda  $U$  fazoning ixtiyoriy  $\bar{x}$  elementi uchun  $\varphi(\lambda\bar{x}) = \lambda\varphi(\bar{x})$  tenglik o'rinli bo'lsa, u holda  $\varphi$  ga  $U$  da aniqlangan bir jinsli operator deyiladi.

Agar  $\forall \bar{x} \in U$  uchun  $\varphi(\bar{x}) = 0$  tenglik bajarilsa, u holda  $\varphi$  operatorga nol operator deyiladi.

Agar  $\forall \bar{x} \in U$  uchun  $e(\bar{x}) = \bar{x}$  tenglik bajarilsa, u holda  $e$  ga ayniy (birlik) operator deyiladi.

Agar  $\forall \bar{x} \in U, \lambda \in P$  uchun  $\varphi(\lambda \bar{x}) = \lambda \varphi(\bar{x})$  tenglik bajarilsa, u holda  $\varphi$  ga o'xshashlik operatori deyiladi.

Agar  $U_n$  fazoning ixtiyoriy  $\bar{x}$  vektori uchun  $f(\bar{x}) = \varphi(\bar{x}) + \Psi(\bar{x})$  tenglik bajarilsa u holda  $f$  ga  $\varphi$  va  $\Psi$  operatorlarning yig'indisi deyiladi va u  $\varphi + \Psi = f$  orqali yoziladi.

$\alpha \in F, \forall \bar{x} \in U_n$  uchun  $(\alpha \varphi)\bar{x} = \alpha \varphi(\bar{x})$  tenglik bajarilsa, u holda  $\alpha \varphi$  ga  $\alpha$  skalyarni  $\varphi$  operatorga ko'paytmasi deyiladi.

$U_n$  fazoning  $\varphi$  operator yordamida nolga akslanuvchi barcha elementlari to'plamiga  $\varphi$  operatorning yadrosi deyiladi va u  $\text{Ker } \varphi$  orqali belgilanadi.  $\varphi$  chiziqli operator yadrosining o'lchovi shu operatorning defekti deyiladi.

$\varphi U_n$  fazoostiga  $\varphi$  operatorning obrazi deyiladi.  $\varphi U_n$  obrazning o'lchoviga  $\varphi$  operatorning rangi deyiladi.

Agar  $\bar{x} = (x_1, x_2, \dots, x_n) \in U$  bo'lib,  $\varphi(\bar{x}) = \varphi(x_1, x_2, \dots, x_n) = (x_1, x_2, \dots, x_k)$  ( $1 \leq k < n$ ) bo'lsa, ya'ni  $\varphi$  operator  $n$  o'lchovli fazodagi vektorni  $k$  o'lchovli fazodagi vektorga o'tkazuvchi operator bo'lsa, u holda  $\varphi$  ga proektsiyalovchi operator deyiladi.

$\mathcal{F}$  maydon ustida  $V_n$  vektor fazo berilgan bo'lib,  $\bar{e}_1, \bar{e}_2, \dots, \bar{e}_n$  (1)

uning bazisi bo'lsin. Agar  $\varphi$  operator  $V_n$  fazoda aniqlangan chiziqli operator bo'lsa, u holda  $\varphi(\bar{e}_1), \varphi(\bar{e}_2), \dots, \varphi(\bar{e}_n) \in V_n$  vektorlar (1) bazis orqali chiziqli

ifodalanadi, ya'ni

$$\begin{cases} \varphi(\bar{e}_1) = \alpha_{11} \bar{e}_1 + \alpha_{21} \bar{e}_2 + \dots + \alpha_{n1} \bar{e}_n, \\ \varphi(\bar{e}_2) = \alpha_{12} \bar{e}_1 + \alpha_{22} \bar{e}_2 + \dots + \alpha_{n2} \bar{e}_n, \\ \dots \\ \varphi(\bar{e}_n) = \alpha_{1n} \bar{e}_1 + \alpha_{2n} \bar{e}_2 + \dots + \alpha_{nn} \bar{e}_n. \end{cases}$$

Ushbu

$$M(\varphi) = \begin{pmatrix} \alpha_{11} & \alpha_{12} & \dots & \alpha_{1n} \\ \alpha_{21} & \alpha_{22} & \dots & \alpha_{2n} \\ \dots & \dots & \dots & \dots \\ \alpha_{n1} & \alpha_{n2} & \dots & \alpha_{nn} \end{pmatrix}$$



matrisa  $\varphi$  chiziqli operatorning (1) bazisdagi matrisasi deyiladi.

$\bar{x}$  va  $\varphi(\bar{x})$  vektorlarning (1) bazis orqali  $x = \beta_1 \bar{e}_1 + \dots + \beta_n \bar{e}_n$ ,  $\varphi(\bar{x}) = \gamma_1 \bar{e}_1 + \dots + \gamma_n \bar{e}_n$  ko'rinishda ifodalansin.  $\bar{x}$  va  $\varphi(\bar{x})$  vektorlarning (1) bazisga nisbatan ustun koordinatalarini mos ravishda ushbu

$$M(\bar{x}) = \begin{bmatrix} \beta_1 \\ \beta_2 \\ \dots \\ \beta_n \end{bmatrix}, \quad M(\varphi(\bar{x})) = \begin{bmatrix} \gamma_1 \\ \gamma_2 \\ \dots \\ \gamma_n \end{bmatrix}$$

ko'rinishlarda belgilaymiz. U holda  $\forall \bar{x} \in V_n$  uchun  $M(\varphi(\bar{x})) = M(\varphi)M(\bar{x})$  tenglik bajariladi.

Agar  $\mathcal{F}$  maydon ustida  $A, B \in F^{n \times n}$  matrisalar uchun teskarilantuvchi  $T \in F^{n \times n}$  matrisa mavjud bo'lib, ular uchun  $B = T^{-1}AT$  tenglik o'rinli bo'lsa, u holda  $A$  va  $V$  matrisalar o'xshash matrisalar deyiladi.

$\mathcal{F}$  maydon ustida  $V_n$  vektor fazoning (1)dan boshqa  $\bar{e}'_1, \bar{e}'_2, \dots, \bar{e}'_n$  (2)

bazisi berilgan bo'lsin. (2) bazisning vektorlarini (1) orqali chiziqli ifodalaymiz:

$$\begin{cases} \bar{e}'_1 = \beta_{11} \bar{e}_1 + \beta_{21} \bar{e}_2 + \dots + \beta_{n1} \bar{e}_n, \\ \bar{e}'_2 = \beta_{12} \bar{e}_1 + \beta_{22} \bar{e}_2 + \dots + \beta_{n2} \bar{e}_n, \\ \dots \\ \bar{e}'_n = \beta_{1n} \bar{e}_1 + \beta_{2n} \bar{e}_2 + \dots + \beta_{nn} \bar{e}_n. \end{cases}$$

U holda  $T = \begin{pmatrix} \beta_{11} & \beta_{12} & \dots & \beta_{1n} \\ \beta_{21} & \beta_{22} & \dots & \beta_{2n} \\ \dots & \dots & \dots & \dots \\ \beta_{n1} & \beta_{n2} & \dots & \beta_{nn} \end{pmatrix}$  matrisaga (2) bazisdan (1) bazisga o'tish

matrisasi deyiladi.

$\bar{x}$  vektorning birinchi va ikkinchi bazislardagi ustun koordinatalarini mos ravishda  $M(\bar{x})$  va  $M'(\bar{x})$  deb belgilasak, u holda  $\forall \bar{x} \in V_n$  vektor uchun  $M(\bar{x}) = TM'(\bar{x})$  va  $M'(\bar{x}) = T^{-1}M(\bar{x})$  tengliklar o'rinli bo'ladi.

$V_n$  fazoda aniqlangan  $\varphi$  chiziqli operator uchun  $M(\varphi)$  va  $M'(\varphi)$  lar  $\varphi$  chizikli operatorning birinchi va ikkinchi bazislarga nisbatan mos matrisalari bo'lsa, u holda  $M'(\varphi) = T^{-1}M(\varphi)T$  tenglik o'rinli bo'ladi.

**Misol.** Berilgan  $f(x) = (x_1 - x_2 + x_3; x_1; x_2)$  akslantirish chiziqli operator ekanligini isbotlang va uning rangi, defektini aniqlang.

**Yechish.** Chiziqli operator ta'rifiga ko'ra  $f$  akslantirish berilgan fazoni o'ziga akslantirishi va  $f(\bar{a} + \bar{b}) = f(\bar{a}) + f(\bar{b})$ ,  $f(\lambda\bar{a}) = \lambda f(\bar{a})$  shartlarga bo'ysunishi kerak.

$$1) \quad \forall \bar{x}, \bar{y} \in R^3 \quad \bar{x} = (x_1, x_2, x_3), \quad \bar{y} = (y_1, y_2, y_3) \quad \text{lar uchun} \quad f(\bar{x} + \bar{y}) = f(x_1 + y_1; x_2 + y_2; x_3 + y_3) = (x_1 + y_1 - (x_2 + y_2) + x_3 + y_3; x_1 + y_1; x_2 + y_2) =$$

$$= (x_1 - x_2 + x_3; x_1; x_2) + (y_1 - y_2 + y_3; y_1; y_2) = f(\bar{x}) + f(\bar{y})$$

$$2) \quad \forall \bar{x} \in R^3 \quad \text{va} \quad \forall \alpha \in R \quad \text{lar uchun}$$

$$f(\alpha\bar{x}) = f(\alpha(x_1, x_2, x_3)) = f(\alpha x_1, \alpha x_2, \alpha x_3) = (\alpha x_1 - \alpha x_2 + \alpha x_3; \alpha x_1; \alpha x_2) = \alpha (x_1 - x_2 + x_3; x_1; x_2) = \alpha \cdot f(\bar{x})$$

Demak,  $f$  akslantirish chiziqli akslantirish va u  $R^3$  ni o'ziga akslantirganligi uchun  $f$  - chiziqli operator.

3) *defect*  $f$  ni topish uchun  $\text{Ker } f$  ni aniqlaymiz.  $\text{Ker } f = \{ \bar{x} \mid f(\bar{x}) = \bar{0} \}$  ta'rifdan  $f(\bar{x}) = \bar{0}$  shartni qanoatlantiruvchi vektorlarni topamiz:

$$f(\bar{x}) = (x_1 - x_2 + x_3; x_1; x_2) = \bar{0}. \quad \text{Bundan}$$

$$\begin{cases} x_1 - x_2 + x_3 = 0 \\ x_1 = 0 \\ x_2 = 0 \end{cases} \iff \begin{cases} x_1 = 0 \\ x_2 = 0 \\ x_3 = 0 \end{cases}. \quad \text{Demak, } \text{Ker } f = \{ \bar{0} \}.$$

Nol chiziqli fazoning o'lchovi 0 ga teng. Bundan *defect*  $f = 0$

$\dim V = \text{defect } f + \text{rang } f$  tenglikdan  $\text{rang } f = \dim V - \text{defect } f$  ni, bundan,  $\text{rang } f = 3 - 0 = 3$  ni hosil qilamiz.

Demak, 1)  $f$  - chiziqli operator;

$$2) \text{ defect } f = 0$$

$$3) \text{ rang } f = 3$$

**Misol.** Agar  $M - \bar{e}_1, \bar{e}_2, \bar{e}_3$  bazisdagi.  $M' - \bar{e}'_1, \bar{e}'_2, \bar{e}'_3$  bazisdagi  $f(\bar{x}) = (x_1, x_2, x_3)$  operator matrisalari bo'lsa, u holda

$$a) M(f(\bar{x})) = M(f)M(\bar{x})$$

$$b) M'(\bar{x}) = T^{-1}M(\bar{x}) \wedge M(\bar{x}) = TM'(\bar{x})$$

$$v) M'(f) = T^{-1}M(f)T \wedge M(f) = TM'(f)T^{-1} \text{ shartlar bajarilishini tekshiring.}$$

$$\bar{x} = (1,3,1); \bar{e}'_1 = (1,0,2), \bar{e}'_2 = (2,1,1), \bar{e}'_3 = (1,3,0)$$

**Yechish.** 1) Berilgan  $f(\bar{x}) = (x_1, x_2, x_3)$  operatorning  $\bar{e}_1, \bar{e}_2, \bar{e}_3$  bazisdagi matrisasi  $M(f)$  ni topamiz. Buning uchun  $f(\bar{e}_1), f(\bar{e}_2), f(\bar{e}_3)$  vektorlarning  $\bar{e}_1, \bar{e}_2, \bar{e}_3$  bazisdagi chiziqli kombinatsiyalarini aniqlaymiz:

$$f(\bar{e}_1) = f \begin{pmatrix} 1 \\ 0 \\ 0 \end{pmatrix} \underset{\cong}{=} (1,0,0) = 1 \cdot \bar{e}_1 + 0 \cdot \bar{e}_2 + 0 \cdot \bar{e}_3$$

$$f(\bar{e}_2) = f \begin{pmatrix} 0 \\ 1 \\ 0 \end{pmatrix} \underset{\cong}{=} (0,0,1) = 0 \cdot \bar{e}_1 + 0 \cdot \bar{e}_2 + 1 \cdot \bar{e}_3$$

$$f(\bar{e}_3) = f \begin{pmatrix} 0 \\ 0 \\ 1 \end{pmatrix} \underset{\cong}{=} (0,1,0) = 0 \cdot \bar{e}_1 + 1 \cdot \bar{e}_2 + 0 \cdot \bar{e}_3$$

Chiziqli kombinatsiyalar koeffitsientlaridan matrisa hosil qilamiz. Bunda  $f(\bar{e}_i)$  ( $i = 1, \bar{3}$ ) ning chiziqli kombinatsiyasida qatnashgan koeffitsientlar ustun qilib yoziladi:

$$M(f) = \begin{pmatrix} 1 & 0 & 0 \\ 0 & 0 & 1 \\ 0 & 1 & 0 \end{pmatrix}.$$

2)  $M(f)$  matrisa yordamida  $f(\bar{x})$  vektorning ustun koordinatalarini topamiz:

$$M(f(\bar{x})) = M(f)M(\bar{x}) \text{ dan}$$

$$M(f(\bar{x})) = \begin{pmatrix} 1 & 0 & 0 \\ 0 & 0 & 1 \\ 0 & 1 & 0 \end{pmatrix} \begin{pmatrix} 1 \\ 3 \\ 1 \end{pmatrix} = \begin{pmatrix} 1 \\ 1 \\ 3 \end{pmatrix} \text{ ni hosil qilamiz.}$$

Olingan natijani tekshirish uchun operator talabini  $\bar{x} = (1,3,1)$  vektorga qo'llaymiz  $f(\bar{x}) = f(\mathbf{1},3,1) \rightrightarrows (1,1,3)$  kelib chiqadi.

3) Berilgan birinchi bazisdan ikkinchi bazisga o'tish matrisasini topamiz:

$$f(\bar{e}_1) = \alpha_1 \bar{e}_1 + \alpha_2 \bar{e}_2 + \alpha_3 \bar{e}_3$$

$$f(\bar{e}_2) = \beta_1 \bar{e}_1 + \beta_2 \bar{e}_2 + \beta_3 \bar{e}_3$$

$$f(\bar{e}_3) = \gamma_1 \bar{e}_1 + \gamma_2 \bar{e}_2 + \gamma_3 \bar{e}_3$$

$$\text{Bundan } f(\mathbf{1},0,2) \rightrightarrows (1,2,0) = 1 \cdot \bar{e}_1 + 2 \cdot \bar{e}_2 + 0 \cdot \bar{e}_3$$

$$f(\mathbf{2},1,1) \rightrightarrows (2,1,1) = 2 \cdot \bar{e}_1 + 1 \cdot \bar{e}_2 + 1 \cdot \bar{e}_3$$

$$f(\mathbf{1},3,0) \rightrightarrows (1,0,3) = 1 \cdot \bar{e}_1 + 0 \cdot \bar{e}_2 + 3 \cdot \bar{e}_3 \text{ kelib chiqadi.}$$

Birinchi bazisdan ikkinchi bazisga o'tish matrisasi  $T = \begin{pmatrix} 1 & 2 & 1 \\ 2 & 1 & 0 \\ 0 & 1 & 3 \end{pmatrix}$  dan iborat

bo'ladi. Uning teskarisini topamiz:

$$\left( \begin{array}{ccc|ccc} 1 & 2 & 1 & 1 & 0 & 0 \\ 2 & 1 & 0 & 0 & 1 & 0 \\ 0 & 1 & 3 & 0 & 0 & 1 \end{array} \right) \sim \left( \begin{array}{ccc|ccc} 1 & 2 & 1 & 1 & 0 & 0 \\ 0 & -3 & -2 & -2 & 1 & 0 \\ 0 & 1 & 3 & 0 & 0 & 1 \end{array} \right) \sim \left( \begin{array}{ccc|ccc} 1 & 2 & 1 & 1 & 0 & 0 \\ 0 & 1 & 3 & 0 & 0 & 1 \\ 0 & 0 & 7 & -2 & 1 & 3 \end{array} \right) \sim$$

$$\sim \left( \begin{array}{ccc|ccc} 1 & 2 & 0 & \frac{2}{7} & -\frac{1}{7} & -\frac{3}{7} \\ 0 & 1 & 0 & \frac{3}{7} & -\frac{3}{7} & -\frac{3}{7} \\ 0 & 0 & 1 & -\frac{3}{7} & \frac{1}{7} & \frac{3}{7} \end{array} \right) \sim \left( \begin{array}{ccc|ccc} 1 & 0 & 0 & -\frac{3}{7} & \frac{3}{7} & \frac{1}{7} \\ 0 & 1 & 0 & \frac{3}{7} & -\frac{3}{7} & -\frac{3}{7} \\ 0 & 0 & 1 & -\frac{3}{7} & \frac{1}{7} & \frac{3}{7} \end{array} \right).$$

$$\text{Demak, } T^{-1} = \frac{1}{7} \begin{pmatrix} -3 & 5 & 1 \\ 6 & -3 & -2 \\ -2 & 1 & 3 \end{pmatrix}.$$

$$\text{U holda } M'(\bar{x}) = T^{-1}M(\bar{x}) = \frac{1}{7} \begin{pmatrix} -3 & 5 & 1 \\ 6 & -3 & -2 \\ -2 & 1 & 3 \end{pmatrix} \begin{pmatrix} 1 \\ 3 \\ 1 \end{pmatrix} = \frac{1}{7} \begin{pmatrix} 13 \\ -5 \\ 4 \end{pmatrix} = \begin{pmatrix} \frac{13}{7} \\ -\frac{5}{7} \\ \frac{4}{7} \end{pmatrix}.$$

Tekshirish maqsadida  $M(\bar{x}) = TM'(\bar{x})$  tenglikni tuzamiz:

$$\begin{pmatrix} 1 \\ 3 \\ 1 \end{pmatrix} = \begin{pmatrix} 1 & 2 & 1 \\ 2 & 1 & 0 \\ 0 & 1 & 3 \end{pmatrix} \begin{pmatrix} \frac{13}{7} \\ -\frac{5}{7} \\ \frac{4}{7} \end{pmatrix} \Rightarrow \begin{pmatrix} 1 \\ 3 \\ 1 \end{pmatrix} = \begin{pmatrix} 1 \\ 3 \\ 1 \end{pmatrix}.$$

Demak,  $T, T^{-1}$  to'g'ri topilgan.

4)  $f$  operatorning 1- va 2-bazisdagi matrisalari orasidagi bog'lanishni o'rnatamiz:

$$\begin{aligned} M'(f) &= T^{-1}M(f)T = \frac{1}{7} \begin{pmatrix} -3 & 5 & 1 \\ 6 & -3 & -2 \\ -2 & 1 & 3 \end{pmatrix} \begin{pmatrix} 1 & 0 & 0 \\ 0 & 0 & 1 \\ 0 & 1 & 0 \end{pmatrix} \begin{pmatrix} 1 & 2 & 1 \\ 2 & 1 & 0 \\ 0 & 1 & 3 \end{pmatrix} = \frac{1}{7} \begin{pmatrix} -3 & 5 & 1 \\ 6 & -2 & -3 \\ -2 & 1 & 3 \end{pmatrix} \begin{pmatrix} 1 & 2 & 1 \\ 2 & 1 & 0 \\ 0 & 1 & 3 \end{pmatrix} = \\ &= \frac{1}{7} \begin{pmatrix} -1 & 0 & 12 \\ 2 & 7 & -3 \\ 4 & 0 & 1 \end{pmatrix}; \end{aligned}$$

Tekshirish uchun  $M(f) = TM'(f)T^{-1}$  tenglikka topilgan qiymatlarni qo'yamiz:

$$\begin{aligned} \begin{pmatrix} 1 & 0 & 0 \\ 0 & 0 & 1 \\ 0 & 1 & 0 \end{pmatrix} &= \begin{pmatrix} 1 & 2 & 1 \\ 2 & 1 & 0 \\ 0 & 1 & 3 \end{pmatrix} \cdot \frac{1}{7} \begin{pmatrix} -1 & 0 & 12 \\ 2 & 7 & -3 \\ 4 & 0 & 1 \end{pmatrix} \cdot \frac{1}{7} \begin{pmatrix} -3 & 5 & 1 \\ 6 & -3 & -2 \\ -2 & 1 & 3 \end{pmatrix} \\ \begin{pmatrix} 1 & 0 & 0 \\ 0 & 0 & 1 \\ 0 & 1 & 0 \end{pmatrix} &= \frac{1}{49} \begin{pmatrix} 7 & 14 & 7 \\ 0 & 7 & 21 \\ 14 & 7 & 0 \end{pmatrix} \begin{pmatrix} -3 & 5 & 1 \\ 6 & -3 & -2 \\ -2 & 1 & 3 \end{pmatrix} = \frac{1}{7} \cdot \begin{pmatrix} 1 & 2 & 1 \\ 0 & 1 & 3 \\ 2 & 1 & 0 \end{pmatrix} \begin{pmatrix} -3 & 5 & 1 \\ 6 & -3 & -2 \\ -2 & 1 & 3 \end{pmatrix} = \\ &= \frac{1}{7} \begin{pmatrix} 7 & 0 & 0 \\ 0 & 0 & 7 \\ 0 & 7 & 0 \end{pmatrix} = \begin{pmatrix} 1 & 0 & 0 \\ 0 & 0 & 1 \\ 0 & 1 & 0 \end{pmatrix}. \end{aligned}$$

Demak, berilgan misol to'g'ri yechilgan.



### Misol va mashqlar

1.  $\mathcal{F}$  sonlar maydoni ustida aniqlangan  $U$  vektor fazoda aniqlangan additiv operatorning quyidagi xossalarini isbotlang:

1.1.  $\varphi(\vec{0}) = \vec{0}$ .

$$1.2. \varphi(\bar{x}) = -\varphi(\bar{x}) \quad (\forall \bar{x} \in U).$$

$$1.3. \varphi(r\bar{x}) = r\varphi\bar{x} \quad (\forall r \in Q).$$

$$1.4. \varphi(\bar{x}_1 - \bar{x}_2) = \varphi(\bar{x}_1) - \varphi(\bar{x}_2) \quad (\forall \bar{x}_1, \bar{x}_2 \in U).$$

2.  $\varphi$  operator chiziqli operator bo'lishi uchun  $U$  fazoning ixtiriy  $\bar{x}_1$  va  $\bar{x}_2$  elementlari va  $\lambda_1, \lambda_2 \in F$  berilganda  $\varphi(\lambda_1\bar{x}_1 + \lambda_2\bar{x}_2) = \lambda_1\varphi(\bar{x}_1) + \lambda_2\varphi(\bar{x}_2)$  tenglikning bajarilishi zarur va etarli ekanligini isbotlang.

3. Agar  $\varphi$  chiziqli operator bo'lsa, u holda  $\forall x_i \in U, \lambda_i \in P \ (i = \overline{1, n})$  uchun Ushbu  $\varphi(\lambda_1\bar{x}_1 + \lambda_2\bar{x}_2 + \dots + \lambda_n\bar{x}_n) = \lambda_1\varphi(\bar{x}_1) + \lambda_2\varphi(\bar{x}_2) + \dots + \lambda_n\varphi(\bar{x}_n)$  tenglik o'rinli bo'lishini isbotlang.

4. Nol operator ham chiziqli operator bo'lishini isbotlang.

5.  $\vec{a}_1, \vec{a}_2, \vec{a}_3$  vektorlarni  $\vec{b}_1, \vec{b}_2, \vec{b}_3$  vektorlarga o'tkazuvchi yagona chiziqli akslantirish mavjudligini isbotlang va uning matrisasini toping:

$$5.1. \vec{a}_1 = (2, 3, 5), \vec{a}_2 = (0, 1, 2), \vec{a}_3 = (1, 0, 0);$$

$$\vec{b}_1 = (1, 1, 1), \vec{b}_2 = (1, 1, -1), \vec{b}_3 = (2, 1, 2).$$

$$5.2. \vec{a}_1 = (2, 0, 3), \vec{a}_2 = (4, 1, 5), \vec{a}_3 = (3, 1, 2);$$

$$\vec{b}_1 = (1, 2, -1), \vec{b}_2 = (4, 5, -2), \vec{b}_3 = (1, -1, 1)$$

6. Berilgan akslantirishlar chiziqli operator bo'lishini tekshiring:

$$6.1. f(x) = (x_2 + x_3; 2x_1 + x_3; 3x_1 - x_2 + x_3).$$

$$6.2. f(x) = (x_1 + x_2; 4x_3; x_1 + x_3 + 3).$$

$$6.3. f(x) = (x_1 - x_2; x_2 + x_3; x_3).$$

$$6.4. f(x) = (x_1; x_2 + 2x_3; -x_3).$$

$$6.5. f(x) = (-3(x_1 + x_2); x_2 + x_3; x_1).$$

$$6.6. f(x) = (0; 3(x_2 + x_3); x_1).$$

$$6.7. f(x) = (x_1 - x_2; 3x_2 - x_3; 0).$$

$$6.8. f(x) = (x_2; x_3; 2).$$

$$6.9. f(x) = (x_2; x_3; x_1).$$

$$6.10. f(x) = (-x_2; x_2 + x_3; x_3).$$

6.11.  $f(x) = (x_2 + x_3; 0; x_1 - 2x_2 + x_3)$ .

6.12.  $f(x) = (0; x_1; -2x_2 + x_3)$ .

6.13.  $f(x) = (x_1 - x_2 + x_3; x_3; x_1)$ .

6.14.  $f(x) = (1 - x_2 + x_3; x_3; x_1 - 2x_2)$ .

7. 6-misoldagi chiziqli operatorlarning rangi defektini aniqlang.

8. Nol bo'lmagan chekli o'lchovli vektor fazodagi  $\varphi$  chiziqli operatorning rangi  $\varphi$  chiziqli operator matrisasining rangiga teng bo'lishini isbotlang.

9. Berilgan chiziqli operatorlarning rangi  $r$  va defekti  $d$  ni toping:

9.1.  $\begin{pmatrix} 1 & 2 \\ 1 & 2 \end{pmatrix}$ .

9.2.  $\begin{pmatrix} 1 & 0 \\ 1 & 1 \end{pmatrix}$ .

9.3.  $\begin{pmatrix} 1 & 2 & 3 \\ -2 & -4 & -6 \\ 4 & 8 & 12 \end{pmatrix}$ .

9.4.  $\begin{pmatrix} 1 & 2 & 3 \\ -2 & -1 & -1 \\ 0 & 3 & -1 \end{pmatrix}$ .

9.5.  $\begin{pmatrix} 1 & 0 & 2 \\ 3 & 1 & 1 \\ -1 & 0 & 3 \end{pmatrix}$ .

9.6.  $\begin{pmatrix} 1 & 3 & 1 & 2 \\ -1 & -3 & -1 & -1 \\ 1 & 3 & 1 & 2 \\ 2 & 6 & 2 & 4 \end{pmatrix}$ .

9.7.  $\begin{pmatrix} 1 & -2 & 1 & 2 \\ 2 & 1 & 0 & 1 \\ 3 & -1 & 1 & 3 \\ 4 & -3 & 2 & 5 \end{pmatrix}$ .

9.8.  $\begin{pmatrix} 1 & 1 & 0 & 1 \\ -1 & 0 & 1 & 1 \\ 0 & 1 & 1 & 3 \\ 1 & 2 & 1 & 3 \end{pmatrix}$ .

10.  $\varphi$  chiziqli operatorlar yadrosi shu operator qaralayotgan fazoning fazoosti bo'lishini isbotlang.

11. 6-topshiriqdagi chiziqli operatorlar uchun quyidagi shartlar bajarilishini tekshiring:

a)  $M(f(\bar{x})) = M(f) \cdot M(\bar{x})$ ;

b)  $M'(\bar{x}) = T^{-1} \cdot M(\bar{x}) \wedge M(x) = T \cdot M'(\bar{x})$ ;

c)  $M'(f) = T^{-1} \cdot M(f) \cdot T \wedge M(f) = T \cdot M'(f) \cdot T^{-1}$

11.1.  $\bar{x} = (1, 2, 3)$ ;  $\bar{e}'_1(2, 1, 0)$ ,  $\bar{e}'_2(0, 3, 1)$ ,  $\bar{e}'_3(-1, 0, 2)$ .

11.2.  $\bar{x} = (6, -5, 13)$ ;  $\bar{e}'_1(3, 1, -2)$ ,  $\bar{e}'_2(1, 3, 1)$ ,  $\bar{e}'_3(1, 5, 0)$ .


- 11.3.  $\vec{x} = (1, 2, 3)$ ;  $\vec{e}'_1(1, 0, 3)$ ,  $\vec{e}'_2(1, 1, -2)$ ,  $\vec{e}'_3(2, -1, 2)$ .
- 11.4.  $\vec{x} = (-8, 5, 2)$ ;  $\vec{e}'_1(1, 1, 1)$ ,  $\vec{e}'_2(1, 2, 3)$ ,  $\vec{e}'_3(1, 3, 3)$ .
- 11.5.  $\vec{x} = (7, -2, -4, 3)$ ;  $\vec{e}'_1(1, 2, 3, -1)$ ,  $\vec{e}'_2(2, 3, 4, 1)$ ,  $\vec{e}'_3(1, 4, 3, 3)$ .
- 11.6.  $\vec{x} = (3, -5, 7)$ ;  $\vec{e}'_1(-1, 1, 1)$ ,  $\vec{e}'_2(-1, 2, 3)$ ,  $\vec{e}'_3(-1, 3, 3)$ .
- 11.7.  $\vec{x} = (3, 1, 9)$ ;  $\vec{e}'_1(1, 2, 3)$ ,  $\vec{e}'_2(2, 3, 4)$ ,  $\vec{e}'_3(1, 4, 3)$ .
- 11.8.  $\vec{x} = (6, -4, 5)$ ;  $\vec{e}'_1(2, 2, 3)$ ,  $\vec{e}'_2(1, -1, 0)$ ,  $\vec{e}'_3(-1, 2, 1)$ .
- 11.9.  $\vec{x} = (5, 0, 1)$ ;  $\vec{e}'_1(1, 2, 3)$ ,  $\vec{e}'_2(-1, 2, 0)$ ,  $\vec{e}'_3(-1, 2, 1)$ .
- 11.10.  $\vec{x} = (-4, 5, -2)$ ;  $\vec{e}'_1(2, -1, 0)$ ,  $\vec{e}'_2(0, -3, -1)$ ,  $\vec{e}'_3(1, 0, -2)$ .
- 11.11.  $\vec{x} = (3, 3, -2)$ ;  $\vec{e}'_1(1, 1, 0)$ ,  $\vec{e}'_2(0, 1, 1)$ ,  $\vec{e}'_3(1, 0, 1)$ .
- 11.12.  $\vec{x} = (5, 6, 7)$ ;  $\vec{e}'_1(2, 3, 0)$ ,  $\vec{e}'_2(0, 2, 3)$ ,  $\vec{e}'_3(2, 0, 3)$ .
- 11.13.  $\vec{x} = (-1, -2, -3)$ ;  $\vec{e}'_1(4, 0, 4)$ ,  $\vec{e}'_2(4, 4, 0)$ ,  $\vec{e}'_3(0, 4, 4)$ .



### Takrorlash uchun savollar

1. Chiziqli akslantirish, chizichkli operator deb nimaga aytiladi?
2. Additiv, bir jinsli operatorlarga misol keltiring.
3. Nol, birlik operatorlar deb nimaga aytiladi?
4. O'xshashlik, proektsiyalovchi operatorlar ta'rifini ayting.
5. Chiziqli operatorning yadrosi haqida tushuncha bering.
6. Chiziqli operatorning obrazini misol yordamida tushuntiring.
7. Chiziqli operator matrisasi qanday topiladi?
8. Chiziqli operator rangi deb nimaga aytiladi?
9. Chiziqli operatorning turli bazislarga nisbatan matrisalari orasidagi bog'lanish formulasini tushuntiring.
10. O'xshash matrisalar deb nimaga aytiladi?
11.  $\vec{x}$  va  $\varphi(\vec{x})$  vektorlar ustun koordinatalari orasidagi bog'lanish qanday o'rnatiladi?.



 22-§. Chiziqli operatorlar ustida amallar. Chiziqli algebralar.  
Teskari operator. Xos vektorlar va xos qiymatlar.

**Asosiy tushunchalar:** chiziqli algebra, rangi, chiziqli algebralar ustida amallar, operatorlar chiziqli algebrasi, chiziqli operator xos qiymati, xos vektorlari.

$\mathcal{F}$  maydon ustidagi  $V$  chiziqli fazo elementlari uchun quyidagi shartlar bajarilsa,

1.  $\bar{x}\bar{y} \in V (\forall \bar{x}, \bar{y} \in V)$ ;
2.  $\bar{x}(\bar{y}\bar{z}) = (\bar{x}\bar{y})\bar{z} (\forall \bar{x}, \bar{y}, \bar{z} \in V)$ ;
3.  $\bar{x}(\bar{y} + \bar{z}) = \bar{x}\bar{y} + \bar{x}\bar{z}$  **ba**  $(\bar{y} + \bar{z})\bar{x} = \bar{y}\bar{x} + \bar{z}\bar{x} (\forall \bar{x}, \bar{y}, \bar{z} \in V)$
4.  $\lambda(\bar{x}\bar{y}) = (\lambda\bar{x})\bar{y} = \bar{x}(\lambda\bar{y}) (\lambda \in F, \forall \bar{x}, \bar{y} \in V)$

u holda  $V$  fazoni  $\mathcal{F}$  maydon ustidagi chiziqli algebra deyiladi.

Agar  $V$  chiziqli algebrada  $\bar{x} \bullet \bar{y} = \bar{y} \bullet \bar{x} (\forall \bar{x}, \bar{y} \in V)$  shart bajarilsa,  $V$  kommutativ chiziqli algebra deyiladi.

$V$  chiziqli algebraning rangi deb  $V$  fazoning o'lchoviga aytiladi.

$V$  fazo  $\mathcal{F}$  maydon ustidagi vektor fazo bo'lib,  $\varphi, \psi$  lar shu vektor fazoning chiziqli operatorlari bo'lsin, u holda :

- 1)  $(\varphi + \psi)(\bar{x}) = \varphi(\bar{x}) + \psi(\bar{x})$ .
- 2)  $(\lambda\varphi)(\bar{x}) = \lambda\varphi(\bar{x})$ .
- 3)  $(\varphi\psi)(\bar{x}) = \varphi(\psi(\bar{x}))$ .

$\text{Hom}(V, V)$  to'plam  $\mathcal{F}$  maydon ustida vektor fazo tashkil qiladi.

$\langle \text{Hom}(V, V), +, \cdot | \lambda \in F \rangle$  algebra  $V$  vektor fazoning chiziqli operatorlar algebrasi deyiladi va quyidagicha belgilanadi:

$$\text{End } V = \langle \text{Hom}(V, V), +, \cdot | \lambda \in F \rangle.$$

$U$  va  $U'$  algebralar  $\mathcal{F}$  maydon ustidagi chizikli algebralar va  $\varphi: U \rightarrow U'$  akslantirish biektiv akslantirish bo'lib, quyidagi shartlar bajarilsa:

$$\begin{aligned} \varphi(\bar{a} + \bar{b}) &= \varphi(\bar{a}) + \varphi(\bar{b}); \\ \varphi(\lambda\bar{a}) &= \lambda\varphi(\bar{a}); \end{aligned}$$

$$\varphi(\bar{a} \cdot \bar{b}) = \varphi(\bar{a}) \cdot \varphi(\bar{b}), \forall \bar{a}, \bar{b} \in V \wedge \forall \lambda \in F$$

u holda  $\varphi$  akslantirishga U va U' chizikli algebralar izomorfizmi deyiladi.

Kompleks sonlar maydoni ustida qurilgan  $V_n$  vektor fazo va  $\varphi: V_n \rightarrow V_n$  chizikli operator berilgan bo'lsin. Ushbu  $\varphi(\bar{x}) = \lambda \bar{x} (\forall \bar{x} \in V_n, x \neq \bar{0}, \lambda \in F)$

tenglikni qanoatlantiruvchi  $\alpha$  songa  $\varphi$  chizikli operatorning xos qiymati,  $\bar{x}$  vektor esa  $\lambda$  xos qiymatga mos keluvchi xos vektori deyiladi.

$V_n$  vektor fazoning  $\bar{e}_1, \bar{e}_2, \dots, \bar{e}_n$  bazisida  $\varphi$  chizikli operator

$$A = \begin{pmatrix} a_{11} & a_{12} & \dots & a_{1n} \\ a_{21} & a_{22} & \dots & a_{2n} \\ \text{-----} \\ a_{n1} & a_{n2} & \dots & a_{nn} \end{pmatrix} \text{ matrisa yordamida berilgan bo'lsa, } |A - \lambda E| = 0 \text{ tenglamaga } \varphi$$

chizikli operatorning xarakteristik tenglamasi deyiladi.

**Misol.** Berilgan  $A = \begin{pmatrix} 1 & 2 & 1 & 0 \\ 2 & 0 & 1 & 0 \\ 0 & 1 & 0 & 1 \\ 1 & 1 & 0 & 0 \end{pmatrix}$  operatorga teskari operatorni toping.

**Yechish:** Berilgan A operatorga teskari operatorni topish uchun A matrisaga teskari matrisa topiladi.

$$\left( \begin{array}{cccc|cccc} 1 & 2 & 1 & 0 & 1 & 0 & 0 & 0 \\ 2 & 0 & 1 & 0 & 0 & 1 & 0 & 0 \\ 0 & 1 & 0 & 1 & 0 & 0 & 1 & 0 \\ 1 & 1 & 0 & 0 & 0 & 0 & 0 & 1 \end{array} \right) \sim \left( \begin{array}{cccc|cccc} 1 & 2 & 1 & 0 & 1 & 0 & 0 & 0 \\ 0 & -4 & -1 & 0 & -2 & 1 & 0 & 0 \\ 0 & 1 & 0 & 1 & 0 & 0 & 1 & 0 \\ 0 & -1 & -1 & 0 & -1 & 0 & 0 & 1 \end{array} \right) \sim$$

$$\left( \begin{array}{cccc|cccc} 1 & 2 & 1 & 0 & 1 & 0 & 0 & 0 \\ 0 & 1 & 0 & 1 & 0 & 0 & 1 & 0 \\ 0 & -4 & -1 & 0 & -2 & 1 & 0 & 0 \\ 0 & -1 & -1 & 0 & -1 & 0 & 0 & 1 \end{array} \right) \sim \left( \begin{array}{cccc|cccc} 1 & 2 & 1 & 0 & 1 & 0 & 0 & 0 \\ 0 & 1 & 0 & 1 & 0 & 0 & 1 & 0 \\ 0 & 0 & -1 & 4 & -2 & 1 & 4 & 0 \\ 0 & 0 & -1 & 1 & -1 & 0 & 1 & 1 \end{array} \right) \sim$$

$$\left( \begin{array}{cccc|cccc} 1 & 2 & 1 & 0 & 1 & 0 & 0 & 0 \\ 0 & 1 & 0 & 1 & 0 & 0 & 1 & 0 \\ 0 & 0 & 1 & -4 & 2 & -1 & -4 & 0 \\ 0 & 0 & 0 & -3 & 1 & -1 & -3 & 1 \end{array} \right) \sim \left( \begin{array}{cccc|cccc} 1 & 2 & 1 & 0 & 1 & 0 & 0 & 0 \\ 0 & 1 & 0 & 1 & 0 & 0 & 1 & 0 \\ 0 & 0 & 1 & -4 & 2 & -1 & -4 & 0 \\ 0 & 0 & 0 & 1 & -\frac{1}{3} & \frac{1}{3} & 1 & -\frac{1}{3} \end{array} \right) \sim$$

$$\sim \left( \begin{array}{cccc|cccc} 1 & 2 & 1 & 0 & 1 & 0 & 0 & 0 \\ 0 & 1 & 0 & 1 & 0 & 0 & 1 & 0 \\ 0 & 0 & 1 & 0 & \frac{2}{3} & \frac{1}{3} & 0 & -\frac{4}{3} \\ 0 & 0 & 0 & 1 & \frac{3}{3} & \frac{3}{3} & 0 & -\frac{4}{3} \\ 0 & 0 & 0 & 1 & -\frac{1}{3} & \frac{1}{3} & 1 & -\frac{1}{3} \end{array} \right) \sim \left( \begin{array}{cccc|cccc} 1 & 2 & 1 & 0 & 1 & 0 & 0 & 0 \\ 0 & 1 & 0 & 0 & \frac{1}{3} & -\frac{1}{3} & 0 & \frac{1}{3} \\ 0 & 0 & 1 & 0 & \frac{2}{3} & \frac{1}{3} & 0 & -\frac{4}{3} \\ 0 & 0 & 1 & 0 & \frac{3}{3} & \frac{3}{3} & 0 & -\frac{4}{3} \\ 0 & 0 & 0 & 1 & -\frac{1}{3} & \frac{1}{3} & 1 & -\frac{1}{3} \end{array} \right) \sim$$

$$\sim \left( \begin{array}{cccc|cccc} 1 & 2 & 0 & 0 & \frac{1}{3} & -\frac{1}{3} & 0 & \frac{4}{3} \\ 0 & 1 & 0 & 0 & \frac{1}{3} & -\frac{1}{3} & 0 & \frac{1}{3} \\ 0 & 0 & 1 & 0 & \frac{2}{3} & \frac{1}{3} & 0 & -\frac{4}{3} \\ 0 & 0 & 0 & 1 & -\frac{1}{3} & \frac{1}{3} & 1 & -\frac{1}{3} \end{array} \right) \sim \left( \begin{array}{cccc|cccc} 1 & 0 & 0 & 0 & -\frac{1}{3} & -\frac{1}{3} & 0 & \frac{2}{3} \\ 0 & 1 & 0 & 0 & \frac{1}{3} & -\frac{1}{3} & 0 & \frac{1}{3} \\ 0 & 0 & 1 & 0 & \frac{2}{3} & \frac{1}{3} & 0 & -\frac{4}{3} \\ 0 & 0 & 0 & 1 & -\frac{1}{3} & \frac{1}{3} & 1 & -\frac{1}{3} \end{array} \right)$$

$$A^{-1} = \frac{1}{3} \begin{pmatrix} -1 & 1 & 0 & 2 \\ 1 & -1 & 0 & 1 \\ 2 & 1 & 0 & -4 \\ -1 & 1 & 3 & -1 \end{pmatrix}.$$

$$\text{Tekshirish: } \frac{1}{3} \begin{pmatrix} 1 & 2 & 1 & 0 \\ 2 & 0 & 1 & 0 \\ 0 & 1 & 0 & 1 \\ 1 & 1 & 0 & 0 \end{pmatrix} \begin{pmatrix} -1 & 1 & 0 & 2 \\ 1 & -1 & 0 & 1 \\ 2 & 1 & 0 & -4 \\ -1 & 1 & 3 & -1 \end{pmatrix} = \begin{pmatrix} 1 & 0 & 0 & 0 \\ 0 & 1 & 0 & 0 \\ 0 & 0 & 1 & 0 \\ 0 & 0 & 0 & 1 \end{pmatrix}.$$

**Misol.**  $f$  chiziqli operator ( $a$ ) bazisda  $A$  matrisa orqali,  $\varphi$  chiziqli operator ( $b$ ) bazisda  $B$  matrisa orqali berilgan bo'lsa,  $4f + 2\varphi$  operatorning ( $e$ ) bazisdagi matrisasini toping:

$$(a): \bar{a}_1 = (1,1), \bar{a}_2 = (2,1); \quad A = \begin{pmatrix} 1 & 2 \\ 3 & 1 \end{pmatrix};$$

$$(b): \bar{b}_1 = (2,3), \bar{b}_2 = (3,2); \quad B = \begin{pmatrix} 0 & 1 \\ 2 & 3 \end{pmatrix};$$

**Yechish:** ( $a$ ) bazisdan ( $e$ ) bazisga o'tish matricasini topamiz:

$$\bar{a}_1 = (1,1) = 1 \cdot \bar{e}_1 + 1 \cdot \bar{e}_2; \quad \bar{a}_2 = (2,1) = 2 \cdot \bar{e}_1 + 1 \cdot \bar{e}_2; \quad \text{va} \quad T = \begin{pmatrix} 1 & 2 \\ 1 & 1 \end{pmatrix}$$

O'tish matrisasiga teskari matricani topamiz:

$$\left( \begin{array}{cc|cc} 1 & 2 & 1 & 0 \\ 1 & 1 & 0 & 1 \end{array} \right) \sim \left( \begin{array}{cc|cc} 1 & 2 & 1 & 0 \\ 0 & -1 & -1 & 1 \end{array} \right) \sim \left( \begin{array}{cc|cc} 1 & 0 & -1 & 2 \\ 0 & 1 & 1 & -1 \end{array} \right) \text{ bundan } T^{-1} = \begin{pmatrix} -1 & 2 \\ 1 & -1 \end{pmatrix}.$$

3-misoldagi  $M'(f) = T^{-1}M(f)T$  bog'lanishdan foydalanamiz:

$$M'(f) = \begin{pmatrix} -1 & 2 \\ 1 & -1 \end{pmatrix} \begin{pmatrix} 1 & 2 \\ 1 & -1 \end{pmatrix} \begin{pmatrix} 1 & 2 \\ 1 & 1 \end{pmatrix} = \begin{pmatrix} 5 & 0 \\ -2 & 1 \end{pmatrix} \begin{pmatrix} 1 & 2 \\ 1 & 1 \end{pmatrix} = \begin{pmatrix} 5 & 2 \\ 1 & -1 \end{pmatrix} \begin{pmatrix} 1 & 10 \\ -1 & -3 \end{pmatrix}$$

Demak,  $f$  operatorning  $(e)$  bazisdagi matrisasi  $\begin{pmatrix} 5 & 10 \\ -1 & -3 \end{pmatrix}$ .

Endi  $(b)$  bazisdan  $(e)$  bazisga o'tish matrisasini topamiz:

$$\bar{b}_1 = (2,3) = 2 \cdot \bar{e}_1 + 3 \cdot \bar{e}_2 ; \quad \bar{b}_2 = (3,2) = 3 \cdot \bar{e}_1 + 2 \cdot \bar{e}_2$$

O'tish matrisasi  $T = \begin{pmatrix} 2 & 3 \\ 3 & 2 \end{pmatrix}$ . Uning teskarisini topamiz:

$$\left( \begin{array}{cc|cc} 2 & 3 & 1 & 0 \\ 3 & 2 & 0 & 1 \end{array} \right) \sim \left( \begin{array}{cc|cc} 1 & \frac{3}{2} & \frac{1}{2} & 0 \\ 0 & -\frac{5}{2} & -\frac{3}{2} & 1 \end{array} \right) \sim \left( \begin{array}{cc|cc} 1 & 0 & -\frac{2}{5} & \frac{3}{5} \\ 0 & 1 & \frac{3}{5} & -\frac{2}{5} \end{array} \right). \text{ Bundan ,}$$

$$T^{-1} = \frac{1}{5} \begin{pmatrix} -2 & 3 \\ 3 & -2 \end{pmatrix}.$$

Endi  $\varphi$  operatorning  $(e)$  bazisdagi matrisasini topamiz:

$$M'(\varphi) = \frac{1}{5} \begin{pmatrix} -2 & 3 \\ 3 & -2 \end{pmatrix} \begin{pmatrix} 0 & 1 \\ 2 & 3 \end{pmatrix} \begin{pmatrix} 2 & 3 \\ 3 & 2 \end{pmatrix} = \frac{1}{5} \begin{pmatrix} 6 & 7 \\ -2 & -3 \end{pmatrix} \begin{pmatrix} 2 & 3 \\ 3 & 2 \end{pmatrix} = \frac{1}{5} \begin{pmatrix} 33 & 32 \\ -13 & -12 \end{pmatrix}$$

Demak,  $(e)$  bazisda  $f$  operator matrisasi  $\begin{pmatrix} 5 & 10 \\ -1 & -3 \end{pmatrix}$ ;  $\varphi$  operator matrisasi

$\frac{1}{5} \begin{pmatrix} 33 & 32 \\ -13 & -12 \end{pmatrix}$  ga teng. U holda

$$4f + 2\varphi = 4 \begin{pmatrix} 5 & 10 \\ -1 & -3 \end{pmatrix} + \frac{2}{5} \begin{pmatrix} 33 & 32 \\ -13 & -12 \end{pmatrix} = \begin{pmatrix} 20 & 40 \\ -4 & -12 \end{pmatrix} + \begin{pmatrix} \frac{66}{5} & \frac{64}{5} \\ -\frac{26}{5} & -\frac{24}{5} \end{pmatrix} =$$

$$= \begin{pmatrix} \left( \frac{166}{5} & \frac{264}{5} \right) \\ \left( -\frac{46}{5} & -\frac{84}{5} \right) \end{pmatrix}.$$

**Misol.**  $\begin{pmatrix} 1 & 0 & 1 \\ 0 & 1 & 1 \\ 3 & 1 & 0 \end{pmatrix}$  operatorning xos vektorlari va xos qiymatlarini toping.

**Yechish.** Berilgan operatorning xos qiymatlarini topish uchun  $|\lambda E - A| = 0$  tenglikdan foydalanamiz.

$$\left| \begin{pmatrix} 1 & 0 & 0 \\ 0 & 1 & 0 \\ 0 & 0 & 1 \end{pmatrix} - \begin{pmatrix} 1 & 0 & 1 \\ 0 & 1 & 1 \\ 3 & 1 & 0 \end{pmatrix} \right| = \left| \begin{pmatrix} \lambda - 1 & 0 & -1 \\ 0 & \lambda - 1 & -1 \\ -3 & -1 & \lambda \end{pmatrix} \right| = \lambda(\lambda - 1)^2 - 3(\lambda - 1) =$$

$$(\lambda - 1)(\lambda(\lambda - 1) - 4) = (\lambda - 1)(\lambda^2 - \lambda - 4) = 0$$

Bundan  $\lambda_1 = 1$ ,  $\lambda_{2/3} = \frac{1 \pm \sqrt{17}}{2}$  xos qiymatlarni topamiz.

Endi, berilgan operatorning xos vektorlarini topish uchun  $(A - \lambda E)X = 0$  tenglamadan foydalanamiz. Bu tengliklarning noldan farqli yechimlari berilgan operatorning xos vektorlari bo'ladi.

$\lambda_1 = 1$  uchun xos vektorlarni aniqlaymiz:

$$(A - E)X = 0 \Leftrightarrow \left( \begin{pmatrix} 1 & 0 & 1 \\ 0 & 1 & 1 \\ 3 & 1 & 0 \end{pmatrix} - \begin{pmatrix} 1 & 0 & 0 \\ 0 & 1 & 0 \\ 0 & 0 & 1 \end{pmatrix} \right) \begin{pmatrix} x_1 \\ x_2 \\ x_3 \end{pmatrix} = \begin{pmatrix} 0 \\ 0 \\ 0 \end{pmatrix}$$

$$\Leftrightarrow \begin{pmatrix} 0 & 0 & 1 \\ 0 & 0 & 1 \\ 3 & 1 & -1 \end{pmatrix} \begin{pmatrix} x_1 \\ x_2 \\ x_3 \end{pmatrix} = \begin{pmatrix} 0 \\ 0 \\ 0 \end{pmatrix} \Leftrightarrow \begin{cases} x_3 = 0 \\ x_3 = 0 \\ 3x_1 + x_2 - x_3 = 0 \end{cases} \Leftrightarrow \begin{cases} x_1 \in R \\ x_2 = -3x_1 \\ x_3 = 0 \end{cases}$$

Demak,  $\lambda_1 = 1$  xos qiymat uchun berilgan operatorning xos vektorlari

$\{(x_1, -3x_1, 0) \mid x_1 \in R \wedge x_1 \neq 0\}$  to'plamdan iborat.

$\lambda_2 = \frac{1 - \sqrt{17}}{2}$  uchun xos vektorlarni topamiz:

$$(A - \lambda E)X = 0 \Leftrightarrow \left( A - \frac{1 - \sqrt{17}}{2} E \right) X = 0 \Leftrightarrow$$

$$\left( \begin{pmatrix} 1 & 0 & 1 \\ 0 & 1 & 1 \\ 3 & 1 & 0 \end{pmatrix} - \begin{pmatrix} 1 - \frac{\sqrt{17}}{2} & 0 & 0 \\ 0 & \frac{1 - \sqrt{17}}{2} & 0 \\ 0 & 0 & \frac{1 - \sqrt{17}}{2} \end{pmatrix} \right) \begin{pmatrix} x_1 \\ x_2 \\ x_3 \end{pmatrix} = \begin{pmatrix} 0 \\ 0 \\ 0 \end{pmatrix} \Leftrightarrow$$

$$\Leftrightarrow \begin{pmatrix} 1 - \frac{1 - \sqrt{17}}{2} & 0 & 1 \\ 0 & 1 - \frac{1 - \sqrt{17}}{2} & 1 \\ 3 & 1 & -\frac{1 - \sqrt{17}}{2} \end{pmatrix} \begin{pmatrix} x_1 \\ x_2 \\ x_3 \end{pmatrix} = \begin{pmatrix} 0 \\ 0 \\ 0 \end{pmatrix} \Leftrightarrow$$

$$\begin{cases} \left(1 - \frac{1 - \sqrt{17}}{2}\right) x_1 + x_3 = 0 \\ \left(1 - \frac{1 - \sqrt{17}}{2}\right) x_2 + x_3 = 0 \\ 3x_1 + x_2 - 1 - \frac{1 - \sqrt{17}}{2} x_3 = 0 \end{cases} \Leftrightarrow \begin{cases} \left(1 - \frac{1 - \sqrt{17}}{2}\right) x_1 + x_3 = 0 \\ \left(1 - \frac{1 - \sqrt{17}}{2}\right) x_2 + x_3 = 0 \\ \left(\frac{1 - \sqrt{17}}{2}\right) x_2 + x_3 = 0 \end{cases} \Leftrightarrow$$

$$\Leftrightarrow \begin{cases} x_1 = -\frac{2}{1 + \sqrt{17}} x_3 = 0 \\ x_2 = -\frac{2}{1 + \sqrt{17}} x_3 = 0 \\ x_3 \in R \end{cases}$$

Demak,  $\lambda_2 = \frac{1 - \sqrt{17}}{2}$  xos qiymat uchun operatorning xos vektorlari

$\left\{ \left( -\frac{2}{1 + \sqrt{17}} x_3; -\frac{2}{1 + \sqrt{17}} x_3; x_3 \right) \mid x_3 \in R \wedge x_3 \neq 0 \right\}$  to'plamdan iborat.

$\lambda_3 = \frac{1 + \sqrt{17}}{2}$  uchun xos vektorlarni topamiz:

$$\begin{aligned} \left(A - \frac{1+\sqrt{17}}{2}E\right)X = 0 &\Leftrightarrow \begin{pmatrix} 1 & 0 & 1 \\ 0 & 1 & 1 \\ 3 & 1 & 0 \end{pmatrix} - \begin{pmatrix} \frac{1+\sqrt{17}}{2} & 0 & 0 \\ 0 & \frac{1+\sqrt{17}}{2} & 0 \\ 0 & 0 & \frac{1+\sqrt{17}}{2} \end{pmatrix} \begin{pmatrix} x_1 \\ x_2 \\ x_3 \end{pmatrix} = \begin{pmatrix} 0 \\ 0 \\ 0 \end{pmatrix} \Leftrightarrow \\ &\Leftrightarrow \begin{pmatrix} 1 - \frac{1+\sqrt{17}}{2} & 0 & 1 \\ 0 & 1 - \frac{1+\sqrt{17}}{2} & 1 \\ 3 & 1 & -\frac{1+\sqrt{17}}{2} \end{pmatrix} \begin{pmatrix} x_1 \\ x_2 \\ x_3 \end{pmatrix} = \begin{pmatrix} 0 \\ 0 \\ 0 \end{pmatrix} \Leftrightarrow \\ &\Leftrightarrow \begin{cases} \frac{1-\sqrt{17}}{2}x_1 + x_3 = 0 \\ \frac{1-\sqrt{17}}{2}x_2 + x_3 = 0 \\ 3x_1 + x_2 - \frac{1+\sqrt{17}}{2}x_3 = 0 \end{cases} \Leftrightarrow \begin{cases} \frac{1-\sqrt{17}}{2}x_1 + x_3 = 0 \\ \frac{1-\sqrt{17}}{2}x_2 + x_3 = 0 \\ \frac{1-\sqrt{17}}{2}x_2 - x_3 = 0 \end{cases} \Leftrightarrow \\ &\Leftrightarrow \begin{cases} \frac{1-\sqrt{17}}{2}x_1 + x_3 = 0 \\ \frac{1-\sqrt{17}}{2}x_2 + x_3 = 0 \\ -2x_3 = 0 \end{cases} \Leftrightarrow \begin{cases} x_1 = 0 \\ x_2 = 0 \\ x_3 = 0 \end{cases} \end{aligned}$$

Demak,  $\lambda = \frac{1-\sqrt{17}}{2}$  xos qiymat uchun xos vektorlar mavjud emas.



### Misol va mashqlar

1.f chiziqli operator  $\vec{a}_1, \vec{a}_2$  bazisida A matrisa,  $\varphi$  chiziqli operator  $\vec{b}_1, \vec{b}_2$  bazisida V matrisa yordamida berilgan bo'lsa,  $f + \varphi$  operatorning matrisasini toping:

$$1.1. \vec{a}_1 = (1, -2), \vec{a}_2 = (3, -5), A = \begin{pmatrix} 37 & -13 \\ 108 & -38 \end{pmatrix},$$

$$\vec{b}_1 = (1, 2), \vec{b}_2 = (2, 5), B = \begin{pmatrix} 1 & 1 \\ 2 & 2 \end{pmatrix}.$$

$$1.2. \vec{a}_1 = (7,3), \vec{a}_2(2,1), \quad A = \begin{pmatrix} 3 & 5 \\ 1 & 2 \end{pmatrix},$$

$$\vec{b}_1 = (6,1), \vec{b}_2(5,1), \quad B = \begin{pmatrix} 3 & -2 \\ 6 & -6 \end{pmatrix}.$$

2.  $f$  chiziqli operator  $\vec{a}_1 = (-3,-1), \vec{a}_2(7,2)$  bazisda  $A = \begin{pmatrix} 2 & -1 \\ -2 & 2 \end{pmatrix}$  matrisa,  $\varphi$

chiziqli operator  $\vec{b}_1 = (3,2), \vec{b}_2 = (4,3)$  bazisda  $B = \begin{pmatrix} -14 & 10 \\ -21 & 15 \end{pmatrix}$  matrisa yordamida

berilgan bo'lsa,  $\varphi\varphi$  operatorning matrisasini toping.

3.  $f$  chiziqli operator  $(a)$  bazisda  $A$  matrisa orqali,  $\varphi$  chiziqli operator  $(b)$  bazisda  $V$  matrisa orqali berilgan bo'lsa,  $\lambda f + \mu \varphi$  operatorning  $(e)$  bazisdagi matrisasini toping:

$$3.1. (a): \vec{a}_1(1,2), \vec{a}_2(0,1); \quad A = \begin{pmatrix} 2 & 1 \\ 3 & -1 \end{pmatrix};$$

$$(b): \vec{b}_1(3,1), \vec{b}_2(2,1); \quad V = \begin{pmatrix} -1 & 1 \\ 4 & 2 \end{pmatrix}; \quad 3f + \varphi.$$

$$3.2. (a): \vec{a}_1(-1,3), \vec{a}_2(1,1); \quad A = \begin{pmatrix} 2 & 1 \\ 3 & -1 \end{pmatrix};$$

$$(b): \vec{b}_1(-2,1), \vec{b}_2(2,4); \quad V = \begin{pmatrix} -1 & 1 \\ 4 & 2 \end{pmatrix}; \quad -2f + 3\varphi.$$

$$3.3. (a): \vec{a}_1(8,9), \vec{a}_2(3,1); \quad A = \begin{pmatrix} 7 & -2 \\ 1 & 5 \end{pmatrix};$$

$$(b): \vec{b}_1(4,5), \vec{b}_2(1,-4); \quad V = \begin{pmatrix} 6 & -5 \\ 0 & -2 \end{pmatrix}; \quad f - 4\varphi.$$

$$3.4. (a): \vec{a}_1(1,2), \vec{a}_2(3,4); \quad A = \begin{pmatrix} -4 & 5 \\ -7 & 6 \end{pmatrix};$$

$$(b): \vec{b}_1(-1,-2), \vec{b}_2(-3,-4); \quad V = \begin{pmatrix} 1 & -8 \\ -9 & 10 \end{pmatrix}; \quad 5f - 2\varphi.$$



3.5. (a):  $\vec{a}_1(-7,6), \vec{a}_2(5,-4); A = \begin{pmatrix} 0 & 2 \\ -3 & 4 \end{pmatrix};$

(b):  $\vec{b}_1(2,-1), \vec{b}_2(-4,3); V = \begin{pmatrix} 3 & -5 \\ -4 & 0 \end{pmatrix}; -3f + \varphi.$

3.6. (a):  $\vec{a}_1(1,-1), \vec{a}_2(-2,1); A = \begin{pmatrix} 3 & 7 \\ 5 & 4 \end{pmatrix};$

(b):  $\vec{b}_1(2,1), \vec{b}_2(1,3); V = \begin{pmatrix} 1 & 5 \\ 3 & 2 \end{pmatrix}; 2f + 5\varphi.$

4.  $C = \{a+bi \mid \forall a, b \in \mathbb{R}, i^2 = -1\}$  to'plam  $\mathbb{R}$  maydon ustida rangi ikkiga teng bo'lgan chiziqli algebra tashkil etishini isbotlang.

5. Barcha  $n$ -tartibli kvadrat matrisalar to'plami  $F^{n \times n}$ ,  $\mathcal{F}$  maydon ustida rangi  $n^2$  bo'lgan chiziqli algebra tashkil etishini isbotlang.

6. Berilgan operatorlarga teskari operatorni toping:

6.1.  $A = \begin{pmatrix} 1 & 0 \\ 1 & 1 \end{pmatrix}.$

6.2.  $A = \begin{pmatrix} 0 & -1 & -1 \\ 1 & 2 & 3 \\ -2 & 1 & -1 \end{pmatrix}.$

6.2.  $A = \begin{pmatrix} 1 & 0 & 1 & 2 \\ 0 & 1 & -1 & -1 \\ 3 & 1 & 2 & 4 \\ 4 & 2 & 3 & 1 \end{pmatrix}.$

6.4.  $A = \begin{pmatrix} 1 & 1 & 1 & 1 \\ 0 & 1 & 1 & 1 \\ 0 & 0 & 1 & 1 \\ 0 & 0 & 0 & 1 \end{pmatrix}.$

6.3.  $A = \begin{pmatrix} 5 & 4 & 62 & -79 \\ 0 & 0 & 2 & 3 \\ 6 & 5 & 183 & 201 \\ 0 & 0 & 3 & 4 \end{pmatrix}.$

6.6.  $A = \begin{pmatrix} 3 & 2 & 1 & 2 \\ 7 & 5 & 2 & 5 \\ 0 & 0 & 9 & 4 \\ 0 & 0 & 11 & 5 \end{pmatrix}.$

6.4.  $A = \begin{pmatrix} 2 & 5 & 4 & 1 \\ 1 & 3 & 2 & 1 \\ 2 & 10 & 9 & 7 \\ 3 & 8 & 9 & 2 \end{pmatrix}.$

6.8.  $A = \begin{pmatrix} 3 & 5 & -3 & 2 \\ 4 & -2 & 5 & 3 \\ 7 & 8 & -1 & 5 \\ 6 & 4 & 5 & 3 \end{pmatrix}.$

$$6.5. A = \begin{pmatrix} 1 & 2 & 3 & 4 \\ 2 & 3 & 1 & 2 \\ 1 & 1 & 1 & -1 \\ 1 & 0 & -2 & -6 \end{pmatrix}. \quad 6.10. A = \begin{pmatrix} 0 & 0 & 0 & 1 & -1 \\ 0 & 0 & 1 & 0 & 2 \\ 0 & 1 & 0 & 0 & 2 \\ 1 & 0 & 0 & 0 & 1 \\ 1 & -2 & 4 & 1 & 5 \end{pmatrix}.$$

7. Quyidagi chiziqli operatorlarning xos qiymatlari va xos vektorlarini toping:

$$7.1. \begin{pmatrix} 2 & 4 \\ 1 & 2 \end{pmatrix}. \quad 7.2. \begin{pmatrix} 2 & 0 \\ 1 & 2 \end{pmatrix}.$$

$$7.3. \begin{pmatrix} 1 & -3 & 0 \\ -1 & -2 & 3 \\ -1 & -4 & 4 \end{pmatrix}. \quad 7.4. \begin{pmatrix} 2 & 0 & 0 \\ 0 & 3 & 2 \\ 0 & -2 & 3 \end{pmatrix}.$$

$$7.5. \begin{pmatrix} 6 & 1 & -5 \\ 3 & 12 & -3 \\ 7 & 1 & -6 \end{pmatrix}. \quad 7.6. \begin{pmatrix} 0 & 1 & 0 \\ -4 & 4 & 0 \\ -2 & 1 & 2 \end{pmatrix}.$$

$$7.7. \begin{pmatrix} 1 & 0 & 0 & 0 \\ 0 & 0 & 0 & 0 \\ 1 & 0 & 1 & 0 \\ 0 & 0 & 0 & 1 \end{pmatrix}. \quad 7.8. \begin{pmatrix} 3 & -1 & 0 & 0 \\ 1 & 1 & 0 & 0 \\ 3 & 0 & 5 & -3 \\ 4 & -1 & 3 & -1 \end{pmatrix}.$$

$$7.9. \begin{pmatrix} 1 & 1 & 0 & 0 \\ -1 & 1 & 0 & 0 \\ 0 & 0 & 2 & 4 \\ 0 & 1 & 1 & 2 \end{pmatrix}. \quad 7.10. \begin{pmatrix} 3 & -1 & 0 & 0 \\ 1 & 1 & 0 & 0 \\ 3 & 0 & 5 & -3 \\ 4 & -1 & 3 & -1 \end{pmatrix}.$$



### Takrorlash uchun savollar

1. Chiziqli operatorlar ustida qanday amallar bajariladi?
2. Chiziqli algebra deb nimaga aytiladi?
3. Chiziqli operatorlar algebrasi deb nimaga aytiladi?
4. Matritsalar chiziqli algebrasini tushuntiring.
5. Chiziqli operatorning teskarisi qanday topiladi?
6. Chiziqli operatorning xos qiymatlar, xos vektorlari deb nimaga aytiladi?

## X MODUL. CHIZIQLI TENGSIZLIKLAR SISTEMASI

### 23-§. Chiziqli tengsizliklar sistemasi. Qavariq konus.

**Asosiy tushunchalar:** chiziqli tengsizliklar sistemasi, yechim, chiziqli kombinatsiya, qavariq konus, yo'ldosh sistema.

Ushbu  $a_1x_1 + a_2x_2 + \dots + a_nx_n + b \geq 0$  (1) tengsizlik  $R$  haqiqiy sonlar maydoni ustidagi  $n$  ta noma'lumli chiziqli tengsizlik deyiladi. (1) da  $x_1, x_2, \dots, x_n$  – noma'lumlar,  $a_i, b \in R$  ( $i = \overline{1, n}$ ) esa koeffitsientlar deyiladi.

Agar (1) da  $b=0$  bo'lsa (1) ni bir jinsli,  $b \neq 0$  bulsa, (1) ni bir jinsli bo'lmagan chiziqli tengsizlik deyiladi.

$a_{i1}x_1 + a_{i2}x_2 + \dots + a_{in}x_n + b_i \geq 0$   $i = \overline{1, m}$ , (2) sistemaning barcha tengsizliklarini qanoatlantiruvchi  $x_1 = \alpha_1, x_2 = \alpha_2, \dots, x_n = \alpha_n$  sonlar (2) sistemaning yechimi deyiladi.

Agar (2) tengsizlik bitta ham yechimga ega bo'lmasa, ya'ni  $0 \cdot x_1 + 0 \cdot x_2 + \dots + 0 \cdot x_n + b \geq 0$  ( $b < 0$ ) bo'lsa, u ziddiyatli tengsizlik deyiladi.

(2) sistemaning tengsizliklarini mos ravishda  $k_1 \geq 0, k_2 \geq 0, \dots, k_m \geq 0$  sonlarga ko'paytirib, ularni hadlab qo'shsak hosil bo'lgan ushbu tengsizlik

$$\sum_{j=1}^m k_j a_{j1} x_1 + \sum_{j=1}^m k_j a_{j2} x_2 + \dots + \sum_{j=1}^m k_j a_{jm} x_m + \sum_{j=1}^m k_j b_j \geq 0 \text{ ga (2) sistemaning}$$

manfiymas chiziqli kombinatsiyasi deyiladi.

Bir xil  $x_1, x_2, \dots, x_n$  noma'lumli ikkita hamjoyli tengsizliklar sistemasidan birining istalgan yechimi ikkinchisi uchun xam yechim bo'lsa yoki ikkala sistema ham hamjoysiz sistema bo'lsa, ular teng kuchli sistemalar deyiladi.

Vektorlarni ko'shish va manfiymas haqiqiy songa ko'paytirish amallariga nisbatan yopiq bo'lgan V vektor fazoning vektorlaridan tuzilgan bo'sh bo'lmagan to'plamga V vektor fazoning qavariq konusi deyiladi.

Chiziqli tengsizliklar sistemasidan noma'lumlar sonini bittaga kamaytirib tuzilgan yangi sistemani berilgan sistemaga yo'ldosh sistema deyiladi.

(2) sistemadan

$$\begin{cases} P_1 \geq x_n, \\ P_2 \geq x_n, \\ \dots \\ P_p \geq x_n; \end{cases} \begin{cases} x_n \geq Q_1, \\ x_n \geq Q_2, \\ \dots \\ x_n \geq Q_q; \end{cases} \begin{cases} R_1 \geq 0, \\ R_2 \geq 0, \\ \dots \\ R_r \geq 0 \end{cases} \quad (3) \text{ sistemani hosil qilamiz.}$$

Bundan  $\begin{cases} P_\alpha \geq Q_\beta \quad (\alpha = \overline{1, p}; \beta = \overline{1, q}), \\ R_\gamma \geq 0 \quad (\gamma = \overline{1, r}) \end{cases}$  sistemani hosil qilamiz.

Agar (3) sistemada birinchi yoki ikkinchi blok tengsizliklari bo'lmasa, u holda yo'ldosh sistema faqat  $R_\gamma \geq 0$  tengsizliklardan iborat bo'ladi. Egar (3) sistemada birinchi va uchinchi yoki ikkinchi va uchinchi bloklar bo'lmasa, u holda yo'ldosh sistema mavjud emas. Ya'ni, bu sistemani ayniy ( $0 \geq 0$ ) deb qarash va uning yechimlari sifatida ixtiyoriy n o'lchovli arifmetik vektorni olish mumkin.

**Misol.** Chiziqli tengsizliklar sistemasini algebraik va geometrik usullarda

yeching:  $\begin{cases} 2x_1 + x_2 \leq 1 \\ 3x_1 - x_2 \leq 2 \\ x_1 + 2x_2 \leq 4 \\ -x_1 - 3x_2 \leq 3 \end{cases}$

**Yechish: 1) Algebraik usul**

$$\begin{cases} 2x_1 + x_2 \leq 1 \\ 3x_1 - x_2 \leq 2 \\ x_1 + 2x_2 \leq 4 \\ -x_1 - 3x_2 \leq 3 \end{cases} \Leftrightarrow \begin{cases} 2x_1 \leq 1 - x_2 \\ 3x_1 \leq 2 + x_2 \\ x_1 \leq 4 - 2x_2 \\ -3x_2 \leq 3 + x_1 \end{cases} \Leftrightarrow \begin{cases} x_1 \leq \frac{1}{2} - \frac{1}{2}x_2 \\ x_1 \leq \frac{2}{3} + \frac{1}{3}x_2 \\ x_1 \leq 4 - 2x_2 \\ -3x_2 - 3 \leq x_1 \end{cases} \Leftrightarrow$$

$$\Leftrightarrow \begin{cases} -3x_2 - 3 \leq \frac{1}{2} - \frac{1}{2}x_2 \\ -3x_2 - 3 \leq \frac{2}{3} + \frac{1}{3}x_2 \\ -3x_2 - 3 \leq 4 - 2x_2 \end{cases} \Leftrightarrow \begin{cases} -\frac{7}{2} \leq \frac{5}{2}x_2 \\ -\frac{11}{3} \leq \frac{10}{3}x_2 \\ -7 \leq x_2 \end{cases} \Leftrightarrow \begin{cases} x_2 \geq -\frac{7}{5} \\ x_2 \geq -\frac{11}{10} \\ x_2 \geq -7 \end{cases} \Leftrightarrow x_2 \geq -\frac{11}{10}$$

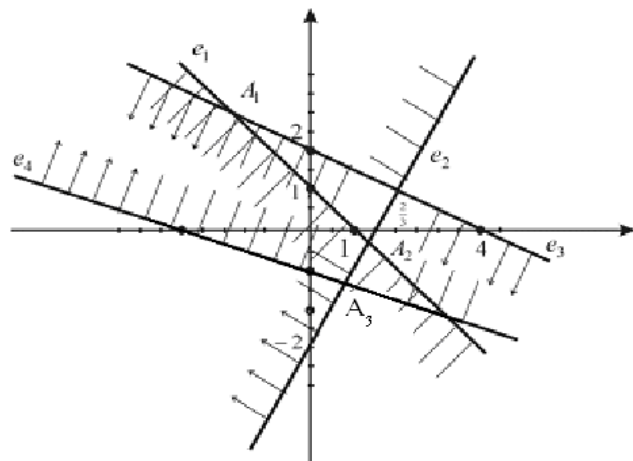
$x_2 = -1$  deb olamiz. U holda,

$$\begin{cases} x_1 \leq \frac{1}{2} + \frac{1}{2} \\ x_1 \leq \frac{2}{3} - \frac{1}{3} \\ x_1 \leq 4 + 2 \\ 3 - 3 \leq x_1 \end{cases} \Leftrightarrow \begin{cases} x_1 \leq 1 \\ x_1 \leq \frac{1}{3} \\ x_1 \leq 6 \\ x_1 \geq 0 \end{cases} \Leftrightarrow 0 \leq x_1 \leq \frac{1}{3}$$

$x_1 = 0$  deb olsak, u holda berilgan chiziqli tengsizliklar sistemasining xususiy yechimi sifatida  $(0; -1)$  vektorni olish mumkin.

$$2) \begin{cases} 2x_1 + x_2 \leq 1 \\ 3x_1 - x_2 \leq 2 \\ x_1 + 2x_2 \leq 4 \\ -x_1 - 3x_2 \leq 3 \end{cases} \text{ chiziqli tengsizliklar sistemasini tashkil etgan 4 ta}$$

tengsizlikning har biri tekislikda yarim tekislikni bildiradi. Ularning umumiy qismi berilgan sistemaning yechimi bo'ladi.

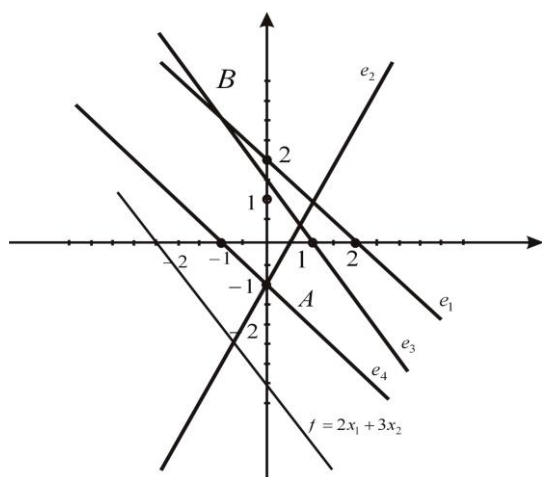


Chiziqli tengsizliklar sistemasining yechimi Dekart koordinatalar sistemasidagi  $A_1A_2A_3$  siniq chiziq bilan chegaralangan sohadan iborat.

$$\mathbf{Misol.} \begin{cases} x_1 + x_2 \leq 2 \\ 2x_1 - x_2 \leq 1 \\ 3x_1 + 2x_2 \leq 3 \\ -x_1 - x_2 \leq 1 \end{cases} \text{ chiziqli tengsizliklar sistemasini geometrik usulda}$$

yechib, manfiymas yechimlari orasidan berilgan  $f = 2x_1 + 3x_2$  chiziqli formani minimallashtiruvchi va maksimallashtiruvchi nuqtalarini aniqlang.

**Yechish.**

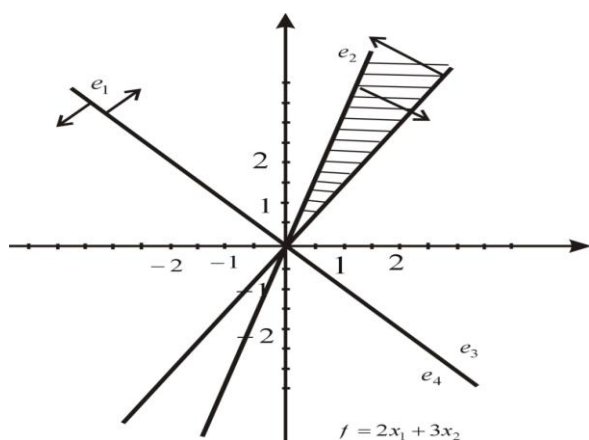


$f$  chiziqli formani minimallashtiruvchi nuqtalar  $A(-1; 0)$ , maksimallashtiruvchi nuqta  $B(-1; 3)$ .

$$\mathbf{Misol.} \begin{cases} 2x_1 + x_2 \geq 0 \\ 3x_1 - x_2 \geq 0 \\ -x_1 + 2x_2 \geq 0 \end{cases} \text{ chiziqli tengsizliklar sistemasini yechimlarining qavariq}$$

konusini tekislikda tasvirlang.

**Yechish.** Bir jinsli chiziqli tengsizliklar sistemasini yechimlarining qavariq konusi uning nolmas yechimlaridan iborat. SHuning uchun tekislikda berilgan bir jinsli chiziqli tengsizliklar sistemasining nolmas yechimlarini topamiz.



Demak, berilgan chiziqli tengsizliklar sistemasi yechimlar to'plami tashkil etgan qavariq konus chizmadagi shtrixlangan sohadan iborat.

**Misol.** 
$$\begin{cases} 2x_1 + 3x_2 - x_3 \geq 1 \\ -x_1 + 2x_2 + 3x_3 \leq 2 \\ -3x_1 - x_2 - 2x_3 \geq -2 \end{cases}$$
 chiziqli tengsizliklar sistemasini yeching.

**Yechish.** Berilgan chiziqli tengsizliklar sistemasidan  $x_2$  ni yo'qotamiz.

Buning uchun berilgan tengsizliklar sistemasiga yo'ldosh sistemani hosil qilamiz:

$$\begin{cases} 2x_1 + 3x_2 - x_3 \geq 1 \\ -x_1 + 2x_2 + 3x_3 \leq 2 \\ -3x_1 - x_2 - 2x_3 \geq -2 \end{cases} \Leftrightarrow \begin{cases} 3x_2 \geq -2x_1 + x_3 + 1 \\ 2x_2 \leq x_1 - 3x_3 + 2 \\ x_2 \leq -3x_1 - 2x_3 + 2 \end{cases} \Leftrightarrow \begin{cases} x_2 \geq -\frac{2}{3}x_1 + \frac{1}{3}x_3 + \frac{1}{3} \\ x_2 \geq \frac{1}{2}x_1 - \frac{3}{2}x_3 + 1 \\ x_2 \leq -3x_1 - 2x_3 + 2 \end{cases} \Leftrightarrow$$

$$\Leftrightarrow \begin{cases} -\frac{2}{3}x_1 + \frac{1}{3}x_3 + \frac{1}{3} \leq \frac{1}{2}x_1 - \frac{3}{2}x_3 + 1 \\ -\frac{2}{3}x_1 + \frac{1}{3}x_3 + \frac{1}{3} \leq -3x_1 - 2x_3 + 2 \end{cases}$$

$$\left(-\frac{2}{3} - \frac{1}{2}\right)x_1 + \left(\frac{1}{3} + \frac{3}{2}\right)x_3 + \left(\frac{1}{3} - 1\right) \leq 0$$

$$\left(-\frac{2}{3} + 3\right)x_1 + \left(\frac{1}{3} + 2\right)x_3 + \left(\frac{1}{3} - 2\right) \leq 0 \quad \Leftrightarrow$$

$$\Leftrightarrow \begin{cases} -\frac{7}{6}x_1 + \frac{11}{6}x_3 - \frac{2}{3} \geq 0 \\ \frac{7}{3}x_1 + \frac{7}{3}x_3 - \frac{5}{3} \leq 0 \end{cases} \Leftrightarrow \begin{cases} x_1 \leq -x_3 + \frac{5}{7} \\ x_1 \geq \frac{11}{7}x_3 - \frac{4}{7} \end{cases} \Leftrightarrow \frac{11}{7}x_3 - \frac{4}{7} \leq -x_3 + \frac{5}{7} \Leftrightarrow$$

$$\Leftrightarrow \left(\frac{11}{7} + 1\right)x_3 \leq \frac{5}{7} + \frac{4}{7} \Leftrightarrow \frac{18}{7}x_3 \leq \frac{9}{7} \Leftrightarrow 2x_3 \leq 1 \Leftrightarrow x_3 \leq \frac{1}{2}$$

$$x_3 \text{ ning topilgan sohasidan } x_3 = 0 \text{ qiymatni olsak } \begin{cases} x_1 \leq \frac{5}{7} \\ x_1 \geq -\frac{4}{7} \end{cases}, \text{ ya'ni}$$

$-\frac{4}{7} \leq x_1 \leq \frac{5}{7}$  hosil bo'ladi. Agar  $x_1 = 0$  deb olsak, u holda,

$$\begin{cases} x_2 \geq \frac{1}{3} \\ x_2 \leq 1, \text{ ya'ni } \frac{1}{3} \leq x_2 \leq 1 \\ x_2 \leq 2 \end{cases} \text{ hosil bo'ladi.}$$

Demak, berilgan chiziqli tengsizliklar sistemasining xususiy yechimlaridan biri  $(0, 1, 0)$  bo'ladi.



### Misol va mashqlar

1. Quyidagi tengsizliklar sistemalarining yechimlar sohasini aniqlang:

$$1.1. \begin{cases} x_1 + x_2 \geq -2, \\ 2x_1 - x_2 \geq -1. \end{cases} \quad 1.2. \begin{cases} x_1 - x_2 \geq -1, \\ 2x_1 - x_2 \geq 3. \end{cases}$$

$$1.3. \begin{cases} 3x_1 - 2x_2 \geq 6, \\ x_1 \leq 3. \end{cases} \quad 1.4. \begin{cases} 4x_1 - 3x_2 \leq 1, \\ x_1 + x_2 \geq 0. \end{cases}$$

$$1.5. \begin{cases} 2x_1 + x_2 \leq -3, \\ x_1 - 3x_2 \leq 1, \\ 4x_1 + 3x_2 \leq 2. \end{cases} \quad 1.6. \begin{cases} -x_1 + x_2 \geq 4, \\ x_1 - 3x_2 \leq -1, \\ 3x_1 - x_2 \leq -2. \end{cases}$$

$$1.7. \begin{cases} 4x_1 + 5x_2 - 20 \leq 0, \\ -7x_1 + 3x_2 - 12 \leq 0, \\ -3x_1 + 8x_2 + 15 \geq 0. \end{cases} \quad 1.8. \begin{cases} 2x_1 - x_2 - 3 \leq 0, \\ x_1 + x_2 - 6 \leq 0, \\ x_1 - 2x_2 \leq 0. \end{cases}$$



$$1.9. \begin{cases} 8x_1 + 8x_2 - 64 \leq 0, \\ 4x_1 - 4x_2 - 16 \leq 0, \\ -4x_1 + 4x_2 - 16 \leq 0, \\ 8x_1 + 8x_2 + 64 \geq 0. \end{cases} \quad 1.10. \begin{cases} x_1 - x_2 \leq 0, \\ -x_1 + x_2 - 4 \leq 0, \\ x_1 - x_2 + 6 \geq 0, \\ 2x_1 - 2x_2 + 8 \leq 0. \end{cases}$$

2. Chiziqli tengsizliklar sistemaning har bir manfiymas chiziqli kombinatsiyasi shu sistemaning natijasi bo'lishini isbotlang.

3. Quyidagi tengsizliklar sistemalarining biri ikkinchisiga natija bo'ladimi?

Teng kuchli sistemalarni aniqlang:

$$3.1. \quad 1) \quad x_1 - x_2 \leq 0, \quad 2) \quad x_1 - x_2 + 6 \geq 0.$$

$$3.2. \quad 1) \quad -x_1 + x_2 - 4 \leq 0, \quad 2) \quad x_1 - x_2 + 6 \geq 0.$$

$$3.3. \quad 1) \quad \begin{cases} 4x_1 + 5x_2 - 20 \leq 0, \\ -7x_1 + 3x_2 - 12 \leq 0, \\ -3x_1 + 8x_2 + 15 \geq 0. \end{cases} \quad 2) \quad x_2 - 5 \leq 0.$$

$$3.4. \quad 1) \quad \begin{cases} x_1 - 2x_2 \leq 0, \\ -2x_1 + x_2 + 3 \leq 0, \\ x_1 + x_2 - 10 \leq 0. \end{cases} \quad 2) \quad \begin{cases} 2x_1 - x_2 - 3 \geq 0, \\ x_1 + x_2 - 6 \leq 0, \\ x_1 - 2x_2 \leq 0. \end{cases}$$

$$3.5. \quad 1) \quad \begin{cases} x_1 - x_2 \geq 0, \\ x_2 - 3 \geq 0, \\ 4x_1 + 4x_2 + 16 \leq 0. \end{cases} \quad 2) \quad \begin{cases} x_1 + x_2 - 3 \leq 0, \\ -x_1 - x_2 + 5 \leq 0. \end{cases}$$

$$3.6. \quad 1) \quad \begin{cases} 8x_1 + 8x_2 - 64 \leq 0, \\ 4x_1 - 4x_2 - 16 \leq 0, \\ -4x_1 + 4x_2 - 16 \leq 0, \\ 8x_1 + 8x_2 + 64 \geq 0. \end{cases} \quad 2) \quad 5x_1 - 3x_2 - 30 \leq 0.$$

4.  $\bar{a} \in R^n$  va  $\bar{a} \neq \bar{0}$  Lar uchun  $\{\lambda \bar{a} \mid \lambda \geq 0, \lambda \in R\}$  to'plam  $R^n$  fazoning kavarik konusi bo'lishini isbotlang. Bu kavarik konus  $\bar{a}$  vektor yaratgan tug'ri chiziq deyiladi.

5.  $\bar{a}_1, \dots, \bar{a}_m \in R^n$  vektorlar sistemasining barcha manfiymas chiziqli kombinatsiyalar to'plami  $R^n$  fazoning qavariq konusi bo'lishini isbotlang.

6. Bir jinsli chiziqli tengsizliklar sistemasining barcha yechimlar to'plami  $V=\mathbb{R}^n$  fazoning qavariq konusi bo'lishini isbotlang.

7. Chiziqli tengsizliklar sistemasi xamjoysiz bo'lishi uchun uning biror chiziqli kombinatsiyasi ziddiyatli tengsizlik bo'lishi zarur va etarli ekanligini isbotlang.

8. Bir jinsli chiziqli tengsizliklar sistemasining har bir natijasi bu sistemaning manfiy koeffitsientli chiziqli kombinatsiyasidan iboratligini isbotlang.

9. Yuldosh sistemaning har bir tengsizligi berilgan tengsizliklar sistemasining chiziqli kombinatsiyasi bo'lishini isbotlang.

10. Chiziqli tengsizliklar sistemasini algebraik va geometrik usullarda yeching:

$$10.1. \begin{cases} -2x_1 + 5x_2 \leq -1, \\ x_1 + 3x_2 \leq 13, \\ -3x_1 + 2x_2 \leq 5, \\ -x_1 + 3x_2 \leq 2. \end{cases}$$

$$10.2. \begin{cases} 5x_1 + 3x_2 \geq 3, \\ x_1 - x_2 \geq 6, \\ 2x_1 - x_2 \geq 1, \\ -x_1 + 8x_2 \geq 2. \end{cases}$$

$$10.3. \begin{cases} 8x_1 + 4x_2 \leq 1, \\ -8x_1 - 4x_2 \leq -1, \\ 2x_1 - 3x_2 \leq 5, \\ -2x_1 + 3x_2 \leq -5. \end{cases}$$

$$10.4. \begin{cases} 11x_1 - 3x_2 \leq 30, \\ 2x_1 + 5x_2 \leq -6, \\ 12x_1 - 6x_2 \leq 4, \\ -5x_1 + 7x_2 \leq 12. \end{cases}$$

$$10.5. \begin{cases} 5x_1 - 9x_2 \leq 4, \\ -5x_1 + 9x_2 \leq -4, \\ -2x_1 + 3x_2 \leq 5, \\ 2x_1 - 3x_2 \geq -5, \\ x_1 + x_2 \leq -1. \end{cases}$$

$$10.6. \begin{cases} 2x_1 + 5x_2 \leq -10, \\ x_1 + 3x_2 \leq 2, \\ 6x_1 + 7x_2 \geq 5, \\ 4x_1 + 3x_2 \leq 12. \end{cases}$$

$$10.7. \begin{cases} -2x_1 + x_2 \geq -1, \\ 4x_1 + 3x_2 \leq 3, \\ -x_1 + 7x_2 \geq 5, \\ -4x_1 + 3x_2 \leq -2. \end{cases}$$

$$10.8. \begin{cases} 5x_1 - x_2 \leq 4, \\ 3x_1 + 11x_2 \leq 2, \\ 6x_1 + 7x_2 \geq -5, \\ -x_1 + 3x_2 \leq 0. \end{cases}$$

11. Chiziqli tengsizliklar sistemasi yechimlarining qavariq konusini tekislikda

tasvirlang:

$$11.1. \begin{cases} x_1 + x_2 \geq 0, \\ 2x_1 - x_2 \geq 0. \end{cases}$$

$$11.2. \begin{cases} x_1 - x_2 \geq 0, \\ 2x_1 - x_2 \geq 0. \end{cases}$$

$$11.3. \begin{cases} -x_1 + x_2 \geq 0, \\ 2x_1 - 3x_2 \geq 0. \end{cases}$$

$$11.4. \begin{cases} 4x_1 - 3x_2 \leq 0, \\ x_1 + x_2 \geq 0. \end{cases}$$

$$11.5. \begin{cases} 9x_1 + 8x_2 \geq 0, \\ 2x_1 + 3x_2 \geq -0, \\ -4x_1 + 2x_2 \geq 0, \\ -7x_1 + 3x_2 \geq 0. \end{cases}$$

$$11.6. \begin{cases} 3x_1 + -4x_2 \geq 0, \\ -2x_1 + 13x_2 \geq 0, \\ -4x_1 + 3x_2 \geq 0, \\ 7x_1 + 3x_2 \geq 0. \end{cases}$$

$$11.7. \begin{cases} 2x_1 + 8x_2 \geq 0, \\ x_1 + 3x_2 \geq 0, \\ -x_1 + 2x_2 \geq 0, \\ -3x_1 + 3x_2 \geq 0. \end{cases}$$

$$11.8. \begin{cases} 4x_1 + 8x_2 \geq 0, \\ 6x_1 - 3x_2 \geq 0, \\ 7x_1 + 2x_2 \geq 0, \\ -x_1 - 3x_2 \geq 0. \end{cases}$$

$$11.9. \begin{cases} x_1 + x_2 - 8 \leq 0, \\ x_1 - x_2 - 4 \leq 0, \\ -x_1 + x_2 - 3 \leq 0, \\ 2x_1 + 2x_2 + 16 \geq 0. \end{cases}$$

$$11.10. \begin{cases} -8x_1 + 8x_2 + 64 \leq 0, \\ 4x_1 - 4x_2 - 16 \leq 0, \\ -4x_1 + 4x_2 - 6 \leq 0, \\ -8x_1 + 8x_2 - 64 \geq 0. \end{cases}$$

12. Chiziqli tengsizliklar sistemasini yeching:

$$12.1. \begin{cases} 6x_1 - 5x_2 + 2x_4 \leq 11 \\ 2x_1 + 4x_2 - x_3 + 3x_4 \leq -1 \\ x_1 + 2x_2 + 2x_3 + 13x_4 \geq 10 \\ 2x_1 - 4x_2 + 7x_3 - 2x_4 \geq 0 \end{cases}$$

$$12.2. \begin{cases} 6x_1 - 5x_2 + x_3 - 2x_4 \leq 11 \\ x_1 + 4x_2 - x_3 + 3x_4 \leq 1 \\ 2x_2 + 2x_3 + 13x_4 \leq 17 \\ 2x_1 - 7x_3 - 2x_4 \geq 0 \end{cases}$$

$$12.3. \begin{cases} -2x_1 + 3x_2 - 6x_3 - x_4 \leq 11 \\ 3x_1 + 6x_2 + 5x_3 - 12x_4 \leq 2 \\ x_1 - 7x_2 + x_3 + 4x_4 \geq 23 \\ x_2 + 23x_4 \leq 2 \\ -2x_1 + 7x_2 + 2x_3 + 2x_4 \leq 14 \end{cases}$$

$$12.4. \begin{cases} -2x_1 + 3x_2 + 3x_3 + 2x_4 \leq 4 \\ 2x_1 + 4x_2 - 3x_3 + 3x_4 \leq -1 \\ 13x_1 - x_2 + 2x_3 + 11x_4 \geq 0 \\ 12x_1 + 4x_2 - 6x_3 + 2x_4 \leq 10 \end{cases}$$

$$12.5. \begin{cases} -4x_1 + 5x_2 + 3x_3 + 4x_4 \leq 1 \\ -2x_1 + 3x_2 - 9x_3 - x_4 \geq 2 \\ -9x_1 + 10x_2 - x_3 \geq 3 \end{cases}$$

$$12.6. \begin{cases} -9x_1 + 5x_2 + 3x_3 - 5x_4 \leq 1 \\ 3x_1 + 3x_2 - 9x_3 + x_4 \leq 2 \\ 7x_1 + 10x_2 - x_3 + x_4 \leq 3 \end{cases}$$

$$\begin{array}{ll}
12.7. \begin{cases} 2x_1 + 5x_2 + 3x_3 - 3x_4 \geq 1 \\ x_1 + 3x_2 - 9x_3 + x_4 \leq 2 \\ 2x_1 + 10x_2 - x_3 + 3x_4 \leq 3 \end{cases} & 12.8. \begin{cases} 2x_1 - 3x_2 - 9x_3 + 5x_4 \leq 11 \\ 3x_1 + x_2 + 8x_3 - 3x_4 \leq 0 \\ -2x_1 - 4x_2 - 2x_3 \geq 2 \end{cases} \\
12.9. \begin{cases} x_1 + 2x_2 + x_3 - x_4 + x_5 \geq 21 \\ 2x_1 - 3x_2 - 9x_3 - 3x_4 \geq 3 \\ 3x_1 + x_2 + 8x_3 + 2x_4 + x_5 \leq 3 \end{cases} & 12.10. \begin{cases} x_1 - x_3 + x_3 + 5x_4 - 4x_5 \geq 7 \\ x_1 - x_2 + x_3 + 3x_4 - 5x_5 \leq 6 \\ x_1 - 3x_2 - x_3 + x_4 \geq 9 \end{cases} \\
12.11. \begin{cases} -2x_1 - x_2 + 3x_3 + 4x_4 \leq -11 \\ -3x_1 + 3x_2 - 9x_3 - x_4 \geq 2 \\ x_1 + 10x_2 - x_3 \geq 3 \end{cases} & 12.12. \begin{cases} 2x_1 - x_2 + 5x_3 - 5x_4 \leq 3 \\ x_1 + 3x_2 - 4x_3 + x_4 \geq 2 \\ -x_1 + 10x_2 - x_3 + x_4 \leq 3 \end{cases} \\
12.13. \begin{cases} 5x_1 - 2x_2 + 3x_3 - 4x_4 \leq 1 \\ x_1 + 3x_2 - 9x_3 - x_4 \geq 2 \\ 5x_1 + 3x_2 - x_3 \geq 3 \end{cases} & 12.14. \begin{cases} 3x_1 + x_2 - 2x_3 - x_4 \leq 4 \\ -2x_1 + 3x_2 - 4x_3 + x_4 \leq 2 \\ -3x_1 - x_2 - x_3 + x_4 \leq 3 \end{cases}
\end{array}$$

13.  $f$  chiziqli formani minimum qiymatini va uni minimum qiymatga

keltiruvchi nuqtani toping:

$$13.1. \quad f = -x_2 + x_1, \begin{cases} x_1 + 3x_2 \leq 12, \\ 3x_1 - x_2 \geq 6, \\ 3x_1 + 4x_2 \geq 0, \\ x_1 \geq 0, \\ 3x_2 \geq 0. \end{cases}$$

$$13.2. \quad f = x_1 - 4x_2, \begin{cases} x_1 + 2x_2 \leq 4, \\ x_1 \leq 3, \\ x_1 - 2x_2 \geq -1, \\ x_1 \geq 0, \\ 3x_2 \geq 0. \end{cases}$$

$$13.3. \quad f = 2x_1 - x_2, \begin{cases} 2x_1 - x_2 \leq 12, \\ x_1 + x_2 \leq 6, \\ x_1 + 3x_2 \geq 1, \\ x_1 \geq 0, \\ 3x_2 \geq 0. \end{cases}$$

$$13.4. \quad f = x_1 + 2x_2 + 3, \quad \begin{cases} 2x_1 + 4x_2 \leq 8, \\ 3x_1 \leq 6, \\ 5x_2 \leq 5, \\ x_1 \geq 0, \\ 3x_2 \geq 0. \end{cases}$$

14.  $f$  chiziqli formani maksimum qiymatini va uni maksimum qiymatga keltiruvchi nuqtani toping:

$$14.1. \quad f = 2x_1 + 4x_2, \quad \begin{cases} 4x_1 + 3x_2 \leq 40, \\ 12x_1 + 3x_2 \leq 24, \\ 2x_1 \leq 6, \\ x_2 \leq 3, \\ x_1 \geq 0, \\ x_2 \geq 0. \end{cases}$$

$$14.2. \quad f = -x_1 + 4x_2, \quad \begin{cases} 3x_1 + 2x_2 \leq 12, \\ 2x_1 - x_2 \leq 0, \\ -3x_1 + 2x_2 \leq 3, \\ x_1 + 2x_2 \leq 3, \\ x_1 \geq 0, \\ x_2 \geq 0. \end{cases}$$

$$14.3. \quad f = 2x_1 + x_2, \quad \begin{cases} 4x_1 - x_2 \geq -4, \\ 2x_1 + 3x_2 \leq 12, \\ 5x_1 - 3x_2 \leq 15, \\ x_2 \leq 7, \\ x_1 \geq 0, \\ x_2 \geq 0. \end{cases}$$

$$14.4. \quad f = 3x_1 + 2x_2, \quad \begin{cases} x_1 + x_2 \geq 1, \\ -5x_1 + x_2 \leq 0, \\ 5x_1 - x_2 \geq 0, \\ x_1 - x_2 \geq -1, \\ x_1 + x_2 \leq 6, \\ x_1 \geq 0, \\ x_2 \geq 0. \end{cases}$$



## Takrorlash uchun savollar

1. Chiziqli tengsizliklar sistemasining umumiy ko'rinishini yozing.
2. ChTS ning yechimi deb nimaga aytiladi?
3. Hamjoyli va hamjoysiz ChTS ta'riflarini ayting.
4. ChTSning natijasi deb nimaga aytiladi?
5. ChTSning manfiymas chiziqli kombinatsiyasini tuzing.
6. Bir jinsli ChTS deb nimaga aytiladi?
7. Qavariq konus ta'rifini ayting.
8. Ziddiyatli tengsizlik deb nimaga aytiladi?

## XI MODUL. BUTUN SONLAR HALQASIDA BO'LINISH MUNOSABATI

### 24-§. Tub va murakkab sonlar. EKUB. EKUK.

**Asosiy tushunchalar:** tub son, murakkab son, natural son natural bo'luvchilar soni va yig'indisi, EKUB, EKUK, Eylar funksiyasi.

Faqat ikkita turli natural bo'luvchilarga ega bo'lgan natural son tub son deyiladi.

Natural bo'luvchilarining soni ikkitadan ortiq bo'lgan natural son murakkab son deyiladi.

$a > 1$  natural son bo'lsin.  $a = p_1^{\alpha_1} p_2^{\alpha_2} \dots p_n^{\alpha_n}$  tenglik  $a$  sonning kanonik yoyilmasi deyiladi.

Agar  $a$  va  $b \neq 0$  butun sonlar uchun  $a = b q$  munosabatni qanoatlantiruvchi  $q$  butun son mavjud bo'lsa, u holda  $a$  son  $b$  songa bo'linadi yoki  $b$  son  $a$  sonni bo'ladi deyiladi.

$a = p_1^{\alpha_1} p_2^{\alpha_2} \dots p_n^{\alpha_n}$  son uchun  $\tau(a) = (\alpha_1 + 1)(\alpha_2 + 1) \dots (\alpha_n + 1)$  va

$\sigma(n) = \frac{p_1^{\alpha_1+1} - 1}{p_1 - 1} \cdot \frac{p_2^{\alpha_2+1} - 1}{p_2 - 1} \dots \frac{p_n^{\alpha_n+1} - 1}{p_n - 1}$  bo'ladi.

$a$  va  $b$  butun sonlarning ikkisini ham bo'ladigan son shu sonlarning umumiy bo'luvchisi deyiladi.

$a$  va  $b$  natural sonlar umumiy buluvchilarining eng kattasiga shu sonlarning eng katta umumiy bo'luvchisi (EKUB) deyiladi va uni  $(a; b)$  ko'rinishda belgilanadi.

Agar  $(a; b) = 1$  bo'lsa, u holda  $a$  va  $b$  natural sonlar o'zaro tub sonlar deyiladi.

$a_1, a_2, \dots, a_n$  butun sonlarning barchasini bo'ladigan son shu sonlarning umumiy bo'luvchisi deyiladi.

Agar  $(a_1, a_2, \dots, a_n) = 1$  bo'lsa, u holda  $a_1, a_2, \dots, a_n$  natural sonlarni o'zaro tub sonlar deyiladi.

Agar quyidagi ikkita shart bajarilsa, u holda  $\varphi(m)$  sonli funktsiya Eyler funktsiyasi deyiladi:

1.  $\varphi(1) = 1$ .

2.  $\varphi(m)$  funktsiya  $m$  dan kichik va  $m$  bilan o'zaro tub bo'lgan natural sonlar soni.

Natural sonlar tuplamida aniklangan  $f$  funktsiya uchun  $(m; n) = 1$  bo'lganda  $f(m \cdot n) = f(m) \cdot f(n)$  tenglik bajarilsa, u holda  $f$  funktsiyaga multiplikativ funktsiya deyiladi.

Eyler funktsiyasi  $\varphi(m)$  ni hisoblash formulalari quyidagicha:

$m = p$  tub son bo'lsa, u holda  $\varphi(p) = p - 1$ .

$m = r^\alpha$  ( $r$ -tub son,  $\alpha$ -natural son) bo'lsa, u holda  $\varphi(p^\alpha) = p^{\alpha-1} \cdot (p-1)$ .

$m = p_1^{\alpha_1} p_2^{\alpha_2} \dots p_k^{\alpha_k}$  bo'lsa, u holda

$$\varphi(m) = \varphi(p_1^{\alpha_1} p_2^{\alpha_2} \dots p_k^{\alpha_k}) = m \left(1 - \frac{1}{p_1}\right) \left(1 - \frac{1}{p_2}\right) \dots \left(1 - \frac{1}{p_k}\right).$$

**Misol.**  $\forall n \in \mathbb{N}$  uchun  $n(n+1)(2n+1)$  ning 6 ga bo'linishini isbotlang.

**Yechish: 1-usul.** Matematik induksiya metodi.  $n = 1$  bo'lsa, u holda  $n(n+1)(2n+1) = 6:6$ . Faraz qilamiz  $n = k$  uchun  $k(k+1)(2k+1):6$  bo'lsin, u holda,  $n = k+1$  da  $(k+1)(k+2)(2k+3):6$ . Haqiqatdan ham  $(k+1)(k+2)(2k+3) = k(k+1)2k+1 + 6(k+1)^2$  bo'lganligi va qo'shiluvchilarning har biri 6 ga bo'linganligi uchun  $(k+1)(k+2)(2k+3):6$ .

**2-usul.** Natural sonlar qatoridan 2 ta ketma-ket kelgan sonlar  $n(n+1)$  2 ga bo'linganligidan  $n(n+1)(2n+1):2$  va  $6 = 2 \cdot 3$  bo'lib,  $(2,3) = 1$  ekanligidan  $(k+1)(k+2)(2k+3):6$  uchun  $n(n+1)(2n+1):3$  ekanligini ko'rsatish kifoya. Qoldiqli bo'lish haqidagi teorema ko'ra har qanday natural sonni  $n = 3k$  yoki  $n = 3k + 1$  yoki  $n = 3k + 2$  ko'rinishida ifodalash mumkin. Bundan

1) agar  $n = 3k$  bo'lsa, u holda  $n(n+1)(2n+1):3$ ;



2) agar  $n = 3k + 1$  ko'rinishida bo'lsa, u holda  $2n + 1 = 6k + 3$  va  $n(n + 1)(2n + 1) : 3$ ;

3) agar  $n = 3k + 2$  ko'rinishida bo'lsa, u holda,  $n + 1 = 3k + 3$  va  $n(n + 1)(2n + 1) : 3$ ;

Demak,  $n(n + 1)(2n + 1) : 6$ .

**3-usul.** Agar  $n(n + 1)(2n + 1) = n(n + 1)[(n + 1) + (n + 2)] = (n + 1)^n(n + 1) + n(n + 1)(n + 2)$  shakl almashtirishdan foydalansak, u holda  $n(n + 1)(2n + 1)$  ifodani 2 ta ketma-ket keluvchi 3 son ko'paytmasining yig'indisi ko'rinishiga keltirish mumkin. Ketma-ket kelgan 3 natural sonning 6 ga bo'linishidan  $n(n + 1)(2n + 1) : 6$  ekanligi kelib chiqadi.

**Misol.** Berilgan 150 va 200 sonlar orasidagi barcha tub sonlarni aniqlang.

**Yechish.** 150 va 200 sonlar orasidagi barcha natural sonlarni tartib bilan yozib olamiz:

150    151 152 153 154 155 156 157 158 159  
160    161 162 163 164 165 166 167 168 169  
170    171 172 173 174 175 176 177 178 179  
180    181 182 183 184 185 186 187 188 189  
190    191 192 193 194 195 196 197 198 199  
200

Tuzilgan qatorning birinchi soni 150 juft son. Demak, 2 ga bo'linadi. 150 dan boshlab qatorning har 2-sonini o'chirib chiqamiz:

~~150~~ 151 ~~152~~ 153 ~~154~~ 155 ..... ~~200~~

Berilgan qatordan 2 ga bo'linuvchi sonlarni o'chirib chiqdik. Endi sonlar qatoridan raqamlarni yig'indisi 3 ga bo'linadigan birinchi sonni topamiz. Bu sonni va undan keyin keluvchi har 3-sonni qatordan o'chiramiz. Bunda o'chirilgan sonlar o'rni ham hisobga olinadi. Bu jarayonni  $\sqrt{200} \approx 14$  dan katta bo'lmagan tub songa bo'linadigan sonlarni o'chirguncha davom ettiramiz. Berilgan qatorning o'chirilmay qolgan sonlari 150 dan 200 gacha bo'lgan tub sonlardir.

~~150~~ ~~151~~ ~~152~~ ~~153~~ ~~154~~ ~~155~~ ~~156~~ ~~157~~ ~~158~~ ~~159~~  
~~160~~ ~~161~~ ~~162~~ ~~163~~ ~~164~~ ~~165~~ ~~166~~ ~~167~~ ~~168~~ ~~169~~  
~~170~~ ~~171~~ ~~172~~ ~~173~~ ~~174~~ ~~175~~ ~~176~~ ~~177~~ ~~178~~ ~~179~~  
~~180~~ ~~181~~ ~~182~~ ~~183~~ ~~184~~ ~~185~~ ~~186~~ ~~187~~ ~~188~~ ~~189~~  
190 191 192 193 194 195 196 197 198 199  
200

Demak, 150 bilan 200 orasidagi tub sonlarni topish uchun 2.3.5.7.11.13 ga bo'linadigan sonlar qatordan o'chirildi va berilgan oraliqdagi tub sonlar Eratosfen g'alviri yordamida aniqlandi. Ular 151, 157, 163, 167, 173, 179, 181, 191, 193, 197, 199.

**Misol.** Berilgan 1321 sonning tub yoki murakkab ekanligini aniqlang.

**Yechish.** Berilgan  $a$  natural sonning tub yoki murakkab ekanligini aniqlash uchun  $\sqrt{a}$  songacha bo'lgan tub sonlarga berilgan sonning bo'linishi yoki bo'linmasligi aniqlanadi. Agar berilgan  $a$  son  $\sqrt{a}$  gacha bo'lgan birorta ham tub songa bo'linmasa, u holda u tub son bo'ladi.

Demak,  $\sqrt{1321} \approx 36$  ni topamiz. 36 gacha bo'lgan tub sonlar 2,3,5,7,11,13,17,19,23,29,31 ga berilgan 1321 sonni bo'linish-bo'linmasligini tekshiramiz.

2 ga bo'linmaydi, chunki 1321 toq son;

3 ga bo'linmaydi, chunki  $1+3+2+1=7/3$ ;

5 ga bo'linmaydi, chunki 1321 ning oxirgi raqami 1;

$1321 : 7 \approx 188$

$1321 : 11 \approx 120$

$1321 : 13 \approx 101$

$1321 : 17 \approx 77$

$1321 : 19 \approx 69$

$1321 : 23 \approx 54$

$1321 : 29 \approx 45$

$1321 : 31 \approx 42$

Demak, 1321 36 gacha bo'lgan tu sonlarga bo'linmaydi. U tub son.

**Misol.** Berilgan 123 va 321 sonlarning EKUB va EKUKlarini ikki usulda toping. EKUBni berilgan sonlar orqali chiziqli ifodalang.

**Yechish.** Berilgan natural sonlarning EKUB va EKUKlarini topish uchun ularni tub ko'paytiruvchilarga yoyilmasidan yoki Evklid algoritmidan foydalanish mumkin.

**1-usul.** Berilgan sonlarni tub ko'paytiruvchilarga kanonik yoyilmasini topamiz:

$$\begin{array}{l|l} 123 & 3 \\ 41 & 41 \\ 1 & \end{array} \quad \begin{array}{l|l} 321 & 3 \\ 107 & 107 \\ 1 & \end{array}$$

$$123 = 3 \cdot 41 = 3^1 \cdot 41^1 \cdot 107^0;$$

$$321 = 3 \cdot 107 = 3^1 \cdot 41^0 \cdot 107^1$$

$n = p_1^{\alpha_1} \dots p_n^{\alpha_n}$  va  $m = p_1^{\beta_1} \dots p_n^{\beta_n}$  sonlarning

$$\text{EKUBi } (n; m) = P_1^{\min(\alpha_1, \beta_1)} \cdot P_2^{\min(\alpha_2, \beta_2)} \dots P_n^{\min(\alpha_n, \beta_n)}$$

$$\text{EKUKi } [n; m] = P_1^{\max(\alpha_1, \beta_1)} \cdot P_2^{\max(\alpha_2, \beta_2)} \dots P_n^{\max(\alpha_n, \beta_n)}$$

Demak,  $(123; 321) = 3$  va  $[123; 321] = 3 \cdot 41 \cdot 107 = 13161$ .

**2-usul.** Berilgan sonlar uchun qoldiqli bo'lish teoremasi yordamida Evklid algoritmini tuzamiz:

$$321 = 123 \cdot 2 + 75; \quad 75 = 321 - 123 \cdot 2;$$

$$123 = 75 \cdot 1 + 48; \quad 48 = 123 - 75 \cdot 1;$$

$$75 = 48 \cdot 1 + 27; \quad 27 = 75 - 48 \cdot 1;$$

$$48 = 27 \cdot 1 + 21; \quad 21 = 48 - 27 \cdot 1;$$

$$27 = 21 \cdot 1 + 6; \quad 6 = 27 - 21 \cdot 1;$$

$$21 = 6 \cdot 3 + 3; \quad 3 = 21 - 6 \cdot 3$$

$$6 = 3 \cdot 2 + 0$$

Evklid algoritmidagi oxirgi noldan farqli qoldiq EKUB ni beradi. Demak,

$$(321, 123) = 3. \text{ Bundan } [321, 123] = \frac{321 \cdot 123}{(321, 123)} = 13161.$$

Topilgan EKUB  $(321, 123) = 3$  ning 123 va 321 lar yordamidagi chiziqli

ifodasini topamiz. Tuzilgan Evklid algoritmidagi qoldiqlarni bo'linuvchi va bo'luvchilar yordamidagi ifodalarini topamiz:

$$\begin{aligned}
 3 &= 21 - 6 \cdot 3 = (48 - 27 \cdot 1) - (27 - 21 \cdot 1) \cdot 3 = 48 - 27 \cdot 4 + 21 \cdot 3 = 123 - 75 \cdot 1 - \\
 &- (75 - 48 \cdot 1) \cdot 4 + (48 - 27 \cdot 1) \cdot 3 = 123 - 75 \cdot 5 + 48 \cdot 7 - 27 \cdot 3 = \\
 &= 123 - (321 - 123 \cdot 2) \cdot 5 + (123 - 75 \cdot 1) \cdot 7 - (75 - 48 \cdot 1) \cdot 3 = \\
 &= 123 \cdot 18 - 321 \cdot 5 - 75 \cdot 10 + 48 \cdot 3 = 123 \cdot 18 - 321 \cdot 5 - \\
 &- (321 - 123 \cdot 2) \cdot 10 + (123 - 75 \cdot 1) \cdot 3 = 123 \cdot 41 - 321 \cdot 15 - 75 \cdot 3 = \\
 &= 123 \cdot 41 - 321 \cdot 15 - (321 - 123 \cdot 2) \cdot 3 = 123 \cdot 47 - 321 \cdot 18 = \\
 &= 123 \cdot 47 + 321 \cdot (-18).
 \end{aligned}$$

Bundan,  $3 = 123 \cdot 47 + 321 \cdot (-18)$  kelib chiqadi.

**Misol.** Berilgan  $n = 126$  soning natural bo'linuvchilari soni va yig'indisini, undan katta bo'lmagan va u bilan o'zaro tub sonlar sonini toping.

**Yechish.** Berilgan  $n$  sonining natural bo'luvchilari soni  $\tau(n)$  va natural bo'luvchilari yig'indisini  $\sigma(n)$ ,  $n$  dan katta bo'lmagan u bilan o'zaro tub sonlar soni  $\varphi(n)$  larni aniqlash uchun  $n$  sonining tub ko'paytuvchilarga kanonik yoyilmasini topamiz. Agar  $n = p_1^{\alpha_1} \dots p_n^{\alpha_n}$  bo'lsa, u holda

$$\tau(n) = (\alpha_1 + 1)(\alpha_2 + 1) \dots (\alpha_n + 1);$$

$$\sigma(n) = \frac{p_1^{\alpha_1+1} - 1}{p_1 - 1} \cdot \frac{p_2^{\alpha_2+1} - 1}{p_2 - 1} \dots \frac{p_n^{\alpha_n+1} - 1}{p_n - 1};$$

$$\varphi(n) = n \left(1 - \frac{1}{p_1}\right) \left(1 - \frac{1}{p_2}\right) \dots \left(1 - \frac{1}{p_n}\right) \text{ bo'ladi.}$$

$n = 126$  ning tub bo'luvchilarga kanonik yoyilmasini topamiz:

$$\begin{array}{r|l}
 126 & 2 \\
 63 & 3 \\
 21 & 3 \\
 7 & 7 \\
 1 & 
 \end{array}$$

Bundan,  $126 = 2^1 \cdot 3^2 \cdot 7^1$  ekan. U holda

a)  $\tau(126) = (1+1)(2+1)(1+1) = 2 \cdot 3 \cdot 2 = 12$ . Demak, 126 ning natural bo'luvchilari 12 ta. Haqiqatdan ham ular: 1,2,3,6,7,9,14,18,21,42,63,126

$$b) \sigma(126) = \frac{2^2 - 1}{2 - 1} \cdot \frac{3^3 - 1}{3 - 1} \cdot \frac{7^2 - 1}{7 - 1} = \frac{3}{1} \cdot \frac{26}{2} \cdot \frac{48}{6} = 26 \cdot 12 = 312.$$

Haqiqatdan ham,  $1+2+3+6+7+9+14+18+21+42+63+126=312$ .

$$c) \varphi(126) = 126 \cdot \left(1 - \frac{1}{2}\right) \left(1 - \frac{1}{3}\right) \left(1 - \frac{1}{7}\right) = 126 \cdot \frac{1}{2} \cdot \frac{2}{3} \cdot \frac{6}{7} = 36.$$

Demak, 126 dan katta bo'lmagan, u bilan o'zaro tub sonlar soni 36 ta.

**Misol.** 23! ni tub ko'paytiruvchilarga kanonik yozilmasini toping.

**Yechish.** Berilgan  $n!$  sonning tub ko'paytuvchilarga yoyilmasini topish uchun,  $n$  dan katta bo'lmagan tub sonlar qanday daraja bilan kanonik yoyilmada qatnashishini topamiz.

23 dan katta bo'lmagan tub sonlar 2,3,5,7,11,13,17,19,23

2 ning 23! ning kononik yoyilmasidagi darajasini topamiz. Buning uchun 23 ni 2 ga bo'lamiz. Bo'linma 2 dan kichik son bo'lguncha bu jarayonni davom ettiramiz:

$$23 = 2 \cdot 11 + 1$$

$$11 = 2 \cdot 5 + 1$$

$$5 = 2 \cdot 2 + 1$$

$$2 = 2 \cdot 1 + 0$$

Demak, 2 ning kanonik yoyilmadan darajasi  $11+5+2+1=19$ .

3 ning darajasini topamiz:

$$23 = 3 \cdot 7 + 2$$

$$7 = 3 \cdot 2 + 1$$

3 ning darajasi  $7+2=9$ .

5 ning darajasini topamiz:  $23 = 5 \cdot 4 + 3$

5 ning darajasi 4.

$$23 = 7 \cdot 3 + 2$$

7 ning darajasi 3.

$$23 = 11 \cdot 2 + 1$$

11 ning darajasi 2.

13 ning darajasi 1, chunki  $23 = 13 \cdot 1 + 10$ .

Huddi shunday 17,19,23 larning ham yoyilmadagi darajalari 1 ga teng.

Demak,  $23! = 2^{19} \cdot 3^9 \cdot 5^4 \cdot 7^3 \cdot 11^2 \cdot 13 \cdot 17 \cdot 19 \cdot 23$ .

**Misol.**  $\begin{cases} a \cdot b = 768 \\ (a, b) = 8 \end{cases}$  sistemani qanoatlantiruvchi  $a$  va  $b$  sonlarni toping.

**Yechish.** Berilgan  $a$  va  $b$  sonlarning eng katta umumiy bo'luvchisi 8 ekanligidan, bu sonlarni  $a = 8k$  va  $b = 8l$   $k, l \in \mathbb{Z}$  ko'rinishda yozib olamiz. Bu erda  $(k, l) = 1$ . Bundan  $a \cdot b = 8k \cdot 8l = 64 \cdot k \cdot l = 768$  va  $k \cdot l = 12$  larni hosil qilamiz. Demak, 12 o'zaro tub  $k$  va  $l$  sonlarning ko'paytmasi ko'rinishida ifodalanadi. Quyidagi holatlar bo'lishi mumkin:

$k$	$l$	$k \cdot l$
1	12	12
3	4	12
4	3	12
12	1	12

Bundan,

$a$	$b$	$a \cdot b$
8	96	768
24	32	768
32	24	768
96	8	768

Demak,  $(a, b) \in \{(8; 96), (4; 32), (2; 24), (6; 8)\}$



### Misol va mashqlar

1. Tub va murakkab sonlarning quyidagi xossalarini isbotlang:

1.1.  $a > 1$  murakkab sonning 1 dan boshqa eng kichik natural bo'luvchisi  $r$  bo'lsa, u holda  $r$  son tub son bo'ladi.

1.2. Har qanday natural  $a$  va  $r$  tub sonlari yoki o'zaro tub, yoki  $a$  son  $r$  ga bo'linadi.

1.3. Agar  $ab$  ko'paytma biror  $r$  tub songa bo'linsa, u holda

ko'paytuvchilardan kamida bittasi  $r$  ga bo'linadi.

1.4. Agar ko'paytma  $r$  tub songa bo'linib, uning barcha ko'paytuvchilari tub sonlardan iborat bo'lsa, u holda bu ko'paytuvchilardan biri  $r$  ga teng bo'ladi.

1.5. 1 dan boshqa ixtiyoriy natural son yoki tub son yoki tub sonlar ko'paytmasi shaklida yoziladi, agar bu ko'paytmada ko'paytuvchilarning o'rni e'tiborga olinmasa, u holda bu ko'paytma yagona bo'ladi.

2. Eratosfen g'alviri yordamida berilgan sonlar orasidagi barcha tub sonlarni aniqlang:

- |                     |                     |
|---------------------|---------------------|
| 2.1. 1050 va 1150.  | 2.2. 2100 va 2200.  |
| 2.3. 1100 va 1200 . | 2.4. 2550 va 2650 . |
| 2.5. 1880 va 2000 . | 2.6. 4550 va 4670 . |
| 2.7. 5555 va 5750 . | 2.8. 4660 va 4770 . |
| 2.9. 4422 va 4525 . | 2.10 1122 va 1222 . |

3. Berilgan natural sonning tub yoki murakkab ekanligini aniqlang:

- |                   |                    |
|-------------------|--------------------|
| 3.1. $n = 1559$ . | 3.2. $n = 1627$ .  |
| 3.3. $n = 1783$ . | 3.4. $n = 3061$ .  |
| 3.5. $n = 3709$ . | 3.6. $n = 4057$ .  |
| 3.7. $n = 1987$ . | 3.8. $n = 2339$ .  |
| 3.9. $n = 2671$ . | 3.10. $n = 3343$ . |

4. Butun sonlar halqasida bo'linish munosabatining quyidagi xossalarini isbotlang:

- 4.1.  $(\forall a \in \mathbb{Z}, a \neq 0) 0 : a$ ;
- 4.2.  $(\forall a \in \mathbb{Z}, a \neq 0) a : a$ ;
- 4.3.  $(\forall a \in \mathbb{Z}) a : 1$ ;
- 4.4.  $(\forall a, b, s \in \mathbb{Z}, b \neq 0, s \neq 0) ((a : b) \wedge (b : c)) \Rightarrow (a : s)$ ;
- 4.5.  $(\forall a, b \in \mathbb{Z}, a \neq 0, b \neq 0) ((a : b) \wedge (b : a)) \Rightarrow (b = \pm a)$ ;
- 4.6.  $(\forall a, b, s \in \mathbb{Z}, s \neq 0) a : s \Rightarrow ab : c$ ;
- 4.7.  $(\forall a, b \in \mathbb{Z}, s \neq 0) ((a : s) \wedge (b : s)) \Rightarrow (a \pm b) : s$ ;
- 4.8.  $(\forall a, b_i \in \mathbb{Z}, a \neq 0, i = \overline{1, n}) ((b_1 : a) \wedge (b_2 : a) \wedge \dots \wedge (b_n : a)) \Rightarrow$

$$\Rightarrow (b_1s_1 \pm b_2s_2 \pm \dots \pm b_n c_n) : a \quad (s_i \in \mathbb{Z}, i = \overline{1, n}).$$

5. Ixtiyoriy  $a$  butun son,  $b$  natural sonlar uchun shunday yagona  $q$  butun son va yagona manfiy  $r$  butun son topiladiki, natijada ushbu  $a = bq + r \quad 0 \leq r < b$  munosabatlar o'rinli bo'lishini isbotlang.

6.  $n = p_1^{\alpha_1} p_2^{\alpha_2} \dots p_k^{\alpha_k}$  sonning bo'luvchisi  $d$  bo'lishi uchun  $d$  sonning kanonik yoyilmasi  $d = p_1^{\beta_1} p_2^{\beta_2} \dots p_k^{\beta_k}$  bo'lib, bunda  $\beta_i \leq \alpha_i \quad (i = \overline{1, k})$  bo'lishi zarur va etarli ekanligini isbotlang.

7. Berilgan  $n$  natural sonning natural bo'luvchilari soni va yig'indisini:

- |                  |                    |
|------------------|--------------------|
| 7.1. $n = 60$ .  | 7.9. $n = 1000$ .  |
| 7.2. $n = 100$ . | 7.10. $n = 1200$ . |
| 7.3. $n = 360$ . | 7.11. $n = 1542$ . |
| 7.4. $n = 375$ . | 7.12. $n = 3500$ . |
| 7.5. $n = 720$ . | 7.13. $n = 680$ .  |
| 7.6. $n = 957$ . | 7.14. $n = 865$ .  |
| 7.7. $n = 988$ . | 7.15. $n = 779$ .  |
| 7.8. $n = 990$ . | 7.16. $n = 410$ .  |

8.  $n!$  ni tub ko'paytuvchilarga kanonik yoyilmasini toping:

- |                 |                   |
|-----------------|-------------------|
| 8.1. $n = 55$ . | 8.7. $n = 53$ .   |
| 8.2. $n = 92$ . | 8.8. $n = 45$ .   |
| 8.3. $n = 87$ . | 8.9. $n = 50$ .   |
| 8.4. $n = 63$ . | 8.10. $n = 38$ .  |
| 8.5. $n = 34$ . | 8.11. $n = 90$ .  |
| 8.6. $n = 99$ . | 8.12. $n = 100$ . |

9. Quyidagi xossalarni isbotlang:

9.1.  $(a, b) = (a+b, a+2b)$ .

9.2.  $(a; b) = d$  bo'lsa,  $u$  holda shunday  $u$  va  $v$  butun sonlar topiladiki, ular uchun  $au + bv = d$  tenglik bajariladi.

9.3.  $((a; c) = 1 \wedge (b; c) = 1) \Rightarrow ((ab; c) = 1)$ .

9.4.  $((ab; c) \wedge (a, c) = 1) \Rightarrow (b; c)(c \neq 0)$ .



9.5.  $((a;b)=1) \Rightarrow ((a^n;b^n)=1) (\forall n \in \mathbb{N})$ .

9.6.  $((a;b)=d) \Rightarrow ((\frac{a}{d}; \frac{b}{d})=1)$ ;

9.7.  $((a:b) \wedge (a:c) \wedge ((b;c)=1) \Rightarrow (a:bc) (b \neq 0, c \neq 0)$

9.8.  $a=bq+r \Rightarrow (a;b)=(b;r)$ .

9.9.  $d$  son  $a$  va  $b$  sonlarning EKUBi bo'lishi uchun  $d$  umumiy bo'luvchi  $a$  va  $b$  sonlarning har qanday umumiy bo'luvchisiga bo'linishi zarur va etarli.

9.10. Agar  $(a_1, a_2, \dots, a_n)=d$  bo'lib,  $(a_1, a_2)=d_2$ ,  $(d_2, a_3)=d_3$ , ...,  $(d_{n-1}, a_n)=d_n$  bo'lsa, u holda  $d_n=d$  bo'ladi.

10. Ikki usulda berilgan sonlarning EKUBini toping:

10.1. 1232, 1672.

10.2. 135,8211.

10.3. 589, 343.

10.4. 29719, 76501.

10.5. 469459, 519203.

10.6. 179370199, 4345121.

10.7. 12606, 6494.

10.8. 162891, 32176.

10.9. 7650, 25245.

10.10. 35574, 192423.

10.11. 10140, 92274.

10.12. 46550, 37730.

11.  $x$  va  $y$  natural sonlarni toping :

11.1.  $\begin{cases} x+y=150, \\ (x,y)=30; \end{cases}$

11.6.  $\begin{cases} x \cdot y = 20, \\ [x, y] = 10; \end{cases}$

11.2.  $\begin{cases} x \cdot y = 8400, \\ (x, y) = 20; \end{cases}$

11.7.  $\begin{cases} (x, y) = 24, \\ [x, y] = 2496; \end{cases}$

11.3.  $\begin{cases} x+y=667, \\ [x, y]=120 \cdot (a, b); \end{cases}$

11.8.  $\begin{cases} x \cdot y = 168, \\ (x, y) = 14; \end{cases}$

$$11.4. \begin{cases} \frac{x}{y} = \frac{11}{7}, \\ (x, y) = 45; \end{cases}$$

$$11.9. \begin{cases} \frac{x}{y} = \frac{5}{9}, \\ (x, y) = 28; \end{cases}$$

$$11.5. \begin{cases} \frac{x}{(x, y)} + \frac{y}{(x, y)} = 18, \\ [x, y] = 975; \end{cases}$$

$$11.10. \begin{cases} x + y = 100, \\ [x, y] = 495; \end{cases}$$



### Takrorlash uchun savollar

1. Arifmetikaning asosiy teoremasini bayon eting.
2. Tub va murakkab sonlarning qanday xossalarini bilasiz?.
3. Bo'linish munosabati xossalarini bayon eting?
4. Qoldiqli bo'lish haqidagi teoremani bayon eting.
5. Sonli funktsiya deb nimaga aytiladi?
6.  $\tau(n)$  va  $\sigma(n)$  sonli funktsiyalar qanday hisoblanadi?
7. Ikkita soning EKUBi deb nimaga aytiladi?
8.  $n$  ta sonning EKUBi qanday topiladi?
9. Ikkita sonning EKUKi deb nimaga aytiladi?
10.  $n$  ta sonning EKUKi qanday topiladi?
11. O'zaro tub sonlar deb nimaga aytiladi?
12. Evklid algoritimini tushuntiring.



### 25-§. Chekli zanjir kasrlar. Munosib kasrlar.

**Asosiy tushunchalar:** uzluksiz zanjir kasr, chekli zanjir kasr, munosib kasr.

Ushbu

$$a_0 + \frac{b_1}{a_1 + \frac{b_2}{a_2 + \dots + \frac{b_k}{a_k}}}$$

$(a_i(i=\overline{0,k}), b_j(j=\overline{1,k}))$  butun sonlar) ko'rinishdagi ifoda uzluksiz zanjir kasr deyiladi.

Agar (1) da  $b_1=b_2= \dots =b_k=1$ ,  $a_0$ -butun son,  $a_1, a_2, \dots, a_k$ -natural sonlar bo'lib  $a_k > 1$

bo'lsa, u holda ushbu 
$$a_0 + \frac{1}{a_1 + \frac{1}{a_2 + \dots + \frac{1}{a_k}}}$$
 ifodani chekli zanjir kasr

deyiladi.

$$T = a_0 + \frac{1}{a_1 + \frac{1}{a_2 + \dots + \frac{1}{a_n}}} \text{ bo'lsin.}$$

$A_0 = a_0$  deb olaylik. U holda buni nolinchii tartibli munosib kasr deyiladi.

$$A_1 = a_0 + \frac{1}{a_1} = \frac{a_0 a_1 + 1}{a_1} \text{ - birinchi tartibli munosib kasr deyiladi.}$$

$$A_2 = a_0 + \frac{1}{a_1 + \frac{1}{a_2}} \text{ - ikkinchi tartibli munosib kasr deyiladi.}$$

.....

$A_n = T$  esa  $n$ -tartibli munosib kasr deyiladi.

$$A_0 = \frac{a_0}{1} = \frac{P_0}{Q_0} \text{ deb belgilaylik. U holda } R_0 = a_0, Q_0 = 1 \text{ hosil bo'ladi;}$$

$$A_1 = a_0 + \frac{1}{a_1} = \frac{a_0 a_1 + 1}{a_1} = \frac{P_1}{Q_1} \text{ desak, u xolda } R_1 = a_0 a_1 + 1, Q_1 = a_1 \text{ xosil buladi;}$$

$$A_2 = a_0 + \frac{1}{a_1 + \frac{1}{a_2}} = \frac{P_2}{Q_2} \text{ - ikkinchi tartibli munosib kasr;}$$

.....

$$A_n = T = \frac{P_n}{Q_n} \text{ n- tartibli munosabat kasr.}$$

Shu yo'l bilan  $R_0, R_1, R_2, \dots$ ,  $Q_0, Q_1, Q_2, \dots$  ketma-ketliklarni hosil qilamiz.

Bu ketma-ketliklardan quyidagi rekurrent formulalarni hosil qilamiz:

$$R_k = P_{k-1}a_k + R_{k-2}, \quad Q_k = Q_{k-1}a_k + Q_{k-2}.$$

$\frac{P_k}{Q_k} - k$  - tartibli munosib kasr deyiladi.

$R_{-2}=0$ ,  $R_{-1}=1$ ,  $Q_{-2}=1$ ,  $Q_{-1}=0$  deb belgilaylik. Lekin ularning o'zi ma'noga ega emas. Yuqoridagi tushunchalardan quyidagi jadvalni tuzamiz:

$k$	-2	-1	0	1	2	...	n-1	n
$A_k$	-	-	$a_0$	$a_1$	$a_2$	...	$a_{n-1}$	$a_n$
$P_k$	0	1	$P_0$	$P_1$	$P_2$	...	$P_{n-1}$	$P_n$
$Q_k$	1	0	$Q_0$	$Q_1$	$Q_2$	...	$Q_{n-1}$	$Q_n$

**Misol.** Berilgan  $\frac{104}{23}$  kasrni chekli zanjir kasr ko'rinishida ifodalang va uning munosib kasrlarini toping.

**Yechish.**  $\frac{104}{23}$  kasrni chekli zanjir kasr ko'rinishida ifodalash uchun 104 va 23 sonlari uchun Evklid algoritmini tuzamiz.

$$104 = 23 \cdot 4 + 12;$$

$$23 = 12 \cdot 1 + 11;$$

$$12 = 11 \cdot 1 + 1;$$

$$11 = 1 \cdot 11 + 0.$$

Evklid algoritmidagi tengliklarning har ikkala tomonini bo'luvchilarga bo'lamiz:

$$\frac{104}{23} = 4 + \frac{12}{23};$$

$$\frac{23}{12} = 1 + \frac{11}{12};$$

$$\frac{12}{11} = 1 + \frac{1}{11};$$

$$\frac{11}{1} = 11.$$

Hosil bo'lgan tengliklarning o'ng tomonidagi kasr sonni uning teskarisi bilan almashtirish natijasida

$$\frac{104}{23} = 4 + \frac{12}{23} = 4 + \frac{1}{\frac{23}{12}} = 4 + \frac{1}{1 + \frac{11}{12}} = 4 + \frac{1}{1 + \frac{1}{\frac{12}{11}}} = 4 + \frac{1}{1 + \frac{1}{1 + \frac{1}{11}}}$$

chekli zanjirni hosil qilamiz. Uni qisqacha  $\frac{104}{23} = [4; 1, 1, 11]$  ko'rinishida

ifodalaymiz. Agar berilgan kasr manfiy bo'lsa, birinchi qoldiqni musbat qilib olamiz. Masalan,  $-\frac{23}{13} = -2 + \frac{3}{13}$  va kasr qismi chekli zanjir ko'rinishida

$$\text{ifodalanadi: } -\frac{23}{13} = -2 + \frac{3}{13} = -2 + \frac{1}{\frac{13}{3}} = -2 + \frac{1}{4 + \frac{1}{3}} = [-2; 4, 3]$$

Berilgan  $\frac{104}{23} = [4; 1, 1, 11]$  ning munosib kasrlarini topish uchun quyidagi

jadvalni tuzamiz:

$k$	-1	0	1	2	3
$q_k$	-	4	1	1	11
$P_k$	1	4	5	9	104
$Q_k$	0	1	1	2	23

$$\text{Demak, } \frac{P_0}{Q_0} = 4; \frac{P_1}{Q_1} = 5; \frac{P_2}{Q_2} = \frac{9}{2}; \frac{P_3}{Q_3} = \frac{104}{23}.$$

**Misol.** Berilgan  $\sqrt{14}$  sonni zanjir kasr ko'rinishida ifodalang.

**Yechish.**

$$\sqrt{14} = 3 + \frac{1}{\alpha_1};$$

$$\alpha_1 = \frac{1}{\sqrt{14} - 3} = \frac{\sqrt{14} + 3}{5} = 1 + \frac{1}{\alpha_2};$$

$$\alpha_2 = \frac{1}{\frac{\sqrt{14+3}}{5} - 1} = \frac{5}{\sqrt{14-1}} = \frac{\sqrt{14+2}}{2} = 2 + \frac{1}{\alpha_3};$$

$$\alpha_3 = \frac{1}{\frac{\sqrt{14+2}}{2} - 2} = \frac{2}{\sqrt{14-2}} = \frac{\sqrt{14+2}}{5} = 1 + \frac{1}{\alpha_4};$$

$$\alpha_4 = \frac{1}{\frac{\sqrt{14+2}}{5} - 1} = \frac{5}{\sqrt{14-3}} = \sqrt{14+3} = 6 + \frac{1}{\alpha_5};$$

$$\alpha_5 = \frac{1}{\sqrt{14+3} - 6} = \frac{1}{\sqrt{14-3}}.$$

$\alpha_5 = \alpha_1$  bo'lganligi uchun, yana yuqoridagi jarayon hosil bo'ladi.

Demak,  $\sqrt{14} = [3; \overline{2, 1, 6}]$ .

**Misol.**  $-117x + 343y = 119$  tenglamani butun sonlar to'plamida yeching.

**Yechish.** Tenglamani  $117(-x) + 343y = 119$  ko'rinishida yozib olamiz va  $ax + by + c$  tenglama agar  $\overline{a, b} = 1$  bo'lsa

$$x = (-1)^{n-1} \cdot c \cdot Q_{n-1} + bt$$

$$y = (-1)^n \cdot c \cdot P_{n-1} - at, \quad t \in \mathbb{Z}$$

formulalar orqali topiladigan butun yechimlarga ega. Buning uchun  $\frac{a}{b}$

kasrning munosib kasrlari topiladi.

$\frac{a}{b} = \frac{117}{343}$  uchun chekli zanjir kasrni topamiz:

$$117 = 0 \cdot 343 + 117;$$

$$343 = 117 \cdot 2 + 109;$$

$$117 = 109 \cdot 1 + 8;$$

$$109 = 8 \cdot 13 + 5;$$

$$8 = 5 \cdot 1 + 3;$$

$$5 = 3 \cdot 1 + 2;$$

$$3 = 2 \cdot 1 + 1;$$

$$2 = 1 \cdot 2 + 0.$$

Demak,  $\frac{117}{343} = [0; 2, 1, 13, 1, 1, 1, 2]$ . Munosib kasrlar jadvalini tuzamiz:

$k$	-1	0	1	2	3	4	5	6	7
$q_k$	-	0	2	1	13	1	1	1	2
$P_k$	1	0	1	1	14	15	29	44	117
$Q_k$	0	1	2	3	41	44	85	129	343

$P_6 = 44$ ,  $Q_6 = 129$  lardan foydalanamiz.

$$\text{Xususiy yechim: } \begin{cases} -x_0 = (-1)^6 \cdot 119 \cdot 129 = 15351; \\ y_0 = (-1) \cdot 119 \cdot 44 = -5236 \end{cases}$$

Umumiy yechim:

$$\begin{cases} -x = 15351 + 343t \\ y = -5236 - 117t, \quad t \in \mathbb{Z} \end{cases} \quad \text{yoki} \quad \begin{cases} x = -15351 - 343t \\ y = -5236 - 117t, \quad t \in \mathbb{Z} \end{cases}$$

Berilgan misolni yechishda  $-\frac{117}{343}$  uchun zanjir kasrni tuzish ham mumkin.

U holda  $-\frac{117}{343} = [-1; 1, 1, 1, 13, 1, 1, 1, 2]$  bo'lib,  $k = 8$ ,  $a = -117$ ,  $b = 343$ ,

$c = 119$ ,  $P_{n-1} = P_7 = -44$ ,  $Q_{n-1} = Q_7 = 129$  bo'ladi.

$$\text{Undan } \begin{cases} x = -15351 + 343t \\ y = 5236 + 117t, \quad t \in \mathbb{Z} \end{cases} \text{ yechimlar hosil bo'ladi.}$$



## Misol va mashqlar

1. Quyidagi tasdiqlarni isbotlang:

1.1. Har qanday ratsional con chekli zanjir kasrga yoyiladi va bu yoyilma yagona bo'ladi.

1.2.  $A_k = \frac{P_k}{Q_k} \left( \leftarrow = \overline{0, n} \right)$

1.3.  $R_k Q_{k-1} - P_{k-1} Q_k = (-1)^{k-1}$  tenglik  $k$  ning har qanday qiymatida to'g'ri bo'ladi.

1.4.  $A_k = \frac{P_k}{Q_k}$  munosib kasrning surati bilan maxraji o'zaro tub, ya'ni

$(R_k; Q_k) = 1$  bo'ladi.

2. Berilgan kasrni chekli zanjir kasr ko'rinishida ifodalang:

2.1.  $\frac{323}{17}$ .    2.2.  $\frac{135}{279}$ .    2.3.  $-\frac{187}{63}$ .    2.4.  $\frac{96}{67}$ .

2.5.  $\frac{30}{337}$ .    2.6.  $-\frac{12}{15}$ .    2.7.  $\frac{127}{52}$ .    2.8.  $\frac{24}{35}$ .

2.9. 1,23.    2.10.  $\frac{71}{41}$ .    2.11.  $\frac{157}{225}$ .    2.12.  $\frac{507}{1001}$ .

3. Berilgan irratsional sonlarni chekli zanjir kasr orqali ifodalang:

3.1.  $\sqrt{11}$ .    3.2.  $\sqrt{12}$ .    3.3.  $\sqrt{13}$ .

3.4.  $\sqrt{28}$ .    3.5.  $\sqrt{30}$ .    3.6.  $\sqrt{59}$ .

3.7.  $1 + \sqrt{2}$ .    3.8.  $\frac{1 + \sqrt{3}}{2}$ .    3.9.  $\frac{2 + \sqrt{5}}{3}$ .

3.10.  $\frac{3 + \sqrt{5}}{2}$ .    3.11.  $\frac{2 + \sqrt{7}}{2}$ .    3.12.  $\frac{3 + \sqrt{10}}{3}$ .

4. Quyidagi zanjir kasrlar orqali ifodalanuvchi qisqarmas kasrlarni toping:

4.1. [2;1,3,4,2].    4.7. [4;(3,2,1)].

4.2. [2;1,19,1,3].    4.8. [(2,1)].

4.3. [2;1,1,3,1,2].    4.9. [3;(3,6)].

4.4. [1;1,2,3,4].    4.10. [1;(1,2)].

4.5. [0;4,1,2,5,6].    4.11. [1;7,(1,6)].

4.6. [-2;1,3,1,1,5].    4.12. [3;(5,2,1,2)].

5. Berilgan tenglamalarni butun sonlar to'plamida yeching:

5.1.  $38x + 117y = 209$ ;    5.2.  $23x - 42y = 72$ ;

5.2.  $119x - 68y = 34$ ;    5.4.  $15x + 28y = 185$ ;

5.3.  $41x + 114y = 5$ ;    5.6.  $90x - 5y = 5$ ;

5.4.  $49x + 9y = 400$ ;    5.8.  $10x - 11y = 15$ ;

5.5.  $12x + 31y = 170$ ;    5.10.  $31x - 47y = 23$ ;



5.6. $37x + 23y = 15;$	5.12. $101x + 39y = 89;$
5.7. $53x + 17y = 25;$	5.14. $-26x + 174y = 2;$
5.8. $64x - 39y = 15;$	5.16. $-6x + 11y = 29;$
5.9. $3827x + 3293y = 1869;$	5.18. $-10x + 23y = 17;$
5.10. $571x + 359y = -10;$	5.20. $903x + 5y = 43 .$



### Takrorlash uchun savollar

1. Uzluksiz kasr deb nimaga aytiladi?
2. Chekli zanjir kasr deb nimaga aytiladi?
3. Ratsional sonni chekli zanjir kasrga yagona yul bilan yoyishni bayon eting.
4. Munosib kasrlar haqida tushuncha bering.
5. Munosib kasrlar haqidagi teoremlarni bayon eting.
6. Chekli zanjir kasrlar tatbiqiga misollar keltiring.



### 26-§. Sistematik sonlar va ular ustida amallar

**Asosiy tushunchalar:** sanoq sistemasi, asosi  $g$  ga teng bo'lgan sistematik son, sistematik sonlarni qo'shish, ayirish, ko'paytirish, bo'lish.

O'nlik sanoq sistemasidan boshqa 2, 5, 7, 12, 60, ... sanoq sistemalari ham mavjud. Bu sanoq sistemalarining barchasi bitta umumiy yo'nalish asosida quriladi.

$m > 1$  natural son bo'lib,  $M = \{0, 1, 2, \dots, m-1\}$  to'plam berilganda har qanday  $a$  natural son uchun ushbu  $a = a_0 + a_1m + a_2m^2 + \dots + a_nm^n = a_0m^0 + a_1m^1 + \dots + a_nm^n$  ( $a_i \in M, i = \overline{1, n}, a_n \neq 0$ ) yoyilma mavjud va yagonadir.  $a$  natural sonning bu ko'rinishiga  $a$  ni  $m$  ning darajalari bo'yicha yoyish deyiladi.

Ixtiyoriy  $g \geq 2$  natural son va har qanday  $m$  natural son uchun

$$m = a_n g^n + a_{n-1} g^{n-1} + \dots + a_1 g + a_0 \quad (0 \leq a_i \leq g-1, i = \overline{0, n-1}, 1 \leq a_n \leq g-1)$$

tenglikni yoza olamiz. Undagi  $a_0, a_1, \dots, a_n$  lar  $m$  sonning raqamlari deyiladi uni

$m = \overbrace{(a_n a_{n-1} \dots a_1 a_0)}^m$  ko'rinishida qisqacha yozish mumkin. Bu ko'rinishidagi

son asosi  $g$  ga teng bo'lgan sistematik son deyiladi.

$g$  asosli ixtiyoriy  $a$  va  $b$  sonlarni qo'shish, ayirish, ko'paytirish va bo'lish ko'phadni ko'phadga ko'paytirish kabi bajariladi.

**Misol.** Hisoblang:

$$\overbrace{202332_4}^m + \overbrace{22201_4}^n + \overbrace{20111_4}^p - \overbrace{32303_4}^q = \overbrace{23230301_4}^r : \overbrace{113_4}^s$$

**Yechish.** 4 lik sanoq sistemasida berilgan amallarni bajarish uchun qo'shish va ko'paytirish amallari jadvallarini tuzib olamiz:

+	0	1	2	3		x	0	1	2	3
0	0	1	2	3		0	0	0	0	0
1	1	2	3	10		1	0	1	2	3
2	2	3	10	11		2	0	2	10	12
3	3	10	11	12		3	0	3	12	21

Berilgan misoldagi amallarni bajaramiz

1)

$\begin{array}{r} + 202332_4 \\ 22201_4 \\ \hline 231133_4 \end{array}$	Tekshirish:	$\begin{array}{r} - 231133_4 \\ 202332_4 \\ \hline 22201_4 \end{array}$
---	-------------	---

2)

$\begin{array}{r} - 220111_4 \\ 32303_4 \\ \hline 121202_4 \end{array}$	Tekshirish:	$\begin{array}{r} + 121202_4 \\ 32303_4 \\ \hline 220111_4 \end{array}$
---	-------------	---

3)

$\begin{array}{r} + 231133_4 \\ 121202_4 \\ \hline 1013001_4 \end{array}$	Tekshirish:	$\begin{array}{r} - 1013001_4 \\ 231133_4 \\ \hline 121202_4 \end{array}$
---	-------------	---

4)

$$\begin{array}{r}
 - \quad 23230301_4 \quad \Big| \quad 113_4 \\
 \quad 232 \quad \quad \quad \Big| \quad 200203_4 \\
 \hline
 - \quad 303 \\
 \quad 232 \\
 \hline
 - \quad 1101 \\
 \quad 1011 \\
 \hline
 \quad 30_4
 \end{array}
 \quad \text{Tekshirish:} \quad
 \begin{array}{r}
 \times \quad 200203_4 \\
 \quad 113_4 \\
 \hline
 + \quad 1201221 \\
 \quad 200203 \\
 \quad 200203 \\
 \hline
 23230211_4
 \end{array}$$

$$23230211_4 + 30_4 = 2323301_4$$

5)

$$\begin{array}{r}
 - \quad 1013001_4 \\
 \quad 200203_4 \\
 \hline
 1213210_4
 \end{array}$$

Demak, javob:  $1213210_4$

**Misol.**  $n$  asosda berilgan  $a$  sonni  $m$  va  $k$  asoslarga o'tkazing:

$$a = 211, \quad n = 3, \quad m = 2, \quad k = 4$$

**Yechish.** Berilgan  $a$  sonni 3 lik sanoq sistemasida uni 2 lik sanoq sistemasiga o'tkazish uchun berilgan sonni hosil bo'ladigan bo'linmalarni 2 ga bo'lamiz:

$$\begin{array}{r}
 211_3 \Big| 2_3 \\
 - 2 \quad \Big| 102_3 \\
 \hline
 11
 \end{array}
 \quad
 \begin{array}{r}
 102_3 \Big| 2_3 \\
 - 2 \quad \Big| 12_3 \\
 \hline
 12
 \end{array}
 \quad
 \begin{array}{r}
 12 \Big| 2_3 \\
 - 11 \quad \Big| 2_3 \\
 \hline
 1
 \end{array}
 \quad
 \begin{array}{r}
 2_3 \Big| 2_3 \\
 - 2_3 \quad \Big| 1_3 \\
 \hline
 0
 \end{array}
 \quad
 \begin{array}{r}
 1_3 \Big| 2_3 \\
 - 0 \quad \Big| 0_3 \\
 \hline
 1
 \end{array}$$

$$\begin{array}{r}
 - 11 \\
 \hline
 0
 \end{array}
 \quad
 \begin{array}{r}
 - 11 \\
 \hline
 1
 \end{array}$$

Bu jarayonni bo'linmada 0 hosil bo'lguncha davom ettiramiz. Oxirgi qoldiqdan boshlab barcha qoldiqlar yordamida berilgan sonning 2 lik sanoq sistemasidagi ifodasini topamiz:  $211_3 = 10110_2$

Tekshirish ikki usulda bajariladi:

1-usul.  $211_3$  va  $10110_2$  sonlarni o'nlik asosga o'tkazilib solishtiriladi.

2-usul.  $10110_2$  uchlik asosga o'tkaziladi.

$$211_3 = 2 \cdot 3^2 + 1 \cdot 3^1 + 1 \cdot 3^0 = 18 + 3 + 1 = 22_{10}$$

$$10110_2 = 1 \cdot 2^4 + 0 \cdot 2^3 + 1 \cdot 2^2 + 1 \cdot 2^1 + 0 \cdot 2^0 = 16 + 4 + 2 = 22_{10}$$

Demak,  $211_3$  ni ikkilik asosda to'g'ri ifodalangan.  $211_3$  ni to'rtlik asosdagi ifodasini topamiz. Buning uchun  $211_3$  ning o'nlik asosdagi ifodasini topib, hosil bo'lgan sonni to'rtlik asosga o'tkazamiz:

$$211_3 = 22_{10}$$

$$\begin{array}{r}
 - \quad \quad \quad \left| \begin{array}{r} 4_{10} \\ - 22_{10} \\ \hline 20 \end{array} \right| \begin{array}{r} - 5_{10} \\ - 4 \\ \hline 1 \end{array} \left| \begin{array}{r} 4_{10} \\ 1_{10} \\ \hline 1 \end{array} \right| \begin{array}{r} - 1_{10} \\ - 0 \\ \hline 1 \end{array} \left| \begin{array}{r} 4_{10} \\ 0_{10} \\ \hline 1 \end{array} \right| \\
 \hline
 2
 \end{array}$$

Demak,  $22_{10} = 112_4$  bundan  $211_3 = 112_4$ . Tekshirish yuqoridagi usullarda bajariladi.



### Misol va mashqlar

1. Hisoblang:

1.1.  $1101_2 + 1011_2$ .

1.2.  $1011_2 \cdot 1101_2$ .

1.3.  $1000110_2 - 11011_2$ .

1.4.  $100011_2 : 101_2$ .

1.5.  $3604_7 \cdot 423_7$ .

1.6.  $7(10)_{12} \cdot 5(11)73_{12}$ .

1.7.  $23054_7 + 4326_7$ .

1.8.  $(10)(11)792_{12} + 9534(10)_{12} + 70(10)0_{12}$ .

1.9.  $26153_7 : 326_7$ .

1.10.  $8(1005(11)_{12} : 9(10)_{12})$ .

1.11.  $101_8 : 32_8$ .

2. Hisoblang:

2.1.  $11011,101_2 + 101,011_2$ ;

2.2.  $11,001_2 \cdot 1,01_2$ ;

2.3.  $111,01_2 \cdot 101,101_2$ ;

2.4.  $0,25_8 \cdot 0,43_8$ ;

2.5.  $2,5_8 \cdot 3,4_8$ .

3. Amallarni bajaring:

3.1.  $7306_8 + 25645_8 - 6774_8 - 26156_8$ ;

3.2.  $(425_6 \cdot 54_6 - 531_6 \cdot 43_6) : 245_6$ ;

3.3.  $20671_8 : 131_8 - 140_8$ ;

3.4.  $23213_5 : 32_5 + 113_5 \cdot 3_5 - 1242_5$ ;

3.5.  $232011_5 : 104 + 1234_5 \cdot 322_5 - 1022131_5$ ;

3.6.  $(563_8 + 217_8) \cdot 15_8 + (2365_8 - 636_8) : 17_8 - 15122_8$ ;

3.7.  $120111_3 : 102_3 + 201_3 \cdot 12_3 - 11220_3$ ;

3.8.  $6325_7 - 456_7 - 150335_7 : 23_7 - 551_7$ ;

3.9.  $3215_7 \cdot 24_7 - 11461_7 : 25_7 + 1532_7 - 115044_7$ ;

3.10.  $(4123_8 - 4221_8) \cdot 11_8 + (1222_8 + 773_8) : 3_8$ ;

3.11.  $(3333_4 + 2222_4) \cdot 12_4 - (231020_4 + 3333333_4) : 23_4$ ;

3.12.  $[(215_8 + 532_8) \cdot 16_8 - (11031_8 - 527_8)32_8] : 14775_8$ ;

3.13.  $[(351_6 \cdot 14_6 - 1153_6 : 31_6 - 150_6) : 205_6] : 25_6$ .

4. Berilgan sonlarni o'nlik sanoq sistemasida ifodalang:

4.1.  $100111_2$ ;

4.2.  $11001101_2$ ;

4.3.  $345_8$ ;

4.4.  $5071_8$ ;

4.5.  $1300_8$ ;

4.6.  $33311_7$ ;

4.7.  $4602_7$ ;

4.8.  $(10)6(11)_{12}$ ;

4.9.  $26014_7$ ;

4.10.  $42125_6$ ;

4.11.  $530415_6$ .

5. Berilgan sonlarni o'nlik sanoq sistemasida ifodalang:

5.1.  $0,111_2$ ;

5.2.  $0,110_2$ ;

5.3.  $11001, 1111_2$ ;

5.4.  $437,321_8$ ;

5.5.  $0,027_8$ .

6. Bir sanoq sistemasidan ikkinchisiga o'ting:

6.1.  $33311_7 \rightarrow x_{12}$ ;

6.2.  $2100012212_3 \rightarrow x_9$ ;

6.3.  $4672510_9 \rightarrow x_3$ ;

6.4.  $1111011101 1100001_2 \rightarrow x_8$ ;

6.5.  $21066754_8 \rightarrow x_2$ ;

6.6.  $206315_7 \rightarrow x_5$ ;

6.7.  $32014 \rightarrow x_8$ .

7. O'nlik sanoq sistemasidan berilgan sanoq sistemalariga o'ting:

7.1.  $2042 \rightarrow x_2, y_3, z_5$ ;

7.2.  $2786 \rightarrow x_2, y_3, z_5$ ;

7.3.  $729 \rightarrow x_7$ ;

7.4.  $231632 \rightarrow x_7$ ;

7.5.  $23163 \rightarrow x_8$ ;

7.6.  $17527 \rightarrow x_8$ ;

8.  $x$  ni toping:

8.1.  $201_x = 41_8$ ;

8.2.  $203_x = 53_{10}$ ;

8.3.  $106_x = 153_7$ ;

8.4.  $236_x = 1240_5$ ;

8.5.  $324_x = 10022_3$ ;

8.6.  $541_x = 2014_6$ ;

8.7.  $364_x = 3001_4$ ;

8.8.  $401_x = 265_7$ ;

8.9.  $100_x = 34_7$ .

9. Quyidagi tengliklar o'rinli bo'lgan sanoq sistemasini toping:

a)  $12 + 13 = 30$ ;

b)  $15 + 16 = 33$ ;

v)  $35 + 40 = 115$ ;

g)  $236 - 145 = 61$ ;

d)  $263 - 214 = 46$ ;

e)  $216 \cdot 3 = 654$ ;

j)  $656 : 5 = 124$ ;

z)  $736 : 6 = 121$ ;

k)  $1520 : 12 = 123$ ;

l)  $10 \cdot 10 = 100$ .



### Takrorlash uchun savollar

1. Sanoq sistemalari haqida tushuncha bering.
2. Sistematik son deb nimaga aytiladi?
3. Sistematik sonlar ustida amallar qanday bajariladi?
4. Bir sanoq sistemasidan boshqa sanoq sistemasiga o'tishni tushuntiring.

## XII MODUL. TAQQOSLAMALAR



### 27-§. Butun sonlar halqasida taqqoslamalar. Eyler va Ferma teoremlari

**Asosiy tushunchalar:** “taqqoslanadi” munosabati, chegirmalar sinfi, chegirmalarning to’la sistemasi, chegirmalarning keltirilgan sistemasi, Eyler teoremasi, Ferma teoremasi.

$\mathbb{Z}$ -butun sonlar halqasi bo’lib,  $m \geq 1$  natural son bo’lsin.

Agar  $\mathbb{Z}$  halqaga tegishli  $a$  va  $b$  sonlarni  $m$  natural songa bo’lganda hosil bo’lgan qoldiqlar teng bo’lsa, yoki  $a-b$  ayirma  $m$  ga bo’linsa, ya’ni  $a=b+mq$  tenglik o’rinli bo’lsa, u holda  $a$  va  $b$  sonlar  $m$  modul bo’yicha taqqoslanadi deyiladi va uni  $a \equiv b \pmod{m}$  ko’rinishda belgilanadi.

$m$  ga bo’linganda  $r$  ga teng bir hil qoldiq beradigan butun sonlar to’plami  $m$  modul buyicha chegirmalar sinfi deyiladi va  $\bar{r}$  kabi belgilanadi.

$m$  modul bo’yicha tuzilgan har bir chegirmalar sinfidan ixtiyoriy bittadan element olib tuzilgan to’plamga  $m$  modul bo’yicha chegirmalarning to’la sistemasi deyiladi.

$m$  modul bilan o’zaro tub bo’lgan barcha chegirmalar sinfidan ixtiyoriy bittadan chegirma olib tuzilgan to’plam chegirmalarning  $m$  modul bo’yicha keltirilgan sistemasi deyiladi.

Eyler teoremasi. Agar  $(a;m)=1$  bo’lsa, u holda  $a^{(m)} \equiv 1 \pmod{m}$  taqqoslama o’rinli bo’ladi.

Ferma teoremasi. Agar  $(a;r)=1$ , u holda  $a^{r-1} \equiv 1 \pmod{m}$  taqqoslama o’rinli bo’ladi.

**Misol.**  $a=2511$  sonini  $b=123$  ga bo’lgandagi qoldiqni toping.

**Yechish.** Qoldiqli bo’lishi xaqidagi teorimadan foydalanib  $a=bq+r$ ,

$0 \leq r < b$  ifodani topamiz:  $2511=123 \cdot 20+51$



Demak,  $a=2511$  ni  $b=123$ ga bo'lganda  $r=51$  qoldiq qoladi.

**Misol.**  $a=25^{112}$  ni  $b=16$  ga bo'lgandagi qoldiqni toping.

**Yechish.**  $a=25^{112}$  sonini 16ga bo'lish uchun taqqoslamaning xossalaridan foydalanamiz.  $25=16\cdot 1+9$  ekanligidan  $25\equiv 9 \pmod{16}$  qilib chiqadi. Bundan  $25^{112} \equiv 9^{112} \equiv (9^2)^{56} \equiv 81^{56}$ .  $81=16\cdot 5+1$  ekanligini e'tiborga olsak, u xolda  $25^{112} \equiv 81^{56} \equiv 1^{56} \equiv 1 \pmod{16}$ .

Demak,  $25^{112}$  ni 16ga bo'lganda 1 qoldiq qoladi.

**Misol.** Agar  $100a+100b+c\equiv 0 \pmod{21}$  bo'lsa, u xolda

$a-2b+4c\equiv 0 \pmod{21}$  ekanligini isbotlang.

**Isbot.** Taqqoslamaning ikkala tomonini modul bilan o'zaro tub 4 songa ko'paytiramiz:  $400a+40b+4c\equiv 0 \pmod{21}$ .

$400=21\cdot 19+1$ ,  $40=21\cdot 2+(-2)$ ,  $4=21\cdot 0+4$  lardan foydalanib quyidagi taqqoslamalarni yozamiz:

$$400a \equiv a \pmod{21}, \text{ chunki } 400a-a = 399a \div 21;$$

$$40b \equiv -2b \pmod{21}, \text{ chunki } 40b-(-2b) = 42b \div 21;$$

$$4c \equiv 4c \pmod{21}, \text{ chunki } 4c-4c = 0 \div 21;$$

Birilgan taqqoslamadan yuqoridagi taqqoslamalarni e'tiborga olib  $400a+40b+4c \equiv a-2b+4c \pmod{21}$  taqqoslamani hosil qilamiz.

Demak,  $400a+40b+4c\equiv 0 \pmod{21}$  shartdan  $a-2b+4c\equiv 0 \pmod{21}$  kelib chiqadi.



## Misol va mashqlar

1. Butun sonlar halqasida aniqlangan taqqoslama munosabatining quyidagi xossalarini isbotlang:

1.1. Taqqoslama ekvivalent binar munosabat.

1.2. Bir hil modulli taqqoslamalarni hadma-had qo'shish (ayirish) mumkin.

1.3. Taqqoslamaning bir qismidagi sonni uning ikkinchi qismiga qarama-qarshi ishora bilan o'tkazish mumkin.

1.4. Taqqoslamaning ixtiyoriy qismiga modulga karrali sonni qo'shish mumkin.

1.5. Bir hil modulli taqqoslamalarni hadma-had ko'paytirish mumkin.

1.6. Taqqoslamaning ikki qismini (modulni o'zgartirmay) bir hil natural darajaga ko'tarish mumkin.

1.7. Modulni o'zgartirmagan holda taqqoslamaning ikki qismini bir hil butun songa ko'paytirish mumkin.

1.8. Agar  $x \equiv y \pmod{m}$  bo'lsa, u holda ixtiyoriy butun koeffitsientli  $f(x) = a_0x^n + a_1x^{n-1} + \dots + a_{n-1}x + a_n$ ,  $f(y) = a_0y^n + a_1y^{n-1} + \dots + a_{n-1}y + a_n$  ko'phadlar uchun  $f(x) \equiv f(y) \pmod{m}$  taqqoslama o'rinli bo'ladi.

1.9. Agar bir vaqtda  $a_i \equiv b_i \pmod{m} (i = \overline{1, n})$  va  $x \equiv y \pmod{m}$  taqqoslamalar o'rinli bo'lsa, u holda

$$a_0x^n + a_1x^{n-1} + \dots + a_{n-1}x + a_n \equiv b_0y^n + b_1y^{n-1} + \dots + b_{n-1}y + b_n \pmod{m}$$

taqqoslama o'rinli bo'ladi.

1.10. Taqqoslamada qatnashuvchi qo'shiluvchini o'zi bilan teng qoldiqli bo'lgan ikkinchi songa almashtirish mumkin.

1.11. Taqqoslamaning ikkala qismini modul bilan o'zaro tub bo'lgan ko'paytuvchiga qisqartirish mumkin.

1.12. Taqqoslamaning ikkala qismi va modulini bir xil musbat songa ko'paytirish mumkin.

1.13. Taqqoslamaning ikkala qismi va moduli umumiy ko'paytuvchiga ega bo'lsa, u holda bu taqqoslamaning ikkala qismi va modulini bu umumiy ko'paytuvchiga bo'lish mumkin.

1.14. Agar taqqoslama bir nechta modul bo'yicha o'rinli bo'lsa, u holda bu taqqoslama shu modullarning eng kichik umumiy bo'linuvchisi bo'yicha ham o'rinli bo'ladi.

1.15. Agar taqqoslama biror  $m$  modul bo'yicha o'rinli bo'lsa, u holda bu taqqoslama modulning ixtiyoriy bo'luvchisi bo'yicha ham o'rinli bo'ladi.

1.16. Taqqoslamaning bir qismi va modulining EKUBi bilan uning ikkinchi qismi va modulining EKUBi o'zaro teng bo'ladi.

1.17. Sinfning bitta chegirmasi  $m$  modul bilan o'zaro tub bo'lsa, u holda bu sinfnig barcha elementlari ham  $m$  modul bilan o'zaro tub bo'ladi.

2. Bo'lish natijasida hosil bo'lgan qoldiqni toping:

2.1.  $15^{231}$  ni 14 ga;

2.2.  $15^{231} + 2$  ni 16 ga;

2.3.  $1532^5 - 1$  ni 9 ga;

2.4.  $12^{1231} + 14^{4324}$  ni 13 ga;

2.5.  $208^{208}$  ni 23 ga;

2.6.  $2^{15783} - 7$  ni 25 ga;

2.7.  $3^{79821} + 5$  ni 17 ga;

2.8.  $10^{2732} + 10$  ni 22 ga;

2.9.  $18^{2815} - 3$  ni 14 ga;

2.10.  $2^{100} + 5^{200}$  ni 29 ga;

2.11.  $13^{1054} - 23 \cdot 16^{285} + 22^{17}$  ni 15 ga;

2.12.  $29^{2929} - 34^{3434} + 29 \cdot 41 \cdot 6^{231} - 24 \cdot 17^{120}$  ni 31 ga;

3. Har qanday  $a, b$  lar uchun quyidagilarni isbotlang:

3.1.  $(11a + 5)^{2n+1} + (11b + 6)^{2n+1} \equiv 0 \pmod{11}$ ;

3.2.  $(13a + 3)^{3n+2} + (13b - 4)^{3n+2} + 1 \equiv 0 \pmod{13}$ ;

3.3.  $9^{3n+1} + 3^{3n+1} + 1 \equiv 0 \pmod{13}$ .

4. Berilgan sonlarning oxirgi ikkita raqamini toping:

4.1.  $2^{999}$ ;

4.2.  $3^{999}$ ;

4.3.  $2^{341}$ ;

4.4.  $289^{289}$ ;

4.5.  $203^{203203}$ ;

4.6.  $14^{14^{14}}$ ;

4.7.  $9^9$

4.8.  $7^{9^9}$ .

5. Isbotlang:

5.1. Agar  $(a + b - c) \div 2$  bo'lsa, u holda  $(a - b - c) \div 2$ .

5.2. Agar  $(11a + 2b) \div 19$  bo'lsa, u holda  $(18a + 5b) \div 19$ .

5.3. Agar  $(a - 5b) \div 17$  bo'lsa, u holda  $(2a + 7b) \div 17$ .

5.4. Agar  $(12a - 7b) \div 16$  bo'lsa, u holda  $(4a + 23b) \div 16$ .

5.5. Agar  $(a - 5b) \div 19$  bo'lsa, u holda  $(10a + 7b) \div 19$ .

5.6. Agar  $(16a - 11b + c) \div 21$  bo'lsa, u holda  $(11a - b + 2c) \div 21$ .

5.7. Agar  $(6a - 11b) \div 31$  bo'lsa, u holda  $(a - 7b) \div 31$ .

5.8. Agar  $(50a + 8b + c) \div 21$  bo'lsa, u holda  $(a + b + 8c) \div 21$ .

5.9. Agar  $(15a + 3b) \div 17$  bo'lsa, u holda  $(5a + b) \div 17$ .

5.10. Agar  $(50a - b + 60c) \div 388$  bo'lsa, u holda  $(a - 4b + 41c) \div 194$ .

6. Quyidagilarning qaysilari uchun Eyler teoremasi o'rinli ekanligini aniqlang:

6.1.  $a=2, m=9$ ;

6.2.  $a=2, m=15$ ;

6.3.  $a=3, m=4$ ;

6.4.  $a=3, m=9$ ;

6.5.  $a=3, m=16$ ;

6.6.  $a=4, m=9$ ;

6.7.  $a=5, m=24$ ;

6.8.  $a=2, m=33$ ;

6.9.  $a=3, m=24$ .

7. Quyidagilarning qaysilari uchun Ferma teoremasi o'rinli ekanligini aniqlang:

7.1.  $a=2, p=3$ ;

7.2.  $a=2, p=5$ ;

7.3.  $a=3, p=2$ ;

7.4.  $a=10, p=5$ ;

7.5.  $a=5, p=2$ ;

7.6.  $a=5, p=3$ ;

7.7.  $a=5, p=7$ ;

7.8.  $a=4, p=3$ ;

7.9.  $a=4, p=5$ ;

7.10.  $a=14, p=7$ .

8. Eylar teoremasi yordamida bo'lishdan hosil bo'lgan qoldiqni toping:

8.1.  $7^{67}$  ni 12 ga;

8.2.  $109^{345}$  ni 14 ga;

8.3.  $197^{157}$  ni 35 ga;

8.4.  $356^{273}$  ni 39 ga;

8.5.  $383^{175}$  ni 45 ga;

8.6.  $293^{275}$  ni 48 ga;

8.7.  $439^{291}$  ni 60 ga;

8.8.  $527^{144}$  ni 65 ga;

8.9.  $353^{160}$  ni 75 ga;

8.10.  $485^{84}$  ni 129 ga.

9. Ferma teoremasi yordamida bo'lishdan hosil bo'lgan qoldiqni toping:

9.1.  $93^{253}$  ni 7 ga;

9.2.  $5008^{10000}$  ni 5, 7, 11, 13 ga;

9.3.  $42^{50}$  ni 17 ga;

9.4.  $20^{59}$  ni 17 ga;

9.5.  $2598^{33}$  ni 17 ga;

9.6.  $230^{347}$  ni 37 ga;

9.7.  $71^{50}$  ni 67 ga;

9.8.  $512^{402}$  ni 101 ga.

10. Bo'lish natijasida hosil bo'lgan qoldiqni toping:

10.1.  $45^{83}$  ni 24 ga;

10.2.  $6^{76}$  ni 26 ga;

10.3.  $96^{113}$  ni 92 ga;

10.4.  $204^{41}$  ni 111 ga;

10.5.  $460^{150}$  ni 425 ga.

10.6.  $763^{17}$  ni 29 ga;

10.7.  $342^{256}$  ni 29 ga;

10.8.  $581^{3792}$  ni 37 ga;

10.9.  $10^{10}$  ni 67 ga;

10.10-.  $244^{408}$  ni 73 ga;

10.11.  $749^{193}$  ni 79 ga;

10.12.  $341^{245}$  ni 89 ga;

10.13.  $175^{411}$  ni 629 ga;

10.14.  $272^{1141}$  ni 135 ga;

10.15.  $35^{100}$  ni 1242 ga;

10.16.  $20^{6n+5}$  ni 9 ga,  $n \in N$ .

11. Bo'lish natijasida hosil bo'lgan qoldiqni toping:

11.1.  $7^{100} + 8^{100}$  ni 5 ga;

11.2.  $10^{100} + 40^{100}$  ni 7 ga;

11.3.  $3^{100} + 4^{100}$  ni 7 ga;

11.4.  $5^{50} + 25^{70}$  ni 9 ga;

11.5.  $25^{80} + 40^{80}$  ni 11 ga;

11.6.  $15^{60} + 20^{30}$  ni 13 ga;

11.7.  $5^{70} + 7^{50}$  ni 12 ga;

11.8.  $3^{500} + 7^{500}$  ni 101 ga;

11.9.  $(12371^{56} + 145)^{28}$  ni 111 ga;

11.10.  $3 \cdot 5^{75} + 4 \cdot 7^{100}$  ni 132 ga.

11.11.  $53^{29} \cdot 43^{17}$  ni 37 ga;

11.12.  $378^{561} \cdot 427^{921}$  ni 41 ga;

11.13.  $37^{20} \cdot 23^{12}$  ni 61 ga;

11.14.  $3^{19 \cdot 37 - 1}$  ni  $19 \cdot 37$  ga;

11.15.  $(5622 + 179 - 346) \cdot 923$  ni 23 ga;

11.16.  $(631^{57} + 250^{28}) \cdot 926$  ni 23 ga;

11.17.  $7^{161} - 3^{80}$  ni 100 ga;

11.18.  $(12371^{56} + 34)^{28}$  ni 111 ga..

12. Quyidagi sonlarning oxirgi ikkita raqamini toping:

12.1.  $3^{100}$ ;

12.2.  $3^{219}$ ;

12.3.  $11^{243}$ ;

12.4.  $13^{219}$ ;

- 12.5.  $17^{900}$ ;                      12.6.  $19^{882}$ ;  
 12.7.  $903^{1294}$ ;                    12.8.  $573^{1931}$ ;  
 12.9.  $2^{100}$ ;                        12.10.  $2^{153}$ ;  
 12.11.  $102^{54}$ .

13. Isbotlang:

- 13.1.  $2^{11 \cdot 31} \equiv 2 \pmod{11 \cdot 31}$ ;  
 13.2.  $2^{19(73-1)} \equiv 1 \pmod{19 \cdot 73}$ ;  
 13.3.  $2^{17 \cdot 19} \equiv 23 \pmod{17 \cdot 19}$ ;  
 13.4.  $2^{1093 \cdot 1092} \equiv 1 \pmod{1093^2}$ ;  
 13.5.  $2^{73 \cdot 37 - 1} \equiv 1 \pmod{73 \cdot 37}$ .

14. Isbotlang:

- 14.1.  $a^7 - a : 42$ ;  
 14.2.  $a^{11} - a : 66$ ;  
 14.3.  $a^{21} - a^3 : 27$ ;  
 14.4.  $a^{42} - a^2 : 100$ ;  
 14.5.  $a^{103} - a^3 : 125$ ;  
 14.6.  $a^{12} - b^{12} : 65$ ,  $(a, 65) = (b, 65) = 1$ .  
 14.7.  $a^{13} - a : 2730$ ;  
 14.8.  $a^{560} - 1 : 561$ ,  $(a, 561) = 1$ ;  
 14.9.  $a^{561} - a : 11$ ;  
 14.10.  $a^{10} - a^6 - a^4 + 1 : 35$ ,  $(a, 35) = 1$ .  
 14.11.  $14^{120} - 1 : 45$ ;  
 14.12.  $13^{176} - 1 : 89$ ;  
 14.13.  $372654^{500} + 72 \cdot 10^7 : 18$ ;  
 14.14.  $2^{1093} - 2 : 1093^2$ ;  
 14.15.  $43^{23} + 23^{43} : 66$ ;  
 14.16.  $222^{555} + 555^{222} : 7$ ;

14.17.  $220^{119^9} + 69^{220^{119}} + 119^{69^{220}} : 102$ .

15. Ixtiyoriy  $m, n$  natural sonlar uchun quyidagilarni isbotlang:

15.1.  $n^7 + 6n : 7$ ;

15.2.  $10^n(9n-1)+1 : 9$ ;

15.3.  $3 \cdot 5^{2n+1} + 2^{3n+1} : 17$ ;

15.4.  $6^{2n+1} + 5^{n+2} : 31$ ;

15.5. Agar  $m = 2n$  bo'lsa,  $20^m + 16m - 3m - 1 : 323$  ;

15.6.  $mn(m^{60} - n^{60}) : 56786730$  ;

15.7. Agar  $(m, 12) = (n, 12) = 1$  bo'lsa,  $m^{96} - b^{96} : 144$ .

16. Isbotlang:

16.1. Agar  $a_1 + a_2 + \dots + a_n \equiv 0 \pmod{30}$ ,  $a_1, a_2, \dots, a_n \in Z$  bo'lsa, u holda

$$a_1^5 + a_2^5 + \dots + a_n^5 \equiv 0 \pmod{30}.$$

16.2. Agar  $n \in N$ ,  $(a, 10) = 1$  bo'lsa, u holda  $a^{100n+1} \equiv a \pmod{1000}$ .

16.3. Agar  $(n, 6) = 1$  bo'lsa, u holda  $n^2 \equiv 1 \pmod{24}$ .

16.4.  $a^{6m} + a^{6n} \equiv 0 \pmod{7} \Leftrightarrow a : 7, m, n \in N$ .

16.5. Agar  $a$  butun sonning kubi bo'lsa, u holda

$$(a-1)a(a+2) \equiv 0 \pmod{504}.$$



### Takrorlash uchun savollar

1. Taqqoslama deb nimaga aytiladi?
2. Taqqoslamaning sodda xossalari bayon eting.
3. Modul bo'yicha chegirmalarning to'la sistemasi deb nimaga aytiladi?
4. Modul bo'yicha chegirmalarning keltirilgan sistemasi deb nimaga aytiladi?
5. Eyler va Ferma teoremlarini bayon eting.





## 28-§. Birinchi darajali va tub modul bo'yicha yuqori darajali taqqoslamalar

**Asosiy tushunchalar:** bir noma'lumli n- darajali taqqoslama, taqqoslamaning yechimi, teng kuchli taqqoslamalar, bir noma'lumli birinchi darajali taqqoslama, tub modulli taqqoslama.

Koeffitsientlari butun sonlardan iborat  $f(x)=a_0x^n+a_1x^{n-1}+\dots+a_{n-1}x+a_n$  ko'phad berilgan bo'lsin.

Ushbu  $f(x)\equiv 0(\text{mod } m)$  ( $a_0$  son m ga bo'linmaydi,  $a_i \in \mathbb{Z}$ ,  $m \geq 1$ ) ko'rinishdagi taqqoslamani bir noma'lumli n- darajali taqqoslama deyiladi.

Agar  $x=c$  bo'lganda  $f(c)\equiv 0(\text{mod } m)$  taqqoslama to'g'ri bo'lsa, u holda c son  $f(x)$  taqqoslamani qanoatlantiradi deyiladi.

Agar c son  $f(x)$  taqqoslamani qanoatlantirsa, u holda  $\bar{c}$  chegirmalar sinfi  $f(x)$  taqqoslamaning yechimi deyiladi.

Yechimlari to'plami ustma-ust tushgan taqqoslamalarni teng kuchli taqqoslamalar deyiladi.

Ushbu  $ax \equiv b(\text{mod } m)$  ( $a, b \in \mathbb{Z}, \forall m \in \mathbb{N}$ ) ko'rinishdagi taqqoslamaga bir noma'lumli birinchi darajali taqqoslama deyiladi.

Agar  $f(x)=a_0x^p+a_1x^{p-1}+\dots+a_{n-1}x+a_n, a_i \in \mathbb{Z}$ , r-tub son,  $(a_0, r)=1$  bo'lsa, u holda  $f(x)\equiv 0(\text{mod } p)$  taqqoslamaga tub modulli n-darajali bir noma'lumli taqqoslama deyiladi.

**Misol.**  $7 \cdot x \equiv 10(\text{mod } 4)$  taqqoslamaning yechimlarini taqqoslama xossalaridan foydalanib toping.

**Yechish.**  $(7,4)=1$  ekanligidan taqqoslama yagona yechimga ega ekanligi kelib chiqadi. 7 va 11 sonlari 4 dan katta bo'lganligi uchun  $7 \cdot x \equiv 3x(\text{mod } 4)$  va  $10 \equiv 2(\text{mod } 4)$  lardan foydalanib  $3x \equiv 2(\text{mod } 4)$  ni hosil qilamiz. Bundan  $3x \equiv -x(\text{mod } 4)$  ni e'tiborga olib  $-x \equiv 2(\text{mod } 4)$  ni, va nihoyat  $x \equiv -2(\text{mod } 4)$  ni hosil qilamiz.

Agar  $-2 \equiv 2(\text{mod } 4)$  ni qo'llasak, u holda  $x \equiv 2(\text{mod } 4)$  kelib chiqadi.

Tekshirish :

$$7 \cdot 2 \equiv 10 \pmod{4}$$

$$14 \equiv 10 \pmod{4} \Rightarrow (14 - 10) = 4 : 4$$

kelib chiqadi

**Misol.**  $27x \equiv 47 \pmod{38}$  taqqoslamani taqqoslama xossalaridan foydalanib yechimlarini toping.

**Yechish.**  $47 \equiv 9 \pmod{38}$  dan  $27x \equiv 9 \pmod{38}$  hosil bo'ladi.  $\langle 7, 38 \rangle = 1$  bo'lgani uchun taqqoslama yagona yechimga ega.  $(9, 38) = 1$  bo'lgani uchun taqqoslamani ikkala tomonini 9 ga bo'lamiz:  $3x \equiv 1 \pmod{38}$ .

Taqqoslamaning o'ng tomoniga 38 ni qo'shamiz:  $3x \equiv 39 \pmod{38}$ . Hosil bo'lgan taqqoslamani ikkala tomonini  $\langle 3, 38 \rangle = 1$  bo'lgani uchun 3 ga bo'lamiz:  $x \equiv 13 \pmod{38}$ .

$$\text{Tekshirish: } 27 \cdot 13 - 47 = 304 = (38 \cdot 8) : 38$$

**Misol.** Berilgan  $7x \equiv 10 \pmod{4}$  taqqoslamani tanlash usuli bilan yeching.

**Yechish.**  $ax \equiv b \pmod{m}$  taqqoslamani tanlash usuli bilan yechimlarini topish uchun avval yechimlar sonini aniqlaymiz. So'ngra  $m$  modul bo'yicha chegirmalar to'la sistemasidagi har bir sinfning yechim bo'lish bo'lmasligini tekshiramiz.

$$7 \cdot x \equiv 10 \pmod{4} \text{ taqqoslamada } (7, 4) = 1.$$

Demak, yagona yechim mavjud. 4 modul bo'yicha chegirmalar to'la sistemasi 0,1,2,3.  $x$  noma'lum o'rniga birma-bir qo'yib tekshiriladi. Qaysidir chegirmalar sinfi yechim bo'lishi ma'lum bo'lsa tekshirish jarayonini to'xtatamiz:

$$x=0 \text{ da } 7 \cdot 0 \equiv 10 \pmod{4} \text{ o'rinli emas, chunki } (0-10) \not\equiv 4;$$

$$x=1 \text{ da } 7 \cdot 1 \equiv 10 \pmod{4} \text{ o'rinli emas, chunki } 7-10 = 3 \not\equiv 4;$$

$$x=2 \text{ da } 7 \cdot 2 \equiv 10 \pmod{4} \text{ o'rinli, chunki } 14 - 10 = 4 : 4.$$

$x \equiv 2 \pmod{4}$  yechim bo'ladi. Qolgan sinflar berilgan taqqoslamaning birgina yechimi mavjud bo'lganligi sababli, tekshirilmaydi.

Tekshirish.  $7 \cdot 2 - 10 = 14 - 10 = 4 \div 4$ .

**Misol.**  $2x \equiv 5 \pmod{9}$  taqqoslamani tanlash usuli yordamida yechimlarini toping.

**Yechish.** 9 modul bo'yicha  $0, \pm 1, \pm 2, \pm 3, \pm 4$  chegirmalar sinflaridan  $(2;9)=1$  bo'lganligi uchun berilgan taqqoslamani yagona yechimini topamiz.

$$2 \cdot 0 = 0 \not\equiv 5 \pmod{9};$$

$$2 \cdot 1 = 2 \not\equiv 5 \pmod{9};$$

$$2 \cdot (-1) = -2 \not\equiv 5 \pmod{9};$$

$$2 \cdot 2 = 4 \not\equiv 5 \pmod{9};$$

$$2 \cdot (-2) = -4 \equiv 5 \pmod{9}.$$

Demak,  $x \equiv -2 \pmod{9}$ , ya'ni  $x \equiv 7 \pmod{9}$  berilgan taqqoslamani yechimi.

Tekshirish:  $2 \cdot 7 - 5 = 14 - 5 = 9 \div 9$

**Misol.**  $7 \cdot x \equiv 10 \pmod{4}$  taqqoslamani Eyler teoremasi yordamida yeching.

**Yechish.** Agar  $a \cdot x \equiv b \pmod{m}$  taqqoslama  $(a,m)=1$  bo'lsa, u holda uning yechimi  $x \equiv b \cdot a^{\varphi(m)-1} \pmod{m}$  formula yordamida topiladi. Haqiqatdan ham Eyler teoremasiga ko'ra  $a^{\varphi(m)} \equiv 1 \pmod{m}$ . Bundan  $a^{\varphi(m)} \cdot b \equiv b \pmod{m}$  va  $a \cdot a^{\varphi(m)-1} \cdot b \equiv b \pmod{m}$  larni hosil qilsak  $x \equiv b a^{\varphi(m)-1} \pmod{m}$  kelib chiqadi.

$7 \cdot x \equiv 10 \pmod{4}$  dan  $a=7$ ,  $b=10$ ,  $m=4$  yechim  $x \equiv 10 \cdot 7^{\varphi(4)-1} \pmod{4}$  ni topish uchun  $\varphi(4)$  ni aniqlaymiz.  $4 = 2^2$  ekanligidan  $\varphi(4) = 4 \cdot \left(1 - \frac{1}{2}\right) = 2$  kelib chiqadi.

Demak  $x \equiv 10 \cdot 7^{2-1} \pmod{4}$ . Agar  $10 \equiv 2 \pmod{4}$ ,  $7 \equiv 3 \pmod{4}$  va

$6 \equiv 2 \pmod{4}$  taqqoslamalardan foydalansak,

$x \equiv 10 \cdot 7^{2-1} \equiv 2 \cdot 3 \equiv 6 \equiv 2 \pmod{4}$ , ya'ni  $x \equiv 2 \pmod{4}$  yechimni hosil qilamiz.

Tekshirish:  $2 \cdot 10 - 10 = 14 - 10 = 4 \div 4$ .

**Misol.**  $27x \equiv 24 \pmod{102}$  taqqoslamani Eyler metodidan foydalanib yechimlarini toping.

**Yechish.**  $(27,102)=3$  va  $24=3 \cdot 8$ . Demak, taqqoslama 3 ta yechimga ega. Berilgan taqqoslamaning ikkala qismi va modulni 3 ga bo'lamiz:  $9x \equiv 8 \pmod{34}$ .

Bunda  $a=9, m=34, b=8$  bo'lgani uchun  $x \equiv b \cdot a^{\varphi(m)-1} \pmod{m}$  dan  $x \equiv 8 \cdot 9^{\varphi(34)-1} \pmod{34}$  ga ega bo'lamiz.  $\varphi(34) = 2 \cdot 17 \left(1 - \frac{1}{2}\right) \left(1 - \frac{1}{17}\right) = 16$

ekanligini e'tiborga olamiz:

$$\begin{aligned} x &\equiv 8 \cdot 9^{15} \equiv 8 \cdot 9 \cdot 9^{14} \equiv 4 \cdot (9^2)^7 \equiv 4 \cdot 13^7 \equiv 4 \cdot 13^7 \equiv 4 \cdot 13 \cdot (13^2)^3 \equiv \\ &\equiv 18 \cdot 33^3 \equiv 18 \cdot 33 \cdot (33)^2 \equiv 16 \cdot 1^2 \equiv 16 \pmod{34} \end{aligned}$$

Bundan  $x \equiv 16 \pmod{34}$  ga ega bo'lamiz.

Tekshirish:  $9 \cdot 16 - 8 = 136 : 34$ . U holda  $27x \equiv 24 \pmod{102}$  taqqoslama

$$x \equiv 16 \pmod{102}$$

$$x \equiv 16 + 34 \pmod{102}$$

$$x \equiv 16 + 34 \cdot 2 \pmod{102} \text{ yechimlarga ya'ni,}$$

$$x \equiv 16 \pmod{102}$$

$$x \equiv 50 \pmod{102}$$

$$x \equiv 84 \pmod{102} \text{ yechimlarga ega.}$$

Tekshirish:

$$27 \cdot 16 - 24 = 408 : 102;$$

$$27 \cdot 50 - 24 = 3126 : 102;$$

$$27 \cdot 84 - 24 = 2244 : 102.$$

**Misol.**  $7x \equiv 10 \pmod{4}$  taqqoslamani munosib kasrlar yordamida yeching.

**Yechish.** Agar  $ax \equiv b \pmod{m}$  taqqoslamada  $(a, m) = 1$  va  $P_{n-1}$  son  $\frac{m}{a}$  ning

oxiridan oldingi munosib kasr surati bo'lsa, u holda  $x \equiv b \cdot (-1)^{n-1} P_{n-1} \pmod{m}$  berilgan taqqoslamaning yechimi bo'ladi.

Berilgan taqqoslamada  $m=4$ ,  $a=7$  bo'lganidan  $\frac{4}{7}$  ning munosib kasrlarini

topamiz:

$$4 = 7 \cdot 0 + 4;$$

$$7 = 4 \cdot 1 + 3;$$

$$4 = 3 \cdot 1 + 1;$$

$$3 = 1 \cdot 3 + 0.$$

Bundan  $\frac{4}{7} = [0; 1, 1, 3]$  ko'rinishda bo'ladi.

Munosib kasrlar jadvalini tuzamiz:

$k$	-1	0	1	2	3
$q_k$	-	0	1	1	3
$P_k$	1	0	1	1	4
$Q_k$	0	1	1	2	7

Demak,  $P_{n-1} = P_2 = 1$  va  $x \equiv b \cdot (-1)^{n-1} P_{n-1} \equiv 10 \cdot (-1)^{3-1} \cdot 1 \equiv 10 \equiv 2 \pmod{4}$ .

Berilgan taqqoslamaning  $x \equiv 2 \pmod{4}$  yechimi mavjud ekan.

Tekshirish.  $7 \cdot 2 - 10 = 14 - 10 = 4 : 4$ .

**Misol.**  $220x \equiv 28 \pmod{348}$  taqqoslamani munosib kasrlar yordamida yechimlarini toping.

**Yechish.**  $\overbrace{20,348}^4 = 4$  va  $28:4$  dan berilgan taqqoslama 4 ta yechimga ega ekanligi kelib chiqadi. Taqqoslamani ikkala tomoni va modulni 4 ga bo'lamiz:

$55x \equiv 7 \pmod{87}$ .  $\frac{87}{55}$  kasrni chekli zanjir kasr ko'rinishiga keltirib, munosib

kasrlar jadvalini tuzamiz:  $\frac{87}{55} = [1; 1, 1, 1, 2, 1, 1, 4]$ . Bundan,

$k$	1	0	1	2	3	4	5	6
$q_k$	-	1	1	1	2	1	1	4
$P_k$	1	1	2	3	8	11	19	87

va  $n=6$ ,  $P_{n-1}=P_5=19$ ,  $b=7$ ,  $m=87$  larni  $x \equiv (-1)^n P_{n-1} b \pmod{m}$  formulaga qo'ysak,  $x \equiv (-1)^6 \cdot 19 \cdot 7 \equiv 133 \equiv 46 \pmod{87}$  kelib chiqadi.

Demak,  $55x \equiv 7 \pmod{87}$  ning yechimi  $x \equiv 46 \pmod{87}$  va  $220x \equiv 28 \pmod{348}$  ning yechimlari  $x \equiv 46; 133; 220; 307 \pmod{348}$ .

Tekshirish:

$$220 \cdot 46 - 28 = 10092 : 348;$$

$$220 \cdot 133 - 28 = 29232 : 348;$$

$$220 \cdot 220 - 28 = 48372 : 348;$$

$$220 \cdot 307 - 28 = 67512 : 348.$$

**Misol.**  $7x \equiv 10 \pmod{4}$  taqqoslamani 7 ga 4 modul bo'yicha teskari sinfi orqali yeching.

**Yechish.**  $ax \equiv b \pmod{m}$  taqqoslamada  $(a, m) = 1$  bo'lsa, u holda 1 ning  $a$  va  $m$  sonlarga chiziqli yoyilmasini topamiz:  $1 = au + mv$  yoyilmadagi  $u$  soni  $a$  soniga  $m$  modul bo'yicha teskari son bo'ladi.

Evklid algoritmi yordamida berilgan  $\frac{7}{4}$  sonlarning eng katta umumiy

bo'luvchisining chiziqli ifodasini topamiz:

$$7 = 4 \cdot 1 + 3; \quad 3 = 7 - 4 \cdot 1;$$

$$4 = 3 \cdot 1 + 1; \quad 1 = 4 - 3 \cdot 1$$

$$3 = 1 \cdot 3 + 0.$$

$$\text{Bundan} \quad 1 = 4 - 3 \cdot 1 = 4 - (7 - 4 \cdot 1) = 4 \cdot 2 - 7 = 4 \cdot 2 + 7(-1). \quad \text{Demak,}$$

$1 = 4 \cdot 2 + 7(-1)$ . 7 soniga 4 modul bo'yicha teskari son  $-1$  yoki  $-1 \equiv 3 \pmod{4}$  ekanligidan 3 soni bo'ladi.

$7x \equiv 10 \pmod{4}$  taqqoslamani ikkala tomonini 7 ga 4 modul bo'yicha teskari son 3ga ko'paytiramiz  $\langle 3, 4 \rangle = 1$ :

$$7 \cdot 3x \equiv 10 \cdot 3 \pmod{4}$$

$$21x \equiv 30 \pmod{4}$$

$$21x \equiv x \pmod{4}$$

$$30x \equiv 2 \pmod{4}$$

lardan  $x \equiv 2 \pmod{4}$  yechimni topamiz.

Tekshirish.  $7 \cdot 2 - 10 = 14 - 10 = 4 \div 4$ .

**Misol.**  $37x \equiv 25 \pmod{107}$  taqqoslamani teskari sinf yordamida yeching.

**Yechish.**  $\langle 7, 107 \rangle = 1$  dan berilgan taqqoslamani yagona yechimi mavjudligi kelib chiqadi. 107 modulda 37 ga teskari sonni topamiz:

$$107 = 37 \cdot 2 + 33;$$

$$37 = 33 \cdot 1 + 4;$$

$$33 = 4 \cdot 8 + 1;$$

$$4 = 1 \cdot 4 + 0.$$

$$1 = 33 - 4 \cdot 8 = 33 - \langle 7 - 33 \cdot 1 \rangle \cdot 8 = 33 \cdot 9 + 37(-8) = (107 - 37 \cdot 2) \cdot 9 + 37(-8) = 107 \cdot 9 + 37(-26).$$

Bundan  $1 = 107 \cdot 9 + 37(-26)$ , ya'ni 107 modulda 37 ga teskari sinf  $-26$ . musbat son bilan almashtiramiz:  $-26 + 107 = 81$ . Hosil bo'lgan 81 ga berilgan taqqoslamani ikkala qismini ko'paytiramiz va  $37 \cdot 81x \equiv 28 \cdot 81 \pmod{107}$  dan  $x \equiv 2025 \pmod{107}$  ya'ni  $x \equiv 99 \pmod{107}$  yechimini topamiz.

Tekshirish:  $37 \cdot 99 - 25 = 3638 \div 107$ .

**Misol.**  $27x + 38y = 47$  tenglamani taqqoslamalar yordamida yeching.

**Yechish.** Tenglamani butun yechimlarini taqqoslamalardan foydalanib topish uchun  $27x \equiv 47 \pmod{38}$  bir o'zgaruvchili taqqoslamani tuzib olamiz.  $\langle 7, 38 \rangle = 1$  ekanligidan taqqoslamani bitta yechimi mavjud.  $47 \equiv 9 \pmod{38}$  dan  $27x \equiv 9 \pmod{38}$  ni hosil qilamiz. Bundan  $3x \equiv 1 \pmod{38}$  va  $x \equiv 13 \pmod{38}$  kelib chiqadi.

$x \equiv 13 \pmod{38}$  berilgan  $27x \equiv 9 \pmod{38}$  taqqoslamani yechimi. U holda

$$\left\{ 13, \frac{47 - 27 \cdot 13}{38} \right\} = \{ 13, -8 \} \text{ berilgan tenglamani yechimlaridan biri bo'ladi.}$$

$$ax + by = c \text{ tenglamani barcha yechimlari } x' = x_0 + \frac{m}{d}t, \quad y' = y_0 + \frac{a}{d}t$$

ko'rinishda bo'lib, bu erda  $x_0 = 13$ ,  $y_0 = -8$ ,  $m = 18$ ,  $a = 27$ ,  $d = 1$ . Demak,

$$\begin{cases} x' = 13 + 38t, \\ y' = -8 - 27t, \quad t \in \mathbb{Z} \end{cases}$$

Tekshirish:  $27(3 + 38t) - 38(8 - 27t) = 47$ ;

$$351 + 1026t - 304 - 1026t = 47$$

$$47 = 47$$

**Misol.** 
$$\begin{cases} 3x \equiv 11 \pmod{17} \\ 15x \equiv 35 \pmod{13} \\ 21x \equiv 33 \pmod{30} \end{cases}$$
 taqqoslamalar sistemasini yeching.

**Yechish.** Berilgan taqqoslamalar sistemasidagi har bir taqqoslama yechimlari yuqoridagi misollarda keltirilgan usullardan biri yordamida topiladi.

$$\begin{cases} x \equiv 15 \pmod{17} \\ x \equiv 11 \pmod{13} \\ x \equiv 3 \pmod{10} \end{cases}$$

Hosil qilingan taqqoslamalar sistemasidagi taqqoslamalar modullari o'zaro tub bo'lganligi uchun ularning eng kichik umumiy karralisi  $M$  bo'yicha quyidagi qiymatlarni topamiz:

$$M = 17 \cdot 13 \cdot 10 = 2210;$$

$$M_1 = \frac{2210}{17} = 130;$$

$$M_2 = \frac{2210}{13} = 170;$$

$$M_3 = \frac{2210}{10} = 221.$$

Quyidagi taqqoslamalarni tuzib yechimini topamiz:

1)  $130y_1 \equiv 1 \pmod{17}$   
 $y_1 = 14;$

2)  $170y_2 \equiv 1 \pmod{13}$   
 $y_2 = 1;$

3)  $221y_3 \equiv 1 \pmod{10}$   
 $y_3 = 1.$

Bundan berilgan taqqoslamalar sistemasining yechimi

$$x = x_0 = 130 \cdot 14 \cdot 15 + 170 \cdot 1 + 11 + 211 \cdot 1 \cdot 3 = 29833 \equiv 1103 \pmod{2210}$$

ya'ni,  $x \equiv 1103 \pmod{2210}$  kelib chiqadi.



Agar berilgan taqqoslamalar sistemasidagi uchinchi taqqoslamaning 3 ta yechimi borligini e'tiborga olsak, u holda taqqoslamalar sistemasining 3 ta yechimini topish mumkin:

$$\begin{cases} x \equiv 15 \pmod{17} \\ x \equiv 11 \pmod{13} \\ x \equiv 3 \pmod{30} \end{cases} \quad \begin{cases} x \equiv 15 \pmod{17} \\ x \equiv 11 \pmod{13} \\ x \equiv 13 \pmod{30} \end{cases} \quad \begin{cases} x \equiv 15 \pmod{17} \\ x \equiv 11 \pmod{13} \\ x \equiv 23 \pmod{30} \end{cases}$$

$$x \equiv 5523 \pmod{6630}; \quad x \equiv 3313 \pmod{6630} \quad x \equiv 1103 \pmod{6630}$$

yechimlar hosil qilinadi.

**Misol.**  $\begin{cases} x \equiv 2 \pmod{15} \\ x \equiv 7 \pmod{20} \\ x \equiv 12 \pmod{35} \end{cases}$  taqqoslamalar sistemasini yeching.

**Yechish.** Taqqoslama ta'rifiga ko'ra birinchi taqqoslamadan  $x = 2 + 15t$ ,  $t \in \mathbb{Z}$  ifodani hosil qilamiz. Bu qiymatni ikkinchi taqqoslamaga qo'yamiz:

$$2 + 15t \equiv 7 \pmod{20}. \text{ Bundan, } 15t \equiv 5 \pmod{20} \text{ yoki } t \equiv 3 \pmod{4} \text{ ni olamiz.}$$

Yana taqqoslama ta'rifini qo'llab  $z \equiv 3 + 4k$ ,  $k \in \mathbb{Z}$  ifodani olamiz. Bu ifodadan

$$x = 2 + 15t = 2 + 15(3 + 4k) = 47 + 60k \text{ kelib chiqadi. Hosil qilingan } x \text{ ning}$$

ifodasini uchinchi taqqoslamaga qo'yamiz:  $47 + 60k \equiv 12 \pmod{35}$  taqqoslamani yechib  $k \equiv 0 \pmod{7}$  yechimni topamiz.

Bundan  $k = 7l$ ,  $l \in \mathbb{Z}$  kelib chiqadi. Hosil bo'lgan ifodani  $x$  ning ifodasiga qo'llaymiz:  $x = 47 + 60k = 47 + 60 \cdot 7l = 47 + 420l$ .

Demak,  $x \equiv 47 \pmod{420}$  berilgan taqqoslamalar sistemasining yechimi.

Tekshirish:  $\begin{cases} 47 - 2 = 45 : 15; \\ 47 - 7 = 40 : 20; \\ 47 - 12 = 35 : 35. \end{cases}$

**Misol.**  $251x^{54} + 63x^{25} - 7x^{11} + 4x^3 + 2 \equiv 0 \pmod{5}$  taqqoslamani soddalashtiring.

**Yechish.** Berilgan taqqoslamani soddalashtirish uchun taqqoslamalar xossalari va Eyler teoremasidan foydalanamiz:

$$251 \equiv 1 \pmod{5};$$

$$63 \equiv 3 \pmod{5};$$

$$7 \equiv 2 \pmod{5};$$

$$4 \equiv 4 \pmod{5};$$

$$2 \equiv 2 \pmod{5}.$$

$\varphi(5) = 4$  dan

$$x^{54} \equiv (x^4)^{13} \cdot x^2 \equiv x^2 \pmod{5};$$

$$x^{25} \equiv (x^4)^6 \cdot x \equiv x \pmod{5};$$

$$x^{11} \equiv (x^4)^2 \cdot x^3 \equiv x^3 \pmod{5}.$$

Keltirilgan taqqoslamalar yordamida berilgan taqqoslamani soddalashtiramiz:

$$251x^{54} + 63x^{25} - 7x^{11} + 4x^3 + 2 = x^2 + 3x - 2x^3 + 4x^3 + 2 = 2x^3 + x^2 + 3x + 2 = 0 \pmod{5}$$



## Misol va mashqlar

1. Quyidagi xossalarni isbotlang;

1.1. Agar  $c$  son  $f(x) \equiv 0 \pmod{m}$  taqqoslamani qanoatlantirsa, u holda  $\bar{c}$  chegirmalar sinfiga tegishli ixtiyoriy son ham shu taqqoslamani qanoatlantiradi.

1.2. Agar  $(a; m) = 1$  bo'lsa, u holda  $ax \equiv b \pmod{m}$  taqqoslama yagona yechimga ega bo'ladi.

1.3. Agar  $(a; m) = d$  bo'lib,  $b$  son  $d$  ga bo'linmasa, u holda  $ax \equiv b \pmod{m}$  taqqoslama yechimga ega emas.

1.4. Agar  $ax \equiv b \pmod{m}$  taqqoslamada  $(a; m) = d$  bo'lib,  $b$  son  $d$  ga bo'linsa, u holda taqqoslama soni  $d$  ga teng bo'lgan ushbu  $\bar{\alpha}, \bar{\alpha} + \frac{m}{d}, \dots, \bar{\alpha} + \frac{(d-1)m}{d}$

yechimlarga ega bo'lib, bundagi  $\alpha$  yechim  $\frac{a}{d}x \equiv \frac{b}{a} \pmod{\frac{m}{d}}$  taqqoslamaning yagona yechimi bo'ladi.

1.5. Agar  $f(x)$  va  $g(x)$  koeffitsientlari butun sonlardan iborat ko'phadlar bo'lsa, u holda  $f(x) \equiv 0 \pmod{p}$  va  $(x) - (x^p - x)g(x) \equiv 0 \pmod{p}$  taqqoslamalar teng kuchli bo'ladi.

1.6. Darajasi  $n$  ( $n > r$ ) bo'lgan  $r$  tub modulli taqqoslama darajasi  $r-1$  dan katta bo'lmagan taqqoslamaga teng kuchli bo'ladi.

1.7. Tub modulli  $n$ -darajali taqqoslama yechimlari soni  $n$  tadan ortiq emas.

2. Quyidagi taqqoslamalarni tanlash usulida yeching:

2.1.  $2x \equiv 1 \pmod{3}$ ;

2.2.  $8x \equiv 3 \pmod{4}$ ;

2.3.  $6x \equiv 7 \pmod{5}$ ;

2.4.  $3x \equiv 22 \pmod{7}$ ;

2.5.  $4x \equiv 6 \pmod{10}$ ;

2.6.  $12x \equiv 1 \pmod{7}$ ;

2.7.  $5x \equiv 7 \pmod{11}$ ;

2.8.  $8x \equiv 1 \pmod{16}$ .

3. Quyidagi taqqoslamalarni taqqoslama xossalari yordamida yeching:

3.1.  $7x \equiv 8 \pmod{13}$ ;

3.2.  $6x \equiv 11 \pmod{14}$ ;

3.3.  $8x \equiv 10 \pmod{14}$ ;

3.4.  $11x \equiv -32 \pmod{27}$ ;

3.5.  $16x \equiv 50 \pmod{23}$ ;

3.6.  $25x \equiv 1 \pmod{37}$ ;

3.7.  $17x \equiv 23 \pmod{41}$ ;

3.8.  $32x \equiv 43 \pmod{51}$ .

4. Berilgan taqqoslamalarni Eyler teoremasi yordamida yeching:

4.1.  $5x \equiv 7 \pmod{13}$ ;

4.2.  $29x \equiv 3 \pmod{12}$ ;

4.3.  $5x \equiv 26 \pmod{12}$ ;

4.4.  $8x \equiv 17 \pmod{19}$ ;

4.5.  $27x \equiv 11 \pmod{34}$ ;

4.6.  $24x \equiv 1 \pmod{15}$ ;

4.7.  $15x \equiv 23 \pmod{22}$ ;

4.8.  $12x \equiv 51 \pmod{39}$ .

5. Berilgan taqqoslamalarni chekli zanjir kasrlar yordamida yeching:

5.1.  $15x \equiv 37 \pmod{98}$ ;

5.2.  $32x \equiv 182 \pmod{119}$ ;

5.3.  $105x \equiv 72 \pmod{147}$ ;

5.4.  $97x \equiv 53 \pmod{169}$ ;

5.5.  $-50x \equiv 67 \pmod{177}$ ;

5.6.  $69x \equiv 393 \pmod{201}$ ;

5.7.  $192x \equiv 9 \pmod{327}$ ;

5.8.  $365x \equiv 50 \pmod{395}$ ;

5.9.  $-639x \equiv 177 \pmod{924}$ ;

5.10.  $1296x \equiv 1105 \pmod{2413}$ ;

5.11.  $1215x \equiv 550 \pmod{2755}$ ;

5.12.  $1919x \equiv 1717 \pmod{4009}$ .

6. Berilgan  $ax \equiv b \pmod{m}$  taqqoslamalarni  $a$  ga teskari sinf orqali yeching:

6.1.  $21x \equiv 17 \pmod{23}$ ;

6.2.  $5x \equiv 7 \pmod{24}$ ;

6.3.  $17x \equiv 19 \pmod{24}$ ;

6.4.  $13x \equiv -1 \pmod{30}$ ;

6.5.  $28x \equiv 33 \pmod{35}$ ;

6.6.  $12x \equiv 24 \pmod{30}$ ;

6.7.  $9x \equiv 18 \pmod{41}$ ;

6.8.  $11x \equiv 31 \pmod{50}$ .

7. Quyidagi taqqoslamalarni yeching:

7.1.  $(a+b)x \equiv a^2 + b^2 \pmod{ab}$ ,  $(a,b)=1$ ;

7.2.  $(a^2 + b^2)x \equiv a - b \pmod{ab}$ ,  $(a, b) = 1$ ;

7.3.  $(a + b)^2 x \equiv a^2 - b^2 \pmod{ab}$ ,  $(a, b) = 1$ ;

7.4.  $(a - b)x \equiv a^2 + b^2 \pmod{ab}$ ,  $(a, b) = 1$ ;

7.5.  $2x \equiv 1 + p \pmod{p}$ , bu erda  $p$  tub toh son.

7.6.  $(m - 1)x \equiv 1 \pmod{m}$ ,

7.7.  $(m + 1)^2 x \equiv a \pmod{m}$ ;

7.8.  $ax \equiv 1 \pmod{p}$  bu erda  $p$  tub son va  $(a, p) = 1$ .

8. Berilgan tenglamalarni taqqoslamalar yordamida yeching:

8.1.  $2x + 3y = 4$ ;

8.2.  $4x - 3y = 2$ ;

8.3.  $3x + 4y = 13$ ;

8.4.  $5x + 4y = 3$ ;

8.5.  $3x + 8y = 5$ ;

8.6.  $17x + 13y = 1$ ;

8.7.  $23x + 15y = 19$ ;

8.8.  $17x - 16y = 31$ ;

8.9.  $91x - 28y = 35$ ;

8.10.  $17x - 39y = 26$ ;

8.11.  $50x - 42y = 34$ ;

8.12.  $47x - 105y = 4$ ;

8.13.  $47x - 111y = 89$ .

9. Taqqoslamalar sistemasini yeching:

9.1. 
$$\begin{cases} 3x \equiv 5 \pmod{7}, \\ 2x \equiv 1 \pmod{5}; \end{cases}$$

9.2. 
$$\begin{cases} 3x \equiv 1 \pmod{20}, \\ 2x \equiv 3 \pmod{15}; \end{cases}$$

$$9.3. \begin{cases} 3x \equiv 1 \pmod{5}, \\ 5x \equiv 4 \pmod{7}; \end{cases}$$

$$9.4. \begin{cases} 14x \equiv 12 \pmod{18}, \\ x \equiv 5 \pmod{25}; \end{cases}$$

$$9.5. \begin{cases} x \equiv b_1 \pmod{13}, \\ x \equiv b_2 \pmod{17}; \end{cases}$$

$$9.6. \begin{cases} 3x + 4y \equiv 29 \pmod{143}, \\ 2x - 9y \equiv 59 \pmod{143}; \end{cases}$$

$$9.7. \begin{cases} x + 2y \equiv 0 \pmod{5}, \\ 3x + 2y \equiv 2 \pmod{5}; \end{cases}$$

$$9.8. \begin{cases} 5x - y \equiv 3 \pmod{6}, \\ 2x + 2y \equiv 5 \pmod{6}. \end{cases}$$

10. Taqqoslamalar sistemasini yeching:

$$10.1. \begin{cases} x \equiv 3 \pmod{8}, \\ x \equiv 11 \pmod{20}, \\ x \equiv 1 \pmod{15}; \end{cases}$$

$$10.2. \begin{cases} x \equiv 2 \pmod{3}, \\ x \equiv 3 \pmod{4}, \\ x \equiv 4 \pmod{5}; \end{cases}$$

$$10.3. \begin{cases} x \equiv 1 \pmod{2}, \\ x \equiv 3 \pmod{5}, \\ x \equiv 6 \pmod{9}; \end{cases}$$

$$10.4. \begin{cases} x \equiv 2 \pmod{7}, \\ x \equiv 5 \pmod{9}, \\ x \equiv 11 \pmod{15}; \end{cases}$$

$$10.5. \begin{cases} x \equiv 4 \pmod{7}, \\ x \equiv 9 \pmod{13}, \\ x \equiv 1 \pmod{17}; \end{cases}$$

$$10.6. \begin{cases} x \equiv 5 \pmod{12}, \\ x \equiv 2 \pmod{8}, \\ x \equiv 2 \pmod{11}; \end{cases}$$

$$10.7. \begin{cases} x \equiv 2 \pmod{15}, \\ x \equiv 7 \pmod{20}, \\ x \equiv 12 \pmod{35}; \end{cases}$$

$$10.8. \begin{cases} x \equiv 4 \pmod{5}, \\ x \equiv 1 \pmod{12}, \\ x \equiv 7 \pmod{14}; \end{cases}$$

$$10.9. \begin{cases} x \equiv 5 \pmod{8}, \\ x \equiv 4 \pmod{11}, \\ x \equiv 6 \pmod{17}; \end{cases}$$

$$10.10. \begin{cases} x \equiv b_1 \pmod{25}, \\ x \equiv b_2 \pmod{27}, \\ x \equiv b_3 \pmod{59}; \end{cases}$$

$$10.11. \begin{cases} x \equiv 1 \pmod{3}, \\ x \equiv 4 \pmod{5}, \\ x \equiv 2 \pmod{7}, \\ x \equiv 9 \pmod{11}, \\ x \equiv 3 \pmod{13}. \end{cases}$$

11. Taqqoslamalar sistemasini yeching:

$$11.1. \begin{cases} 3x \equiv 1 \pmod{10}, \\ 4x \equiv 3 \pmod{5}, \\ 2x \equiv 7 \pmod{9}; \end{cases}$$

$$11.2. \begin{cases} 2x \equiv 3 \pmod{5}, \\ 3x \equiv 5 \pmod{7}, \\ 3x \equiv 3 \pmod{9}; \end{cases}$$

$$11.3. \begin{cases} 4x \equiv 1 \pmod{9}, \\ 5x \equiv 3 \pmod{7}, \\ 4x \equiv 5 \pmod{12}; \end{cases}$$

$$11.4. \begin{cases} 7x \equiv 3 \pmod{11}, \\ 3x \equiv 2 \pmod{5}, \\ 15x \equiv 5 \pmod{35}; \end{cases}$$

$$11.5. \begin{cases} 3x \equiv 7 \pmod{10}, \\ 2x \equiv 5 \pmod{15}, \\ 7x \equiv 5 \pmod{12}; \end{cases}$$

$$11.6. \begin{cases} 5x \equiv 3 \pmod{9}, \\ 4x \equiv 7 \pmod{13}, \\ 8x \equiv 4 \pmod{14}, \\ x \equiv 2 \pmod{17}; \end{cases}$$

$$11.7. \begin{cases} 2x \equiv 7 \pmod{13}, \\ 5x \equiv 8 \pmod{17}, \\ 14x \equiv 35 \pmod{19}, \\ 3x \equiv 7 \pmod{31}. \end{cases}$$

12.  $a$  ning qanday qiymatlarida taqqoslamalar sistemasi yechimga ega?

$$12.1. \begin{cases} x \equiv a \pmod{6}, \\ x \equiv 1 \pmod{10}, \\ x \equiv 2 \pmod{21}, \\ x \equiv 3 \pmod{11}; \end{cases}$$

$$12.2. \begin{cases} 2x \equiv a \pmod{4}, \\ 3x \equiv 4 \pmod{10}; \end{cases}$$

$$12.3. \begin{cases} x \equiv 5 \pmod{18}, \\ x \equiv 8 \pmod{21}, \\ x \equiv a \pmod{35}; \end{cases}$$

$$12.4. \begin{cases} x \equiv a \pmod{6}, \\ x \equiv 1 \pmod{10}, \\ x \equiv 2 \pmod{21}, \\ x \equiv 3 \pmod{11}. \end{cases}$$

13. Darajasi berilgan taqqoslama darajasiga, bosh koeffitsienti 1ga teng bo'lgan tengkuchli taqqoslamani toping:

$$13.1. 3x^3 - 5x^2 - 2 \equiv 0 \pmod{11};$$



13.2.  $27x^3 + 14x^2 - 10x + 13 \equiv 0 \pmod{59}$ ;

13.3.  $70x^6 + 78x^5 + 25x^4 + 68x^3 + 52x^2 + 4x + 3 \equiv 0 \pmod{101}$ ;

13.4.  $a_0x^n + a_1x^{n-1} + \dots + a_{n-1}x + a_n \equiv 0 \pmod{m}$ ,  $(a_0, m) = 1$ .

14. Darajasi moduldan kichik, berilgan taqqoslamaga tengkuchli taqqoslamani toping:

14.1.  $x^8 + 2x^7 + x^5 - x^4 - x + 3 \equiv 0 \pmod{5}$ ;

14.2.  $3x^{14} + 4x^{13} + 3x^{12} + 2x^{11} + x^9 + 2x^8 + 4x^7 + x^6 + 3x^4 + x^3 + 4x^2 + 2x \equiv 0 \pmod{5}$ ;

14.3.  $x^{16} + 3x^8 - 5x^7 - x^4 + 6x - 2 \equiv 0 \pmod{7}$ ;

14.4.  $2x^{17} + 6x^{16} + x^{14} + 5x^{12} + 3x^{11} + 2x^{10} + x^9 + 5x^8 + 2x^7 + 3x^5 + 4x^4 + 6x^3 + 4x^2 + x + 4 \equiv 0 \pmod{7}$

14.5.  $6x^{18} + 18x^{15} + 3x^4 - 8x^3 + x^2 + 3 \equiv 0 \pmod{11}$ .

15. Berilgan taqqoslamani soddalashtiring (darajasini pasaytiring, koeffitsientlarni moduldan kichik sonlar bilan almashtiring, bosh koeffitsienti 1ga teng bo'lsin) va tanlash usulida yeching:

15.1.  $x^5 + x^3 + x^2 + 4 \equiv 0 \pmod{3}$ ;

15.2.  $6x^4 + 17x^2 - 16 \equiv 0 \pmod{3}$ ;

15.3.  $28x^9 + 29x^8 - 26x^7 + 20x^4 - 17x + 23 \equiv 0 \pmod{3}$ ;

15.4.  $x^5 + 2x^4 - 2x^3 - 2x^2 + 2x - 1 \equiv 0 \pmod{3}$ ;

15.5.  $x^5 + x^4 - x^2 - 5x + 1 \equiv 0 \pmod{3}$ ;

15.6.  $x^7 + 2x^6 + x^5 + 4x^3 - 2x^2 - 4x + 2 \equiv 0 \pmod{5}$ ;

15.7.  $x^7 + 3x^6 + x^5 - x^3 - 3x^2 - 4x + 4 \equiv 0 \pmod{5}$ ;

15.8.  $x^7 + 5x^5 - x^3 - 9x + 3 \equiv 0 \pmod{5}$ ;

15.9.  $34x^{10} - 29x^7 + 43x^4 - 19x + 37 \equiv 0 \pmod{5}$ ;

15.10.  $6x^{10} - 12x + 1 \equiv 0 \pmod{5}$ ;

15.11.  $x^7 - 3x^6 + x^5 - 15x^4 - x^3 + 4x^2 - 4x + 2 \equiv 0 \pmod{5}$ .

16. Berilgan taqqoslamalarni soddalashtiring va tanlash usulida yeching:

$$16.1. 5x^{24} + 4x^{23} + 4x^{22} + 2x^{21} + x^{20} + 6x^{19} + 4x^{18} + 3x^{17} + 4x^{16} + 6x^{15} + 5x^{14} + \\ + 2x^{13} + x^{12} + 2x^{11} + x^{10} + 3x^9 + 4x^8 + 2x^7 + 5x^6 + 6x^5 + 5x^4 + 3x^3 + \\ + 4x^2 + 4x + 2 \equiv 0 \pmod{7};$$

$$16.2. x^{13} - x^{11} + x^9 - x^7 + x^5 + x^3 + x + 1 \equiv 0 \pmod{7};$$

$$16.3. 10x^{42} - 5x^{30} + 10x^{18} + 9x^{12} + 4 \pmod{7};$$

$$16.4. 75x^{13} - 62x^{12} - 53x^{11} - 24x^6 + 13x - 27 \equiv 0 \pmod{7};$$

$$16.5. 6x^{13} - 3x^{12} - 2x^{11} - 6x^3 + 3x^2 + 7x + 2 \equiv 0 \pmod{11};$$

$$16.6. 13x^{23} - 30x^{22} - 2x^{13} + 1 \equiv 0 \pmod{11};$$

$$16.7. 120x^{91} + 14x^{15} + x^{11} - 3x^5 + 9x^2 - x + 6 \equiv 0 \pmod{11};$$

$$16.8. x^{14} - x^{13} + 12x^2 + 2x + 1 \equiv 0 \pmod{13};$$

$$16.9. 300x^{90} + 259x^{67} - 95x^{23} - 1 \equiv 0 \pmod{23}.$$

17. Taqqoslamalarni berilgan modul bo'yicha chizihli ko'paytuvchilarga ajrating:

$$17.1. x^3 + 4x^2 - 3 \equiv 0 \pmod{5};$$

$$17.2. x^3 - 2x + 1 \equiv 0 \pmod{5};$$

$$17.3. x^4 - 20x^3 + 90x^2 - 135x + 54 \equiv 0 \pmod{5};$$

$$17.4. 3x^3 + 2x^2 - 2x - 3 \equiv 0 \pmod{5};$$

$$17.5. x^4 - 12x^3 + 46x^2 - 53x - 12 \equiv 0 \pmod{7};$$

$$17.6. 5x^3 + 4x^2 - 8x - 1 \equiv 0 \pmod{7};$$

$$17.7. 6x^3 + 5x^2 - 2x - 9 \equiv 0 \pmod{11};$$

$$17.8. x^3 + 3x^2 - 3 \equiv 0 \pmod{17};$$

$$17.9. x^3 + 11x^2 + 8x + 3 \equiv 0 \pmod{23};$$

$$17.10. x^4 + 15x^3 + 4x^2 + 4x - 15 \equiv 0 \pmod{29};$$

$$17.11. x^3 - 13x^2 - 3x + 11 \equiv 0 \pmod{31}.$$



## Takrorlash uchun savollar

1. Bir noma'lumli n-darajali taqqoslama deb nimaga aytiladi?
2. Taqqoslamaning yechimi deb nimaga aytiladi?
3. Teng kuchli takkoslamalarni tushuntiring.
4. Bir noma'lumli birinchi darajali taqqoslama qachon yechimga ega?
5. Bir noma'lumli birinchi darajali taqqoslamalarni qanday yechish usullarini bilasiz?
6. Tub modulli n -darajali taqqoslama yechimlari soni nimaga bog'liq bo'ladi?



## 29-§. Tub modul bo'yicha boshlang'ich ildizlar va indekslar

**Asosiy tushunchalar:** sonning ko'rsatkichi, boshlang'ich ildiz, g asosga nisbatan indeksi, ikkinchi darajali taqqoslama, ikki hadli taqqoslama, kvadratik chegirma.

Agar  $(a; m)=1$  bo'lganda  $a^\delta=1(\text{mod } m)$  taqqoslama o'rinli bo'lsa, u holda  $\delta$  son  $a$  sonning  $m$  modulga ko'ra ko'rsatkichi yoki  $m$  modul bo'yicha  $a$  soniga tegishli ko'rsatkich deyiladi.

Agar  $(a, m)=1$  bo'lib,  $\delta=\varphi(m)$  bo'lsa, u holda  $a$  son  $m$  modul bo'yicha boshlang'ich ildiz deyiladi.

Boshlang'ich ildizlar faqatgina  $m=2, 4, r^\alpha, 2p^\alpha$  ( $r$ -toq tub son,  $\alpha \geq 1$  natural son) sonlar uchun mavjud bo'ladi. Boshlang'ich ildizlar bevosita hisoblash usulida topiladi.

$r$  tub son bo'lib,  $\delta$  son  $r-1$  sonning bo'luvchisi bo'lsin, u holda  $r$  modul bo'yicha chegirmalarning keltirilgan sinflar sistemasida  $\delta$  ko'rsatkichga tegishli sinflar soni  $\varphi(\delta)$  ta bo'ladi.

Agar  $g$  son  $r$  tub modul bo'yicha boshlang'ich ildiz bo'lib,  $(a; r)=1$  bo'lganda  $g^\gamma=a(\text{mod } r)$  taqqoslama to'g'ri bo'lsa, u holda  $\gamma \geq 0$  butun son  $a$  sonning  $r$  modul

bo'yicha  $g$  asosga nisbatan indeksi deyiladi va  $u = \text{ind}_g a$  kabi belgilanadi.

Agar  $a$  son  $m$  songa bo'linmasa, u holda ushbu  $ax^2 + bx + c = 0 \pmod{m}$  ko'rinishdagi taqqoslama ikkinchi darajali (kvadratik) taqqoslama deyiladi.

Agar  $a$  son  $r$  tub songa bo'linmasa, u holda ushbu  $ax^n = b \pmod{r}$  ( $\forall n \in \mathbb{N}$ ) ko'rinishdagi taqqoslamani  $n$ -darajali ikki hadli taqqoslama deyiladi. Agar  $(a; m) = 1$  bo'lganda taqqoslama yechimga ega bo'lsa, u holda  $a$  son  $m$  modul buyicha  $n$ -darajali chegirma, aks holda  $a$  son  $n$ -darajali chegirmamas deyiladi.

Ushbu  $x^2 \equiv a \pmod{m}$  ko'rinishdagi taqqoslamani ikki hadli kvadratik taqqoslama deyiladi. Agar  $(a; m) = 1$  bo'lganda taqqoslama yechimga ega bo'lsa, u holda  $a$  son  $m$  modul bo'yicha kvadratik chegirma, aks holda  $a$  son  $m$  modul bo'yicha kvadratik chegirmamas deyiladi.

Ushbu  $x^2 \equiv a \pmod{p}$  ( $(a; p) = 1, (2; p) = 1$ ) ko'rinishdagi taqqoslamani toq tub modulli kvadratik taqqoslama deyiladi. Agar  $(a; p) = 1$  bo'lib,  $a^{\frac{p-1}{2}} \equiv 1 \pmod{p}$  bo'lsa, u holda taqqoslama ikkita yechimga ega bo'ladi,  $a^{\frac{p-1}{2}} \equiv -1 \pmod{p}$  bo'lsa, u holda taqqoslama yechimga ega bo'lmaydi.

**Misol.**  $\frac{219}{383}$  ning Lejandr simvolini toping.

**Yechish:** Lejandr simvoli deb  $\frac{a}{p}$  kasr songa  $1, -1$  ni quyidagicha mos qo'yish

tushuniladi:

$$\left(\frac{a}{p}\right) = \begin{cases} 1 & \text{agar } a \text{ soni } p \text{ modul bo' yicha kvadrat chegirma bo' lsa;} \\ -1 & \text{agar } a \text{ soni } p \text{ modul bo' yicha kvadrat chegirma bo' lmasa;} \end{cases}$$

Berilgan kasr sonning maxraji tub son bo'lsa, uning Lejandr simvoli topiladi.

Buning uchun quyidagi xossalardan foydalanamiz:

1. Agar  $a = b \pmod{p}$  bo'lsa, u xolda  $\left(\frac{a}{p}\right) = \left(\frac{b}{p}\right)$ ;

2.  $\left(\frac{a^2}{p}\right) = 1$ ;

$$3. \left(\frac{1}{p}\right) = 1;$$

$$4. \left(\frac{-1}{p}\right) = (-1)^{\frac{p-1}{2}};$$

$$5. \left(\frac{ab..c}{p}\right) = \left(\frac{a}{p}\right)\left(\frac{b}{p}\right)\dots\left(\frac{c}{p}\right);$$

$$6. \left(\frac{ab^2}{p}\right) = \left(\frac{a}{p}\right);$$

$$7. \left(\frac{a^n}{p}\right) = \left(\frac{a}{p}\right)^n;$$

$$8. \left(\frac{2}{p}\right) = (-1)^{\frac{p^2-1}{8}};$$

$$9. \text{ Agar } (p; q) = 1, \text{ u xolda } \left(\frac{q}{p}\right) = \left(\frac{p}{q}\right) \cdot (-1)^{\frac{p-1}{2} \cdot \frac{q-1}{2}}.$$

Berilgan  $\frac{219}{383}$  kasrning Lejandr simvolini topamiz:

**1-usul.**

$$\begin{aligned} \left(\frac{219}{383}\right) &= \left(\frac{3 \cdot 73}{383}\right) = |5 - \text{xossaga ko'ra}| = \left(\frac{3}{383}\right) \cdot \left(\frac{73}{383}\right) = |9 - \text{xossaga ko'ra}| = \\ &= \left(\frac{383}{3}\right) (-1)^{\frac{383-1}{2} \cdot \frac{3-1}{2}} \cdot \left(\frac{383}{73}\right) (-1)^{\frac{383-1}{2} \cdot \frac{73-1}{2}} = \left(\frac{2}{3}\right) (-1)^{191} \left(\frac{18}{73}\right) (-1)^{19136} = -\left(\frac{2}{3}\right) \cdot \left(\frac{2 \cdot 3^2}{73}\right) = \\ &= |5,6 - \text{xossaga ko'ra}| = -\left(\frac{2}{3}\right) \cdot \left(\frac{2}{73}\right) = |8 - \text{xossaga ko'ra}| = -(-1)^{\frac{3^2-1}{8}} \cdot (-1)^{\frac{73^2-1}{8}} = \\ &= -(-1)(-1)^{666} = 1. \end{aligned}$$

Demak,  $\left(\frac{219}{383}\right) = 1$ . Bundan  $x^2 \equiv 219 \pmod{383}$  taqqoslama uchun 219

kvadrat chegirma bo'ladi, ya'ni hosil qilingan taqqoslama kamida bitta yechimga ega.

**2-usul.**  $\left(\frac{219}{383}\right) = \left(\frac{3}{383}\right) \cdot \left(\frac{73}{383}\right)$  tenglikdan foydalanib, ko'paytuvchilarni

alohida-alohida topish mumkin:

$$a) \left(\frac{3}{383}\right) = \left(\frac{383}{3}\right) \cdot (-1)^{\frac{383-1}{2} \cdot \frac{3-1}{2}} = -\left(\frac{383}{3}\right) = -\left(\frac{2}{3}\right) = -(-1)^{\frac{3^2-1}{8}} = -(-1) = 1.$$

$$v) \left(\frac{73}{383}\right) = \left(\frac{383}{73}\right) \cdot (-1)^{\frac{383-1}{2} \cdot \frac{73-1}{2}} = -\left(\frac{383}{73}\right) = -\left(\frac{18}{73}\right) = \left(\frac{2 \cdot 3^2}{73}\right) = \\ = \left(\frac{2}{73}\right) = -(-1)^{\frac{73^2-1}{2}} = 1.$$

$$\text{Bunda, } \left(\frac{219}{383}\right) = \left(\frac{3}{383}\right) \cdot \left(\frac{73}{383}\right) = 1 \cdot 1 = 1 \text{ kelib chiqadi.}$$

**3-usul.** Berilgan  $\frac{219}{383}$  kasrning maxraji suratidan katta bo'lgani uchun 9-

xossani qo'llash mumkin:

$$\left(\frac{219}{383}\right) = \left(\frac{383}{219}\right) \cdot (-1)^{\frac{383-1}{2} \cdot \frac{219-1}{2}} = -\left(\frac{383}{219}\right) = \left(\frac{164}{219}\right) = \left(\frac{41 \cdot 2^2}{219}\right) = \\ = -\left(\frac{41}{219}\right) = -\left(\frac{219}{41}\right) \cdot (-1)^{\frac{219-1}{2} \cdot \frac{41-1}{2}} = -\left(\frac{219}{41}\right) = \left(\frac{14}{41}\right) = -\left(\frac{2}{41}\right) \left(\frac{7}{41}\right) = (-1)^{\frac{41^2-1}{8}} \left(\frac{7}{41}\right) = \\ = -\left(\frac{7}{41}\right) = -\left(\frac{41}{7}\right) \cdot (-1)^{\frac{41-1}{2} \cdot \frac{7-1}{2}} = -\left(\frac{41}{7}\right) = -\left(\frac{-1}{7}\right) = (-1)^{\frac{7-1}{2}} = 1$$

$$\text{Demak, } \left(\frac{219}{383}\right) = 1.$$

**Misol.**  $\frac{383}{219}$  ning Yakobi simvolini aniqlang.

**Yechish:** Yakobi simvolining Lejandr simvolidan farqi Yakobi simvoli o'zaro tub bo'lgan  $a$  va  $m$  ( $n > 1$ ) sonlardan tuzilgan  $\frac{a}{m}$  uchun aniqlanadi.  $\left(\frac{a}{m}\right)$  belgilash " $a$  ning  $m$  modul bo'yicha Yakobi simvoli" deb o'qiladi. Yuqoridagi 12-misoldagi Lejandr simvolining xossalari va  $\left(\frac{a}{m}\right) = \left(\frac{a}{p_1 \dots p_n}\right) = \left(\frac{a}{p_1}\right) \dots \left(\frac{a}{p_n}\right)$

xossadan:

$$\left(\frac{383}{219}\right) = \left(\frac{383}{3 \cdot 73}\right) = \left(\frac{383}{3}\right) \cdot \left(\frac{383}{73}\right) = \left(\frac{2}{3}\right) \cdot \left(\frac{18}{73}\right) = \left(\frac{2}{3}\right) \cdot \left(\frac{23^2}{73}\right) =$$

$$\left(\frac{2}{3}\right) \cdot \left(\frac{2}{73}\right) = \left(\frac{2}{3}\right)^{\frac{3^2-1}{8}} \left(\frac{2}{73}\right)^{\frac{73^2-1}{8}} = \left(\frac{2}{3}\right)^2 = -1$$

Demak,  $\left(\frac{383}{219}\right) = -1$ , ya'ni  $x^2 \equiv 383 \pmod{219}$  taqqoslama uchun 383 kvadrat

chegirma emas.

**Misol.**  $p = 17$  modul bo'yicha  $g = 6$  boshlang'ich ildizning indekslar jadvalini tuzing.

**Yechish.**  $p$  tub modul bo'yicha boshlang'ich ildiz bu shunday  $g$  chegirmalar sinfini, uning uchun  $g^{p-1} \equiv 1 \pmod{p}$  bo'lib,  $p-1$  dan kichik natural darajalarda  $p$  modulda 1 bilan taqqoslanmaydi.

$g = 6$  ning mod 17 da boshlang'ich ildiz bo'lishini tekshiramiz. Buning uchun  $p-1$  ning  $n$  bo'luvchilarida  $6^n \equiv 1 \pmod{p}$  shartni tekshiramiz:

$p = 17$ ,  $p-1 = 16$ , 16 ning natural bo'luvchilari  $n = 1, 2, 4, 8, 16$ . Bundan:

$$6^1 \equiv 6 \pmod{17}$$

$$6^2 \equiv 2 \pmod{17}$$

$$6^4 \equiv 4 \pmod{17}$$

$$6^8 \equiv 16 \pmod{17}$$

$$6^{16} \equiv 1 \pmod{17}$$

Demak, 17 modulda 6 boshlang'ich ildiz bo'ladi.  $6^0, 6^1, 6^2, \dots, 6^{15}$  lardan 17 modul bo'yicha taqqoslamalar tuzamiz:

$$6^0 \equiv 1 \pmod{17};$$

$$6^5 \equiv 7 \pmod{17};$$

$$6^{10} \equiv 15 \pmod{17};$$

$$6^1 \equiv 6 \pmod{17};$$

$$6^6 \equiv 8 \pmod{17};$$

$$6^{11} \equiv 5 \pmod{17};$$

$$6^2 \equiv 2 \pmod{17};$$

$$6^7 \equiv 14 \pmod{17};$$

$$6^{12} \equiv 13 \pmod{17};$$

$$6^3 \equiv 12 \pmod{17};$$

$$6^8 \equiv 16 \pmod{17};$$

$$6^{13} \equiv 10 \pmod{17};$$

$$6^4 \equiv 4 \pmod{17};$$

$$6^9 \equiv 11 \pmod{17};$$

$$6^{14} \equiv 9 \pmod{17};$$

$$6^{15} \equiv 3 \pmod{17}.$$

Tuzilgan taqqoslamalar yordamida quyidagi jadvallarni tuzamiz:

1-jadval

N	0	1	2	3	4	5	6	7	8	9
0		0	2	15	4	11	1	5	6	14
1	13	9	3	12	7	10	8			

1-jadval uchun taqqoslamalarning ikkinchi tomonidagi songa mos daraja topiladi.

2-jadval

I	0	1	2	3	4	5	6	7	8	9
0	1	6	2	12	4	7	8	14	16	11
1	15	5	13	10	9	3				

2-jadval uchun taqqoslamalarning birinchi tomonidagi darajaga mos qoldiq topiladi.

**Misol.**  $15x^{19} \equiv 28 \pmod{17}$  taqqoslamani yeching.

**Yechish.**  $15x^{19} \equiv 28 \pmod{17}$  taqqoslamani taqqoslama xossalari yordamida soddalashtiramiz:  $15x^3 \equiv 11 \pmod{17}$ . Hosil bo'lgan taqqoslamani indekslar xossalariga ko'ra:  $ind15 + 3indx \equiv ind11 \pmod{16}$  taqqoslamani hosil qilamiz.

Yuqorida tuzilgan jadvaldan  $ind15 = 10$ ,  $ind11 = 9$  larni topamiz:

$$10 + 3indx \equiv 9 \pmod{16}$$

$$3indx \equiv -1 \pmod{16}$$

$(3,16)=1$  ekanligidan taqqoslama yagona yechimga ega. Taqqoslama xossalaridan  $3indx \equiv 15 \pmod{16}$ ; larni va 2-jadval yordamida

$x \equiv 7 \pmod{17}$  yechimni hosil qilamiz.

Tekshirish:

$$\begin{aligned} 15 \cdot 7^{19} - 28 &= -2(7^2)^9 \cdot 7 - 11 \equiv -2(49)^9 \cdot 7 - 11 \equiv -2(-2)^9 \cdot 7 - 11 \equiv \\ &= -2(-2)^5 \cdot (-2)^4 \cdot 7 - 11 \equiv -2(-32) \cdot 16 \cdot 7 - 11 \equiv -2 \cdot 2 \cdot (-1) \cdot 7 - 11 \equiv \\ &= 28 - 11 \equiv 17 \equiv 0 \pmod{17} \end{aligned}$$

Demak,  $15 \cdot 7^{19} - 28 \equiv 0$ .





## Misol va mashqlar

1. Lejandr simvolini toping:

1.1.  $\left(\frac{13}{7}\right)$ ;      1.2.  $\left(\frac{22}{13}\right)$ ;

1.3.  $\left(\frac{19}{67}\right)$ ;      1.4.  $\left(\frac{37}{67}\right)$ ;

1.5.  $\left(\frac{56}{73}\right)$ ;      1.6.  $\left(\frac{47}{73}\right)$ ;

1.7.  $\left(\frac{54}{83}\right)$ ;      1.8.  $\left(\frac{68}{113}\right)$ ;

1.9.  $\left(\frac{63}{131}\right)$ .

2. Yakobi simvolini toping:

2.1.  $\left(\frac{283}{563}\right)$ ;      2.2.  $\left(\frac{251}{577}\right)$ ;

2.3.  $\left(\frac{241}{593}\right)$ ;      2.4.  $\left(\frac{323}{607}\right)$ ;

2.5.  $\left(\frac{346}{643}\right)$ ;      2.6.  $\left(\frac{3153}{1201}\right)$ ;

2.7.  $\left(\frac{20470}{1847}\right)$ ; 2.8.  $\left(\frac{2108}{2003}\right)$ ;

2.9.  $\left(\frac{3149}{5987}\right)$ .

3. Quyidagi taqqoslamalarning yechimlar sonini aniqlang:

3.1.  $x^2 \equiv 3 \pmod{31}$ ;

3.2.  $x^2 \equiv 2 \pmod{31}$ ;

3.3.  $x^2 \equiv 5 \pmod{73}$ ;

3.4.  $x^2 \equiv 3 \pmod{101}$ ;

3.5.  $x^2 \equiv 226 \pmod{563}$ ;

3.6.  $x^2 \equiv 429 \pmod{563}$ ,

3.7.  $x^2 \equiv 579 \pmod{821}$ ;

3.8.  $x^2 \equiv 728 \pmod{919}$ ;

3.9.  $x^2 \equiv 847 \pmod{1087}$ ;

3.10.  $x^2 \equiv 3766 \pmod{5987}$ .

4. Quyidagi tasdiqlarni isbotlang:

4.1. Biror  $m$  modul bo'yicha tuzilgan bitta sinfnin chegirmalari shu modul bo'yicha bir xil ko'rsatkichga tegishli bo'ladi.

4.2. Agar  $(a; m) = 1$  bo'lganda  $a^{\delta} \equiv 1 \pmod{m}$  bo'lsa, u holda  $a^0, a^1, \dots, a^{\delta-1}$  sonlar sistemasi  $m$  modul bo'yicha o'zaro taqqoslanmaydi.

4.3. Agar  $\delta = \varphi(m)$  bo'lsa, u holda  $a^0, a^1, \dots, a^{\delta-1}$  sistema  $m$  modul bo'yicha chegirmalarning keltirilgan sistemasini tashkil qiladi.

4.4.  $a$  son  $m$  modul bo'yicha  $\delta$  ko'rsatkichga tegishli bo'lsa, u holda  $a^{\gamma} = a^{\gamma_1} \pmod{m}$  taqqoslama o'rinli bo'lishi uchun  $\gamma \equiv \gamma_1 \pmod{\delta}$  taqqoslamaning o'rinli bo'lishi zarur va etarli.

4.5.  $\gamma \equiv 0 \pmod{\delta}$  bo'lganda va faqat shu holdagina  $a^{\gamma} \equiv 1 \pmod{m}$  taqqoslama o'rinli bo'ladi.

4.6.  $a$  sonning  $m$  modul bo'yicha  $\delta$  ko'rsatkichi  $\varphi(m)$ ning bo'luvchisi bo'ladi.

4.7. Agar  $a$  son  $m$  modul bo'yicha  $\delta$  ko'rsatkichga tegishli bo'lsa, u holda  $a^k$  soni shu modul bo'yicha  $\frac{\delta}{(\delta; k)}$  ko'rsatkichga tegishli bo'ladi.

4.8. Agar  $(\delta; k) = 1$  bo'lsa, u holda  $a$  son  $\delta$  ko'rsatkichga tegishli bo'ladi.

4.9.  $r$  tub modul bo'yicha tuzilgan  $r-1$  sonning har bir  $\delta$  buluvchisi  $\varphi(\delta)$  ta sinfnin ko'rsatkichi bo'ladi. Xususiyl holda  $\varphi(r-1)$  ta boshlang'ich ildizlar sinfi mavjud.

5.  $a$  sonning  $m$  modul bo'yicha tartibini aniqlang:

5.1.  $a = 2, m = 5$ ;

5.2.  $a = 4, m = 5$ ;

- 5.3.  $a=5, m=8$ ;  
5.4.  $a=10, m=13$ ;  
5.5.  $a=4, m=15$ ;  
5.6.  $a=2, m=15$ ;  
5.7.  $a=2, m=17$ ;  
5.8.  $a=7, m=20$ ;  
5.9.  $a=7, m=22$ ;  
5.10.  $a=7, m=43$ ;  
5.11.  $a=5, m=108$ ;  
5.12.  $a=2, m=133$ .

6.  $a, b, c, d$  sonlarning  $m$  modul bo'yicha tartibini aniqlang:

- 6.1.  $a=7, b=9, c=12; m=13$ ;  
6.2.  $a=5, b=8, c=13; m=17$ ;  
6.3.  $a=5, b=8, c=10; d=16; m=13$ ;  
6.4.  $a=10, b=25, c=50; m=39$ ;  
6.5.  $a=5, b=15, c=21; d=35; m=44$ .

7. Berilgan modul bo'yicha barcha boshlang'ich ildizlarni toping:

- 7.1. 11;      7.2. 13;  
7.3. 15;      7.4. 19;  
7.5. 49;      7.6. 81.

8. Berilgan modul bo'yicha boshlang'ich ildizlar sonini va ularning eng kichigini toping:

- 8.1. 10;      8.2. 18;  
8.3. 19;      8.4. 31;  
8.5. 37.

9. Berilgan modul bo'yicha boshlang'ich ildizlarning eng kichigini toping:

- 9.1. 7;      9.2. 17;  
9.3. 23;      9.4. 41;  
9.5. 53;      9.6. 50;

- 9.7. 54; 9.8. 71;  
 9.9. 242; 9.10. 289;  
 9.11. 578; 9.12. 625.

10.  $r$  modul bo'yicha  $g$  asosga ko'ra indekslar jadvalini tuzing:

- 10.1.  $p=3, g=2$ ;  
 10.2.  $p=5, g=2$ ;  
 10.3.  $p=5, g=3$ ;  
 10.4.  $p=7, g=3$ ;  
 10.5.  $p=7, g=5$ ;  
 10.6.  $p=11, g=2$ ;  
 10.7.  $p=13, g=2$ ;  
 10.8.  $p=29, g=2$ .

11. Indeksning quyidagi xossalari isbotlang:

11.1.  $a \equiv b \pmod{r} \Leftrightarrow \text{ind}_a = \text{ind}_b$ .

11.2. Agar  $(a;r)=1, (b;r)=1$  bo'lsa, u holda  $\text{ind}(ab) = \text{ind}_a + \text{ind}_b \pmod{p-1}$  bo'ladi.

11.3. Agar  $(a;r)=1$  va  $\forall n \in \mathbb{N}$  bo'lsa, u holda  $\text{ind}(a^n) \equiv n \cdot \text{ind}_a \pmod{p-1}$  taqqoslama o'rinli bo'ladi.

11.4.  $\text{ind} \left( \frac{a}{b} \right) \equiv \text{ind}_a - \text{ind}_b \pmod{p-1}$  taqqoslama o'rinli.

11.5.  $\text{ind}_1 = 0, \text{ind}_g = 1$ .

12. Quyidagi taqqoslamalarni yeching:

- 12.1.  $7x \equiv 23 \pmod{17}$ ;  
 12.2.  $5x \equiv 13 \pmod{27}$ ;  
 12.3.  $8x \equiv -11 \pmod{37}$ ;  
 12.4.  $47x \equiv 23 \pmod{73}$ ;  
 12.5.  $53x \equiv 37 \pmod{79}$ ;  
 12.6.  $125x \equiv 7 \pmod{79}$ ;

12.7.  $65x \equiv 38 \pmod{83}$ ;

12.8.  $23x \equiv 9 \pmod{97}$ ;

12.9.  $37x \equiv 5 \pmod{221}$ .

13. Quyidagi ikkinchi darajali taqqoslamalarni yeching:

13.1.  $x^2 \equiv 15 \pmod{17}$ ;

13.2.  $x^2 \equiv 10 \pmod{27}$ ;

13.3.  $x^2 \equiv 47 \pmod{53}$ ;

13.4.  $x^2 \equiv 58 \pmod{61}$ ;

13.5.  $x^2 \equiv 59 \pmod{67}$ ;

13.6.  $x^2 \equiv -28 \pmod{67}$ ;

13.7.  $x^2 \equiv 54 \pmod{71}$ ;

13.8.  $x^2 \equiv 40 \pmod{83}$ ;

13.9.  $3x^2 - 5x - 2 \equiv 0 \pmod{11}$ ;

13.10.  $2x^2 - 7x + 28 \equiv 0 \pmod{43}$ ;

13.11.  $3x^2 - 8x + 44 \equiv 0 \pmod{47}$ ;

13.12.  $x^2 \equiv 29 \pmod{59^2}$ ;

13.13.  $x^2 \equiv 61 \pmod{73^2}$ .

14. Quyidagi taqqoslamalarning yechimlar sonini aniqlang:

14.1.  $x^{15} \equiv 6 \pmod{37}$ ;

14.2.  $x^{16} \equiv 10 \pmod{37}$ ;

14.3.  $3x^3 \equiv 2 \pmod{37}$ ;

14.4.  $7x^7 \equiv 11 \pmod{41}$ ;

14.5.  $3x^{12} \equiv 31 \pmod{41}$ ;

14.6.  $5x^{30} \equiv 37 \pmod{41}$ ;

14.7.  $x^5 \equiv 3 \pmod{71}$ ;

14.8.  $x^{21} \equiv 5 \pmod{71}$ ;

14.9.  $x^{15} \equiv 46 \pmod{97}$ ;

14.10.  $x^{55} \equiv 17 \pmod{97}$ ;

14.11.  $x^{60} \equiv 79 \pmod{97}$ .

15. Quyidagi ikkihadli taqqoslamalarni yeching:

15.1.  $x^{10} \equiv 33 \pmod{37}$ ;

15.2.  $x^3 \equiv 34 \pmod{41}$ ;

15.3.  $x^8 \equiv 31 \pmod{41}$ ;

15.4.  $x^{12} \equiv 37 \pmod{41}$ ;

15.5.  $x^5 \equiv 37 \pmod{43}$ ;

15.6.  $x^{27} \equiv 39 \pmod{43}$ ;

15.7.  $x^{35} \equiv 17 \pmod{67}$ ;

15.8.  $x^{30} \equiv 14 \pmod{67}$ ;

15.9.  $x^{12} \equiv 27 \pmod{83}$ ;

15.10.  $x^{48} \equiv 2 \pmod{97}$ .

16. Quyidagi ikkihadli taqqoslamalarni yeching:

16.1.  $3x^3 \equiv 4 \pmod{7}$ ;

16.2.  $2x^8 \equiv 5 \pmod{13}$ ;

16.3.  $15x^4 \equiv 17 \pmod{23}$ ;

16.4.  $27x^5 \equiv 25 \pmod{31}$ ;

16.5.  $13x^3 \equiv 24 \pmod{37}$ ;

16.6.  $37x^8 \equiv 59 \pmod{61}$ ;

16.7.  $23x^5 \equiv 15 \pmod{73}$ ;

16.8.  $37x^6 \equiv 69 \pmod{73}$ ;

16.9.  $37x^{15} \equiv 62 \pmod{73}$ ;

16.10.  $44x^{21} \equiv 53 \pmod{73}$ ;

16.11.  $27x^{30} \equiv 41 \pmod{79}$ .



### Takrorlash uchun savollar

1. Sonning modulga ko'ra ko'rsatkichi deb nimaga aytiladi?
2. Sonning modul bo'yicha boshlang'ich ildizi deb nimaga aytiladi?
3. Sonning modul bo'yicha indeksini tushuntiring.
4. Indeksning qanday xossalari bilasiz?
5. n-darajali ikki hadli taqqoslama deb nimaga aytiladi?
6. n-darajali ikki hadli taqqolama yechimlar soni necha bo'ladi?
7. Tub modulli ikki hadli kvadratik taqqoslama yechimlari necha?

## XIV MODUL. KO'PHADLAR

### □ 30-§. Bir o'zgaruvchili ko'phadlar

**Asosiy tushunchalar:** n-darajali ko'phad, ko'phadning ildizi, Bezu teoremasi, algebraik teng ko'phadlar, funktsional teng ko'phadlar.

Agar  $a_n \neq 0$  bo'lsa, u holda ushbu

$$a_n x^n + a_{n-1} x^{n-1} + \dots + a_1 x + a_0 = \sum_{i=0}^n a_i x^i \quad (a_i \in K, \quad i = \overline{0, n}, \forall n \in \mathbb{N})$$
 ifodani  $K$  maydon

ustidagi n-darajali ko'phad deyiladi.

Agar  $K$  butunlik sohasining biror  $c$  elementi uchun  $f(c) = 0$  tenglik o'rinli bo'lsa, u holda  $c$  element  $f(x)$  ko'phadning yoki  $f(x) = 0$  tenglamaning ildizi deyiladi.

Bezu teoremasi.  $f(x)$  ko'phadni  $x$ -s ikki hadga bo'lishdan xosil bo'lgan qoldiq  $f(c)$  ga teng.

$x = s$  element  $f(x)$  ko'phadning ildizi bo'lishi uchun  $f(x)$  ning  $x$ -s ikki hadga bo'linishi zarur va etarli.

Agar  $s_1, s_2, \dots, s_k$  lar  $f(x)$  ko'phadning turli ildizlari bo'lsa, u holda  $f(x)$  ko'phad  $(x-s_1)(x-s_2)\dots(x-s_k)$  ko'paytmaga bo'linadi.

Noldan farqli n-darajali ko'phad ( $n \geq 1$ )  $K$  butunlik sohasida  $n$  tadan ortiq ildizga ega emas.

Agar  $f(x) \in K[x]$  va  $0 \neq \varphi(x) \in K[x]$  ko'phadlar berilgan bo'lib, shunday  $g(x) \in K[x]$  ko'phad topilsaki, natijada  $f(x) = \varphi(x)g(x)$  tenglik o'rinli bo'lsa, u holda  $f(x)$  ko'phad  $\varphi(x)$  ko'phadga bo'linadi deyiladi va uni  $f(x) : \in \varphi(x)$  yoki  $f(x)/\varphi(x)$  ko'rinishlarda belgilanadi.

O'zgaruvchining bir xil darajalari oldidagi koeffitsientlari teng bo'lgan ko'phadlar o'zaro algebraik ma'nodagi teng ko'phadlar deyiladi.



Agar o'zgaruvchining biror cheksiz sohadan olingan xar qanday qiymatlariga mos keluvchi ko'phadlarning qiymatlari ustma-ust tushsa, u holda bunday ko'phadlarni o'zaro funktsional ma'nodagi teng ko'phadlar deyiladi.

Berilgan  $f(x) = a_n x^n + \dots + a_1 x + a_0$  ko'phadni  $g(x) = b_m x^m + \dots + b_1 x + b_0$  ko'phadga bo'lishni quyidagi jadval asosida bajarish mumkin:

	$a_n$	$a_{n-1}$	$a_{n-2}$	...	$a_m$	$a_{m-1}$	...	$a_0$
$b_m$	$a_n$	$b_{m-1} \frac{a_n}{b_m}$	$b_{m-2} \frac{a_n}{b_m}$	...				
$b_{m-1}$		$a_{n-1} - \sigma_1$	$b_{m-1} \frac{a_{n-1} - \sigma_1}{b_m}$	...				
.								
.								
.								
$b_1$								
$b_0$								
					$a_m - \sigma_{n-m}$	$b_{m-1} \frac{a_m - \sigma_{n-m}}{b_m}$	...	$b_0 \frac{a_m - \sigma_{n-m}}{b_m}$
	$\frac{a_n}{b_m}$	$\frac{a_{n-1} - \sigma_1}{b_m}$	$\frac{a_{n-2} - \sigma_2}{b_m}$	...	$\frac{a_m - \sigma_{n-m}}{b_m}$	$\frac{a_{m-1} - \delta_{m-1}}{d_{m-1}}$	...	$\frac{a_0 - \delta_0}{d_0}$
	$c_{n-m}$	$c_{n-m-1}$	$c_{n-m-2}$		$c_0$			

**Misol.**  $g(x) \in Z[x]$ ,  $f(x) = x^4 + ax^3 + bx^2 - 8x + 4$  uchun  $f(x) = \mathfrak{G}(x) \cdot g(x)$  shartni qanoatlantiruvchi barcha  $a$  va  $b$  butun sonlarni toping.

**Yechish.**  $f(x)$  ko'phadning darajasi 4 ga teng. Demak,  $g(x)$  ning darajasi 2 ga teng.  $g(x) = mx^2 + nx + P$ ,  $m \neq 0$  bo'lsin. Bundan

$$\mathfrak{G}(x) \cdot g(x) = (x^2 + nx + p) \cdot (mx^2 + nx + P) = m^2 x^4 + 2mn(x^3 + 2mp + n^2)x^2 + 2np + p^2$$

$f(x) = \mathfrak{G}(x) \cdot g(x)$  dan quyidagi sistemani hosil qilamiz:

$$\begin{cases} m^2 = 1 \\ 2mn = a \\ 2mp + n^2 = b \\ 2np = -8 \\ p^2 = 4 \end{cases}$$

Sistemadan  $m = \pm 1$  va  $p = \pm 2$  larni hosil qilsak, u quyidagi 4 ta sistemalarga ajraladi:

$$1. \begin{cases} m = 1 \\ p = 2 \\ n = -2 \\ a = -4 \\ b = 8 \end{cases} \quad 2. \begin{cases} m = 1 \\ p = -2 \\ n = 2 \\ a = 4 \\ b = 0 \end{cases} \quad 3. \begin{cases} m = -1 \\ p = 2 \\ n = -2 \\ a = 4 \\ b = 0 \end{cases} \quad 4. \begin{cases} m = -1 \\ p = -2 \\ n = 2 \\ a = -4 \\ b = 8 \end{cases}$$

Demak, agar  $a = -4$  va  $b = 8$  bo'lsa,  $g_1(x) = -x^2 + 2x - 2$  va  $g_2(x) = x^2 - 2x + 2$ ;

Agar  $a = 4$  va  $b = 0$  bo'lsa,  $g_1(x) = x^2 + 2x - 2$  va  $g_2(x) = -x^2 - 2x + 2$  bo'ladi.

**Misol.** Ozod hadi 7 ga bo'linadigan barcha  $f(x) \in Z[x]$  lar to'plami  $K$  halqa tashkil etishini tekshiring.

**Yechish.**  $f(x) = a_n x^n + \dots + a_1 x + 7a_0$ ,  $g(x) = b_m x^m + \dots + b_1 x + 7b_0$  va  $m \geq n$  bo'lsin. U holda

$$f(x) + g(x) = b_m x^m + \dots + (a_n + b_n)x^n + \dots + (a_1 + b_1)x + (7a_0 + 7b_0) =$$

$$= b_m x^m + \dots + (a_n + b_n)x^n + \dots + (a_1 + b_1)x + 7(a_0 + b_0);$$

$$f(x) - g(x) = (-b_m)x^m + \dots + (a_n - b_n)x^n + \dots + (a_1 - b_1)x + 7(a_0 - b_0);$$

$$f(x) \cdot g(x) = a_n b_m x^{n+m} + \dots + 7(a_1 b_0 + a_0 b_1)x + 7 \cdot 7 a_0 b_0.$$

Bundan  $f(x) + g(x)$ ,  $f(x) - g(x)$  va  $f(x) \cdot g(x)$  lar  $K$  to'plamning elementlari ekanligi kelib chiqadi.

Demak,  $K$   $Z[x]$  ning qism halqasi.

**Misol.**  $f(x) \in Z[x]$ ,  $\deg f(x) \leq 4$  uchun barcha  $\bar{a} \in Z_5$  da  $f(\bar{a}) = \bar{0}$  bo'lsa  $f(x)$

– nol ko'phad ekanligini isbotlang.

**Yechish.**  $f(x) = \bar{a}x^4 + \bar{b}x^3 + \bar{c}x^2 + \bar{d}x + \bar{e}$  bo'lsin.

U holda  $f(\bar{0}) = \bar{e} = \bar{0}$ ,

$$f(\bar{1}) = \bar{a} + \bar{b} + \bar{c} + \bar{d} + \bar{e} = \bar{0},$$

$$f(\bar{2}) = \bar{a} + 3\bar{b} + 4\bar{c} + 2\bar{d} + \bar{e} = \bar{0},$$

$$f(\bar{3}) = \bar{a} + 2\bar{b} + 4\bar{c} + 3\bar{d} + \bar{e} = \bar{0},$$

$$f(\bar{4}) = \bar{a} + 4\bar{b} + \bar{c} + 4\bar{d} + \bar{e} = \bar{0}.$$

$$\text{ya'ni, } \begin{cases} \bar{a} + \bar{b} + \bar{c} + \bar{d} = \bar{0}, \\ \bar{a} + 3\bar{b} + 4\bar{c} + 2\bar{d} = \bar{0}, \\ \bar{a} + 2\bar{b} + 4\bar{c} + 3\bar{d} = \bar{0}, \\ \bar{a} + 4\bar{b} + \bar{c} + 4\bar{d} = \bar{0}. \end{cases} \Leftrightarrow \begin{cases} \bar{a} + \bar{b} + \bar{c} + \bar{d} = \bar{0}, \\ 2\bar{b} + 3\bar{c} + \bar{d} = \bar{0}, \\ \bar{b} + 3\bar{c} + 2\bar{d} = \bar{0}, \\ 3\bar{b} + 3\bar{d} = \bar{0}. \end{cases} \Leftrightarrow \begin{cases} \bar{a} + \bar{b} + \bar{c} + \bar{d} = \bar{0}, \\ \bar{b} - \bar{d} = \bar{0}, \\ \bar{b} + 3\bar{c} + 2\bar{d} = \bar{0}, \\ \bar{b} + \bar{d} = \bar{0}. \end{cases}$$

$$\Leftrightarrow \bar{a} = \bar{b} = \bar{c} = \bar{d} = \bar{0}$$

Demak,  $f(x)$  – nol ko'phad.

**Misol.**  $f(x) = x^{19} + x^{17} + x^{13} + x^{11} + x^7 + x^5 - 6x^3$  ni  $g(x) = x^2 - 1$  ga  $Z[x]$  halqada bo'linishini isbotlang.

**Yechish.**

$$\begin{aligned} f(x) &= (x^{19} - x^{17}) + (2x^{17} - 2x^{15}) + (2x^{15} - 2x^{13}) + (3x^{13} - 3x^{11}) + (4x^{11} - 4x^9) + \\ &+ (4x^9 - 4x^7) + (5x^7 - 5x^5) + (6x^5 - 6x^3) = x^{17}(x^2 - 1) + 2x^{15}(x^2 - 1) + 2x^{13}(x^2 - 1) + \\ &+ 3x^{11}(x^2 - 1) + 4x^9(x^2 - 1) + 4x^7(x^2 - 1) + 5x^5(x^2 - 1) + 6x^3(x^2 - 1). \end{aligned}$$

$f(x)$  ko'phadlarning har bir hadi  $g(x)$  ga bo'linganligi uchun  $Z[x]$  halqada  $f(x) : g(x)$ .

**Misol.**  $R[x]$  da  $f(x) = (x-2)^{100} + (x-1)^{50} + 1$  ko'phadni  $g(x) = x^2 - 3x + 2$  ko'phadga bo'lgandagi qoldiqni toping.

**Yechish.** Qoldiqli bo'lish haqidagi teoreмага asosan  $f(x) = g(x)h(x) + r(x)$  va  $\deg r(x) < 2$ , ya'ni  $r(x) = ax + b$ . Bundan

$$(x-2)^{100} + (x-1)^{50} + 1 = (x^2 - 3x - 2)h(x) + ax + b$$

$g(1) = g(2) = 0$  ekanligidan foydalanib  $x=1$  va  $x=2$  qiymatlarni tenglikka

qo'yamiz va quyidagi sistemani hosil qilamiz:

$$\begin{cases} a + b = 2 \\ 2a + b = 2 \end{cases} \Leftrightarrow \begin{cases} a = 0 \\ b = 2 \end{cases}$$

Demak,  $r(x) = 2$ .

**Misol.**  $f(x) = 4x^5 - 6x^3 + 2x^2 - 4$  ko'phadni  $g(x) = 2x^2 - 5x + 1$  ko'phadga  $Q[x]$  da bo'ling.

**Yechish.** Jadval tuzamiz:

	<b>4</b>	<b>0</b>	<b>-6</b>	<b>2</b>	<b>0</b>	<b>4</b>
2	4	-10	2			
-5		10	-25	5		
1			17	$-\frac{85}{2}$	$\frac{17}{2}$	
				$\frac{79}{2}$	$-\frac{395}{4}$	$\frac{79}{4}$
	2	5	$\frac{17}{2}$	$\frac{79}{4}$	$\frac{361}{4}$	$-\frac{95}{4}$

Demak,  $f(x) = g(x)\left(2x^3 + 5x^2 + \frac{17}{2}x + \frac{79}{4}\right) + \frac{361}{4}x - \frac{95}{4}$ .

**Misol.**  $R[x]$  da berilgan  $f(x) = 2x^7 + 4x^5 - x^4 - 6x^3 - x^2 + 3x - 2$  ko'phadni  $g(x) = 2x^3 - 1$  ikkihadga bo'ling.

**Yechish.**

2	2	0	4	-1	-6	-1	3	-2
-1				-1	0	-2	0	3
	1	0	2	0	-3	1	3	-5

Demak,  $f(x) = g(x)(x^4 + 2x^2 - 3) + (x^2 + 3x - 5)$

**Misol.**  $f(x) = 2x^7 + 4x^5 - x^4 - 6x^3 - x^2 + 3x - 2$  ko'phadni  $g(x) = x^2 + 1$

ikkihadning darajalari bo'yicha yoying.

	2	0	4	-1	-6	-1	3	-2
1			2	0	2	-1	-8	0
	2	0	2	-1	-8	0	11	-2
1			2	0	0	-1		
	2	0	0	-1	-8	1		
1			2	0				
	2	0	-2	-1				
1								
	2	0						

Demak,  $f(x) = 2x(x^2 + 1)^3 + (-2x - 1)(x^2 + 1)^2 + (-8x + 1)(x^2 + 1) + 11x - 2$

**Misol.**  $C[x]$ da berilgan.  $f(x) = (x + a + b)^{2005} - x^{2005} - a^{2005} - b^{2005}$  ning

$g_1(x) = x + a$  va  $g_2(x) = x + b$  ikkihadlarga bo'linishini isbotlang.

**Isbot.**  $f(x)$  ko'phadning  $x = -a$  va  $x = b$  dagi qiymatlarini topamiz:

$$f(-a) = b^{2005} + a^{2005} - a^{2005} - b^{2005} = 0$$

$$f(-b) = a^{2005} + b^{2005} - a^{2005} - b^{2005} = 0$$

Bezu teoremasiga ko'ra  $f(x)$  ko'rhad  $g_1(x)$  va  $g_2(x)$  larga bo'linadi.

**Misol.**  $Q[x]$  halqada  $f(x) = 3x^2 - 6x^2 + 5x - 10$  va  $g(x) = 2x^3 - 4x^2 + 3x - 6$

ko'phadning EKUB, EKUKlarini toping.

**Yechish.**  $2f(x) - 3g(x) = x - 2$  va  $f(2) = g(2) = 0$  dan  $(f, g) = x - 2$  kelib chiqadi.

$$[f, g] = \frac{f(x)g(x)}{(f, g)} \text{ ni e'tiborga olsak, } [f, g] = (3x^3 - 6x^2 + 5x + 10)(2x^2 + 3)$$

hosil bo'ladi.

**Misol.**  $Z_7[x]$  halqada  $f(x) = x^4 + \bar{4}x^3 + \bar{4}x^2 + \bar{6}x + \bar{6}$  va  $g(x) = x^3 - \bar{1}$

ko'phadlarning EKUBini chiziqli ifodasini toping.

**Yechish:**  $f(x)$  va  $g(x)$  larning EKUBini topamiz.

$$f(x) = g(x)h_1(x) + r_1(x) \text{ dagi } h_1(x) = x + \bar{4}, \quad r_1(x) = \bar{4}x^2 + \bar{3};$$

$$g(x) = r_1(x)h_2(x) + r_2(x) \text{ dagi } h_2(x) = \bar{2}x; \quad r_2(x) = -\bar{6}x - \bar{1} = x + \bar{6}$$

$$r_1(x) = r_2(x)h_3(x) \text{ da } h_3(x) = \bar{4}x + \bar{3}.$$

Demak,  $(f, g) = x + \bar{6} = r_2(x)$  ekan.

Evklid algoritmi yordamida

$$\begin{aligned} r_2(x) &= g(x) - r_1(x)h_2(x) = g(x) - (f(x) - g(x)h_1(x))h_2(x) = \\ &= f(x)(-h_2(x)) + g(x)(\bar{1} + h_1(x)h_2(x)) \end{aligned}$$

ifodani hosil qilamiz. Unda  $u(x) = -h_2(x) = -\bar{2}x = \bar{5}x$  va

$$v(x) = \bar{1} + h_1(x)h_2(x) = \bar{1} + (x + \bar{4})\bar{2}x = \bar{2}x^2 + x + \bar{1} \text{ belgilashlarni kiritsak}$$

$$(f, g) = f(x)u(x) + g(x)v(x) \text{ hosil bo'ladi.}$$

**Misol.**  $Q[x]$  halqaning  $u(x) = (x^2 - 1) + v(x)(x^2 + 2x + 1) = x^3 + 1$  tenglamani qanoatlantiruvchi  $u(x)$  va  $v(x)$  ko'phadlarini toping.

**Yechish.** Berilgan tenglamada shakl almashtirish bajaramiz:

$$u(x)(x-1)(x+1) + v(x)(x+1)^2 = (x+1)(x^2 - x + 1) \text{ va}$$

$$u(x)(x-1) + v(x)(x+1) = x^2 - x + 1 \text{ ga ega bo'lamiz.}$$

$$g_1(x) = x - 1 \text{ va } g_2(x) = x + 1 \text{ ko'phadlar uchun } (g_1, g_2) = 1 \text{ bo'lganligi uchun}$$

EKUBni  $-\frac{1}{2}g_1(x) + \frac{1}{2}g_2(x) = 1$  ko'rinishida ifodalash mumkin.

Hosil bo'lgan ifodani ikkala tomonini  $(x^2 - x + 1)$  ga ko'paytirsak

$$-\frac{1}{2}(x^2 - x + 1)g_1(x) + \frac{1}{2}(x^2 - x + 1)g_2(x) = x^2 - x + 1 \text{ ga ega bo'lamiz. Bundan}$$

berilgan tenglamani qanoatlantiruvchi  $u(x)$  va  $v(x)$  larning xususiy qiymatlari

$$u_0(x) = -\frac{1}{2}(x^2 - x + 1)$$

$$v_0(x) = \frac{1}{2}(x^2 - x + 1)$$

kelib chiqadi.

Demak, berilgan tenglamani qanoatlantiruvchi  $u(x)$  va  $v(x)$  lar quyidagi

ko'rinishda bo'ladi:

$$u(x) = -\frac{1}{2}(x^2 - x + 1) + (x + 1)h(x)$$

$$v(x) = \frac{1}{2}(x^2 - x + 1) - (x - 1)h(x)$$

bu yerda  $h(x) \in Q[x]$ .



### Misol va mashqlar

1. Quyidagi ko'phadlarning qaysilari teng?

$$f_1(x) = 5^{-\log_5 2} x^3 - \sqrt{4 - 2\sqrt{3}} x^2 + 2x - \operatorname{tg} \frac{\pi}{4};$$

$$f_2(x) = \left(1 - \sin \frac{\pi}{6}\right) x^2 + (-1)^2 + 2 - i;$$

$$f_3(x) = \frac{1}{2} x^3 + (\sqrt{3} - 1) x^2 - 2i^2 x - i^4;$$

$$f_4(x) = \cos \frac{\pi}{3} x^3 + 2i^3 x^2 + i^7 + 2;$$

$$f_5(x) = \left(\frac{1}{6} + \operatorname{tg}^2 \frac{\pi}{6}\right) x^3 + \left(\operatorname{tg} \frac{\pi}{3} - 1\right) x^2 - 4 \cos^2 \frac{\pi}{3} x - 2.$$

2.  $a, b, c$  larning qanday qiymatlarida  $Z[x]$  ning quyidagi ko'phadlari teng:

2.1.  $f(x) = ax^2(x+1) + b(x^2+1)(x-6) + cx(x^2+1)$  va  $g(x) = x^2 + 5x + 6$

2.2.  $f(x) = ax(x^2+3) + bx(x-1) + c(x+1)$  va  $g(x) = 2x^3 + 5x^2 + 8x + 7$ .

3. Berilgan halqada  $f(x) = \mathbb{C}(x)$  shartni qanoatlantiruvchi  $g(x)$  ko'phadni

toping:

3.1.  $f(x) = x^4 + 6x^3 + 11x^2 + ax + 1$ ,  $z[x]$ ;

3.2.  $f(x) = \bar{4}x^4 + \bar{a}x^2 - \bar{1}$   $z_5[x]$ ;

3.3.  $f(x) = 9x^4 - 12x^3 + 16x^2 - 8x + a$ ,  $z[x]$ .

4.  $Z[x]$  halqa uchun  $f(x) = \mathbb{C}(x)$  shart o'rinli bo'lgan barcha  $a$  va  $b$  butun

sonlarni va  $g(x)$  ni toping:  $f(x) = x^4 + ax^3 + bx - 8x + 1$

5.  $\frac{x+5}{(x-1)(x-2)(x-3)} = \frac{a}{x-1} + \frac{b}{x-2} + \frac{c}{x-3}$  shartni qanoatlantiruvchi  $a, b, c$

butun sonlarni toping.

6. Berilgan ko'phadlar berilgan halqalarda funktsional tengligini isbotlang:

6.1.  $f(x) = x^3 - 2x^2$  va  $g(x) = x^2 - 2x$ ,  $Z_3[x]$ ;

6.2.  $f(x) = 2x^2 + x + 1$  va  $g(x) = 2x^3 + 2x^2 + 2x + 1$ ,  $Z_3[x]$ ;

6.3.  $f(x) = x^{10} + 4x^2$  va  $g(x) = 4x^5 + x$ ,  $Z_5[x]$ ;

7.  $f(x)$  ko'phad  $g(x)$  ko'phadga berilgan halqada bo'linadimi?

7.1.  $f(x) = (3x^2 - 2x - 1)(10x^3 + 10x - 20) + 2x^4 - 2$

$g(x) = 5x^2 - 5$ ,  $Z[x]$  va  $Q[x]$ ;

7.2.  $f(x) = x^2 + x + 1$ ,  $g(x) = x - 1$ ,  $Z_3[x]$ ;

7.3.  $f(x) = x^{100} + x^{98} + x^{96} + \dots + x^4 + x^2 + x - i$ ,  $g(x) = x^{2+1}$ ,  $C[x]$ .

8.  $f(x)$  ni  $g(x)$  ga bo'linishining zarur va etarli shartini aniqlang:

8.1.  $f(x) = x^3 + bx + c$ ,  $g(x) = x^2 + ax - 1$ ,  $R[x]$ ;

8.2.  $f(x) = x^3 + bx + c$ ,  $g(x) = x^2 + 1$ ,  $Z[x]$ ;

8.3.  $f(x) = x^4 + bx^2 + c$ ,  $g(x) = x^2 + ax + 1$ ,  $Z[x]$ .

9. Qoldiqni toping:

9.1.  $f(x) = x^{10000} + x^{1000} + x^{100} + x^{10} + x - 1$ ,  $g(x) = ix - 1$ ;  $\mathbb{C}[i][x]$ ;

9.2.  $f(x) = x^{30} + x^{26} + x^{20} + x^{15} + x^{10} + x + 1$ ,  $g(x) = x^5 - 1$ ;  $Z[x]$ ;

9.3.  $f(x) = x^{1982} + x^{991} + 1$ ,  $g(x) = x^2 - 1$ ,  $Z[x]$ ;

9.4.  $f(x) = x^{1982} + x + 1$ ,  $g(x) = x^2 - (1+i)x + i$ ;  $C[x]$ ;

9.5.  $f(x) = x^{100} + x^{99} - 2x^{98} - 3x^3 + 2x + 5$ ,  $g(x) = x^2 + x - 2$ ;  $Z[x]$ .

10. Qoldiqli bo'lishni bajaring:

10.1.  $f(x) = 3x^5 + x^4 - 10x^3 + 12x^2 + 10x - 8$ ,  $g(x) = 3x^2 + x - 1$ ;  $Q[x]$ ;



10.2.  $f(x) = (2i + 3)x^3 - 4ix + i - 2$ ;  $g(x) = x^2 + i$ ,  $C[x]$ ;

10.3.  $f(x) = \bar{4}x^3 + \bar{2}x^2 - x + 1$ ,  $g(x) = \bar{2}x + 3$ ;  $Z_5[x]$ ;

10.4.  $f(x) = 10x^7 - 36x^6 + 13x^5 + 38x^4 - 6x^3 + 3x^2 - 20x - 13$ ,  
 $g(x) = 2x^2 - 4x - 3$ ,  $R[x]$ .

11.  $Z[x]$  da  $f(x)$  ni  $g(x)$  ga bo'lganda  $r(x) = 3x^2 - 4x + 1$  qoldi. Agar  $\deg g(x) = 5$  bo'lsa, u holda  $f(x)$  ni  $g(x)$  ga bo'lgandagi qoldiqni toping.

12.  $R[x]$  da  $f(x)$  ni  $g(x)$  ga bo'lganda 3,  $f(x)$  ni  $g(x)$  ga bo'lganda 9 qoldiq qoldi.  $f(x)$  ni  $g(x)$  ga bo'lgandagi qoldiqni toping.

13. Berilgan halqada  $f(x)$  ni  $g(x)$  ga bo'ling:

13.1.  $f(x) = 10x^4 - 23x^3 + 26x^2 - 9x - 2$ ;  $g(x) = 2x - 3$ ;  $Z[x]$

13.2.  $f(x) = (2 + 2i)x^4 - 6x^3 + (2 - 4i)x^2 + (1 + 11i)x + 2 - 5i$ ;  
 $g(x) = (1 - i)x + 3i$ ;  $C[x]$

13.3.  $f(x) = 2x^5 + 12,5x^3 - 4x^2 + 5,5x - 2,5$ ;  $g(x) = 4x^2 + 1$ ;  $Q[x]$

13.4.  $f(x) = \bar{5}x^6 + \bar{5}x^5 - \bar{2}x^3 + \bar{3}x^2 - \bar{2}x + \bar{5}$ ;  $g(x) = \bar{6}x^3 + \bar{4}$ ;  $Z_7[x]$

14.  $f(x)$  ko'phadning  $x_0$  nuqtadagi qiymatini toping:

14.1.  $f(x) = x^4 - 3x^3 + 6x^2 - 10x + 16$ ;  $x_0 = 4$ ,  $Z[x]$ ;

14.2.  $f(x) = x^5 + (1 + 2i)x^4 - (1 + 3i)x^2 + 7$ ,  $x_0 = -2 - i$ ,  $C(x)$ ;

14.3.  $f(x) = x^5 + x^4 + \bar{3}x^2 + \bar{1}$ ,  $x_0 = \bar{3}$ ,  $Z_5[x]$ ;

14.4.  $f(x) = x^3 - (1 + \sqrt{2})x^2 + (1 + \sqrt{2})$ ,  $x_0 = 1 - \sqrt{2}$ ,  $Q[(\sqrt{2})][x]$

15.. Har qanday  $a \in K$  uchun  $f(x) \in K[x]$  ko'phad  $g(x) = x - a$  ikkihadga bo'linishini isbotlang.

15.1.  $f(x) = x^7 - x$ ;  $K = Z_7$ .

15.2.  $f(x) = x^{10} - x^5$ ;  $K = Z_5$ .

15.3.  $f(x) = x^p - x$ ;  $K = Z_p$ .

16.  $R[x]$  halqada  $n$  - toq natural sonlar uchun  $f(x) = (x+a+b)^4 - x^4 - a^4 - b^4$  ko'phad  $g_1(x) = x+a$  va  $g_2(x) = x+b$  ikkihadlarga bo'linishini isbotlang.

17.  $f(x)$  ko'phadni  $x-a$  darajalariga yoying:

17.1.  $f(x) = x^4 - 2x^3 + 3x^2 - 5x + 1, a=1; Q[x]$ .

17.2.  $f(x) = \bar{2}x^4 + x^3 + x^2 + \bar{2}, a=\bar{1}; Z_3[x]$ .

17.3.  $f(x) = x^5 - 3ix^3 - 4x^2 + 5ix - 1, a=-i; C[x]$ .

18. Berilgan ko'phadlarning EKUBini toping:

18.1.  $f(x) = x^3 + 3x^2 - 2, g(x) = x^3 + 3x^2 - x - 3;$

18.2.  $f(x) = x^4 + x^3 - 3x^2 - 2x - 2; g(x) = -x^3 + 3x^2 + 2x + 2;$

18.3.  $f(x) = 2x^3 + x^2 + 4x + 2, g(x) = 2x^3 + x^2 + 6x + 3.$

19. Evklid algoritmi yordamida berilgan ko'phadlar EKUBini toping.

19.1.  $f(x) = x^3 + x^2 - x - 6; g(x) = x^3 + x^2 - 10x - 6, Q[x];$

19.2.  $f(x) = x^4 + x^3 + x^2 + x + 1, g(x) = 4x^3 + 3x^2 + 2x + 1, Q[x];$

19.3.  $f(x) = x^3 + \bar{3}x^2 + \bar{2}x + \bar{1}, g(x) = x^3 + \bar{2}x^2 + x + \bar{2}, Z_5[x];$

19.4.  $f(x) = x^4 + 2ix^3 - 2x^2 - 2ix + 1; g(x) = x^3 + (i+1)x^2 + ix, C[x].$

20. Berilgan ko'phadlar EKUKini toping.

20.1.  $f(x) = 2x^3 + 7x^2 + 4x - 3, g(x) = x^3 + x^2 - 3x + 1, Q[x];$

20.2.  $f(x) = x^3 + \bar{6}x^2 + \bar{4}x + 1, g(x) = x^3 + x^2 + \bar{3}x - 4, Z_7[x];$

20.3.  $f(x) = x^3 - x^2 + 3x - 3, g(x) = x^4 + 2x^3 + 2x - 1, R[x];$

20.4.  $f(x) = x^4 + 2ix^3 - 2x^2 - 2ix + 1, g(x) = x^3 + (i+1)x^2 + ix, C[x].$

21. Berilgan ko'phadlar EKUBining chiziqli ifodasidagi  $u(x)$  va  $v(x)$  larni toping.

21.1  $f(x) = x^3 + 5x^2 + 6x + 2, g(x) = x^2 + 6x + 5; Q[x];$

21.2.  $f(x) = x^3 + \bar{3}x^2 + \bar{2}x + \bar{1}, g(x) = x^3 + \bar{2}x^2 + x + \bar{2}, Z_5[x];$

21.3.  $f(x) = 4x^4 - 2x^3 - 16x^2 + 5x + 9, g(x) = 2x^3 - x^2 - 5x + 4, Q[x].$

22.  $K[x]$  halqada  $f(x)u(x) + g(x)v(x) = \varphi(x)$  tenglamaning barcha yechimlarini toping.

22.1.  $f(x) = x^2 - 1$ ,  $g(x) = x^2 - 2x + 1$ ;  $\varphi(x) = x^3 - 1$ ,  $K = \mathcal{Q}$ ;

22.2.  $f(x) = x^3 - \bar{1}$ ,  $g(x) = x^2 + \bar{3}$ ,  $\varphi(x) = x^3 - \bar{2}x^2 + x$ ,  $K = \mathcal{Z}_5$ ;

23.  $C[x]$  halqada  $f(x)u(x) + g(x)v(x) + h(x)\varphi(x) = S(x)$  tenglama yechimga ega ekanligini tekshiring. Bu erda  $f(x) = x^4 + 2x^2 + 1$ ;  $g(x) = x^3 - x^2 + x - 1$ ;  $h(x) = x^2 + (i+1)x + i$ ;  $S(x) = x^2 + (i-1)x - i$ .

24.  $K$  maydon ustida berilgan ko'phadlar uchun quyidagi xossalarni isbotlang:

24.1.  $((f(x):\varphi(x)) \wedge (\varphi(x):\psi(x)) \Rightarrow (f(x):\psi(x))), (\varphi(x) \neq 0, \psi(x) \neq 0)$ .

24.2.  $(f_i(x):\varphi(x)) \Rightarrow (f_1(x) \pm f_2(x) \pm \dots \pm f_m(x)):\varphi(x) \ (i = \overline{1, m}), (\varphi(x) \neq 0)$ .

24.3.  $f_i(x) \ (i = \overline{1, m})$  ko'phadlarning kamida bittasi  $\varphi(x) \neq 0$  ga bo'linsa, u holda ularning ko'paytmasi ham  $\varphi(x)$  ga bo'linadi.

24.4. Agar  $f_i(x) \ (i = \overline{1, m})$  ko'phadlarning xar biri  $\varphi(x) \neq 0$  ga bo'linib,  $g_i(x)$  lar ixtiyoriy ko'phadlar bo'lsa, u holda  $(f_1(x)g_1(x) \pm f_2(x)g_2(x) \pm \dots \pm f_m(x)g_m(x)):\varphi(x)$  bo'ladi.

24.5. Har qanday  $f(x)$  ko'phad ixtiyoriy nolinch darajali ko'phadga bo'linadi.

24.6.  $f(x):\varphi(x) \Rightarrow f(x):a\varphi(x) \ (0 \neq a \in K \text{ maydon}, \varphi(x) \neq 0)$

24.7.  $f(x) \neq 0$  va  $\varphi(x) \neq 0$  ko'phadlar bir-biriga bo'linsa, u holda ular bir-biridan o'zgarmas  $a \neq 0$  ko'paytuvchi bilan farq qiladi.



### Takrorlash uchun savollar

1. Ko'phad darajasining xossalarini ayting.
2. Ko'phadni ikkihadga bo'lishni tushuntiring.
3. Ko'phad ildizi va uning xossalarini ayting.
4. Ko'phadlarning tengligi (algebraic, funksional).
5. Qoldiqli bo'lish haqidagi teoremani tushuntiring.
6. Evklid algoritmi qanday tuziladi?

### 31-§. Ko'p o'zgaruvchili ko'phadlar

**Asosiy tushunchalar:** ko'p o'zgaruvchili ko'phad, ko'phadning darajasi, bir jinsli ko'phad, leksikografik yozilgan ko'phad, simmetrik ko'phad, asosiy (elementar) simmetrik ko'phadlar, ko'phadlarning rezultanti,

Kamida ikkita o'zgaruvchiga bog'liq bo'lgan ko'phad ko'p o'zgaruvchili ko'phad deyiladi.

$n$  ta noma'lumli ko'phad  $x_1^{\alpha_1} x_2^{\beta_1} \dots x_n^{\gamma_1}$  ko'rinishdagi chekli sondagi hadlarning algebraik yig'indisidan iborat.

$n$  ta  $x_1, x_2, \dots, x_n$  o'zgaruvchili ko'phad  $f(x_1, x_2, \dots, x_n) = \sum_{i=1}^n a_i x_1^{\alpha_i} x_2^{\beta_i} \dots x_n^{\gamma_i}$  ko'rinishda bo'ladi. Bunda  $a_i \in K$ .

$n$  ta noma'lumli ko'phadning darajasi deb, bu ko'phaddagi qo'shiluvchilar darajalarining kattasiga aytiladi.

Barcha kushiluvchilarining darajalari bir xil bo'lgan ko'phadga bir jinsli ko'phad yoki forma deyiladi.

$f(x_1, x_2, \dots, x_n)$  ko'phad berilgan bo'lib, uning ikkita hadidan qaysi birida  $x_1$  ning darajasi katta bo'lsa, usha had yuqori had deb yuritiladi. Agar bu hadlardagi  $x_1$  ning darajasi teng bo'lib, qaysi birida  $x_2$  ning darajasi katta bo'lsa o'sha had yuqori deb xisoblanadi va x.k.

$f(x_1, x_2, \dots, x_n)$  ko'phadni birinchi o'rinda eng yuqori hadni, ikkinchi o'rinda qolgan hadlar orasida eng yuqori bo'lgan hadni va shu jarayon oxirgi had uchun yozilgan bo'lsa, u holda  $f(x_1, x_2, \dots, x_n)$  ko'phad leksikografik yozilgan deyiladi.

Agar ko'p noma'lumli ko'phaddagi ixtiyoriy ikkita noma'lumning o'rinlarini almashtirganda ko'phad o'zgarmasa, u holda bunday ko'phad simmetrik ko'phad deyiladi.

$x_1, x_2, \dots, x_n$  o'zgaruvchilardan tuzilgan



$x$	$y$	$z$	$\sigma_1$	$\sigma_2$	$\sigma_3$	$3x^3 + 3y^3 + 3z^3 + 5xyz = 3\sigma_1^3 + a\sigma_1\sigma_2 + b\sigma_3$
1	1	0	2	1	0	$6 = 24 + 2a$
1	1	-2	0	-3	-2	$-28 = -2b$

Demak,  $a = -9$ ,  $b = 14$ , ya'ni  $f(x, y, z) = 3\sigma_1^3 - 9\sigma_1\sigma_2 + 14\sigma_3 + 2\sigma_1^2 - 4\sigma_2$ .

**Misol.**  $x_1^2 x_2^2$  hadning orbitasini elementar simmetrik ko'phadlar yordamida ifodani toping.

**Yechish:**  $x_1^2 x_2^2$  hadning orbitasi yoki  $x_1^2 x_2^2$  had yordamida hosil qilingan monogen ko'phad  $o(x_1, x_2, \dots, x_n) = x_1^2 x_2^2 + \dots + x_{n-1}^2 x_n^2$  ko'rinishda bo'lib, uni topish uchun quyidagi jadvalni tuzamiz:

Yuqori had darajalari						Yuqori had	Hosil bo'lgan elementar ko'phadlar
$x_1$	$x_2$	$x_3$	$x_4$	...	$x_n$		
2	2	0	0	...	0	$x_1^2 x_2^2$	$\sigma_1^{2-2} \sigma_2^{2-0} = \sigma_2^2$
2	1	1	0	...	0	$ax_1^2 x_2 x_3$	$a\sigma_1^{2-1} \sigma_2^{1-1} \sigma_3^1 = a\sigma_1 \sigma_3$
1	1	1	1	...	0	$bx_1 x_2 x_3 x_4$	$b\sigma_1^{1-1} \sigma_2^{1-1} \sigma_3^{1-1} \sigma_4^1 = b\sigma_4$

Demak,  $o(x_1, x_2, \dots, x_n) = \sigma_2^2 + a\sigma_1 \sigma_3 + b\sigma_4$ .

O'zgaruvchilarga qiymatlar beramiz.

$x_1$	$x_2$	$x_3$	$x_4$	$x_5$	..	$x_n$	$\sigma_1$	$\sigma_2$	$\sigma_3$	$\sigma_4$	$\sigma_5$	..	$\sigma_n$	$o(x_1, x_2, \dots, x_n) = \sigma_2^2 + a\sigma_1 \sigma_3 + b\sigma_4$
1	1	1	0	0	..	0	3	3	1	0	0	..	0	$3 = 9 + 3a$
1	1	0	1	0	..	0	4	6	3	1	0	..	0	$6 = 36 + 16a + b$

Bundan  $a = -2$ ,  $b = 2$  qiymatlarni hosil qilamiz.

Demak,  $o(x_1, x_2, \dots, x_n) = \sigma_2^2 - 2\sigma_1 \sigma_3 + 2\sigma_4$ .

**Misol.**  $x \frac{19-x}{x+1} \left( x + \frac{19-x}{x+1} \right) = 84$  tenglamani yeching.

**Yechish:**  $u = x \frac{19-x}{x+1}$ ,  $v = x + \frac{19-x}{x+1}$  belgilashlarni kiritib  $\begin{cases} u + v = 19 \\ u \cdot v = 84 \end{cases}$

sistemani tuzamiz. Bu sistemaning  $u_1 = 7, v_1 = 12; u_2 = 12, v_2 = 7$  yechimlari mavjud. Ular yordamida

$$\begin{cases} x \frac{19-x}{x+1} = 7 \\ x + \frac{19-x}{x+1} = 12 \end{cases} \quad \begin{cases} x \frac{19-x}{x+1} = 12 \\ x + \frac{19-x}{x+1} = 7 \end{cases}$$

tenglamalar sistemasini hosil qilamiz. Ularning yechimlari  $x_{1/2} = 6 \pm \sqrt{29}$  va  $x_3 = 4, x_4 = 3$ .

$$P \text{ maydonda } f(x) = a_n x^n + a_{n-1} x^{n-1} + \dots + a_1 x + a_0,$$

$$g(x) = b_m x^m + b_{m-1} x^{m-1} + \dots + b_1 x + b_0$$

ko'phadlar berilgan va  $a_n b_m \neq 0 \wedge \alpha_1, \alpha_2, \dots, \alpha_n$  lar  $f(x)$  ning ildizlari bo'lsin.

$f(x), g(x)$  ko'phadlarning rezultanti  $R(f, g) = a_n^m g(\alpha_1) g(\alpha_2) \dots g(\alpha_n)$  dan iborat.

Agar,  $\beta_1, \beta_2, \dots, \beta_m - g(x)$  ning ildizlari bo'lsa, u holda

$$R(f, g) = a_n^m b_m^n \prod_{\substack{1 \leq i \leq n \\ 1 \leq j \leq m}} (\alpha_i - \beta_j)$$

$$R(g, f) = (-1)^{mn} R(f, g) \text{ lar o'rinli.}$$

Silvestr formulasi yordamida rezultant quyidagicha topiladi:

$$R(f, g) = \begin{vmatrix} a_n & a_{n-1} & \dots & a_1 & a_0 & 0 & \dots & 0 \\ 0 & a_n & \dots & a_2 & a_1 & a_0 & \dots & 0 \\ \dots & \dots & \dots & \dots & \dots & \dots & \dots & \dots \\ 0 & 0 & \dots & a_n & a_{n-1} & a_{n-2} & \dots & a_0 \\ b_m & b_{m-1} & \dots & b_1 & b_0 & 0 & \dots & 0 \\ \dots & \dots & \dots & \dots & \dots & \dots & \dots & \dots \\ 0 & 0 & \dots & b_m & b_{m-1} & b_{m-2} & \dots & 0 \end{vmatrix} \left. \begin{array}{l} \dots \\ \dots \\ \dots \end{array} \right\} m \left. \begin{array}{l} \dots \\ \dots \end{array} \right\} n$$

$f(x)$  ko'phadning diskriminanti:

$$D(f) = (-1)^{\frac{n(n-1)}{2}} a_n^{-1} R(f, f') \text{ yoki } D(f) = a_n^{2n-2} \prod_{1 \leq i < j \leq n} (\alpha_i - \alpha_j)^2.$$

**Misol.**  $f(x) = x^2 - 3x + 6$  va  $g(x) = x^3 + x^2 - x - 1$  uchun rezultantni toping.

**Yechish:** 1-usul. Berilgan  $f(x)$  ning ildizlari kompleks sonlar.  $g(x)$  ning ildizlari  $x = \pm 1$ .

$$R(f, g) = (-1)^{3 \cdot 2} R(g, f) = R(g, f) \text{ bo'lganligi uchun}$$

$$R(f, g) = f(-1)f(-1)f(1) = 10 \cdot 10 \cdot 4 = 400.$$

2-usul.  $\alpha_1$  va  $\alpha_2$   $f(x)$  ning ildizlari bo'lsin. U holda

$$R(f, g) = (\alpha_1^3 + \alpha_1^2 - \alpha_1 - 1)(\alpha_2^3 + \alpha_2^2 - \alpha_2 - 1) = (\alpha_1\alpha_2)^3 + (\alpha_1\alpha_2)^2(\alpha_1\alpha_2) - \alpha_1\alpha_2(\alpha_1^2 + \alpha_2^2) - (\alpha_1^3 + \alpha_2^3) + (\alpha_1\alpha_2)^2 - \alpha_1\alpha_2(\alpha_1 + \alpha_2) - (\alpha_1^2 + \alpha_2^2) + (\alpha_1 + \alpha_2) + 1$$

Viet formulalariga ko'ra

$$\alpha_1 + \alpha_2 = 3 \text{ va } \alpha_1\alpha_2 = 6 \text{ bo'lib,}$$

$$\alpha_1^2 + \alpha_2^2 = (\alpha_1 + \alpha_2)^2 - 2\alpha_1\alpha_2 = 3 \text{ va}$$

$$\alpha_1^3 + \alpha_2^3 = (\alpha_1 + \alpha_2)(\alpha_1 + \alpha_2)^2 - 3\alpha_1\alpha_2 = -27.$$

Demak,  $R(f, g) = 400$ .

3-usul.

$$R(f, g) = \begin{vmatrix} 1 & -3 & 6 & 0 & 0 \\ 0 & 1 & -3 & 6 & 0 \\ 0 & 0 & 1 & -3 & 6 \\ 1 & 1 & -1 & -1 & 0 \\ 0 & 1 & 1 & -1 & -1 \end{vmatrix} = \dots = 400$$

$f(x)$  ko'phad karrali ildizga ega bo'lishi uchun  $R(f, f') = 0$  bo'lishi zarur va etarli.

Ikki o'zgaruvchili yuqori darajali tenglamalar sistemasini resultant yordamida yechish mumkin.

**Misol.** 
$$\begin{cases} y^2 - y + x^2 - 3x = 0 \\ y^2 + (11 - 6x)y - x^2 + 7x - 12 = 0 \end{cases} \text{ sistemaning yechimlarini toping.}$$

**Yechish:** Sistemani  $y$  o'zgaruvchiga nisbatan qaraymiz va uning resultantini tuzamiz:



$$R(x) = \begin{vmatrix} 1 & -1 & x^2 - 3x & 0 \\ 0 & 1 & -1 & x^2 - 3x \\ 1 & 11 - 6x & x^2 + 7x - 12 & 0 \\ 0 & 1 & 11 - 6x & -x^2 + 7x - 12 \end{vmatrix} \stackrel{'''}{=} =$$

$$= 2x(x-2)(20x^2 - 100x + 120) = 40x(x-2)^2(x-3)$$

Bundan  $x_1 = 0$ ,  $x_2 = 2$ ,  $x_3 = 0$  yechimlarni topamiz.  $x$  o'zgaruvchining qiymatlarini sistemaga qo'yib  $y$  ning qiymatlarini topamiz.

- 1)  $x = 0$  da  $y = 1$  bo'lib,  $(0;1)$  yechim.
- 2)  $x = 2$  da  $y = -1 \wedge y = 2$  bo'lib,  $(2;-1) \wedge (2;2)$  yechimlar.
- 3)  $x = 3$  da  $y = 0$  bo'lib,  $(3,0)$  yechim.



### Misol va mashqlar

1. Berilgan ko'phadlarni kanonik shaklga keltiring:

1.1.  $f(x, y) = (x - y)^2(x^2 + xy + y^2)(x + 2y) + x^2 - 1$

1.2.  $f(x, y) = (x - y)(xy - z)(x - z)xyz$ .

2. Berilgan ko'phadlarni leksiografik tartibda yozing va uning yuqori hadini toping:

2.1.  $f(x, y, z) = (\bar{2}x + \bar{3}y)^2 z - x(y + z - \bar{3}xz)$ ,  $Z_5[x, y, z]$ .

2.2.  $f(x, y, z, t) = (x + y)(z + y) + \bar{2}x(y + t + \bar{1}) + (y + z)^3$ ,  $Z_3[x, y, z, t]$ .

3. Quyidagi ko'phadlarni simmetrik ko'phadga to'ldiring:

3.1.  $f(x, y) = x^2 + 2y$ .

3.2.  $f(x, y) = x^3 + x^2y + xy$ .

3.3.  $f(x, y, z) = x^3 + 2xy + 2yz + 5$ .

3.4.  $f(x, y, z) = (x + y)^2 + 2xz + xyz$ .

4. Quyidagi ko'phadlarning yuqori hadini toping:

4.1.  $f(x_1, y_2) = 5\zeta_1^2 \zeta_2 \zeta_3$ .

4.2.  $f(x_1, y_2) = 5\zeta_1^2 + 2\zeta_2 \zeta_3 - 3\zeta_3^2$ .

5. Quyidagi ko'phadlarni elementar ko'phadlar yordamida ifodalang:

5.1.  $f(x, y) = x^3y + y^3x + 2x^2 + 2y^2$ .

5.2.  $f(x, y) = 2x^4y - 5x^2y + 2xy^4 - 5xy^2$ .

5.3.  $f(x, y, z) = x^2y + xy^2 + x^2z + xz + y^2z + yz^2$ .

5.4.  $f(x, y, z) = x^4 + y^4 + z^4 - 2x^2y^2 - 2x^2z^2 - 2y^2z^2$ .

5.5.  $f(x, y, z, t) = (xy + zt)(xz + yt)(xt + yz)$ .

5.6.  $f(x, y, z) = (xy + z)(xz + y)(yz + x)$ .

6. Agar  $n \in \mathbb{N}$  uchun  $S_n(x, y) = x^n + y^n$  bo'lsa, barcha  $k > 2$  uchun

$S_k = \zeta_1 S_{k-1} - \zeta_2 S_{k-2}$  ekanligini isbotlang.

7. 6-misoldagi formula yordamida quyidagilarni o'rinli ekanligini tekshiring:

7.1.  $S_2 = \zeta_1^2 - 2\zeta_2$ .

7.2.  $S_3 = \zeta_1^3 - 3\zeta_1\zeta_2$ .

7.3.  $S_4 = \zeta_1^4 - 4\zeta_1^2\zeta_2 + 2\zeta_2^2$ .

7.4.  $S_7 = \zeta_1^7 - 7\zeta_1^5\zeta_2 + 14\zeta_1^3\zeta_2^2 - 7\zeta_1\zeta_2^3$ .

8. Agar  $n \in \mathbb{N}$  uchun  $S_n(x, y, z) = x^n + y^n + z^n$  bo'lsa, barcha  $k > 3$  uchun

$S_k = \sigma_1 S_{k-1} - \sigma_2 S_{k-2} + \sigma_3 S_{k-3}$  ekanligini isbotlang.

9. 8-misoldan foydalanib quyidagilar o'rinli ekanligini tekshiring:

9.1.  $S_3 = \sigma_1^3 - 3\sigma_1\sigma_2 + 3\sigma_3$ .

9.2.  $S_4 = \sigma_1^4 - 4\sigma_1^2\sigma_2 + 2\sigma_2^2 + 4\sigma_1\sigma_3$ .

9.3.  $S_5 = \sigma_1^5 - 5\sigma_1^3\sigma_2 + 5\sigma_1\sigma_2^2 + 5\sigma_1^2\sigma_3 - 5\sigma_2\sigma_3$ .

9.4.  $S_6 = \sigma_1^6 - 6\sigma_1^4\sigma_2 + 9\sigma_1^2\sigma_2^2 - 2\sigma_2^3 + 6\sigma_1^3\sigma_3 - 12\sigma_1\sigma_2\sigma_3 + 3\sigma_3^2$ .

10. Berilgan ratsional kasrlar surat va mahrajini elementar simmetrik

ko'phadlar orqali ifodalab qiymatini toping:

10.1.  $\frac{f(x, y)}{g(x, y)} = \frac{(x - y)^4}{x + y}$  va  $\zeta_1 = 2$ ,  $\zeta_2 = 1$ .

$$10.2. \frac{f(x, y, z)}{g(x, y, z)} = \frac{1}{y} + \frac{1}{z} + \frac{1}{x} + \frac{2}{xy} + \frac{2}{xz} + \frac{2}{yz} \text{ va } \zeta_1 = 0, \zeta_2 = 1, \zeta_3 = 2.$$

11. Quyidagi hadlar orbitasini elementar simmetrik ko'phadlar yordamida ifodalang:

$$1.1. x_1^3 x_3, P[x_1, x_2, x_3].$$

$$1.2. x_1 x_2 x_3, P[x_1, x_2, x_3, x_4].$$

$$1.3. x_1^3, P[x_1, x_2, \dots, x_n]$$

12. Isbotlang:

$$12.1. x^4 + y^4 + (x - y^4) = 2(x^2 + xy + y^2)^2.$$

$$12.2. (x + y)^3 + 3xy(1 - x - y) - 1 = (x + y - 1)(x^2 + y^2 - xy + x + y + 1).$$

$$12.3. x(y + z)^2 + y(x + z)^2 + z(x + y)^2 = (y + z)(x + z)(x + y) + 4xyz.$$

$$12.4. (xy + xz + yz)^3 + (x^2 - yz)^2 + (y^2 - zx)^2 + (z^2 - xy)^2 = (x^2 + y^2 + z^2)^2.$$

13. Agar  $x + y + z = 0$  bo'lsa, quyidagi tengliklarni isbotlang:

$$13.1. x^4 + y^4 + z^4 = 2(xy + xz + yz)^2.$$

$$13.2. 2(x^4 + y^4 + z^4) = (x^2 + y^2 + z^2)^2.$$

$$13.3. 2(x^5 + y^5 + z^5) = 5xyz(x^2 + y^2 + z^2).$$

14. Berilgan ko'phadlar rezultantini hisoblang:

$$1.1. f(x) = 6x^2 + x - 2, g(x) = 3x^2 - 4x + 2.$$

$$1.2. f(x) = x^4 - 2x^2 + 3, g(x) = x^2 - x + 1.$$

$$1.3. f(x) = x^2 - 2x + 2, g(x) = 2x^2 + x - 5.$$

$$1.4. f(x) = x^3 + 2x^2 + 4x + 1, g(x) = 3x^2 + 4x + 4.$$

15.  $a$  ning qanday qiymatlarida berilgan ko'phadlar umumiy ildizga ega:

$$15.1. f(x) = 2x^2 + ax - 3, g(x) = ax^2 + x - 2.$$

$$15.2. f(x) = x^3 - 5x^2 + 4ax - 4, g(x) = 3x^2 - 5ax + 8.$$

$$15.3. f(x) = x^3 - ax + 2, g(x) = x^2 + ax + 2.$$

$$15.4. f(x) = x^3 + ax^2 - 9, g(x) = x^3 + ax - 3.$$

16. Berilgan ko'phadlar diskriminantini hisoblang:

16.1.  $f(x) = x^3 + 6x + 2$ .

16.2.  $f(x) = x^3 - 9x^2 + 21x - 5$ .

16.3.  $f(x) = x^5 + 2$ .

16.4.  $f(x) = ax^2 + bx + c$ .

16.5.  $f(x) = x^3 + px + q$ .

16.6.  $f(x) = x^3 + ax^2 + bx + c$ .

17. Isbotlang:

17.1.  $R(f, g_1 \pm g_2) = R(f_1g_1) \pm R(f_1g_2)$ ,  $\deg f = 1$ .

17.2.  $R(f, g_1 \cdot g_2) = R(f_1g_1) \cdot R(f_1g_2)$ .

17.3.  $R(f_1 \cdot f_2, g_1 \cdot g_2) = R(f_1g_1) \cdot R(f_1g_2) \cdot R(f_2, g_1) \cdot R(f_2g_2)$ .

17.4.  $D((x-a) \cdot f(x)) = D(f(x)) \cdot (f(a))^2$ .

17.5.  $D(f \cdot g) = D(f) \cdot D(g) \cdot (R(f, g))^2$ .

18.  $a$  ning qanday qiymatlarida ko'phad karrali ildizga ega?

18.1.  $f(x) = x^3 - 3x + a$ .

18.2.  $f(x) = x^4 - 4x + a$ .

18.3.  $f(x) = 4x^3 - ax + 1$ .

18.4.  $f(x) = x^3 + (2-3i)x^2 - ax - 2$ .

19. Tenglamalar sistemasini yeching:

19.1. 
$$\begin{cases} x^2 + 2y^2 = 17 \\ 6x^2 - xy - 12y^2 = 0 \end{cases}$$

19.2. 
$$\begin{cases} y^2 - 5y + 4x - 4 = 0 \\ 2y^2 + y - x^2 + 1 = 0 \end{cases}$$

19.3. 
$$\begin{cases} 5x^2 - 5y^2 - 3x + 9y = 0 \\ 5x^3 + 5y^3 - 15x^2 - 13xy - y^2 = 0 \end{cases}$$

$$19.4. \begin{cases} (y-1)x^2 + xy - 3 = 0 \\ (y-1)x^2 - 2x + y - 1 = 0 \end{cases}$$

20.  $R$  maydonida quyidagi sistemalarni yeching:

$$20.1. \begin{cases} x^3 + y^3 = 35 \\ x + y + 5 \end{cases}$$

$$20.2. \begin{cases} x^2 + xy + y^2 = 49 \\ x^4 + x^{2y} + y = 931 \end{cases}$$

$$20.3. \begin{cases} x + y + z = 1 \\ x^2 + y^2 + z^2 = 9 \\ x^3 + y^3 + z^3 = 1 \end{cases}$$

$$20.4. \begin{cases} x - y + z = 6 \\ x^2 + y^2 + z^2 = 14 \\ x^3 - y^3 + z^3 = 36 \end{cases}$$

$$20.5. \begin{cases} \sqrt{x} + \sqrt{y} = 9 \\ \sqrt[3]{x} + \sqrt[3]{y} = 5 \end{cases}$$

$$20.6. \begin{cases} \sqrt{\frac{x}{y}} + \sqrt{\frac{y}{x}} = \frac{61}{\sqrt{xy}} + 1 \\ \sqrt[4]{x^3y} + \sqrt[4]{xy^3} = 78 \end{cases}$$

21. Quyidagi tenglamalarni yeching.

$$21.1. x + \sqrt{17-x^2} + x\sqrt{17-x^2} = 9.$$

$$21.2. \sqrt[3]{10-x} - \sqrt[3]{3-x} = 1.$$

$$21.3. \sqrt[4]{8-x} + \sqrt[4]{89+x} = 5.$$

$$21.4. \sqrt[4]{78 + \sqrt[3]{24 + \sqrt{x}}} - \sqrt[4]{84 - \sqrt[3]{30 - \sqrt{x}}} = 0.$$



### Takrorlash uchun savollar

1. Ko'p o'zgaruvchili ko'phadlar halqasi.

2. Ko'phad darajasi, xossalari.
3. Ko'phad hadlarining leksikografik tartibi.
4. Simmetrik ko'phadlar.
5. Ikki ko'phad rezultanti.
6. Ikki o'zgaruvchili yuqori darajali tenglamalar.

## □ 32-§. Maydon ustida ko'phadlar

**Asosiy tushunchalar:** keltiriladigan ko'phad, keltirilmaydigan ko'phad,

Agar  $F$  maydon ustida berilgan va darajasi nolga teng bo'lmagan  $f(x)$  ko'phadni shu maydon ustidagi va darajalari  $f(x)$  ning darajasidan kichik ikkita  $g(x)$ ,  $h(x)$  ko'phadlar ko'paytmasi shaklida ifodalash mumkin bo'lsa, u holda  $f(x)$  ko'phadni  $F$  maydon ustida keltiriladigan ko'phad, aksincha, agar bunday ko'paytma shaklida ifodalash mumkin bo'lmasa, u holda  $f(x)$  ni  $F$  maydon ustida keltirilmaydigan ko'phad deyiladi.

Algebraning asosiy teoremasi. Darajasi 1 dan kichik bo'lmagan kompleks koeffitsientli xar qanday ko'phad kamida bitta kompleks ildizga ega.

Agar  $d(x)$  ko'phad  $f(x)$  va  $\varphi(x)$  ko'phadlarning umumiy bo'luvchisi bo'lib,  $d(x)$  ko'phad  $f(x)$  va  $\varphi(x)$  larning ixtiyoriy umumiy bo'luvchisiga bo'linsa, u holda  $d(x)$  bo'luvchini  $f(x)$  va  $\varphi(x)$  ko'phadlarning eng katta umumiy bo'luvchisi (EKUB) deyiladi va uni  $(f(x);\varphi(x))$  ko'rinishda belgilanadi.

$f(x)=a_0+a_1x+\dots+a_nx^n$ ,  $f(y)=a_0+a_1y+\dots+a_ny^n$  bo'lsin.

$$f(x)-f(y)=\sum_{k=1}^n a_k(x^k-y^k)=(x-y)\sum_{k=1}^n a_k(x^{k-1}+x^{k-2}y+\dots+y^{k-1})=(x-y)F(x;y),$$

bu erda  $F(x;y)=\sum_{k=1}^n a_k(x^{k-1}+x^{k-2}y+\dots+y^{k-1})$ . Aytaylik  $x=y$  bo'lsin. U holda

$$F(x;x)=\sum_{k=1}^n ka_kx^{k-1}=a_1+2a_2x+\dots+na_nx^{n-1}$$
 bo'lib,  $F(x;x)$  ni  $f(x)$  ko'phadning formal

xosilasi deyiladi va uni  $f^l(x)$  yoki  $f'$  orqali belgilanadi.

$f(x)=a_0x^n+a_1x^{n-1}+\dots+a_{n-1}x+a_n$  ko'phadni  $x$ -s ning darajalari buyicha

$$f(x) = f(c) + f'(c)(x-c) + \frac{f''(c)}{2!}(x-c)^2 + \dots + \frac{f^{(n)}(c)}{n!}(x-c)^n$$

ko'rinishda yoziladi.

Kompleks sonlar maydoni ustida  $f(z) = z^n + c_1 z^{n-1} + \dots + c_{n-1} z + c_n$  ko'phad berilgan bo'lib,  $\alpha_1, \alpha_2, \dots, \alpha_n$  lar  $f(z)$  ko'phadning ildizi bo'lsa, u holda ushbu

$$\begin{cases} c_1 = -(\alpha_1 + \alpha_2 + \dots + \alpha_n); \\ c_2 = \alpha_1 \alpha_2 + \alpha_1 \alpha_3 + \dots + \alpha_{n-1} \alpha_n; \\ c_3 = -(\alpha_1 \alpha_2 \alpha_3 + \alpha_1 \alpha_2 \alpha_4 + \dots + \alpha_{n-2} \alpha_{n-1} \alpha_n); \\ \dots \\ c_n = (-1)^n \alpha_1 \alpha_2 \dots \alpha_n \end{cases}$$

munosabatlar o'rinni bo'ladi.

Kompleks sonlar maydoni C ustidagi ushbu  $ax^3 + bx^2 + cx + d = 0$  ( $a \neq 0$ )

ko'rinishdagi tenglama 3-darajali bir noma'lumli tenglama deyiladi. Uning xar ikki

qismini  $a$  ga bo'lib 
$$x^3 + \frac{b}{a}x^2 + \frac{c}{a}x + \frac{d}{a} = 0$$

tenglamani xosil qilamiz. Unda  $x = y - 3\frac{b}{a}$  almashtirish bajarib,

soddalashtirgandan so'ng  $y^3 + ry + q = 0$  tenglamani xosil qilamiz. Bunda

$y = u + v$  almashtirishdan so'ng  $u$  va  $v$  larni shunday tanlab olamizki, natijada

$3uv + r = 0$  shart bajarilsin. U holda

$$\begin{cases} u^3 + v^3 = -q \\ u^3 v^3 = -\frac{p^3}{27} \end{cases}$$

sistemaga ega bo'lamiz. Sistemadan ko'rinadiki  $u^3$  va  $v^3$  lar Viet teoremasiga

ko'ra qandaydir  $z^2 + qz - \frac{p^3}{27} = 0$  tenglamaning ildizi bo'ladi. Bu kvadrat tenglamani

yechib  $z_1 = u^3$  dan  $u = \sqrt[3]{-\frac{q}{2} + \sqrt{\frac{q^2}{4} + \frac{p^3}{27}}}$ ,  $v = \sqrt[3]{-\frac{q}{2} - \sqrt{\frac{q^2}{4} + \frac{p^3}{27}}}$  larni xosil qilamiz.  $u$

va  $v$  ning xar biriga uchta qiymat,  $u$  o'zgaruvchi uchun esa to'qqizta qiymat topiladi.

Agar  $u$ ,  $\mathcal{E}u$ ,  $\mathcal{E}^2u$  (bunda  $\mathcal{E}$  son 1 dan chiqarilgan 3-darajali ildiz)  $z_1$  ning uchinchi darajali ildizlarining qiymatlari bo'lsa, unga mos  $z_2$  ning uchinchi darajali ildizlari qiymatlari  $v$ ,  $\mathcal{E}^2v$ ,  $\mathcal{E}v$  bo'ladi. Natijada keltirilgan tenglama  $y_1=u+v$ ,  $y_2=\mathcal{E}u+\mathcal{E}^2v$ ,  $y_3=\mathcal{E}^2u+\mathcal{E}v$  ildizlarga ega bo'lib, unda  $\mathcal{E}=-\frac{1}{2}+i\frac{\sqrt{3}}{2}$  bo'lgani uchun  $y_1=u+v$ ,  $y_2=-\frac{1}{2}(u+v)+i\frac{\sqrt{3}}{2}(u-v)$ ,  $y_3=-\frac{1}{2}(u+v)-i\frac{\sqrt{3}}{2}(u-v)$  bo'ladi. Bu erda  $x=y-\frac{3\epsilon}{a}$  ni e'tiborga olib berilgan tenglamaning  $x_1=y_1-\frac{3\epsilon}{a}$ ,  $x_2=y_2-\frac{3\epsilon}{a}$ ,  $x_3=y_3-\frac{3\epsilon}{a}$  ildizlari topiladi.

Kub tenglamani bu usulda echish uni Kardano usuli bilan echish deyiladi.

Agar  $x^3+px+q=0$  tenglamada  $r$ ,  $q$  lar haqiqiy sonlar bo'lib,  $\Delta=\frac{q^2}{4}+\frac{p^3}{27}$

bo'lsa, u holda quyidagi mulohazalar o'rinli:

1) Agar  $\Delta>0$  bo'lsa, tenglama bitta haqiqiy va ikkita o'zaro qo'shma mavxum ildizlarga ega bo'ladi;

2) Agar  $\Delta=0$  bo'lsa, tenglamaning barcha ildizlari haqiqiy va kamida bitta ildizi karrali bo'ladi;

Agar  $\Delta<0$  bo'lsa, tenglamaning barcha ildizlari haqiqiy va turlicha

Agar  $a$  butun son koeffitsientlari butun bo'lgan

$a_0x^n+a_1x^{n-1}+\dots+a_{n-1}x+a_n=0$  tenglamaning ildizi bo'lsa, u holda  $\frac{f(1)}{a-1}$  va  $\frac{f(-1)}{a+1}$

sonlar xam butun sonlar bo'ladi.

Agar  $r/q$  ( $q>0$ ) qisqarmas kasr koeffitsientlari butun bo'lgan

$a_0x^n+a_1x^{n-1}+\dots+a_{n-1}x+a_n=0$  tenglamaning ildizi bo'lsa, u holda  $r$  son  $a_n$  ozod hadning  $q$  son esa  $a_0$  bosh koeffitsientning bo'luvchisi bo'ladi.

Eyzenshteyn kriteriyasi. Butun koeffitsientli  $f(x)=c_nx^n+c_{n-1}x^{n-1}+\dots+c_1x+c_0$  ko'phadning bosh koeffitsienti  $c_n$  dan boshqa barcha koeffitsientlari  $r$  tub songa bo'linib, ozod had  $c_0$  esa  $r^2$  ga bo'linmasa, u holda  $f(x)$  ko'phad ratsional sonlar maydoni ustida keltirilmaydigan ko'phad bo'ladi.



Kasrning maxrajidagi irratsionallikni yo'qotish mumkin, ya'ni  $F_1$  sonlar maydoni ustida keltirilmaydigan  $n$ -darajali  $r(x)=x^n+a_1x^{n-1}+..+a_{n-1}x+a_n$  ( $n \geq 2$ ) ko'phad berilgan bo'lib,  $x=\alpha$  uning ildizi bo'lsa, u holda  $\frac{f(\alpha)}{g(\alpha)}$  ( $g(\alpha) \neq 0$ ) kasr-ratsional ifodani shunday o'zgartirish mumkinki, natijada uning maxraji butun ratsional ifodaga aylanadi.

**Misol.**  $f(x) = x^4 + 2x^3 - 3x^2 - 5x + 2$  ko'phad  $Q$  maydonda keltiriluvchimi?

**Yechish.**  $f(x)$  ko'phad darajasi 4 ga teng bo'lganligi uchun, agar u  $Q$  maydonda keltiriluvchi bo'lsa, u holda  $f(x)$  ko'phadni ikkita 2-darajali yoki 1- va 3-darajali ko'phadlar ko'paytmasiga yoyish mumkin.

Agar  $f(x) = (ax^2 + bx + c)(dx^2 + mx + n)$  deb faraz qilsak bu tenglamaning yechimlari na butun sonlar, na kasr sonlarda mavjud emasligiga ishonch hosil qilish mumkin.

Agar  $f(x) = (ax + b)(cx^3 + dx^2 + mx + n)$  deb faraz qilsak, u holda tenglamadan

$$\begin{cases} ac = 1 \\ ad + bc = 2 \\ am + bd = -3 \\ an + bm = -5 \\ bn = 2 \end{cases}$$

sistemani hosil qilamiz. Bu sistemaning yechimlaridan biri  $a = c = n = 1$ ,  $b = 2$ ,  $d = 0$ ,  $m = -3$ . Demak,  $f(x) = (x + 2)(x^3 - 3x + 1)$  bo'lib berilgan  $f(x)$  ko'phad  $Q$  maydonda keltiriluvchi ekan.

**Misol.**  $Q[x]$  da berilgan  $f(x) = (x - 2)(x - 3)^2(x + 1)$  va  $g(x) = x^3 - 3x^2 - 2x + 6$  ko'phadlarning EKUB va EKUKini toping.

**Yechish.**  $f(x)$  ko'phad kanonik yoyilma ko'rinishida berilganligi uchun  $g(x)$  ko'phadni keltirilmaydigan ko'phadlar kanonik yoyilmasiga keltiramiz:

$$f(x) = (x^3 - 3x^2) - (2x - 6) = x^2(x - 3) - 2(x - 3) = (x - 3)(x^2 - 2). \quad \text{Demak,}$$

$$(f, g) = x - 3; (f, g] = (x - 2)(x^2 - 2)(x - 3)^2(x + 1)$$

**Misol.**  $Q[x]$  halqada berilgan  $f(x) = x^4 - 2x^3 + 3x^2 - 5x + 1$  ko'phad hosilalarining  $x_0 = 1$  nuqtadagi hosilalarini toping va berilgan ko'phadni  $x - 1$  ikkihad darajalariga yoying.

**Yechish.**

**1-usul.**  $f'(x) = 4x^3 - 6x^2 + 6x - 5;$

$$f''(x) = 12x^2 - 12x + 6;$$

$$f'''(x) = 24x - 12;$$

$$f^{IV}(x) = 24.$$

U holda  $f'(1) = 4 \cdot 1^3 - 6 \cdot 1 - 5 = -1;$

$$f''(1) = 12 \cdot 1 - 12 \cdot 1 + 6 = 6;$$

$$f'''(1) = 24 \cdot 1 - 12 = 12;$$

$$f^{IV}(x) = 24$$

Berilgan ko'phadning  $(x - 1)$  darajalariga yoyilmasini Teylor formulasidan foydalanib topamiz:

$$f(x) = f(1) + f'(1)(x - 1) + \frac{f''(1)}{2!}(x - 1)^2 + \frac{f'''(1)}{3!}(x - 1)^3 + \frac{f^{IV}(1)}{4!}(x - 1)^4$$

Bu erda  $f(1) = -2$  bo'lganligi uchun

$$f(x) = -2 - (x - 1) + 3(x - 1)^2 + 2(x - 1)^3 + (x - 1)^4.$$

**2-usul.** Gorner sxemasi yordamida yoyilmani topamiz:

	1	-2	3	-5	1
1	1	-1	2	-3	-2
1	1	0	2	-1	
1	1	1	3		
1	1	2			
1	1				

Jadvaldan  $f(1) = -2$ ;  $f'(1) = -1$ ;  $\frac{f''(1)}{2!} = 3$ ;  $\frac{f'''(1)}{3!} = 2$ ;  $\frac{f^{IV}(1)}{4!} = 1$  larni

aniqlaymiz.

Bundan,  $f(x) = (x-1)^4 + 2(x-1)^3 + 3(x-1)^2 - (x-1) - 2$  va  $f'(1) = -1$ ;  $f''(1) = 6$ ;  $f'''(1) = 12$ ; larni topamiz.

**Misol.**  $a$  ning qanday qiymatlarida  $f(x) = x^3 + x^2ax + 3$  ko'phad karrali ildizga ega bo'ladi?

**Yechish.** Berilgan ko'phadning karrali ildizi  $\alpha$  bo'lsin. U holda  $f(x) = (x-\alpha)^2 \cdot h(x)$ . Bu ko'phadning hosilasi  $f'(x) = 2(x-\alpha)h(x) + h'(x)(x-\alpha)^2$  bo'lib,  $f'(\alpha) = 0$  bo'ladi.

$f(\alpha) = 0$ ,  $f'(\alpha) = 0$  lardan quyidagi tenglamalar sistemasini tuzamiz:

$$\begin{cases} \alpha^3 + \alpha^2 + a\alpha + 3 = 0 \\ 3\alpha^2 + 2\alpha + a = 0 \end{cases}$$

Bundan  $a = -3\alpha^2 - 2\alpha$  yordamida  $\alpha^3 + \alpha^2 - 3\alpha^3 - 2\alpha^2 + 3 = 0$ , ya'ni  $-2\alpha^3 - \alpha^2 + 3 = 0$  tenglamaga ega bo'lamiz. Uning  $\alpha_1 = -\frac{3}{2}$ ;  $\alpha_2 = 1$  yechimlari

mavjud bo'lib,  $a_1 = -\frac{15}{4}$ ,  $a_2 = -5$  ga ega bo'lamiz.

Demak,  $a = -5$  da berilgan ko'phad karrali ildizga ega.

**Misol.** Agar  $Q[x]$  halqada 2 son  $f(x)$  ko'phadning 3 karrali ildizi bo'lsa, u holda

$g(x) = f'(x)(x^2 + 3) + (x+3)f''(x)$  ko'phadning necha karrali ildizi bo'ladi?

**Yechish.** 2 soni  $f(x)$  ko'phadning 3 karrali ildizi bo'lganligi uchun  $f(2) = f'(2) = f''(2) = 0$  va  $f'''(2) \neq 0$ . 2 sonning  $g(x)$  uchun tekshiramiz:  $g(2) = 0$  va  $g'(2) \neq 0$ .

Demak, 2 soni  $g(x)$  uchun bir karrali ildiz.

**Misol.**  $f(x)$  ko'phadni karrali ko'paytuvchilarga yiing.

**Yechish.**  $f(x)$  ko'phadni keltirilmaydigan ko'phadlarga kanonik yoyilmasini quyidagi jadvaldan foydalanib topamiz.

$C$  maydonda  $f(x) = \varphi_1 \varphi_2^2 \dots \varphi_m^n$ ,  $1 \leq i \leq m$  bo'lsin,  $\varphi_i$  ko'phadlarni quyidagicha aniqlaymiz.

$C$

$f = \varphi_1 \varphi_2^2 \dots \varphi_m^m$	$q_1 = \frac{1}{d_1} = \varphi_1 \varphi_2 \dots \varphi_m$	$\varphi_1 = \frac{q_1}{q_2}$
$d_1 = (f, f') = \varphi_2 \varphi_3^2 \dots \varphi_m^{m-1}$	$q_2 = \frac{d_1}{d_2} = \varphi_2 \varphi_3 \dots \varphi_m$	$\varphi_2 = \frac{q_2}{q_3}$
$d_2 = (d_1, d_1') = \varphi_3 \dots \varphi_m^{m-2}$	$q_3 = \frac{d_2}{d_3} = \varphi_3 \dots \varphi_m$	
.....	.....	.....
$d_{m-1} = (d_{m-2}, d_{m-2}') = \varphi_m$	$q_m = \frac{d_{m-1}}{d_m} = \varphi_m$	$\varphi_m = q_m$
$d_m = 1$		

Berilgan  $f(x)$  ko'phad uchun Evklid algoritmi yordamida  $d_1, d_2, \dots, d_m$  larni topamiz:  $f'(x) = 4x^3 - 6ix^2 - 2i$ .

$$d_1 = (f, f') = (x - i)^2;$$

$$d_1' = 2x - 2i = 2(x - i);$$

$$d_2 = x - i;$$

$$d_2' = 1;$$

$$d_3 = (d_2, d_2') = 1;$$

$$q_1 = \frac{f}{d_1} = x^2 + 1;$$

$$q_2 = \frac{d_1}{d_2} = x - i;$$

$$q_3 = \frac{d_2}{d_3} = x - i;$$

Bulardan,  $\varphi_1 = \frac{q_1}{q_2} = x + i$ ;  $\varphi_2 = \frac{q_2}{q_3} = 1$ ;  $\varphi_3 = q_3 = x - i$  lar kelib chiqadi.

Demak,  $f(x) = (x + i)(x - i)^3$ .

**Misol.**  $Q$  maydonda  $\frac{f(x)}{g(x)} = \frac{x^2 + 4x + 3}{(x^2 - 4x + 4)(x + 3)^2}$  kasrni elementar kasrlarga

yoying.

**Yechish.**  $f(x)$  va  $g(x)$  ko'phadlarning o'zaro tub yoki tubmasligini tekshiramiz. Buning uchun ularning EKUBini topamiz.  $(f, g) = x + 3$ .  $f(x)$  va

$g(x)$  larni o'zaro tub holga keltiramiz va qisqarmas kasr  $\frac{f(x)}{g(x)} = \frac{x + 1}{(x^2 - 2)^2(x + 3)}$  ni

hosil qilamiz. Bundan,  $A, V, S$  parametrlar yordamida

$\frac{x + 1}{(x - 2)^2(x + 3)} = \frac{A}{x - 2} + \frac{B}{(x - 2)^2} + \frac{C}{x + 3}$  yoyilmani tuzamiz. Natijada

$x + 1 = A(x - 2)(x + 3) + B(x + 3) + C(x - 2)^2$  tenglama kelib chiqadi va uning yechimlari

a)  $x = 2$  da  $B = \frac{3}{5}$

b)  $x = -3$  da  $C = -\frac{2}{25}$

v)  $A + C = 0$  va  $A = \frac{2}{25}$

Demak,  $\frac{f(x)}{g(x)} = \frac{x + 1}{(x - 2)^2(x + 3)} = \frac{2}{25(x - 2)} + \frac{3}{5(x - 2)^2} - \frac{2}{25(x + 3)}$ .



### Misol va mashqlar

1.  $f(x)$  ko'phad berilgan maydonda keltirilmasligini isbotlang:

1.1.  $f(x) = x^3 - 2$ ,  $Q$ .

1.2.  $f(x) = x^2 + x + 1, Q$ .

1.3.  $f(x) = x^2 + x + 1, Z_5$ .

1.4.  $f(x) = x^6 + x^3 + 1, Q$ .

2.  $Q$  maydonda berilgan quyidagi ko'phadlarni keltirilmaydigan ko'phadlar ko'paytmasiga yoying.

2.1.  $f(x) = 2x^5 - x^4 - 6x^3 + 3x^2 + 4x - 2$

2.2.  $f(x) = 3x^5 + x^4 - 15x^3 - 5x^2 + 12x + 4$

3.  $f(x) = 2x^5 - x^4 - 2x^3 + x^2 - 4x + 2$  ko'phadning 2 juft bir-biriga qarama-qarshi ildizlari mavjudligi ma'lum bo'lsa, uni  $Q, R, C$  maydonlardagi keltirilmaydigan ko'phadlarga yoyilmasini toping.

4.  $Q$  maydonda berilgan 3-darajali ko'phad keltiriluvchi bo'lishi uchun uning bitta ildizi ratsional son bo'lishi zarur va etarli ekanligini isbotlang.

5.  $Z[x]$  halqada quyidagi ko'phadlar keltirilmasligini isbotlang.

5.1.  $f(x) = x^5 - x^2 + 1$ .

5.2.  $f(x) = x^5 + x^4 + x^3 + x^2 + 1$ .

5.3.  $f(x) = x^3 - x^2 + x + 1$ .

6.  $f(x) = x^4 + 4$  ko'phad  $Z_5, Q, R, C$  maydonlarning qaysi birida keltiriluvchi?

7. Quyidagi ko'phadlarni keltirilmaydigan ko'phadlarga yoying.

7.1.  $f(x) = x^4 - 6x^3 + 11x^2 - 6x + 1, R[x]$ .

7.2.  $f(x) = x^4 + 4, C[x]$ .

7.3.  $f(x) = (x^2 + x - 1)^2 + 3x(x^2 + x - 1) + 2x^2$ .

7.4.  $f(x) = x^4 + 4; C[x]$ .

7.5.  $f(x) = x^2(x-3)^2 + 4x^2 - 12x + 4$ .

7.6.  $f(x) = x^6 + 27; C[x]$ .

7.7.  $f(x) = (x+2)(x+3)(x+4)(x+5) + 1$ .

7.8.  $f(x) = x^{2n} + x^4 + 1; C[x]$ .

8. Quyidagi ko'phadlarning EKUB va EKUK larini toping:

8.1.  $f(x)(x-1)^2(x^2-5x+6), g(x) = x^2 - x - 2, z[x]$

8.2.  $f(x) = (x^2 - 2x + 3)^2(x^2 + 5x - 6)^2, g(x) = (x^2 - 8x + 12)^2(x^3 - 1), Q[x]$

8.3.  $f(x) = x^4 + 2x^3 - 2x - 1, g(x) = (x+1)(x^2 - x - 2), Q[x]$

8.4.  $f(x) = x^5 - x, g(x) = (x^2 + x + 1)^2(\bar{2}x + \bar{4}), z_5[x]$

8.5.  $f(x) = x^m - 1, g(x) = x^n - 1$

8.6.  $f(x) = x^m + 1, g(x) = x^n + 1$

9. Quyidagi ko'phadlarning hosilasini toping:

9.1.  $f(x) = (x^2 + x - 1)^3(x^3 - 2), Q[x];$

9.2.  $f(x) = \bar{4}x^{10} + \bar{3}x^2(x + 3), Z_5[x].$

10. Agar  $Z_3[x]$  halqada  $f'(x) = \bar{2}x + \bar{1}$  va  $f(\bar{1}) = 1$  bo'lsa, 6 darajali  $f(x)$  ko'phadni toping.

11. Agar  $Q[x]$  halqada  $f''(x) = 24x + 2, f(0) = 1$  va  $f(1) = 5$  bo'lsa,  $f(x)$  ko'phadni toping.

12.  $Z_2[x]$  halqada darajasi 3 dan katta bo'lmagan va o'z hosilasiga bo'linuvchi barcha  $f(x)$  ko'phadlarni toping.

13.  $f(x)$  ko'phadni  $x - a$  darajalariga yoying va hosilalarining  $a$  nuqtadagi qiymatini toping.

13.1.  $f(x) = ix^4 + (1-i)x^3 - (2+i)x^2 + 3x - 3 - 4i, a = 2i, C[x].$

13.2.  $f(x) = x^5 - 3ix^3 - 4x^2 + 5ix - 1, a = -i, G[x].$

13.3.  $f(x) = (x-3)(x-2)(x+1)(x+4) + 1, a = -1, Q[x].$

13.4.  $f(x) = \bar{2}x^4 + x^3 + x\bar{2}, a = \bar{1}, z_3[x].$

13.5.  $f(x) = x^4 - 8x^3 + 24x^2 - 50x + 90, a = 2, R[x].$

13.6.  $f(x) = x^5 - 4x^3 + 6x^2 - 8x + 10, a = 2, R[x].$

14. Berilgan ildizlar necha karrali ekanligini aniqlang.

14.1.  $\alpha = 3$ ;  $f(x) = x^4 - 6x^3 + 10x^2 - 6x + 9$ ,  $Q[x]$ .

14.2.  $\alpha = 2$ ;  $f(x) = x^5 - 4x^4 + 7x^3 - 11x^2 + 4$ ,  $Q[x]$ .

14.3.  $\alpha = 1 + i$ ;  $f(x) = x^4 - (3 + 4i)x^3 + (3 + 3i)x^2 + (8 - 2i)x - 2 - 2i$ ,  $C[x]$ .

14.4.  $\alpha = 2$ ;  $f(x) = x^5 - 5x^4 + 7x^3 - 2x^2 + 4x - 8$ .

14.5.  $\alpha = 3$ ;  $f(x) = x^5 - 6x^4 + 2x^3 + 36x^2 - 27x - 54$ .

15.  $R[x]$  da  $b$  ning qanday qiymatlarida berilgan ko'phad karrali ildizga ega:

15.1.  $f(x) = x^5 - 5x^3 + b$ ,

15.2.  $f(x) = x^3 - 4x^2 - 3x + b$ ,

15.3.  $f(x) = x^3 + 3x^2 + 3bx - 4$ ,

15.4.  $f(x) = x^3 + 5x^2 + 8x + b$ .

16. Berilgan ko'phadlarning karrali ildizga ega bo'lishining zarur va etarli shartlarini aniqlang:

16.1.  $f(x) = x^4 + ax + b$ .

16.2.  $f(x) = x^5 + ax^3 + b$ .

17. Berilgan ko'phadlarni keltirilmaydigan ko'phadlar kanonik yoyilmasini toping:

17.1.  $f(x) = x^5 + 4x^4 + 7x^3 + 8x^2 + 5x + 2$ .

17.2.  $f(x) = x^5 - ix^4 + 5x^3 - ix^2 + 8x + 4i$ .

17.3.  $f(x) = x^5 + 5x^4 + (6 - i)x^3 - (4 + 6i)x^2 - (8 + 12i)x - 8i$ .

17.4.  $f(x) = x^6 - 6x^4 - 4x^3 + 9x^2 + 12x + 4$ .

18. Quyidagi shartlar asosida kompleks koeffitsientli eng kichik darajali ko'phadni aniqlang:

18.1. 1-ikki karrali, 2,3,  $1 + i$  - bir karrali ildizlar.

18.2.  $i$ -ikki karrali,  $-1 - i$  - bir karrali ildizlar.

19.  $R[x]$  halqada berilgan kasrlarni qisqarmas kasrga keltiring:



$$19.1. \frac{x^2 - 4x + 3}{x^2 - 5x + 6}.$$

$$19.2. \frac{x^8 + x^4 + 1}{x^2 + x + 1}.$$

20.  $Q$  maydonda berilgan kasrni elementar kasrlarga yoying.

$$20.1. \frac{f(x)}{g(x)} = \frac{x + 3}{(x^3 - 2)(x + 1)};$$

$$20.2. \frac{f(x)}{g(x)} = \frac{1}{x^4 - 2x};$$

$$20.3. \frac{f(x)}{g(x)} = \frac{x^2}{x^4 - 4};$$

$$20.4. \frac{f(x)}{g(x)} = \frac{1}{x^3 + x}.$$

21.  $R$  maydonda berilgan kasrni elementar kasrlarga yoying:

$$21.1. \frac{f(x)}{g(x)} = \frac{x^3 - 1}{(x^2 + x + 1)^2(x^2 + 1)};$$

$$21.2. \frac{f(x)}{g(x)} = \frac{x^4 + 2x^3 - 18x^2 + 54}{x^5 + 6x^4 + 9x^3};$$

$$21.3. \frac{f(x)}{g(x)} = \frac{x^2 + 3x + 2}{(x^4 + 4)(x + 2)};$$

$$21.4. \frac{f(x)}{g(x)} = \frac{x^2}{x^4 - 4};$$

$$21.5. \frac{f(x)}{g(x)} = \frac{x + 3}{(x^3 - 2)(x + 1)};$$

$$21.6. \frac{f(x)}{g(x)} = \frac{x^2}{(x^2 + x + 2)^2};$$

$$21.7. \frac{f(x)}{g(x)} = \frac{x^2}{x^4 - 16};$$

$$21.8. \frac{f(x)}{g(x)} = \frac{1}{x^4 + 4};$$

22.  $C$  maydonda berilgan kasrni elementar kasrlarga yoying:

$$22.1. \frac{f(x)}{g(x)} = \frac{x^2}{(x-1)(x+2)(x+3)};$$

$$22.2. \frac{f(x)}{g(x)} = \frac{1}{x^4 + 4};$$

$$22.3. \frac{f(x)}{g(x)} = \frac{5x^2 + 6x - 23}{(x-1)^3(x+1)^2(x-2)};$$

$$22.4. \frac{f(x)}{g(x)} = \frac{i}{(x-i)(x+2i)};$$

$$22.5. \frac{f(x)}{g(x)} = \frac{2x}{(x-1)(x^2+1)};$$

$$22.6. \frac{f(x)}{g(x)} = \frac{x^2}{x^4 - 4}.$$

23.  $Z_5$  maydonda ( $r$  – tub son)  $\frac{f(x)}{g(x)} = \frac{\bar{1}}{x^p - x}$  kasrni elementar kasrlarga

yoying.

24. Maydon ustida keltirilmaydigan ko'phadlarning quyidagi xossalarini isbotlang:

1<sup>0</sup>. Agar  $p(x)$  va  $g(x)$  keltirilmaydigan ko'phadlar bo'lib  $r(x):g(x)$  bo'lsa, u holda  $r(x)=ag(x)$  ( $a \neq 0$ ) bo'ladi.

2<sup>0</sup>. Ixtiyoriy  $f(x)$  ko'phad keltirilmaydigan ixtiyoriy  $r(x)$  ko'phadga bo'linadi yoki  $(f(x);r(x))=1$  bo'ladi.

3<sup>0</sup>. Agar  $f_i(x)$  ( $i=1,m$ ) ko'phadlarning hech biri keltirilmaydigan  $r(x)$  ko'phadga bo'linmasa, u holda  $f_1(x) \cdot f_2(x) \dots f_m(x) \not\equiv r(x)$  bo'ladi.

4<sup>0</sup>. Agar  $f_1(x) f_2(x) \dots f_m(x):r(x)$  ( $p(x)$  – keltirilmaydigan ko'phad), u holda  $f_i(x)$  ( $i=1,m$ ) ko'phadlarning aqalli bittasi  $r(x)$  ga bo'linadi.

5<sup>0</sup>.  $p(x)$  keltirilmaydigan ko'phad bo'lsa, u holda  $ap(x)$  ( $0 \neq a \in F$ ) ham keltirilmaydigan ko'phad bo'ladi.

25. Agar  $x_1 = a + bi$  berilgan  $f(x)$  ko'phadning ildizi bo'lsa, uning qolgan yechimlarini toping:

- 25.1.  $f(x) = x^3 - 4x^2 + 3x + 30$  ;  $x_1 = 3 + i\sqrt{6}$  .  
 25.2.  $f(x) = x^3 - 4x^2 + 3x + 30$  ;  $x_1 = 3 - i\sqrt{6}$  .  
 25.3.  $f(x) = 4x^4 - 24x^3 + 53x^2 + 18x - 42$  ;  $x_1 = 3 - i\sqrt{5}$  .  
 25.4.  $f(x) = x^4 + 2x^3 + 2x^2 + 6x - 3$  ;  $x_1 = -1 - i\sqrt{2}$  .

26. Kardano formulari yordamida quyidagi tenglamalarni yeching:

- 26.1.  $-2x^3 - 2x^2 + 12x - 24$  ;      26.6.  $-5x^3 + 8x^2 - 3x - 24$  ;  
 26.2.  $2x^3 + 4x^2 + 4x + 4$  ;      26.7.  $2x^3 + 8x^2 - 12x + 12$  ;  
 26.3.  $2x^3 + 8x^2 - 2x + 5$  ;      26.8.  $2x^3 + 4x^2 + 4x + 4$  ;  
 26.4.  $-5x^3 + 8x^2 - 3x - 3$  ;      26.9.  $5x^3 + x^2 - 3x - 2$  ;  
 26.5.  $6x^3 - 8x^2 + 5x - 3$  ;

27. Ferrari usuli bilan quyidagi tenglamalarni yeching:

- 27.1.  $x^4 - 2x^3 - 2x^2 + 12x - 24$  ;      27.4.  $x^4 - 5x^3 + 8x^2 - 3x - 24$  ;  
 27.2.  $x^4 + 2x^3 + 4x^2 + 4x + 4$  ;      27.5.  $x^4 - 2x^3 + 8x^2 - 12x + 12$  ;  
 27.3.  $x^4 - 2x^3 + 8x^2 - 12x + 12$  ;      27.6.  $x^4 - 5x^3 + x^2 - 3x - 2$  .

28. Ko'phadning butun ildizlarini toping:

- 28.1.  $f(x) = x^4 - 3x^2 - 14$  ;      28.5.  $f(x) = x^5 + 3x - 9$  ;  
 28.2.  $f(x) = 4x^4 + 3x^2 - 4$  ;      28.6.  $f(x) = x^5 + 3x - 8$  ;  
 28.3.  $f(x) = x^4 + 4x^3 + 27$  ;      28.7.  $f(x) = x^5 + 3x - 12$  ;  
 28.4.  $f(x) = x^4 - 3x^2 - 24$  ;      28.8.  $f(x) = x^3 + 2x^2 - 3x + 2$  ;

29. Ko'phadning ratsional ildizlarini toping:

- 29.1.  $f(x) = 4x^5 + 4x^4 + 7x^3 + 8x^2 + 5x + 2$  .  
 29.2.  $f(x) = 5x^5 - x^4 - 2x^3 - 27x^2 - 44x + 7$  ;  
 29.3.  $f(x) = -4x^5 - x^4 - 6x^3 + 11x^2 - 6x + 1$  ;  
 29.4.  $f(x) = 5x^5 + 4x^4 + 4x^3 + 13x^2 + 6x + 9$  ;  
 29.5.  $f(x) = -7x^5 + x^4 - 5x^3 - 8x^2 + 19x - 3$  .

30. Kasr mahrajini irratsionallikdan qutqaring:

- 30.1.  $\frac{7}{1 - \sqrt[4]{2} + \sqrt{2}}$  ;      30.4.  $\frac{2}{\sqrt[3]{49} - \sqrt[3]{7} + 3}$  ;      30.7.  $\frac{\sqrt[3]{2}}{\sqrt[3]{4} + 2\sqrt[3]{2}}$  ;

$$30.2. \frac{2}{\sqrt[4]{27} - 2\sqrt[4]{9} + \sqrt[4]{3} - 1}; \quad 30.5. \frac{2\sqrt{3}}{\sqrt[3]{25} - \sqrt[3]{5} + 6}; \quad 30.8. \frac{9}{\sqrt[3]{4} + \sqrt[3]{2} + 3};$$

$$30.3. \frac{2\sqrt[3]{5}}{\sqrt[3]{9} - \sqrt[3]{3} + 7}; \quad 30.6. \frac{9\sqrt[3]{2}}{\sqrt[4]{49} - \sqrt[4]{7} + 3}; \quad 30.9. \frac{5}{\sqrt[3]{9} - \sqrt[3]{7}};$$



### Takrorlash uchun savollar

1. Ko'phadning butun va ratsional ildizlari.
2. Eyzenshteynning keltirilmaslik alomati.
3. Algebraik elementning minimal ko'phadi.
4. Maydonning oddiy kengaytmasi va uni qurish.
5. Kasr mahrajini algebraik irratsionallikdan qutqarish.
6. Maydonning chekli kengaytmasi. Maydonning murakkab kengaytmasi.
7. Algebraik sonlar maydoni.
8. Tenglamalarni radikallarda echilishi.
9. Uchinchi darajali tenglamalarning kvadrat radikallarda echilish sharti.
10. Kvadrat radikallarda echilmaydigan masalalar.

## J A V O B L A R

### I MODUL. MATEMATIK MANTIQ ELEMENTLARI

1-§. Mulohaza. Mulohazalar ustida mantiq amallari

1. 1.2, 1.5, 1.8, 1.9, 1.10, 1.14, 1.18, 1.19, 1.20, 1.21, 1.22 – mulohaza. 2. 2.1, 2.5, 2.7 –yolg'on. 3. 3.3.  $3 \leq 2$ , 3.8. barcha haqiqiy sonlar toq. 3.10. Shunday natural son mavjudki u birdan katta emas. 4. 4.2, 4.8. 5. 5.1.  $\phi \neq 0 \wedge \psi \neq 0$ , 5.2.  $\phi = 0 \vee \psi = 0$ , 5.3.  $\phi = 0 \wedge \psi = 0$ , 5.4.  $\phi = 0 \wedge \psi \neq 0$ , 5.5.  $\phi > -6 \wedge \phi < 6$ , 5.6.  $\phi = -2 \vee \psi = 2$ . 6. 6.1, 6.5, 6.6, 6.7, 6.9, 6.10 – yolg'on. 7. 7.2, 7.4, 7.7, 7.8, 7.9-rost. 8. 8.1.  $\neg(A \wedge B) \Rightarrow A \vee B$ . 8.2.  $A \wedge \neg B \Rightarrow \neg C$ . 8.3.  $A \Rightarrow B \vee C \vee D$ . 8.4.  $A \Rightarrow B \vee C \vee D$ . 9. Mavjud emas. 10. 10.2-yolg'on, qolganlari rost.

2-§. Formula. Teng kuchli formulalar. Mantiq qonunlari.

- 2.2.3.  $\neg(A \Rightarrow \neg(B \vee C) \wedge B) \equiv \neg(A \Rightarrow \neg(B \vee C) \wedge B)$ ,  
 $\neg(A \Rightarrow \neg(B \vee C) \wedge B) \equiv \neg(A \Rightarrow \neg(B \vee C) \wedge B)$ ,  $\neg(A \Rightarrow \neg(B \vee C) \wedge B) \equiv \neg(A \Rightarrow \neg(B \vee C) \wedge B)$ ,  
 $\neg(A \Rightarrow \neg(B \vee C) \wedge B) \equiv \neg(A \Rightarrow \neg(B \vee C) \wedge B)$ ,  $\neg(A \Rightarrow \neg(B \vee C) \wedge B) \equiv \neg(A \Rightarrow \neg(B \vee C) \wedge B)$ ,  
 $\neg(A \Rightarrow \neg(B \vee C) \wedge B) \equiv \neg(A \Rightarrow \neg(B \vee C) \wedge B)$ ,  $\neg(A \Rightarrow \neg(B \vee C) \wedge B) \equiv \neg(A \Rightarrow \neg(B \vee C) \wedge B)$ ,  
 $\neg(A \Rightarrow \neg(B \vee C) \wedge B) \equiv \neg(A \Rightarrow \neg(B \vee C) \wedge B)$ ,  
 $\neg(A \Rightarrow \neg(B \vee C) \wedge B) \equiv \neg(A \Rightarrow \neg(B \vee C) \wedge B)$ ,  
 $\neg(A \Rightarrow \neg(B \vee C) \wedge B) \equiv \neg(A \Rightarrow \neg(B \vee C) \wedge B)$ .
- 3.3.1.  $A, B, C, \neg(C), A \vee B, A \Leftrightarrow B, A \vee B \Rightarrow A, A \Leftrightarrow B \wedge \neg(C)$

$\neg(A \vee B) \Rightarrow \neg A \wedge \neg B$ ;  $\neg(A \wedge B) \Rightarrow \neg A \vee \neg B$ ;  $\neg(A \Leftrightarrow B) \Leftrightarrow (A \wedge \neg B) \vee (\neg A \wedge B)$ . **11.** 11.1. 1;  
 11.2.  $A \vee B$ ; 11.3.  $A \wedge B$ ; 11.4.  $\neg A \wedge \neg C$ ; 11.5.  $A \vee (B \wedge C)$ ; 11.6.  $B \Rightarrow \neg A$ . **12.**  
 12.1.  $\neg(\neg A \wedge B \wedge C)$ ; 12.2.  $\neg(\neg A \wedge B)$ ; 12.3.  $\neg(\neg A \wedge B \wedge C)$ ; 12.4.  
 $\neg(A \wedge B) \wedge (A \wedge C)$ ; 12.5.  $\neg(\neg A \wedge B) \wedge (\neg A \wedge C)$ . **13.**  
 13.1.  $\neg(\neg A \vee B) \vee (\neg B \vee C)$ ; 13.2.  $A \vee B \vee (\neg A \vee B)$ ;  
 13.3.  $\neg(\neg(A \vee B) \vee Z) \vee (B \vee C)$ ; 13.4.  $\neg(\neg A \vee (\neg B \vee C) \vee (\neg A \vee B)) \vee B$ ;  
 13.5.  $\neg(\neg(\neg A \vee B) \vee (\neg B \vee B \vee C)) \vee (\neg A \vee C)$ . **14.** 14.1.  $(\neg A \vee (\neg B \wedge C)) \wedge (A \vee B)$ ;  
 14.2.  $((A \vee B \vee C) \wedge D) \vee Q \vee R \vee P$ ;  
 14.3.  $((A \vee (B \wedge C)) \wedge D) \vee Q \wedge (R \vee (\neg P \wedge F))$ ;  
 14.4.  $((\neg A \vee (B \wedge (C \vee D))) \wedge Q) \vee R$ .

### 3-§. Predikatlar. Kvantorlar.

**1.** 1.2,1.4,1.5,1.7,1.8,1.10,1.11,1.14. **5.** 5.1.  $M \setminus \{3\}$ . 5.2.  $\{1,2,3,4,5,6\}$ . 5.3.  
 $\{2,4,5,6,8,10,12,14,15,16,18,20\}$ . 5.4.  $M \setminus \{3\}$ . 5.5.  $M \setminus \{5\}$ . 5.6.  $M \setminus \{5\}$ . 5.7.  
 $\{1,5,7,11,13,17,19\}$ . 5.10.  $\{6,12,18\}$ .

### 4-§. Matematik mantiqning tadbirlari

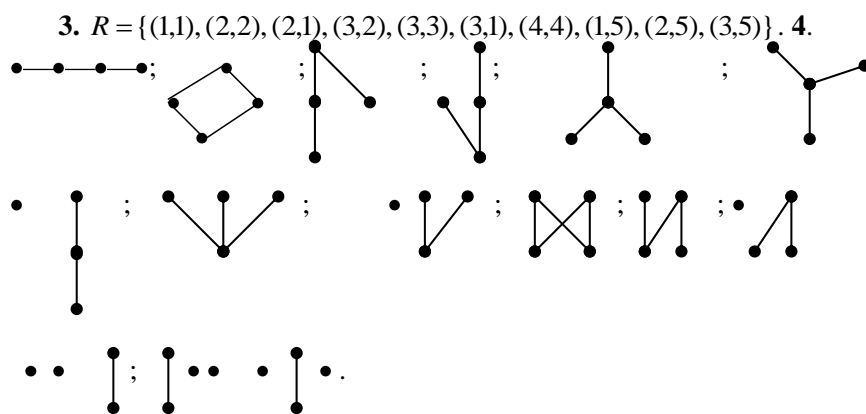
**4.** 4.1.  $\forall x \in M \forall y \in M ((x = y) \vee (x < y) \vee (x > y))$ ;  
 $\exists x \in M \exists y \in M (\neg(x = y) \vee \neg(x < y) \vee \neg(x > y))$ .  
 4.2.  $\exists L \in R_+ \forall y \in M (|f(x)| \leq L)$ ;  $\forall L \in R_+ \exists y \in M (|f(x)| > L)$ .  
 4.3.  $\forall x_1 \in M \forall x_2 \in M ((x_1 < x_2) \Rightarrow f(x_1) < f(x_2))$ ;  
 $\exists x_1 \in M \exists x_2 \in M ((x_1 < x_2) \wedge f(x_1) \geq f(x_2))$ .  
 4.4.  $\exists T \in R \setminus \{0\} \forall x \in M ((x \pm T \in M) \wedge (f(x \pm T) = f(x)))$ ;  
 $\forall T \in R \setminus \{0\} \exists x \in M ((x \pm T \notin M) \vee (f(x \pm T) \neq f(x)))$ .

## II MODUL. TO'PLAMLAR VA MUNOSABATLAR

### 5-§. To'plam. To'plamlar ustida amallar. Eyer-Venn diagrammalari

**2.**  $A = \{1\}$ ,  $B = \{a, \{1\}\}$ ,  $C = \{\{a, \{1\}\}\}$ . **4.**  $|\mathfrak{R}(M_1)| = 2$ ,  $|\mathfrak{R}(M_2)| = 4$ ,  $|\mathfrak{R}(M_3)| = 16$ ,  
 $|\mathfrak{R}(M_n)| = 2^n$ . **6.** 10 nafardan kam emas.

7-§. Akslantirish (funktsiya). Tartib munosabati. Graflar



III MODUL. ALGEBRA VA ALGEBRAIK SISTEMALAR

8-§. Algebra. Faktor-algebra

1. 1.1 amal emas, 1.2.unar amal, 1.3. amal emas, 1.4. amal emas, 1.5 amal emas, agar natural sonlar to`plamida qaralsa, ternar amal. 2. Neytral element mavjud emas. 3. 3.1. Neytral element mavjud emas. 3.2. Neytral element 1. 4. 4.1. Butun sonlar to`plamida qo`shish, ko`paytirish va qarama-qarshi elementni topish. 4.2. Ratsional sonlar to`plamida qo`shish, ko`paytirish, qarama-qarshi va teskari elementlarni topish. 4.3. Mulohazalar to`plamida dizyunktsiya, konyunktsiya, implikatsiya, inkor amallari.

9-§. Gruppya. Halqa. Maydon

10.  $4(z) \begin{cases} 0, \text{ agar } z = 4k \\ e, \text{ agar } z = 4k + 1 \\ a, \text{ agar } z = 4k + 2 \\ b, \text{ agar } z = 4k + 3 \end{cases}$  akslantirish gomomorfizmdir.

IV MODUL. ASOSIY SONLI SISTEMALAR

12-§. Kompleks sonlar maydoni

1. 1.1.  $\operatorname{Re}z=0, \operatorname{Im}z=\frac{14}{5}$ . 1.2.  $\operatorname{Re}z=2, \operatorname{Im}z=\frac{3}{2}$ . 1.3.  $\operatorname{Re}z=0, \operatorname{Im}z=-1$ . 1.4.  $\operatorname{Re}z=\frac{1}{2}, \operatorname{Im}z=0$ . 4. 4.1.  $z=2,5+yi, y \in R$ . 4.2.  $z=-\frac{1}{4}+i$ . 4.3.  $z_{1,2}=\frac{-1 \pm \sqrt{5}}{2}$ . 4.4.  $\emptyset$ . 4.5.  $z_1=-1+i, z_2=-4-i$ . 4.6.  $z_1=\frac{3-7i}{8}, z_2=\frac{1+3i}{8}$ . 4.7.  $z_1=1-2i, z_2=-3+i$ . 4.8.  $z_1=-2i, z_2=\frac{-1+3i}{2}$ . 5. 5.1.  $-1-i$ . 5.2.  $i$ . 5.3.  $\emptyset$ . 6. 6.1.  $1+i$ . 6.2.  $6+8i, 6+17i$ . 6.3.  $z_1=1-i, z_2=i$ . 6.4.  $z_1=1+i, z_2=-2i$ . 6.5.  $z=\frac{7}{6}+\frac{5}{6}i$ . 6.6.  $z_1=-1,5-2i; z_2=-1,5-4,25i$ . 8. 8.1.  $2^n \cos \frac{n\pi}{3}$ . 8.2.  $\frac{2^n}{\sqrt{3}} \sin \frac{2n\pi}{3}$ . 8.3.  $2^n \cos \frac{5n\pi}{3}$ . 8.4.  $\frac{2^n}{3^{\frac{n-1}{2}}} \sin \frac{n\pi}{6}$ . 9. 9.1.  $5(\cos 0 + i \sin 0)$ . 9.2.  $2(\cos \frac{3}{2}\pi + i \sin \frac{3}{2}\pi)$ . 9.3.  $\frac{1}{2\sqrt{2}}(\cos \frac{5}{4}\pi + i \sin \frac{5}{4}\pi)$ . 9.4.  $16(\cos \frac{\pi}{3} + i \sin \frac{\pi}{3})$ . 9.5.  $\cos(\frac{\pi}{2}-\alpha) + i \sin(\frac{\pi}{2}-\alpha)$ . 11. 11.1.  $-\frac{\cos(\alpha+\beta)}{\sin \beta}(\cos(2\beta-\theta) + i \sin(2\beta-\theta))$ . 11.2.  $4^{2008}$ . 11.3.  $2^n \sin^n \frac{\alpha}{2}(\cos n(\frac{\pi}{2}-\alpha) + i \sin n(\frac{\pi}{2}-\alpha))$ . 11.4.  $-\frac{3^8}{\sqrt{3} \cdot 2^{971}}(-1+i\sqrt{3})$ .

12. 12.1.  $\sqrt[6]{5}(\cos \frac{\varphi+2k\pi}{3} + i \sin \frac{\varphi+2k\pi}{3}), k=0,1,2; \varphi = \arcsin(-\frac{1}{\sqrt{5}})$ . 12.2.  $2(\cos \frac{k\pi}{6} + i \sin \frac{k\pi}{6}), k=0,1,2,3,4,5$ . 12.3.  $\sqrt[8]{13}(\cos \frac{\varphi+2k\pi}{4} + i \sin \frac{\varphi+2k\pi}{4}), k=0,1,2,3; \varphi = \arcsin \frac{3}{\sqrt{13}}$ . 12.4.  $\sqrt{\frac{1}{2}}(\cos \frac{\frac{\pi}{3}+2k\pi}{4} + i \sin \frac{\frac{\pi}{3}+2k\pi}{4}), k=0,1,2,3$ .



$$12.5. \cos \frac{11\pi + 2k\pi}{5} + i \sin \frac{11\pi + 2k\pi}{5}, k = 0,1,2,3,4.$$

$$12.6. \sqrt[8]{2} (\cos \frac{\varphi + 2k\pi}{4} + i \sin \frac{\varphi + 2k\pi}{4}), k = 0,1,2,3; \varphi = \arccos \frac{\sqrt{3} + 1}{2\sqrt{2}}.$$

$$12.7. \frac{1}{\sqrt[12]{2}} (\cos \frac{11\pi + 2k\pi}{6} + i \sin \frac{11\pi + 2k\pi}{6}), k = 0,1,2,3,4,5.$$

$$12.8. \sqrt[16]{74^3} (\cos \frac{3\varphi + 2k\pi}{8} + i \sin \frac{3\varphi + 2k\pi}{8}), k = 0,1,2,3,4,5,6,7; \varphi = \arccos \frac{7}{\sqrt{74}}.$$

## V MODUL . ARIFMETIK VEKTOR FAZO.

### Chiziqli tenglamalar sistemasi

#### 13-§. Arifmetik vektor fazo.

1. 2. 2.1.  $(8 + \sqrt{2}, 0, -9, 4)$ . 2.2.  $(-2, 12, -17)$ . 2.3.  $(\frac{1}{2} \sin \alpha, \frac{1}{2}, \frac{1}{2} \cos 3\alpha)$ . 2.4.

$$(-\frac{31}{6}, \frac{11}{2}, -3).$$

#### 14-§. Matritsa va uning rangi

3. agar  $\lambda = 1 \wedge \lambda = \frac{1}{4}$  bo'lsa rang 2; agar  $\lambda = 1 \vee \lambda = \frac{1}{4}$  bo'lsa, rang 3ga teng.

4.  $\lambda = 0$  da rang 2,  $\lambda \neq 0$  da rang 3ga teng.

#### 15-§. Chiziqli tenglamalar sistemasi .

2. 2.1.  $(1, -1, 0)$ . 2.2.  $(1, 2, -1, -2)$ . 2.3.  $(\frac{2}{3}, -1, \frac{3}{2}, 0)$ . 2.4. hamjoysiz. 3. 3.1. har

qanday  $\lambda$  uchun ChTS hamjoyli. 3.2.  $\lambda \neq -2$  da ChTS hamjoyli. 3.3.

$\lambda = -3$  da ChTS hamjoysiz. 3.4.  $\lambda = 2$  da ChTS hamjoysiz. 4. 4.1.

$$x = \frac{1}{4}(-a + b + c + d), \quad y = \frac{1}{4}(a - b + c + d), \quad z = \frac{1}{4}(a + b - c + d),$$

$$t = \frac{1}{4}(a + b + c - d). \quad 4.2. \quad x = \frac{1}{A}(ap - bq - cr - ds), \quad y = \frac{1}{A}(aq + bp + cs - dr),$$

$$z = \frac{1}{A}(ar - bs + cp + dp), \quad t = \frac{1}{A}(as + br - cq + dp), \quad A = a^2 + b^2 + c^2 + d^2.$$

$$4.3. x_k = (-1)^{n+k} \sum_{i=1}^n \frac{b_i f_{ik}}{(a_i - a_1) \dots (a_i - a_{i-1})(a_i - a_{i+1}) \dots (a_i - a_n)}, \quad \text{bu erda}$$

$f_{ik}, a_1, \dots, a_{k-1}, a_{k+1}, \dots, a_n$  elementlarning  $n-i$  tadan ko'paytmalari yig'indisi. 4.4.

$$x_k = \frac{\prod_{i \neq k} (b - a_i)}{\prod_{i \neq k} (a_k - a_i)} = \frac{f(b)}{(b - a_k) f'(a_k)}, \quad f(x) = (x - a_1)(x - a_2) \dots (x - a_n). \quad 5. \quad 5.1.$$

$$x_1 = \frac{x_3 - 9x_4 - 2}{11}, \quad x_2 = \frac{-5x_3 + x_4 + 10}{11}. \quad 5.2.$$

$$x_3 = 22x_1 - 33x_2 - 11, \quad x_4 = -16x_1 + 24x_2 + 8. \quad 5.3. \quad (3, 2, 1). \quad 5.4.$$

$$x_1 = \frac{-6 + 8x_4}{7}, \quad x_2 = \frac{1 - 13x_4}{7}, \quad x_3 = \frac{15 - 6x_4}{7}. \quad 5.5.$$

$$x_3 = 13, \quad x_4 = 19 - 3x_1 - 2x_2, \quad x_5 = -34. \quad 5.6.$$

$$x_3 = \frac{4}{3}x_1 + \frac{2}{3}x_2, \quad x_4 = -\frac{14}{3}x_1 - \frac{7}{3}x_2 - 1, \quad x_5 = \frac{4}{3}x_1 + \frac{2}{3}x_2 + 2. \quad 6.$$

$$8.8.2. x_1 = 2x_3 + 8x_4, \quad x_2 = -x_3 - 2x_4, \quad x_3, x_4 \in R, \quad x_5 = 0. \quad \vec{a}_1 = (2, -1, 1, 0, 0),$$

$\vec{a}_2 = (8, -2, 0, 1, 0)$ . 8.4.  $x_1 = x_2 = x_3 = x_4 = 0$ ; fundamental sistema mavjud emas.

$$8.6. \quad x_1 = x_3 + x_4 + 5x_5, \quad x_2 = -2x_3 - 2x_4 - 6x_5, \quad x_3, x_4, x_5 \in R;$$

$$\vec{a}_1 = (1, -2, 1, 0, 0), \quad \vec{a}_2 = (1, -2, 0, 1, 0), \quad \vec{a}_3 = (5, -6, 0, 0, 1). \quad 8.8. \quad \text{agar } \lambda = 0 \text{ bo'lsa,}$$

$x_1, x_2, x_3, x_4 \in R$  va ortonormal sistema  $\vec{e}_1, \dots, \vec{e}_4 \in R^4$  fundamental sistema bo'ladi;  $\lambda \neq 0$  bo'lsa,

$$x_1 = -3x_3 - 4x_4, \quad x_2 = -2x_3 - 3x_4, \quad x_3, x_4 \in R; \quad \vec{a}_1 = (-3, -2, 1, 0), \quad \vec{a}_2 = (-4, -3, 0, 1).$$

$$8.10. \quad \lambda = -1, \quad x_1 = x_3 = x_4 = 0, \quad x_2 \in R, \quad \vec{a} = (0, 1, 0, 0); \quad \lambda = -2,$$

$$x_2 = -2x_1 - 2x_3 - 2x_4, \quad x_1, x_3, x_4 \in R;$$

$$\vec{a}_1 = (1, -2, 0, 0), \quad \vec{a}_2 = (0, -2, 1, 0), \quad \vec{a}_3 = (0, -2, 0, 1); \quad \lambda \notin \{-1, -2\}, \quad x_1 = x_2 = x_3 = x_4 = 0,$$

fundamental sistema mavjud emas.

## VI MODUL. MATRITSALAR

16-§. Matritsalar va ular ustida amallar

$$5.5.1. \begin{pmatrix} 1 & 2 & -1 \end{pmatrix}, 5.2. \begin{pmatrix} 0 \\ 0 \\ 0 \\ 1 \end{pmatrix}, 5.3. \begin{pmatrix} \cos(\alpha + \beta) & -\sin(\alpha + \beta) \\ \sin(\alpha + \beta) & \cos(\alpha + \beta) \end{pmatrix},$$

$$\text{va } \begin{pmatrix} \cos(\alpha + \beta) & -\sin(\alpha + \beta) \\ \sin(\alpha + \beta) & \cos(\alpha + \beta) \end{pmatrix}, 5.4. \begin{pmatrix} 0 & 0 \\ 0 & 0 \end{pmatrix}, \begin{pmatrix} -4 & 6 & 0 & 2 \\ -3 & 2 & -2 & 2 \\ 4 & -1 & 4 & -3 \\ 1 & 6 & 6 & -2 \end{pmatrix}. 5.5.$$

$$\text{ko'paytma mavjud emas. } 5.6. \begin{pmatrix} 2 & -3 & -1 \\ 12 & -18 & -6 \\ -4 & 6 & 2 \end{pmatrix}, 6.1. \text{ n-juft bo'lsa, } \begin{pmatrix} 1 & 0 \\ 0 & 1 \end{pmatrix}, \text{ n-}$$

$$\text{toq bo'lsa, } \begin{pmatrix} 2 & -1 \\ 3 & -2 \end{pmatrix}, 6.2. \begin{pmatrix} 2^n & n2^{n-1} \\ 0 & 2^n \end{pmatrix}, 6.3. \begin{pmatrix} \cos n\alpha & -\sin n\alpha \\ \sin n\alpha & \cos n\alpha \end{pmatrix}, 6.4.$$

$$\begin{pmatrix} \lambda^n & n\lambda^{n-1} \\ 0 & \lambda^n \end{pmatrix}, 6.5. \begin{pmatrix} 1 & 0 & 0 & 0 \\ 0 & 2^n & 0 & 0 \\ 0 & 0 & 3^n & 0 \\ 0 & 0 & 0 & 4^n \end{pmatrix}, 6.6. \left(\frac{1}{2} \sin 2\alpha\right)^n \begin{pmatrix} 1 & 0 & 0 & 0 \\ 0 & 1 & 0 & 0 \\ 0 & 0 & 1 & 0 \\ 0 & 0 & 0 & 1 \end{pmatrix}, 7. 7.1.$$

$$\begin{pmatrix} a & 0 \\ b & a \end{pmatrix}, 7.2. \begin{pmatrix} a & 2b \\ 3b & a+3b \end{pmatrix}, 7.3. \begin{pmatrix} a & 3b \\ -5b & a+9b \end{pmatrix}, 7.4. \begin{pmatrix} a & b & c \\ 0 & a & b \\ 0 & 0 & a \end{pmatrix}, 7.5.$$

$$\begin{pmatrix} a & b & c \\ 0 & a & b \\ 0 & 0 & a \end{pmatrix}, 7.6. \begin{pmatrix} a & 0 & 0 \\ 0 & b & 0 \\ 0 & 0 & c \end{pmatrix}, 7.7. \begin{pmatrix} a & 0 & c \\ 0 & b & 0 \\ c & 0 & a \end{pmatrix}, 7.8. \begin{pmatrix} a & b & c & d \\ 0 & a & b & c \\ 0 & 0 & a & b \\ 0 & 0 & 0 & a \end{pmatrix}, 12. 12.1.$$

$$\begin{pmatrix} -2 & 3 \\ 3 & -4 \end{pmatrix}, 12.2. \frac{1}{ad-bc} \begin{pmatrix} d & -b \\ -c & a \end{pmatrix}, 12.3. \begin{pmatrix} \frac{3}{2} & \frac{1}{2} & \frac{3}{2} \\ -\frac{3}{2} & -\frac{1}{2} & -\frac{1}{2} \\ 1 & 0 & 1 \end{pmatrix}, 12.4.$$

$$\begin{pmatrix} -8 & 29 & -11 \\ -5 & 18 & -7 \\ 1 & -3 & 1 \end{pmatrix}. \quad 12.5. \quad \frac{1}{4} \begin{pmatrix} 2 & 0 & 0 & 0 \\ -3 & 2 & 0 & 0 \\ 25 & -14 & 12 & -16 \\ -19 & 10 & -8 & 12 \end{pmatrix}. \quad 12.6. \quad \begin{pmatrix} 1 & 1 & 1 & 1 \\ 1 & 1 & -1 & -1 \\ 1 & -1 & 1 & -1 \\ 1 & -1 & -1 & 1 \end{pmatrix}.$$

$$12.7. \quad \begin{pmatrix} 1 & -1 & 0 & \dots & 0 \\ 0 & 1 & -1 & \dots & 0 \\ 0 & 0 & 1 & \dots & 0 \\ \cdot & \cdot & \cdot & \cdot & \cdot \\ 0 & 0 & 0 & \dots & 1 \end{pmatrix}. \quad 12.8. \quad \begin{pmatrix} 1 & -a & 0 & 0 & \dots & 0 \\ 0 & 1 & -a & 0 & \dots & 0 \\ 0 & 0 & 1 & -a & \dots & 0 \\ \cdot & \cdot & \cdot & \cdot & \cdot & \cdot \\ 0 & 0 & 0 & 0 & \dots & 1 \end{pmatrix}. \quad 12.9.$$

$$\frac{1}{n+1} \begin{pmatrix} n & n-1 & n-2 & n-3 & \dots & 1 \\ n-1 & 2(n-1) & 2(n-2) & 2(n-3) & \dots & 2 \\ n-2 & 2(n-2) & 3(n-2) & 3(n-3) & \dots & 3 \\ n-3 & 2(n-3) & 3(n-3) & 4(n-3) & \dots & 4 \\ \cdot & \cdot & \cdot & \cdot & \cdot & \cdot \\ 1 & 2 & 3 & 4 & \dots & n \end{pmatrix}. \quad 12.10.$$

$$-\frac{1}{s} \begin{pmatrix} \frac{1+a_1s}{a_1^2} & \frac{1}{a_1a_2} & \frac{1}{a_1a_3} & \dots & \frac{1}{a_1a_n} \\ \frac{1}{1+a_2s} & \frac{1}{a_2^2} & \frac{1}{a_2a_3} & \dots & \frac{1}{a_2a_n} \\ \frac{1}{a_3a_1} & \frac{1}{a_3a_2} & \frac{1+a_3s}{a_3^2} & \dots & \frac{1}{a_3a_n} \\ \cdot & \cdot & \cdot & \cdot & \cdot \\ \frac{1}{a_na_1} & \frac{1}{a_na_2} & \frac{1}{a_na_3} & \dots & \frac{1+a_ns}{a_n^2} \end{pmatrix}, \quad s = \frac{1}{a_1} + \frac{1}{a_2} + \dots + \frac{1}{a_n}. \quad \mathbf{14.} \quad 14.1.$$

$$\begin{pmatrix} -3 & -6 \\ 2 & 4 \end{pmatrix}. \quad 14.2. \quad \begin{pmatrix} -1 & -1 \\ 2 & 3 \end{pmatrix}. \quad 14.3. \quad \begin{pmatrix} \frac{3}{2} & \frac{1}{2} & \frac{3}{2} \\ -\frac{3}{2} & -\frac{1}{2} & -\frac{1}{2} \\ 1 & 0 & 1 \end{pmatrix}. \quad 14.4. \quad \begin{pmatrix} 3 & -2 \\ 5 & -4 \end{pmatrix}.$$

$$14.5. \quad \frac{1}{17} \begin{pmatrix} 2 & 5 \\ 9 & 14 \end{pmatrix}. \quad 14.6. \quad \begin{pmatrix} 1 & 2 \\ 3 & 4 \end{pmatrix}. \quad 14.7. \quad \begin{pmatrix} 6 & 4 & 5 \\ 2 & 1 & 2 \\ 3 & 3 & 3 \end{pmatrix}. \quad 14.8. \quad \begin{pmatrix} 35 & 32 & 49 \\ 15 & 14 & 22 \\ 31 & 29 & 48 \end{pmatrix}. \quad 14.9.$$

$$\begin{pmatrix} 1 & 2 & 3 \\ 4 & 5 & 6 \\ 7 & 8 & 9 \end{pmatrix}. \quad 14.10. \quad \begin{pmatrix} 0 & 0 & 1 \\ 0 & 0 & 1 \\ 0 & 0 & 2 \end{pmatrix}. \quad 14.11. \quad \begin{pmatrix} 1 & 1 & 1 \\ 1 & 2 & 3 \\ 2 & 3 & 1 \end{pmatrix}. \quad 14.12.$$

$$\frac{1}{3} \begin{pmatrix} -101 & 55 & -176 & 217 \\ 22 & -11 & 40 & -47 \\ 8 & -4 & 14 & -19 \\ -3 & 3 & -6 & 6 \end{pmatrix}. \quad 15. \quad 15.1. \quad (1, -2, 3). \quad 15.2. \quad \left(15, \frac{59}{2}, -\frac{22}{5}\right) 15.3.$$

$$\langle 2, 2, 0 \rangle. \quad 15.4. \quad (1, 2, 3, 4). \quad 15.5. \quad (2, 0, 2, 2). \quad 15.6. \quad \left(2, -\frac{37}{2}, 2, -\frac{9}{2}\right). \quad 15.7. \quad (-1, 0, 2, -1).$$

$$15.8. \quad (0, 0, 0, 0). \quad 16. \quad 16.1. \quad X = \begin{pmatrix} 2 & 3 \\ 0 & 2 \end{pmatrix}, Y = \begin{pmatrix} -1 & -2 \\ 0 & -1 \end{pmatrix}. \quad 16.2.$$

$$X \in R^{2 \times 2}, Y = 2X + \begin{pmatrix} 0 & -1 \\ 1 & 0 \end{pmatrix}.$$

## VII MODUL. DETERMINANTLAR

17-§. O'rniga qo'yishlar.

$$1. \quad 1.1. \quad \begin{pmatrix} 1 & 2 & 3 & 4 & 5 \\ 2 & 1 & 3 & 4 & 5 \end{pmatrix}. \quad 1.2. \quad \begin{pmatrix} 1 & 2 & 3 & 4 & 5 & 6 \\ 6 & 5 & 3 & 2 & 1 & 4 \end{pmatrix}. \quad 2. \quad 2.1. \\ \langle 5 \ 3 \rangle \langle 4 \ 7 \rangle. \quad 2.5. \quad \langle 2 \ 4 \rangle. \langle n-1 \ 2n \rangle. \quad 2.6. \\ \langle n+1 \rangle \langle n+2 \rangle. \langle 2n \rangle. \quad 4. \quad 4.1. \quad \alpha=2, \beta=4. \quad 4.2. \quad \alpha=10, \beta=6. \quad 5. \\ \langle 0 \ 9 \ 8 \ 7 \ 6 \ 5 \ 4 \ 3 \ 2 \ 1 \rangle, C_{10}^2 = 45 \text{ ta inversiya. } 8. \quad 8.1. \quad \frac{3n(n-1)}{2}. \quad 8.2. \\ \frac{3n(n+1)}{2}. \quad 8.3. \quad \frac{n(3n+1)}{2}. \quad 8.4. \quad \frac{n(3n-1)}{2}.$$

18-§. Determinantlar

$$1. \quad 1.1. \quad 6. \quad 1.2. \quad -1. \quad 1.3. \quad 2. \quad 1.4. \quad 0. \quad 1.5. \quad -\sin \alpha. \quad 1.6. \quad 1. \quad 1.7. \quad 1. \quad 1.8. \quad 0. \quad 1.9. \\ 3abc - a^3 - b^3 - c^3. \quad 1.10. \quad (ab+bc+ca)x + abc. \quad 1.11. \quad 1. \quad 1.12. \quad -\frac{3}{2} - \frac{3i\sqrt{3}}{2}. \quad 1.13. \\ 1 + \alpha^2 + \beta^2 + \gamma^2. \quad 1.14. \quad \text{Birinci qatorga 2- va 3-qatorlarni qo'shib Viet} \\ \text{formulalaridan foydalaning. } 4. \quad 4.1. \quad n!. \quad 4.2. \quad (-1)^{n-1} n!. \quad 4.3.$$

$$x_1 x_2 \dots x_n \left(1 + \frac{1}{x_1} + \dots + \frac{1}{x_n}\right). \quad 4.4. \quad x_1(x_2 - a_{12})(x_3 - a_{23}) \dots (x_n - a_{n-1,n}). \quad 4.5.$$

$$(x-1)(x-2) \dots (x-n+1). \quad 4.6. \quad (-1)^n (a-1)(a-2) \dots (a-n). \quad 4.7. \quad n+1. \quad 4.8.$$

$$2^{n+1} - 1. \quad 4.9. \quad x^n + (a_1 + a_2 + \dots + a_n)x^{n-1}. \quad 4.10. \quad \prod_{k=1}^n (1 - a_{kk}x). \quad 5. \quad 5.1. \quad (1,3,2). \quad 5.2.$$

$$(2,1,3). \quad 5.3. \quad \left(\frac{5}{3}, 0, -\frac{2}{3}\right). \quad 5.4. \quad \left(\frac{1}{3}, 0, -\frac{1}{6}\right). \quad 5.5. \quad (-1, -1, 0, 1). \quad 5.6. \quad \left(-\frac{3}{5}, \frac{6}{5}, 3, 2\right). \quad 5.7.$$

$$\left(-3, 0, -\frac{1}{2}, \frac{2}{3}\right). \quad 5.8. \quad (-1, 2, 0, 1). \quad 5.9. \quad (1, 2, 3, 4). \quad 5.10. \quad (1, 0, -1, 0). \quad 8. \quad 8.1. \quad 2. \quad 8.2. \quad 2. \quad 8.3.$$

3. 8.4. 3. 8.5.3. 8.6. 2. 8.7. 5. 8.8. n, agar n-toq bo'lsa, n-1, agar n-juft bo'lsa. 9.

$$9.1. \quad \begin{pmatrix} -2 & 1 \\ \frac{3}{2} & -\frac{1}{2} \end{pmatrix}. \quad 9.2. \quad \begin{pmatrix} 7 & -4 \\ -5 & 3 \end{pmatrix}. \quad 9.3. \quad \begin{pmatrix} \cos \alpha & \sin \alpha \\ -\sin \alpha & \cos \alpha \end{pmatrix}. \quad 9.4.$$

$$\frac{1}{18-5i} \begin{pmatrix} 5+4i & -3-i \\ -1+i & 2-3i \end{pmatrix}. \quad 9.5. \quad \begin{pmatrix} 1 & -1 & 1 \\ -38 & 41 & -34 \\ 27 & -29 & 24 \end{pmatrix}. \quad 9.6. \quad -\frac{1}{34} \begin{pmatrix} -42 & -15 & 58 \\ 24 & 11 & -38 \\ 22 & 3 & -32 \end{pmatrix}.$$

$$9.7. \quad \frac{1}{4} \begin{pmatrix} 1 & 1 & 1 & 1 \\ 1 & 1 & -1 & -1 \\ 1 & -1 & 1 & -1 \\ 1 & -1 & -1 & 1 \end{pmatrix}. \quad 9.8. \quad -\frac{1}{4} \begin{pmatrix} -1 & -1 & -1 & -1 \\ -1 & -i & 1 & -i \\ -1 & 1 & -1 & 1 \\ -1 & -i & 1 & i \end{pmatrix}.$$

## VIII MODUL. VEKTOR FAZOLAR

19-§. Vektor fazo. Fazoostilar kesishmasi, yigindisi.

1. 1.1.  $\dim V = 1$ , bazislardan biri  $\begin{pmatrix} 1 & 0 \\ 0 & 0 \end{pmatrix}$ . 1.2.  $\dim V = 4$ , bazislardan biri

$$\begin{pmatrix} 1 & 0 \\ 0 & 0 \end{pmatrix}, \begin{pmatrix} 0 & 1 \\ 0 & 0 \end{pmatrix}, \begin{pmatrix} 0 & 0 \\ 1 & 0 \end{pmatrix}, \begin{pmatrix} 0 & 0 \\ 0 & 1 \end{pmatrix}. \quad 1.3. \quad \dim V = 9, \text{ bazislardan biri } \begin{pmatrix} 1 & 0 & 0 \\ 0 & 0 & 0 \\ 0 & 0 & 0 \end{pmatrix},$$

$$\begin{pmatrix} 0 & 1 & 0 \\ 0 & 0 & 0 \\ 0 & 0 & 0 \end{pmatrix}, \begin{pmatrix} 0 & 0 & 1 \\ 0 & 0 & 0 \\ 0 & 0 & 0 \end{pmatrix}, \begin{pmatrix} 0 & 0 & 0 \\ 1 & 0 & 0 \\ 0 & 0 & 0 \end{pmatrix}, \begin{pmatrix} 0 & 0 & 0 \\ 0 & 1 & 0 \\ 0 & 0 & 0 \end{pmatrix}, \begin{pmatrix} 0 & 0 & 0 \\ 0 & 0 & 1 \\ 0 & 0 & 0 \end{pmatrix}, \begin{pmatrix} 0 & 0 & 0 \\ 0 & 0 & 0 \\ 1 & 0 & 0 \end{pmatrix}, \begin{pmatrix} 0 & 0 & 0 \\ 0 & 0 & 0 \\ 0 & 1 & 0 \end{pmatrix},$$

$$\begin{pmatrix} 0 & 0 & 0 \\ 0 & 0 & 0 \\ 0 & 0 & 1 \end{pmatrix}. 1.7. \dim V = 6, \text{ bazislardan biri } \begin{pmatrix} 0 & 1 & 0 \\ 0 & 0 & 0 \\ 0 & 0 & 0 \end{pmatrix}, \begin{pmatrix} 0 & 0 & 1 \\ 0 & 0 & 0 \\ 0 & 0 & 0 \end{pmatrix}, \begin{pmatrix} 0 & 0 & 0 \\ 1 & 0 & 0 \\ 0 & 0 & 0 \end{pmatrix},$$

$$6.1. \begin{pmatrix} 0 & 0 & 0 \\ 0 & 0 & 1 \\ 0 & 0 & 0 \end{pmatrix}, \begin{pmatrix} 0 & 0 & 0 \\ 0 & 0 & 0 \\ 1 & 0 & 0 \end{pmatrix}, \begin{pmatrix} 0 & 0 & 0 \\ 0 & 0 & 0 \\ 0 & 1 & 0 \end{pmatrix}. \quad 3. \quad 3.1. \dim V = n - 1, \text{ bazis}$$

$\vec{a}_1 = (1, 0, 0, \dots, 0), \dots, \vec{a}_{n-1} = (0, 0, 0, \dots, 1, 0).$  3.2.  $\dim V = n - 1$ , bazislardan biri

$\vec{a}_1 = (1, -1, 0, \dots, 0), \vec{a}_2 = (0, 1, -1, \dots, 0), \dots, \vec{a}_{n-1} = (0, 0, 0, \dots, 1, -1).$  3.3.  $n$ -juft son

bo'lsa,  $\dim V = \frac{n}{2}$ , bazislardan biri  $\vec{a}_1 = (1, 0, 0, \dots, 0), \vec{a}_2 = (0, 0, 1, \dots, 0) \dots,$

$\vec{a}_{\frac{n}{2}} = (0, 0, 0, \dots, 1, 0);$   $n$ -toq son bo'lsa,  $\dim V = -\frac{n+1}{2}$ , bazislardan biri

$\vec{a}_1 = (1, 0, 0, \dots, 0), \vec{a}_2 = (0, 0, 1, \dots, 0) \dots, \vec{a}_{\frac{n+1}{2}} = (0, 0, 0, \dots, 0, 1).$  4. 4.1. tashkil etmaydi.

4.2. tashkil etmaydi. 4.3. to'g'ri chiziq koordinatalar boshidan o'tgan bo'lsa tashkil etadi, aks holda tashkil etmaydi. 4.4. tashkil etadi. 4.5. tashkil etmaydi. 4.6. tashkil etadi.

6. 6.1. o'lchovi 3, bazislardan biri  $\vec{a}_1, \vec{a}_2, \vec{a}_4.$  6.2. o'lchovi 3, bazislardan biri

$\vec{a}_1, \vec{a}_2, \vec{a}_4.$  6.3. o'lchovi 3, bazislardan biri  $\vec{a}_1, \vec{a}_2, \vec{a}_5.$  6.4. o'lchovi 3, sistema

o'ziga bazis.

## 20-§. Skalyar ko'paytmali vektor fazolar.

Evklid vektor fazolar. Vektor fazolar izomorfizmi.

5. 5.2. vektorlar sistemasi chiziqli bog'liq bo'lganligi uchun uni ortogonallab bo'lmaydi. 5.3.  $\vec{b}_1 = \vec{a}_1, \vec{b}_2 = \vec{a}_3, \vec{b}_3 = (1, -3, 3, 4).$  5.4.

$\vec{b}_1 = \vec{a}_1, \vec{b}_2 = (-2, 1, 2), \vec{b}_3 = (8, 32, -8).$  5.5.

$\vec{b}_1 = \vec{a}_1, \vec{b}_2 = (0, 1, 0, 0), \vec{b}_3 = (-1, 0, 0, 1), \vec{b}_4 = (-1, 0, 2, -1).$  5.6.

$\vec{b}_1 = \vec{a}_1, \vec{b}_2 = (2, 1, -2, -2), \vec{b}_3 = (2, 6, 4, 1).$  11. 11.1.  $\vec{b}_1 = (2, 1, 0), \vec{b}_2 = (-3, 0, 1).$  11.2.  $\emptyset.$

11.3.  $\vec{b}_1 = (-1, -1, 0), \vec{b}_2 = (2, 0, 5, 1)$ . 11.4.  $\vec{b}_1 = (-1, 1, 1, 0), \vec{b}_2 = (1, 2, 0, 1)$ . 11.5.  
 $\vec{b}_1 = (1, -3, -2, 0), \vec{b}_2 = (0, -5, -3, 1)$ . **12.** 12.1.  $\vec{b}_1 = (1, 0, 1, 0), \vec{b}_2 = (0, 1, 0, 1)$ . 12.2.  
 $\vec{b}_1 = (-1, 1, 0), \vec{b}_2 = (-1, 0, 1)$ .

### IX MODUL. CHIZIQLI AKSLANTIRISHLAR

21-§. Chiziqli akslantirish. Chiziqli operator yadrosi va obrazi. Chiziqli operator matritsasi.

**5.** 5.1.  $\begin{pmatrix} 2 & -11 & 6 \\ 1 & -7 & 4 \\ 2 & -1 & 0 \end{pmatrix}$ . 5.2.  $\frac{1}{3} \begin{pmatrix} -6 & 11 & 5 \\ -12 & 13 & 10 \\ 6 & -5 & -5 \end{pmatrix}$ . **9.** 9.1.  $r=1, d=1$ . 9.2.

$r=2, d=0$ . 9.3.  $r=1, d=2$ . 9.4.  $r=2, d=1$ . 9.5.  $r=3, d=0$ . 9.6.  $r=1, d=3$ .  
 9.7.  $r=2, d=2$ . 9.8.  $r=3, d=1$ .

22-§. Chiziqli operatorlar ustida amallar. Chiziqli algebralar.

Teskari operator. Xos vektorlar va xos qiymatlar.

**1.** 1.1.  $\begin{pmatrix} 1 & 0 \\ 0 & 1 \end{pmatrix}$ . 1.2.  $\begin{pmatrix} 1 & 1 \\ 1 & 1 \end{pmatrix}$ . **2.**  $\begin{pmatrix} 2 & -2 \\ -10 & 10 \end{pmatrix}$ . **6.** 6.1.  $\begin{pmatrix} 1 & 0 \\ -1 & 1 \end{pmatrix}$ . 6.2.

$\begin{pmatrix} 2 & 0 & 2 \\ -8 & 1 & -5 \\ -1 & 0 & -1 \end{pmatrix}$ . 6.3.  $\begin{pmatrix} -16 & -5 & 7 & -1 \\ 14 & 5 & -6 & 1 \\ 11 & 3 & -5 & 1 \\ 3 & 1 & -1 & 0 \end{pmatrix}$ . 6.4.  $\begin{pmatrix} 1 & -1 & 0 & 0 \\ 10 & 1 & -1 & 0 \\ 0 & 0 & 1 & -1 \\ 0 & 0 & 0 & 1 \end{pmatrix}$ . **7.** 7.1.

$\lambda_1 = 0, \vec{a} = c_1(1, -2); \lambda_2 = 4, \vec{a} = c_2(1, 2), c_1, c_2 \neq 0$ . 7.2.

$\lambda_1 = \lambda_2 = 2, \vec{a} = c_1(1, 0), c_1 \neq 0$ . 7.3.  $\lambda_1 = \lambda_2 = \lambda_3 = 1, \vec{a} = c(1, 3, -3), c \neq 0$ . 7.4.

$\lambda = 2, \vec{a} = c(1, 0, 0), c \neq 0$ .

### X MODUL. CHIZIQLI TENGSIZLIKLAR SISTEMASI

23-§. Chiziqli tengsizliklar sistemasi. Qavariq konus.

**3.** 3.1. ikkalasi ham natija emas. 3.2. 2) sistema 1)ning natijasi. 3.3. 2) sistema 1)ning natijasi. 3.4. 1) sistema 2)ning natijasi. 3.5. teng kuchli. 3.6. 2) sistema



1)ning natijasi. **13.** 13.1.  $f_{\min} = 0, x_1 = 3, x_2 = 3.$  13.2.  $f_{\min} = -3\frac{1}{2}, x_1 = \frac{3}{2}, x_2 = \frac{5}{4}.$   
 13.3.  $f_{\min} = -6, x_1 = 0, x_2 = 6.$  13.4.  $f_{\min} = 3, x_1 = 0, x_2 = 0.$  **14.** 14.1.  
 $f_{\max} = 14\frac{1}{2}, x_1 = 1\frac{1}{4}, x_2 = 3.$  14.2.  $f_{\max} = 17, x_1 = 5, x_2 = 1.$  14.3.  
 $f_{\max} = 6, x_1 = 0, x_2 = \frac{3}{2}.$  14.4.  $f_{\max} = 9\frac{1}{7}, x_1 = 3\frac{6}{7}, x_2 = 1\frac{3}{7}.$

## XI MODUL. BUTUN SONLAR HALQASIDA BO'LINISH MUNOSABATI

### 24-§. Tub va murakkab sonlar. EKUB. EKUK.

**7.** 7.1. 12, 168. 7.2. 9, 217. 7.3. 24, 1170. 7.4. 8, 624. 7.5. 30, 2418. 7.6. 8, 1440. 7.7. 12, 1960. 7.8. 24, 2808. 7.9. 16, 2340. 7.10. 30, 3844. 7.11. 8, 3096. 7.12. 24, 8736. **8.** 8.1. 88. 8.2. 357. 8.3. 1. 8.4. 113. 8.5. 3109. 8.6. 3911. 8.7. 382. 8.8. 2011. 8.12. 490. **9.** 9.1. 30,120; 60,90; 90,60; 120,30. 9.2. 20,420; 60,140; 420,20; 140,60. 9.3. 552,115;435,232; 232,435; 115,552. 9.4. 495,315; 315,495.

### 25-§. Chekli zanjir kasrlar. Munosib kasrlar.

**2.** 2.1. [1,9]. 2.2. [0;2,15]. 2.3. [-2;1,30,2]. 2.4. [1;2,3,4]. 2.5. [0;1,4,3,2]. 2.6. [-3;1,1,2]. 2.7. [2;2,3,1,5]. 2.8. [0;1,2,5,2]. 2.9. [1;4,2,1,7]. 2.10. [1;1,2,1,2,1,2]. 2.11. [0;1,2,3,4,5]. 2.12. [0;1,1,38]. **3.** 3.1. [3;(3,6)]. 3.2. [3;(2,6)]. 3.3. [3;(1,1,1,1,6)]. 3.4. [5;(3,2,3,10)]. 3.5. [5;(2,10)]. 3.6. [7;(1,2,7,2,1,14)]. 3.7. [(2)]. 3.8. [(1,2)]. 3.9. [(2,2,2,1,12,1)]. 3.10. [2;(1)]. 3.11. [1;(1,1,4,1)]. 3.12. [2;(18,2)].  
**4.** 4.1.  $\frac{20}{31}$ . 4.2.  $\frac{131}{583}$ . 4.3.  $\frac{7}{23}$ . 4.4.  $\frac{97}{113}$ . 4.5.  $\frac{17}{83}$ . 4.6.  $\frac{359}{113}$ . 4.7.  $\frac{9+2\sqrt{39}}{5}$ . 4.8.  $1+\sqrt{3}$ . 4.9.  $\sqrt{11}$ . 4.10.  $\sqrt{3}$ . 4.11.  $5-\sqrt{15}$ . 4.12.  $\frac{245-\sqrt{85}}{74}$ . **5.** 5.1.  
 $x = -8360 - 117t, y = 2717 + 38t, t \in Z.$  5.3.  $x = -2 + 4t, y = -4 + 7t, t \in Z.$  5.5.  
 $x = -125 - 114t, y = 45 + 41t, t \in Z.$  5.7.  $x = 1 - 9t, y = 39 + 49t, t \in Z.$  5.9.  
 $x = 9 + 31t, y = 2 - 12t, t \in Z.$  5.11.  $x = 75 + 23t, y = -120 - 37t, t \in Z.$  5.13.  
 $x = 4 + 17t, y = -11 - 53t, t \in Z.$  5.15.  $x = -15 - 39t, y = -25 - 64t, t \in Z.$  5.17.  
 $x = -15 + 37t, y = 18 - 43t, t \in Z.$  5.19.  $x = 1270 - 559t, y = -2020 - 571t, t \in Z.$

## 26-§.Sistematik sonlar va ular ustida amallar

1. 1.1.  $11000_2$ ; 1.2.  $10001111_2$ ; 1.3.  $101011_2$ ; 1.4.  $111_2$ ; 1.5.  $2255025_7$ ; 1.6.  $3(10)94913_{12}$ ; 1.7.  $30413_7$ ; 1.8.  $190000_{12}$ ; 1.9.  $56_7$  va  $\kappa$ oldik  $202_7$ ; 1.10.  $(10)94_{12}$  va  $\kappa$ oldik  $87_{12}$ ; 1.11.  $2,4_8$ . 2. 2.1.  $100001_2$ ; 2.2.  $11, 11101_2$ ; 2.3.  $100000, 11001_2$ ; 2.4.  $0, 1337_8$ ; 2.5.  $11, 14_8$ . 3. 3.1.  $1_8$ ; 3.2.  $1_6$ ; 3.3.  $1_8$ ; 3.4.  $1_5$ ; 3.5.  $1_5$ ; 3.6.  $1_8$ ; 3.7.  $1_3$ ; 3.8.  $1_7$ ; 3.9.  $1_7$ ; 3.10.  $1_8$ ; 3.11.  $1_4$ ; 3.12.  $1_8$ ; 3.13.  $1_6$ . 4. 4.1.  $39$ ; 4.2.  $205$ ; 4.3.  $229$ ; 4.4.  $2617$ ; 4.5.  $704$ ; 4.6.  $8387$ ; 4.7.  $1668$ ; 4.8.  $1523$ ; 4.9.  $6871$ ; 4.10.  $5669$ ; 4.11.  $42923$ . 5. 5.1.  $0,875$ ; 5.2.  $0,75$ ; 5.3.  $25,9365$ ; 5.4.  $287,388671875$ ; 5.5.  $0,044921875$ . 6. 6.1.  $4(10)2(11)_{12}$ ; 6.2.  $230578_9$ ; 6.3.  $11202102120100_3$ ; 6.4.  $367341_8$ ; 6.5.  $10001000110110111101100_2$ ; 6.6.  $2121311_5$ ; 6.7.  $4126_8$ . 7. 7.1.  $11111111010 = 2210122_3 = 31132_5$ ; 7.2.  $1010111000010_2 = 10211012_3 = 42121_5$ ; 7.3.  $2061_7$ ; 7.4.  $1653212_7$ ; 7.5.  $55173_8$ ; 7.6.  $42167_8$ . 8. 8.1.  $4$ ; 8.2.  $5$ ; 8.3.  $9$ ; 8.4.  $9$ ; 8.5.  $5$ ; 8.6.  $9$ ; 8.7.  $7$ ; 8.8.  $6$ ; 8.9.  $5$ . 9. 9.1.  $5$ ; 9.2.  $8$ ; 9.3.  $6$ ; 9.4.  $7$ ; 9.5.  $7$ ; 9.6.  $7$ ; 9.7.  $7$ ; 9.8.  $9$ ; 9.9.  $6$ ; 9.10.  $g, g \geq 2$ .

## XII MODUL. TAQQOSLAMALAR

27-§. Butun sonlar halqasida taqqoslamalar.Eyler va Ferma teoremlari

2. 2.1.  $1$ ; 2.2.  $1$ ; 2.3.  $4$ ; 2.4.  $0$ ; 2.5.  $1$ ; 2.6.  $1$ ; 2.7.  $0$ ; 2.8.  $0$ ; 2.9.  $1$ ; 2.10.  $12$ ; 2.11.  $3$ ; 2.12.  $11$ . 4.4.1.  $88$ ; 4.2.  $67$ ; 4.3.  $24$ ; 4.4.  $9$ ; 4.5.  $27$ ; 4.6.  $36$ ; 4.7.  $9^{10} \equiv 1 \pmod{100}$ ,  $9^{10q+r} \equiv 9^r \pmod{100}$   $9^9 \equiv 9 \pmod{10}$   
 $9^{99} \equiv 9^9 \equiv 9 \pmod{100}$ ;  
4.8.  $7^4 = 2401 \equiv 1 \pmod{100}$ ,  $7^{100} \equiv 1 \pmod{100}$   $7^{999} \equiv 7^{100q+89} \equiv 7^{89} \pmod{100}$   
 $7^{88} \equiv 1 \pmod{100}$ ,  $7^{89} \equiv 7 \pmod{100}$ . 8. 8.1.  $7$ ; 8.2.  $1$ ; 8.3.  $22$ ; 8.4.  $5$ ; 8.5.  $32$ ; 8.6.  $29$ ; 8.7.  $19$ ; 8.8.  $1$ . 8.9.  $1$ ; 8.10.  $1$ . 9. 9.1.  $2$ ; 9.2.  $1, 4, 1, 4$ ; 9.3.  $13$ ; 9.4.  $7$ ; 9.5.  $14$ ; 9.6.  $14$ ; 9.7.  $65$ ; 9.8.  $49$ . 10. 10.1.  $21$ ; 10.2.  $22$ ; 10.3.  $64$ ; 10.4.  $21$ ; 10.5.  $375$ .  
10.6.  $4$ ; 10.7.  $24$ ; 10.8.  $1$ ; 10.9.  $23$ ; 10.10.  $8$ ; 10.11.  $8$ ; 10.12.  $60$ ; 10.13.  $147$ ;

10.14. 48; 10.15. 127; 10.16. 5. **11.** 11.1. 2; 11.2. 6; 11.3. 1; 11.4. 5; 11.5. 2;  
 11.6. 0; 11.7. 2; 11.8. 2; 11.9. 70; 11.10. 7. 11.11. 19; 11.12. 30; 11.13. 20;  
 11.14. 1; 11.15. 12; 11.16. 10; 11.17. 6; 11.18. 70. **12.** 12.1. 01; 12.2. 67; 12.3.  
 31; 12.4. 97; 12.5. 01; 12.6. 61; 12.7. 61; 12.8. 97; 12.9. 76; 12.10. 92; 12.11.  
 84.

28-§. Birinchi darajali va tub modul bo'yicha yuqori darajali taqqoslamalar

**2.** 2.1.  $x \equiv 2 \pmod{3}$ ; 2.2.  $\emptyset$ ; 2.3.  $x \equiv 2 \pmod{5}$ ; 2.4.  $x \equiv 5 \pmod{7}$ ; 2.5.  
 $x \equiv 4, 9 \pmod{10}$ ; 2.6.  $x \equiv 3 \pmod{7}$ ; 2.7.  $x \equiv 8 \pmod{11}$ ; 2.8.  
 $x \equiv 2, 5, 8, 11 \pmod{12}$ . **3.** 3.1.  $x \equiv 3 \pmod{13}$ ; 3.2.  $\emptyset$ ; 3.3.  $x \equiv 3, 10 \pmod{14}$ ;  
 3.4.  $x \equiv 2 \pmod{27}$ ; 3.5.  $x \equiv 6 \pmod{23}$ ; 3.6.  $x \equiv 3 \pmod{37}$ ; 3.7.  
 $x \equiv 11 \pmod{41}$ ; 3.8.  $x \equiv 38 \pmod{51}$ . **4.** 4.1.  $x \equiv 4 \pmod{13}$ ; 4.2.  
 $x \equiv 3 \pmod{12}$ ; 4.3.  $x \equiv 10 \pmod{12}$ ; 4.4.  $x \equiv 14 \pmod{19}$ ; 4.5.  
 $x \equiv 13 \pmod{34}$ ;  
 4.6.  $\emptyset$ . 4.7.  $x \equiv 3 \pmod{22}$ ; 4.8.  $x \equiv 1, 14, 27 \pmod{39}$ . **5.** 5.1.  $x \equiv 9 \pmod{98}$ ;  
 5.2.  $x \equiv 28 \pmod{119}$ ; 5.3.  $\emptyset$ ; 5.4.  $x \equiv 11 \pmod{169}$ ; 5.5.  $x \equiv 73 \pmod{117}$ ;  
 5.6.  $x \equiv 29 \pmod{201}$ ; 5.7.  $x \equiv 29, 138, 247 \pmod{327}$ ; 5.8.  
 $x \equiv 17, 96, 175, 254, 333 \pmod{395}$ ; 5.9.  $x \equiv 153, 461, 769 \pmod{924}$ ;  
 5.10.  $x \equiv 1630 \pmod{2413}$ ; 5.11.  $x \equiv 200, 751, 1302, 1853, 2404 \pmod{2755}$ .  
 5.12.  $\emptyset$ . **6.** 6.1.  $x \equiv 3 \pmod{23}$ ; 6.2.  $x \equiv 11 \pmod{24}$ ; 6.3.  $x \equiv 11 \pmod{24}$ ;  
 6.4.  $x \equiv 23 \pmod{30}$ ; 6.5.  $\emptyset$ ; 6.6.  $x \equiv 2, 7, 12, 17, 22, 27 \pmod{30}$ ;  
 6.7.  $x \equiv 2 \pmod{41}$ ; 6.8.  $x \equiv 21 \pmod{50}$ . **7.** 7.1.  $x \equiv a + b \pmod{ab}$ ;  
 7.2.  $x \equiv (a - b)^{\varphi(ab)-1} \pmod{ab}$ ; 7.3.  $x \equiv (a - b)(a + b)^{\varphi(ab)-1} \pmod{ab}$ ;  
 7.4.  $x \equiv (a - b) \pmod{ab}$ ; 7.5.  $x \equiv \frac{1+p}{2} \pmod{p}$ ; 7.6.  $x \equiv m - 1 \pmod{m}$ ;  
 7.7.  $x \equiv a \pmod{m}$ ; 7.8.  $x \equiv a^{p-2} \pmod{p}$ . **8.** 8.1. )  $x = 2 + 3t, y = -2t, t \in \mathbb{Z}$ ;  
 8.2.  $x = 2 + 3t, y = 2 + 4t, t \in \mathbb{Z}$ ; 8.3.  $x = 3 + 4t, y = 1 - 3t, t \in \mathbb{Z}$ ;  
 8.4.  $x = 3 + 4t, y = -3 - 5t, t \in \mathbb{Z}$ ; 8.5.  $x = 7 + 8t, y = -2 - 3t, t \in \mathbb{Z}$ ;  
 8.6.  $x = -3 + 13t, y = 4 - 17t, t \in \mathbb{Z}$ ; 8.7.  $x = -7 + 15t, y = 12 - 23t, t \in \mathbb{Z}$ ;

8.8.  $x = -1 + 16t, y = -8 + 17t, t \in \mathbb{Z}$ ; 8.9.  $x = 1 + 4t, y = 2 + 13t, t \in \mathbb{Z}$ ;  
8.10.  $\emptyset$ . 8.11.  $x = 20 + 21t, y = 23 + 25t, t \in \mathbb{Z}$ ; 8.12.  
 $x = 47 + 105t, y = 21 + 47t, t \in \mathbb{Z}$ ; 8.13.  $x = 94 + 111t, y = 39 + 47t, t \in \mathbb{Z}$ . **9.**  
9.1.  $x \equiv 18 \pmod{35}$ ; 9.2.  $\emptyset$ ; 9.3.  $x \equiv 12 \pmod{35}$ ; 9.4.  $x \equiv 105 \pmod{225}$ ;  
9.5.  $x \equiv 170b_1 + 52b_2 \pmod{221}$ ; 9.6.  $x \equiv 100 \pmod{143}, y \equiv 111 \pmod{143}$ ;  
9.7.  $x \equiv 1 \pmod{5}, y \equiv 2 \pmod{5}$ ; 9.8.  $\emptyset$ . **10.** 10.1.  $x \equiv 91 \pmod{120}$ ;  
10.2.  $x \equiv 59 \pmod{160}$ ; 10.3.  $x \equiv 33 \pmod{90}$ ; 10.4.  $x \equiv 86 \pmod{315}$ ;  
10.5.  $x \equiv 256 \pmod{1547}$ ; 10.6.  $\emptyset$ ; 10.7.  $x \equiv 47 \pmod{420}$ ; 10.8.  
 $x \equiv 49 \pmod{420}$ ; 10.9.  $x \equiv 125 \pmod{1496}$ ; 10.10.  
 $x \equiv 11151b_1 + 11800b_2 + 16875b_3 \pmod{39825}$ ; 10.11.  $x \equiv 8479 \pmod{15015}$ . **11.**  
11.1.  $x \equiv 17 \pmod{90}$ ; 11.2.  $x \equiv 4 \pmod{105}$ ; 11.3.  $\emptyset$ ; 11.4.  
 $x \equiv 299 \pmod{385}$ ;  
11.5.  $\emptyset$ ; 11.6.  $x \equiv 9573 \pmod{13923}$ ; 11.7.  $x \equiv 85056 \pmod{130169}$ . **12.** 12.1.  
 $a \equiv 5 \pmod{6}$ ; 12.2.  $a \equiv 0 \pmod{4}$ ; 12.3.  $a \equiv 1 \pmod{7}$ ; 12.4.  $a \equiv 1 \pmod{6}$ .  
**13.** 13.1.  $x^3 + 2x^2 + 3 \equiv 0 \pmod{11}$ ; 13.2.  $x^3 + 18x^2 + 4x - 17 \equiv 0 \pmod{59}$ ;  
13.3.  $x^6 + 4x^5 + 22x^4 + 76x^3 + 70x^2 + 52x + 39 \equiv 0 \pmod{101}$ ;  
13.4.  $x^n + a_1x^{n-1}h + \dots + a_nh \equiv 0 \pmod{m}$ , bu erda  $a_0h \equiv 1 \pmod{m}$ . **14.** 14.1.  
 $2x^3 + 3 \equiv 0 \pmod{5}$ ; 14.2.  $3x^4 + 2x^3 + 3x^2 + 2x \equiv 0 \pmod{5}$ ;  
14.3.  $3x^2 + x - 2 \equiv 0 \pmod{7}$ ; 14.4.  $5x^6 + x^5 + 5x^4 + 3x^2 + 3x + 4 \equiv 0 \pmod{7}$ ;  
14.5.  $6x^8 + 7x^5 + 3x^4 + 3x^3 + x^2 + 3 \equiv 0 \pmod{11}$ . **15.** 15.1.  $x \equiv 2 \pmod{3}$ ;  
15.2.  $\emptyset$ ; 15.3.  $x \equiv 1 \pmod{3}$ ; 15.4.  $x \equiv 1 \pmod{3}$ ; 15.5.  $x \equiv 1 \pmod{3}$ ;  
15.6.  $x \equiv 4 \pmod{5}$ , 15.7.  $x \equiv 3 \pmod{5}$ ; 15.8.  $x \equiv 2 \pmod{5}$ ;  
15.9.  $\emptyset$ ; 15.10.  $x \equiv 1 \pmod{5}$ ; 15.11.  $x \equiv 1, 2 \pmod{5}$ . **16. 16.1.**  
 $x \equiv 2 \pmod{7}$ ;  
16.2.  $x \equiv 4 \pmod{7}$ ; 16.3.  $x \equiv 1, 2, 3, 4, 5, 6 \pmod{7}$ ; 16.4.  $x \equiv 4, 5 \pmod{7}$ ;

16.5.  $x \equiv 4 \pmod{11}$ ; 16.6.  $\emptyset$ . 16.7.  $x \equiv 7, 9 \pmod{11}$ ; 16.8.  
 $x \equiv 12 \pmod{13}$ ;  
 16.9.  $x \equiv 7, 13 \pmod{23}$ . **17.** 17.1.  $(x-3)(x-4)^2 \equiv 0 \pmod{5}$ ;  
 17.2.  $(x-1)(x-2)^2 \equiv 0 \pmod{5}$ ; 17.3.  $(x-1)(x-2)(x-3)(x-4) \equiv 0 \pmod{5}$ ;  
 17.4.  $3(x-1)(x-2)(x-3) \equiv 0 \pmod{5}$ ; 17.5.  
 $(x-1)(x-2)(x-3)(x-6) \equiv 0 \pmod{7}$ ;  
 17.6.  $5(x-1)(x-3)(x-5) \equiv 0 \pmod{7}$ ; 17.7.  $6(x-1)(x-2)(x-9) \equiv 0 \pmod{11}$ ;  
 17.8.  $(x-2)(x-3)(x-9) \equiv 0 \pmod{17}$ ; 17.9.  
 $(x-1)(x-13)(x-21) \equiv 0 \pmod{23}$ ;  
 17.10.  $(x-2)^2(x-11)(x-28) \equiv 0 \pmod{29}$ ; 17.11.  
 $(x-17)(x-28)(x-30) \equiv 0 \pmod{31}$ .

#### 29-§. Tub modul bo'yicha boshlang'ich ildizlar va indekslar

**1.** 1.1. -1; 1.2. 1; 1.3. 1; 1.4. 1; 1.5. -1; 1.6. -1; 1.7. -1; 1.8. -1; 1.9.  
 1. **2.** 2.1. -1; 2.2. 1; 2.3. -1; 2.4. -1; 2.5. -1; 2.6. 1; 2.7. -1; 2.8. 1; 2.9. 1.  
**3.** 3.1. 0; 3.2. 2; 3.3. 0; 3.4. 0; 3.5. 0; 3.6. 2; 3.7. 0; 3.8. 0; 3.9. 0; 3.10. 0. **5.**  
 5.1. 4; 5.2. 2; 5.3. 2; 5.4. 6; 5.5. 2; 5.6. 4; 5.7. 8; 5.8. 4; 5.9. 10; 5.10. 6; 5.11.  
 18; 5.12. 18. **6.** 6.1. 12, 3 va 2; 6.2. 8, 8 va 4; 6.3. 10, 10, 2 va 5; 6.4. 6, 2 va 12;  
 6.5. 5, 10, 2 va 10. **7.** 7.1. 2, 6, 7, 8; 7.2. 2, 6, 7, 11; 7.3.  $\emptyset$ ; 7.4. 2, 3, 10, 13, 14,  
 15; 7.5. 3, 5, 10, 12, 17, 19, 24, 26, 38, 40, 45, 47; 7.6. 2, 5, 11, 14, 20, 23, 29, 32,  
 38, 41, 47, 50, 56, 59, 65, 68, 74, 77. **8.** 8.1. 2, 3; 8.2. 2, 5; 8.3. 6, 2; 8.4. 8, 3;  
 8.5. 12, 2. **9.** 9.1. 3; 9.2. 3; 9.3. 5; 9.4. 6; 9.5. 2; 9.6. 27; 9.7. 5; 9.8. 7; 9.9. 7;  
 9.10. 3; 9.11. 3; 9.12. 2. **12.** 12.1.  $x \equiv 13 \pmod{17}$ ; 12.2.  $x \equiv 8 \pmod{27}$ ; 12.3.  
 $x \equiv 31 \pmod{37}$ ; 12.4.  $x \equiv 30 \pmod{73}$ ; 12.5.  $x \equiv 32 \pmod{79}$ ; 12.6.  
 $x \equiv 74 \pmod{79}$ ; 12.7.  $x \equiv 44 \pmod{83}$ ; 12.8.  $x \equiv 51 \pmod{97}$ ; 12.9.  
 $x \equiv 30 \pmod{221}$ . **13.** 13.1.  $x \equiv 7, 10 \pmod{17}$ ; 13.2.  $x \equiv 8, 19 \pmod{27}$ ; 13.3.  
 $x \equiv 10, 43 \pmod{53}$ ; 13.4.  $x \equiv 27, 34 \pmod{61}$ ; 13.5.  $x \equiv 27, 40 \pmod{67}$ ;  
 13.6.  $x \equiv 21, 46 \pmod{67}$ ; 13.7.  $x \equiv 14, 57 \pmod{71}$ ; 13.8.  $x \equiv 17, 66 \pmod{83}$ ;  
 13.9.  $x \equiv 2, 7 \pmod{11}$ ; 13.10.  $x \equiv 5, 20 \pmod{43}$ ; 13.11.  $x \equiv 3, 31 \pmod{47}$ ;

13.12.  $x \equiv 1634, 1847 \pmod{59^2}$ ; 13.13.  $x \equiv 253, 4076 \pmod{73^2}$ . **14.** 14.1. 3;  
 14.2. 4;  
 14.3. 0; 14.4. 1; 14.5. 0; 14.6. 10; 14.7. 0; 14.8. 7; 14.9. 3; 14.10. 1; 14.11. 0.  
**15.** 15.1.  $x \equiv 4, 33 \pmod{37}$ ; 15.2.  $x \equiv 17 \pmod{41}$ ; 15.3.  $\emptyset$ ; 15.4.  
 $x \equiv 2, 18, 23, 39 \pmod{41}$ ; 15.5.  $x \equiv 7 \pmod{43}$ ; 15.6.  $\emptyset$ ; 15.7.  
 $x \equiv 17 \pmod{67}$ ;  
 15.8.  $x \equiv 8, 28, 31, 36, 39, 59 \pmod{67}$ ; 15.9.  $x \equiv 30, 53 \pmod{83}$ ; 15.10.  $\emptyset$ .  
**16.** 16.1.  $x \equiv 3, 5, 6 \pmod{7}$ ; 16.2.  $x \equiv 2, 3, 10, 11 \pmod{13}$ ; 16.3.  
 $x \equiv 10, 13 \pmod{23}$ ; 16.4.  $\emptyset$ ; 16.5.  $x \equiv 11, 27, 36 \pmod{37}$ ; 16.6.  
 $x \equiv 25, 30, 31, 36 \pmod{61}$ ; 16.7.  $x \equiv 17 \pmod{73}$ ; 16.8.  
 $x \equiv 12, 23, 35, 38, 50, 61 \pmod{73}$ ; 16.9.  $x \equiv 17, 63, 66 \pmod{73}$ ;  
 16.10.  $x \equiv 3, 24, 46 \pmod{73}$ ; 16.11.  $x \equiv 6, 14, 20, 59, 65, 73 \pmod{79}$ .

### XIII MODUL. KO'PHADLAR

30-§. Bir o'zgaruvchili ko'phadlar.

**1.**  $f_1(x) = f_3(x)$ ;  $f_2(x) = f_4(x)$ . **2.** 2.1.  $a = -5, b = -1, c = 6$ . 2.2.  
 $a = 2, b = 5, c = 7$ . **3.** 3.1.a)  $a = 6, g_1(x) = x^2 + 3x + 1, g_2(x) = -x^2 - 3x - 1$ ; 3.2.  
 $a = 3, g_1(x) = \bar{2}x + \bar{2}, \bar{g}_2(x) = \bar{3}x + \bar{3}$ ;  $a = 2, g_1(x) = \bar{2}x + \bar{3}, \bar{g}_2(x) = \bar{3}x + \bar{2}$ ; 3.3.  
 $a = 4, g_1(x) = 3x^2 - 2x - 2, g_2(x) = -3x^2 + 2x - 2$ . **4.**  
 $a = -8, b = 18, g_1(x) = x^2 - 4x + 1, g_2(x) = -x^2 + 4x - 1$ ;  
 $a = 8, b = 14, g_1(x) = x^2 + 4x - 1, g_2(x) = -x^2 - 4x + 1$ . **5.**  $a = 3, b = -7, c = 4$ . **7.** 7.1.  
 $Z[x]$  da  $f(x) : g(x), Q[x]$  da  $f(x) : g(x)$ , . 7.2. bo'linadi. 7.3. bo'linmaydi. **8.** 8.1.  
 $b = -1 - a, a = c$ ; 8.2.  $b = 1, c = 0$ ; 8.3. agar  $a = 0$  bo'lsa, u holda  $b = c + 1$  va  
 $c \in z$ ; agar  $a \in z \setminus \{0\}$  bo'lsa, u holda  $b = 2 - a^2$  va  $c = 1$ . **9.** 9.1.  $r = 1 - i$ ; 9.2.  
 $r = 7$ . 9.3.  $r(x) = x + 2$ ; 9.4.  $r(x) = (2 + i)x + (1 - i)$ ; 9.5.  $r(x) = -7x + 11$ . **10.**

10.1.  $f(x) = g(x)(x^3 - 3x + 5) + 2x - 3$ ; 10.2.

$f(x) = g(x)(3 + 2i)x + (2 - 7i)x + (-2 + i)$ ;

10.3.  $f(x) = g(x)(\bar{2}x^2 + \bar{3}x) + \bar{1}$ ;

10.4.  $f(x) = g(x)(5x^5 - 8x^4 - 2x^3 + 3x^2 + 6) + 4x + 5$ . **11.**

$r(x) = (3x^2 - 4x + 1)^2$ . **12.**  $r = 3$ . **13.** 13.1.  $h(x) = 5x^3 - 4x^2 + 7x + 6$ ;  $r(x) = 16$ ;

13.2.  $h(x) = 2ix^3 + (3 - i)x - 2$ ;  $r(x) = 2 + i$ ; 13.3.  $h(x) = 0,5x^3 + 3x - 1$ ;

$r(x) = 2,5x - 1,5$ ; 13.4.  $h(x) = \bar{5}x^3 + \bar{2}x^2 + \bar{1}$ ;  $r(x) = \bar{2}x^2 - \bar{2}x + 1$ . **14.** 14.1. 136;

14.2.  $-1 - 46i$ ; 14.3.  $\bar{2}$ ; 14.4.  $9 - 5\sqrt{2}$ .

**17.** 17.1.  $f(x) = (x - 1)^4 + 2(x - 1)^3 + 3(x - 1)^2 - (x - 1) - 2$ ;

17.2.  $f(x) = \bar{2}(x - \bar{1})^4 + (x - \bar{1})^2 + (x - \bar{1})$ ; 17.3.  $f(x) = (x + i)^5 - 5i(x + i)^4 -$

$-(3i + 10)(x + i)^3 + (-13 + 10i)(x + i) + (22i + 5)(x + i) + 11 - i$ . **18.** 18.1.

$(f, g) = x + 1$ . 18.2.  $(f, g) = 1$ . 18.3.  $(f, g) = 2x + 1$ . **19.** 19.1.

$(f, g) = x - 3$ ; 19.2.  $(f, g) = 1$ ; 19.3.  $(f, g) = x + \bar{3}$ ; 19.4.  $(f, g) = x^2(1 + i)x + i$ . **20.**

20.1.  $[f, g] = (2x^3 + 7x^2 + 4x - 3)(x - 1)$ ;

20.2.  $[f, g] = (x^3 + \bar{6}x^2 + \bar{4}x + 1)(x^3 + x^2 + \bar{3}x - \bar{4}) : (x + \bar{2})$ ; 20.3.

$[f, g] = (x^3 - x^2 + 3x - 3)(x^4 + 2x^3 + 2x - 1)$ ; 20.4.

$[f, g] = x^5 + 2ix^4 - 2x^3 - 2ix^2 + x$ .

**21.** 21.1.  $u(x) = 1$ ,  $v(x) = -x + 1$ ; 21.2.  $u(x) = -x - \bar{1}$ ,  $v(x) = x + \bar{2}$ ; 21.3.

$u(x) = -\frac{x-1}{3}$ ,  $v(x) = x^2 - x - \frac{3}{2}$ . **22.** 22.1.  $u(x) = \frac{1}{2}(x^2 + x + 1) + (x - 1)h(x)$ ,

$v(x) = \frac{1}{2}(x^2 + x + 1) - (x + 1)h(x)$ ,  $h(x) \in Q[x]$ ; 22.2.  $u(x) = \frac{x^2 + \bar{4}x}{3} + (x + \bar{2})h(x)$ ,

$v(x) = \frac{\bar{4} + \bar{1}}{3}(x^2 + \bar{4}x) - (x^2x + \bar{1})h(x)$ ,  $h(x) \in Z_5[x]$ . **23.**  $S(x) : (f, g, h)$  bo'lganligi

uchun tenglama echimga ega.

31-§. Ko'p o'zgaruvchili ko'phadlar.

1.1.1.  $f(x, y) = x^5 + x^4y - 2x^3y^2 - xy^4 + 2y^5 + x^2 - 1$ . 1.1.2.

$f(x, y, z) = x^3y^2z + y^3z^2x + zx^2y - xy^2z^3 - yz^2x^3 - zx^2y^3$ . 2. 2.1. yuqori hadi  $\bar{2}x^2z$ .

2.2. yuqori hadi  $xz$ . 4. 4.1.  $5x^4y^2z$ . 4.2.  $-3^x y^2z^2$ . 5. 5.1.

$f(x, y) = \sigma_1^2\sigma_2 + 2\sigma_1^2 - 2\sigma_2^2 - 4\sigma_2$ . 5.2.  $f(x, y) = 2\sigma_1^2\sigma_2 - 6\sigma_1\sigma_2^2 - 5\sigma_1\sigma_2$ .

5.3.  $f(x, y, z) = \sigma_1\sigma_2 - \sigma_3$ . 5.4.  $f(x, y, z) = \sigma_1^4 - 4\sigma_1^3\sigma_2 + 8\sigma_1\sigma_3$ . 5.5.

$f(x, y, z, t) = \sigma_1^2\sigma_4 + \sigma_3^2 - 4\sigma_2\sigma_4$ . 10. 10.1. 0. 10.2.  $\frac{1}{2}$ . 11. 11.1.

$o(x_1, x_2, x_3) = \sigma_1^2\sigma_2 - \frac{7}{3}\sigma_2^2$ . 11.2.  $o(x_1, x_2, x_3, x_4) = \sigma_2$ . 11.3.

$o(x_1, x_2, \dots, x_n) = \sigma_1^3 - 3\sigma_1\sigma_2 + 3\sigma_3$ . 14. 14.1. 162. 14.2. 10. 14.3. 41. 14.4. 59.

15. 15.1.  $a = 1$ . 15.2.  $a = 2$ . 15.3.  $a = 3 \wedge a = -1$ . 15.4.  $a = \pm i\sqrt{2}$  va  $a = \pm 2i\sqrt{3}$ .

16. 16.1.  $-108$ . 16.2.  $-27036$ . 16.3. 50000. 16.4.  $a(b^2 - 4ac)$ . 16.5.

$-27q^2 - 4p^3$ . 16.6.  $-2c^2 + 18abc - 4a^3c - 4b^3 + a^2b^2$ . 18. 18.1.  $a = \pm 2$ . 18.2.

$a \in \left\{ 3, 3 \left( -\frac{1}{2} \pm i \frac{\sqrt{3}}{2} \right) \right\}$ . 18.3.  $a = 3$ . 18.4.  $a = 2 + 4i$ . 19.

19.1.  $\left\{ (3, 2), (-3, -2), \left( 2\sqrt{2}, -\frac{3\sqrt{2}}{2} \right), \left( -2\sqrt{2}, \frac{3\sqrt{2}}{2} \right) \right\}$ . 19.2.

$\left\{ (1, 0), (2, 1), \left( \frac{-19 - \sqrt{177}}{2}, \frac{9 + \sqrt{177}}{2} \right) \right\}$ . 19.3.  $(0, 0), (2, -1), (2, 68), (2, 52)$ .

19.4.  $(1, 2)$ . 20. 20.1.  $(2, 3); (3, 2)$ . 20.2.  $(1, 2); (2, 1)$ .

20.3.  $(1, 2, -2), (1, -2, 2), (2, 1, -2), (2, -2, 1), (-2, 2, 1), (-2, 1, 2)$ . 20.4.

$(1, -2, 3), (1, -3, 2), (2, -1, 3), (2, -3, 1), (3, -1, 2), (3, -2, 1)$ . 20.5.  $(1, 64), (64, 1)$ . 20.6.

$(16, 81), (81, 16), (-16, -81), (-81, -16)$ . 21. 21.1.  $\{1, 4\}$ . 21.2.  $\{2, 11\}$ . 21.3.

$\{-8, -73\}$ . 22.4.  $x = 0$ .

### 32-§. Maydon ustida ko`phadlar

2. 2.1.  $f(x) = (x-1)(x+1)(x^2-2)(2x-1)$ . 2.2.  $f(x) = (x^2-1)(x^2-4)(3x+1)$ .



$$3. f(x) = (x^2 + 1)(x^2 - 2)(2x - 1) = (x^2 + 1)(x - \sqrt{2})(x + \sqrt{2})(2x - 1) = \\ = (x - i)(x + i)(x - \sqrt{2})(x + \sqrt{2})(2x - 1).$$

$$6. f(x) = (x + \bar{1})(x + \bar{2})(x + \bar{3})(x + \bar{4}), \quad Z_5; \quad Q \quad \text{da} \quad \text{keltirilmaydi,}$$

$$f(x) = (x^2 - \sqrt{2}x + 2)(x^2 + \sqrt{2}x + 2), \quad R; \quad C \quad \text{da} \quad \text{keltiriladi.} \quad 7. \quad 7.1.$$

$$f(x) = \left(x - \frac{3 - \sqrt{5}}{2}\right)^2 \left(x - \frac{3 + \sqrt{5}}{2}\right)^2. \quad 7.2. \quad f(x) = (x - 1)(x - 2)(x - 3).$$

$$7.3. f(x) = \left(x - \frac{-1 - \sqrt{2}}{2}\right) \cdot \left(x - \frac{-1 + \sqrt{2}}{2}\right) \cdot \left(x - \frac{-3 + \sqrt{3}}{2}\right) \cdot \left(x - \frac{-3 - \sqrt{3}}{2}\right).$$

$$7.4. f(x) = (x - 1 - i)(x - 1 + i)(x + 1 - i)(x + 1 + i).$$

$$7.5. f(x) = (x - 1)^2(x - 2)^2.$$

$$7.6. f(x) = (x - i\sqrt{3})(x + i\sqrt{3}) \left(x - \frac{3}{2} - \frac{\sqrt{3}}{2}i\right) \left(x + \frac{3}{2} - \frac{\sqrt{3}}{2}i\right) \left(x + \frac{3}{2} + \frac{\sqrt{3}}{2}i\right).$$

$$7.7. f(x) = \left(x - \frac{-7 - \sqrt{5}}{2}\right)^2 \left(x - \frac{-7 + \sqrt{5}}{2}\right)^2.$$

$$7.8. \quad \prod_{k=1}^{3n-1} \left(x - \cos \frac{2\pi k}{3n} - i \sin \frac{2\pi k}{3n}\right), \quad (k, 3) = 1. \quad 8. \quad 8.1.$$

$$(f, g) = x^2 - x - 2; [f, g] = (x - 1)^2(x^2 + 1)(x^2 - 5x + 6).$$

$$8.2. (f, g) = x - 1; [f, g] = (x^2 - 2x + 3)^2(x + 6)^2(x - 1)^2(x - 2)^2(x - 6)^2(x^2 + x + 1).$$

$$8.3. (f, g) = (x + 1)^2; [f, g] = (x + 1)^3(x - 1)(x - 2).$$

$$8.4. (f, g) = x + \bar{2}; [f, g] = x(x + \bar{1})(x + \bar{3})(x + \bar{4})(x^2 + x + \bar{1})^2.$$

$$8.5. (f, g) = x^{(m, n)} - 1. \quad 8.6. \quad \text{Agar } \frac{m}{(m, n)}, \frac{n}{(m, n)} \text{ lar toq son bo'lsa,}$$

$$(f, g) = x^{(m, n)} + 1, \text{ qolgan hollarda } (f, g) = 1.$$

$$9.9.1. f'(x) = 3(x^2 + x - 1)^2(2x + 1)(x^3 - 2) + 3x^2(x^2 + x - 1);$$

$$9.2. f'(x) = x(x + \bar{3}) + \bar{3}x^2. \quad 10. f(x) = \bar{2}x^6 + x^3 + x^2 + x + \bar{2}. \quad 11.$$

$$f(x) = 4x^3 + x^2 - x + 1. \quad 12. f_1(x) = \bar{1}, f_2(x) = x^2, f_3(x) = x^2 + \bar{1},$$

$f_4(x) = x^3 + x^2 + x$  lardan tashqari barcha ko'phadlar. **13.** 13.1.

$f(x) = i(x-2i)^4 + (-7-i)(x-2i)^3 + (4-19i)(x-2i)^2 + (27+4i)(x-2i) - 3 + 14i$  va

$f'(2i) = 27 + 4i; f''(2i) = 8 - 38i; f'''(2i) = -42 - 6i; f^{IV}(2i) = 24i.$

13.2.  $f(x) = (x-i)^5 + 5i(x+i)^4 - (3i+10)(x+i)^3 + (10i-13)(x+i)^2 +$

$+ (5+22i)(x+i) + 11 - i;$  va  $f'(-i) = 22i + 5; f''(-i) = 20; -26;$

$f'''(-i) = -60 - 18i; f^{IV}(-i) = -120i; f^V(-i) = 120.$  13.3.

$f(x) = (x+1)^4 - 4(x+1)^3 - 9(x+1)^2 + 36(x+1) + 1$

$f'(-1) = 36; f''(-1) = -18; f'''(-1) = -24; f^{IV}(-1) = 24.$

13.4.  $f(x) = \bar{2}(x-\bar{1})^4 + (x-\bar{1})^2 + (x-\bar{1}), f'(\bar{1}) = \bar{1}; f''(\bar{1}) = \bar{2}; f'''(\bar{1}) = \bar{0};$

$f^{IV}(\bar{1}) = \bar{0};$  13.5.  $f(x) = (x-2)^4 - 18(x-2) + 38; f'(2) = -18,$

$f''(2) = f'''(2) = 0, f^{IV}(2) = 24.$  13.6.

$f(x) = (x-2)^5 + 10(x-2)^4 + 36(x-2)^3 + 62(x-2)^2 + 48(x-2) + 18;$

$f'(2) = 48, f''(2) = 124, f'''(2) = 216, f^{IV}(2) = 240, f^V(2) = 120.$  **14.** 14.1.

2. 14.2. 1. 14.3. 0. 14.4. 3. 14.5. 3. **15.** 15.1.  $b = 0$  da  $\alpha = 0; b = -6\sqrt{3}$  da

$\alpha = -\sqrt{3}; b = 6\sqrt{3}$  da  $\alpha = \sqrt{3}.$  15.2.  $b \in \left\{-\frac{14}{27}, 18\right\}.$  15.3.  $b = 0.$  15.4.  $b = 4$  da

$\alpha = -2; b = \frac{102}{27}$  da  $\alpha = -\frac{4}{3}.$  **16.** 16.1.  $27a^4 = 256b^3.$  16.2.  $3125b^2 + 108a^5 = 0.$

**17.** 17.1.  $f(x) = (x^2 + x + 1)^2(x + 2).$  17.2.  $f(x) = (x + i)^3(x - 2i)^2.$  17.3.

$f(x) = (x + 2)^3(x^2 - x - i).$  **18.** 18.1.  $f(x) = (x - 1)^2(x - 2)(x - 3)(x - 1 - i).$  18.2.

$f(x) = (x - i)^2(x + 1 + i).$  **19.** 19.1.  $\frac{x-1}{x-2}.$  19.2.  $(x^2 - x + 1)(x^4 - x^2 + 1).$  **20.** 20.1.

$\frac{f(x)}{g(x)} = -\frac{2}{3(x+1)} + \frac{2x^2 - 2x + 5}{3(x^3 - 2)};$  20.2.  $\frac{f(x)}{g(x)} = -\frac{1}{2x} + \frac{x^2}{2(x^3 - 2)};$  20.3.

$$\frac{f(x)}{g(x)} = \frac{1}{2(x^2-2)} + \frac{1}{2(x^3+2)}; \quad 20.4. \quad \frac{f(x)}{g(x)} = \frac{1}{x} - \frac{x}{x^2+1}. \quad \mathbf{21.} \quad 21.1.$$

$$\frac{f(x)}{g(x)} = \frac{x+1}{x^2+1} - \frac{x+2}{x^2+x+1}; \quad 21.2. \quad \frac{f(x)}{g(x)} = \frac{6}{x^3} - \frac{4}{x^2} + \frac{1}{x+3} + \frac{3}{(x+3)^2};$$

$$21.3. \quad \frac{f(x)}{g(x)} = \frac{x}{8(x^2+2x+2)} - \frac{x-4}{8(x^2-2x+2)};$$

$$21.4. \quad \frac{f(x)}{g(x)} = \frac{\sqrt{2}}{8(x-\sqrt{2})} - \frac{\sqrt{2}}{8(x+\sqrt{2})} + \frac{1}{2(x^2+2)};$$

$$21.5. \quad \frac{f(x)}{g(x)} = -\frac{2}{3(x+1)} + \frac{\frac{3}{2} + \frac{5}{12}\sqrt[3]{2} - \frac{1}{3}\sqrt[3]{4}}{x-\sqrt[3]{2}} + \frac{\left(\frac{4}{3} - \frac{5}{12}\sqrt[3]{2} + \frac{1}{3}\sqrt[3]{4}\right)x - \frac{3}{2} + \frac{2}{3}\sqrt[3]{2} - \frac{5}{3}\sqrt[3]{4}}{x^2 + \sqrt[3]{2}x + \sqrt[3]{4}};$$

$$21.6. \quad \frac{f(x)}{g(x)} = \frac{1}{x^2+x+2} - \frac{x-2}{(x^2+x+2)^2};$$

$$21.7. \quad \frac{f(x)}{g(x)} = \frac{1}{8(x-2)} - \frac{1}{8(x+2)} + \frac{1}{2(x^2+4)};$$

$$21.8. \quad \frac{f(x)}{g(x)} = \frac{1}{8} \left( \frac{x+2}{x^2+2x+2} - \frac{x-2}{x^2-2x+2} \right); \quad \mathbf{22.} \quad 22.1.$$

$$\frac{f(x)}{g(x)} = \frac{1}{12(x-1)} - \frac{4}{3(x+2)} + \frac{9}{4(x+3)};$$

$$22.2. \quad \frac{f(x)}{g(x)} = -\frac{1}{16} \left( \frac{1+i}{x-1-i} + \frac{1-i}{x-1+i} + \frac{-1+i}{x+1-i} + \frac{-1+i}{x+1+i} \right);$$

$$22.3. \quad \frac{f(x)}{g(x)} = \frac{3}{(x-1)^3} - \frac{4}{(x-1)^2} - \frac{1}{x-1} - \frac{1}{(x+1)^2} - \frac{2}{x+1} + \frac{1}{x-2};$$

$$22.4. \quad \frac{f(x)}{g(x)} = \frac{1}{3(x-i)} - \frac{1}{3(x+2i)};$$

$$22.5. \quad \frac{f(x)}{g(x)} = \frac{1}{x-1} - \frac{1+i}{2(x-i)} + \frac{i-1}{2(x+i)};$$

$$22.6. \quad \frac{f(x)}{g(x)} = \frac{\sqrt{2}}{8(x-\sqrt{2})} - \frac{\sqrt{2}}{8(x+\sqrt{2})} + \frac{\sqrt{2}}{8(x-\sqrt{2}i)} - \frac{\sqrt{2}}{8(x+\sqrt{2}i)}.$$

$$\mathbf{23.} \quad \frac{f(x)}{g(x)} = \sum_{\alpha=0}^{p-1} \frac{\bar{1}}{(p-1)(x+\bar{\alpha})}$$

## ADABIYOTLAR

1. To'raev H. Matematik mantiq va diskret matematika. T., «O'qituvchi», 2003.
2. Igoshin V.I. Zadachnik-praktikum po matematicheskoy logike. M., «Prosveshenie», 1986.
3. Lixtarnikov L.M., Sukacheva T.G. Matematicheskaya logika. Sankt-Peterburg, «Lan», 1999.
4. Yunusov. Matematik mantiq va algoritmlar nazariyasi elementlari. T., Yangi asr avlodi, 2006.
5. Sbornik zadach po algebre. Pod.red. A.Kostrikina.M., «Nauka», 1987.
6. L.Ya.Kulikov. Algebra i teoriya chisel. M., Visshaya shkola, 1979.
7. Proskuryakov I.V. Sbornik zadach po lineynoy algebre. M., «Nauka», 1974.
8. Xolod N.I. Posobie k resheniyu zadach po lineynoy algebre i lineynomu programmirovaniyu. Minsk, Izd.BGU.,1971.
9. A.A.Kocheva. Zadachnik-praktikum po algebre i teorii chisel. Chast 3. M., Prosveshenie. 1984.
10. Yunusov A.S., Yunusova D.I. Algebra va sonlar nazariyasidan modul texnologiyasi asosida tayyorlangan nazorat topshiriqlari to'plami. TDPU. 2004.
11. N.Ya.Vilenkin. Algebra i teoriya chisel. M. 1984.
12. Shneperman L.B. Sbornik zadach po algebre i teorii chisel. Minsk. Visheyshtaya shkola. 1982 g.
13. Zavalo S.T. i dr. Algebra i teoriya chisel.Ch. I,II.K.: Visha shkola.1983,1986gg.
14. Gribanov V.U., Titov P.I. Sbornik zadach po teorii chisel, M., 1969 g.

## MUNDARIJA

### I MODUL. MATEMATIK MANTIQ ELEMENTLARI

- 1-§. Mulohaza. Mulohazalar ustida mantiq amallari
- 2-§. Formula. Teng kuchli formulalar. Mantiq qonunlari.
- 3-§. Predikatlar. Kvantorlar.
- 4-§. Matematik mantiqning tadbiqlari

### II MODUL. TO'PLAMLAR VA MUNOSABATLAR

- 5-§. To'plam. To'plamlar ustida amallar. EYler-Venn diagrammalari
- 6-§. Dekart ko'paytma. Binar munosabatlar. Ekvivalentlik munosabati.
- 7-§. Akslantirish (funktsiya). Tartib munosabati. Graflar

### III MODUL. ALGEBRA VA ALGEBRAIK SISTEMALAR

- 8-§. Algebra. Faktor-algebra
- 9-§. Gruppya. Halqa. Maydon

### IV MODUL. ASOSIY SONLI SISTEMALAR

- 12-§. Kompleks sonlar maydoni

### V MODUL . ARIFMETIK VEKTOR FAZO. CHIZIQLI TENGLAMALAR

#### SISTEMASI

- 13-§. Arifmetik vektor fazo.
- 14-§. Matritsa va uning rangi
- 15-§. Chiziqli tenglamalar sistemasi .

### VI MODUL. MATRITSALAR

- 16-§. Matritsalar va ular ustida amallar

### VII MODUL. DETERMINANTLAR

- 17-§. O'rniga qo'yishlar.

18-§. Determinantlar

#### VIII MODUL. VEKTOR FAZOLAR

19-§. Vektor fazo. Fazoostilar kesishmasi, yig'indisi.

20-§. Skalyar ko'paytmali vektor fazolar. Evklid vektor fazolar. Vektor fazolar izomorfizmi.

#### IX MODUL. CHIZIQLI AKSLANTIRISHLAR

21-§. Chiziqli akslantirish. Chiziqli operator yadrosi va obrazi. Chiziqli operator matritsasi.

22-§. Chiziqli operatorlar ustida amallar. Chiziqli algebralar.

Teskari operator. Xos vektorlar va xos qiymatlar.

#### X MODUL. CHIZIQLI TENGSIZLIKLAR SISTEMASI

23-§. Chiziqli tengsizliklar sistemasi. Qavariq konus.

#### XI MODUL. BUTUN SONLAR HALQASIDA BO'LINISH MUNOSABATI

24-§. Tub va murakkab sonlar. EKUB. EKUK.

25-§. Chekli zanjir kasrlar. Munosib kasrlar.

26-§. Sistematik sonlar va ular ustida amallar

#### XII MODUL. TAQQOSLAMALAR

27-§. Butun sonlar halqasida taqqoslamalar. Eyler va Ferma teoremlari

28-§. Birinchi darajali va tub modul bo'yicha yuqori darajali taqqoslamalar

29-§. Tub modul bo'yicha boshlang'ich ildizlar va indekslar

#### XIII MODUL. KO'PHADLAR

30-§. Bir o'zgaruvchili ko'phadlar.

31-§. Ko'p o'zgaruvchili ko'phadlar.

32-§. Maydon ustida ko'phadlar

#### СОДЕРЖАНИЕ

#### I MODUL. ЭЛЕМЕНТЫ МАТЕМАТИЧЕСКОЙ ЛОГИ

1-§. Высказывание. Операции над высказываниями

2-§. Формула. Равносильные формулы. Законы логики.

3-§. Предикаты. Кванторы.

4-§. Применения математической логики

## II MODUL. МНОЖЕСТВА И ОТНОШЕНИЯ

5-§. Множество. Операции над множествами. Диаграммы Эйлера-Венна.

6-§. Прямое произведение множеств. Бинарные отношения. Отношение эквивалентности.

7-§. Функция. Отношение порядка. Графы.

## III MODUL. АЛГЕБРЫ И АЛГЕБРАИЧЕСКИЕ СИСТЕМЫ

8-§. Алгебра. Фактор-алгебра.

9-§. Группа. Кольцо. Поле.

## IV MODUL. ОСНОВНЫЕ ЧИСЛОВЫЕ СИСТЕМЫ

10-§. Система натуральных чисел. Принцип математической индукции.

11-§. Кольцо целых чисел. Поле рациональных чисел. Система действительных чисел.

12-§. Поле комплексных чисел.

## V MODUL . АРИФМЕТИЧЕСКОЕ ВЕКТОРНОЕ ПРОСТРАНСТВО.

### СИСТЕМА ЛИНЕЙНЫХ УРАВНЕНИЙ

13-§. Арифметическое векторное пространство.

14-§. Матрица и ее ранг.

15-§. Система линейных уравнений .

## VI MODUL. МАТРИЦЫ

16-§. Матрицы и операции над ними.

## VII MODUL. ОПРЕДЕЛИТЕЛИ

17-§. Подстановки.

18-§. Определители.

## VIII MODUL. ВЕКТОРНЫЕ ПРОСТРАНСТВА

19-§. Векторное пространство. Пересечение, сумма подпространств.

20-§. Векторные пространства со скалярным умножением. Евклидово векторные пространства. Изоморфизмы векторных пространств.

## IX MODUL. ЛИНЕЙНЫЕ ОПЕРАТОРЫ

21-§. Линейные отображения. Ядро и образ линейного оператора. Матрица линейного оператора.

22-§. Операции над линейными операторами. Линейные алгебры. Обратимые операторы. Собственные векторы, собственные значения.

#### X MODUL. СИСТЕМЫ ЛИНЕЙНЫХ НЕРАВЕНСТВ

23-§. Системы линейных неравенств. Выпуклый конус.

#### XI MODUL. ОТНОШЕНИЕ ДЕЛИМОСТИ В КОЛЬЦЕ ЦЕЛЫХ ЧИСЕЛ

24-§. Простые и составные числа. ЭКУБ, ЭКУК.

25-§. Конечные цепные дроби. Подходящие дроби.

26-§. Систематические числа и операции над ними.

#### XII MODUL. СРАВНЕНИЯ

27-§. Сравнение в кольце целых чисел. Теоремы Эйлера и Ферма.

28-§. Сравнения первой степени и сравнения высших степеней по простому модулю.

29-§. Первообразные корни и индексы по простому модулю.

#### XIII MODUL. ПОЛИНОМЫ

30-§. Полиномы от одной переменной.

31-§. Полиномы от нескольких переменных.

32-§. Полиномы над полем.

### THE CONTENTS

#### I THE MODULE. ELEMENTS OF MATHEMATICAL LOGIC

1-§. The statement. Operations above statements

2-§. The formula. Equivalent formulas. Laws of logic.

3-§. Predicates. Quantifiers.

4-§. Applications of mathematical logic

#### II MODULE. SETS AND RELATIONS

5-§. Set. Operations above sets of the Diagram of Euler - Вена.



6-§. Direct product of sets. Binary relations. The attitude {relation} of equivalence.

7-§. Function. The relation of the order. Columns.

### III MODULE. ALGEBRAS AND ALGEBRAIC SYSTEMS

8-§. Algebra. Factor - algebra.

9-§. Group. A ring. A field.

### IV MODULE. THE BASIC NUMERICAL SYSTEMS

10-§. System of natural numbers. A principle of a mathematical induction.

11-§. A ring of integers. A field of rational numbers. System of real numbers.

12-§. A field of complex numbers.

### V THE MODULE. ARITHMETIC VECTOR SPACE. SYSTEM OF THE LINEAR EQUATIONS

13-§. Arithmetic vector space.

14-§. A matrix and her rank.

15-§. System of the linear equations.

### VI MODULE. MATRIXES

16-§. Matrixes and operations above them.

### VII MODULE. DETERMINANTS

17-§. Substitutions.

18-§. Determinants.

### VIII MODULE. VECTOR SPACES

19-§. Vector space. Crossing, the sum subspaces.

20-§. Vector spaces with scalar multiplication. Izomorphisms.

### IX MODULE. LINEAR OPERATORS

21-§. Linear displays. A nucleus and an image of the linear operator. A matrix of the linear operator.

22-§. Operations above linear operators. Linear algebras. Convertible operators. Own vectors, own values.

### X THE MODULE. SYSTEMS OF LINEAR INEQUALITIES

23-§. Системы linear inequalities. A convex cone.

XI MODULE. THE RELATION OF DIVISIBILITY IN THE RING OF  
INTEGERS

24-§. Simple and compound numbers.

25-§. Final chain fractions. Suitable fractions.

26-§. Regular numbers and operations above them.

XII MODULE. COMPARISONS

27-§. Comparison in a ring of integers. Euler's theorems and the Fermat.

28-§. Comparisons of the first degree and comparison on the simple module.

29-§. Initial roots and indexes on the simple module.

XIII MODULE. POLYNOMS

30-§. Polynoms from one variable.

31-§. Polynoms from several variables.

32-§. Polynoms above a field.